

SSC CGL (Tier - 1) Online Exam Paper - 2016 "held on 31 August 2016" Morning Shift (Reasoning)

Question 1. Select the related word/letters/numbers from the given alternatives:

CURE : DISEASE :: HEAL : ?

Options:

- 1) Illness
- 2) Injury
- 3) Recover
- 4) Sick

Correct Answer: Injury

Question 2. Select the related word/letters/numbers from the given alternatives:

DBCE : QOPR :: JLKI : ?

Options:

- 1) YWXU
- 2) WYXV
- 3) WXYV
- 4) WYVX

Correct Answer: WYXV

Question 3. Select the related word/letters/numbers from the given alternatives:

6 : 42 :: 12 : ?

Options:

- 1) 48
- 2) 72
- 3) 60
- 4) 84

Correct Answer: 84

Question 4.

For the following questions

Find the odd word/letters/number pair from the given alternatives.

Options:

- 1) High-Up
- 2) Past-Present
- 3) Often-Seldom
- 4) Fresh-Stale

Correct Answer: High-Up

Question 5. For the following questions

Find the odd word/letters/number from the given alternatives.

Options:

- 1) AOU
- 2) EOI
- 3) UIE
- 4) ALO

Correct Answer: ALO

Question 6.

For the following questions

Find the odd word/letters/number from the given alternatives.

Options:

- 1) 13
- 2) 17
- 3) 29
- 4) 87

Correct Answer: 87

Question 7. Arrange the following words as per order in the dictionary and choose the one that comes first:

1. Temple 2 Tenant 3. Terminate 4. Temperature

Options:

- 1) Temple
- 2) Tenant
- 3) Terminate
- 4) Temperature

Correct Answer: Temperature

Question 8. A series is given, with one term missing. Choose the correct alternative from the given ones that will complete the series.

NOM, QRP, TUS, ?

Options:

- 1) WAX
- 2) HUT
- 3) WXV
- 4) HTU

Correct Answer: WXV

Question 9. A series is given, with one term missing. Choose the correct alternative from the given ones that will complete the series.

1,3,7,13,21,?

Options:

- 1) 27
- 2) 29

3) 31

4) 33

Correct Answer: 31

Question 10.If it is Saturday on 27th September, what day will it be on 27th October of the same year?

Options:

1) Thursday

2) Sunday

3) Friday

4) Monday

Correct Answer: Monday

Question 11.The ratio of the ages of man and his wife is 4:3. After 4 years, the ration will be 9:7. If at the time of marriage, the ratio was 5:3, how many years ago were they married?

Options:

1) 12

2) 24

3) 5

4) 8

Correct Answer: 12

Question 12.From the given words, select the word which cannot be formed using the letters of the given word.

ALTERNATIVES

Options:

1) ALTER

2) NATIVE

3) TEN

4) NATIONAL

Correct Answer: NATIONAL

Question 13.If code P is denoted by 7, X by 9, M by 5, Z by 8, L by 2, T by 1, then ZLTPXM will be

Options:

Study Kit for SSC Stenographers (Grade 'C' & 'D') Examination (Paper - 1)



- Medium: English
- 100% Syllabus Covered
- 3000 + MCQs
- 700+ Pages

**SPECIAL
OFFER**

Only
MRP ₹ 3000/-
Offer ₹ 1499/-

[Click Here for More Details](#)

What you will get:

- 100% Syllabus Covered
- 6 Booklets
- 700+ Pages
- 3000+ MCQs
- Five Practice Papers
- One Year Current Affairs
- Guidance & Support from Our Experts

Price of the Kit:
~~Rs. 3,000~~

Rs. 1,499/-
(Limited time Offer)



Net Banking

[FOR MORE DETAILS CLICK HERE](#)

[Order Online \(100% Safe\)](#)

[Click here for Other Payment Options \(Cash/NEFT/etc\)](#)

**50%
OFF**

- 1) 812851
- 2) 821591
- 3) 812715
- 4) 821795

Correct Answer: 821795

Question 14. If $24 \times 2 = 84$, and $32 \times 3 = 69$, then $13 \times 3 = ?$

Options:

- 1) 38
- 2) 93
- 3) 16
- 4) 10

Correct Answer: 93

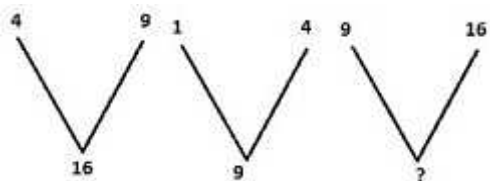
Question 15. If + means division, - means multiplication, '÷' means subtraction, x means addition, and < means less than, then which of the following is false

Options:

- 1) $(10+2) \div 7 < (10 \div 7) + 2$
- 2) $(10-7) \times 2 < (10 \times 2) - 7$
- 3) $(10 \times 7) - 2 < (10-2) \times 7$
- 4) $(10 \div 2) + 7 < (10+7) \times 2$

Correct Answer: $(10 \times 7) - 2 < (10-2) \times 7$

Question 16. Select the missing number from the given responses.



Options:

- 1) 1
- 2) 4
- 3) 9
- 4) 25

Correct Answer: 25

Question 17. Ram went 20 meters to the north then turned towards east and walked another 5 meters, then he turned towards right and covered 20 meters. How far is he from the starting point?

Options:

- 1) 3 m
- 2) 4m
- 3) 5 m
- 4) 6 m

Correct Answer: 5 m

Question 18. One or two statements are given followed by two or more conclusions/assumptions, I, II, III, IV. You have to consider the statement to be true, even if it seems to be at variance from commonly known facts. You are to decide which of the given conclusions/assumptions can definitely be drawn from the given statement.

Statement:

1. All goats are tigers.
2. All tigers are lions.

Conclusion:

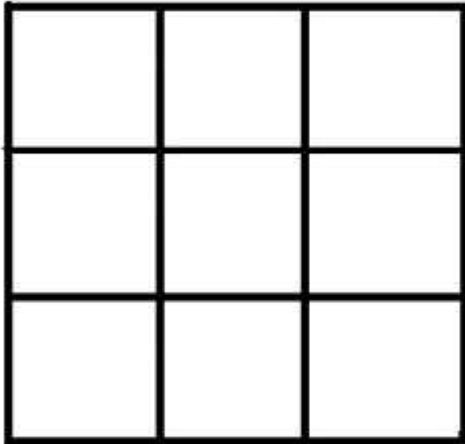
- I. All tigers are goats.
- II. All lions are tigers.
- III. No goat is a lion.
- IV. No lion is a goat.

Options:

- 1) Only Conclusion III & IV follow
- 2) Only Conclusion I & II follow
- 3) None of the Conclusions follows
- 4) All Conclusions follow

Correct Answer: None of the Conclusions follows

Question 19. In the question figure how many squares are there in all? Select from the given alternatives.

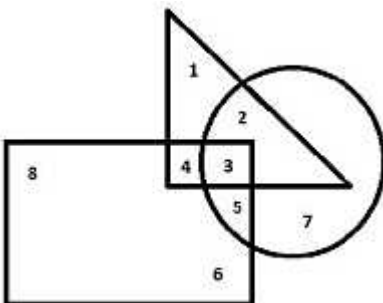


Options:

- 1) 12
- 2) 14
- 3) 10
- 4) 11

Correct Answer: 14

Question 20.In the following figure, triangle represents teachers, square represents merchants and circle represents social workers. Which number space represents Teachers who are social workers?

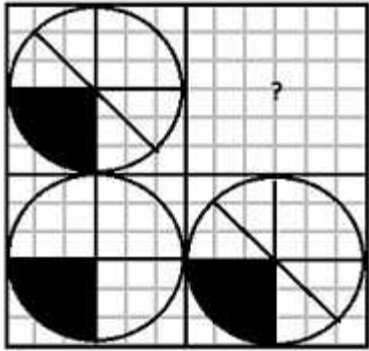


Options:

- 1) 3
- 2) 2
- 3) 4
- 4) 5

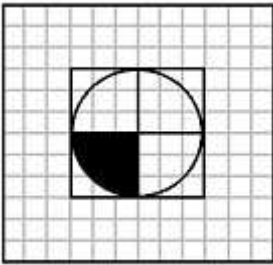
Correct Answer: 2

Question 21. Which answer figure will complete the pattern in the question figure?

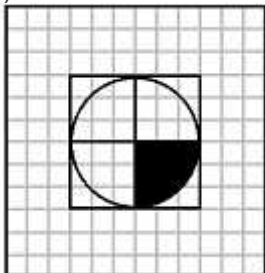


Options:

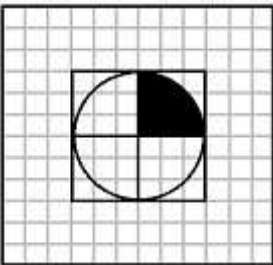
1)



2)



3)



SSC Constable (GD) Exam Study Kit



- ▶ 100% Written Exam Syllabus
- ▶ 700+ Pages, Printed Books
- ▶ 1500 MCQ, 8 Books
- ▶ Practice Question Papers
- ▶ 1 Year Current Affairs

50% OFF
~~₹ 3,200/-~~
₹ 1,599/-



for Exam Help Call Us at: +91 8800734161

IAS EXAM PORTAL

What you will get:

- 100% Syllabus Covered
- 8 Booklets
- 700+ Pages
- Five Practice Papers
- One Year Current Affairs
- Current Affairs for Exam
- Guidance & Support from Our Experts

Price of the Kit:

~~Rs. 3,200~~

Rs. 1,599/-
(Limited time Offer)



Net Banking

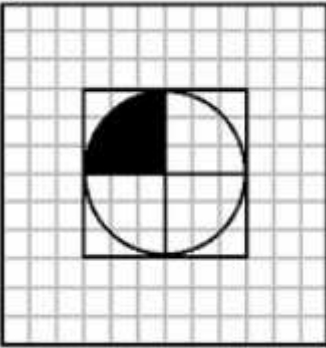
Order Online (100% Safe)

[Click here for Other Payment Options \(Cash/NEFT/etc\)](#)

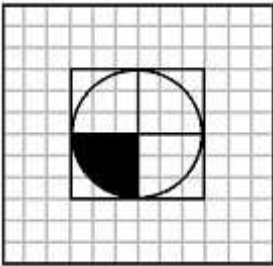
FOR MORE DETAILS CLICK HERE



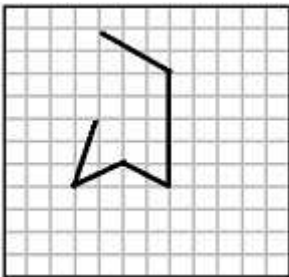
4)



Correct Answer:

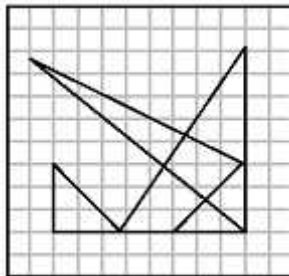


Question 22. From the given answer figures, select the one in which the question figure is hidden/embedded.

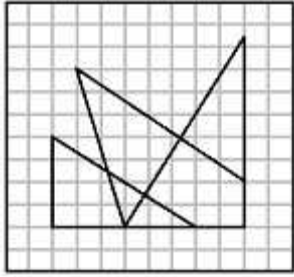


Options:

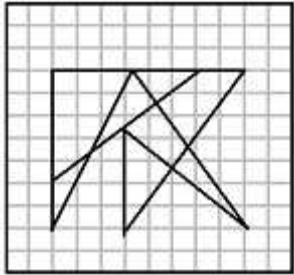
1)



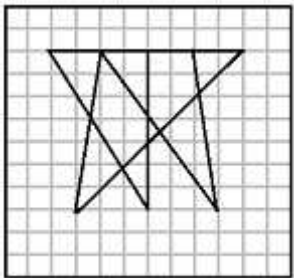
2)



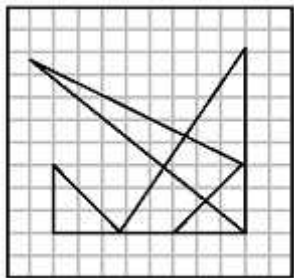
3)




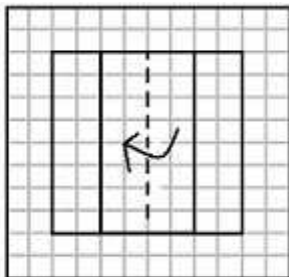
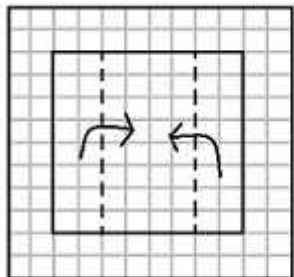
4)



Correct Answer:

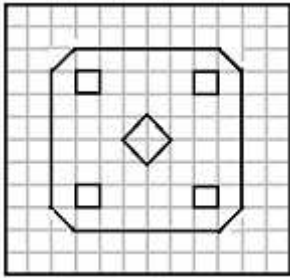


Question 23. A piece of paper is folded and cut as shown below in the question figures. From the given answer figures, indicate how it will appear when opened.

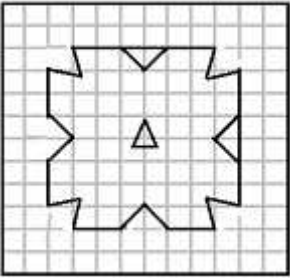


Options:

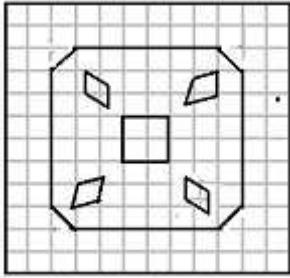
1)



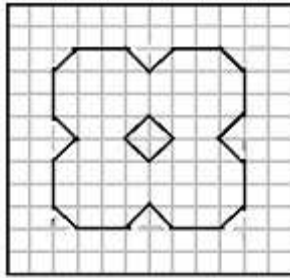
2)



3)



4)



SSC CHSL(10+2) परीक्षा अध्ययन सामग्री



- 100% CHSL Exam Syllabus Covered
- 5 Books, 900+ Pages
- 2500+ MCQs
- 1 Year Current Affairs (PDF Copy)
- Support & Guidance

50% OFF
₹ 4,000/-
₹ **1,999/-**

FREE SHIPPING

for Exam Help Call Us at: +91 8800734161

SSCPORTAL.IN

आप क्या प्राप्त करेंगे?

- माध्यम: हिन्दी
- 100 प्रतिशत पाठ्यक्रम
- 900 से अधिक पृष्ठ
- 2500 से अधिक वस्तुनिष्ठ प्रश्न
- कुल 5 पुस्तिकाएँ
- अध्यायवार M.C.Q
- गणित एवं तार्किक क्षमता को हल करने की सरल विधि
- 5 अभ्यास प्रश्न पत्र (PDF Copy)
- हमारे विशेषज्ञों द्वारा मार्गदर्शन और सहायता

Price of the Kit:

Rs. 4,200

Rs. 1,999/-

(Limited time Offer)

 Buy Online

VISA Maestro MasterCard RuPay

Net Banking

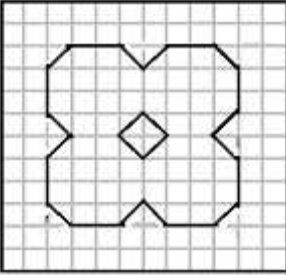
Order Online (100% Safe)

[Click here for Other Payment Options \(Cash/NEFT/etc\)](#)

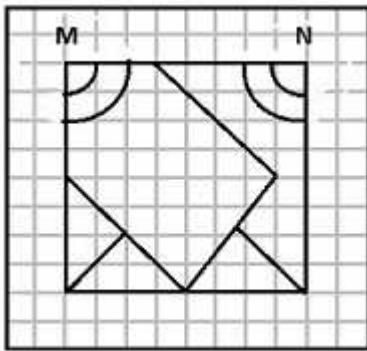
FOR MORE DETAILS CLICK HERE

50% OFF

Correct Answer:

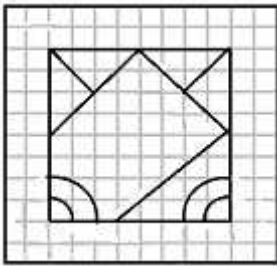


Question 24. If a mirror is placed on the line MN, then which of the answer figures is the right image of the given figure?

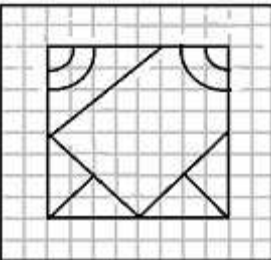


Options:

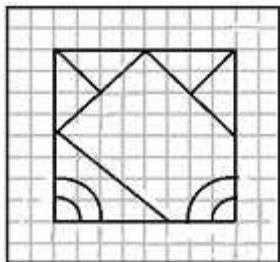
1)



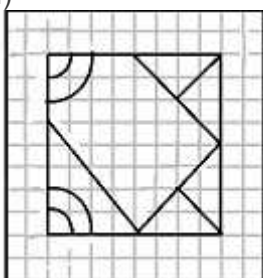
2)



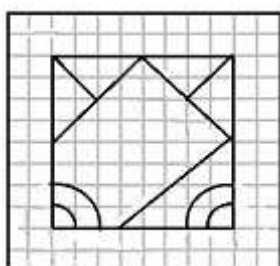
3)



4)



Correct Answer:



Question 25. In this question, the sets of numbers given in the alternatives are represented. The columns and rows of Matrix I are numbered from 0 to 4 and that of Matrix II are numbered from 5 to 9. A letter from these matrices can be represented first by its row and next by its column, e.g., D can be represented by 02, 10, etc., and 'R' can be represented by 55, 67, etc. Similarly you have to identify the set for the word 'BEAR'

MATRIX - I						MATRIX - II					
	0	1	2	3	4		5	6	7	8	9
1	B	C	D	E	A	5	R	O	N	T	U
2	D	E	A	B	C	6	T	U	R	O	N
3	C	D	E	A	B	7	O	N	T	U	R
4	A	B	C	D	E	8	U	R	O	N	T
5	E	A	B	C	D	9	N	T	U	R	O

Options:

1) 13,11,12,78

2) 31,22,23,97

3) 42,34,42,79

4) 24,40,23,67

Correct Answer: 24,40,23,67



SSC EXAMS PRINTED STUDY NOTES

Study Material for SSC CGL (Tier-1) Examination	English	CLICK HERE
Study Kit for SSC CGL (Tier-2) Exam	English	CLICK HERE
Study Kit for SSC CHSL (10+2) Examination	English	CLICK HERE
Study Kit for SSC Stenographers (Grade 'C' & 'D')	English	CLICK HERE
Study Kit for Multitasking (Non-Technical) - MTS	English	CLICK HERE
Study Kit for SSC Constables (GD) Exam	English	CLICK HERE
Study Kit For SSC Sub-Inspectors in Delhi Police, CAPFs, CISF	English	CLICK HERE
Study Kit for SSC Junior Engineer Exam (Paper-1)	English	CLICK HERE
IAS EXAMS STUDY MATERIALS		
Study Kit for IAS (Pre) GENERAL STUDIES Paper-1 (GS)	English	CLICK HERE
Study Kit for IAS (Pre) CSAT Paper-2(Aptitude)	English	CLICK HERE
सामान्य अध्ययन (GS) प्रारंभिक परीक्षा (Pre) पेपर-1	हिन्दी	CLICK HERE
आई. ए. एस. (सी-सैट) प्रारंभिक परीक्षा पेपर -2	हिन्दी	CLICK HERE
Gist of NCERT Study Kit For UPSC Exams	English	CLICK HERE
यूपीएससी परीक्षा के लिए एनसीईआरटी अध्ययन सामग्री	हिन्दी	CLICK HERE