

Combined Graduate Level Examination 2020 Tier-I

Roll Number	
Candidate Name	
Venue Name	iON Digital Zone iDZ Chandpura
Exam Date	20/08/2021
Exam Time	3:00 PM - 4:00 PM
Subject	Combined Graduate Level Examination 2020 Tier 1

Section : **General Intelligence and Reasoning**

Q.1 Select the correct option that indicates the arrangement of the given words in the order in which they appear in an English dictionary.

1. Illegitimate
2. Illegality
3. Illuminate
4. Illiterate
5. Illegible

Ans 1. 1, 2, 3, 4, 5
 2. 2, 5, 1, 4, 3
 3. 3, 5, 1, 2, 4
 4. 3, 5, 2, 4, 1

Question ID : **81616112506**
Status : **Answered**
Chosen Option : **2**

Q.2 Pointing towards Sumit, Anuj said, "He is my mother's father's son's brother's son". If Vinita who is married to Kartik, is the mother of Anuj, then how is Vinita related to Sumit?

Ans 1. Mother
 2. Mother's sister
 3. Father's sister
 4. Sister

Question ID : **81616113928**
Status : **Answered**
Chosen Option : **3**

Q.3 Study the given pattern carefully and select the number that can replace the question mark (?) in it.

3 6 8
5 32 60
18 ? 238

Ans 1. 124
 2. 126
 3. 128
 4. 122

Question ID : **81616113226**
Status : **Not Attempted and Marked For Review**
Chosen Option : **--**



Download SSC CGL, CHSL E-BOOKS

[CLICK HERE](#)

Get SSC CGL TIER-1 Study Note at : <https://sscportal.in/notes>

Q.4 Select the combination of letters that when sequentially placed in the blanks of the given series will complete the series.

b _ e _ d k _ _ c e m _ k k b c _ m _ k k

- Ans**
- 1. c, m, k, b, c, c, d
 - 2. c, k, m, b, d, e, d
 - 3. c, k, k, b, d, e, d
 - 4. c, m, k, b, d, e, d

Question ID : **81616113927**
 Status : **Answered**
 Chosen Option : **4**

Q.5 Select the correct mirror image of the given combination when the mirror is placed at MN as shown.

- Ans**
- 1.
 - 2.
 - 3.
 - 4.

Question ID : **81616113941**
 Status : **Answered**
 Chosen Option : **4**

Q.6 Read the given statements and conclusions carefully. Assuming that the information given in the statements is true, even if it appears to be at variance with commonly known facts, decide which of the given conclusions logically follow(s) from the statements.

Statements:

No introvert is an extrovert.
 All extroverts are ambiverts.

Conclusions:

I. No introvert is an ambivert.
 II. No ambivert is an introvert.
 III. Some ambiverts are extroverts.
 IV. All ambiverts are extroverts.

- Ans**
- 1. Only conclusion III follows
 - 2. Both conclusions I and IV follow
 - 3. Both conclusions I and II follow
 - 4. Only conclusion I follows

Question ID : **81616113222**
 Status : **Answered**
 Chosen Option : **1**



Download SSC CGL, CHSL E-BOOKS


CLICK HERE

Get SSC CGL TIER-1 Study Note at : <https://sscportal.in/notes>

Q.7 Select the Venn diagram that best illustrates the relationship among the following classes.

Highlighter, Stationary, Eraser

Ans



Question ID : 81616113236

Status : Answered

Chosen Option : 2

Q.8 Select the correct combination of mathematical signs that can sequentially replace the * signs and balance the equation.

$$5 * 468 * 18 * 70 * 180 * 4 * 5$$

Ans 1. x, ÷, -, +, =, x

2. ÷, x, +, -, =, x

3. x, ÷, +, =, -, x

4. x, ÷, +, -, =, x

Question ID : 81616113127

Status : Answered

Chosen Option : 4

Q.9 In a certain code language, 'LIBERTY' is coded as '4221824364050'. How will 'SLAVERY' be coded in that language?

Ans 1. 22242636384050

2. 26222436384450

3. 26224233684540

4. 22262438365040

Question ID : 81616113118

Status : Not Attempted and
Marked For Review

Chosen Option : --



Download SSC CGL, CHSL E-BOOKS

CLICK HERE

Get SSC CGL TIER-1 Study Note at : <https://sscportal.in/notes>

Q.10 Four number-pairs have been given, out of which three are alike in some manner and one is different. Select the number-pair that is different.

- Ans 1. 82 : 236
 2. 68 : 196
 3. 54 : 152
 4. 36 : 98

Question ID : 81616113124

Status : **Not Attempted and Marked For Review**

Chosen Option : --

Q.11 Select the option in which the words share the same relationship as that shared by the given pair of words.

Electricity : Television

- Ans 1. Crops : Farmer
 2. Petrol : Car
 3. Diesel : Fuel
 4. Temperature : Refrigerator

Question ID : 81616113924

Status : **Answered**

Chosen Option : 2

Q.12 Select the option that is related to the third number in the same way as the second number is related to the first number.

14 : 112 :: 18 : ?

- Ans 1. 180
 2. 183
 3. 181
 4. 184

Question ID : 81616113224

Status : **Answered**

Chosen Option : 1

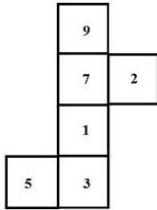


Download SSC CGL, CHSL E-BOOKS

[CLICK HERE](#)

Get SSC CGL TIER-1 Study Note at : <https://sscportal.in/notes>

Q.13 A cube is made by folding the given sheet. In the cube so formed, what would be the number on the face opposite the face showing the number '3'?



- Ans**
- 1. 7
 - 2. 1
 - 3. 5
 - 4. 9

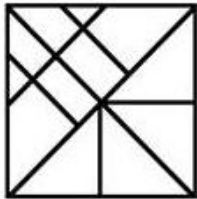
Question ID : **81616113131**
 Status : **Answered**
 Chosen Option : 1

Q.14 In a certain code language, 'INHALE' is written as 'CNYJLK'. How will 'GUILTY' be written in that language?

- Ans**
- 1. WRNKSE
 - 2. ARNGWE
 - 3. IJKSVW
 - 4. WVJKSI

Question ID : **81616113218**
 Status : **Answered**
 Chosen Option : 4

Q.15 Find the number of triangles in the given figure.



- Ans**
- 1. 17
 - 2. 21
 - 3. 23
 - 4. 19

Question ID : **81616113130**
 Status : **Answered**
 Chosen Option : 1

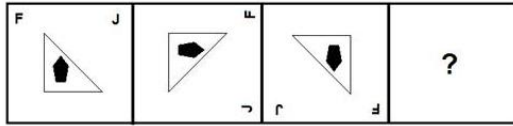


Download SSC CGL, CHSL E-BOOKS

[CLICK HERE](#)

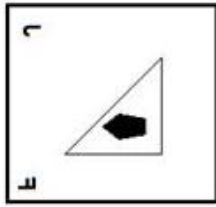
Get SSC CGL TIER-1 Study Note at : <https://sscportal.in/notes>

Q.16 Select the figure from among the given options that can replace the question mark (?) in the following series.

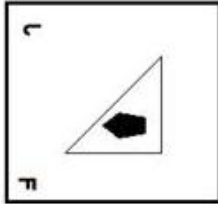


Ans

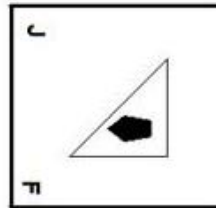
✗ 1.



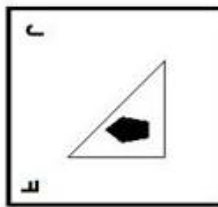
✗ 2.



✓ 3.



✗ 4.



Question ID : 81616112523
Status : Answered
Chosen Option : 3

Q.17 Select the number from among the given options that can replace the question mark (?) in the following series.

13, 26, 52, 104, ?

Ans ✗ 1. 230

✓ 2. 208

✗ 3. 152

✗ 4. 196

Question ID : 81616112516
Status : Answered
Chosen Option : 2



Download SSC CGL, CHSL E-BOOKS

[CLICK HERE](#)

Get SSC CGL TIER-1 Study Note at : <https://sscportal.in/notes>

Q.18 Four letter-clusters have been given, out of which three are alike in some manner and one is different. Select the letter-cluster that is different.

- Ans 1. JLP
 2. LNQ
 3. CEH
 4. SUX

Question ID : 81616112507
Status : Answered
Chosen Option : 1

Q.19 Select the option in which the numbers are related in the same way as are the numbers of the following set.

(3, 2, 3)

- Ans 1. (12, 136, 204)
 2. (4, 9, 12)
 3. (5, 18, 27)
 4. (7, 44, 66)

Question ID : 81616113126
Status : Not Attempted and Marked For Review
Chosen Option : --

Q.20 वह विकल्प चुनें जो तीसरे शब्द से उसी प्रकार संबंधित है, जिस प्रकार दूसरा शब्द पहले शब्द से संबंधित है।

मुर्गी : मुर्गा :: बत्तख : ?

- Ans 1. भंवरा
 2. मोंक
 3. हिरन
 4. नर बत्तख

Question ID : 81616112509
Status : Answered
Chosen Option : 4

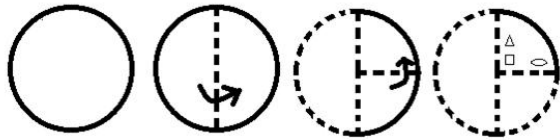


Download SSC CGL, CHSL E-BOOKS

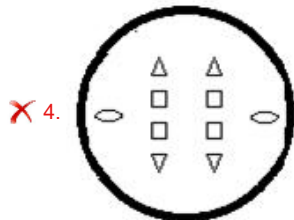
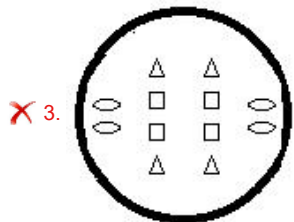
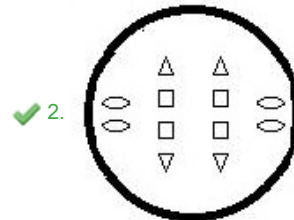
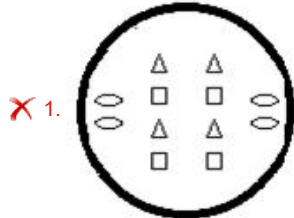
[CLICK HERE](#)

Get SSC CGL TIER-1 Study Note at : <https://sscportal.in/notes>

Q.21 The sequence of folding a piece of paper and the manner in which the folded paper has been cut is shown in the following figures. How would this paper look when unfolded?



Ans



Question ID : 81616113942
 Status : Answered
 Chosen Option : 2

Get SSC CGL TIER-1 Study Note at : <https://sscportal.in/notes>

Q.22 Select the option in which the given figure is embedded (rotation is NOT allowed).



Ans

✓ 1.



✗ 2.



✗ 3.



✗ 4.



Question ID : 81616113940

Status : Answered

Chosen Option : 1

Q.23 Select the letter-cluster from among the given options that can replace the question mark (?) in the following series.

CUPBOARD, DVPBOARD, DVQCOARD, ?, DVQCPBSE

Ans ✗ 1. DVQCPBSD

✓ 2. DVQCPBRD

✗ 3. DVPBPBRD

✗ 4. DVQCOASE

Question ID : 81616113919

Status : Answered

Chosen Option : 2

Q.24 नीचे चार शब्द दिए गए हैं जिनमें से तीन किसी संदर्भ में एक समान हैं और उनमें से एक असंगत है। उस असंगत शब्द का चयन करें।

Ans ✗ 1. लोटी

✗ 2. नायरा

✗ 3. यूरो

✓ 4. पिंट

Question ID : 81616113114

Status : Answered

Chosen Option : 3



Download SSC CGL, CHSL E-BOOKS

CLICK HERE

Q.25 Four friends, Priya, Kavya, Gaurvi and Shalini, have different amounts of money with them. If Priya takes ₹88 from Kavya, then she will have an amount equal to what Gaurvi has. Shalini and Kavya together have a total of ₹550. If Gaurvi takes ₹25 from Shalini, she will have an amount equal to what Kavya has. If the total amount with Shalini, Kavya and Gaurvi is ₹840, how much money does Priya have?

- Ans
- 1. ₹315
 - 2. ₹280
 - 3. ₹202
 - 4. ₹224

Question ID : 81616113936

Status : **Not Attempted and
Marked For Review**

Chosen Option : --



Download SSC CGL, CHSL E-BOOKS

[CLICK HERE](#)