

Combined Graduate Level Examination 2020 Tier-I

Roll Number	
Candidate Name	
Venue Name	iON Digital Zone iDZ Madhyamgram
Exam Date	16/08/2021
Exam Time	9:00 AM - 10:00 AM
Subject	Combined Graduate Level Examination 2020 Tier 1

Section : **General Intelligence and Reasoning**

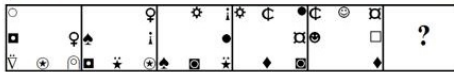
Q.1 Select the number from among the given options that can replace the question mark (?) in the following series.

10, 22, 35, 40, 72, 40, ?

- Ans
- 1. 131
 - 2. 134
 - 3. 133
 - 4. 143

Question ID : **81616113223**
 Status : **Not Answered**
 Chosen Option : --

Q.2 Select the figure from among the given options that can replace the question mark (?) in the following series.



Ans

- 1.
- 2.
- 3.
- 4.

Question ID : **81616113230**
 Status : **Not Answered**
 Chosen Option : --

Get SSC CGL TIER-1 Study Note at : <https://sscportal.in/notes>

Q.3 In a certain code language, 'PRINT' is written as 'YMNIU'. How will 'MAGIC' be written in that language?

- Ans**
- 1. HRLZR
 - 2. HDLVR
 - 3. HLDRV
 - 4. HRLRZ

Question ID : 81616112713
Status : Answered
Chosen Option : 1

Q.4 Select the combination of letters that when sequentially placed in the blanks of the given series will complete the series.

U A _ B _ T U _ C B D _ _ A C B _ T U A C _ _ T

- Ans**
- 1. C, D, A, T, U, D, B, D
 - 2. C, D, A, T, U, D, C, D
 - 3. D, C, A, T, U, D, D, B
 - 4. C, D, A, U, U, D, B, D

Question ID : 81616114230
Status : Answered
Chosen Option : 1

Q.5 Select the option in which the numbers are related in the same way as are the numbers of the following set.

(6, 9, 45)

- Ans**
- 1. (2, 8, 46)
 - 2. (6, 8, 60)
 - 3. (7, 4, 48)
 - 4. (8, 10, 36)

Question ID : 81616113732
Status : Answered
Chosen Option : 4



Download SSC CGL, CHSL E-BOOKS

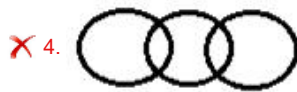
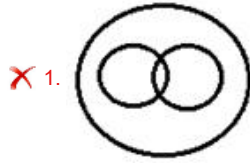
[CLICK HERE](#)

Get SSC CGL TIER-1 Study Note at : <https://sscportal.in/notes>

Q.6 Select the Venn diagram that best illustrates the relationship between the following classes.

Coriander seeds, Spices, Cinnamon

Ans

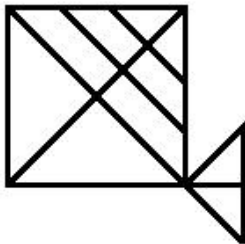


Question ID : 81616112731

Status : Answered

Chosen Option : 2

Q.7 How many triangles are there in the given figure?



Ans ✗ 1. 15

✗ 2. 16

✗ 3. 18

✓ 4. 17

Question ID : 81616113736

Status : Answered

Chosen Option : 4

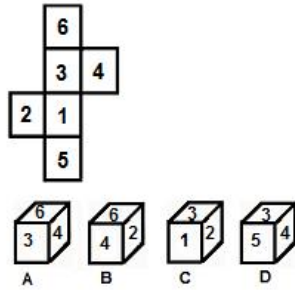


Download SSC CGL, CHSL E-BOOKS

[CLICK HERE](#)

Get SSC CGL TIER-1 Study Note at : <https://sscportal.in/notes>

Q.8 Select the boxes that can be formed by folding the given sheet along the lines.



- Ans**
- 1. Only C and D
 - 2. Only A and C
 - 3. Only B and C
 - 4. Only A, C and D

Question ID : **81616113737**
 Status : **Answered**
 Chosen Option : **2**

Q.9 Select the option that is related to the third word in the same way as the second word is related to the first word.

Leaves : Rustle :: Owl : ?

- Ans**
- 1. Grunt
 - 2. Hoot
 - 3. Chirp
 - 4. Quack

Question ID : **81616113216**
 Status : **Answered**
 Chosen Option : **2**

Q.10 Select the correct option that indicates the arrangement of the given words in the order in which they appear in an English dictionary.

1. Sorting
2. Solitary
3. Solution
4. Sophisticate
5. Solvent

- Ans**
- 1. 2, 3, 5, 4, 1
 - 2. 2, 3, 1, 4, 5
 - 3. 2, 4, 1, 3, 5
 - 4. 2, 5, 3, 4, 1

Question ID : **81616113213**
 Status : **Answered**
 Chosen Option : **1**



Download SSC CGL, CHSL E-BOOKS

CLICK HERE

Get SSC CGL TIER-1 Study Note at : <https://sscportal.in/notes>

Q.11 Four letter-clusters have been given, out of which three are alike in some manner and one is different. Select the letter-cluster that is different.

- Ans**
- 1. LNJI
 - 2. RTPO
 - 3. FHDB
 - 4. DFBA

Question ID : **81616113214**
 Status : **Answered**
 Chosen Option : **3**

Q.12 Select the option that is embedded in the given figure (rotation is NOT allowed).



- Ans**
- 1.
 - 2.
 - 3.
 - 4.

Question ID : **81616114243**
 Status : **Answered**
 Chosen Option : **2**

Q.13 Select the option in which the words share the same relationship as that shared by the given pair of words.

Anger : Emotion

- Ans**
- 1. Bicycle : Roads
 - 2. Pomegranate : Fruit
 - 3. Mattress : Bed
 - 4. Television : Entertainment

Question ID : **81616114227**
 Status : **Answered**
 Chosen Option : **4**



Download SSC CGL, CHSL E-BOOKS

CLICK HERE

Get SSC CGL TIER-1 Study Note at : <https://sscportal.in/notes>

Q.14 'A # B' means 'A is the son of B'.
'A @ B' means 'A is the mother of B'.
'A & B' means 'A is the wife of B'.
'A % B' means 'A is the sister of B'.

If 'M @ R % K # G # N & T', then which of the following statements is NOT correct?

- Ans 1. M is the mother of K.
 2. N is the paternal grandmother of K.
 3. R is the daughter of G.
 4. T is the paternal grandfather of M.

Question ID : 81616114231
Status : Answered
Chosen Option : 4

Q.15 Study the given pattern carefully and select the number that can replace the question mark (?) in it.

14 16 13
18 6 ?
12 21 17

- Ans 1. 8
 2. 6
 3. 7
 4. 5

Question ID : 81616112721
Status : Not Answered
Chosen Option : --

Q.16 Four number-pairs have been given, out of which three are alike in some manner and one is different. Select the number-pair that is different.

- Ans 1. 27 : 181
 2. 21 : 139
 3. 25 : 167
 4. 15 : 197

Question ID : 81616113730
Status : Answered
Chosen Option : 4

Q.17 What was the day of the week on 17 April 2014?

- Ans 1. Wednesday
 2. Friday
 3. Saturday
 4. Thursday

Question ID : 81616114239
Status : Answered
Chosen Option : 4



Download SSC CGL, CHSL E-BOOKS

[CLICK HERE](#)

Get SSC CGL TIER-1 Study Note at : <https://sscportal.in/notes>

Q.18 In a certain code language, 'FRENCH' is coded as '114' and 'LOSS' is coded as '47'.
How will 'COURSE' be coded in that language?

- Ans**
- 1. 103
 - 2. 120
 - 3. 87
 - 4. 81

Question ID : **81616113724**
Status : **Answered**
Chosen Option : **3**

Q.19 Which two numbers should be interchanged to make the given equation correct?

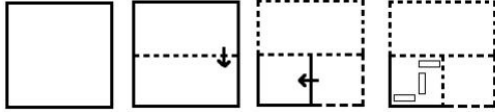
$$36 \times 81 \div 9 - (88 \div 4) + 14 + (22 + 7) = 169$$

- Ans**
- 1. 9 and 36
 - 2. 36 and 14
 - 3. 14 and 22
 - 4. 81 and 36

Question ID : **81616113733**
Status : **Answered**
Chosen Option : **2**

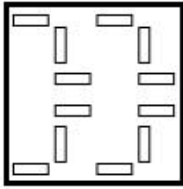
Get SSC CGL TIER-1 Study Note at : <https://sscportal.in/notes>

Q.20 The sequence of folding a piece of paper and the manner in which the folded paper has been cut is shown in the following figures. How would this paper look when unfolded?

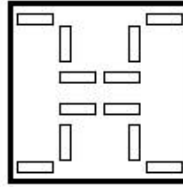


Ans

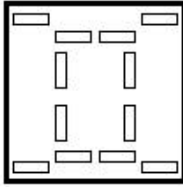
✗ 1.



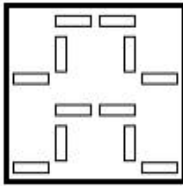
✓ 2.



✗ 3.



✗ 4.



Question ID : 81616114245

Status : Answered

Chosen Option : 2

Q.21 Select the option that is related to the third number in the same way as the second number is related to the first number.

16 : 144 :: 28 : ?

Ans ✗ 1. 263

✗ 2. 544

✓ 3. 420

✗ 4. 364

Question ID : 81616112719

Status : Answered

Chosen Option : 3



Download SSC CGL, CHSL E-BOOKS

[CLICK HERE](#)

Get SSC CGL TIER-1 Study Note at : <https://sscportal.in/notes>

Q.22 Four words have been given, out of which three are alike in some manner and one is different. Select the word that is different.

- Ans
- 1. Jealousy
 - 2. Empathy
 - 3. Hatred
 - 4. Envy

Question ID : 81616113720
Status : Answered
Chosen Option : 2

Q.23 Select the correct mirror image of the given combination when the mirror is placed at MN as shown.

Q e 1 f P 5 4 N

M
|
N

- Ans
- 1. N 7 2 9 7 1 e Q
 - 2. N 4 2 9 7 1 e Q
 - 3. N 4 5 9 7 1 e Q
 - 4. N 4 2 9 7 1 e Q

Question ID : 81616114244
Status : Answered
Chosen Option : 4

Q.24 Read the given statements and conclusions carefully. Assuming that the information given in the statements is true, even if it appears to be at variance with commonly known facts, decide which of the given conclusions logically follow(s) from the statements.

Statements:

- No bank is an office.
- All offices are stalls.

Conclusions:

- I. No bank is a stall.
- II. No stall is a bank.
- III. Some stalls are offices.
- IV. All the stalls are offices.

- Ans
- 1. Only conclusion I follows
 - 2. Both conclusions I and IV follow
 - 3. Only conclusion III follows
 - 4. Both conclusions I and II follow

Question ID : 81616112717
Status : Answered
Chosen Option : 3



Download SSC CGL, CHSL E-BOOKS

[CLICK HERE](#)

Get SSC CGL TIER-1 Study Note at : <https://sscportal.in/notes>

Q.25 Select the letter-cluster from among the given options that can replace the question mark (?) in the following series.

THME, WKJB, ZNGY, CQDV, ?

Ans 1. FTAS

2. FUAS

3. FTAR

4. FTBS

Question ID : 81616114222
Status : Answered
Chosen Option : 1



Download SSC CGL, CHSL E-BOOKS

[CLICK HERE](#)