

Combined Graduate Level Examination-2019 (Tier-I)

Section : General Intelligence and Reasoning

Q.1 Arrange the following words in the order in which they appear in an English dictionary.

1. Gemlike
2. Geminat
3. Gemmier
4. Geminal
5. Gemini





- Ans**
- ✓ 1. 4, 2, 5, 1, 3
- ✗ 2. 4, 3, 2, 1, 5
- ✗ 3. 3, 5, 4, 1, 2
- ✗ 4. 4, 5, 2, 1, 3

Q.2 Study the given pattern carefully and select the number that can replace the question mark (?) in it.

7	11	14
53	127	?
4	6	3

- Ans**
- ✗ 1. 200
- ✓ 2. 199
- ✗ 3. 196
- ✗ 4. 169





Q.3 In a certain code language, STRAIGHT is written as TSARGITH. How will THURSDAY be written as in that language?

- Ans**
-  1. UHTDRSYA
 -  2. AYSDURTH
 -  3. HTRUDSYA
 -  4. HTRUDSAY

Q.4 Arsh is Shivam's father and Dhruv is the son of Bimla. Eshwar is the father of Arsh. If Shivam is the brother of Dhruv, how is Bimla related to Eshwar?

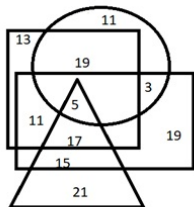
- Ans**
-  1. Daughter-in-law
 -  2. Sister-in-law
 -  3. Mother
 -  4. Wife

Q.5 In a certain code language, LARVAE is coded as 15-1-9-5-1-2. How will INSECT be coded as in that language?

- Ans**
-  1. 3-13-8-2-24-8
 -  2. 9-13-8-22-24-7
 -  3. 18-13-8-2-24-7
 -  4. 3-13-8-2-24-7

Q.6 The given Venn diagram represents artists in a circus:

The triangle represents clowns, the circle represents acrobats, the rectangle represents males and the square represents ringmasters. The numbers given in the diagram represent the number of persons in that particular category.



How many male clowns are also ringmasters, but NOT acrobats?

- Ans**
- ☒ 1. 15
 - ☒ 2. 5
 - ☒ 3. 11
 - ☒ 4. 17

Q.7 Which of the option figures is the exact mirror image of the given figure when the mirror is held at the right side?

#PaV\$ArK@

- Ans**
- ☒ 1. @K1A2V69#
 - ☒ 2. #b9A2V1K@
 - ☒ 3. @K1A2V69#
 - ☒ 4. #K1A2V69@


Q.8 Select the option in which the numbers are related in the same way as are the numbers in the given set.


(109, 114, 139)


- Ans**
- ☒ 1. (419, 424, 439)
 - ☒ 2. (268, 302, 237)
 - ☒ 3. (313, 318, 343)
 - ☒ 4. (579, 534, 549)


Q.9 Select the correct combination of mathematical signs to sequentially replace the * signs, to balance the following equation.

$$(12 * 7 * 6) * 13 * 6$$

Ans  1. $-, \div, \times, =$

 2. $\times, =, \div, -$


 3. $\times, -, \div, =$


 4. $\div, -, =, \times$

Q.10 A recent survey of married couples in Indian metro cities showed that 20% of the couples have only one child, 45% of the remaining couples have two children, and the rest of the couples have three or more children. What is the percentage of couples with three or more children?

Ans  1. 35%

 2. 44%


 3. 42%


 4. 56%


Q.11 Select the letter-cluster that can replace the question mark (?) in the following series.

DAC, GWH, JSM, MOR, ?

Ans  1. PKW

 2. PJV


 3. QJW


 4. QKV

Q.12 Four words have been given, out of which three are alike in some manner, while one is different. Select the odd word.

Ans  1. Righteousness

 2. Conduct

 3. Probity

 4. Virtue

SSC CGL Tier-1 Printed Study Kit



- 100% Syllabus Covered
- 12 Books , 1300+ Pages
- 5600+ MCQs
- 08 Year Solved Papers & Mock Tests (PDF Copy)
- 1 year Current Affairs (PDF Copy)

50% OFF

~~₹ 6,000/-~~
₹ 2,999/-

FREE SHIPPING

for Exam Help Call Us at: +91 8800734161

SSCPORTAL.IN

What you will get:

- 100% Syllabus Covered
- 12 Books
- 1300+ Pages
- 5600+ MCQs
- 8 Year Solved Papers (PDF Copy)
- Five Practice Papers (PDF Copy)
- One Year Current Affairs (PDF Copy)
- Guidance & Support from Our Experts

Price of the Kit:

Rs. 6,000

Rs. 2,999/-
(Limited time Offer)

Buy Online

Net Banking

Order Online (100% Safe)

[Click here for Other Payment Options \(Cash/NEFT/etc\)](#)

FOR MORE DETAILS CLICK HERE

50% OFF

Q.13 Select the number that can replace the question mark (?) in the following series.

17, 20, 15, 22, 13, ?

- Ans**
-  1. 4
 -  2. 2
 -  3. 24
 -  4. 22





Q.14 Read the given statements and conclusions carefully. Assuming that the information given in the statements is true, even if it appears to be at variance with commonly known facts, decide which of the given conclusions logically follow(s) from the statements.

Statements:

- 1. Some cars are rockets.
- 2. All rockets are engines.





Conclusions:

- I. Some engines are rockets.
- II. Some engines are cars.

- Ans**
-  1. Only conclusion I follows.
 -  2. Both conclusions I and II follow.
 -  3. Only conclusion II follows.
 -  4. Neither conclusion I nor II follows.

Q.15 Which two signs should be interchanged to make the given equation correct?


$$225 + 5 \times 3 \div 5 - 7 = 133$$


- Ans**
-  1. + and \div
 -  2. - and \div
 -  3. - and \times
 -  4. + and \times


Q.16 Select the set of letters that when sequentially placed in the blanks of the given letter series will complete the series.

_swws_wwws_swwww_sss

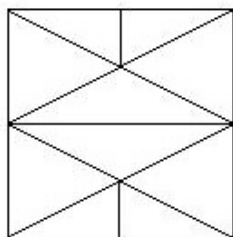
Ans  1. W, W, S, S

 2. W, S, W, S

 3. W, S, S, S

 4. W, S, S, W

Q.17 How many triangles are present in the given figure?



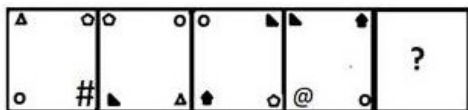
Ans  1. 30

 2. 22

 3. 28


 4. 26

Q.18 Select the figure that can replace the question mark (?) in the following series.




Ans


✗ 1.



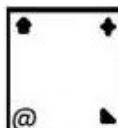
✗ 2.



✓ 3.



✗ 4.



Q.19 Select the option that is related to the third number in the same way as the second number is related to the first number and the sixth number is related to the fifth number.

52 : 221 :: 20 : ? :: 64 : 272

Ans

✗ 1. 170

✗ 2. 84

✓ 3. 85

✗ 4. 255

कर्मचारी चयन आयोग (CGL) परीक्षा अध्ययन सामग्री



- 100% Syllabus Covered
- 4 Books, 900+ Pages
- 2500+ MCQs
- 08 Year Solved Papers & Mock Tests (PDF Copy)
- 1 year Current Affairs (PDF Copy)

50% OFF

~~₹ 4,200/-~~
₹ 2,100/-

FREE SHIPPING

for Exam Help Call Us at: +91 8800734161

SSCPORTAL.IN

आप क्या प्राप्त करेंगे?

- माध्यम: हिन्दी
- 100% पाठ्यक्रम
- कुल 4 पुस्तिकायें, 900 से अधिक पृष्ठ
- 2,500 से अधिक वस्तुनिष्ठ प्रश्न (MCQ)
- 8 Year Solved Papers (PDF Copy)
- Five Practice Papers (PDF Copy)
- हमारे विशेषज्ञों द्वारा मार्गदर्शन और सहायता

Price of the Kit:

Rs. 4,200

Rs. 2,100/-
(Limited time Offer)

Buy Online

Net Banking

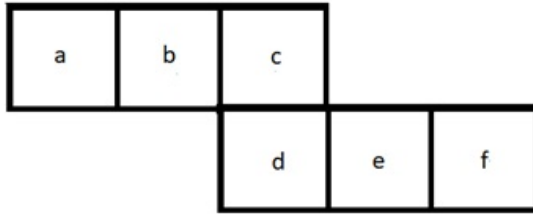
Order Online (100% Safe)

[Click here for Other Payment Options \(Cash/NEFT/etc\)](#)

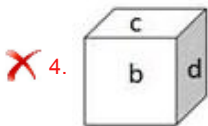
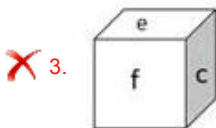
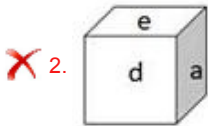
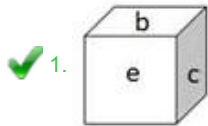
FOR MORE DETAILS CLICK HERE

50% OFF

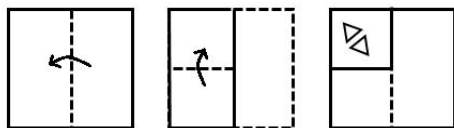
Q.20 Select the box that CANNOT be formed by folding the given unfolded box.



Ans

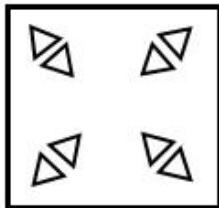


Q.21 The sequence of folding a piece of paper and the manner in which the folded paper has been cut is shown in the following figures. How would this paper look when unfolded?

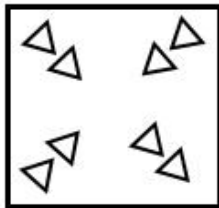


Ans

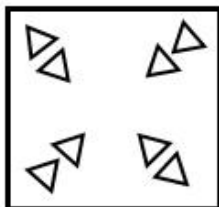
✓ 1.



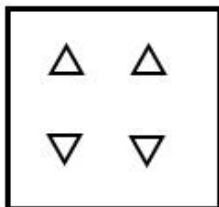
✗ 2.



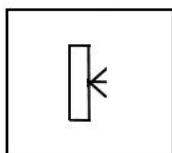
✗ 3.



✗ 4.

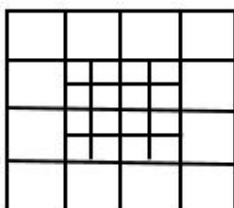


Q.22 Select the option figure in which the given figure is embedded (rotation is NOT allowed).

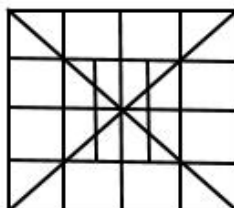


Ans

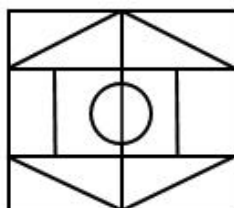
☒ 1.



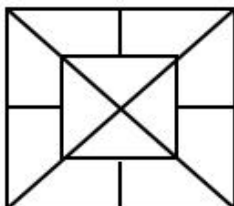
☒ 2.



☒ 3.



☒ 4.



Q.23 Select the option that is related to the third word in the same way as the second word is related to the first word.

Jackal : Howl :: Rain : ?

Ans

☒ 1. Hustle

☒ 2. Thunder

☒ 3. Patter

☒ 4. Drops



SSC EXAMS PRINTED STUDY NOTES


Study Material for SSC CGL (Tier-1) Examination	English	CLICK HERE
Study Kit for SSC CGL (Tier-2) Exam	English	CLICK HERE
Study Kit for SSC CHSL (10+2) Examination	English	CLICK HERE
Study Kit for SSC Stenographers (Grade 'C' & 'D')	English	CLICK HERE
Study Kit for Multitasking (Non-Technical) - MTS	English	CLICK HERE
Study Kit for SSC Constables (GD) Exam	English	CLICK HERE
Study Kit For SSC Sub-Inspectors in Delhi Police, CAPFs, CISF	English	CLICK HERE
Study Kit for SSC Junior Engineer Exam (Paper-1)	English	CLICK HERE
IAS EXAMS STUDY MATERIALS		
Study Kit for IAS (Pre) GENERAL STUDIES Paper-1 (GS)	English	CLICK HERE
Study Kit for IAS (Pre) CSAT Paper-2(Aptitude)	English	CLICK HERE
सामान्य अध्ययन (GS) प्रारंभिक परीक्षा (Pre) पेपर-1	हिन्दी	CLICK HERE
आई. ए. एस. (सी-सैट) प्रारंभिक परीक्षा पेपर -2	हिन्दी	CLICK HERE
Gist of NCERT Study Kit For UPSC Exams	English	CLICK HERE
यूपीएससी परीक्षा के लिए एनसीईआरटी अध्ययन सामग्री	हिन्दी	CLICK HERE

Q.24 Select the option in which the words share the same relationship as that shared by the given pair of words.

Hive : Bee

- Ans**
-  1. Eyrie : Bear
 -  2. Stable : Cow
 -  3. Sty : Dog
 -  4. Burrow : Hare

Q.25 Four letter-clusters have been given, out of which three are alike in some manner, while one is different. Select the odd letter-cluster.

- Ans**
-  1. TSR
 -  2. YXW
 -  3. NML
 -  4. FGH