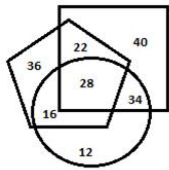


CGLE- Combined Graduate Level Tier-I, 2018 Examination

Section : General Intelligence and Reasoning

Q.1 In the given Venn diagram, the pentagon represents 'Cricketers', the square represents 'Chess players' and the circle represents 'Clerks'. The numbers given in the diagram represent the number of persons in that particular category.



How many cricketers are chess players but NOT clerks?

- Ans ☒ 1. 22
☒ 2. 34
☒ 3. 40
☒ 4. 36

Q.2 Which letter-cluster will replace the question mark (?) in the following series?

PRT, TVX, ?, BDF, FHJ

- Ans ☒ 1. YZB
☒ 2. XZB
☒ 3. XAB
☒ 4. XZC

Q.3 'Valuable' is related to 'Precious' in the same way as 'Dry' is related to '_____'.

- Ans ☒ 1. Farm
☒ 2. Arid
☒ 3. Wet
☒ 4. Rough

Q.4 Three of the following four letter-clusters are alike in a certain way and one is different. Pick the odd one out.

- Ans
- ☒ 1. BDGKP
 - ☒ 2. SUXBG
 - ☒ 3. OQTXC
 - ☒ 4. JLKRW

Q.5 Select the figure that will come next in the following figure series.



Ans

- ☒ 1.
- ☒ 2.
- ☒ 3.
- ☒ 4.

Q.6 Which letter will replace the question mark (?) in the following series?

P, U, R, W, T, ?, V, A, X

- Ans
- ☒ 1. Z
 - ☒ 2. W
 - ☒ 3. Y
 - ☒ 4. X

Q.7 Three of the following four number-pairs are alike in a certain way and one is different. Pick the number-pair that is different from the rest.

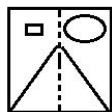
- Ans**
- ☒ 1. 7 : 51
 - ☒ 2. 8 : 66
 - ☒ 3. 13 : 171
 - ☒ 4. 10 : 98

Q.8 Select the word-pair in which the two words are related in the same way as are the two words in the following word-pair.

Dermatology : Skin

- Ans**
- ☒ 1. Cardiology : Angiography
 - ☒ 2. Orthopaedics : Bones
 - ☒ 3. Paediatrics : Lungs
 - ☒ 4. Medicine : Treatment

Q.9 Select the option that depicts how the given transparent sheet of paper would appear if it is folded at the dotted line.



Ans

- ☒ 1.
- ☒ 2.
- ☒ 3.
- ☒ 4.

Q.10 Select the missing number from the given options.


8 27 ?

7 2 3

9 5 7

Ans  1. 16

 2. 25


 3. 36


 4. 64

Q.11 The sum of the current ages of Asma and her grandfather is 80 years. 10 years from now, Asma's age will be one-fourth of her grandfather's age. What is Asma's current age?

Ans  1. 10 years

 2. 20 years


 3. 16 years


 4. 12 years


Q.12 Which two signs should be interchanged to make the following equation correct?

$$24 \div 12 - 6 \times 6 + 2 = 18$$

Ans  1. \times and $+$

 2. $+$ and $-$

 3. $+$ and \div

 4. \div and \times

Q.13

SSC CGL Tier-1 Printed Study Kit



- 100% Syllabus Covered
- 12 Books , 1300+ Pages
- 5600+ MCQs
- 08 Year Solved Papers & Mock Tests (PDF Copy)
- 1 year Current Affairs (PDF Copy)

50% OFF

~~₹ 6,000/-~~
₹ 2,999/-

FREE SHIPPING

for Exam Help Call Us at: +91 8800734161

SSCPORTAL.IN

What you will get:

- 100% Syllabus Covered
- 12 Books
- 1300+ Pages
- 5600+ MCQs
- 8 Year Solved Papers (PDF Copy)
- Five Practice Papers (PDF Copy)
- One Year Current Affairs (PDF Copy)
- Guidance & Support from Our Experts

Price of the Kit:

Rs. 6,000

Rs. 2,999/-
(Limited time Offer)



Buy Online



Net Banking

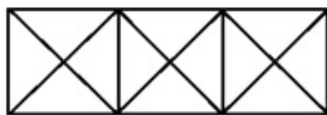
Order Online (100% Safe)

[Click here for Other Payment Options \(Cash/NEFT/etc\)](#)

FOR MORE DETAILS CLICK HERE

50% OFF

How many triangles are there in the following figure?



Ans ☒ 1. 28

☒ 2. 24

☒ 3. 30

☒ 4. 26

Q.14 Arrange the following words in a logical and meaningful order.

1. Hunger
2. Cry
3. Feeding
4. Child
5. Sleep
6. Mother

Ans ☒ 1. 4, 1, 2, 6, 3, 5

☒ 2. 4, 1, 2, 3, 5, 6

☒ 3. 4, 1, 3, 6, 5, 2

☒ 4. 4, 5, 2, 6, 3, 1

Q.15 Three different positions of the same dice are shown. Which symbol will be on the face opposite to the one having '&'?



Ans ☒ 1. ^

☒ 2. #

☒ 3. +

☒ 4. \$

Q.16

Select the correct mirror image of the given figure when the mirror is placed to the right of the figure.



Ans

✗ 1.



✓ 2.



✗ 3.



✗ 4.

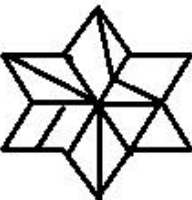


Q.17 Select the figure in which the given figure is embedded.
(rotation is not allowed).

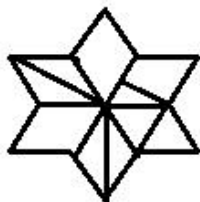


Ans

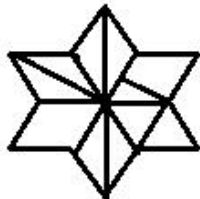
✗ 1.



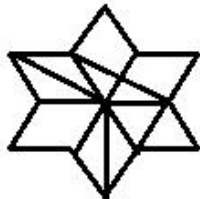
✗ 2.



✗ 3.



✓ 4.



- Q.18 'A + B' means 'A is the brother of B'.
 'A - B' means 'A is the wife of B'.
 'A × B' means 'A is the daughter of B'.
 'A ÷ B' means 'A is the father of B'.

If $P + S \times Q \times R - T \div V \div U$, then how is T related to P?

- Ans ✗ 1. Paternal grandmother
 ✗ 2. Maternal grandmother
 ✓ 3. Maternal grandfather
 ✗ 4. Paternal grandfather

- Q.19 Which number will replace the question mark (?) in the following series?

118, 129, 141, 154, 168, ?

- Ans ✓ 1. 183
 ✗ 2. 182
 ✗ 3. 181
 ✗ 4. 184

Q.20 Select the option that is related to the third number in the same way as the second number is related to the first number.

7 : 344 :: 11 : ?

- Ans**
- ☒ 1. 122
 - ☒ 2. 1332
 - ☒ 3. 1331
 - ☒ 4. 121

Q.21 In a code language, ARDOUS is written as 1184152119. How will SYSTEM be written as in that language?

- Ans**
- ☒ 1. 19251921513
 - ☒ 2. 18251820513
 - ☒ 3. 19251920513
 - ☒ 4. 19251920514

Q.22 Two statements are given, followed by three conclusions numbered I, II and III. Assuming the statements to be true, even if they seem to be at variance with commonly known facts, decide which of the conclusions logically follow(s) from the statements.

Statements:

All postcards are envelopes.
No envelope is a paper.

Conclusions:

- I. Some envelopes are postcards.
- II. No paper is an envelope.
- III. No postcard is a paper.

- Ans**
- ☒ 1. Only conclusions I and III follow.
 - ☒ 2. All the conclusions, I, II and III, follow
 - ☒ 3. Only conclusions I and II follow
 - ☒ 4. Only conclusions II and III follow

Q.23 Three of the following four words are alike in a certain way and one is different. Pick the odd word out.

- Ans**
- ☒ 1. Nose
 - ☒ 2. Ears
 - ☒ 3. Eyes
 - ☒ 4. Throat

Q.24 In a code language, INFORMATIVE is written as ROFNILEVITA. How will SUPERFICIAL be written as in that language?

- Ans
-  1. LAICIGREPUS
 -  2. REPUSGLAICI
 -  3. REPUSELAICI
 -  4. USEPRFICAIL

Q.25 Select the missing number from the given options.

64 49 ?

12 17 4

20 24 8

- Ans
-  1. 25
 -  2. 12
 -  3. 36
 -  4. 16



SSC EXAMS PRINTED STUDY NOTES

Study Material for SSC CGL (Tier-1) Examination	English	CLICK HERE
Study Kit for SSC CGL (Tier-2) Exam	English	CLICK HERE
Study Kit for SSC CHSL (10+2) Examination	English	CLICK HERE
Study Kit for SSC Stenographers (Grade 'C' & 'D')	English	CLICK HERE
Study Kit for Multitasking (Non-Technical) - MTS	English	CLICK HERE
Study Kit for SSC Constables (GD) Exam	English	CLICK HERE
Study Kit For SSC Sub-Inspectors in Delhi Police, CAPFs, CISF	English	CLICK HERE
Study Kit for SSC Junior Engineer Exam (Paper-1)	English	CLICK HERE
IAS EXAMS STUDY MATERIALS		
Study Kit for IAS (Pre) GENERAL STUDIES Paper-1 (GS)	English	CLICK HERE
Study Kit for IAS (Pre) CSAT Paper-2(Aptitude)	English	CLICK HERE
सामान्य अध्ययन (GS) प्रारंभिक परीक्षा (Pre) पेपर-1	हिन्दी	CLICK HERE
आई. ए. एस. (सी-सैट) प्रारंभिक परीक्षा पेपर -2	हिन्दी	CLICK HERE
Gist of NCERT Study Kit For UPSC Exams	English	CLICK HERE
यूपीएससी परीक्षा के लिए एनसीईआरटी अध्ययन सामग्री	हिन्दी	CLICK HERE