

SSC CGL 2017 EXAM PAPER : Held on 20-AUG-2017
Shift-1
(Reasoning)

QID : 1 - Select the related word from the given alternatives.

Spring : Spiral :: Bangle : ?

Options:

- 1) Glass
- 2) Circle
- 3) Ornament
- 4) Gold

Correct Answer: Circle

QID : 2 - Select the related letters from the given alternatives.

WUV : TRS :: QOP : ?

Options:

- 1) XYZ
- 2) CBA
- 3) ABZ
- 4) NLM

Correct Answer: NLM

QID : 3 - Select the related number from the given alternatives.

7.25 : 7.75 :: 9 : ?

Options:

- 1) 9.5
- 2) 7
- 3) 10
- 4) 8.5

Correct Answer: 9.5

QID : 4 - Select the odd word from the given alternatives.

Options:

- 1) Sparrow
- 2) Pigeon
- 3) Crow
- 4) Housefly

Correct Answer: Housefly

QID : 5 - Select the odd letters from the given alternatives.

Options:

- 1) RQS
- 2) XWV
- 3) MLN
- 4) FEG

Correct Answer: XWV

QID : 6 - Select the odd number from the given alternatives.

Options:

- 1) 700
- 2) 250
- 3) 350
- 4) 640

Correct Answer: 640

QID : 7 - A series is given, with one word missing. Choose the correct alternative from the given ones that will complete the series.

Oxygen, Toil, Arouse, Arson, Tenuous, ?

Options:

- 1) Onion
- 2) Lustrous
- 3) Lion
- 4) Onto

Correct Answer: Lustrous

QID : 8 - A series is given, with one term missing. Choose the correct alternative from the given ones that will complete the series.

ZYX, VUT, QPO, MLK, HGF, ?

Options:

- 1) DCB
- 2) CBA
- 3) BCD
- 4) EDC

Correct Answer: DCB

QID : 9 - A series is given, with one number missing. Choose the correct alternative from the given ones that will complete the series.

400, -200, 100, ? , 25, -12.5

Options:

- 1) -50
- 2) 50
- 3) 75
- 4) -75

Correct Answer: -50

QID : 10 - Bhavin's birthday is on Monday 29th May. On what day of the week will be Rachit's Birthday in the same year if Rachit was born on 17th November?

Options:

- 1) Saturday
- 2) Wednesday
- 3) Sunday
- 4) Friday

Correct Answer: Friday

QID : 11 - The weights of 4 boxes are 30, 70, 60 and 90 kilograms. Which of the following cannot be the total weight, in kilograms, of any combination of these boxes and in a combination a box can be used only once?

Options:

- 1) 250
- 2) 200
- 3) 190
- 4) 220

Correct Answer: 200

QID : 12 - From the given words, select the word which cannot be formed using the letters of the given word.

MYSTIQUE

Options:

- 1) EMITS
- 2) TEAMS
- 3) SUITE
- 4) QUIET

Correct Answer: TEAMS

QID : 13 - If IMPLORE is coded as GKNJMPC, then how will HUB be coded as?

Options:

- 1) AWN
- 2) WAO
- 3) FSZ
- 4) TEY

Correct Answer: FSZ

QID : 14 - In a certain code language, '+' represents 'x', '-' represents '+', 'x' represents '÷' and '÷' represents '-'. What is the answer to the following question?

$$72 \times 9 - 14 + 2 = ?$$

Options:

- 1) 20
- 2) 86
- 3) 30
- 4) 36

Correct Answer: 36

QID : 15 - If $52 \% 32 = 40$, $22 \% 20 = 4$ then what is the value of $15 \% 11 = ?$

Options:

- 1) 39
- 2) 11
- 3) 39
- 4) 8

Correct Answer: 8

QID : 16 -

SSC CGL Tier-1 Printed Study Kit



- 100% Syllabus Covered
- 12 Books , 1300+ Pages
- 5600+ MCQs
- 08 Year Solved Papers & Mock Tests (PDF Copy)
- 1 year Current Affairs (PDF Copy)

50% OFF

~~₹ 6,000/-~~
₹ 2,999/-

FREE SHIPPING

for Exam Help Call Us at: +91 8800734161

SSCPORTAL.IN

What you will get:

- 100% Syllabus Covered
- 12 Books
- 1300+ Pages
- 5600+ MCQs
- 8 Year Solved Papers (PDF Copy)
- Five Practice Papers (PDF Copy)
- One Year Current Affairs (PDF Copy)
- Guidance & Support from Our Experts

Price of the Kit:

Rs. 6,000

Rs. 2,999/-
(Limited time Offer)



Buy Online



Net Banking

Order Online (100% Safe)

[Click here for Other Payment Options \(Cash/NEFT/etc\)](#)

[FOR MORE DETAILS CLICK HERE](#)

50% OFF

Select the missing number from the given responses

दिए गए विकल्पों में से लुप्त संख्या चुनिए।

216	16	49
3	4	?
6	2	7

Options:

- 1) 42
- 2) 56
- 3) 2
- 4) 5

Correct Answer: 2

QID : 17 - A woman in a shopping complex walks 250 m East, then she turns North and walks 100 m, then she turns West and walks 120 m, then she turns to her left and walks 100 m.

Where is she now with reference to her starting position?

Options:

- 1) 130 m East
- 2) 130 m West
- 3) 370 m East
- 4) 370 m West

Correct Answer: 130 m East

QID : 18 - In the question two statements are given, followed by two conclusions, I and II. You have to consider the statements to be true even if it seems to be at variance from commonly known facts. You have to decide which of the given conclusions, if any, follows from the given statements.

Statement 1 : All drinks are food.

Statement 2 : No eatables are drinks.

Conclusion I : Some food are eatables.

Conclusion II : Some eatables are food.

Options:

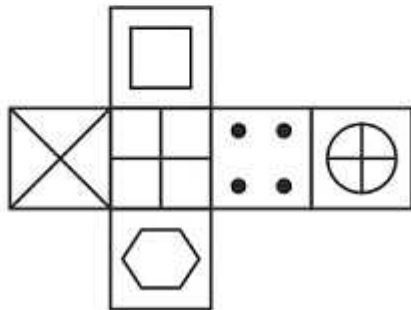
- 1) Only conclusion I follows
- 2) Only conclusion II follows
- 3) Both I and II follow
- 4) Neither I nor II follows

Correct Answer: Neither I nor II follows

QID : 19 -

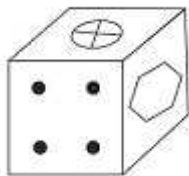
Which of the following cube in the answer figure cannot be made based on the unfolded cube in the question figure?

निम्नलिखित उत्तर आकृति में से कौन सा घन दिए गए प्रश्न आकृति में से खुले घन से बनाया नहीं जा सकता?

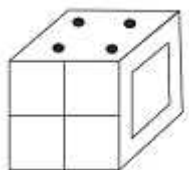


Options:

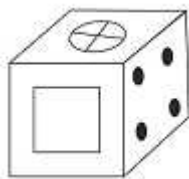
1)



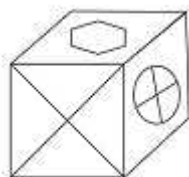
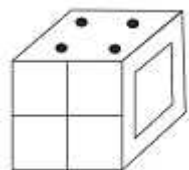
2)



3)

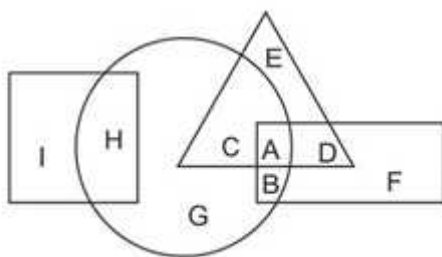


4)

**Correct Answer:****QID : 20 -**

In the following figure, square represents Dentists, triangle represents Collectors, circle represents Indians and rectangle represents Women. Which set of letters represents Indians who are either collectors or women?

निम्नलिखित आकृति में, वर्ग दंत चिकित्सकों को दर्शाता है, त्रिभुज कलेक्टर को दर्शाता है, वृत्त भारतीयों को दर्शाता है और आयत महिलाओं को दर्शाता है। अक्षरों का कौन सा समूह भारतीयों को दर्शाता है जो या तो कलेक्टर हैं या महिला हैं?

**Options:**

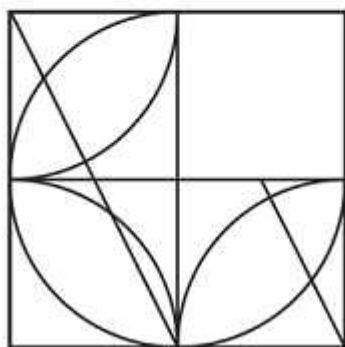
- 1) A,B,C
- 2) D,B,E
- 3) C,G,H
- 4) E,F,I

Correct Answer: A,B,C

QID : 21 -

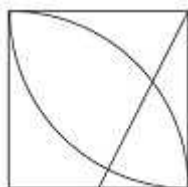
Which answer figure will complete the pattern in the question figure?

निम्नलिखित में से कौन-सी उत्तर आकृति प्रश्न आकृति के प्रतिरूप को पूरा करेगी?



Options:

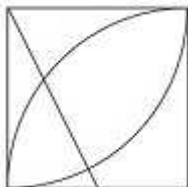
1)



2)



3)



4)

कर्मचारी चयन आयोग (CGL) परीक्षा अध्ययन सामग्री



- 100% Syllabus Covered
- 4 Books, 900+ Pages
- 2500+ MCQs
- 08 Year Solved Papers & Mock Tests (PDF Copy)
- 1 year Current Affairs (PDF Copy)

50% OFF

~~₹ 4,200/-~~
₹ 2,100/-

FREE
SHIPPING

for Exam Help Call Us at: +91 8800734161

SSCPORTAL.IN

आप क्या प्राप्त करेंगे?

- माध्यम: हिन्दी
- 100% पाठ्यक्रम
- कुल 4 पुस्तिकायें, 900 से अधिक पृष्ठ
- 2,500 से अधिक वस्तुनिष्ठ प्रश्न (MCQ)
- 8 Year Solved Papers (PDF Copy)
- Five Practice Papers (PDF Copy)
- हमारे विशेषज्ञों द्वारा मार्गदर्शन और सहायता

Price of the Kit:

Rs. 4,200

Rs. 2,100/-
(Limited time Offer)

 **Buy Online**


Net Banking

Order Online (100% Safe)

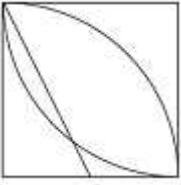
[Click here for Other Payment Options \(Cash/NEFT/etc\)](#)

FOR MORE DETAILS CLICK HERE

50% OFF



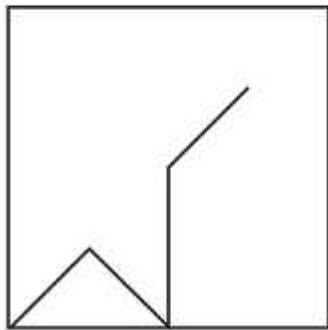
Correct Answer:



QID : 22 -

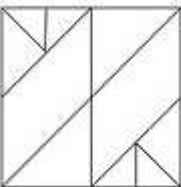
From the given answer figures, select the one in which the question figure is hidden/embedded.

दी गई उत्तर आकृतियों में से उस आकृति को चुनिए जिसमें प्रश्न आकृति निहित है।

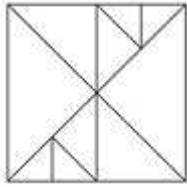


Options:

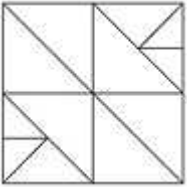
1)



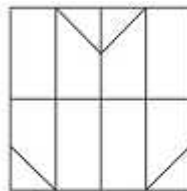
2)



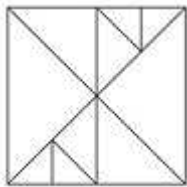
3)



4)



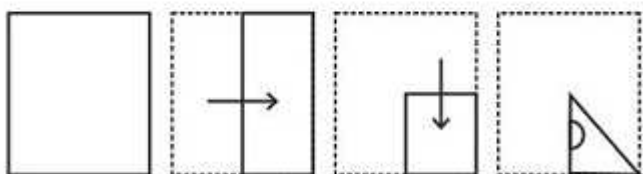
Correct Answer:



QID : 23 -

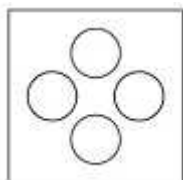
A piece of paper is folded and punched as shown below in the question figures. From the given answer figures, indicate how it will appear when opened.

प्रश्न आकृतियों में दिखाए अनुसार कागज को मोड़कर उसमें छेद करने तथा खोलने के बाद वह किस उत्तर आकृति जैसा दिखाई देगा?

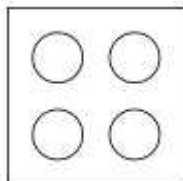


Options:

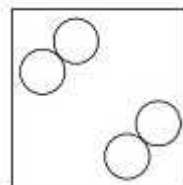
1)



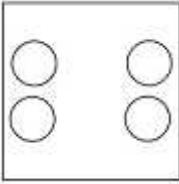
2)



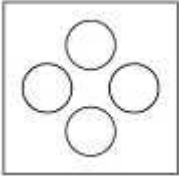
3)



4)



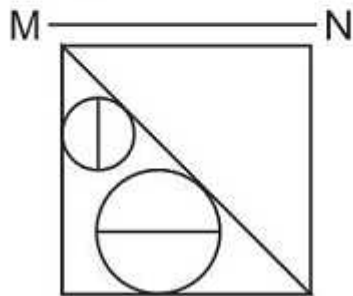
Correct Answer:



QID : 24 -

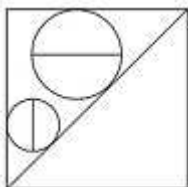
If a mirror is placed on the line MN, then which of the answer figures is the right image of the given figure?

यदि एक दर्पण को MN रेखा पर रखा जाए तो दी गई उत्तर आकृतियों में से कौन-सी आकृति प्रश्न आकृति का सही प्रतिबिम्ब होगी?




Options:

1)



2)

SSC CGL Tier-2 Study Kit



- 100% Syllabus Covered
- 3 Books, 750+ Pages
- 2000+ MCQs
- 5 Mock Practice Tests (PDF Copy)
- 1 year Current Affairs (PDF Copy)



~~₹ 6,000/-~~
₹ 1,999/-

>>>> [Click Here for More Details](#)

[CLICK HERE](#)

SSCPORTAL.IN

What you will get:

- 100% Syllabus Covered
- 3 Booklets
- 750+ Pages
- 2,000+ MCQs
- 5 Practice Papers also provided
- One Year Current Affairs (PDF Copy)
- Guidance & Support from Our Experts

Price of the Kit:

~~Rs. 6,000~~

Rs. 1,999/-
(Limited time Offer)



[Buy Online](#)



Net Banking

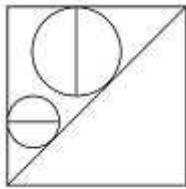
[CLICK HERE FOR MORE DETAILS](#)

Order Online (100% Safe)

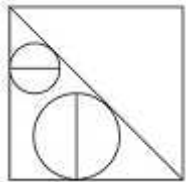
[Click here for Other Payment Options \(Cash/NEFT/etc\)](#)

**50%
OFF**

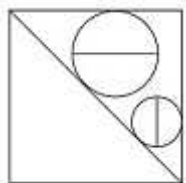
[CLICK HERE](#)



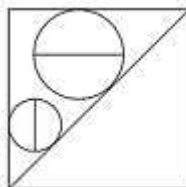
3)



4)



Correct Answer:



QID : 25 -

A word is represented by only one set of numbers as given in any one of the alternatives. The sets of numbers given in the alternatives are represented by two classes of alphabets as shown in the given two matrices. The columns and rows of Matrix-I are numbered from 0 to 4 and that of Matrix-II are numbered from 5 to 9. A letter from these matrices can be represented first by its row and next by its column, for example 'K' can be represented by 13, 34 etc and 'Z' can be represented by 85, 79 etc. Similarly, you have to identify the set for the word 'PLOT'.

एक शब्द केवल एक संख्या-समूह द्वारा दर्शाया गया है, जैसा कि विकल्पों में से किसी एक में दिया गया है। विकल्पों में दिए गए संख्या-समूह अक्षरों के दो वर्गों द्वारा दर्शाए गए हैं, जैसा कि दिए गए दो आव्यूहों में है। आव्यूह-I के स्तम्भ और पंक्ति की संख्या 0 से 4 और आव्यूह-II की 5 से 9 है। इन आव्यूहों से एक अक्षर को पहले उसकी पंक्ति और बाद में स्तम्भ संख्या द्वारा दर्शाया जा सकता है। उदाहरण के लिए 'K' को 13, 34 आदि द्वारा दर्शाया जा सकता है तथा 'Z' को 85, 79 आदि द्वारा दर्शाया जा सकता है। इसी तरह से आपको प्रश्न में दिए शब्द 'PLOT' के लिए समूह को पहचानना है।

Matrix I आव्यूह - I					
	0	1	2	3	4
0	J	B	B	I	A
1	A	G	F	K	L
2	H	E	F	G	C
3	I	A	M	A	K
4	J	F	C	B	M

Matrix II आव्यूह - II					
	5	6	7	8	9
5	O	U	O	P	U
6	P	X	U	N	Y
7	W	W	N	R	Z
8	Z	N	T	S	Y
9	U	W	U	U	X

Options:

- 1) 58,14,57,87
- 2) 44,04,76,86
- 3) 03,23,86,69
- 4) 23,04,99,99

Correct Answer: 58,14,57,87



SSC EXAMS

PRINTED STUDY NOTES

Study Material for SSC CGL (Tier-1) Examination	English	CLICK HERE
Study Kit for SSC CGL (Tier-2) Exam	English	CLICK HERE
Study Kit for SSC CHSL (10+2) Examination	English	CLICK HERE
Study Kit for SSC Stenographers (Grade 'C' & 'D')	English	CLICK HERE
Study Kit for Multitasking (Non-Technical) - MTS	English	CLICK HERE
Study Kit for SSC Constables (GD) Exam	English	CLICK HERE
Study Kit For SSC Sub-Inspectors in Delhi Police, CAPFs, CISF	English	CLICK HERE
Study Kit for SSC Junior Engineer Exam (Paper-1)	English	CLICK HERE
IAS EXAMS STUDY MATERIALS		
Study Kit for IAS (Pre) GENERAL STUDIES Paper-1 (GS)	English	CLICK HERE
Study Kit for IAS (Pre) CSAT Paper-2(Aptitude)	English	CLICK HERE
सामान्य अध्ययन (GS) प्रारंभिक परीक्षा (Pre) पेपर-1	हिन्दी	CLICK HERE
आई. ए. एस. (सी-सैट) प्रारंभिक परीक्षा पेपर -2	हिन्दी	CLICK HERE
Gist of NCERT Study Kit For UPSC Exams	English	CLICK HERE
यूपीएससी परीक्षा के लिए एनसीईआरटी अध्ययन सामग्री	हिन्दी	CLICK HERE