

**SSC CGL 2017 EXAM PAPER : Held on 18-AUG-2017**  
**Shift-3**  
**(Reasoning)**

---

**QID : 201 - Select the related word from the given alternatives.**

**School : Teacher :: Court : ?**

**Options:**

- 1) Lawyer
- 2) Play
- 3) Tennis
- 4) Justice

**Correct Answer: Lawyer**

**QID : 202 - Select the related letters from the given alternatives.**

**EGI : BDF :: KMO : ?**

**Options:**

- 1) GIK
- 2) MOQ
- 3) HJL
- 4) QSU

**Correct Answer: HJL**

**QID : 203 - Select the related number from the given alternatives.**

**5 : -10 :: -8 : ?**

**Options:**

- 1) 16
- 2) -16
- 3) 13
- 4) -13

**Correct Answer: 16**

**QID : 204 - Select the odd word from the given alternatives.**

**Options:**

- 1) Knife
- 2) Fork
- 3) Plate
- 4) Spoon

**Correct Answer: Plate**

**QID : 205 - Select the odd letters from the given alternatives.**

**Options:**

- 1) AEI
- 2) JNR
- 3) SWA
- 4) FHJ

**Correct Answer: FHJ**

**QID : 206 - Select the odd number from the given alternatives.**

**Options:**

- 1) 169
- 2) 421
- 3) 529
- 4) 289

**Correct Answer: 421**

**QID : 207 - A series is given, with one word missing. Choose the correct alternative from the given ones that will complete the series.**

**hello, lower, error, organ, tense, ?**

**Options:**

- 1) night
- 2) rapture
- 3) senile
- 4) watch

**Correct Answer: senile**

**QID : 208 - A series is given, with one term missing. Choose the correct alternative from the given ones that will complete the series.**

**XXXOXXX, XXXXOXX, XXOXXXX, XXXXXOX, XOXXXXX, ?**

**Options:**

- 1) XXXXXXO
- 2) OXXXXXXO
- 3) XXXOXXX
- 4) XXXXXX

**Correct Answer: XXXXXXO**

**QID : 209 - A series is given, with one number missing. Choose the correct alternative from the given ones that will complete the series.**

**$\frac{3}{5}$ , 1.4,  $\frac{11}{5}$ , ? ,  $\frac{19}{5}$ , 4.6**

**Options:**

- 1)  $\frac{14}{5}$
- 2) 3.2
- 3)  $\frac{16}{5}$
- 4) 3

**Correct Answer: 3**

**QID : 210 - Devansh's birthday is on Friday 14th April. On what day of the week will be Rohan's Birthday in the same year if Rohan was born on 20th September?**

**Options:**

- 1) Tuesday
- 2) Friday
- 3) Thursday
- 4) Wednesday

**Correct Answer: Wednesday**

**QID : 211 - The weights of 4 boxes are 20, 40, 80 and 90 kilograms. Which of the following cannot be the total weight, in kilograms, of any combination of these boxes and in a combination a box can be used only once?**

**Options:**

- 1) 220
- 2) 230
- 3) 150
- 4) 210

**Correct Answer: 220**

**QID : 212 - From the given words, select the word which cannot be formed using the letters of the given word.**

**PREACHER**

**Options:**

- 1) RECAP
- 2) PARCH
- 3) PEACH
- 4) CARES

**Correct Answer: CARES**

**QID : 213 - If MIGRANT is coded as LHFQZMS, then how will GEL be coded as?**

**Options:**

- 1) QXK
- 2) FDK
- 3) IXZ
- 4) IFG

**Correct Answer: FDK**

**QID : 214 - In a certain code language, '+' represents 'x', '-' represents '+', 'x' represents '÷' and '÷' represents '-'. What is the answer to the following question?**

$$27 \times 3 \div 30 + 5 - 125 = ?$$

**Options:**

- 1) 69
- 2) 67
- 3) -15
- 4) -16

**Correct Answer: -16**

**QID : 215 - If  $11\$25 = 18$ ,  $12\$20 = 16$  then what is the value of  $4\$50 = ?$**

**Options:**

- 1) 42
- 2) 17
- 3) 27
- 4) 37

**Correct Answer: 27**

## Study Kit for SSC Stenographers (Grade 'C' & 'D') Examination (Paper - 1)



- Medium: English
- 100% Syllabus Covered
- 3000 + MCQs
- 700+ Pages

**SPECIAL  
OFFER**

**Only**

**MRP ₹ 3000/-  
Offer ₹ 1499/-**

[Click Here for More Details](#)

### What you will get:

- 100% Syllabus Covered
- 6 Booklets
- 700+ Pages
- 3000+ MCQs
- Five Practice Papers
- One Year Current Affairs
- Guidance & Support from Our Experts

Price of the Kit:

~~Rs. 3,000~~

**Rs. 1,499/-**  
(Limited time Offer)



Net Banking

**FOR MORE DETAILS CLICK HERE**

**Order Online (100% Safe)**

[Click here for Other Payment Options \(Cash/NEFT/etc\)](#)

**50%  
OFF**

QID : 216 -

Select the missing number from the given responses

दिए गए विकल्पों में से लुप्त संख्या चुनिए।

21	27	29
?	96	142
57	69	113

Options:

- 1) 46
- 2) 69
- 3) 29
- 4) 78

Correct Answer: 78

**QID : 217 -** P and Q start cycling from the same point. P cycles 18 km North, then turns to her right and cycles 3 km. Q cycles 9 km East, then turns North and cycles 10 km North, then turns left and cycles 6 km. Where is Q now with respect to the position of P?

Options:

- 1) 8 km South
- 2) 8 km North
- 3) 28 km South
- 4) 28 km North

Correct Answer: 8 km South

**QID : 218 -** In the question a statement is given, followed by two arguments, I and II. You have to consider the statement to be true even if it seems to be at variance from commonly known facts. You have to decide which of the given arguments, if any, is a strong argument.

**Statement :** Should rock shows be allowed to run till midnight at tourist places?

Argument I : Yes, more tourists arrive due to rock shows. Tourism is good for local economy.

Argument II : No, local traditions are harmed due to tourism.

Options:

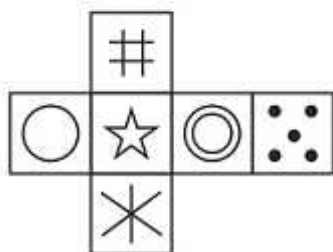
- 1) if only argument I is strong.
- 2) if only argument II is strong.
- 3) if both I and II are strong.
- 4) if neither I nor II is strong.

**Correct Answer: if only argument I is strong.**

**QID : 219 -**

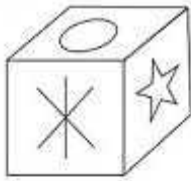
Which of the following cube in the answer figure cannot be made based on the unfolded cube in the question figure?

निम्नलिखित उत्तर आकृति में से कौन सा घन दिए गए प्रश्न आकृति में से खुले घन से बनाया नहीं जा सकता?

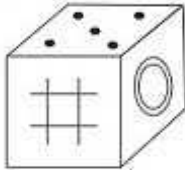


**Options:**

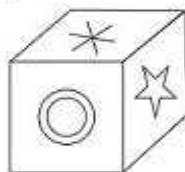
1)



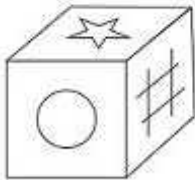
2)



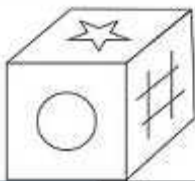
3)



4)



**Correct Answer:**

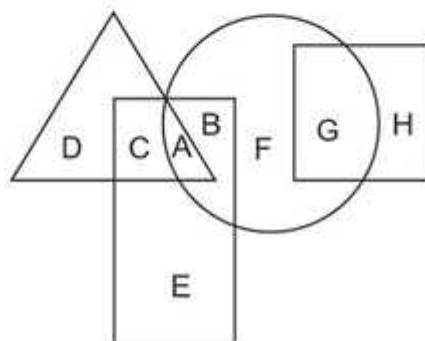




**QID : 220 -**

In the following figure, square represents Therapists, triangle represents Geneticists, circle represents yoga practitioners and rectangle represents Fathers. Which set of letters represents yoga practitioners who are neither geneticists nor fathers?

निम्नलिखित आकृति में, वर्ग चिकित्सकों को दर्शाता है, त्रिभुज आनुवंशिकीवादीयों को दर्शाता है, वृत्त योग चिकित्सकों को दर्शाता है और आयत पिताओं को दर्शाता है। अक्षरों का कौन सा समूह योग चिकित्सकों को दर्शाता है जो न तो आनुवंशिकीवादी हैं और न ही पिता हैं?



**Options:**

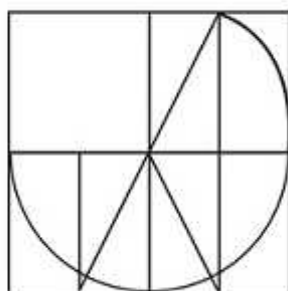
- 1) C,B
- 2) E,A
- 3) G,C
- 4) F,G

**Correct Answer: F,G**

**QID : 221 -**

Which answer figure will complete the pattern in the question figure?

निम्नलिखित में से कौन-सी उत्तर आकृति प्रश्न आकृति के प्रतिरूप को पूरा करेगी?



# SSC CGL Tier-1 Printed Study Kit



- 100% Syllabus Covered
- 12 Books , 1300+ Pages
- 5600+ MCQs
- 08 Year Solved Papers & Mock Tests (PDF Copy)
- 1 year Current Affairs (PDF Copy)

**50% OFF**

~~₹ 6,000/-~~  
**₹ 2,999/-**

**FREE SHIPPING**

for Exam Help Call Us at: +91 8800734161

**SSCPORTAL.IN**

## What you will get:

- 100% Syllabus Covered
- 12 Books
- 1300+ Pages
- 5600+ MCQs
- 8 Year Solved Papers (PDF Copy)
- Five Practice Papers (PDF Copy)
- One Year Current Affairs (PDF Copy)
- Guidance & Support from Our Experts

Price of the Kit:

**Rs. 6,000**

**Rs. 2,999/-**  
(Limited time Offer)

**Buy Online**

**Net Banking**

**Order Online (100% Safe)**

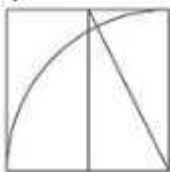
**[Click here for Other Payment Options \(Cash/NEFT/etc\)](#)**

**[FOR MORE DETAILS CLICK HERE](#)**

**50% OFF**

**Options:**

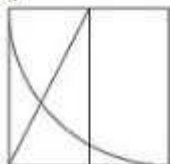
1)



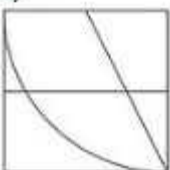
2)



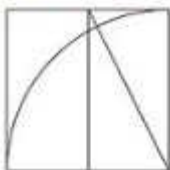
3)



4)



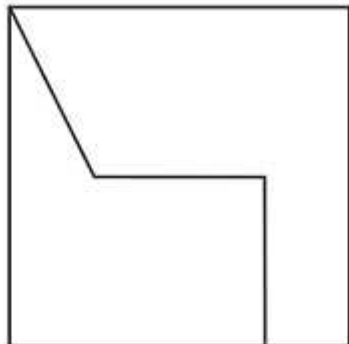
**Correct Answer:**



**QID : 222 -**

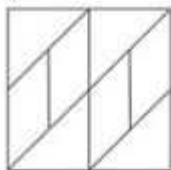
From the given answer figures, select the one in which the question figure is hidden/embedded.

दी गई उत्तर आकृतियों में से उस आकृति को चुनिए जिसमें प्रश्न आकृति निहित है।

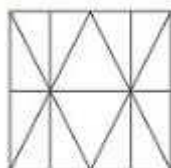


**Options:**

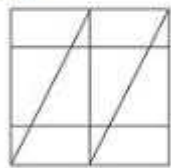
1)



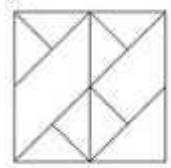
2)



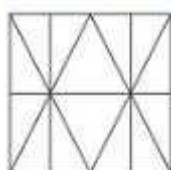
3)



4)



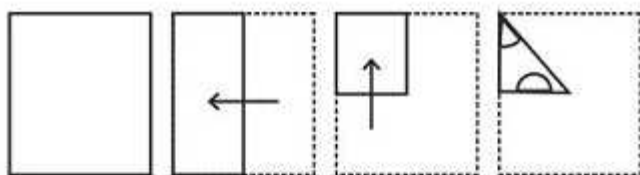
**Correct Answer:**



QID : 223 -

A piece of paper is folded and punched as shown below in the question figures. From the given answer figures, indicate how it will appear when opened.

प्रश्न आकृतियों में दिखाए अनुसार कागज को मोड़कर उसमें छेद करने तथा खोलने के बाद वह किस उत्तर आकृति जैसा दिखाई देगा?



# SSC CHSL (10+2) Printed Study Kit



- 100% CHSL Exam Syllabus Covered
- 5 Books, 1000+ Pages
- 4500+ MCQs
- Solved Papers & Mock Tests (PDF Copy)
- 1 Year Current Affairs (PDF Copy)

**50% OFF**  
~~₹ 4,000/-~~  
**₹ 1,999/-**

FREE SHIPPING

for Exam Help Call Us at: +91 8800734161

SSCPORTAL.IN

## What you will get:

- 100% CHSL Exam Syllabus Covered
- 5 Booklets
- More Than 1000+ Pages
- 4500+ MCQs
- Previous Solved Papers
- Current Affairs for Exam
- Guidance & Support from Our Experts

Price of the Kit:

**Rs. 4,000**

**Rs. 1,999/-**  
(Limited time Offer)

 **Buy Online**

Net Banking

**Order Online (100% Safe)**

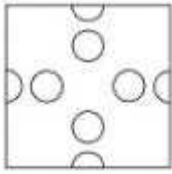
**[Click here for Other Payment Options \(Cash/NEFT/etc\)](#)**

**[FOR MORE DETAILS CLICK HERE](#)**


**50% OFF**

**Options:**

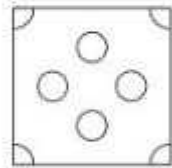
1)



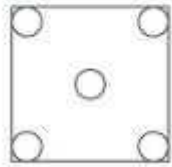
2)



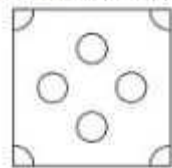
3)



4)



**Correct Answer:**





QID : 224 -

If a mirror is placed on the line MN, then which of the answer figures is the right image of the given figure?

यदि एक दर्पण को MN रेखा पर रखा जाए तो दी गई उत्तर आकृतियों में से कौन-सी आकृति प्रश्न आकृति का सही प्रतिबिम्ब होगी?

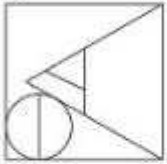


**Options:**

1)



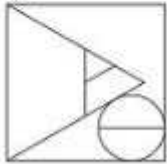
2)



3)



4)



**Correct Answer:**



QID : 225 -

A word is represented by only one set of numbers as given in any one of the alternatives. The sets of numbers given in the alternatives are represented by two classes of alphabets as shown in the given two matrices. The columns and rows of Matrix-I are numbered from 0 to 4 and that of Matrix-II are numbered from 5 to 9. A letter from these matrices can be represented first by its row and next by its column, for example 'K' can be represented by 42, 34 etc and 'Z' can be represented by 87, 78 etc. Similarly, you have to identify the set for the word 'REAL'.

एक शब्द केवल एक संख्या-समूह द्वारा दर्शाया गया है, जैसा कि विकल्पों में से किसी एक में दिया गया है। विकल्पों में दिए गए संख्या-समूह अक्षरों के दो वर्गों द्वारा दर्शाए गए हैं, जैसा कि दिए गए दो आव्यूहों में है। आव्यूह-I के स्तम्भ और पंक्ति की संख्या 0 से 4 और आव्यूह-II की 5 से 9 है। इन आव्यूहों से एक अक्षर को पहले उसकी पंक्ति और बाद में स्तम्भ संख्या द्वारा दर्शाया जा सकता है। उदाहरण के लिए 'K' को 42, 34 आदि द्वारा दर्शाया जा सकता है तथा 'Z' को 87, 78 आदि द्वारा दर्शाया जा सकता है। इसी तरह से आपको प्रश्न में दिए शब्द 'REAL' के लिए समूह को पहचानना है।

Matrix I आव्यूह - I					
	0	1	2	3	4
0	H	H	D	J	L
1	E	J	C	A	L
2	D	H	E	K	I
3	C	A	A	E	K
4	B	D	K	C	G

Matrix II आव्यूह - II					
	5	6	7	8	9
5	Y	Y	V	R	S
6	U	R	R	Z	U
7	W	P	N	Z	S
8	R	P	Z	Y	Y
9	P	S	N	R	V

Options:

- 1) 21,10,85,96
- 2) 85,10,31,04
- 3) 14,02,58,88
- 4) 20,20,77,56

Correct Answer: 85,10,31,04



# SSC EXAMS

## PRINTED STUDY NOTES

<a href="#">Study Material for SSC CGL (Tier-1) Examination</a>	<a href="#">English</a>	<a href="#">CLICK HERE</a>
<a href="#">Study Kit for SSC CGL (Tier-2) Exam</a>	<a href="#">English</a>	<a href="#">CLICK HERE</a>
<a href="#">Study Kit for SSC CHSL (10+2) Examination</a>	<a href="#">English</a>	<a href="#">CLICK HERE</a>
<a href="#">Study Kit for SSC Stenographers (Grade 'C' &amp; 'D')</a>	<a href="#">English</a>	<a href="#">CLICK HERE</a>
<a href="#">Study Kit for Multitasking (Non-Technical) - MTS</a>	<a href="#">English</a>	<a href="#">CLICK HERE</a>
<a href="#">Study Kit for SSC Constables (GD) Exam</a>	<a href="#">English</a>	<a href="#">CLICK HERE</a>
<a href="#">Study Kit For SSC Sub-Inspectors in Delhi Police, CAPFs, CISF</a>	<a href="#">English</a>	<a href="#">CLICK HERE</a>
<a href="#">Study Kit for SSC Junior Engineer Exam (Paper-1)</a>	<a href="#">English</a>	<a href="#">CLICK HERE</a>
<b>IAS EXAMS STUDY MATERIALS</b>		
<a href="#">Study Kit for IAS (Pre) GENERAL STUDIES Paper-1 (GS)</a>	<a href="#">English</a>	<a href="#">CLICK HERE</a>
<a href="#">Study Kit for IAS (Pre) CSAT Paper-2(Aptitude)</a>	<a href="#">English</a>	<a href="#">CLICK HERE</a>
<a href="#">सामान्य अध्ययन (GS) प्रारंभिक परीक्षा (Pre) पेपर-1</a>	<a href="#">हिन्दी</a>	<a href="#">CLICK HERE</a>
<a href="#">आई. ए. एस. (सी-सैट) प्रारंभिक परीक्षा पेपर -2</a>	<a href="#">हिन्दी</a>	<a href="#">CLICK HERE</a>
<a href="#">Gist of NCERT Study Kit For UPSC Exams</a>	<a href="#">English</a>	<a href="#">CLICK HERE</a>
<a href="#">यूपीएससी परीक्षा के लिए एनसीईआरटी अध्ययन सामग्री</a>	<a href="#">हिन्दी</a>	<a href="#">CLICK HERE</a>