

**SSC CGL 2017 EXAM PAPER : Held on 16-AUG-2017**  
**Shift-3**  
**(Reasoning)**

---

**QID : 201 - In the following question, select the related word from the given alternatives.**

**Frog : Amphibian :: Lizard : ?**

**Options:**

- 1) Rodent
- 2) Mammal
- 3) Reptile
- 4) Insect

**Correct Answer: Reptile**

**QID : 202 - In the following question, select the related letters from the given alternatives.**

**DJLQ : WQOJ :: DMSW : ?**

**Options:**

- 1) WNHD
- 2) WNDH
- 3) WHND
- 4) WWCC

**Correct Answer: WNHD**

**QID : 203 - In the following question, select the related number from the given alternatives.**

**7 : 56 :: 11 : ?**

**Options:**

- 1) 121
- 2) 123
- 3) 132
- 4) 134

**Correct Answer: 132**

**QID : 204 - In the following question, select the odd word from the given alternatives.**

**Options:**

- 1) Music
- 2) Singer
- 3) Director
- 4) Actor

**Correct Answer: Music**

**QID : 205 - In the following question, select the odd letters from the given alternatives.**

**Options:**

- 1) JGD
- 2) NLI
- 3) XUR
- 4) QNK

**Correct Answer: NLI**

**QID : 206 - In the following question, select the odd number from the given alternatives.**

**Options:**

- 1) 71
- 2) 83
- 3) 89
- 4) 93

**Correct Answer: 93**

**QID : 207 - Arrange the given words in the sequence in which they occur in the dictionary.**

- 1. Counter
- 2. Crop
- 3. Create
- 4. Carnation
- 5. Creator

**Options:**

- 1) 41352
- 2) 41253

3) 43125

4) 41325

**Correct Answer: 41352**

**QID : 208 - A series is given with one term missing. Select the correct alternative from the given ones that will complete the series.**

**A, E, J, N, S, W, ?**

**Options:**

1) Z

2) A

3) B

4) C

**Correct Answer: B**

**QID : 209 - In the following question, select the missing number from the given series.**

**3, 7, 16, 35, ?**

**Options:**

1) 73

2) 74

3) 78

4) 82

**Correct Answer: 74**

**QID : 210 - The ratio of present ages of L and N is 7 : 5. If the age of N after seven years will be 32 years, then what is the present age (in years) of L?**

**Options:**

1) 49

2) 35

3) 28

4) 42

**Correct Answer: 35**

**QID : 211 - Pointing towards a girl, Chetan said "She is the daughter of the only child of my grandmother". How is Chetan related to that girl?**

**Options:**

1) Father

2) Son

3) Brother

4) Husband

**Correct Answer: Brother**

**QID : 212** - In the following question, from the given alternative words, select the word which cannot be formed using the letters of the given word.

**Nightwalker**

**Options:**

- 1) Talker
- 2) Tailer
- 3) Waller
- 4) Winer

**Correct Answer: Waller**

**QID : 213** - In a certain code language, "SPICEY" is written as "ELOUAY" and "PONDER" is written as "JKLNAZ". How is "HOUSED" written in that code language?

**Options:**

- 1) QKDZAO
- 2) GNTRDC
- 3) WQJFGU
- 4) DKQAOZ

**Correct Answer: QKDZAO**

**QID : 214** - If "x" denotes "added to", "÷" denotes "subtracted from", "+" denotes "divided by" and "-" denotes "multiplied by", then

$$14 \times 12 - 16 \div 18 = ?$$

**Options:**

- 1) 430
- 2) 180
- 3) 168
- 4) 188

**Correct Answer: 188**

**QID : 215** - If  $18 \times 12 = 206$  and  $19 \times 22 = 408$ , then

$$23 \times 36 = ?$$

**Options:**

- 1) 878
- 2) 818
- 3) 794
- 4) 776

**Correct Answer: 818**

# SSC Constable (GD) Exam Study Kit



- ▶ 100% Written Exam Syllabus
- ▶ 700+ Pages, Printed Books
- ▶ 1500 MCQ, 8 Books
- ▶ Practice Question Papers
- ▶ 1 Year Current Affairs

**50% OFF**  
~~₹ 3,200/-~~  
**₹ 1599/-**



 **100% SAFE**

for Exam Help Call Us at: +91 8800734161

IAS EXAM PORTAL

## What you will get:

- 100% Syllabus Covered
- 8 Booklets
- 700+ Pages
- Five Practice Papers
- One Year Current Affairs
- Current Affairs for Exam
- Guidance & Support from Our Experts

Price of the Kit:

~~Rs. 3,200~~

**Rs. 1,599/-**  
(Limited time Offer)



Net Banking

**Order Online (100% Safe)**

[Click here for Other Payment Options \(Cash/NEFT/etc\)](#)

**FOR MORE DETAILS CLICK HERE**



QID : 216 -

In the following question, select the number which can be placed at the sign of question mark (?) from the given alternatives.

निम्नलिखित प्रश्न में दिए गए विकल्पों में से प्रश्न चिन्ह (?) के स्थान पर आने वाली संख्या को चुनिए।

2	4	1
5	3	5
7	2	6
39	17	?

Options:

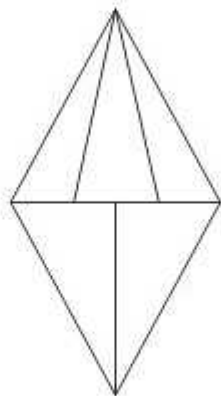
- 1) 11
- 2) 31
- 3) 32
- 4) 37

Correct Answer: 31

QID : 217 -

How many triangles are there in the given figure?

दी गई आकृति में कितने त्रिभुज हैं?



Options:

- 1) 8
- 2) 9
- 3) 10
- 4) 12

**Correct Answer: 9**

**QID : 218 -** In each of the following question below are given some statements followed by some conclusions. Taking the given statements to be true even if they seem to be at variance from commonly known facts, read all the conclusions and then decide which of the given conclusion logically follows the given statements.

**Statements:**

- I. Some cups are plates.
- II. All spoons are blue.
- III. No plates are spoon.

**Conclusions:**

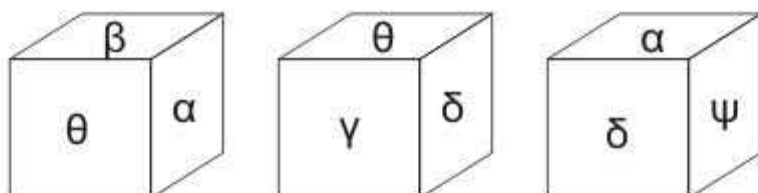
- I. Some cups are not spoon.
  - II. Some plates are not blue.
  - III. Some cups are not blue.
  - IV. Some blue are not plates.
- 1) Only conclusion (I), (III) and (IV) follow.
  - 2) Only conclusion (II) and (IV) follow.
  - 3) Only conclusion (II), (III) and (IV) follow.
  - 4) Only conclusion (I) and (IV) follow.

**Correct Answer: Only conclusion (I) and (IV) follow.**

QID : 219 -

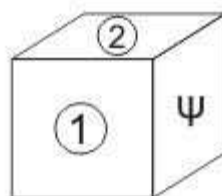
Three position of a cube are shown below.

नीचे एक घन की तीन अवस्थाएँ दर्शायी गयी हैं।



Which symbol will come on two faces marked '1 and 2'?

'1 तथा 2' अंकित दोनों फलकों पर कौन से प्रतीक चिह्न आयेंगे?



Options:

- 1) and
- 2) and
- 3) and
- 4) and

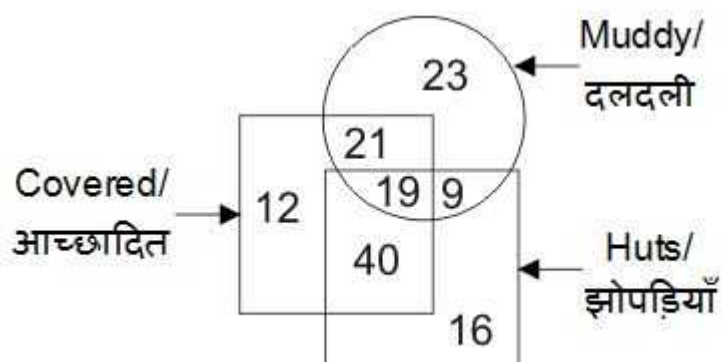
Correct Answer: and



QID : 220 -

In the given figure, how many huts are covered and muddy?

दी गई आकृति में, कितनी झोपड़ियाँ आच्छादित तथा दलदली हैं?



Options:

- 1) 28
- 2) 40
- 3) 33
- 4) 19

Correct Answer: 19

# SSC CHSL(10+2) परीक्षा अध्ययन सामग्री



- 100% CHSL Exam Syllabus Covered
- 5 Books, 900+ Pages
- 2500+ MCQs
- 1 Year Current Affairs (PDF Copy)
- Support & Guidance

**50% OFF**  
₹ 4,000/-  
₹ **1,999/-**

FREE SHIPPING

for Exam Help Call Us at: +91 8800734161

SSCPORTAL.IN

## आप क्या प्राप्त करेंगे?

- माध्यम: हिन्दी
- 100 प्रतिशत पाठ्यक्रम
- 900 से अधिक पृष्ठ
- 2500 से अधिक वस्तुनिष्ठ प्रश्न
- कुल 5 पुस्तिकाएँ
- अध्यायवार M.C.Q
- गणित एवं तार्किक क्षमता को हल करने की सरल विधि
- 5 अभ्यास प्रश्न पत्र (PDF Copy)
- हमारे विशेषज्ञों द्वारा मार्गदर्शन और सहायता

Price of the Kit:

**Rs. 4,200**

**Rs. 1,999/-**  
(Limited time Offer)

 **Buy Online**

VISA Maestro MasterCard RuPay

Net Banking

**Order Online (100% Safe)**

[Click here for Other Payment Options \(Cash/NEFT/etc\)](#)

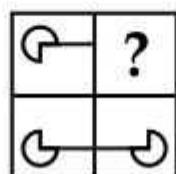
**FOR MORE DETAILS CLICK HERE**

**50% OFF**

QID : 221 -

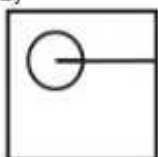
Which answer figure will complete the pattern in the question figure?

कौन सी उत्तर आकृति प्रश्न आकृति के प्रतिरूप को पूरा करेगी?

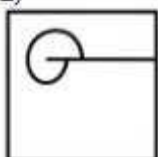


Options:

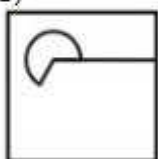
1)



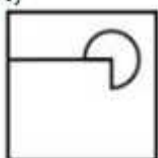
2)



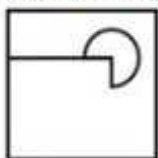
3)



4)



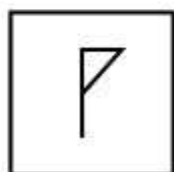
Correct Answer:



QID : 222 -


From the given answer figures, select the one in which the question figure is hidden/embedded.

दी गई उत्तर आकृतियों में से उस उत्तर आकृति को चुनिए जिस में प्रश्न आकृति निहित है।



Options:


1)




2)




3)



4)



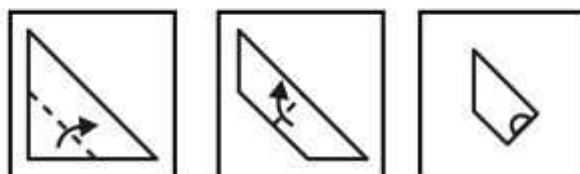
Correct Answer:



QID : 223 -

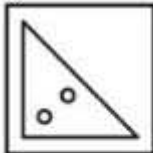
A piece of paper is folded and punched as shown below in the question figures. From the given answer figures, indicate how it will appear when opened?

नीचे के प्रश्न आकृतियों में दिखाए अनुसार कागज को मोड़कर छेदने तथा खोलने के बाद वह किस उत्तर आकृति जैसा दिखाई देगा?

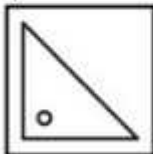


Options:

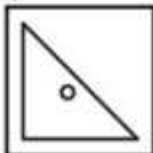
1)



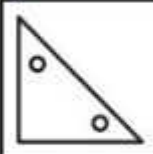
2)



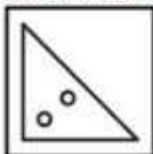
3)



4)



Correct Answer:



# SSC CHSL (10+2) Printed Study Kit



- 100% CHSL Exam Syllabus Covered
- 5 Books, 1000+ Pages
- 4500+ MCQs
- Solved Papers & Mock Tests (PDF Copy)
- 1 Year Current Affairs (PDF Copy)

**50% OFF**  
₹ 4,000/-  
₹ **1,999/-**

FREE SHIPPING

for Exam Help Call Us at: +91 8800734161

SSCPORTAL.IN

## What you will get:

- 100% CHSL Exam Syllabus Covered
- 5 Booklets
- More Than 1000+ Pages
- 4500+ MCQs
- Previous Solved Papers
- Current Affairs for Exam
- Guidance & Support from Our Experts

Price of the Kit:

Rs. 4,000

**Rs. 1,999/-**  
(Limited time Offer)

 Buy Online

VISA Maestro MasterCard RuPay

Net Banking

**Order Online (100% Safe)**

[Click here for Other Payment Options \(Cash/NEFT/etc\)](#)

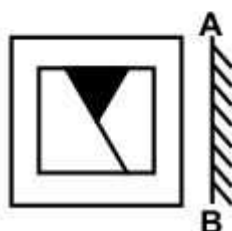
**FOR MORE DETAILS CLICK HERE**

**50% OFF**

QID : 224 -

If a mirror is placed on the line AB, then which of the answer figures is the right image of the given figure?

यदि एक दर्पण को AB रेखा पर रखा जाए, तो दी गई उत्तर आकृतियों में से कौन सी आकृति प्रश्न आकृति की सही प्रतिबिम्ब होगी?





Options:

1)



2)




3)



4)



Correct Answer:



QID : 225 -

A word is represented by only one set of numbers as given in any one of the alternatives. The sets of numbers given in the alternatives are represented by two classes of alphabets as shown in the given two matrices. The columns and rows of **Matrix-I** are numbered from 0 to 4 and that of **Matrix-II** are numbered from 5 to 9. A letter from these matrices can be represented first by its row and next by its column, for example, 'P' can be represented by 11, 23, etc., and 'K' can be represented by 65, 89, etc. Similarly, you have to identify the set for the word "TAKE".

एक शब्द केवल एक संख्या-समूह द्वारा दर्शाया गया है, जैसा कि विकल्पों में से किसी एक में दिया गया है। विकल्पों में दिए गए संख्या-समूह अक्षरों के दो वर्गों द्वारा दर्शाए गए हैं, जैसा कि दिए गए दो आव्यूहों में है। **आव्यूह-I** के स्तम्भ और पंक्ति की संख्या 0 से 4 है और **आव्यूह-II** की 5 से 9। इन आव्यूहों से एक अक्षर को पहले उसकी पंक्ति और बाद में स्तम्भ संख्या द्वारा दर्शाया जा सकता है। उदाहरण के लिए 'P' को 11, 23, आदि द्वारा दर्शाया जा सकता है तथा 'K' को 65, 89, आदि द्वारा दर्शाया जा सकता है। इसी तरह से आपको प्रश्न में दिए शब्द "TAKE" के लिए समूह को पहचानना है।

**Matrix-I****आव्यूह-I**

	0	1	2	3	4
0	A	N	S	T	P
1	T	P	A	N	S
2	N	S	T	P	A
3	P	A	N	S	T
4	S	T	P	A	N

**Matrix-II****आव्यूह-II**

	5	6	7	8	9
5	R	E	P	K	O
6	K	O	R	E	P
7	E	P	K	O	R
8	O	R	E	P	K
9	P	K	O	R	E

Options:

- 1) 10, 32, 66, 56
- 2) 41, 00, 89, 75
- 3) 03, 43, 78, 99
- 4) 22, 13, 97, 87

Correct Answer: 41, 00, 89, 75



# SSC EXAMS

## PRINTED STUDY NOTES

<a href="#">Study Material for SSC CGL (Tier-1) Examination</a>	<a href="#">English</a>	<a href="#">CLICK HERE</a>
<a href="#">Study Kit for SSC CGL (Tier-2) Exam</a>	<a href="#">English</a>	<a href="#">CLICK HERE</a>
<a href="#">Study Kit for SSC CHSL (10+2) Examination</a>	<a href="#">English</a>	<a href="#">CLICK HERE</a>
<a href="#">Study Kit for SSC Stenographers (Grade 'C' &amp; 'D')</a>	<a href="#">English</a>	<a href="#">CLICK HERE</a>
<a href="#">Study Kit for Multitasking (Non-Technical) - MTS</a>	<a href="#">English</a>	<a href="#">CLICK HERE</a>
<a href="#">Study Kit for SSC Constables (GD) Exam</a>	<a href="#">English</a>	<a href="#">CLICK HERE</a>
<a href="#">Study Kit For SSC Sub-Inspectors in Delhi Police, CAPFs, CISF</a>	<a href="#">English</a>	<a href="#">CLICK HERE</a>
<a href="#">Study Kit for SSC Junior Engineer Exam (Paper-1)</a>	<a href="#">English</a>	<a href="#">CLICK HERE</a>
<b>IAS EXAMS STUDY MATERIALS</b>		
<a href="#">Study Kit for IAS (Pre) GENERAL STUDIES Paper-1 (GS)</a>	<a href="#">English</a>	<a href="#">CLICK HERE</a>
<a href="#">Study Kit for IAS (Pre) CSAT Paper-2(Aptitude)</a>	<a href="#">English</a>	<a href="#">CLICK HERE</a>
<a href="#">सामान्य अध्ययन (GS) प्रारंभिक परीक्षा (Pre) पेपर-1</a>	<a href="#">हिन्दी</a>	<a href="#">CLICK HERE</a>
<a href="#">आई. ए. एस. (सी-सैट) प्रारंभिक परीक्षा पेपर -2</a>	<a href="#">हिन्दी</a>	<a href="#">CLICK HERE</a>
<a href="#">Gist of NCERT Study Kit For UPSC Exams</a>	<a href="#">English</a>	<a href="#">CLICK HERE</a>
<a href="#">यूपीएससी परीक्षा के लिए एनसीईआरटी अध्ययन सामग्री</a>	<a href="#">हिन्दी</a>	<a href="#">CLICK HERE</a>