

CGLE- Combined Graduate Level Tier-I, 2018 Examination

Section : General Intelligence and Reasoning

Q.1 Find the missing number from the below options.




4 6 7

5 3 ?

41 45 58

Ans  1. 12 2. 9 3. 3 4. 51**Q.2** Arrange the following words in a logical and meaningful order.

1. Kidney
2. Heart
3. Brain
4. Thyroid gland
5. Liver

Ans  1. 3, 4, 2, 5, 1 2. 3, 4, 2, 1, 5 3. 3, 2, 4, 1, 5 4. 3, 2, 4, 5, 1

Question ID : 98958013875

Status : Answered

Chosen Option : 1

Q.3

Select the figure that will come next in the following figure series.



Ans

✗ 1.



✗ 2.



✗ 3.



✓ 4.



Question ID : 98958013892

Status : Not Attempted and
Marked For Review

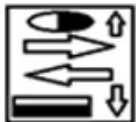
Chosen Option : --

Q.4 Select the correct mirror image of the given figure when a vertical mirror is placed on the right of the figure.



Ans

✓ 1.



✗ 2.



✗ 3.



✗ 4.



Q.5 Select the word-pair in which the two words are related in the same way as the two words in the following word-pair.

Walnut : Fig

Ans

✗ 1.

Asafoetida : Cashew nuts

✗ 2.

Turmeric : Spices

✓ 3. Raisin : Apricot

✗ 4. Almond : Dry fruits

Q.6 'Insulin' is related to 'Hormone' in the same way as 'Pepsin' is related to '_____'.

Ans ✗ 1. Vitamins

✗ 2. Stomach

✓ 3. Enzymes

✗ 4. Digestion

Q.7 Select the letter cluster that will come next in the following series.
ADH, XAE, UXB, RUY, ?

Ans ✗ 1. OSV

✓ 2. ORV

✗ 3. ORU

✗ 4. PRV

Q.8 Find the missing number from the below options.

9 25 49

6 11 13

9 16 ?

Ans ✗ 1. 19

✓ 2. 20

✗ 3. 21

✗ 4. 18

Q.9

Given below is a transparent sheet of paper with a pattern on the left and right side. How will the pattern appear when the transparent sheet is folded on the dotted line?

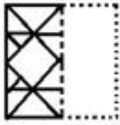


Ans

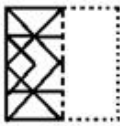
☒ 1.



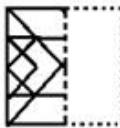
☒ 2.



☒ 3.



☒ 4.



Q.10 Select the option that is related to the third number in the same way as the second number is related to the first number.

16 : 240 :: 6 : ?

Ans ☒ 1. 30

☒ 2. 25

☒ 3. 40

☒ 4. 35

Q.11 Three of the following four words are alike in a certain way and one is different. Pick the odd word out.

Ans ☒ 1. Truthfulness

☒ 2. Integrity

☒ 3. Honesty

☒ 4. Hypocrisy

Q.12 Three of the following four letter-clusters are alike in a certain way and one is different. Pick the odd one out.

Ans ☒ 1. PUYBD

☒ 2. JOSVX

SSC Constable (GD) Exam Study Kit



- ▶ 100% Written Exam Syllabus
- ▶ 700+ Pages, Printed Books
- ▶ 1500 MCQ, 8 Books
- ▶ Practice Question Papers
- ▶ 1 Year Current Affairs

50% OFF
~~₹ 3,200/-~~
₹ 1599/-



 **100% SAFE**

for Exam Help Call Us at: +91 8800734161

IAS EXAM PORTAL

What you will get:

- 100% Syllabus Covered
- 8 Booklets
- 700+ Pages
- Five Practice Papers
- One Year Current Affairs
- Current Affairs for Exam
- Guidance & Support from Our Experts

Price of the Kit:

~~Rs. 3,200~~

Rs. 1,599/-
(Limited time Offer)




Net Banking

Order Online (100% Safe)

[Click here for Other Payment Options \(Cash/NEFT/etc\)](#)

FOR MORE DETAILS CLICK HERE



 3. E J N Q S


 4. T Y B E G


Q.13 Select the number that will replace ? in the following series.

120, 128, 144, 168, ?, 240

Ans  1. 202


 2. 216


 3. 200

 4. 208

Q.14 A + B means 'A is the mother of B'
A – B means 'A is the father of B'
A × B means 'A is the sister of B'
A ÷ B means 'A is the daughter of B'

If $P + R \times T - Q \div S + U$, then how is S related to T?

Ans  1. Daughter


 2. Sister


 3. Wife


 4. Mother

Q.15 Three of the following four number-pairs are alike in a certain way and one is different. Pick the odd one out.

Ans  1. 2 : 4

 2. 14 : 196

 3. 12 : 244

 4. 4 : 16

Q.16 In a code language, SELECTION is written as ESELDITNO. How will NOSTALGIA be written in the same language?

Ans  1. NOTSBLGAI

✓ 2. ONTSBGLAI

✗ 3. ONSTBGLAI

✗ 4. ONTSZGLAI

Q.17 The sum of the current ages of Natasha and Krishna is 50 years. 10 years ago, Krishna was twice as old as Natasha. What is Krishna's current age?

Ans ✓ 1. 30 years

✗ 2. 20 years

✗ 3. 15 years

✗ 4. 10 years

Q.18 How many triangles are there in the figure given below?



Ans ✗ 1. 36

✓ 2. 30

✗ 3. 32

✗ 4. 24

Q.19 Which two signs should be interchanged to make the given equation correct?

$$27 \div 3 - 18 + 3 \times 2 = 18$$

Ans ✗ 1. + and -

✓ 2. + and ÷

✗ 3. × and +

✗ 4. ÷ and ×

Q.20

Select the term that will replace the question mark (?) in the following series.

A, G, L, ?, S, U, V

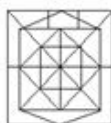
- Ans
- ☒ 1. N
 - ☒ 2. Q
 - ☒ 3. P
 - ☒ 4. O

Q.21 Select the figure in which the given figure is embedded.
(Rotation is not allowed)

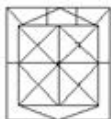


Ans

☒ 1.



☒ 2.



☒ 3.



☒ 4.

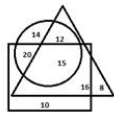


Q.22 In a code language, if PICTURE is coded as 16932021185 then how will FUNCTION be coded in the same language?

- Ans
- ☒ 1. 6211432091413
 - ☒ 2. 6211432091514
 - ☒ 3. 6211332091513
 - ☒ 4. 6211432081514

Q.23

In the Venn diagram given below, the circle represents 'Ladies', the triangle represents 'Constables' and the square represents 'Married persons'. The numbers given in the diagram represents number of persons of that particular category.



How many lady constables are NOT married?

- Ans
- ☒ 1. 14
 - ☒ 2. 8
 - ☒ 3. 15
 - ☒ 4. 12

Q.24 Two statements are given, followed by three conclusions numbered I, II and III. Assuming the statements to be true, even if they seem to be at variance with commonly known facts, decide which of the conclusions logically follow(s) from the statements.

Statements:

All squirrels are lizards.

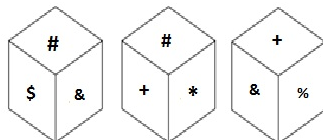
All lizards are goose.

Conclusions:

- I. Some squirrels are not goose.
- II. Some lizards are squirrels.
- III. Some goose are squirrels.

- Ans
- ☒ 1. Conclusions I and II follow
 - ☒ 2. Conclusions I, II and III follow
 - ☒ 3. Conclusions II and III follow
 - ☒ 4. Conclusions I and III follow

Q.25 Three different positions of the same dice are shown below. Which symbol is on the face opposite the face showing '*'?



- Ans
- ☒ 1. %
 - ☒ 2. #
 - ☒ 3. +
 - ☒ 4. &



SSC EXAMS PRINTED STUDY NOTES

Study Material for SSC CGL (Tier-1) Examination	English	CLICK HERE
Study Kit for SSC CGL (Tier-2) Exam	English	CLICK HERE
Study Kit for SSC CHSL (10+2) Examination	English	CLICK HERE
Study Kit for SSC Stenographers (Grade 'C' & 'D')	English	CLICK HERE
Study Kit for Multitasking (Non-Technical) - MTS	English	CLICK HERE
Study Kit for SSC Constables (GD) Exam	English	CLICK HERE
Study Kit For SSC Sub-Inspectors in Delhi Police, CAPFs, CISF	English	CLICK HERE
Study Kit for SSC Junior Engineer Exam (Paper-1)	English	CLICK HERE
IAS EXAMS STUDY MATERIALS		
Study Kit for IAS (Pre) GENERAL STUDIES Paper-1 (GS)	English	CLICK HERE
Study Kit for IAS (Pre) CSAT Paper-2(Aptitude)	English	CLICK HERE
सामान्य अध्ययन (GS) प्रारंभिक परीक्षा (Pre) पेपर-1	हिन्दी	CLICK HERE
आई. ए. एस. (सी-सैट) प्रारंभिक परीक्षा पेपर -2	हिन्दी	CLICK HERE
Gist of NCERT Study Kit For UPSC Exams	English	CLICK HERE
यूपीएससी परीक्षा के लिए एनसीईआरटी अध्ययन सामग्री	हिन्दी	CLICK HERE