

**SSC CGL 2017 EXAM PAPER : Held on 08-AUG-2017
Shift-3
(Reasoning)**

QID : 201 - In the following question, select the related word from the given alternatives.

Vacant : Empty :: Dearth : ?

Options:

- 1) Descend
- 2) Scarcity
- 3) Squander
- 4) Abundant

Correct Answer: Scarcity

QID : 202 - In the following question, select the related letters from the given alternatives.

HMPU : IOSY :: GMRF : ?

Options:

- 1) FKOB
- 2) HOUJ
- 3) HPUJ

4) HOJU

Correct Answer: HOUJ

QID : 203 - In the following question, select the related number from the given alternatives.

50 : 65 :: 122 : ?

Options:

1) 157

2) 145

3) 147

4) 155

Correct Answer: 145

QID : 204 - In the following question, select the odd word pair from the given alternatives.

Options:

1) Venus : Planet

2) Moon : Satellite

3) Jupiter : Black Hole

4) Sun : Star

Correct Answer: Jupiter : Black Hole

QID : 205 - In the following question, select the odd letters from the given alternatives.

Options:

1) KQ

2) DJ

3) SZ

4) RX

Correct Answer: SZ

QID : 206 - In the following question, select the odd number from the given alternatives.

Options:

1) 361

2) 441

3) 784

4) 876

Correct Answer: 876

QID : 207 - Arrange the given words in the sequence in which they occur in the dictionary.

1. Herbivorous
2. Harmony
3. House
4. Honour
5. Helm

Options:

- 1) 12543
- 2) 25143
- 3) 21534
- 4) 12354

Correct Answer: 25143

QID : 208 - A series is given with one term missing. Select the correct alternative from the given ones that will complete the series.

A, C, E, G, ?

Options:

- 1) H
- 2) I
- 3) J
- 4) F

Correct Answer: I

QID : 209 - In the following question, select the missing number from the given series.

2, 4, 13, 41, 106, ?

Options:

- 1) 172
- 2) 191
- 3) 219

4) 232

Correct Answer: 232

QID : 210 - Hitesh, Sunny, Vicky, Nitin and Bharat are arranged in ascending order of the height from the top. Hitesh is at third place. Bharat is between Nitin and Hitesh while Nitin is not at the bottom. Who has the maximum height among them?

Options:

- 1) Hitesh
- 2) Sunny
- 3) Vicky
- 4) Nitin

Correct Answer: Nitin

QID : 211 - If 'A + B' means 'A is father of B', 'A – B' means 'A is mother of B', 'A * B' means 'A is brother of B' and 'A % B' means 'A is sister of B', then how is Q related to S in 'P + Q * R – S'?

Options:

- 1) Husband
- 2) Uncle
- 3) Brother
- 4) Father

Correct Answer: Uncle

QID : 212 - In the following question, from the given alternative words, select the word which cannot be formed using the letters of the given word.

Abandoned

Options:

- 1) Bonded
- 2) Banded
- 3) Bland
- 4) Bane

Correct Answer: Bland

QID : 213 - In a certain code language, "REMOTE" is written as "KYSPGS" and "BRAND" is written as "IRDTC". How is "MOBILE" written in that code language?

SSC CGL Tier-1 Printed Study Kit



- 100% Syllabus Covered
- 12 Books , 1300+ Pages
- 5600+ MCQs
- 08 Year Solved Papers & Mock Tests (PDF Copy)
- 1 year Current Affairs (PDF Copy)

50% OFF

~~₹ 6,000/-~~
₹ 2,999/-

FREE SHIPPING

for Exam Help Call Us at: +91 8800734161

SSCPORTAL.IN

What you will get:

- 100% Syllabus Covered
- 12 Books
- 1300+ Pages
- 5600+ MCQs
- 8 Year Solved Papers (PDF Copy)
- Five Practice Papers (PDF Copy)
- One Year Current Affairs (PDF Copy)
- Guidance & Support from Our Experts

Price of the Kit:

Rs. 6,000

Rs. 2,999/-
(Limited time Offer)



Buy Online



Net Banking

Order Online (100% Safe)

[Click here for Other Payment Options \(Cash/NEFT/etc\)](#)

[FOR MORE DETAILS CLICK HERE](#)

50% OFF

Options:

- 1) FMJCPN
- 2) KQMEQN
- 3) DKHANL
- 4) DMHCNN

Correct Answer: KQMEQN

QID : 214 - If "÷" denotes "multiplied by", "+" denotes "subtracted from", "x" denotes "added to" and "-" denotes "divided by", then

$$12 - 6 + 28 \times 3 \div 9 = ?$$

Options:

- 1) -24
- 2) 1
- 3) -53
- 4) 8

Correct Answer: 1

QID : 215 - If 19 (36) 13 and 37 (81) 28, then what is the value of 'A' in 43 (A) 38?

Options:

- 1) 49
- 2) 25
- 3) 34
- 4) 64

Correct Answer: 25

QID : 216 -

In the following question, select the number which can be placed at the sign of question mark (?) from the given alternatives.

निम्नलिखित प्रश्न में दिए गए विकल्पों में से प्रश्न चिन्ह (?) के स्थान पर आने वाली संख्या को चुनिए।

3	7
2	4

8	3
1	7

1	6
2	?

Options:

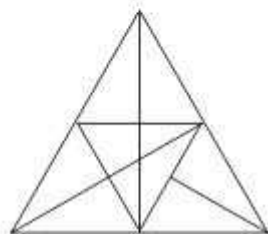
- 1) 2
- 2) 7
- 3) 14
- 4) 28

Correct Answer: 14

QID : 217 -

How many triangles are there in the given figure?

दी गई आकृति में कितने त्रिभुज हैं?



Options:

- 1) 24
- 2) 30
- 3) 28

4) 29

Correct Answer: 29

QID : 218 - In each of the following question below are given some statements followed by some conclusions. Taking the given statements to be true even if they seem to be at variance from commonly known facts, read all the conclusions and then decide which of the given conclusion logically follows the given statements.

Statements:

- I. All insects are dangerous.
- II. All machines are dangerous.

Conclusions:

- I. All dangerous are insects.
- II. All dangerous are machines.
- III. Some machines are insects.

Options:

- 1) Only conclusion (I) follows.
- 2) Only conclusion (II) follows.
- 3) Only conclusion (III) follows.
- 4) No conclusion follows.

Correct Answer: No conclusion follows.

QID : 219 -

कर्मचारी चयन आयोग (CGL) परीक्षा अध्ययन सामग्री



- 100% Syllabus Covered
- 4 Books, 900+ Pages
- 2500+ MCQs
- 08 Year Solved Papers & Mock Tests (PDF Copy)
- 1 year Current Affairs (PDF Copy)

50% OFF

~~₹ 4,200/-~~
₹ 2,100/-

FREE SHIPPING

for Exam Help Call Us at: +91 8800734161

SSCPORTAL.IN

आप क्या प्राप्त करेंगे?

- माध्यम: हिन्दी
- 100% पाठ्यक्रम
- कुल 4 पुस्तिकायें, 900 से अधिक पृष्ठ
- 2,500 से अधिक वस्तुनिष्ठ प्रश्न (MCQ)
- 8 Year Solved Papers (PDF Copy)
- Five Practice Papers (PDF Copy)
- हमारे विशेषज्ञों द्वारा मार्गदर्शन और सहायता

Price of the Kit:

Rs. 4,200

Rs. 2,100/-
(Limited time Offer)

Buy Online

Net Banking

Order Online (100% Safe)

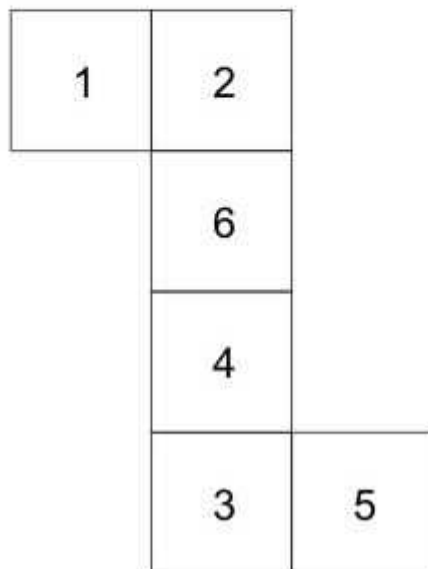
[Click here for Other Payment Options \(Cash/NEFT/etc\)](#)

FOR MORE DETAILS CLICK HERE

50% OFF

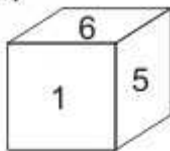
From the given options, which answer figure can be formed by folding the figure given in the question?

निम्नलिखित विकल्पों में से कौन सी उत्तर आकृति प्रश्न में दी गई आकृति को मोड़कर बनाई जा सकती है?

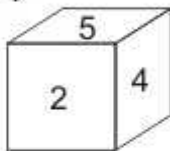


Options:

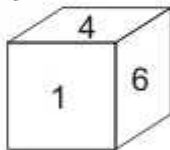
1)



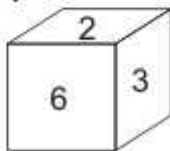
2)



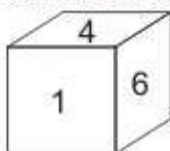
3)



4)



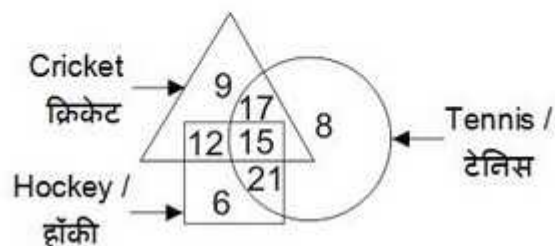
Correct Answer:



QID : 220 -

In the given figure, how many people like cricket and tennis both?

दी गई आकृति में, कितने लोग क्रिकेट तथा टेनिस दोनों पसंद करते हैं?



Options:

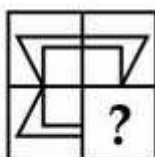
- 1) 17
- 2) 32
- 3) 15
- 4) 27

Correct Answer: 32

QID : 221 -

Which answer figure will complete the pattern in the question figure?

कौन सी उत्तर आकृति प्रश्न आकृति के प्रतिरूप को पूरा करेगी?



SSC CHSL (10+2) Printed Study Kit



- 100% CHSL Exam Syllabus Covered
- 5 Books, 1000+ Pages
- 4500+ MCQs
- Solved Papers & Mock Tests (PDF Copy)
- 1 Year Current Affairs (PDF Copy)

50% OFF
~~₹ 4,000/-~~
₹ 1,999/-

FREE SHIPPING

for Exam Help Call Us at: +91 8800734161

SSCPORTAL.IN

What you will get:

- 100% CHSL Exam Syllabus Covered
- 5 Booklets
- More Than 1000+ Pages
- 4500+ MCQs
- Previous Solved Papers
- Current Affairs for Exam
- Guidance & Support from Our Experts

Price of the Kit:

Rs. 4,000

Rs. 1,999/-
(Limited time Offer)

 **Buy Online**

Net Banking

Order Online (100% Safe)

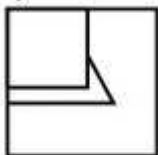
[Click here for Other Payment Options \(Cash/NEFT/etc\)](#)

[FOR MORE DETAILS CLICK HERE](#)

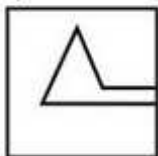
50% OFF

Options:

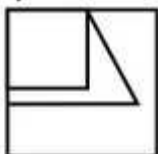
1)



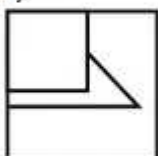
2)



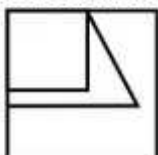
3)



4)



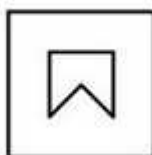
Correct Answer:



QID : 222 -

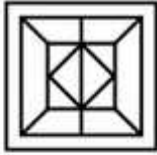
From the given answer figures, select the one in which the question figure is hidden/embedded.

दी गई उत्तर आकृतियों में से उस उत्तर आकृति को चुनिए जिस में प्रश्न आकृति निहित है।



Options:

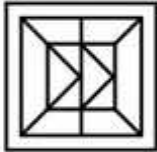
1)



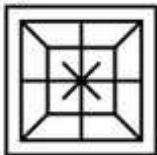
2)



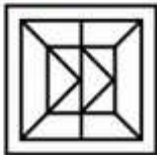
3)



4)



Correct Answer:



QID : 223 -

A piece of paper is folded and punched as shown below in the question figures. From the given answer figures, indicate how it will appear when opened?

नीचे के प्रश्न आकृतियों में दिखाए अनुसार कागज को मोड़कर छेदने तथा खोलने के बाद वह किस उत्तर आकृति जैसा दिखाई देगा?



SSC CHSL(10+2) परीक्षा अध्ययन सामग्री



- 100% CHSL Exam Syllabus Covered
- 5 Books, 900+ Pages
- 2500+ MCQs
- 1 Year Current Affairs (PDF Copy)
- Support & Guidance

50% OFF
₹ 4,000/-
₹ **1,999/-**

FREE SHIPPING

for Exam Help Call Us at: +91 8800734161

SSCPORTAL.IN

आप क्या प्राप्त करेंगे?

- माध्यम: हिन्दी
- 100 प्रतिशत पाठ्यक्रम
- 900 से अधिक पृष्ठ
- 2500 से अधिक वस्तुनिष्ठ प्रश्न
- कुल 5 पुस्तिकाएँ
- अध्यायवार M.C.Q
- गणित एवं तार्किक क्षमता को हल करने की सरल विधि
- 5 अभ्यास प्रश्न पत्र (PDF Copy)
- हमारे विशेषज्ञों द्वारा मार्गदर्शन और सहायता

Price of the Kit:

Rs. 4,200

Rs. 1,999/-
(Limited time Offer)

 **Buy Online**

Net Banking

Order Online (100% Safe)

[Click here for Other Payment Options \(Cash/NEFT/etc\)](#)

FOR MORE DETAILS CLICK HERE

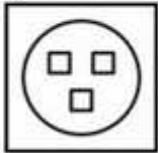
50% OFF

Options:

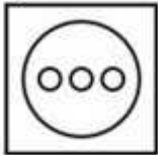
1)



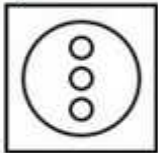
2)



3)



4)



Correct Answer:



QID : 224 -

If a mirror is placed on the line AB, then which of the answer figures is the right image of the given figure?

यदि एक दर्पण को AB रेखा पर रखा जाए, तो दी गई उत्तर आकृतियों में से कौन सी आकृति प्रश्न आकृति की सही प्रतिबिम्ब होगी?



Options:

1)



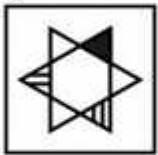
2)



3)



4)



Correct Answer:



QID : 225 -

SSC Constable (GD) Exam Study Kit



- ▶ 100% Written Exam Syllabus
- ▶ 700+ Pages, Printed Books
- ▶ 1500 MCQ, 8 Books
- ▶ Practice Question Papers
- ▶ 1 Year Current Affairs

50% OFF
~~₹ 3,200/-~~
₹ 1599/-



 **100% SAFE**

for Exam Help Call Us at: **+91 8800734161**

IAS EXAM PORTAL

What you will get:

- 100% Syllabus Covered
- 8 Booklets
- 700+ Pages
- Five Practice Papers
- One Year Current Affairs
- Current Affairs for Exam
- Guidance & Support from Our Experts

Price of the Kit:

~~Rs. 3,200~~

Rs. 1,599/-
(Limited time Offer)



Net Banking


Order Online (100% Safe)

[Click here for Other Payment Options \(Cash/NEFT/etc\)](#)

FOR MORE DETAILS CLICK HERE



SSC CGL Tier-2 Study Kit



- 100% Syllabus Covered
- 3 Books, 750+ Pages
- 2000+ MCQs
- 5 Mock Practice Tests (PDF Copy)
- 1 year Current Affairs (PDF Copy)



~~₹ 6,000/-~~
₹ 1,999/-

>>>>  [Click Here for More Details](#)

[CLICK HERE](#)

 SSCPORTAL.IN

What you will get:

- 100% Syllabus Covered
- 3 Booklets
- 750+ Pages
- 2,000+ MCQs
- 5 Practice Papers also provided
- One Year Current Affairs (PDF Copy)
- Guidance & Support from Our Experts

Price of the Kit:

~~Rs. 6,000~~

Rs. 1,999/-
(Limited time Offer)



[Buy Online](#)



Net **Banking**

[CLICK HERE FOR MORE DETAILS](#)

Order Online (100% Safe)

[Click here for Other Payment Options \(Cash/NEFT/etc\)](#)

**50%
OFF**

[CLICK HERE](#)

A word is represented by only one set of numbers as given in any one of the alternatives. The sets of numbers given in the alternatives are represented by two classes of alphabets as shown in the given two matrices. The columns and rows of **Matrix-I** are numbered from 0 to 4 and that of **Matrix-II** are numbered from 5 to 9. A letter from these matrices can be represented first by its row and next by its column, for example, 'O' can be represented by 30, 23, etc., and 'D' can be represented by 76, 88, etc. Similarly, you have to identify the set for the word "POND".

एक शब्द केवल एक संख्या-समूह द्वारा दर्शाया गया है, जैसा कि विकल्पों में से किसी एक में दिया गया है। विकल्पों में दिए गए संख्या-समूह अक्षरों के दो वर्गों द्वारा दर्शाए गए हैं, जैसा कि दिए गए दो आव्यूहों में है। आव्यूह-I के स्तम्भ और पंक्ति की संख्या 0 से 4 है और आव्यूह-II की 5 से 9। इन आव्यूहों से एक अक्षर को पहले उसकी पंक्ति और बाद में स्तम्भ संख्या द्वारा दर्शाया जा सकता है। उदाहरण के लिए 'O' को 30, 23, आदि द्वारा दर्शाया जा सकता है तथा 'D' को 76, 88, आदि द्वारा दर्शाया जा सकता है। इसी तरह से आपको प्रश्न में दिए शब्द "POND" के लिए समूह को पहचानना है।

Matrix-I**आव्यूह-I**

	0	1	2	3	4
0	P	G	H	L	O
1	L	O	P	G	H
2	G	H	L	O	P
3	O	P	G	H	L
4	H	L	O	P	G

Matrix-II**आव्यूह-II**

	5	6	7	8	9
5	N	T	D	S	U
6	S	U	N	T	D
7	T	D	S	U	N
8	U	N	T	D	S
9	D	S	U	N	T

Options:

- 1) 00, 04, 67, 57
- 2) 23, 12, 86, 69
- 3) 43, 24, 98, 95
- 4) 30, 42, 55, 87

Correct Answer: 00, 04, 67, 57



SSC EXAMS

PRINTED STUDY NOTES

Study Material for SSC CGL (Tier-1) Examination	English	CLICK HERE
Study Kit for SSC CGL (Tier-2) Exam	English	CLICK HERE
Study Kit for SSC CHSL (10+2) Examination	English	CLICK HERE
Study Kit for SSC Stenographers (Grade 'C' & 'D')	English	CLICK HERE
Study Kit for Multitasking (Non-Technical) - MTS	English	CLICK HERE
Study Kit for SSC Constables (GD) Exam	English	CLICK HERE
Study Kit For SSC Sub-Inspectors in Delhi Police, CAPFs, CISF	English	CLICK HERE
Study Kit for SSC Junior Engineer Exam (Paper-1)	English	CLICK HERE
IAS EXAMS STUDY MATERIALS		
Study Kit for IAS (Pre) GENERAL STUDIES Paper-1 (GS)	English	CLICK HERE
Study Kit for IAS (Pre) CSAT Paper-2(Aptitude)	English	CLICK HERE
सामान्य अध्ययन (GS) प्रारंभिक परीक्षा (Pre) पेपर-1	हिन्दी	CLICK HERE
आई. ए. एस. (सी-सैट) प्रारंभिक परीक्षा पेपर -2	हिन्दी	CLICK HERE
Gist of NCERT Study Kit For UPSC Exams	English	CLICK HERE
यूपीएससी परीक्षा के लिए एनसीईआरटी अध्ययन सामग्री	हिन्दी	CLICK HERE