



Section : General Intelligence and Reasoning

**Q.1** Select the set in which the numbers are related in the same way as are the numbers of the following set.

(8, 12, 24)

- Ans**
- 1. (12, 20, 40)
  - 2. (9, 18, 27)
  - 3. (6, 9, 18)
  - 4. (6, 10, 18)

**Q.2** Three of the following four numbers are alike in a certain way and one is different. Pick the number that is different from the rest.

- Ans**
- 1. 65
  - 2. 217
  - 3. 28
  - 4. 338

**Q.3** Which number will replace the question mark (?) in the following series?

98, 95, 86, 82, 66, ?, 36

- Ans**
- 1. 58
  - 2. 63
  - 3. 61
  - 4. 60

**Q.4** Three of the following four words are alike in a certain way and one is different. Pick the odd word out.

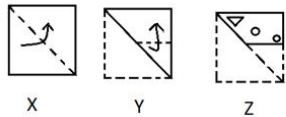
- Ans**
- 1. Mahanadi

- 2. Godavari
- 3. Krishna
- 4. Tapti

**Q.5** In a code language, COMPUTER is written as OCREPMTU. How will DAUGHTER be written in the same language?

- Ans**
- 1. ADTHREGU
  - 2. ADERUGTH
  - 3. ADREGUTH
  - 4. READTHGU

**Q.6** The sequence of folding a piece of square paper (figures X and Y) and the manner in which the folded paper has been cut (figure Z) are shown. How will the paper appear when unfolded?

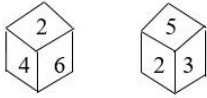


- Ans**
- 1.
  - 2.
  - 3.
  - 4.

**Q.7** If CAB is coded as 6 and BED is coded as 40, then how will HAD be coded as?

- Ans**
- 1. 52
  - 2. 46
  - 3. 32
  - 4. 16

**Q.8** Two different positions of the same dice are shown. Which number will be at the top if 4 is at the bottom?



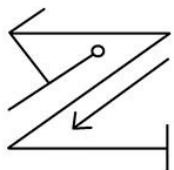
- Ans
- 1. 6
  - 2. 3
  - 3. 5
  - 4. 1

**Q.9** Select the number-pair in which the two numbers are related in the same way as are the two numbers of the following number-pair.

7 : 32

- Ans
- 1. 13 : 98
  - 2. 12 : 85
  - 3. 3 : 11
  - 4. 16 : 145

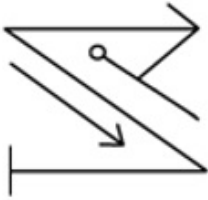
**Q.10** Select the correct mirror image of the given figure when the mirror is placed to the right of the figure.



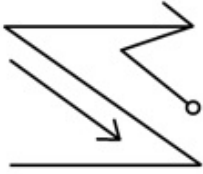
Ans

- 1.
- 2.

✓ 3.



✗ 4.



Q.11 Arrange the following words in a logical and meaningful order.

1. Student
2. Job
3. Interview
4. Education
5. Retirement
6. Degree

- Ans
- ✓ 1. 1, 4, 6, 3, 2, 5
  - ✗ 2. 1, 5, 3, 6, 4, 2
  - ✗ 3. 5, 3, 2, 1, 4, 6
  - ✗ 4. 3, 5, 4, 6, 1, 2

Q.12 Select the option that is related to the third letter-cluster in the same way as the second letter-cluster is related to the first letter-cluster.

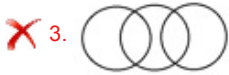
MNOP : LONQ :: FGHI : ?

- Ans
- ✗ 1. EGHJ
  - ✓ 2. EHGJ
  - ✗ 3. DHGK
  - ✗ 4. GFIJ

**Q.13** Select the Venn diagram that best illustrates the relationship between the following classes.

Snakes, Reptiles, Poisonous

**Ans**



**Q.14** Two statements are given followed by three conclusions numbered I, II and III. Assuming the statements to be true even if they seem to be at variance with commonly known facts, decide which of the conclusions logically follow(s) from the statements.

**Statements:**

No crow is a bird.

All birds are animals.

**Conclusions:**

I. Some animals are crows.

II. Some animals are birds.

III. No animal is a crow.

**Ans**

1. Only conclusion III follows

2. Only conclusions I and III follow

3. None of the conclusions follows

4. Conclusion II and either conclusion I or III follows

**Q.15** Two mixtures contain milk and juice in the ratio of 2 : 1 and 4 : 5. If equal volumes of the two mixtures are mixed together, what would be ratio of milk to juice in the resulting mixture?

**Ans**

1. 1 : 1

2. 5 : 3

3. 5 : 4

4. 7 : 5

# Study Kit for SSC Stenographers (Grade 'C' & 'D') Examination (Paper - 1)



- Medium: English
- 100% Syllabus Covered
- 3000 + MCQs
- 700+ Pages

**SPECIAL  
OFFER**

**Only**  
~~MRP ₹ 3000/-~~  
**Offer ₹ 1499/-**

[Click Here for More Details](#)

## What you will get:

- 100% Syllabus Covered
- 6 Booklets
- 700+ Pages
- 3000+ MCQs
- Five Practice Papers
- One Year Current Affairs
- Guidance & Support from Our Experts

Price of the Kit:

~~Rs. 3,000~~

**Rs. 1,499/-**  
(Limited time Offer)



Net Banking

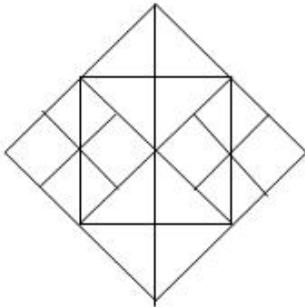
[FOR MORE DETAILS CLICK HERE](#)

[Order Online \(100% Safe\)](#)

[Click here for Other Payment Options \(Cash/NEFT/etc\)](#)

**50%  
OFF**

Q.16 How many squares are there in the following figure?



- Ans
- 1. 16
  - 2. 14
  - 3. 18
  - 4. 12

Q.17 Select the option in which the given figure is embedded.



(X)

Ans

- 1.
- 2.
- 3.
- 4.

**Q.18** 'Cinema' is related to 'Audience' in the same way as 'Church' is related to '\_\_\_\_\_':

- Ans**
- 1. Concentration
  - 2. Prayer
  - 3. Congregation
  - 4. Meditation

**Q.19** Select the set in which the numbers are related in the same way as are the numbers of the following set.

(5, 13, 12)

- Ans**
- 1. (6, 10, 8)
  - 2. (11, 15, 9)
  - 3. (13, 17, 11)
  - 4. (15, 19, 13)

**Q.20** Select the combination of letters that when sequentially placed in the gaps of the given letter series will complete the series.

bac\_cab\_cd\_a\_ac\_ca

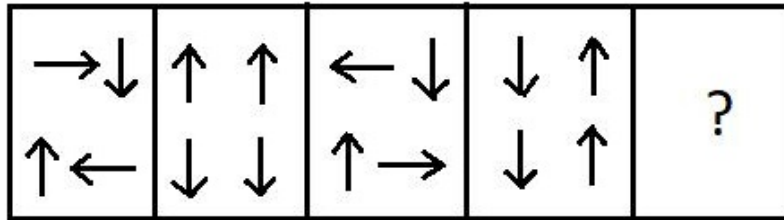
- Ans**
- 1. cadbc
  - 2. dacbd
  - 3. dcbac
  - 4. bdabc

**Q.21** Three of the following four letter-clusters are alike in a certain way and one is different. Pick the odd one out.

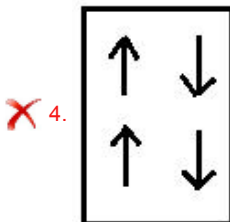
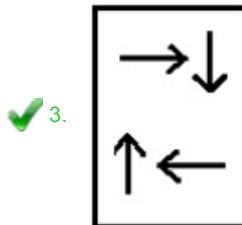
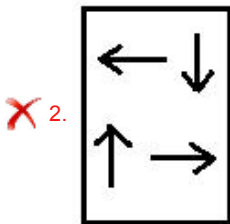
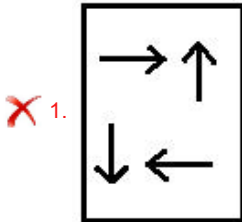
- Ans**
- 1. MLNO
  - 2. CBDE
  - 3. FGHJ
  - 4. RQST



Q.22 Select the figure that will come next in the following figure series.



Ans



Q.23 Which two signs should be interchanged in the following equation to make it correct?

$$10 + 5 \div 10 \times 8 - 10 = 16$$

- Ans
- ✗ 1. × and +
  - ✗ 2. + and ÷
  - ✗ 3. ÷ and ×
  - ✓ 4. - and +

**Q.24** Select the word-pair in which the two words are related in the same way as are the two words in the following word-pair.

Apathy : Enthusiasm

- Ans**
- 1. Treaty : Friendship
  - 2. Enrolment : Employment
  - 3. Condemnation : Reverence
  - 4. War : Attack

**Q.25** D is the son of C and the brother of E, who is the niece of F. C is the sister of B and the aunt of A. B's father has two children, a son and a daughter. If A is the son of F, how is F related to C?

- Ans**
- 1. Aunt
  - 2. Sister
  - 3. Sister-in-law
  - 4. Cousin

<a href="#">6VXG 0 DMUDCI RU66&amp; &amp;* / 7IHU ([ DP LQDMRQ</a>	<a href="#">( QJQK</a>	
<a href="#">6VXG . LWRU66&amp; &amp;* / 7IHU ([ DP</a>	<a href="#">( QJQK</a>	
<a href="#">6WXG\ .LW IRU 66&amp; &amp;+6/ ([DPLQDWLF</a>	<a href="#">( QJQK</a>	
<a href="#">6WXG\ .LW IRU 66&amp; 6WHQRJUDSKHUV *UD</a>	<a href="#">( QJQK</a>	
<a href="#">6WXG\ .LW IRU 0XOWHW<del>QNEQQ</del> 1RQ67</a>	<a href="#">( QJQK</a>	
<a href="#">6WXG\ .LW IRU 66&amp; &amp;RQVWDEOHV *' ([DF</a>	<a href="#">( QJQK</a>	
<a href="#">6WXG\ .LW )RU 66&amp; 6XE ,QVSHFWRUUV LQ</a>	<a href="#">( QJQK</a>	
<a href="#">6WXG\ .LW IRU 66&amp; -XQLRU (QJLQHHU ([D</a>	<a href="#">( QJQK</a>	
<b>,\$6 ( ; \$06 678' &lt; 0\$7( 5,\$/ 6</b>		
<a href="#">6VXG . LWRU,\$6 3UH * (1(5\$/ 678' ,(6 3DSHU * 6</a>	<a href="#">( QJQK</a>	
<a href="#">6VXG . LWRU,\$6 3UH &amp;6\$7 3DSHU \$SWXGH</a>	<a href="#">( QJQK</a>	
<a href="#">- -J æ/ * 6 n- C ø 1- 3UH 8</a>	. = 1	
<a href="#">ç é ð ð 1 9 n- C. ø 1- 8</a>	. = 1	
<a href="#">* LWRI 1&amp;(57 6VXG . LW RU836&amp; ([DPV</a>	<a href="#">( QJQK</a>	
<a href="#">3ð 1 1-ø8. ð ð 1é ç 1æ/ - d1</a>	. = 1	