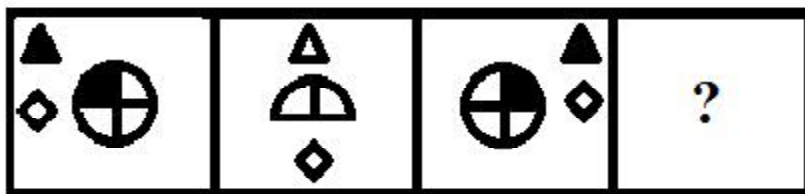
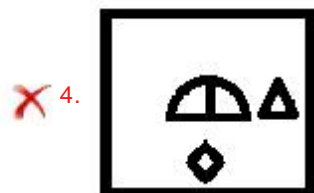
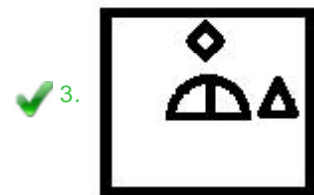


Q.1 Select the figure that can replace the question mark (?) in the following series.



Ans



Q.2 Select the option in which the words share the same relationship as that shared by

Player : Team

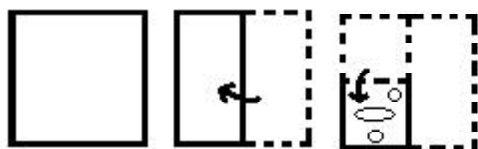
Ans ✗ 1. Purpose : Crowd

✗ 2. Student : Teacher

✓ 3. Flower : Bouquet

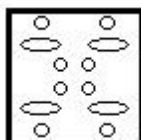
✗ 4. Ant : Bee

Q.3 The sequence of folding a piece of paper and the manner in which the folded paper following figures. How would this paper look when unfolded?

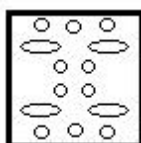


Ans

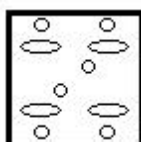
✓ 1.



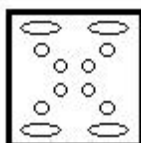
✗ 2.



✗ 3.



✗ 4.



Q.4 Four number-pairs have been given, out of which three are alike in some manner and one number-pair that is different from the rest.

Ans

✓ 1. 5121 : 12

✗ 2. 7456 : 22

✗ 3. 8101 : 10

✗ 4. 4209 : 15

Q.5 Select the number that can replace the question mark (?) in the following series.

45, 47, 53, 65, 85, ?

Ans

✓ 1. 115

✗ 2. 130

✗ 3. 105

✗ 4. 145

Q.6	Select the option that is related to the third number in the same way as the second number is related to the first number. $13 : 109 :: 24 : ?$
Ans	<input type="checkbox"/> 1. 201
	<input checked="" type="checkbox"/> 2. 197
	<input type="checkbox"/> 3. 216
	<input type="checkbox"/> 4. 194
Q.7	Which two signs and two numbers should be interchanged to make the given equation correct? $28 - 32 \div 2 \times 8 + 34 = 132$
Ans	<input type="checkbox"/> 1. $\times$ and $-$ ; 32 and 34
	<input type="checkbox"/> 2. $+$ and $-$ ; 28 and 32
	<input checked="" type="checkbox"/> 3. $+$ and $-$ ; 32 and 34
	<input type="checkbox"/> 4. $\times$ and $-$ ; 8 and 2
Q.8	Select the letter that can replace the question mark (?) in the following series. A, T, E, U, I, V, O, W, ?, X
Ans	<input type="checkbox"/> 1. Z
	<input type="checkbox"/> 2. M
	<input checked="" type="checkbox"/> 3. U
	<input type="checkbox"/> 4. R
Q.9	'Criticism' is related to 'Condemn' in the same way as 'Solidarity' is related to '_'
Ans	<input checked="" type="checkbox"/> 1. Unity
	<input type="checkbox"/> 2. Prosperity
	<input type="checkbox"/> 3. Guilty
	<input type="checkbox"/> 4. Atrocious
Q.10	Select the option in which the numbers are related in the same way as are the numbers in the given set. (8, 7, 407)
Ans	<input type="checkbox"/> 1. (11, 12, 450)
	<input type="checkbox"/> 2. (10, 8, 576)
	<input checked="" type="checkbox"/> 3. (9, 6, 297)
	<input type="checkbox"/> 4. (12, 8, 555)

Q.11 Arrange the following words in a logical and meaningful order.

1. Colonel
2. Field Marshal
3. Brigadier
4. Lieutenant
5. General

Ans  1. 2, 5, 1, 4, 3

2. 2, 5, 3, 1, 4

3. 1, 2, 3, 5, 4

4. 3, 5, 2, 4, 1

Q.12 In a certain code language, 'FASTER' is written as 'CDPQHO'. How will 'VIOL' be written in that code language?

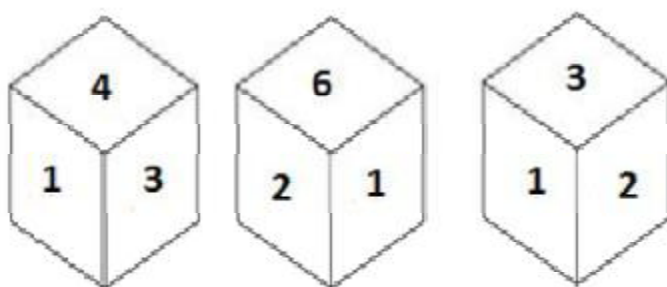
Ans  1. SLIRLM

2. SKIRKO

3. SLRILK

4. RLTIK

Q.13 Three different positions of the same dice are shown, the six faces of which are numbered 1 to 6. What number will be on the face opposite to the one showing '6'?



Ans  1. 5

2. 2

3. 3

4. 4

# SSC CGL Tier-1 Printed Study Kit



- 100% Syllabus Covered
- 12 Books, 1300+ Pages
- 5600+ MCQs
- 08 Year Solved Papers & Mock Tests (PDF Copy)
- 1 year Current Affairs (PDF Copy)

**50% OFF**

~~₹ 6,000/-~~  
**₹ 2,999/-**

FREE SHIPPING 

>>>>  [Click Here for More Details](#)

[CLICK HERE](#)



## What you will get:

- 100% Syllabus Covered
- 12 Books
- 1300+ Pages
- 5600+ MCQs
- 8 Year Solved Papers (PDF Copy)
- Five Practice Papers (PDF Copy)
- One Year Current Affairs (PDF Copy)
- Guidance & Support from Our Experts

Price of the Kit:

~~Rs. 6,000~~

**Rs. 2,999/-**  
(Limited time Offer)

 [Buy Online](#)

Net Banking

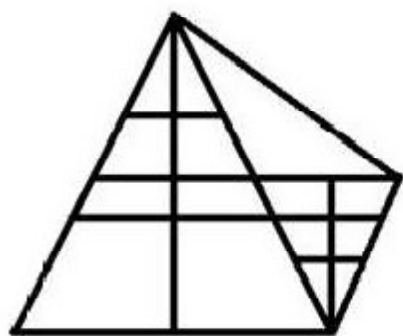
[CLICK HERE](#)

[CLICK HERE FOR MORE DETAILS](#)

[Order Online \(100% Safe\)](#)

**50% OFF**

Q.14 How many triangles are there in the given figure?



Ans  1. 27

2. 24

3. 26

4. 25

Q.15 Four words have been given, out of which three are alike in some manner and c

Ans  1. Kidney

2. Renin

3. Pancreas

4. Liver

Q.16 In a certain code language, 'AUSTERE' is coded as '13102595'. How will 'SET'

Ans  1. 11522867

2. 10522957

3. 10522948

4. 11544957

Q.17 A + B means 'A is the mother of B';

A - B means 'A is the brother of B';

A × B means 'A is the father of B';

A ÷ B means 'A is the daughter of B'.

If, P - K × Y - J + S + R, then which of the following statements is NOT correct

Ans  1. Y is son of S.

2. K is husband of S.

3. J is daughter of P.

✗ 4. P is paternal uncle of R.

Q.18 Select the correct mirror image of the given figure when a vertical mirror is placed to the right of the figure.



Ans

✗ 1.



✗ 2.



✗ 3.



✓ 4.



Q.19 Four letter-clusters have been given, out of which three are alike in some manner and one is different. Identify the letter-cluster that is different.

- Ans  1. PSVX  
 2. JMPS  
 3. ORUX  
 4. ZCFI

Q.20 Study the given pattern carefully and select the number that can replace the que

42	37	?
18	24	36
252	296	540

- Ans  1. 50  
 2. 45  
 3. 40  
 4. 55

Q.21 Select the option in which the given figure X is embedded (rotation is not allow


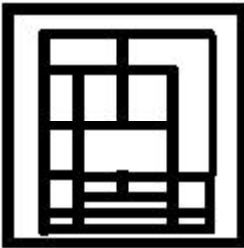




Figure X


- Ans  1. 
2. 



✗ 3.



✓ 4.



Q.22 In a class of 100 students, every student has passed in one or more of the three : English. Among all the students, 24 students have passed in English only, 14 students have passed in both English and Economics only, and 12 students have passed in both English and History only. A total of 50 students have passed in History. If only 5 students have passed in Economics only?

Ans ✗ 1. 10

✗ 2. 18

✗ 3. 20

✓ 4. 15

Q.23 Read the given statements and conclusions carefully. Assuming that the information given in the statements is true, even if it appears to be at variance with commonly known facts, decide which of the following conclusions follow from the statements.

**Statements:**

1. No bottle is a pen.
2. All jugs are bottles.

**Conclusions:**

- I. Some jugs are pens.
- II. No jug is pen.
- III. Some bottles are jugs.

Ans ✗ 1. Either conclusion I or II follows.

2. Conclusion III and either conclusion I or II follow.

3. Only conclusions II and III follow.

4. All conclusions I, II and III follow.

Q.24 Which of the following Venn diagrams best represents the relationship between Cricketers, Players, Human beings

Ans



Q.25 Select the letter-cluster that can replace the question mark (?) in the following s  
TULG, WRPC, ZOTY, CLXU, ?

Ans  1. GIAQ

2. FIBQ

3. FJCQ

4. FICR



# SSC EXAMS PRINTED STUDY NOTES

<a href="#">Study Material for SSC CGL (Tier-1) Examination</a>	<a href="#">English</a>	<a href="#">CLICK HERE</a>
<a href="#">Study Kit for SSC CGL (Tier-2) Exam</a>	<a href="#">English</a>	<a href="#">CLICK HERE</a>
<a href="#">Study Kit for SSC CHSL (10+2) Examination</a>	<a href="#">English</a>	<a href="#">CLICK HERE</a>
<a href="#">Study Kit for SSC Stenographers (Grade 'C' &amp; 'D')</a>	<a href="#">English</a>	<a href="#">CLICK HERE</a>
<a href="#">Study Kit for Multitasking (Non-Technical) - MTS</a>	<a href="#">English</a>	<a href="#">CLICK HERE</a>
<a href="#">Study Kit for SSC Constables (GD) Exam</a>	<a href="#">English</a>	<a href="#">CLICK HERE</a>
<a href="#">Study Kit For SSC Sub-Inspectors in Delhi Police, CAPFs, CISF</a>	<a href="#">English</a>	<a href="#">CLICK HERE</a>
<a href="#">Study Kit for SSC Junior Engineer Exam (Paper-1)</a>	<a href="#">English</a>	<a href="#">CLICK HERE</a>
<b>IAS EXAMS STUDY MATERIALS</b>		
<a href="#">Study Kit for IAS (Pre) GENERAL STUDIES Paper-1 (GS)</a>	<a href="#">English</a>	<a href="#">CLICK HERE</a>
<a href="#">Study Kit for IAS (Pre) CSAT Paper-2(Aptitude)</a>	<a href="#">English</a>	<a href="#">CLICK HERE</a>
<a href="#">सामान्य अध्ययन (GS) प्रारंभिक परीक्षा (Pre) पेपर-1</a>	<a href="#">हिन्दी</a>	<a href="#">CLICK HERE</a>
<a href="#">आई. ए. एस. (सी-सैट) प्रारंभिक परीक्षा पेपर -2</a>	<a href="#">हिन्दी</a>	<a href="#">CLICK HERE</a>
<a href="#">Gist of NCERT Study Kit For UPSC Exams</a>	<a href="#">English</a>	<a href="#">CLICK HERE</a>
<a href="#">यूपीएससी परीक्षा के लिए एनसीईआरटी अध्ययन सामग्री</a>	<a href="#">हिन्दी</a>	<a href="#">CLICK HERE</a>