

Combined Graduate Level Examination 2024 Tier I

Roll Number	
Candidate Name	
Venue Name	
Exam Date	26/09/2024
Exam Time	12:30 PM - 1:30 PM
Subject	Combined Graduate Level Examination Tier I

Section : **General Intelligence and Reasoning**

Q.1 Select the combination of letters that when sequentially placed in the blanks of the given series will complete the series.
ABC_FG_JK_MOPQ_TUV_Y

- Ans
- 1. DHLRW
 - 2. DHLSX
 - 3. EHLRX
 - 4. EHLRW

Question ID : **630680222415**
 Option 1 ID : **630680863462**
 Option 2 ID : **630680863461**
 Option 3 ID : **630680863459**
 Option 4 ID : **630680863460**
 Status : **Answered**
 Chosen Option : **2**

Q.2 In a certain code language, 'FUTURE' is written as 'IXWXUH' and 'ISLAND' is written as 'LVODQG'. How will 'JERSEY' be written in that language?

- Ans
- 1. KHTUHA
 - 2. MHTVGB
 - 3. MHUVHB
 - 4. KGTVGA

Question ID : **630680172752**
 Option 1 ID : **630680669409**
 Option 2 ID : **630680669408**
 Option 3 ID : **630680669411**
 Option 4 ID : **630680669410**
 Status : **Answered**
 Chosen Option : **3**

Q.3 Read the given statements and conclusions carefully. You have to take the given statements to be true even if they seem to be at variance from commonly known facts. You have to decide which conclusion(s) logically follow(s) from the given statements.

Statements: All Grapes are Berries.

Some Berries are Juices.

All Juices are Sodas.

Conclusions: (I) Some Berries are Grapes.

(II) Some Sodas are Berries.

- Ans**
- 1. Only conclusion (I) follows
 - 2. Only conclusion (II) follows
 - 3. Both the conclusions (I) and (II) follow
 - 4. Both the conclusions (I) and (II) do not follow

Question ID : **630680403884**

Option 1 ID : **6306801575022**

Option 2 ID : **6306801575023**

Option 3 ID : **6306801575024**

Option 4 ID : **6306801575025**

Status : **Answered**

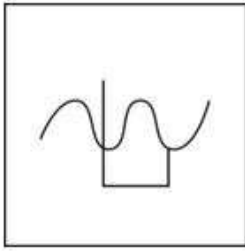
Chosen Option : **3**



Download SSC CGL, CHSL E-BOOKS

[CLICK HERE](#)

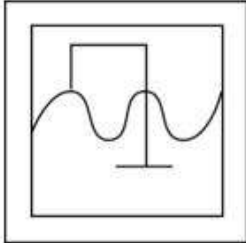
Q.4 Select the option figure in which the given figure (X) is embedded (rotation is NOT allowed).



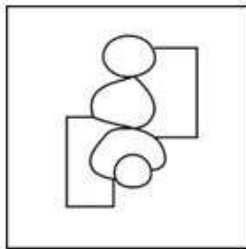
(X)

Ans

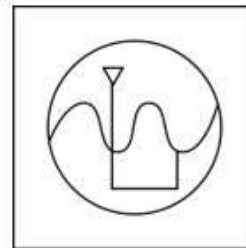
✗ 1.



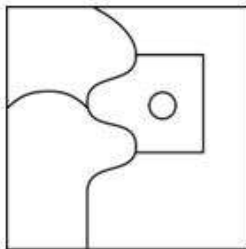
✗ 2.



✓ 3.



✗ 4.



Question ID : 630680332539

Option 1 ID : 6306801293595

Option 2 ID : 6306801293594

Option 3 ID : 6306801293593

Option 4 ID : 6306801293596

Status : Answered

Chosen Option : 3



Download SSC CGL, CHSL E-BOOKS

[CLICK HERE](#)

Q.5 Each of the letters in the word 'DARKEN' is arranged in the English alphabetical order. How many letters are there in the English alphabetical series between the letter which is second from the left end and the one which is third from the right end in the new letter-cluster thus formed?

- Ans**
- 1. Five
 - 2. Eight
 - 3. Six
 - 4. Seven

Question ID : **630680327765**

Option 1 ID : **6306801275049**

Option 2 ID : **6306801275052**

Option 3 ID : **6306801275050**

Option 4 ID : **6306801275051**

Status : **Answered**

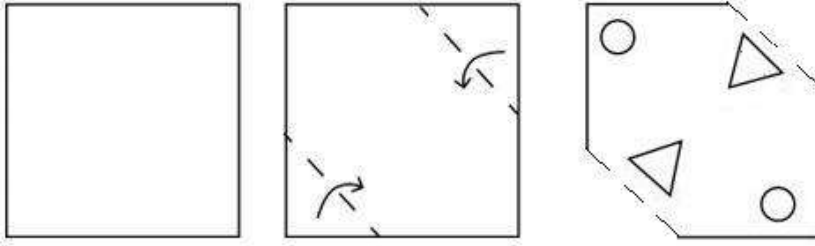
Chosen Option : **3**



Download SSC CGL, CHSL E-BOOKS

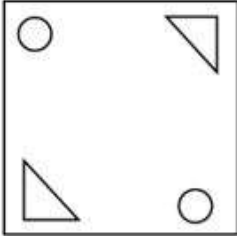
[CLICK HERE](#)

Q.6 A sheet of paper is folded along the dotted line successively along the directions shown and is then punched in the last. How would this paper look when unfolded?

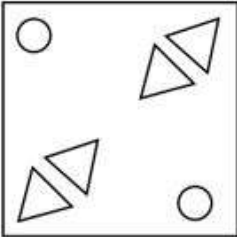


Ans

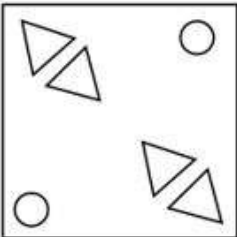
✗ 1.



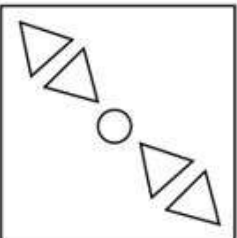
✓ 2.



✗ 3.



✗ 4.



Question ID : 630680366397

Option 1 ID : 6306801427107

Option 2 ID : 6306801427105

Option 3 ID : 6306801427108

Option 4 ID : 6306801427106

Status : Answered

Chosen Option : 2



Download SSC CGL, CHSL E-BOOKS

CLICK HERE

SSC CGL (Tier-1) STUDY NOTES



- ▶ 100% CGL Exam Syllabus Covered
- ▶ 12 Books, 1300+ Pages
- ▶ 5600+ MCQs
- ▶ Previous Year Papers & Mocks
- ▶ 1 Year Current Affairs
- ▶ Support & Guidance

50% OFF



100% SAFE

FREE SHIPPING 

SSCPORTAL.IN

SSC CGL PDF NOTES

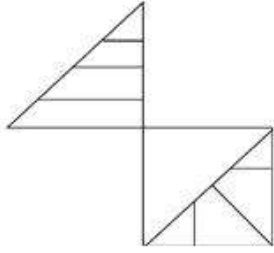
100% Syllabus | 1300+ Pages

50% OFF

CLICK HERE



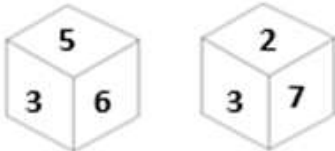
Q.7 How many triangles are there in the figure given below?



- Ans**
- 1. 8
 - 2. 10
 - 3. 12
 - 4. 14

Question ID : **630680296927**
 Option 1 ID : **6306801155351**
 Option 2 ID : **6306801155352**
 Option 3 ID : **6306801155353**
 Option 4 ID : **6306801155354**
 Status : **Answered**
 Chosen Option : **2**

Q.8 Six numbers 5, 3, 6, 7, 9 and 2 are written on different faces of a dice. Two positions of this dice are shown in the figure below. Find the number on the face opposite to the one having 5.



- Ans**
- 1. 2
 - 2. 9
 - 3. 3
 - 4. 6

Question ID : **630680382714**
 Option 1 ID : **6306801491773**
 Option 2 ID : **6306801491771**
 Option 3 ID : **6306801491772**
 Option 4 ID : **6306801491774**
 Status : **Answered**
 Chosen Option : **1**

Q.9 'Conceal' is related to 'Disclose' in the same way as 'Identical' is related to '_____'.
 (The words must be considered as meaningful English words and must not be related to each other based on the number of letters/number of consonants/vowels in the word.)

- Ans**
- 1. Similar
 - 2. Analogous
 - 3. Distinct
 - 4. Homogeneous

Question ID : **630680416704**
 Option 1 ID : **6306801625579**
 Option 2 ID : **6306801625581**
 Option 3 ID : **6306801625582**
 Option 4 ID : **6306801625580**
 Status : **Answered**
 Chosen Option : **3**

Q.10 Select the number that will come in the place of the question mark(?), if '+' and '-' are interchanged and 'x' and '÷' are interchanged
 $11 \div 8 - 78 \times 6 + 37 = ?$

- Ans 1. 62
 2. 64
 3. 58
 4. 71

Question ID : 630680163577
 Option 1 ID : 630680633492
 Option 2 ID : 630680633495
 Option 3 ID : 630680633493
 Option 4 ID : 630680633494
 Status : Answered
 Chosen Option : 2

Q.11 Select the set in which the numbers are related in the same way as are the numbers of the following set.
 $3 - 20 - 5$
 $4 - 17 - 3$
NOTE: Operations should be performed on the whole numbers, without breaking down the numbers into its constituent digits. E.g. 13 - Operations on 13 such as adding/subtracting/multiplying etc. to 13 can be performed. Breaking down 13 into 1 and 3 and then performing mathematical operations on 1 and 3 is not allowed)

- Ans 1. $8 - 36 - 11$
 2. $5 - 28 - 9$
 3. $9 - 77 - 8$
 4. $11 - 28 - 5$

Question ID : 630680313543
 Option 1 ID : 6306801220038
 Option 2 ID : 6306801220037
 Option 3 ID : 6306801220039
 Option 4 ID : 6306801220040
 Status : Answered
 Chosen Option : 3

Q.12 Select the set in which the numbers are related in the same way as are the numbers of the following sets.
(NOTE : Operations should be performed on the whole numbers, without breaking down the numbers into its constituent digits. E.g. 13 - Operations on 13 such as adding /deleting /multiplying etc., to 13 can be performed. Breaking down 13 into 1 and 3 and then performing mathematical operations on 1 and 3 is not allowed.)
 $(16, 7, 112)$
 $(8, 12, 96)$

- Ans 1. (13, 7, 96)
 2. (14, 9, 128)
 3. (12, 5, 65)
 4. (15, 8, 120)

Question ID : 630680338900
 Option 1 ID : 6306801318191
 Option 2 ID : 6306801318192
 Option 3 ID : 6306801318189
 Option 4 ID : 6306801318190
 Status : Answered
 Chosen Option : 4

Q.13 Which figure should replace the question mark (?) if the following series were to be continued?

S	P	F	F	V	S	V	F	N	N	C	V	
	V			N			C			P		?
	N	C		C	P		P	S		S	F	

Ans

✗ 1.

F	P	N
	S	
	C	V

✓ 2.

C	N	P
	S	
	F	V

✗ 3.

C	N	F
	V	
	P	S

✗ 4.

V	N	C
	F	
	P	S

Question ID : 630680214429

Option 1 ID : 630680831748

Option 2 ID : 630680831747

Option 3 ID : 630680831750

Option 4 ID : 630680831749

Status : Answered

Chosen Option : 1

Q.14 In a certain code language,

'A + B' means 'A is the mother of B';

'A - B' means 'A is the brother of B';

'A × B' means 'A is the wife of B' and

'A ÷ B' means 'A is the father of B'.

Based on the above, how is I related to H if 'B + R × I - T ÷ H'?

Ans ✗ 1. Brother

✓ 2. Father's brother

✗ 3. Father's sister

✗ 4. Father's father

Question ID : 630680324897

Option 1 ID : 6306801263987

Option 2 ID : 6306801263985

Option 3 ID : 6306801263986

Option 4 ID : 6306801263988

Status : Answered

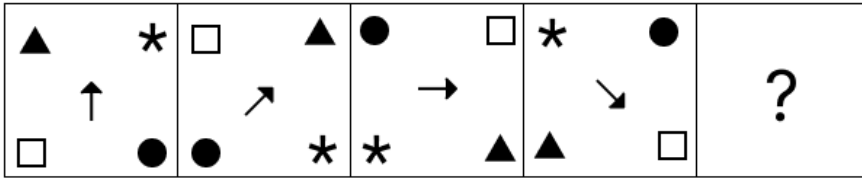
Chosen Option : 2



Download SSC CGL, CHSL E-BOOKS

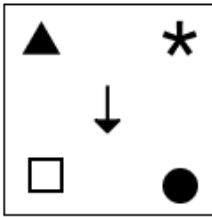
[CLICK HERE](#)

Q.15 Identify the figure given in the options which when put in place of the question mark (?) will logically complete the series?

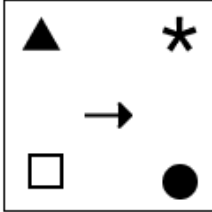


Ans

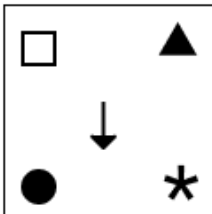
✓ 1.



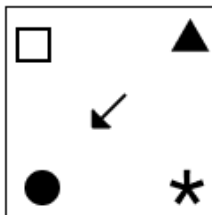
✗ 2.



✗ 3.



✗ 4.



Question ID : 630680471500

Option 1 ID : 6306801841716

Option 2 ID : 6306801841715

Option 3 ID : 6306801841714

Option 4 ID : 6306801841717

Status : Answered

Chosen Option : 1

Q.16 Four letter-clusters have been given, out of which three are alike in some manner and one is different. Select the letter-cluster that is different.

Note: The odd one out is not based on the number of consonants/vowels or their position in the letter cluster

Ans ✗ 1. PRUZ

✓ 2. ORTU

✗ 3. MORW

✗ 4. XZCH

Question ID : 63068085566

Option 1 ID : 630680331770

Option 2 ID : 630680331768

Option 3 ID : 630680331771

Option 4 ID : 630680331769

Status : Answered

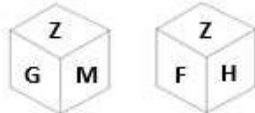
Chosen Option : 2

Q.17 The second number in the given number pairs is obtained by performing certain mathematical operation(s) on the first number. The same operation(s) are followed in all the number pairs except one. Find that odd number pair. (NOTE : Operations should be performed on the whole numbers, without breaking down the numbers into its constituent digits. E.g. 13 – Operations on 13 such as adding /deleting /multiplying etc., to 13 can be performed. Breaking down 13 into 1 and 3 and then performing mathematical operations on 1 and 3 is not allowed.)

- Ans** 1. 34 : 44
 2. 23 : 25
 3. 35 : 36
 4. 13 : 16

Question ID : 630680412029
 Option 1 ID : 6306801606954
 Option 2 ID : 6306801606953
 Option 3 ID : 6306801606952
 Option 4 ID : 6306801606951
 Status : Answered
 Chosen Option : 3

Q.18 Two different positions of the same dice with faces Z, G, M, F, H and S are shown below. Select the letter that will be on the face opposite to the one having G.



- Ans** 1. S
 2. F
 3. H
 4. M

Question ID : 630680349071
 Option 1 ID : 6306801358575
 Option 2 ID : 6306801358576
 Option 3 ID : 6306801358574
 Option 4 ID : 6306801358573
 Status : Answered
 Chosen Option : 2

Q.19 Two sets of numbers are given below. In each set of numbers, certain mathematical operation(s) on the first number result(s) in the second number. Similarly, certain mathematical operation(s) on the second number result(s) in the third number and so on. Which of the given options follows the same set of operations as in the given sets?

(NOTE: Operations should be performed on the whole numbers, without breaking down the numbers into their constituent digits. E.g. 13 – Operations on 13 such as adding/subtracting/multiplying to 13 can be performed. Breaking down 13 into 1 and 3 and then performing mathematical operations on 1 and 3 is not allowed.)

48 – 50 – 46 – 52; 37 – 39 – 35 – 41

- Ans** 1. 26 – 28 – 24 – 30
 2. 21 – 23 – 29 – 27
 3. 19 – 17 – 21 – 25
 4. 15 – 13 – 9 – 19

Question ID : 630680814084
 Option 1 ID : 6306803189553
 Option 2 ID : 6306803189555
 Option 3 ID : 6306803189554
 Option 4 ID : 6306803189556
 Status : Answered
 Chosen Option : 1

Q.20 Select the number from among the given options that can replace the question mark (?) in the following series.
176,167,156,147,136, ?

- Ans 1. 126
 2. 119
 3. 127
 4. 124

Question ID : 630680411900
Option 1 ID : 6306801606437
Option 2 ID : 6306801606438
Option 3 ID : 6306801606436
Option 4 ID : 6306801606435
Status : Answered
Chosen Option : 3

Q.21 Which of the four options will replace the question mark (?) in the following series?
FX32, EV38, DT44, CR50, ?

- Ans 1. BP56
 2. CR54
 3. DP55
 4. CQ55

Question ID : 630680416332
Option 1 ID : 6306801624092
Option 2 ID : 6306801624094
Option 3 ID : 6306801624091
Option 4 ID : 6306801624093
Status : Answered
Chosen Option : 1

Q.22 What will come in the place of '?' in the following equation, if '+' and '-' are interchanged and 'x' and '+' are interchanged?

$$7 + 4 \div 18 - 3 \times 2 = ?$$

- Ans 1. 18
 2. 16
 3. 24
 4. 20

Question ID : 630680339260
Option 1 ID : 6306801319611
Option 2 ID : 6306801319612
Option 3 ID : 6306801319610
Option 4 ID : 6306801319609
Status : Answered
Chosen Option : 3



Q.23 Which of the following terms will replace the question mark (?) in the given series?
QGMW, VCPU, AYSS, ? , KQYO

- Ans 1. FUVQ
 2. FTUO
 3. FVQO
 4. FUXO

Question ID : **630680417053**
Option 1 ID : **6306801626976**
Option 2 ID : **6306801626975**
Option 3 ID : **6306801626978**
Option 4 ID : **6306801626977**
Status : **Answered**
Chosen Option : **1**

Q.24 In a certain code language, 'D' is coded as '16', 'B' is coded as '4' and 'T' is coded as '400'. How will 'H' be coded in the same language?

- Ans 1. 36
 2. 64
 3. 25
 4. 8

Question ID : **630680416272**
Option 1 ID : **6306801623851**
Option 2 ID : **6306801623853**
Option 3 ID : **6306801623854**
Option 4 ID : **6306801623852**
Status : **Answered**
Chosen Option : **2**

Q.25 In a certain code language, 'bright colour rainbow' is coded as 'mq bj st' and 'sunny bright day' is coded as 'nv bj fm'. How is 'bright' coded in that language?

- Ans 1. st
 2. mq
 3. nv
 4. bj

Question ID : **63068082924**
Option 1 ID : **630680321557**
Option 2 ID : **630680321559**
Option 3 ID : **630680321556**
Option 4 ID : **630680321558**
Status : **Answered**
Chosen Option : **4**

Section : **General Awareness**



Download SSC CGL, CHSL E-BOOKS

[CLICK HERE](#)

Q.1 At the 36th National Games, Hashika Ramchandra won six gold medals in which of the following sports?

- Ans** 1. Swimming
 2. Boxing
 3. Wrestling
 4. Badminton

Question ID : **630680510806**
Option 1 ID : **6306801996354**
Option 2 ID : **6306801996356**
Option 3 ID : **6306801996355**
Option 4 ID : **6306801996357**
Status : **Not Answered**
Chosen Option : --

Q.2 Which state in India was the most transformed by the Green Revolution?

- Ans** 1. Kerala
 2. Maharashtra
 3. Punjab
 4. West Bengal

Question ID : **630680411101**
Option 1 ID : **6306801603156**
Option 2 ID : **6306801603158**
Option 3 ID : **6306801603157**
Option 4 ID : **6306801603159**
Status : **Answered**
Chosen Option : **3**

Q.3 Which of the following ports was developed as a Satellite port to relieve the pressure at the Mumbai port?

- Ans** 1. Marmagao Port
 2. New Mangalore Port
 3. Deendayal Port Authority
 4. Jawaharlal Nehru Port

Question ID : **630680227941**
Option 1 ID : **630680884440**
Option 2 ID : **630680884439**
Option 3 ID : **630680884442**
Option 4 ID : **630680884441**
Status : **Answered**
Chosen Option : **4**

Q.4 Who among the following was the shortest-serving Prime Minister of India?

- Ans** 1. Atal Bihari Vajpayee
 2. Gulzarilal Nanda
 3. Chandra Shekhar
 4. Charan Singh

Question ID : **630680305542**
Option 1 ID : **6306801188542**
Option 2 ID : **6306801188541**
Option 3 ID : **6306801188544**
Option 4 ID : **6306801188543**
Status : **Answered**
Chosen Option : **4**



Q.5 In the context of Mathura school of Art, during which of the following periods were a number of sculptures of Brahmanical deities, such as Kartikeya, Vishnu and Kubera carved?

- Ans**
- 1. Satavahana
 - 2. Shaka
 - 3. Parthian
 - 4. Kushana

Question ID : **630680412361**
Option 1 ID : **6306801608269**
Option 2 ID : **6306801608268**
Option 3 ID : **6306801608270**
Option 4 ID : **6306801608267**
Status : **Not Answered**
Chosen Option : --

Q.6 In which of the following situations does the government run a deficit budget?

- Ans**
- 1. When the government expenditure and revenue both are zero.
 - 2. When the government revenue exceeds expenditure.
 - 3. When the government expenditure equals revenue.
 - 4. When the government expenditure exceeds revenue.

Question ID : **630680324425**
Option 1 ID : **6306801262181**
Option 2 ID : **6306801262183**
Option 3 ID : **6306801262182**
Option 4 ID : **6306801262184**
Status : **Answered**
Chosen Option : **4**

Q.7 Tsang Po and Jamuna are other names of which river?

- Ans**
- 1. Narmada
 - 2. Indus
 - 3. Ganga
 - 4. Brahmaputra

Question ID : **630680309103**
Option 1 ID : **6306801202592**
Option 2 ID : **6306801202590**
Option 3 ID : **6306801202589**
Option 4 ID : **6306801202591**
Status : **Answered**
Chosen Option : **4**

Q.8 Which of the following groups/parties was started in San Francisco, United States of America during the Indian National Movement?

- Ans**
- 1. Khilafat Committee
 - 2. Ghadar Party
 - 3. Swaraj Party
 - 4. Hindustan Socialist Republican Association

Question ID : **630680511504**
Option 1 ID : **6306801999141**
Option 2 ID : **6306801999140**
Option 3 ID : **6306801999138**
Option 4 ID : **6306801999139**
Status : **Answered**
Chosen Option : **2**



Q.9 Which of the following organisations is NOT a winner of the \$100,000 cash prize as 'Best Small Business: Good Food for All', announced by the United Nations for providing inspiring, diverse and impactful solutions in improving access to healthy and sustainable food?

- Ans
- 1. Edible Routes Private Limited
 - 2. Oorja Development Solutions India Private Limited
 - 3. Taru Naturals
 - 4. Patanjali

Question ID : 630680196012
Option 1 ID : 630680760435
Option 2 ID : 630680760436
Option 3 ID : 630680760437
Option 4 ID : 630680760438
Status : Not Answered
Chosen Option : --

Q.10 'Castling' is related to which of the following sports?

- Ans
- 1. Chess
 - 2. Billiards
 - 3. Tennis
 - 4. Table Tennis

Question ID : 630680510773
Option 1 ID : 6306801996224
Option 2 ID : 6306801996225
Option 3 ID : 6306801996223
Option 4 ID : 6306801996222
Status : Answered
Chosen Option : 1

Q.11 What is the cost of the 'Nand Baba Milk Mission' scheme launched by the Uttar Pradesh state government in 2023 to provide milk producers the facility of selling their milk at a reasonable price in villages through dairy co-operative societies?

- Ans
- 1. ₹2,000 crore
 - 2. ₹1,500 crore
 - 3. ₹500 crore
 - 4. ₹1,000 crore

Question ID : 630680413086
Option 1 ID : 6306801611170
Option 2 ID : 6306801611169
Option 3 ID : 6306801611167
Option 4 ID : 6306801611168
Status : Not Answered
Chosen Option : --



Q.12 In the context of vernier calliper, an internal jaw is used to measure:

- Ans**
- 1. the depth of a beaker
 - 2. the length correct up to 1 mm
 - 3. the length of a rod and diameter of a sphere
 - 4. the internal diameter of a hollow cylinder and pipes

Question ID : 63068076925

Option 1 ID : 630680297799

Option 2 ID : 630680297800

Option 3 ID : 630680297797

Option 4 ID : 630680297798

Status : Answered

Chosen Option : 4

Q.13 Match the terms in column A with their respective properties in column B.

Column-A

i. Glucose

ii. Yeast

iii. Glycolysis

iv. Pyruvic acid

Column-B

a. Intermediate substance in breakdown of glucose

b. Glucose is converted into pyruvic acid

c. Uses nutrients for fermentation process

d. Best organic substrate for respiration

- Ans**
- 1. i-d, ii-c, iii-b, iv-a
 - 2. i-b, ii-d, iii-a, iv-c
 - 3. i-a, ii-b, iii-c, iv-d
 - 4. i-b, ii-a, iii-d, iv-c

Question ID : 630680117896

Option 1 ID : 630680456765

Option 2 ID : 630680456763

Option 3 ID : 630680456762

Option 4 ID : 630680456764

Status : Not Answered

Chosen Option : --

Q.14 If a bar magnet is hung from a string, in which direction does its north pole point?

- Ans**
- 1. North
 - 2. South
 - 3. East
 - 4. West

Question ID : 63068094224

Option 1 ID : 630680365591

Option 2 ID : 630680365592

Option 3 ID : 630680365593

Option 4 ID : 630680365594

Status : Answered

Chosen Option : 2



Q.15 Match the points under Column A with those under Column B.

Column A (Subphylum) Column B (Animal)

- | | |
|-----------------|-------------|
| i. Hexapoda | a. Daphnia |
| ii. Crustacea | b. Mosquito |
| iii. Myriapoda | c. Limulus |
| iv. Chelicerata | d. Julus |

- Ans 1. i-b, ii-a, iii-d, iv-c
 2. i-d, ii-c, iii-b, iv-a
 3. i-a, ii-b, iii-c, iv-d
 4. i-b, ii-c, iii-a, iv-d

Question ID : 630680199662
Option 1 ID : 630680774257
Option 2 ID : 630680774258
Option 3 ID : 630680774255
Option 4 ID : 630680774256
Status : Not Answered
Chosen Option : --

Q.16 Fugdi dance is associated with which of the following states?

- Ans 1. Uttar Pradesh
 2. Goa
 3. Kerala
 4. Uttarakhand

Question ID : 630680402090
Option 1 ID : 6306801568105
Option 2 ID : 6306801568104
Option 3 ID : 6306801568107
Option 4 ID : 6306801568106
Status : Not Answered
Chosen Option : --

Q.17 The concept of 'Independence of judiciary' in the Indian Constitution is taken from the Constitution of:

- Ans 1. France
 2. Britain
 3. Ireland
 4. The USA

Question ID : 630680413056
Option 1 ID : 6306801611047
Option 2 ID : 6306801611048
Option 3 ID : 6306801611050
Option 4 ID : 6306801611049
Status : Not Answered
Chosen Option : --



Q.18 Umayalpuram K Sivaraman is an eminent musician associated with which of the following musical instruments?

- Ans** 1. Dhol
 2. Sitar
 3. Mridangam
 4. Guitar

Question ID : **630680216239**
Option 1 ID : **630680838932**
Option 2 ID : **630680838931**
Option 3 ID : **630680838933**
Option 4 ID : **630680838934**
Status : **Not Answered**
Chosen Option : --

Q.19 Rottela Panduga or the Roti Festival is celebrated in which Indian state?

- Ans** 1. Maharashtra
 2. Andhra Pradesh
 3. Tamil Nadu
 4. Karnataka

Question ID : **630680166678**
Option 1 ID : **630680645627**
Option 2 ID : **630680645625**
Option 3 ID : **630680645626**
Option 4 ID : **630680645624**
Status : **Answered**
Chosen Option : 2

Q.20 Belur Math was founded by which of the following social reformers in British India?

- Ans** 1. KT Telang
 2. Swami Vivekanand
 3. VN Mandlik
 4. RG Bhandarkar

Question ID : **630680412366**
Option 1 ID : **6306801608289**
Option 2 ID : **6306801608290**
Option 3 ID : **6306801608288**
Option 4 ID : **6306801608287**
Status : **Not Answered**
Chosen Option : --


Q.21 Which of the following parts of the mountain will receive the most rainfall from moisture-laden winds?

- Ans** 1. Leeward side
 2. Relief side
 3. Upward side
 4. Windward side

Question ID : **63068094177**
Option 1 ID : **630680365405**
Option 2 ID : **630680365403**
Option 3 ID : **630680365404**
Option 4 ID : **630680365406**
Status : **Answered**
Chosen Option : 1



कर्मचारी चयन आयोग (CGL) परीक्षा अध्ययन सामग्री



FREE SHIPPING

- ▶ 100% Syllabus Covered
- ▶ 9 Books, 1000+ Pages - PRINT COPY
- ▶ 3000+ MCQs - PRINT COPY
- ▶ 08 Year Solved Papers & Mock Tests (PDF Copy)
- ▶ One Year Current Affairs (PDF Copy)

हिन्दी माध्यम

50% OFF

SSCPORTAL.IN

SSC CGL HINDI PDF NOTES

100% Syllabus | 1,000+ Pages



CLICK HERE

<https://sscportal.in/study-kit/cgl/tier-1-hindi>

Q.22 Which singer from Assam was posthumously awarded the Bharat Ratna in 2019?

- Ans 1. Rameshwar Pathak
 2. Padmanav Bordoloi
 3. Archana Mahanta
 4. Bhupen Hazarika

Question ID : 630680511799
Option 1 ID : 6306802000166
Option 2 ID : 6306802000169
Option 3 ID : 6306802000168
Option 4 ID : 6306802000167
Status : Answered
Chosen Option : 4

Q.23 Medini Rai of Chanderi, Hasan Khan of Mewat and Mahmud Lodi joined Rana Sanga with their forces to fight against which of the following Mughal rulers?

- Ans 1. Aurangzeb
 2. Humayun
 3. Babur
 4. Akbar

Question ID : 630680412427
Option 1 ID : 6306801608534
Option 2 ID : 6306801608531
Option 3 ID : 6306801608532
Option 4 ID : 6306801608533
Status : Answered
Chosen Option : 2

Q.24 Which writ is issued by a high court or supreme court when a lower court has considered a case going beyond its jurisdiction?

- Ans 1. Certiorari
 2. Quo Warrant
 3. Habeas Corpus
 4. Prohibition

Question ID : 630680408203
Option 1 ID : 6306801591710
Option 2 ID : 6306801591709
Option 3 ID : 6306801591707
Option 4 ID : 6306801591708
Status : Answered
Chosen Option : 1

Q.25 As per the UNDP, the rank of Sri Lanka in the Human Development Index (2022) is:

- Ans 1. 72/189
 2. 74/189
 3. 75/189
 4. 73/189

Question ID : 630680409641
Option 1 ID : 6306801597393
Option 2 ID : 6306801597395
Option 3 ID : 6306801597396
Option 4 ID : 6306801597394
Status : Not Answered
Chosen Option : --



Section : Quantitative Aptitude

Q.1 If $8\cot\theta = 7$, then the value of $\frac{1 + \sin\theta}{\cos\theta}$ is:

- Ans**
- 1. $\frac{1 + \sqrt{113}}{8}$
 - 2. $\frac{7 + \sqrt{113}}{8}$
 - 3. $\frac{1 + \sqrt{113}}{7}$
 - 4. $\frac{8 + \sqrt{113}}{7}$

Question ID : 6306801048019

Option 1 ID : 6306804114122

Option 2 ID : 6306804114123

Option 3 ID : 6306804114125

Option 4 ID : 6306804114124

Status : Answered

Chosen Option : 2

Q.2 The table given below shows the distribution of employees in four different companies in 2022.

Company	Number of zones	Average number of employees per zone	Male : Female
A	30	300	3:5
B	35	400	5:3
C	27	500	4:5
D	25	450	5:4

Find the total number of male employees working in company D in 2022.

- Ans**
- 1. 6000
 - 2. 6750
 - 3. 6500
 - 4. 6250

Question ID : 630680428172

Option 1 ID : 6306801670733

Option 2 ID : 6306801670735

Option 3 ID : 6306801670734

Option 4 ID : 6306801670732

Status : Answered

Chosen Option : 4

Q.3 The side BC of $\triangle ABC$ is produced to a point D. If $AC = BC$ and $\angle BAC = 70^\circ$, then find the value of $2.5\angle ACD - 1.5\angle ABC$.

- Ans 1. 235°
 2. 245°
 3. 225°
 4. 230°

Question ID : 630680379709
Option 1 ID : 6306801479881
Option 2 ID : 6306801479882
Option 3 ID : 6306801479879
Option 4 ID : 6306801479880
Status : Answered
Chosen Option : 2

Q.4 The marked price of an electronic watch in a store is ₹15,620 and it is available at a discount of 27%. What is the price (in ₹, to the nearest tens) that a customer pays if he buys from the store?

- Ans 1. 11,400
 2. 9,880
 3. 12,500
 4. 10,800

Question ID : 630680427949
Option 1 ID : 6306801669841
Option 2 ID : 6306801669842
Option 3 ID : 6306801669840
Option 4 ID : 6306801669843
Status : Answered
Chosen Option : 1

Q.5 The five-digit number $45yz0$ is divisible by 40. What is the maximum possible value of $(y + z)$?

- Ans 1. 16
 2. 18
 3. 17
 4. 15

Question ID : 630680115765
Option 1 ID : 630680448399
Option 2 ID : 630680448401
Option 3 ID : 630680448400
Option 4 ID : 630680448398
Status : Answered
Chosen Option : 4



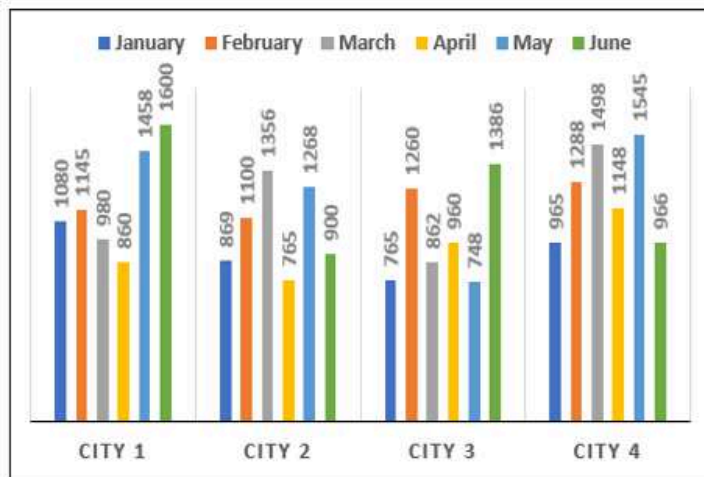
Q.6 If $x = \sqrt{6} + 2$ and $y = \sqrt{6} - 2$, then what is the value of $\left(\frac{x}{y} + \frac{y}{x}\right)^2 - 3$?

- Ans**
- 1. 22
 - 2. 35
 - 3. 42
 - 4. 97

Question ID : **630680413535**
 Option 1 ID : **6306801612964**
 Option 2 ID : **6306801612965**
 Option 3 ID : **6306801612966**
 Option 4 ID : **6306801612967**
 Status : **Answered**
 Chosen Option : **1**

Q.7 Study the given bar graph and answer the question that follows.

The following bar graph shows the number of deaths that happened in cities 1, 2, 3 and 4 in the months mentioned.



The average number of deaths that occurred during April across all the cities (rounded off to the next integer) is:

- Ans**
- 1. 953
 - 2. 965
 - 3. 928
 - 4. 934

Question ID : **630680387182**
 Option 1 ID : **6306801509425**
 Option 2 ID : **6306801509422**
 Option 3 ID : **6306801509424**
 Option 4 ID : **6306801509423**
 Status : **Answered**
 Chosen Option : **4**

Q.8 If $a : b = c : d = e : f = 5 : 7$, then what is the ratio $(3a + 5c + 11e) : (3b + 5d + 11f)$?

- Ans
- 1. 11 : 7
 - 2. 3 : 7
 - 3. 7 : 11
 - 4. 5 : 7

Question ID : 630680524324
Option 1 ID : 6306802049448
Option 2 ID : 6306802049447
Option 3 ID : 6306802049450
Option 4 ID : 6306802049449
Status : Answered
Chosen Option : 4

Q.9 Varun and Raju, working together, can complete a job in 40 hours whereas Varun alone can complete the same job in 50 hours. The number of hours required by Raju to complete the job alone is:

- Ans
- 1. 170
 - 2. 150
 - 3. 200
 - 4. 190

Question ID : 630680386147
Option 1 ID : 6306801505299
Option 2 ID : 6306801505298
Option 3 ID : 6306801505301
Option 4 ID : 6306801505300
Status : Answered
Chosen Option : 3

Q.10 What principal would amount to ₹21,420 in 2 years at the rate of 9.5% p.a. simple interest?

- Ans
- 1. ₹16,000
 - 2. ₹12,000
 - 3. ₹11,273
 - 4. ₹18,000

Question ID : 630680361798
Option 1 ID : 6306801408959
Option 2 ID : 6306801408960
Option 3 ID : 6306801408957
Option 4 ID : 6306801408958
Status : Answered
Chosen Option : 4



Q.11 Raman fixes the sale price of his goods at 16% above the cost price. He sells his goods at 12% less than the fixed price. Find the profit percentage correct to two places of decimal.

- Ans
- 1. 0.08%
 - 2. 2.08%
 - 3. 1.07%
 - 4. 3.01%

Question ID : 630680429029
 Option 1 ID : 6306801674163
 Option 2 ID : 6306801674161
 Option 3 ID : 6306801674162
 Option 4 ID : 6306801674160
 Status : Answered
 Chosen Option : 2

Q.12 If $2a - b = 3$ and $8a^3 - b^3 = 999$, then find the value of $4a^2 - b^2$.

- Ans
- 1. 61
 - 2. 65
 - 3. 67
 - 4. 63

Question ID : 630680413512
 Option 1 ID : 6306801612872
 Option 2 ID : 6306801612874
 Option 3 ID : 6306801612875
 Option 4 ID : 6306801612873
 Status : Answered
 Chosen Option : 4

Q.13 If the radius and height of a right circular cylinder are 21 cm and 5 cm, respectively, then the total surface area of the cylinder is (use $\pi = \frac{22}{7}$):

- Ans
- 1. 3432 cm²
 - 2. 5212 cm²
 - 3. 3816 cm²
 - 4. 4312 cm²

Question ID : 630680421517
 Option 1 ID : 6306801644532
 Option 2 ID : 6306801644534
 Option 3 ID : 6306801644531
 Option 4 ID : 6306801644533
 Status : Answered
 Chosen Option : 1

Q.14 If $p = \frac{\sin A}{1 + \cos A}$, then $\frac{\sin A}{1 - \cos A}$ is equal to:

- Ans 1. $p - 1$
 2. $\frac{1}{p}$
 3. $\frac{1}{1 - p}$
 4. $\frac{1}{p + 1}$

Question ID : 630680397695
 Option 1 ID : 6306801550737
 Option 2 ID : 6306801550738
 Option 3 ID : 6306801550740
 Option 4 ID : 6306801550739
 Status : Answered
 Chosen Option : 1

Q.15 A thief takes off on his bike at a certain speed, after seeing a police car at a distance of 250 m. The police car starts chasing the thief and catches him. If the thief runs 1.5 km before being caught and the speed of the police car is 70 km/h, then what is the speed of thief's bike (in km/h)?

- Ans 1. 65
 2. 50
 3. 55
 4. 60

Question ID : 630680428724
 Option 1 ID : 6306801672943
 Option 2 ID : 6306801672940
 Option 3 ID : 6306801672941
 Option 4 ID : 6306801672942
 Status : Answered
 Chosen Option : 2

Q.16 Study the below data and answer the question that follows.

Partners	Percentage of shares
Jeevan	10%
Kiran	15%
Lokesh	8%
Rasool	22%
Meera	45%

The company has issued 10 lakh shares between its five partners. If Jeevan offers to sell 20,000 of his shares to Meera, how many shares will Meera have?

- Ans 1. 4,60,000
 2. 4,80,000
 3. 4,70,000
 4. 5,10,000

Question ID : 630680428114
 Option 1 ID : 6306801670503
 Option 2 ID : 6306801670502
 Option 3 ID : 6306801670501
 Option 4 ID : 6306801670500
 Status : Answered
 Chosen Option : 3

Q.17 The sum of two consecutive even numbers is 174. Find the smaller number.

- Ans 1. 86
 2. 84
 3. 88
 4. 90

Question ID : 630680196644
Option 1 ID : 630680762877
Option 2 ID : 630680762875
Option 3 ID : 630680762878
Option 4 ID : 630680762876
Status : Answered
Chosen Option : 1

Q.18 The central angle of a sector is 80° and whose length is 96π . What is the radius of the circle?

- Ans 1. 196 units
 2. 216 units
 3. 204 units
 4. 116 units

Question ID : 630680296207
Option 1 ID : 6306801152497
Option 2 ID : 6306801152499
Option 3 ID : 6306801152498
Option 4 ID : 6306801152496
Status : Answered
Chosen Option : 2

Q.19 Simplify the following expression.

$$(60 + 64 \div 4 \text{ of } 4) \times \{1000 \div ((10 \text{ of } (3 + 2)) \times 2 \text{ of } 5)\} - 28 + (100 \times 3 \text{ of } 3).$$

- Ans 1. 1000
 2. 100
 3. 500
 4. 600

Question ID : 630680421901
Option 1 ID : 6306801646046
Option 2 ID : 6306801646047
Option 3 ID : 6306801646044
Option 4 ID : 6306801646045
Status : Answered
Chosen Option : 1



Q In ΔABC , $DE \parallel BC$ and $5AE = 3EC$. If $AB = 6.4$ units, then the value of DB (in units) is:

.
2
0

Ans 1. 3.2

2. 5

3. 4

4. 2.4

Question ID : 630680397157

Option 1 ID : 6306801548687

Option 2 ID : 6306801548685

Option 3 ID : 6306801548686

Option 4 ID : 6306801548684

Status : Answered

Chosen Option : 3

Q.21 In a circle with center O , an arc ABC subtends an angle of 138° at the centre of the circle. The chord AB is produced to a point P . Then, the measure of $\angle CBP$ is:

Ans 1. 42°

2. 111°

3. 69°

4. 108°

Question ID : 630680397660

Option 1 ID : 6306801550562

Option 2 ID : 6306801550561

Option 3 ID : 6306801550563

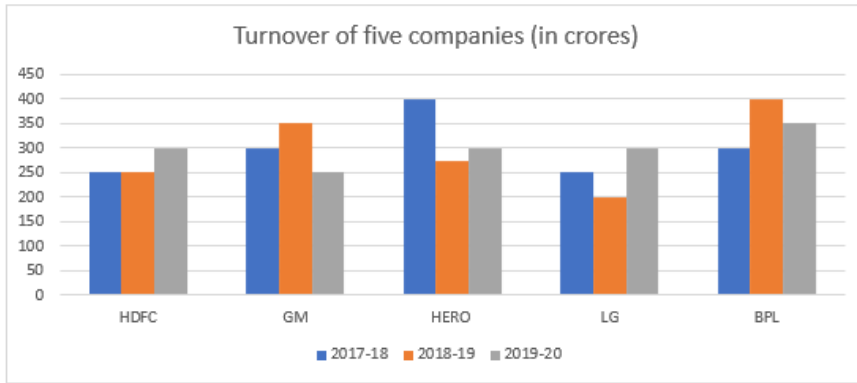
Option 4 ID : 6306801550564

Status : Answered

Chosen Option : 2



Q.22 The given bar graph shows the turnover of five companies (in crores).



What is the difference between the average sales turnover of all the companies put together between the years 2018-2019 and 2019-2020?.

- Ans
- 1. ₹2 crore
 - 2. ₹5 crore
 - 3. ₹6.5 crore
 - 4. ₹3.5 crore

Question ID : 630680428230
 Option 1 ID : 6306801670964
 Option 2 ID : 6306801670966
 Option 3 ID : 6306801670967
 Option 4 ID : 6306801670965
 Status : Answered
 Chosen Option : 2

Q.23 Suresh's expenditure and savings are in the ratio of 3 : 1. His income increases by 25%. If his savings increase by 20%, then by how much percentage does his expenditure increase?

- Ans
- 1. $26\frac{2}{3}\%$
 - 2. $27\frac{2}{3}\%$
 - 3. $25\frac{2}{3}\%$
 - 4. $28\frac{2}{3}\%$

Question ID : 630680397737
 Option 1 ID : 6306801550963
 Option 2 ID : 6306801550964
 Option 3 ID : 6306801550962
 Option 4 ID : 6306801550965
 Status : Answered
 Chosen Option : 1

Q.24 Half litre of a solution contains 15% of alcohol. To change the alcohol concentration to 50%, find the quantity of alcohol to be mixed.

- Ans**
- 1. 400 ml
 - 2. 350 ml
 - 3. 175 ml
 - 4. 250 ml

Question ID : 630680518837
 Option 1 ID : 6306802027823
 Option 2 ID : 6306802027822
 Option 3 ID : 6306802027820
 Option 4 ID : 6306802027821
 Status : Answered
 Chosen Option : 2

Q.25

In a ΔABC , right angled at B if $\tan C = \sqrt{3}$, then find $\frac{\sin^2 C + \cos^2 C}{1 + \cot^2 C}$.

- Ans**
- 1. $\frac{16}{3}$
 - 2. $\frac{3}{4}$
 - 3. $\frac{3}{16}$
 - 4. $\frac{4}{15}$

Question ID : 630680526509
 Option 1 ID : 6306802058105
 Option 2 ID : 6306802058104
 Option 3 ID : 6306802058102
 Option 4 ID : 6306802058103
 Status : Answered
 Chosen Option : 2

Section : English Comprehension

Q.1 Select the INCORRECTLY spelt word.

- Ans**
- 1. Accessibility
 - 2. Apparatus
 - 3. Aptitude
 - 4. Atrocios

Question ID : 630680409973
 Option 1 ID : 6306801598724
 Option 2 ID : 6306801598722
 Option 3 ID : 6306801598723
 Option 4 ID : 6306801598721
 Status : Answered
 Chosen Option : 4

Q.2 Identify the error in the given sentence.
My colleague always works latest than me.

- Ans** 1. My colleague
 2. latest
 3. than me.
 4. always works

Question ID : **630680402695**
Option 1 ID : **6306801570381**
Option 2 ID : **6306801570383**
Option 3 ID : **6306801570384**
Option 4 ID : **6306801570382**
Status : **Answered**
Chosen Option : **2**

Q.3 Select the option that can be used as a one-word substitute for the given group of words.

Loud enough to be heard.

- Ans** 1. Audit
 2. Audacity
 3. Audacious
 4. Audible

Question ID : **630680414788**
Option 1 ID : **6306801617898**
Option 2 ID : **6306801617896**
Option 3 ID : **6306801617895**
Option 4 ID : **6306801617897**
Status : **Answered**
Chosen Option : **4**

Q.4 Identify from the given options the word which is similar in meaning to the following word.
Munificent

- Ans** 1. Miserly
 2. Malicious
 3. Underappreciated
 4. Magnanimous

Question ID : **630680360069**
Option 1 ID : **6306801402222**
Option 2 ID : **6306801402223**
Option 3 ID : **6306801402221**
Option 4 ID : **6306801402224**
Status : **Answered**
Chosen Option : **1**

Q.5 Parts of a sentence are given below in jumbled order. Arrange the parts in the correct order to form a meaningful sentence.

- P) once said
- Q) a wise man
- R) that action speaks
- S) louder than words

- Ans**
- 1. SQPR
 - 2. QSRP
 - 3. PQRS
 - 4. QPRS

Question ID : 630680377251
Option 1 ID : 6306801470069
Option 2 ID : 6306801470070
Option 3 ID : 6306801470067
Option 4 ID : 6306801470068
Status : Answered
Chosen Option : 4

Q.6 Select the most appropriate option to fill in the blank.

Just bite the _____ and tell him the truth.

- Ans**
- 1. shot
 - 2. gun
 - 3. dust
 - 4. bullet

Question ID : 630680123954
Option 1 ID : 630680480674
Option 2 ID : 630680480676
Option 3 ID : 630680480677
Option 4 ID : 630680480675
Status : Answered
Chosen Option : 4

Q.7 Select the option that expresses the opposite meaning of the underlined word.
In front of the big screen, this behaviour is generally considered taboo.

- Ans**
- 1. Prescription
 - 2. Obedience
 - 3. Promotion
 - 4. Acceptable

Question ID : 630680377997
Option 1 ID : 6306801473047
Option 2 ID : 6306801473049
Option 3 ID : 6306801473050
Option 4 ID : 6306801473048
Status : Answered
Chosen Option : 2



Q.8 Select the most appropriate option that can substitute the underlined word in the given sentence.

Verity is a good virtue for human life.

- Ans**
- 1. Truth
 - 2. Information
 - 3. Knowledge
 - 4. Cooperation

Question ID : 630680161536
Option 1 ID : 630680625474
Option 2 ID : 630680625472
Option 3 ID : 630680625473
Option 4 ID : 630680625475
Status : Answered
Chosen Option : 3

Q.9 Parts of a sentence are given below in jumbled order. Arrange the parts in the correct order to form a meaningful sentence.

Founding father / is / of / New Historicism / Greenbelt / considered / the.

- Ans**
- 1. Greenbelt is the founding father of New Historicism considered.
 - 2. Greenbelt is considered the founding father of New Historicism.
 - 3. The founding father of New Historicism is considered Greenbelt.
 - 4. The founding father is considered Greenbelt of New Historicism.

Question ID : 63068054130
Option 1 ID : 630680208564
Option 2 ID : 630680208563
Option 3 ID : 630680208562
Option 4 ID : 630680208565
Status : Answered
Chosen Option : 2

Q.10 Select the most appropriate verb / verb phrase to fill in the blank.

The team _____ the championship before their star player got injured.

- Ans**
- 1. has won
 - 2. was won
 - 3. win
 - 4. had won

Question ID : 630680514383
Option 1 ID : 6306802010159
Option 2 ID : 6306802010157
Option 3 ID : 6306802010158
Option 4 ID : 6306802010160
Status : Answered
Chosen Option : 4



Q.11 Select the correct ANTONYM of the underlined word to fill in the blank and complete the following sentence.

He is always active in a party but _____ in the class.

- Ans
- 1. angry
 - 2. inert
 - 3. careless
 - 4. naughty

Question ID : 630680168029
Option 1 ID : 630680650746
Option 2 ID : 630680650745
Option 3 ID : 630680650744
Option 4 ID : 630680650747
Status : Answered
Chosen Option : 2

Q.12 Select the most appropriate option that can rectify the incorrectly spelt word in the following sentence.

In our quest for power, we often fail to acknowlege the existence of other people.

- Ans
- 1. acknowledge
 - 2. accknowledge
 - 3. acknowlede
 - 4. acknowledje

Question ID : 630680360094
Option 1 ID : 6306801402322
Option 2 ID : 6306801402324
Option 3 ID : 6306801402323
Option 4 ID : 6306801402321
Status : Answered
Chosen Option : 1

Q.13 Select the option that can be used as a one-word substitute for the given group of words.

Money collected from people for a cause.

- Ans
- 1. Deposit
 - 2. Fund
 - 3. Collection
 - 4. Savings

Question ID : 630680158477
Option 1 ID : 630680613433
Option 2 ID : 630680613434
Option 3 ID : 630680613435
Option 4 ID : 630680613432
Status : Answered
Chosen Option : 3



Q.14 Select the most appropriate meaning of the underlined idiom.

Bincy's mother kept her cards close to her chest.

- Ans 1. Kept her plans and thoughts hidden
 2. Informed that all the cards must be kept safe
 3. Kept her purse and money by herself
 4. Decided to show more affection

Question ID : 630680366848
Option 1 ID : 6306801428871
Option 2 ID : 6306801428872
Option 3 ID : 6306801428869
Option 4 ID : 6306801428870
Status : Answered
Chosen Option : 4

Q.15 Select the option that expresses the following sentence in active voice.

The issue has been successfully resolved by the customer care team.

- Ans 1. The customer care team has successfully resolved the issue.
 2. The issue has successfully resolved the customer care team.
 3. The customer care team successfully resolves the issue.
 4. The customer care team successfully resolved the issue.

Question ID : 630680415162
Option 1 ID : 6306801619397
Option 2 ID : 6306801619396
Option 3 ID : 6306801619398
Option 4 ID : 6306801619395
Status : Answered
Chosen Option : 1

Q.16 Select the most appropriate option to fill in the blank.

I like bread made up of corn _____.

- Ans 1. failure
 2. floor
 3. flour
 4. flower

Question ID : 630680129336
Option 1 ID : 630680500965
Option 2 ID : 630680500962
Option 3 ID : 630680500964
Option 4 ID : 630680500963
Status : Answered
Chosen Option : 3



Q.17 Sentences of a paragraph are given below in jumbled order. Arrange the sentences in the correct order to form a meaningful and coherent paragraph.

- A.He remembered her as she once was – an eager, glowing girl.
- B.He had not seen her for nearly thirteen years.
- C.Mr. Satterthwaite went to meet her.
- D.And now he saw – a Frozen Lady.

Ans ✓ 1. CBAD

✗ 2. ABCD

✗ 3. DBAC

✗ 4. DCBA

Question ID : 630680375514

Option 1 ID : 6306801463214

Option 2 ID : 6306801463211

Option 3 ID : 6306801463213

Option 4 ID : 6306801463212

Status : Answered

Chosen Option : 1

Q.18 Select the option that expresses the following sentence in passive voice.
Gill scored 3 centuries in Tata IPL 2023

Ans ✗ 1. 3 centuries had been scored by Gill in Tata IPL 2023.

✓ 2. 3 centuries were scored by Gill in Tata IPL 2023.

✗ 3. 3 centuries has been scored by Gill in Tata IPL 2023.

✗ 4. 3 centuries were being scored by Gill in Tata IPL 2023.

Question ID : 630680415244

Option 1 ID : 6306801619723

Option 2 ID : 6306801619725

Option 3 ID : 6306801619724

Option 4 ID : 6306801619726

Status : Answered

Chosen Option : 2

Q.19 Select the most appropriate ANTONYM of the given word.
Insert

Ans ✓ 1. Remove

✗ 2. Select

✗ 3. Inject

✗ 4. Inform

Question ID : 630680517558

Option 1 ID : 6306802022629

Option 2 ID : 6306802022630

Option 3 ID : 6306802022628

Option 4 ID : 6306802022631

Status : Answered

Chosen Option : 1



Q.20 Select the most appropriate synonym of the given word.

Carcass

- Ans** 1. Scrap
 2. Corpse
 3. Prison
 4. Gale

Question ID : **630680145487**

Option 1 ID : **630680562923**

Option 2 ID : **630680562924**

Option 3 ID : **630680562922**

Option 4 ID : **630680562925**

Status : **Not Answered**

Chosen Option : --

Comprehension:

In the following passage, some words have been deleted. Read the passage carefully and select the most appropriate option to fill in each blank.

Social media companies (1)_____ claim that they promote democracy and are dedicated to the empowerment of ordinary individuals. The assertion (2)_____ entirely unfounded.

Recent history shows how (3)_____ citizens have been mobilised against totalitarian regimes on social networking sites. Starting from MeToo to Black Lives Matter, digital networks (4)_____ indispensable in bringing together critical voices against social and political (5)_____.

SubQuestion No : 21

Q.21 Select the most appropriate option to fill in blank no. 1.

- Ans** 1. never
 2. don't
 3. frequently
 4. seldom

Question ID : **630680154515**

Option 1 ID : **630680597873**

Option 2 ID : **630680597875**

Option 3 ID : **630680597872**

Option 4 ID : **630680597874**

Status : **Answered**

Chosen Option : 1



Comprehension:

In the following passage, some words have been deleted. Read the passage carefully and select the most appropriate option to fill in each blank.

Social media companies (1)_____ claim that they promote democracy and are dedicated to the empowerment of ordinary individuals. The assertion (2)_____ entirely unfounded. Recent history shows how (3)_____ citizens have been mobilised against totalitarian regimes on social networking sites. Starting from MeToo to Black Lives Matter, digital networks (4)_____ indispensable in bringing together critical voices against social and political (5)_____ .

SubQuestion No : 22

Q.22 Select the most appropriate option to fill in blank no. 2.

- Ans 1. cannot
 2. may not be
 3. should
 4. shall

Question ID : **630680154516**

Option 1 ID : **630680597879**

Option 2 ID : **630680597878**

Option 3 ID : **630680597877**

Option 4 ID : **630680597876**

Status : **Answered**

Chosen Option : **2**

Comprehension:

In the following passage, some words have been deleted. Read the passage carefully and select the most appropriate option to fill in each blank.

Social media companies (1)_____ claim that they promote democracy and are dedicated to the empowerment of ordinary individuals. The assertion (2)_____ entirely unfounded. Recent history shows how (3)_____ citizens have been mobilised against totalitarian regimes on social networking sites. Starting from MeToo to Black Lives Matter, digital networks (4)_____ indispensable in bringing together critical voices against social and political (5)_____ .

SubQuestion No : 23

Q.23 Select the most appropriate option to fill in blank no. 3.

- Ans 1. neutral
 2. alien
 3. foreign
 4. common

Question ID : **630680154517**

Option 1 ID : **630680597881**

Option 2 ID : **630680597882**

Option 3 ID : **630680597883**

Option 4 ID : **630680597880**

Status : **Answered**

Chosen Option : **4**



SSC CGL (Tier-1) STUDY NOTES



- ▶ 100% CGL Exam Syllabus Covered
- ▶ 12 Books, 1300+ Pages
- ▶ 5600+ MCQs
- ▶ Previous Year Papers & Mocks
- ▶ 1 Year Current Affairs
- ▶ Support & Guidance

50% OFF



SSCPORTAL.IN

FREE SHIPPING

SSC CGL PDF NOTES

100% Syllabus | 1300+ Pages

50% OFF

CLICK HERE



Comprehension:

In the following passage, some words have been deleted. Read the passage carefully and select the most appropriate option to fill in each blank.

Social media companies (1)_____ claim that they promote democracy and are dedicated to the empowerment of ordinary individuals. The assertion (2)_____ entirely unfounded. Recent history shows how (3)_____ citizens have been mobilised against totalitarian regimes on social networking sites. Starting from MeToo to Black Lives Matter, digital networks (4)_____ indispensable in bringing together critical voices against social and political (5)_____ .

SubQuestion No : 24

Q.24 Select the most appropriate option to fill in blank no. 4.

- Ans**
- 1. can
 - 2. were
 - 3. that
 - 4. have been

Question ID : **630680154518**

Option 1 ID : **630680597886**

Option 2 ID : **630680597887**

Option 3 ID : **630680597884**

Option 4 ID : **630680597885**

Status : **Answered**

Chosen Option : **3**

Comprehension:

In the following passage, some words have been deleted. Read the passage carefully and select the most appropriate option to fill in each blank.

Social media companies (1)_____ claim that they promote democracy and are dedicated to the empowerment of ordinary individuals. The assertion (2)_____ entirely unfounded. Recent history shows how (3)_____ citizens have been mobilised against totalitarian regimes on social networking sites. Starting from MeToo to Black Lives Matter, digital networks (4)_____ indispensable in bringing together critical voices against social and political (5)_____ .

SubQuestion No : 25

Q.25 Select the most appropriate option to fill in blank no. 5.

- Ans**
- 1. democracy
 - 2. election
 - 3. justice
 - 4. injustice

Question ID : **630680154519**

Option 1 ID : **630680597890**

Option 2 ID : **630680597891**

Option 3 ID : **630680597888**

Option 4 ID : **630680597889**

Status : **Answered**

Chosen Option : **4**

