

**Combined Graduate Level Examination 2024 Tier I**

Roll Number	
Candidate Name	
Venue Name	
Exam Date	13/09/2024
Exam Time	12:30 PM - 1:30 PM
Subject	Combined Graduate Level Examination Tier I

Section : General Intelligence and Reasoning

**Q.1** In a certain code language, 'GLOBAL' is written as '221714272817', 'FOREST' is written as '23141124109', how will 'IMPACT' be written in that language?

- Ans
- 1. 20161328269
  - 2. 18141126247
  - 3. 20161226259
  - 4. 20161327259

Question ID : 630680416124  
Option 1 ID : 6306801623262  
Option 2 ID : 6306801623261  
Option 3 ID : 6306801623260  
Option 4 ID : 6306801623259  
Status : Answered  
Chosen Option : 1

**Q.2** Select the triad in which the numbers are related to each other in the same way as the numbers in the following triads.

16-40-100  
8-20-50

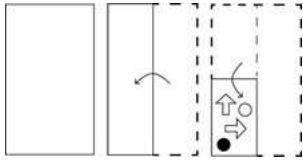
(NOTE : Operations should be performed on the whole numbers, without breaking down the numbers into its constituent digits. E.g. 13 – Operations on 13 such as adding /deleting /multiplying etc., to 13 can be performed. Breaking down 13 into 1 and 3 and then performing mathematical operations on 1 and 3 is not allowed.)

- Ans
- 1. 18-50-110
  - 2. 12-30-120
  - 3. 24-60-150
  - 4. 22-74-185

Question ID : 630680132369  
Option 1 ID : 630680512639  
Option 2 ID : 630680512640  
Option 3 ID : 630680512638  
Option 4 ID : 630680512641  
Status : Answered  
Chosen Option : 3



Q.3 The sequence of folding a paper and the manner in which the folded paper is cut is shown in the following figures. How would this paper look when unfolded?

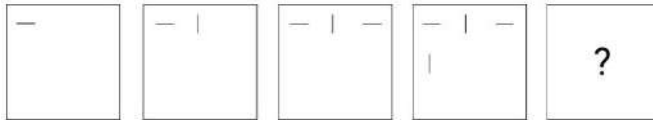


Ans

- ✗ 1.
- ✗ 2.
- ✗ 3.
- ✓ 4.

Question ID : 630680344227  
 Option 1 ID : 6306801339221  
 Option 2 ID : 6306801339223  
 Option 3 ID : 6306801339222  
 Option 4 ID : 6306801339224  
 Status : Answered  
 Chosen Option : 4

Q.4 Select the figure from among the given options that can replace the question mark (?) in the following series.



Ans

- ✗ 1.
- ✗ 2.
- ✗ 3.
- ✓ 4.

Question ID : 630680339305  
 Option 1 ID : 6306801319791  
 Option 2 ID : 6306801319792  
 Option 3 ID : 6306801319789  
 Option 4 ID : 6306801319790  
 Status : Answered  
 Chosen Option : 4

**Q.5** Select the option that is related to the fifth term in the same way as the second term is related to the first term and the fourth term is related to the third term.  
 READER : ERZWRE :: SERIAL : ESIRLA :: JINGLE : ?

- Ans
- 1. JIGNEL
  - 2. IJGNEL
  - 3. JIMTEL
  - 4. IJMTEL

Question ID : 630680416200  
 Option 1 ID : 6306801623563  
 Option 2 ID : 6306801623565  
 Option 3 ID : 6306801623566  
 Option 4 ID : 6306801623564  
 Status : Answered  
 Chosen Option : 4

**Q.6** In a certain code language,  
 'A + B' means 'A is the mother of B',  
 'A - B' means 'A is the father of B',  
 'A \$ B' means 'A is the son of B',  
 'A % B' means 'A is the sister of B',  
 'A / B' means 'A is the wife of B' and  
 'A \* B' means 'A is the husband of B'.

Which of the following means P is the Son's wife of T?

- i. T / B - K \* P + O
- ii. T + K \* P + B % O
- iii. K \* P + B % T + P
- iv. P + T \* K + B % O

- Ans
- 1. Only ii
  - 2. iii and iv
  - 3. Only i
  - 4. Both i and ii

Question ID : 630680797023  
 Option 1 ID : 6306803123049  
 Option 2 ID : 6306803123051  
 Option 3 ID : 6306803123048  
 Option 4 ID : 6306803123050  
 Status : Answered  
 Chosen Option : 1

**Q.7** In a certain code language, 'RETAINED' is written as 'ENIATERD' and 'MATURITY' is written as 'TIRUTAMY'. How will 'FIREWALL' be written in that language?

- Ans
- 1. LAWEFIFR
  - 2. FLIREWAL
  - 3. LAWERIFL
  - 4. FLLAWERI

Question ID : 630680172174  
 Option 1 ID : 630680667133  
 Option 2 ID : 630680667134  
 Option 3 ID : 630680667132  
 Option 4 ID : 630680667135  
 Status : Answered  
 Chosen Option : 3

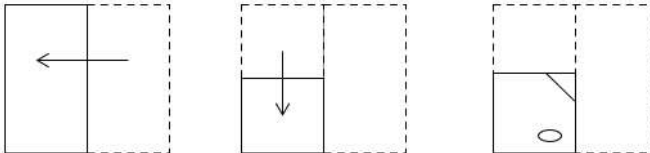
**Q.8** What should come in place of the question mark (?) in the given series?

9 17 33 65 129 ?

- Ans
- 1. 259
  - 2. 257
  - 3. 258
  - 4. 254

Question ID : 630680772992  
 Option 1 ID : 6306803029948  
 Option 2 ID : 6306803029945  
 Option 3 ID : 6306803029947  
 Option 4 ID : 6306803029946  
 Status : Answered  
 Chosen Option : 2

**Q.9** A paper is folded and cut as shown below. How will it appear when unfolded?



**Ans**

- ✓ 1.
- ✗ 2.
- ✗ 3.
- ✗ 4.

Question ID : 630680296644  
 Option 1 ID : 6306801154229  
 Option 2 ID : 6306801154228  
 Option 3 ID : 6306801154227  
 Option 4 ID : 6306801154230  
 Status : Answered  
 Chosen Option : 1

**Q.10** 16 is related to 30 following a certain logic. Following the same logic, 81 is related to 110. To which of the following is 49 related, following the same logic? (NOTE : Operations should be performed on the whole numbers, without breaking down the numbers into its constituent digits. E.g. 13 – Operations on 13 such as adding /deleting /multiplying etc., to 13 can be performed. Breaking down 13 into 1 and 3 and then performing mathematical operations on 1 and 3 is not allowed.)

- Ans**
- ✗ 1. 60
  - ✗ 2. 64
  - ✗ 3. 90
  - ✓ 4. 72

Question ID : 630680326611  
 Option 1 ID : 6306801270529  
 Option 2 ID : 6306801270531  
 Option 3 ID : 6306801270532  
 Option 4 ID : 6306801270530  
 Status : Answered  
 Chosen Option : 4

**Q.11** Read the given statements and conclusions carefully. Assuming that the information given in the statements is true, even if it appears to be at variance with commonly known facts, decide which of the given conclusions logically follow(s) from the statements.

**Statements:**

Some Toys are Plastic.

Some Plastic are Metal.

No Metal is Chemical.

**Conclusions:**

(I) Some Chemicals are Plastic.

(II) No Toy is a Chemical.

**Ans**  1. Only conclusion (I) follows.

2. Both conclusions (I) and (II) follow.

3. Neither conclusion (I) nor (II) follows.

4. Only conclusion (II) follows.

Question ID : 630680388252  
Option 1 ID : 6306801513530  
Option 2 ID : 6306801513533  
Option 3 ID : 6306801513532  
Option 4 ID : 6306801513531  
Status : Answered  
Chosen Option : 3

**Q.12** The position of how many letters will remain unchanged if each of the letters in the word 'SIGHTED' is arranged in the English alphabetical order?

**Ans**  1. None

2. Three

3. Two

4. One

Question ID : 630680327760  
Option 1 ID : 6306801275029  
Option 2 ID : 6306801275032  
Option 3 ID : 6306801275031  
Option 4 ID : 6306801275030  
Status : Answered  
Chosen Option : 3



# SSC CGL (Tier-1) STUDY NOTES



- ▶ 100% CGL Exam Syllabus Covered
- ▶ 12 Books, 1300+ Pages
- ▶ 5600+ MCQs
- ▶ Previous Year Papers & Mocks
- ▶ 1 Year Current Affairs
- ▶ Support & Guidance

**50% OFF**



**100% SAFE**

FREE SHIPPING 

[SSCPORTAL.IN](http://SSCPORTAL.IN)

# SSC CGL PDF NOTES

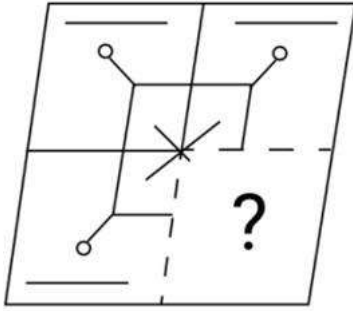
100% Syllabus | 1300+ Pages

**50% OFF**

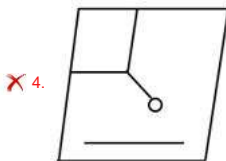
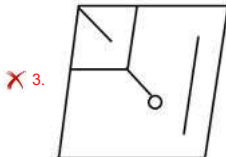
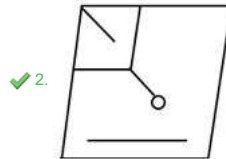
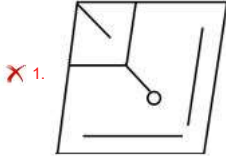
[CLICK HERE](#)



Q.13 Select the option figure that will replace the question mark (?) in the figure given below to complete the pattern.



Ans



Question ID : 630680318350  
 Option 1 ID : 6306801238479  
 Option 2 ID : 6306801238478  
 Option 3 ID : 6306801238477  
 Option 4 ID : 6306801238480  
 Status : Answered  
 Chosen Option : 2

Q.14 Which of the following terms will replace the question mark (?) in the given series?  
 RLYV, PJWT, NHUR, ?, JDQN

- Ans
- ✗ 1. LFTP
  - ✗ 2. LGTP
  - ✓ 3. LFSP
  - ✗ 4. LGSP

Question ID : 630680416990  
 Option 1 ID : 6306801626725  
 Option 2 ID : 6306801626726  
 Option 3 ID : 6306801626723  
 Option 4 ID : 6306801626724  
 Status : Answered  
 Chosen Option : 3

Q.15 Three of the following four number-pairs are alike in a certain way and thus form a group. Which number-pair does NOT belong to that group?  
(NOTE: The relation should be found without breaking down the numbers into its constituent digits)

- Ans  1. 31, 41  
 2. 73, 79  
 3. 83, 97  
 4. 61, 71

Question ID : 630680412043  
Option 1 ID : 6306801607008  
Option 2 ID : 6306801607009  
Option 3 ID : 6306801607010  
Option 4 ID : 6306801607007  
Status : Answered  
Chosen Option : 2

Q.16 Read the given statements and conclusions carefully. You have to take the given statements to be true if they seem to be at variance from commonly known facts. You have to decide which conclusion(s) logically follow(s) from the given statements.

Statements:  
All fruit are sour.  
Some sour are vegetables.  
Some vegetables are green.

Conclusions:  
(I) All vegetables are sour.  
(II) Some sour are green.

- Ans  1. Neither conclusion (I) nor (II) follows  
 2. Both conclusions (I) and (II) follow  
 3. Only conclusion (II) follows  
 4. Only conclusion (I) follows

Question ID : 630680387331  
Option 1 ID : 6306801510012  
Option 2 ID : 6306801510013  
Option 3 ID : 6306801510011  
Option 4 ID : 6306801510010  
Status : Answered  
Chosen Option : 1

Q.17 What will come in place of the question mark (?) in the following equation, if 'x' is replaced by '+', '+' is replaced by 'x', 'x' is replaced by '-' and '-' remains unchanged?  
 $42 \times 3 \div 4 + 9 - 17 = ?$

- Ans  1. 33  
 2. 30  
 3. 23  
 4. 29

Question ID : 630680338982  
Option 1 ID : 6306801318517  
Option 2 ID : 6306801318518  
Option 3 ID : 6306801318519  
Option 4 ID : 6306801318520  
Status : Answered  
Chosen Option : 1

Q.18 'रिक्त' का संबंध 'खाली' से उसी प्रकार है, जैसे 'भीड़' का संबंध '\_\_\_\_\_ ' से है।

- Ans  1. अकेला  
 2. जमघट  
 3. उखड़ना  
 4. कष्ट

Question ID : 630680416730  
Option 1 ID : 6306801625685  
Option 2 ID : 6306801625684  
Option 3 ID : 6306801625686  
Option 4 ID : 6306801625683  
Status : Answered  
Chosen Option : 2

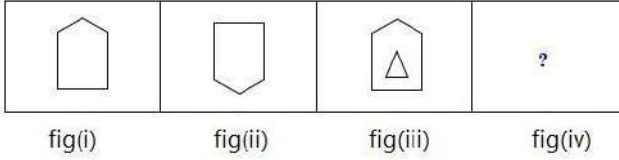




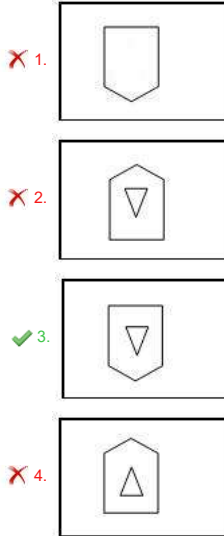
Q.19 Select the option that is related to the third figure in the same way as the second figure is related to the first figure.

Follow the analogy-

Figure 1 : Figure 2 :: Figure 3 : ?

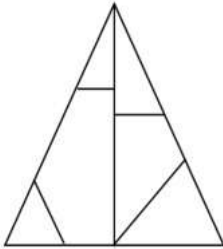


Ans



Question ID : 63068058823  
 Option 1 ID : 630680226914  
 Option 2 ID : 630680226915  
 Option 3 ID : 630680226917  
 Option 4 ID : 630680226916  
 Status : Answered  
 Chosen Option : 3

Q.20 What is the number of triangles in the following figure?



- Ans
- 1. 9
  - 2. 7
  - 3. 6
  - 4. 8

Question ID : 630680285674  
 Option 1 ID : 6306801110663  
 Option 2 ID : 6306801110665  
 Option 3 ID : 6306801110666  
 Option 4 ID : 6306801110664  
 Status : Answered  
 Chosen Option : 4

**Q.21** What will come in place of the question mark (?) in the following equation, if '+' and '-' are interchanged and 'x' and '÷' are interchanged?  
 $107 + 2028 \times 6 - 427 \div 7 = ?$

- Ans
- 1. 2785
  - 2. 2758
  - 3. 2578
  - 4. 2268

Question ID : 630680411718  
 Option 1 ID : 6306801605709  
 Option 2 ID : 6306801605707  
 Option 3 ID : 6306801605708  
 Option 4 ID : 6306801605710  
 Status : Answered  
 Chosen Option : 2

**Q.22** Select the option that represents the letters which, when sequentially placed from left to right in the blanks below, will complete the letter series.  
 f h \_ h \_ g \_ f \_ h g \_ h \_ f \_ f \_ g \_ h \_ f

- Ans
- 1. ghffghfg
  - 2. ghfhgffg
  - 3. ghfhghfg
  - 4. ghfhghhg

Question ID : 630680261878  
 Option 1 ID : 6306801017169  
 Option 2 ID : 6306801017168  
 Option 3 ID : 6306801017167  
 Option 4 ID : 6306801017170  
 Status : Answered  
 Chosen Option : 4

**Q.23** Based on the position in the English alphabetical order, three of the following letter-clusters are alike in some manner and one is different. Select the odd letter-cluster.  
 Note: The odd one out is not based on the number of consonants/vowels or their position in the letter cluster.

- Ans
- 1. SVXZ
  - 2. TWYZ
  - 3. EHJK
  - 4. YBDE

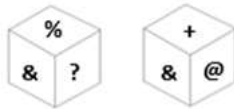
Question ID : 630680416106  
 Option 1 ID : 6306801623189  
 Option 2 ID : 6306801623188  
 Option 3 ID : 6306801623190  
 Option 4 ID : 6306801623187  
 Status : Answered  
 Chosen Option : 1

**Q.24** Select the triad in which the numbers are related to each other in the same way as are the numbers of the given triads.  
 (148, 126, 104), (98, 76, 54)  
 (NOTE : Operations should be performed on the whole numbers, without breaking down the numbers into its constituent digits. E.g. 13 – Operations on 13 such as adding /deleting /multiplying etc. to 13 can be performed. Breaking down 13 into 1 and 3 and then performing mathematical operations on 1 and 3 is not allowed)

- Ans
- 1. (149, 137, 115)
  - 2. (157, 135, 113)
  - 3. (128, 104, 82)
  - 4. (134, 102, 90)

Question ID : 630680319361  
 Option 1 ID : 6306801242351  
 Option 2 ID : 6306801242350  
 Option 3 ID : 6306801242352  
 Option 4 ID : 6306801242349  
 Status : Answered  
 Chosen Option : 2

**Q.25** Six symbols %, &, ?, +, \$ and @ are written on different faces of a dice. Two positions of this dice are shown in the figure below. Find the symbol on the face opposite to the one having @.



- Ans
- 1. \$
  - 2. %
  - 3. &
  - 4. ?

Question ID : 630680382716  
 Option 1 ID : 6306801491779  
 Option 2 ID : 6306801491782  
 Option 3 ID : 6306801491781  
 Option 4 ID : 6306801491780  
 Status : Answered  
 Chosen Option : 4

Section : General Awareness

**Q.1** Presently, which of the following countries is NOT a beneficiary of India's Duty-Free Tariff Preference (DFTP) Scheme?

- Ans
- 1. Rwanda
  - 2. Burundi
  - 3. Myanmar
  - 4. Angola

Question ID : 6306801048051  
 Option 1 ID : 6306804114251  
 Option 2 ID : 6306804114250  
 Option 3 ID : 6306804114252  
 Option 4 ID : 6306804114253  
 Status : Not Answered  
 Chosen Option : --

**Q.2** A small object is placed on the focus on the left side of a convex lens. Where will be the image formed?

- Ans
- 1. At infinity on the right side of the lens.
  - 2. At infinity on the left side of the lens.
  - 3. At the focus on the right side of the lens.
  - 4. At the centre on the right side of the lens.

Question ID : 630680517173  
 Option 1 ID : 6306802021089  
 Option 2 ID : 6306802021090  
 Option 3 ID : 6306802021088  
 Option 4 ID : 6306802021091  
 Status : Not Answered  
 Chosen Option : --

**Q.3** After the fall of the Guptas, different kingdoms emerged in various parts of India. Among them, the Maukharis emerged in which of the following areas?

- Ans
- 1. Thanesar
  - 2. Valabhi
  - 3. Kunnur
  - 4. Kannauj

Question ID : 630680412524  
 Option 1 ID : 6306801608920  
 Option 2 ID : 6306801608921  
 Option 3 ID : 6306801608919  
 Option 4 ID : 6306801608922  
 Status : Not Answered  
 Chosen Option : --

Q.4 Which of the following is a public sector industry?

- Ans
- 1. Adani
  - 2. BHEL
  - 3. Reliance
  - 4. Tata

Question ID : 630680302655  
Option 1 ID : 6306801177289  
Option 2 ID : 6306801177288  
Option 3 ID : 6306801177286  
Option 4 ID : 6306801177287  
Status : Answered  
Chosen Option : 2

Q.5 Indian National Army was formed in which of the following countries?

- Ans
- 1. Japan
  - 2. London
  - 3. Germany
  - 4. Singapore

Question ID : 630680412381  
Option 1 ID : 6306801608349  
Option 2 ID : 6306801608348  
Option 3 ID : 6306801608350  
Option 4 ID : 6306801608347  
Status : Answered  
Chosen Option : 4

Q.6 Which of the following nations won the ICC World Test Championship, defeating India, in 2023?

- Ans
- 1. Australia
  - 2. England
  - 3. South Africa
  - 4. New Zealand

Question ID : 630680510805  
Option 1 ID : 6306801996351  
Option 2 ID : 6306801996350  
Option 3 ID : 6306801996352  
Option 4 ID : 6306801996353  
Status : Not Answered  
Chosen Option : --

Q.7 One of the greatest of Chola ruler Rajaraja I ruled from 985 AD to \_\_\_\_\_.

- Ans
- 1. 1015 AD
  - 2. 1017 AD
  - 3. 1018 AD
  - 4. 1014 AD

Question ID : 630680412285  
Option 1 ID : 6306801607964  
Option 2 ID : 6306801607965  
Option 3 ID : 6306801607966  
Option 4 ID : 6306801607963  
Status : Not Answered  
Chosen Option : --

Q.8 Indian Olympic Association was established in which of the following years?

- Ans
- 1. 1929
  - 2. 1933
  - 3. 1927
  - 4. 1931

Question ID : 630680309503  
Option 1 ID : 6306801204166  
Option 2 ID : 6306801204168  
Option 3 ID : 6306801204165  
Option 4 ID : 6306801204167  
Status : Not Answered  
Chosen Option : --



Q.9 Which of following is NOT a device of parliamentary proceedings?

- Ans  1. Half-an-hour discussion  
 2. Full-day discussion  
 3. Two-hour (short) discussion  
 4. Zero-hour discussion

Question ID : 630680215487  
Option 1 ID : 630680835927  
Option 2 ID : 630680835930  
Option 3 ID : 630680835928  
Option 4 ID : 630680835929  
Status : Answered  
Chosen Option : 4

Q.10 Which of the following rivers marks the eastern-most boundary of the Himalayas?

- Ans  1. Kali  
 2. Teesta  
 3. Satluj  
 4. Brahmaputra

Question ID : 630680309100  
Option 1 ID : 6306801202578  
Option 2 ID : 6306801202579  
Option 3 ID : 6306801202577  
Option 4 ID : 6306801202580  
Status : Answered  
Chosen Option : 2

Q.11 Padma Bhushan awardee, Ustad Sabri Khan played which of the following musical instruments?

- Ans  1. Tabla  
 2. Sarod  
 3. Sarangi  
 4. Santoor

Question ID : 630680415787  
Option 1 ID : 6306801621894  
Option 2 ID : 6306801621892  
Option 3 ID : 6306801621891  
Option 4 ID : 6306801621893  
Status : Answered  
Chosen Option : 4

Q.12 Exfoliation is a form of \_\_\_\_\_.

- Ans  1. chemical weathering  
 2. biochemical weathering  
 3. physical weathering  
 4. mass wasting

Question ID : 630680184321  
Option 1 ID : 630680714293  
Option 2 ID : 630680714294  
Option 3 ID : 630680714295  
Option 4 ID : 630680714296  
Status : Not Answered  
Chosen Option : --

Q.13 Which of the following Articles deals with the composition of the Rajya Sabha?

- Ans  1. Article 92  
 2. Article 76  
 3. Article 84  
 4. Article 80

Question ID : 630680413115  
Option 1 ID : 6306801611285  
Option 2 ID : 6306801611286  
Option 3 ID : 6306801611284  
Option 4 ID : 6306801611283  
Status : Answered  
Chosen Option : 4



Q.14 Which of the following is India's national academy of dance?

- Ans
- 1. Lalit Kala Akademi
  - 2. Centre for Indian Classical Dances
  - 3. Centre for Cultural Resources and Training
  - 4. Sangeet Natak Akademi

Question ID : 630680157848  
Option 1 ID : 630680610920  
Option 2 ID : 630680610923  
Option 3 ID : 630680610922  
Option 4 ID : 630680610921  
Status : Answered  
Chosen Option : 4

Q.15 What is the empirically fitted relationship between the rate of change of money, wage, and rate of unemployment known as?

- Ans
- 1. Keynesian model
  - 2. Philips curve
  - 3. Friedman's model
  - 4. Baumol hypothesis

Question ID : 630680193004  
Option 1 ID : 630680748554  
Option 2 ID : 630680748556  
Option 3 ID : 630680748555  
Option 4 ID : 630680748553  
Status : Not Answered  
Chosen Option : --

Q.16 Match the following neighbouring countries with their official languages correctly.

Country name	Official Languages
1. Afghanistan	a. Dzongkha
2. Bhutan	b. Burmese
3. Pakistan	c. Dari
4. Myanmar	d. Urdu

- Ans
- 1. 1-c, 2-a, 3-b, 4-d
  - 2. 1-a, 2-c, 3-d, 4-b
  - 3. 1-c, 2-d, 3-a, 4-b
  - 4. 1-c, 2-a, 3-d, 4-b

Question ID : 630680162105  
Option 1 ID : 630680627730  
Option 2 ID : 630680627728  
Option 3 ID : 630680627729  
Option 4 ID : 630680627731  
Status : Answered  
Chosen Option : 4

Q.17 Who asked James Rennel to prepare the map of Hindustan?

- Ans
- 1. Lord Dalhousie
  - 2. Robert Clive
  - 3. Lord Ripen
  - 4. Warren Hastings

Question ID : 630680511545  
Option 1 ID : 6306801999305  
Option 2 ID : 6306801999303  
Option 3 ID : 6306801999304  
Option 4 ID : 6306801999302  
Status : Not Answered  
Chosen Option : --



**Q.18** The birth anniversary of Mahatma Gandhi is celebrated as the national festival of India. In which of the following years was Gandhi ji born?

- Ans
- 1. 1869
  - 2. 1890
  - 3. 1885
  - 4. 1877

Question ID : 630680216076  
Option 1 ID : 630680838279  
Option 2 ID : 630680838282  
Option 3 ID : 630680838281  
Option 4 ID : 630680838280  
Status : Answered  
Chosen Option : 1

**Q.19** Who among the following is appointed as the new Chairman of Pension Fund Regulatory and Development Authority (PFRDA) in March 2023?

- Ans
- 1. Mamta Shankar
  - 2. Supratim Bandopadhyay
  - 3. Shasikanta Das
  - 4. Deepak Mohanty

Question ID : 630680413025  
Option 1 ID : 6306801610925  
Option 2 ID : 6306801610923  
Option 3 ID : 6306801610926  
Option 4 ID : 6306801610924  
Status : Not Answered  
Chosen Option : --

**Q.20** Transition elements are the elements that are found in Groups 3-12 of the modern periodic table, that constitute the \_\_\_\_\_.

- Ans
- 1. f-block
  - 2. d-block
  - 3. p-block
  - 4. s-block

Question ID : 63068092594  
Option 1 ID : 630680359109  
Option 2 ID : 630680359108  
Option 3 ID : 630680359107  
Option 4 ID : 630680359106  
Status : Not Answered  
Chosen Option : --

**Q.21** Which Article in the fundamental duty applies, when a construction worker takes his 8-year son to the site rather than sending him to school?

- Ans
- 1. Article 51A (h)
  - 2. Article 51A (i)
  - 3. Article 51A (j)
  - 4. Article 51A (k)


Question ID : 630680229958  
Option 1 ID : 630680892271  
Option 2 ID : 630680892272  
Option 3 ID : 630680892273  
Option 4 ID : 630680892274  
Status : Answered  
Chosen Option : 4

**Q.22** The Nandi Award for Best Male Playback Singer was instituted by which state in the year 1977?

- Ans
- 1. Andhra Pradesh
  - 2. Maharashtra
  - 3. Tripura
  - 4. Gujarat

Question ID : 630680511797  
Option 1 ID : 6306802000159  
Option 2 ID : 6306802000161  
Option 3 ID : 6306802000160  
Option 4 ID : 6306802000158  
Status : Not Answered  
Chosen Option : --

# कर्मचारी चयन आयोग (CGL) परीक्षा अध्ययन सामग्री



FREE SHIPPING

- ▶ 100% Syllabus Covered
- ▶ 9 Books, 1000+ Pages - PRINT COPY
- ▶ 3000+ MCQs - PRINT COPY
- ▶ 08 Year Solved Papers & Mock Tests (PDF Copy)
- ▶ One Year Current Affairs (PDF Copy)

हिन्दी माध्यम

50% OFF

SSCPORTAL.IN

# SSC CGL HINDI PDF NOTES

100% Syllabus | 1,000+ Pages



CLICK HERE

<https://sscportal.in/study-kit/cgl/tier-1-hindi>



**Q.23 Which Bill was passed by the Parliament, in July 2021, to help in the availability of working capital for the micro, small and medium enterprises sector?**

- Ans  1. The Factoring Regulation (Amendment) Bill, 2021  
 2. The Minerals Laws (Amendment) Bill, 2020  
 3. The Insolvency and Bankruptcy Code (Amendment) Bill, 2021  
 4. The Essential Commodities (Amendment) Bill, 2020

Question ID : 630680158398  
 Option 1 ID : 630680613122  
 Option 2 ID : 630680613121  
 Option 3 ID : 630680613123  
 Option 4 ID : 630680613120  
 Status : Not Answered  
 Chosen Option : --

**Q.24 Identify the structural formula for magnesium hydroxide.**

- Ans  1.  $Mg(OH)_2$   
 2.  $MgO_2$   
 3.  $Mg_2H_2$   
 4.  $MgOH$

Question ID : 630680407436  
 Option 1 ID : 6306801588684  
 Option 2 ID : 6306801588683  
 Option 3 ID : 6306801588685  
 Option 4 ID : 6306801588682  
 Status : Answered  
 Chosen Option : 1

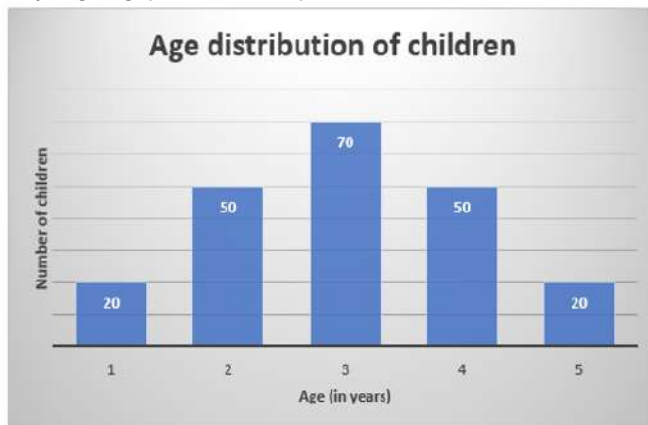
**Q.25 What kind of phyllotaxy was examined in the Guava plant?**

- Ans  1. Superimposed  
 2. Whorled  
 3. Alternate  
 4. Opposite

Question ID : 630680210519  
 Option 1 ID : 630680816237  
 Option 2 ID : 630680816238  
 Option 3 ID : 630680816235  
 Option 4 ID : 630680816236  
 Status : Not Answered  
 Chosen Option : --

Section : Quantitative Aptitude

**Q.1 The given graph represents the data on the ages of various children. Study the given graph and answer the question that follows.**



What is the difference between the mean and mode of the ages?

- Ans  1. 0.5  
 2. 1  
 3. 0  
 4. 2

Question ID : 630680428135  
 Option 1 ID : 6306801670586  
 Option 2 ID : 6306801670585  
 Option 3 ID : 6306801670584  
 Option 4 ID : 6306801670587  
 Status : Not Answered  
 Chosen Option : --

**Q.2** P and Q are two fixed points 10 cm apart, and R is a point on PQ such that PR = 6 cm. By what percentage is the length of QR decreased when the length of PR is increased by 5%?

- Ans
- 1. 7%
  - 2. 8.5%
  - 3. 7.5%
  - 4. 8%

Question ID : 630680427948  
 Option 1 ID : 6306801669836  
 Option 2 ID : 6306801669839  
 Option 3 ID : 6306801669837  
 Option 4 ID : 6306801669838  
 Status : Answered  
 Chosen Option : 3

**Q.3** A trader owes a merchant ₹9,810 due in 1 year, but the trader wants to settle the account after 6 months. If the rate of simple interest is 9% per annum, how much cash (in ₹) should he pay?

- Ans
- 1. 9,550
  - 2. 9,405
  - 3. 9,450
  - 4. 9,540

Question ID : 630680388853  
 Option 1 ID : 6306801515877  
 Option 2 ID : 6306801515875  
 Option 3 ID : 6306801515876  
 Option 4 ID : 6306801515874  
 Status : Not Attempted and Marked For Review  
 Chosen Option : --

**Q.4** A discount series of 10% and 16% on an invoice is the same as a single discount of:

- Ans
- 1. 24.4%
  - 2. 23.4%
  - 3. 21.4%
  - 4. 22.4%

Question ID : 630680150538  
 Option 1 ID : 630680582271  
 Option 2 ID : 630680582269  
 Option 3 ID : 630680582268  
 Option 4 ID : 630680582270  
 Status : Answered  
 Chosen Option : 1

**Q.5** P and Q start running in opposite directions on a circular track from the same point. If their speeds are 10 m/s and 8 m/s, respectively, then after what time will they meet if the length of the track is 1620 m?

- Ans
- 1. 110 seconds
  - 2. 70 seconds
  - 3. 120 seconds
  - 4. 90 seconds

Question ID : 630680125168  
 Option 1 ID : 630680485452  
 Option 2 ID : 630680485450  
 Option 3 ID : 630680485453  
 Option 4 ID : 630680485451  
 Status : Answered  
 Chosen Option : 4

**Q.6** Two different quantities of the same solution having ingredients A and B are stored in two different containers. In the first container, there are 252 litre of A and 441 litre of B. In the second container, the total quantity of the solution was 1188 litre. How much of the solution in the second container was made up of ingredient B?

- Ans
- 1. 756 litre
  - 2. 760 litre
  - 3. 765 litre
  - 4. 752 litre

Question ID : 630680428742  
 Option 1 ID : 6306801673014  
 Option 2 ID : 6306801673015  
 Option 3 ID : 6306801673013  
 Option 4 ID : 6306801673012  
 Status : Not Answered

**Q.7** The radius of the circle is 8 cm. The distance of a point lying outside the circle from the centre is 17 cm. The length of the tangent drawn from the outside point to the circle is:

- Ans
- 1. 16 cm
  - 2. 19 cm
  - 3. 18 cm
  - 4. 15 cm

Question ID : 630680296214  
 Option 1 ID : 6306801152527  
 Option 2 ID : 6306801152526  
 Option 3 ID : 6306801152524  
 Option 4 ID : 6306801152525  
 Status : Answered  
 Chosen Option : 4

**Q.8** Which digits should come in the place of x and y, respectively, if the number 62684xy is divisible by both 8 and 5?

- Ans
- 1. 0 and 5
  - 2. 4 and 0
  - 3. 5 and 0
  - 4. 2 and 0

Question ID : 630680119827  
 Option 1 ID : 630680464376  
 Option 2 ID : 630680464377  
 Option 3 ID : 630680464375  
 Option 4 ID : 630680464374  
 Status : Answered  
 Chosen Option : 2

**Q.9** A chord of the larger among two concentric circles is of length 20 cm and it is tangent to the smaller circle. What is the area (in  $\text{cm}^2$ ) of the annular portion between the two circles?

- Ans
- 1.  $164\pi$
  - 2.  $100\pi$
  - 3.  $175\pi$
  - 4.  $122\pi$

Question ID : 630680358047  
 Option 1 ID : 6306801394178  
 Option 2 ID : 6306801394180  
 Option 3 ID : 6306801394177  
 Option 4 ID : 6306801394179  
 Status : Marked For Review  
 Chosen Option : 2

**Q.10** Simplify

$$1\frac{1}{3} + 1\frac{3}{4} \times 1\frac{2}{3} \div 3\frac{1}{2}$$

- Ans
- 1.  $2\frac{1}{5}$
  - 2.  $2\frac{1}{3}$
  - 3.  $3\frac{1}{4}$
  - 4.  $2\frac{1}{6}$

Question ID : 630680427971  
 Option 1 ID : 6306801669929  
 Option 2 ID : 6306801669930  
 Option 3 ID : 6306801669931  
 Option 4 ID : 6306801669928  
 Status : Answered  
 Chosen Option : 4

Q.11 ABC is an equilateral triangle. P, Q and R are the mid-points of sides AB, BC and CA, respectively. If the length of the side of the triangle ABC is 11 cm, then the area (in  $\text{cm}^2$ ) of  $\Delta PQR$  is:

- Ans
- 1.  $\frac{21\sqrt{3}}{16}$
  - 2.  $\frac{121\sqrt{3}}{16}$
  - 3.  $\frac{111\sqrt{3}}{16}$
  - 4.  $\frac{11\sqrt{3}}{16}$

Question ID : 630680397717  
 Option 1 ID : 6306801550846  
 Option 2 ID : 6306801550844  
 Option 3 ID : 6306801550843  
 Option 4 ID : 6306801550845  
 Status : Answered  
 Chosen Option : 2

Q.12 If  $\frac{\tan(x)}{\sec(x)} = \frac{1}{2}$ , then the value of  $(\sin(x) + \cos(x))^2$  is \_\_\_\_.

- Ans
- 1.  $\frac{2-\sqrt{3}}{3}$
  - 2.  $\frac{2+\sqrt{3}}{2}$
  - 3.  $\frac{2-\sqrt{3}}{2}$
  - 4.  $\frac{2+\sqrt{3}}{3}$

Question ID : 630680518889  
 Option 1 ID : 6306802028028  
 Option 2 ID : 6306802028030  
 Option 3 ID : 6306802028031  
 Option 4 ID : 6306802028029  
 Status : Not Answered  
 Chosen Option : --

Q. A pipe can fill an empty tank in 5 minutes and another pipe can empty it in 6 minutes. If both pipes are opened simultaneously

- 1  
3  
A  
n  
s
- 1. 33 min
  - 2. 25 min
  - 3. 35 min
  - 4. 30 min

Q.14 Let  $a + b = 1$ , then the value of  $\left(\frac{1}{a^2} + \frac{1}{b^2} + \frac{2}{ab}\right)$  is:

- Ans
- 1.  $\frac{1}{a^2b}$
  - 2.  $\frac{1}{a^2b^2}$
  - 3.  $\frac{1}{ab^2}$
  - 4.  $\frac{1}{ab}$

Question ID : 630680413485  
 Option 1 ID : 6306801612765  
 Option 2 ID : 6306801612767  
 Option 3 ID : 6306801612766  
 Option 4 ID : 6306801612764  
 Status : Not Answered  
 Chosen Option : --

Q.15 If  $\sin B = \frac{15}{17}$ , what is the value of  $\cos B(\sec B - \tan B)$ ? Given that  $0 < B < \frac{\pi}{2}$

- Ans
- 1.  $\frac{8}{15}$
  - 2.  $\frac{2}{17}$
  - 3.  $\frac{1}{16}$
  - 4.  $\frac{2}{15}$

Question ID : 630680402331  
 Option 1 ID : 6306801568895  
 Option 2 ID : 6306801568898  
 Option 3 ID : 6306801568896  
 Option 4 ID : 6306801568897  
 Status : Answered  
 Chosen Option : 2

Q.16 Ramesh sells rice at ₹36 per kg, which he purchased for ₹30 per kg. Moreover, he gives only 800 g of rice instead of 1 kg while selling. Find the actual profit percentage of Ramesh.

- Ans
- 1. 50%
  - 2. 46%
  - 3. 52%
  - 4. 48%

Question ID : 630680429026  
 Option 1 ID : 6306801674149  
 Option 2 ID : 6306801674151  
 Option 3 ID : 6306801674148  
 Option 4 ID : 6306801674150  
 Status : Answered  
 Chosen Option : 1

Q.17 The following table indicates the number of students studying in three subjects in four colleges.

Subjects	Colleges			
	W	X	Y	Z
Physics	420	435	412	285
Chemistry	380	340	315	420
Mathematics	256	310	295	345

What is the ratio of the total number of students studying in the Physics to that of studying in Mathematics in all four colleges taken together?

- Ans
- 1. 576 : 731
  - 2. 776 : 603
  - 3. 781 : 585
  - 4. 775 : 601

Question ID : 630680523803  
 Option 1 ID : 6306802047363  
 Option 2 ID : 6306802047364  
 Option 3 ID : 6306802047366  
 Option 4 ID : 6306802047365  
 Status : Answered  
 Chosen Option : 2

Q.18 A circle's centre is connected to its 50 cm long chord by a perpendicular that is 21 cm long. Find the circle's radius.

- Ans
- 1.  $\sqrt{1068}$  cm
  - 2.  $\sqrt{1065}$  cm
  - 3.  $\sqrt{1064}$  cm
  - 4.  $\sqrt{1066}$  cm

Question ID : 630680404294  
 Option 1 ID : 6306801576681  
 Option 2 ID : 6306801576679  
 Option 3 ID : 6306801576678  
 Option 4 ID : 6306801576680  
 Status : Answered  
 Chosen Option : 4

Q.19 For which of the following values of a and b do the given equations, have NO solution?

$$x - ay = 2 - a$$

$$(1 - a)x + 6y = a + b$$

- Ans
- 1.  $a = 3, b \neq 1$
  - 2.  $a = -3, b \neq 1$
  - 3.  $a = -3, b \neq -1$
  - 4.  $a = 3, b \neq -1$

Question ID : 630680285464  
 Option 1 ID : 6306801109823  
 Option 2 ID : 6306801109825  
 Option 3 ID : 6306801109826  
 Option 4 ID : 6306801109824  
 Status : Not Answered  
 Chosen Option : --

Q.20

Simplify  $\frac{25a^2 - 10ab - 48b^2}{5a + 6b} \times (5a + 8b)$

- Ans
- 1.  $(5a + 8b)^2$
  - 2.  $25a^2 - 64b^2$
  - 3.  $(5a - 8b)^2$
  - 4.  $25a^2 - 36b^2$

Question ID : 630680413458  
 Option 1 ID : 6306801612656  
 Option 2 ID : 6306801612659  
 Option 3 ID : 6306801612657  
 Option 4 ID : 6306801612658  
 Status : Not Answered  
 Chosen Option : --

Q.21 What is the volume in cubic units of a cylinder with a height equal to the diameter and a radius is 4 units?

- Ans
- 1.  $32\pi$
  - 2.  $\frac{64\pi}{3}$
  - 3.  $128\pi$
  - 4.  $\frac{32\pi}{3}$

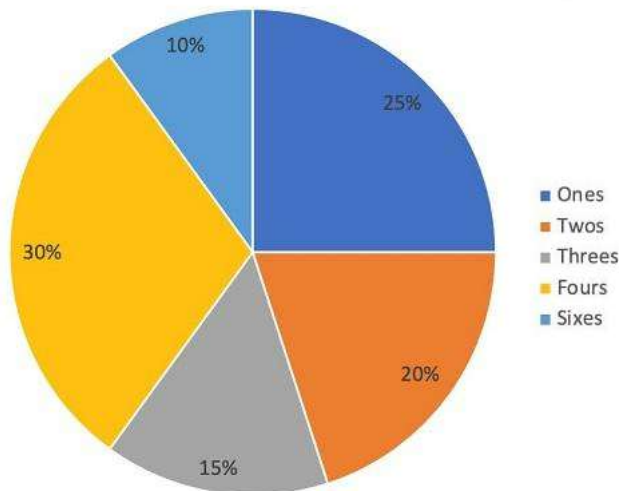
Question ID : 630680421498  
 Option 1 ID : 6306801644457  
 Option 2 ID : 6306801644456  
 Option 3 ID : 6306801644458  
 Option 4 ID : 6306801644455  
 Status : Answered  
 Chosen Option : 3

Q.22 If  $\tan A = \frac{5}{7}$ , then find the value of  $\frac{7\sin A - 3\cos A}{7\sin A + 3\cos A} + 4$ .

- Ans
- 1.  $7\frac{1}{3}$
  - 2.  $4\frac{1}{4}$
  - 3.  $3\frac{5}{7}$
  - 4.  $3\frac{1}{5}$

Question ID : 630680401745  
 Option 1 ID : 6306801566753  
 Option 2 ID : 6306801566751  
 Option 3 ID : 6306801566750  
 Option 4 ID : 6306801566752  
 Status : Answered  
 Chosen Option : 2

Q.23 The given pie-chart shows the percentage distribution of runs scored by a batsman in a test innings. Study the chart and answer the question that follows.



If the batsman has scored a total of 440 runs, how many runs did he score by hitting fours?

- Ans
- 1. 224
  - 2. 172
  - 3. 132
  - 4. 88

Question ID : 630680397376  
 Option 1 ID : 6306801549554  
 Option 2 ID : 6306801549556  
 Option 3 ID : 6306801549557  
 Option 4 ID : 6306801549555  
 Status : Answered  
 Chosen Option : 3

**Q.24** The given table shows the number of runs scored in IPL matches by four Indian batsmen in a particular year.

Player	Runs scored
P	800
Q	620
R	1200
S	650

What is the total number of runs scored by all four batsmen?

- Ans
- 1. 3300
  - 2. 3270
  - 3. 2900
  - 4. 3760

Question ID : 630680428137  
 Option 1 ID : 6306801670593  
 Option 2 ID : 6306801670592  
 Option 3 ID : 6306801670595  
 Option 4 ID : 6306801670594  
 Status : Answered  
 Chosen Option : 2

**Q.25** 2 varieties of tea powders worth ₹250/kg and ₹300/kg are mixed with a third variety of tea powder in the ratio 1 : 1 : 2. If the mixture is worth ₹350/kg, find the price of the third variety tea powder.

- Ans
- 1. ₹500/kg
  - 2. ₹450/kg
  - 3. ₹400/kg
  - 4. ₹425/kg

Question ID : 630680518851  
 Option 1 ID : 6306802027879  
 Option 2 ID : 6306802027876  
 Option 3 ID : 6306802027878  
 Option 4 ID : 6306802027877  
 Status : Answered  
 Chosen Option : 4

Section : English Comprehension

**Q.1** Select the option that expresses the given sentence in passive voice.  
 The children have made the box.

- Ans
- 1. Children had made the box.
  - 2. The box is being made by the children.
  - 3. The box has been made by the children.
  - 4. The box had been made by the children.

Question ID : 630680415266  
 Option 1 ID : 6306801619813  
 Option 2 ID : 6306801619814  
 Option 3 ID : 6306801619811  
 Option 4 ID : 6306801619812  
 Status : Answered  
 Chosen Option : 3

**Q.2** Select the option that can be used as a one-word substitute for the given group of words.  
 One who eats a lot

- Ans
- 1. Chef
  - 2. Steward
  - 3. Chauffeur
  - 4. Glutton

Question ID : 630680405385  
 Option 1 ID : 6306801580751  
 Option 2 ID : 6306801580750  
 Option 3 ID : 6306801580752  
 Option 4 ID : 6306801580753  
 Status : Answered  
 Chosen Option : 4



**Q.3** Select the most appropriate synonym of the given word.  
**Celebrate**

- Ans  1. Assure  
 2. Rejoice  
 3. Daunt  
 4. Bitch

Question ID : 630680310014  
Option 1 ID : 6306801206204  
Option 2 ID : 6306801206203  
Option 3 ID : 6306801206202  
Option 4 ID : 6306801206201  
Status : Answered  
Chosen Option : 2

**Q.4** Select the most appropriate homophone to fill in the blank.  
The \_\_\_\_\_ was decorated with candles and chocolates everywhere.

- Ans  1. flor  
 2. floor  
 3. flour  
 4. flower

Question ID : 630680158628  
Option 1 ID : 630680614006  
Option 2 ID : 630680614005  
Option 3 ID : 630680614004  
Option 4 ID : 630680614007  
Status : Answered  
Chosen Option : 2

**Q.5** Select the option that can be used as a one-word substitute for the given group of words.  
**A period of ten years**

- Ans  1. Biennium  
 2. Decade  
 3. lustrum  
 4. Century

Question ID : 630680414756  
Option 1 ID : 6306801617770  
Option 2 ID : 6306801617768  
Option 3 ID : 6306801617767  
Option 4 ID : 6306801617769  
Status : Answered  
Chosen Option : 2

**Q.6** Select the option that can be used as a one-word substitute for the given group of words.  
**a large, flat area surrounded by seats used for sports or entertainment**

- Ans  1. Department  
 2. Garden  
 3. Senate  
 4. Arena

Question ID : 630680158566  
Option 1 ID : 630680613772  
Option 2 ID : 630680613775  
Option 3 ID : 630680613773  
Option 4 ID : 630680613774  
Status : Answered  
Chosen Option : 3

**Q.7** Parts of the following sentence have been given as options. Select the option that contains an error.  
**I have the hundred reasons to not attend the meeting tomorrow.**

- Ans  1. the meeting  
 2. I have the hundred reasons  
 3. to not attend  
 4. tomorrow

Question ID : 630680514360  
Option 1 ID : 6306802010067  
Option 2 ID : 6306802010065  
Option 3 ID : 6306802010066  
Option 4 ID : 6306802010068  
Status : Answered  
Chosen Option : 2



**Q.8** Given below are four jumbled sentences. Select the option that gives their correct logical sequence.

- A. When we connect this design with a wire, electricity flows.
- B. These metal strips were put in a sulphuric acid solution.
- C. He made two strips of different metals.
- D. Alessandro Volta discovered electric battery.

- Ans
- 1. CBDA
  - 2. DCBA
  - 3. BCDA
  - 4. ACDB

Question ID : 630680374763  
Option 1 ID : 6306801460222  
Option 2 ID : 6306801460221  
Option 3 ID : 6306801460219  
Option 4 ID : 6306801460220  
Status : Answered  
Chosen Option : 2

**Q.9** Select the most appropriate meaning of the underlined idiom.

All his friends admired him because he was a straight shooter.

- Ans
- 1. A thoroughly upright straightforward person
  - 2. Miserly and pessimistic individual
  - 3. Complicated and confusing person
  - 4. Excellent shooter

Question ID : 630680366851  
Option 1 ID : 6306801428883  
Option 2 ID : 6306801428884  
Option 3 ID : 6306801428882  
Option 4 ID : 6306801428881  
Status : Answered  
Chosen Option : 4

**Q.10** Parts of a sentence are given below in jumbled order. Arrange the parts in the correct order to form a meaningful sentence.

- A. The upper part of the river
- B. Continuous rain on
- C. Week, there had been
- D. During the previous

- Ans
- 1. ADCB
  - 2. DBAC
  - 3. DCBA
  - 4. ABCD

Question ID : 630680360808  
Option 1 ID : 6306801405107  
Option 2 ID : 6306801405108  
Option 3 ID : 6306801405105  
Option 4 ID : 6306801405106  
Status : Answered  
Chosen Option : 3

**Q.11** Select the option that expresses the given sentence in passive voice.  
They are organising a concert for charity.

- Ans
- 1. A concert is being organised by them for charity.
  - 2. They are organising a charity concert.
  - 3. A concert for charity is organising by them.
  - 4. They are being organised a concert for charity.

Question ID : 630680415209  
Option 1 ID : 6306801619583  
Option 2 ID : 6306801619585  
Option 3 ID : 6306801619584  
Option 4 ID : 6306801619586  
Status : Answered  
Chosen Option : 1



Q.12 Select the most appropriate ANTONYM of the underlined word.

I was happy to know that Sheila passed her final exams.

- Ans
- 1. upbeat
  - 2. Sad
  - 3. Excited
  - 4. Joyful

Question ID : 630680377259  
Option 1 ID : 6306801470100  
Option 2 ID : 6306801470099  
Option 3 ID : 6306801470102  
Option 4 ID : 6306801470101  
Status : Answered  
Chosen Option : 2

Q.13 Select the most appropriate option to substitute the underlined word segment in the given sentence.

The wedding was put on until January.

- Ans
- 1. put in
  - 2. put up
  - 3. put off
  - 4. put down

Question ID : 630680168515  
Option 1 ID : 630680652674  
Option 2 ID : 630680652675  
Option 3 ID : 630680652673  
Option 4 ID : 630680652672  
Status : Answered  
Chosen Option : 3

Q.14 Select the most appropriate ANTONYM of the word in brackets to fill in the blank.  
Sheila \_\_\_\_\_ (failed) all her classes.

- Ans
- 1. fizzled
  - 2. flopped
  - 3. flunked
  - 4. passed

Question ID : 630680158585  
Option 1 ID : 630680613851  
Option 2 ID : 630680613850  
Option 3 ID : 630680613849  
Option 4 ID : 630680613848  
Status : Answered  
Chosen Option : 4

Q.15 Select the most appropriate ANTONYM of the word in the brackets to fill in the blank.

She \_\_\_\_\_ the target by an inch and lost the gold medal. [hit]

- Ans
- 1. cleaned
  - 2. missed
  - 3. bashed
  - 4. touched

Question ID : 630680132564  
Option 1 ID : 630680513391  
Option 2 ID : 630680513390  
Option 3 ID : 630680513392  
Option 4 ID : 630680513393  
Status : Answered  
Chosen Option : 2

Q.16 The following sentence has been split into four segments. Identify the segment that contains a grammatical error.

After I retire, I started a second career / as a writer and published several books / which allowed me to share my stories / and insights with a wider audience.

- Ans
- 1. which allowed me to share my stories
  - 2. After I retire, I started a second career
  - 3. and insights with a wider audience
  - 4. as a writer and published several books

Question ID : 630680512938  
Option 1 ID : 6306802004700  
Option 2 ID : 6306802004698  
Option 3 ID : 6306802004701  
Option 4 ID : 6306802004699  
Status : Answered

**Q.17 Select the INCORRECTLY spelt word.**

- Ans  1. Occurence  
 2. Harassment  
 3. Supersede  
 4. Exaggerate

Question ID : 630680377268  
Option 1 ID : 6306801470137  
Option 2 ID : 6306801470138  
Option 3 ID : 6306801470136  
Option 4 ID : 6306801470135  
Status : Answered  
Chosen Option : 3

**Q.18 Select the most appropriate meaning of the underlined idiom.**  
My uncle lives in New York, so I only see him once in a blue moon.

- Ans  1. Monthly  
 2. Weekly  
 3. Very often  
 4. Not very often

Question ID : 630680374331  
Option 1 ID : 6306801458518  
Option 2 ID : 6306801458517  
Option 3 ID : 6306801458515  
Option 4 ID : 6306801458516  
Status : Answered  
Chosen Option : 4

**Q.19 Select the INCORRECTLY spelt word**

- Ans  1. Tangiable  
 2. Terracotta  
 3. Terracide  
 4. Tertial

Question ID : 630680409969  
Option 1 ID : 6306801598705  
Option 2 ID : 6306801598707  
Option 3 ID : 6306801598708  
Option 4 ID : 6306801598706  
Status : Answered  
Chosen Option : 1

**Q.20 Select the most appropriate synonym for the underlined word in the given sentence.**  
One of Ram's leisure activities is tennis.

- Ans  1. Languish  
 2. Main  
 3. Recreation  
 4. Lead

Question ID : 630680167057  
Option 1 ID : 630680647089  
Option 2 ID : 630680647091  
Option 3 ID : 630680647088  
Option 4 ID : 630680647090  
Status : Answered  
Chosen Option : 1

**Comprehension:**

In the following passage, some words have been deleted. Read the passage carefully and select the most appropriate option to fill in each blank.  
 Earthquake is the (1) \_\_\_\_\_ breaking and displacement of substantial portions of the earth's outer rocky crust. During an earthquake, rock disturbances can cause rivers to change their flow. Landslides (2) \_\_\_\_\_ by earthquakes can cause significant destruction and loss of life. Tsunamis are a (3) \_\_\_\_\_ of damaging waves caused by large earthquakes that occur under the ocean. Earthquakes rarely directly kill anyone. Many (4) \_\_\_\_\_ and injuries are caused by falling debris and the fall of structures. The (5) \_\_\_\_\_ of an earthquake relies on how much and how far rock cracks and shifts.

**SubQuestion No : 21**

**Q.21** Select the most appropriate option to fill in blank number 1.

- Ans**    ✓ 1. abrupt  
           ✗ 2. deliberate  
           ✗ 3. expansive  
           ✗ 4. innovative

Question ID : 630680171754  
 Option 1 ID : 630680665452  
 Option 2 ID : 630680665453  
 Option 3 ID : 630680665454  
 Option 4 ID : 630680665451  
 Status : Answered  
 Chosen Option : 3

**Comprehension:**

In the following passage, some words have been deleted. Read the passage carefully and select the most appropriate option to fill in each blank.  
 Earthquake is the (1) \_\_\_\_\_ breaking and displacement of substantial portions of the earth's outer rocky crust. During an earthquake, rock disturbances can cause rivers to change their flow. Landslides (2) \_\_\_\_\_ by earthquakes can cause significant destruction and loss of life. Tsunamis are a (3) \_\_\_\_\_ of damaging waves caused by large earthquakes that occur under the ocean. Earthquakes rarely directly kill anyone. Many (4) \_\_\_\_\_ and injuries are caused by falling debris and the fall of structures. The (5) \_\_\_\_\_ of an earthquake relies on how much and how far rock cracks and shifts.

**SubQuestion No : 22**

**Q.22** Select the most appropriate option to fill in blank number 2.

- Ans**    ✗ 1. prevented  
           ✗ 2. blocked  
           ✓ 3. triggered  
           ✗ 4. subdued

Question ID : 630680171755  
 Option 1 ID : 630680665457  
 Option 2 ID : 630680665456  
 Option 3 ID : 630680665455  
 Option 4 ID : 630680665458  
 Status : Answered  
 Chosen Option : 3

**Comprehension:**

In the following passage, some words have been deleted. Read the passage carefully and select the most appropriate option to fill in each blank.  
 Earthquake is the (1) \_\_\_\_\_ breaking and displacement of substantial portions of the earth's outer rocky crust. During an earthquake, rock disturbances can cause rivers to change their flow. Landslides (2) \_\_\_\_\_ by earthquakes can cause significant destruction and loss of life. Tsunamis are a (3) \_\_\_\_\_ of damaging waves caused by large earthquakes that occur under the ocean. Earthquakes rarely directly kill anyone. Many (4) \_\_\_\_\_ and injuries are caused by falling debris and the fall of structures. The (5) \_\_\_\_\_ of an earthquake relies on how much and how far rock cracks and shifts.

**SubQuestion No : 23**

**Q.23** Select the most appropriate option to fill in blank number 3.

- Ans**    ✗ 1. arrest  
           ✗ 2. interruption  
           ✓ 3. succession  
           ✗ 4. disorder

Question ID : 630680171756  
 Option 1 ID : 630680665460  
 Option 2 ID : 630680665461  
 Option 3 ID : 630680665462  
 Option 4 ID : 630680665459  
 Status : Answered  
 Chosen Option : 3

# SSC CGL (Tier-1) STUDY NOTES



FREE SHIPPING 

- ▶ 100% CGL Exam Syllabus Covered
- ▶ 12 Books, 1300+ Pages
- ▶ 5600+ MCQs
- ▶ Previous Year Papers & Mocks
- ▶ 1 Year Current Affairs
- ▶ Support & Guidance

50% OFF



SSCPORTAL.IN

# SSC CGL PDF NOTES

100% Syllabus | 1300+ Pages

50%  
OFF

CLICK HERE



**Comprehension:**

In the following passage, some words have been deleted. Read the passage carefully and select the most appropriate option to fill in each blank.  
Earthquake is the (1) \_\_\_\_\_ breaking and displacement of substantial portions of the earth's outer rocky crust. During an earthquake, rock disturbances can cause rivers to change their flow. Landslides (2) \_\_\_\_\_ by earthquakes can cause significant destruction and loss of life. Tsunamis are a (3) \_\_\_\_\_ of damaging waves caused by large earthquakes that occur under the ocean. Earthquakes rarely directly kill anyone. Many (4) \_\_\_\_\_ and injuries are caused by falling debris and the fall of structures. The (5) \_\_\_\_\_ of an earthquake relies on how much and how far rock cracks and shifts.

**SubQuestion No : 24**

**Q.24** Select the most appropriate option to fill in blank number 4.

- Ans  1. viability  
 2. survival  
 3. fatalities  
 4. durability

Question ID : 630680171757  
Option 1 ID : 630680665463  
Option 2 ID : 630680665466  
Option 3 ID : 630680665465  
Option 4 ID : 630680665464  
Status : Answered  
Chosen Option : 3

**Comprehension:**

In the following passage, some words have been deleted. Read the passage carefully and select the most appropriate option to fill in each blank.  
Earthquake is the (1) \_\_\_\_\_ breaking and displacement of substantial portions of the earth's outer rocky crust. During an earthquake, rock disturbances can cause rivers to change their flow. Landslides (2) \_\_\_\_\_ by earthquakes can cause significant destruction and loss of life. Tsunamis are a (3) \_\_\_\_\_ of damaging waves caused by large earthquakes that occur under the ocean. Earthquakes rarely directly kill anyone. Many (4) \_\_\_\_\_ and injuries are caused by falling debris and the fall of structures. The (5) \_\_\_\_\_ of an earthquake relies on how much and how far rock cracks and shifts.

**SubQuestion No : 25**

**Q.25** Select the most appropriate option to fill in blank number 5.

- Ans  1. depth  
 2. magnitude  
 3. corpse  
 4. discipline

Question ID : 630680171758  
Option 1 ID : 630680665469  
Option 2 ID : 630680665467  
Option 3 ID : 630680665468  
Option 4 ID : 630680665470  
Status : Answered  
Chosen Option : 2