

Combined Graduate Level Examination 2024 Tier I

Roll Number	
Candidate Name	
Venue Name	
Exam Date	11/09/2024
Exam Time	12:30 PM - 1:30 PM
Subject	Combined Graduate Level Examination Tier I

Section : **General Intelligence and Reasoning**

Q.1 The position of how many letters will remain unchanged if each of the letters in the word 'JEALOUS' is arranged in the English alphabetical order?

- Ans**
- 1. Four
 - 2. One
 - 3. Two
 - 4. Three

Question ID : **63068022290**
 Option 1 ID : **630680862994**
 Option 2 ID : **630680862991**
 Option 3 ID : **630680862992**
 Option 4 ID : **630680862993**
 Status : **Answered**
 Chosen Option : **4**

Q.2 Read the given statements and conclusions carefully. You have to take the given statements to be true even if they seem to be at variance from commonly known facts. You have to decide which conclusion/s logically follow/s from the given statements.

Statements:
 All apples are mangoes.
 All mangoes are lemons.
 All lemons are kiwis.
Conclusions:
 (I) All apples are lemons.
 (II) All mangoes are kiwis.

- Ans**
- 1. Neither conclusion I nor II follow.
 - 2. Only conclusion II follows.
 - 3. Both conclusions I and II follow.
 - 4. Only conclusion I follows.

Question ID : **630680390224**
 Option 1 ID : **6306801521341**
 Option 2 ID : **6306801521339**
 Option 3 ID : **6306801521340**
 Option 4 ID : **6306801521338**
 Status : **Answered**
 Chosen Option : **3**

Q.3 Select the set in which the numbers are related in the same way as are the numbers of the following set.

(34, 15, 64)

(29, 17, 63)

(NOTE: Operations should be performed on the whole numbers, without breaking down the numbers into its constituent digits. E.g. 13 – Operations on 13 such as adding/deleting/multiplying etc. to 13 can be performed. Breaking down 13 into 1 and 3 and then performing mathematical operations on 1 and 3 is not allowed.)

Ans 1. (25, 14, 53)

2. (24, 28, 76)

3. (44, 32, 98)

4. (31, 23, 54)

Question ID : 630680329213

Option 1 ID : 6306801280676

Option 2 ID : 6306801280675

Option 3 ID : 6306801280673

Option 4 ID : 6306801280674

Status : Answered

Chosen Option : 1

Q.4 Select the number from among the given options that can replace the question mark (?) in the following series.

3, 20, 121, 604, 2417, ?

Ans 1. 7300

2. 7275

3. 7250

4. 7200

Question ID : 630680411850

Option 1 ID : 6306801606235

Option 2 ID : 6306801606238

Option 3 ID : 6306801606237

Option 4 ID : 6306801606236

Status : Answered

Chosen Option : 3

Q.5 In a certain code language, 'VAIN' is written as 'OKBY' and 'VAST' is written as 'UUBY'. How will 'VERB' be written in that language?

Ans 1. CTFY

2. CTYF

3. CFYT

4. CFTY

Question ID : 630680416243

Option 1 ID : 6306801623735

Option 2 ID : 6306801623736

Option 3 ID : 6306801623738

Option 4 ID : 6306801623737

Status : Answered

Chosen Option : 1



Q.6 Three statements are followed by three conclusions numbered I, II and III. You have to consider these statements to be true, even if they seem to be at variance with commonly known facts. Decide which of the given conclusions logically follow/s from the given statements.

Statements:

All pens are pages.
Some pages are pins.
Some pins are boards.

Conclusions:

(I) Some pins are pens.
(II) Some boards are pages.
(III) Some pens are boards.

- Ans** 1. None of the conclusions follow.
 2. Either conclusion I or conclusion III follows.
 3. Only conclusion I follows.
 4. Only conclusion II follows.

Question ID : 630680416197
 Option 1 ID : 6306801623554
 Option 2 ID : 6306801623553
 Option 3 ID : 6306801623551
 Option 4 ID : 6306801623552
 Status : Answered
 Chosen Option : 1

Q.7 Which of the following terms will replace the question mark (?) in the given series?
 DBOI, FEQL, ?, JKUR, LNWU

- Ans** 1. IHSP
 2. HHSO
 3. HISO
 4. HISP

Question ID : 630680416901
 Option 1 ID : 6306801626368
 Option 2 ID : 6306801626369
 Option 3 ID : 6306801626370
 Option 4 ID : 6306801626367
 Status : Answered
 Chosen Option : 2

Q.8 Select the option in which the numbers share the same relationship as that shared by the given pair of numbers.

(NOTE: Operations should be performed on the whole numbers, without breaking down the numbers into its constituent digits. E.g. 13 – Operations on 13 such as adding/deleting/multiplying etc. to 13 can be performed. Breaking down 13 into 1 and 3 and then performing mathematical operations on 1 and 3 is not allowed.)

186 : 103
 156 : 73

- Ans** 1. 119 : 35
 2. 208 : 127
 3. 95 : 12
 4. 83 : 1

Question ID : 630680326561
 Option 1 ID : 6306801270332
 Option 2 ID : 6306801270331
 Option 3 ID : 6306801270329
 Option 4 ID : 6306801270330
 Status : Marked For Review
 Chosen Option : 2

Q.9 'Lavish' is related to 'Austere' in the same way as 'Prejudiced' is related to '_____'.
(The words must be considered as meaningful English words and must not be related to each other based on the number of letters/number of consonants/vowels in the word.)

- Ans 1. Impartial
 2. Compromised
 3. Careful
 4. Thoughtful

Question ID : 630680416706

Option 1 ID : 6306801625590

Option 2 ID : 6306801625589

Option 3 ID : 6306801625588

Option 4 ID : 6306801625587

Status : Answered

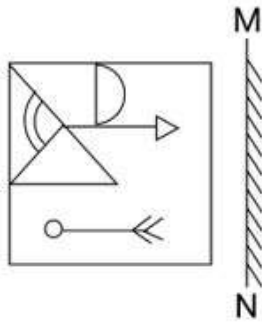
Chosen Option : 1



Download SSC CGL, CHSL E-BOOKS

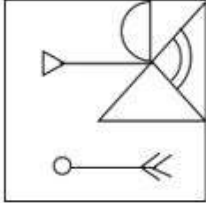
[CLICK HERE](#)

Q.10 Select the correct mirror image of the given figure when the mirror is placed at MN as shown below.

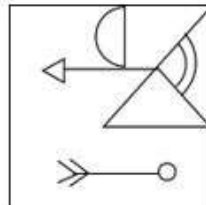


Ans

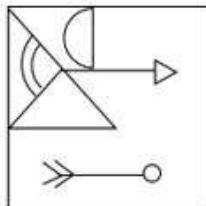
✗ 1.



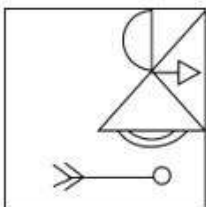
✓ 2.



✗ 3.



✗ 4.



Question ID : 630680318346

Option 1 ID : 6306801238463

Option 2 ID : 6306801238461

Option 3 ID : 6306801238464

Option 4 ID : 6306801238462

Status : Answered

Chosen Option : 2



SSC CGL (Tier-1) STUDY NOTES



FREE
SHIPPING 

- ▶ 100% CGL Exam Syllabus Covered
- ▶ 12 Books, 1300+ Pages
- ▶ 5600+ MCQs
- ▶ Previous Year Papers & Mocks
- ▶ 1 Year Current Affairs
- ▶ Support & Guidance

50%
OFF

 **100%**
SAFE

 **SSCPORTAL.IN**

SSC CGL PDF NOTES

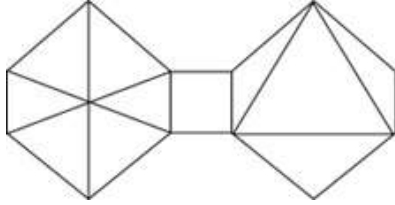
100% Syllabus | 1300+ Pages

50%
OFF

[CLICK HERE](#)



Q.11 How many triangles are there in the given figure?



- Ans 1. 10
 2. 9
 3. 12
 4. 11

Question ID : 630680287560
 Option 1 ID : 6306801118148
 Option 2 ID : 6306801118147
 Option 3 ID : 6306801118150
 Option 4 ID : 6306801118149
 Status : Marked For Review
 Chosen Option : 1

Q.12 Select the option that represents the letters that when sequentially placed from left to right in the blanks below will complete the letter series.

_ C _ W _ _ _ C _ W _ _

- Ans 1. CCWWCCWW
 2. WCCWWWCC
 3. WWCWWWCW
 4. CWCWWCCW

Question ID : 630680262384
 Option 1 ID : 6306801019178
 Option 2 ID : 6306801019177
 Option 3 ID : 6306801019176
 Option 4 ID : 6306801019175
 Status : Marked For Review
 Chosen Option : 4

Q.13 In a certain code language,
 A + B means 'A is the wife of B'.
 A - B means 'A is the son of B'.
 A × B means 'A is the husband of B'.
 A ÷ B means 'A is the father of B'.
 Based on the above, how is P related to T if 'P - Q + R ÷ S × T'?

- Ans 1. Husband's brother
 2. Son's son
 3. Father
 4. Father-in-law

Question ID : 630680313756
 Option 1 ID : 6306801220865
 Option 2 ID : 6306801220866
 Option 3 ID : 6306801220867
 Option 4 ID : 6306801220868
 Status : Answered
 Chosen Option : 1

Q.14 Select the option that is related to the fifth term in the same way as the second term is related to the first term and fourth term is related to third term.
TRAINER : VTCIQHU :: RADIANT : TCFIDQW :: CUSHION : ?

- Ans**
- 1. EXUHLRQ
 - 2. FWUHLRQ
 - 3. EWUHLRQ
 - 4. FXUHLRQ

Question ID : **630680416219**
 Option 1 ID : **6306801623640**
 Option 2 ID : **6306801623641**
 Option 3 ID : **6306801623642**
 Option 4 ID : **6306801623639**
 Status : **Answered**
 Chosen Option : **3**

Q.15 Which figure should replace the question mark (?) if the following series were to be continued?

B	D	X	X	V	B	B	3	=	=	L	B	
	=			T			V			T		
3	T	V	=	3	D	D	T	L	V	D	3	?

Ans

- 1.

B	D	V
	L	
3	T	4
- 2.

4	T	=
	D	
B	L	V
- 3.

B	T	3
	D	
=	L	V
- 4.

B	D	V
	L	
3	T	=

Question ID : **630680214430**
 Option 1 ID : **630680831751**
 Option 2 ID : **630680831752**
 Option 3 ID : **630680831754**
 Option 4 ID : **630680831753**
 Status : **Not Attempted and Marked For Review**
 Chosen Option : **--**

Q.16 Four letter-clusters have been given out of which three are alike in some manner and one is different. Select the one that is different.

Note: The odd one out is not based on the number of consonants/vowels or their position in the letter cluster

- Ans**
- 1. GDI
 - 2. XUZ
 - 3. LKP
 - 4. SPU

Question ID : 63068077064

Option 1 ID : 630680298354

Option 2 ID : 630680298356

Option 3 ID : 630680298353

Option 4 ID : 630680298355

Status : Answered

Chosen Option : 3

Q.17 Select the triad in which the numbers are related to each other in the same way as the numbers in the following triads.

8-17-35

23-47-95

(NOTE : Operations should be performed on the whole numbers, without breaking down the numbers into its constituent digits. E.g. 13 – Operations on 13 such as adding /deleting /multiplying etc., to 13 can be performed. Breaking down 13 into 1 and 3 and then performing mathematical operations on 1 and 3 is not allowed.)

- Ans**
- 1. 13-29-55
 - 2. 12-25-51
 - 3. 9-20-41
 - 4. 16-32-62

Question ID : 630680132370

Option 1 ID : 630680512644

Option 2 ID : 630680512643

Option 3 ID : 630680512642

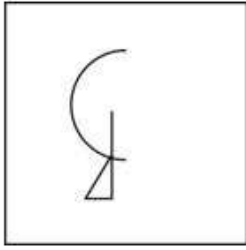
Option 4 ID : 630680512645

Status : Answered

Chosen Option : 2



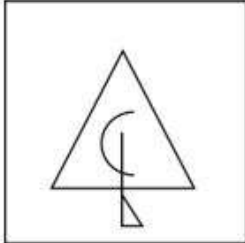
Q.18 Select the option figure in which the given figure (X) is embedded (rotation is NOT allowed).



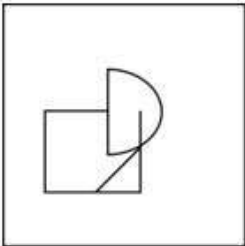
(X)

Ans

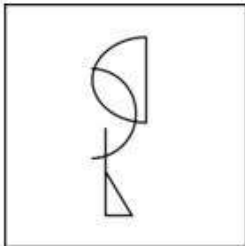
✗ 1.



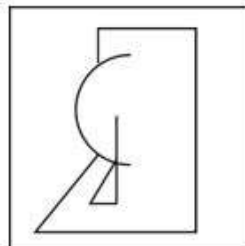
✗ 2.



✗ 3.



✓ 4.



Question ID : 630680332537

Option 1 ID : 6306801293585

Option 2 ID : 6306801293586

Option 3 ID : 6306801293588

Option 4 ID : 6306801293587

Status : Answered

Chosen Option : 4



Download SSC CGL, CHSL E-BOOKS

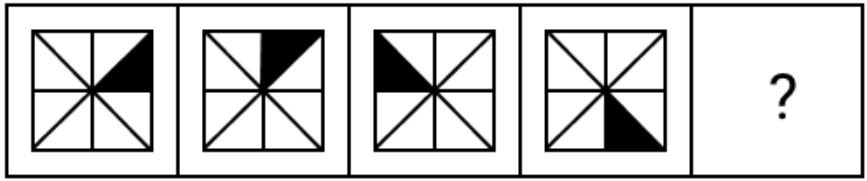
[CLICK HERE](#)

Q.19 In a certain code language, 'BUZZY' is coded as '10' and 'KING' is coded as '8'. How will 'ABROAD' be coded in that language?

- Ans
- 1. 7
 - 2. 10
 - 3. 12
 - 4. 9

Question ID : **630680172755**
 Option 1 ID : **630680669420**
 Option 2 ID : **630680669423**
 Option 3 ID : **630680669422**
 Option 4 ID : **630680669421**
 Status : **Answered**
 Chosen Option : **3**

Q.20 Identify the figure given in the options which when put in place of the question mark (?) will logically complete the series.

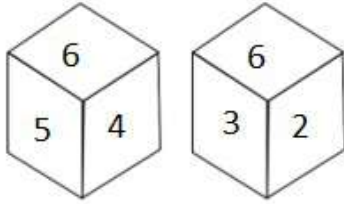


Ans

- 1.
- 2.
- 3.
- 4.

Question ID : **630680470637**
 Option 1 ID : **6306801838321**
 Option 2 ID : **6306801838319**
 Option 3 ID : **6306801838320**
 Option 4 ID : **6306801838322**
 Status : **Answered**
 Chosen Option : **1**

Q.21 Two different positions of the same dice are given below. Which is the number on the face opposite the face containing 1?



Ans 1. 6

2. 4

3. 5

4. 3

Question ID : 630680313769

Option 1 ID : 6306801220920

Option 2 ID : 6306801220918

Option 3 ID : 6306801220919

Option 4 ID : 6306801220917

Status : Answered

Chosen Option : 1

Q.22 Select the number that will come in the place of the question mark(?), if '+' and '-' are interchanged and 'x' and '÷' are interchanged

$$41 - 54 \times 6 \div 9 + 7 = ?$$

Ans 1. 119

2. 108

3. 115

4. 104

Question ID : 630680163582

Option 1 ID : 630680633514

Option 2 ID : 630680633513

Option 3 ID : 630680633512

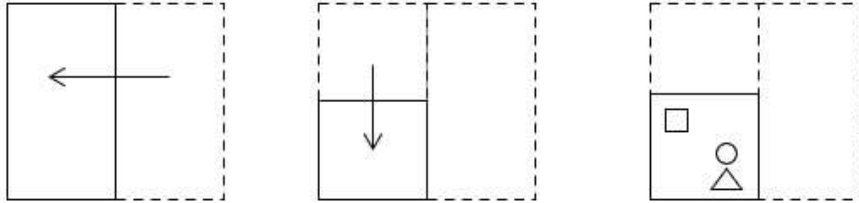
Option 4 ID : 630680633515

Status : Answered

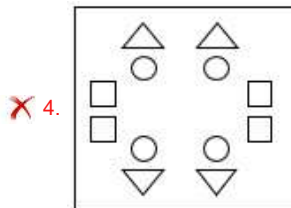
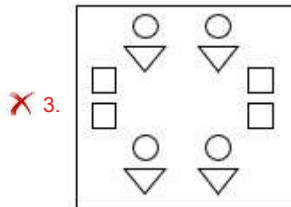
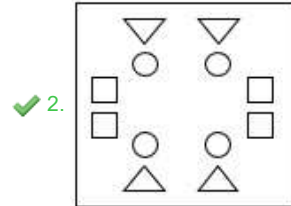
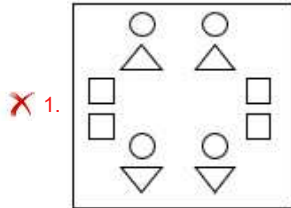
Chosen Option : 3



Q.23 A paper is folded and cut as shown below. How will it appear when unfolded?



Ans



Question ID : 630680296647
 Option 1 ID : 6306801154240
 Option 2 ID : 6306801154242
 Option 3 ID : 6306801154239
 Option 4 ID : 6306801154241

Status : Answered

Chosen Option : 2

Q.24 What will come in the place of '?' in the following equation, if '+' and '-' are interchanged and 'x' and '+' are interchanged?

$$8 + 6 \div 51 - 17 \times 13 = ?$$

Ans ✓ 1. 58

✗ 2. 32

✗ 3. 63

✗ 4. 71

Question ID : 630680339259
 Option 1 ID : 6306801319607
 Option 2 ID : 6306801319605
 Option 3 ID : 6306801319608
 Option 4 ID : 6306801319606

Status : Answered

Chosen Option : 1

Q.25 Three of the following numbers are alike in a certain way and one is different. Pick the odd one out.

(NOTE : Operations should be performed on the whole numbers, without breaking down the numbers into its constituent digits. E.g. 13 – Operations on 13 such as adding /deleting /multiplying etc., to 13 can be performed. Breaking down 13 into 1 and 3 and then performing mathematical operations on 1 and 3 is not allowed.)

- Ans
- 1. 65 – 104
 - 2. 75 – 120
 - 3. 90 – 144
 - 4. 45 – 70

Question ID : **630680389584**
Option 1 ID : **6306801518795**
Option 2 ID : **6306801518794**
Option 3 ID : **6306801518797**
Option 4 ID : **6306801518796**
Status : **Answered**
Chosen Option : **4**

Section : **General Awareness**

Q.1 Tabla player, Ustad Zakir Hussain was awarded which of the following awards by the Government of India in 2023?

- Ans
- 1. Padma Bhushan
 - 2. Bharat Ratna
 - 3. Padma Vibhushan
 - 4. Padma Shri

Question ID : **630680415796**
Option 1 ID : **6306801621953**
Option 2 ID : **6306801621951**
Option 3 ID : **6306801621952**
Option 4 ID : **6306801621954**
Status : **Marked For Review**
Chosen Option : **3**

Q.2 Which of the following famous Indian athletes won the Zurich Diamond League final 2022 in September 2022?

- Ans
- 1. Bajrang Punia
 - 2. PT Usha
 - 3. Neeraj Chopra
 - 4. Mirabai Chanu

Question ID : **630680339489**
Option 1 ID : **6306801320526**
Option 2 ID : **6306801320528**
Option 3 ID : **6306801320527**
Option 4 ID : **6306801320525**
Status : **Not Answered**
Chosen Option : **--**



Q.3 Match the concepts in column A with their respective descriptions in column B.

Column A	Column B
a. Devaluation	1. decline in the market rate of exchange
b. Depreciation	2. contraction of home currency
c. Deflation	3. foreign exchange rationing
d. Exchange control	4. contraction of imports
	5. official reduction in external value of the currency

- Ans 1. a-5, b-1, c-2, d-3
 2. a-2, b-3, c-4, d-1
 3. a-5, b-3, c-2, d-1
 4. a-2, b-1, c-4, d-3

Question ID : 630680323663
Option 1 ID : 6306801259153
Option 2 ID : 6306801259154
Option 3 ID : 6306801259155
Option 4 ID : 6306801259156
Status : Marked For Review
Chosen Option : 1

Q.4 Which of the following battles is considered the formal beginning of the British Raj in India?

- Ans 1. Battle of Buxar
 2. First Carnatic War
 3. Battle of Plassey
 4. Battle of Wandiwash

Question ID : 630680511533
Option 1 ID : 6306801999256
Option 2 ID : 6306801999254
Option 3 ID : 6306801999255
Option 4 ID : 6306801999257
Status : Marked For Review
Chosen Option : 1

Q.5 How many chambers are there in the heart of fishes?

- Ans 1. 4
 2. 2
 3. 3
 4. 1

Question ID : 630680517134
Option 1 ID : 6306802020935
Option 2 ID : 6306802020933
Option 3 ID : 6306802020934
Option 4 ID : 6306802020932
Status : Answered
Chosen Option : 2



Q.6 Which of the following Table Tennis World Championship events was held in India?

- Ans**
- 1. 17th World Championships, 1950
 - 2. 19th World Championships, 1952
 - 3. 20th World Championships, 1953
 - 4. 18th World Championships, 1951

Question ID : **630680510760**
Option 1 ID : **6306801996170**
Option 2 ID : **6306801996172**
Option 3 ID : **6306801996173**
Option 4 ID : **6306801996171**
Status : **Not Answered**
Chosen Option : --

Q.7 Taxus wallichiana Zucc (Himalayan yew) is a medicinal plant found in which of the following states?

- Ans**
- 1. Jharkhand
 - 2. Himachal Pradesh
 - 3. Bihar
 - 4. Goa

Question ID : **630680302664**
Option 1 ID : **6306801177325**
Option 2 ID : **6306801177322**
Option 3 ID : **6306801177323**
Option 4 ID : **6306801177324**
Status : **Marked For Review**
Chosen Option : 2

Q.8 When haloalkanes and aryl and vinyl halides react with magnesium metal they yield which reagent?

- Ans**
- 1. Tollens' reagent
 - 2. Fehling reagent
 - 3. Grignard reagent
 - 4. Hinsberg reagent

Question ID : **63068051561**
Option 1 ID : **630680198478**
Option 2 ID : **630680198480**
Option 3 ID : **630680198479**
Option 4 ID : **630680198481**
Status : **Not Answered**
Chosen Option : --



Q.9 Who among the following, while praising the amending feature of the Indian Constitution said that 'This variety in the amending process is wise but is rarely found'?

- Ans**
- 1. Ivor Jennings
 - 2. HM Seervai
 - 3. Granville Austin
 - 4. K C Wheare

Question ID : **630680282980**

Option 1 ID : **6306801100052**

Option 2 ID : **6306801100054**

Option 3 ID : **6306801100051**

Option 4 ID : **6306801100053**

Status : **Not Attempted and Marked For Review**

Chosen Option : --

Q.10 In which of the following cities did Mahatma Gandhi lead the peasant movement against the imposed indigo cultivation by the British planters?

- Ans**
- 1. Gorakhpur
 - 2. Bardoli
 - 3. Kheda
 - 4. Champaran

Question ID : **630680412379**

Option 1 ID : **6306801608341**

Option 2 ID : **6306801608340**

Option 3 ID : **6306801608342**

Option 4 ID : **6306801608339**

Status : **Marked For Review**

Chosen Option : **3**

Q.11 Chittani Ramachandra Hegde was associated with which of the following dances?

- Ans**
- 1. Chhau dance
 - 2. Chappeli dance
 - 3. Yakshagana dance
 - 4. Huttari dance

Question ID : **630680402666**

Option 1 ID : **6306801570262**

Option 2 ID : **6306801570263**

Option 3 ID : **6306801570264**

Option 4 ID : **6306801570261**

Status : **Not Answered**

Chosen Option : --



Q.12 Anna Chandy, the first Indian woman to serve as a judge at a high court was appointed in which High Court?

- Ans 1. Tamil Nadu
 2. Kerala
 3. West Bengal
 4. Andhra Pradesh

Question ID : **630680413021**
Option 1 ID : **6306801610907**
Option 2 ID : **6306801610908**
Option 3 ID : **6306801610910**
Option 4 ID : **6306801610909**
Status : **Marked For Review**
Chosen Option : **3**

Q.13 What is the unit of measurement for optical power of the lens?

- Ans 1. Katal
 2. Yotta
 3. Radian
 4. Diopter

Question ID : **630680295292**
Option 1 ID : **6306801148894**
Option 2 ID : **6306801148895**
Option 3 ID : **6306801148893**
Option 4 ID : **6306801148892**
Status : **Answered**
Chosen Option : **4**

Q.14 As in July 2021, The NIPUN Bharat Scheme was launched by which of the following Ministries?

- Ans 1. Ministry of Agriculture and Farmers
 2. Ministry of Education
 3. Ministry of Health and Family Welfare
 4. Ministry of Corporate Affairs

Question ID : **630680100090**
Option 1 ID : **630680389059**
Option 2 ID : **630680389057**
Option 3 ID : **630680389058**
Option 4 ID : **630680389056**
Status : **Answered**
Chosen Option : **2**

Q.15 Which Article of the Constitution of India expressly provides that the President is eligible for re-election?

- Ans 1. Article 59
 2. Article 56
 3. Article 57
 4. Article 58

Question ID : **630680305541**
Option 1 ID : **6306801188540**
Option 2 ID : **6306801188537**
Option 3 ID : **6306801188538**
Option 4 ID : **6306801188539**
Status : **Marked For Review**
Chosen Option : **3**



Q.16 As per the report of the NITI Aayog in 2023, which among the following states in India has the lowest percentage of the total population that is multidimensionally poor?

- Ans
- 1. Uttarakhand
 - 2. Sikkim
 - 3. Kerala
 - 4. Goa

Question ID : 630680409677
Option 1 ID : 6306801597539
Option 2 ID : 6306801597540
Option 3 ID : 6306801597538
Option 4 ID : 6306801597537
Status : Marked For Review
Chosen Option : 4

Q.17 Gangu bai Hangal and Prabha Atre were exponents of the _____ Gharana.

- Ans
- 1. Mewati
 - 2. Jaipur
 - 3. Kirana
 - 4. Rampur

Question ID : 630680409220
Option 1 ID : 6306801595709
Option 2 ID : 6306801595710
Option 3 ID : 6306801595711
Option 4 ID : 6306801595712
Status : Not Answered
Chosen Option : --

Q.18 Which of the following cups/trophies is NOT related to the Indian domestic cricket?

- Ans
- 1. Duleep Trophy
 - 2. Deodhar Trophy
 - 3. Ranji Trophy
 - 4. Durand Cup


Question ID : 630680510803
Option 1 ID : 6306801996344
Option 2 ID : 6306801996343
Option 3 ID : 6306801996345
Option 4 ID : 6306801996342
Status : Answered
Chosen Option : 4

Q.19 Who among the following was the last sultan of Delhi sultanate?

- Ans
- 1. Sikandar Lodi
 - 2. Firoz Shah Tughlaq
 - 3. Ibrahim Lodi
 - 4. Muhammad Bin Tughlaq

Question ID : 630680412412
Option 1 ID : 6306801608471
Option 2 ID : 6306801608474
Option 3 ID : 6306801608472
Option 4 ID : 6306801608473
Status : Answered
Chosen Option : 3

कर्मचारी चयन आयोग (CGL) परीक्षा अध्ययन सामग्री



FREE SHIPPING

- ▶ 100% Syllabus Covered
- ▶ 9 Books, 1000+ Pages - PRINT COPY
- ▶ 3000+ MCQs - PRINT COPY
- ▶ 08 Year Solved Papers & Mock Tests (PDF Copy)
- ▶ One Year Current Affairs (PDF Copy)

हिन्दी माध्यम

50% OFF

SSCPORTAL.IN

SSC CGL HINDI PDF NOTES

100% Syllabus | 1,000+ Pages



CLICK HERE

<https://sscportal.in/study-kit/cgl/tier-1-hindi>

Q.20 The idols of which three Gods are installed in Jagannath Temple, Puri?

- Ans**
- 1. Brahma, Vishnu and Mahesh
 - 2. Ram, Lakshman and Janaki
 - 3. Radha, Krishna and Balram
 - 4. Jagannath, Balabhadra and Subhadra

Question ID : **630680158749**
Option 1 ID : **630680614490**
Option 2 ID : **630680614488**
Option 3 ID : **630680614489**
Option 4 ID : **630680614491**
Status : **Answered**
Chosen Option : **4**

Q.21 In the context of water bodies, Neap Tides occur:

- Ans**
- 1. when the sun and moon are at right angles to each other
 - 2. when the sun and moon are on the opposite sides
 - 3. when there is so much interference by continents
 - 4. when the earth, moon and sun line up in a straight line

Question ID : **63068092591**
Option 1 ID : **630680359095**
Option 2 ID : **630680359097**
Option 3 ID : **630680359094**
Option 4 ID : **630680359096**
Status : **Answered**
Chosen Option : **1**

Q.22 According to the Ashrama system of Vedic life, which of the following was the third stage of life?

- Ans**
- 1. Vanaprastha
 - 2. Sanyasa
 - 3. Grihastha
 - 4. Brahmacharya

Question ID : **630680412491**
Option 1 ID : **6306801608789**
Option 2 ID : **6306801608790**
Option 3 ID : **6306801608788**
Option 4 ID : **6306801608787**
Status : **Not Attempted and Marked For Review**
Chosen Option : **--**

Q.23 Which of the following pairs is INCORRECTLY matched?

- Ans**
- 1. Lysosomes: Suicidal bags
 - 2. Ribosomes: Protein factory
 - 3. Mitochondria: Power house of the cell
 - 4. Nucleus: Lipid metabolism

Question ID : **630680199640**
Option 1 ID : **630680774168**
Option 2 ID : **630680774169**
Option 3 ID : **630680774167**
Option 4 ID : **630680774170**
Status : **Marked For Review**
Chosen Option : **4**



Q.24 The Government of India allowed automatic approval of _____% of FDI by Reserve Bank of India in nine categories of industries.

- Ans** 1. Up to 74
 2. Up to 41
 3. Up to 51
 4. Up to 60

Question ID : **6306801048057**
Option 1 ID : **6306804114276**
Option 2 ID : **6306804114275**
Option 3 ID : **6306804114274**
Option 4 ID : **6306804114277**
Status : **Marked For Review**
Chosen Option : **3**

Q.25 Which of the following Indian states has the least number of operational airports as of 2022?

- Ans** 1. Karnataka
 2. Mizoram
 3. Maharashtra
 4. Bihar

Question ID : **630680283352**
Option 1 ID : **6306801101534**
Option 2 ID : **6306801101533**
Option 3 ID : **6306801101531**
Option 4 ID : **6306801101532**
Status : **Marked For Review**
Chosen Option : **2**

Section : **Quantitative Aptitude**

Q.1 A thief is noticed by a policeman from a distance of 200 m. The thief starts running and the policeman chases him. The thief and the policeman run at the rate of 10 km/h and 11 km/h, respectively. What is the distance (in metres) between them after 9 minutes?

- Ans** 1. 50
 2. 40
 3. 60
 4. 30

Question ID : **630680428633**
Option 1 ID : **6306801672579**
Option 2 ID : **6306801672577**
Option 3 ID : **6306801672578**
Option 4 ID : **6306801672576**
Status : **Answered**
Chosen Option : **1**



Q.2 In a triangle ΔABC , $AB = AC$ and $\angle A = 80^\circ$, then find $\angle B$.

- Ans
- 1. 40°
 - 2. 80°
 - 3. 45°
 - 4. 50°

Question ID : 630680413270
 Option 1 ID : 6306801611928
 Option 2 ID : 6306801611927
 Option 3 ID : 6306801611930
 Option 4 ID : 6306801611929
 Status : Answered
 Chosen Option : 4

Q.3 S borrowed some amount from R and promised to pay him 8% interest. Then S invested the borrowed amount in a scheme, upon which he earned a profit of 5% after paying R, the principal amount with interest. How much percentage R would have gained, if he would have invested in the scheme directly?

- Ans
- 1. 14%
 - 2. 13%
 - 3. 14.4%
 - 4. 13.4%

Question ID : 630680428764
 Option 1 ID : 6306801673102
 Option 2 ID : 6306801673100
 Option 3 ID : 6306801673103
 Option 4 ID : 6306801673101
 Status : Marked For Review
 Chosen Option : 4

Q.4 If the ratio of the areas of two similar triangles is 25 : 144, the ratio of their corresponding sides is:

- Ans
- 1. 12 : 5
 - 2. 5 : 12
 - 3. 25 : 12
 - 4. 5 : 144

Question ID : 630680196077
 Option 1 ID : 630680760695
 Option 2 ID : 630680760696
 Option 3 ID : 630680760697
 Option 4 ID : 630680760698
 Status : Answered
 Chosen Option : 2

Q.5 In $\triangle PQR$, M, N, and S are the mid-points of sides PQ, PR and QR, respectively. If the area of the $\triangle PQR$ is 46 cm^2 , what is the area (in cm^2) of the quadrilateral MNRQ?

- Ans 1. 39
 2. 34.5
 3. 23
 4. 27.6

Question ID : 630680421389
 Option 1 ID : 6306801644020
 Option 2 ID : 6306801644022
 Option 3 ID : 6306801644019
 Option 4 ID : 6306801644021
 Status : Answered
 Chosen Option : 2

Q.6 Find the area of a square, one of whose diagonals is 4.8 m long.

- Ans 1. 12.5 m^2
 2. 10.5 m^2
 3. 9.5 m^2
 4. 11.52 m^2

Question ID : 630680102080
 Option 1 ID : 630680396679
 Option 2 ID : 630680396677
 Option 3 ID : 630680396676
 Option 4 ID : 630680396678
 Status : Answered
 Chosen Option : 4

Q.7 The following table shows scores in different subjects obtained by Akshay in school. Study the table and answer the question that follows.

Subject	Marks obtained	Total Marks
English	73	100
Hindi	56	80
Science	45	75
Mathematics	90	125
IT	45	60

In which subject did he score the highest marks (in %)?

- Ans 1. Mathematics
 2. IT
 3. English
 4. Hindi

Question ID : 630680428094
 Option 1 ID : 6306801670421
 Option 2 ID : 6306801670422
 Option 3 ID : 6306801670420
 Option 4 ID : 6306801670423
 Status : Marked For Review
 Chosen Option : 2

Q.8 Find the value of:

$$\left[\frac{4}{3} \tan^2 60^\circ + 3 \cos^2 30^\circ - 2 \sec^2 30^\circ - \frac{3}{4} \cot^2 60^\circ \right] \div [\sin 60^\circ \cos 30^\circ - \cos 60^\circ \sin 30^\circ]$$

Ans

1. $3 \frac{1}{2}$

2. $4 \frac{1}{3}$

3. $6 \frac{2}{3}$

4. $6 \frac{3}{2}$

Question ID : **630680387372**

Option 1 ID : **6306801510175**

Option 2 ID : **6306801510176**

Option 3 ID : **6306801510177**

Option 4 ID : **6306801510174**

Status : **Marked For Review**

Chosen Option : **3**

Q.9 In a triangle ΔABC , the $\angle ABC = 90^\circ$. If $\sin(A) = \frac{1}{2}$, then $\cos(C)$ is equal to:

Ans

1. 1

2. $\frac{\sqrt{3}}{2}$

3. $\frac{1}{\sqrt{2}}$

4. $\frac{1}{2}$

Question ID : **630680526463**

Option 1 ID : **6306802057919**

Option 2 ID : **6306802057921**

Option 3 ID : **6306802057920**

Option 4 ID : **6306802057918**

Status : **Answered**

Chosen Option : **4**

Q.10 Find the quotient, when the mean proportional of $7\frac{1}{5}$ and 245 is divided by an even prime number.

Ans

1. 21

2. 36

3. 49

4. 42

Question ID : **630680428639**

Option 1 ID : **6306801672602**

Option 2 ID : **6306801672601**

Option 3 ID : **6306801672600**

Option 4 ID : **6306801672603**

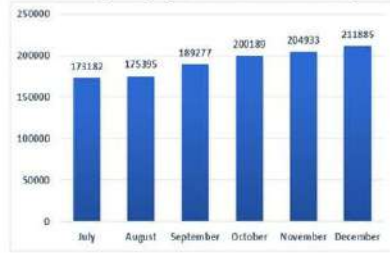
Status : **Answered**

Chosen Option : **1**



Q.11

The following bar graph shows the circulation growth of a magazine ABC from July 2022 to December 2022.



During October to December there was an even growth rate, the average of which, is (correct up to one decimal place):

- Ans**
- 1. 3.2%
 - 2. 2.4%
 - 3. 3.8%
 - 4. 2.9%

Question ID : 630680428178

Option 1 ID : 6306801670758

Option 2 ID : 6306801670756

Option 3 ID : 6306801670759

Option 4 ID : 6306801670757

Status : Marked For Review

Chosen Option : 4

Q.12 Evaluate the value of $(\operatorname{cosec}56^\circ \cos34^\circ - \cos59^\circ \operatorname{cosec}31^\circ)$.

- Ans**
- 1. 2
 - 2. 0
 - 3. 1
 - 4. -1

Question ID : 630680403307

Option 1 ID : 6306801572728

Option 2 ID : 6306801572727

Option 3 ID : 6306801572726

Option 4 ID : 6306801572729

Status : Answered

Chosen Option : 2

Q.13 The value of the expression $(1.55^2 + 0.55^2 + 1.55 \times 0.55)$ is equal to:

- Ans**
- 1. $1.55^3 + 0.55^3$
 - 2. $1.55^2 + 0.55^2$
 - 3. $1.55^2 - 0.55^2$
 - 4. $1.55^3 - 0.55^3$

Question ID : 630680413481

Option 1 ID : 6306801612750

Option 2 ID : 6306801612749

Option 3 ID : 6306801612748

Option 4 ID : 6306801612751

Status : Marked For Review

Chosen Option : 4



Q.14 $\triangle ABC$ and $\triangle RPQ$ are congruent, then the side of $\triangle ABC$ that corresponds to PQ is:

- Ans 1. BC
 2. AR
 3. CA
 4. AB

Question ID : 630680387766
 Option 1 ID : 6306801511696
 Option 2 ID : 6306801511699
 Option 3 ID : 6306801511698
 Option 4 ID : 6306801511697
 Status : Answered
 Chosen Option : 1

Q.15 If $0.4x + 0.16y = 1.7$ and $0.3x + 0.12y = 3.4$, then which of the following is correct?

- Ans 1. The system has unique solution.
 2. The system has finitely many solutions but not unique.
 3. The system has infinitely many solutions.
 4. The system has no solution.

Question ID : 630680194609
 Option 1 ID : 630680754963
 Option 2 ID : 630680754964
 Option 3 ID : 630680754961
 Option 4 ID : 630680754962
 Status : Not Answered
 Chosen Option : --

Q.16 Simplify

$$\frac{(4.2)^3 - (1.2)^3}{(4.2)^2 + 5.04 + (1.2)^2}$$

- Ans 1. 2
 2. 3
 3. 5
 4. 1

Question ID : 630680413491
 Option 1 ID : 6306801612789
 Option 2 ID : 6306801612788
 Option 3 ID : 6306801612791
 Option 4 ID : 6306801612790
 Status : Answered
 Chosen Option : 2

Q.17 Five different companies, P, Q, R, S and T, manufacture plastic and wooden bats. These bats are labelled as Brand A or Brand B. The given table shows the number of wooden bats as a percentage of the total bats manufactured by each company. It also shows the ratio of plastic bats labelled as Brand A to Brand B. Each company manufactures 1,00,000 bats. Study the table carefully and answer the question that follows.

Company	Wooden bats	Brand A : Brand B
P	65%	3 : 7
Q	70%	7 : 8
R	60%	19 : 6
S	70%	7 : 8
T	50%	2 : 3

Taking all companies together, how many plastic bats of Brand B have been manufactured?

- Ans** 1. 96,100
 2. 86,100
 3. 80,500
 4. 90,500

Question ID : **630680386654**
 Option 1 ID : **6306801507327**
 Option 2 ID : **6306801507328**
 Option 3 ID : **6306801507329**
 Option 4 ID : **6306801507326**
 Status : **Not Answered**
 Chosen Option : --

Q.18 Find the average of the prime numbers lying between 50 and 76.

- Ans** 1. 64
 2. 60
 3. 66
 4. 62

Question ID : **630680397727**
 Option 1 ID : **6306801550924**
 Option 2 ID : **6306801550922**
 Option 3 ID : **6306801550925**
 Option 4 ID : **6306801550923**
 Status : **Answered**
 Chosen Option : 1

Q.19 The cost price of a bat is 75% of the marked price. Calculate the gain percentage after allowing a discount of 15%.

- Ans** 1. 18.16%
 2. 25.6%
 3. 21.33%
 4. 13.33%

Question ID : **630680135742**
 Option 1 ID : **630680525688**
 Option 2 ID : **630680525686**
 Option 3 ID : **630680525689**
 Option 4 ID : **630680525687**
 Status : **Answered**
 Chosen Option : 4

Q.20 The salary of a worker is first increased by 25%, then it is decreased by 12%. The percentage change in his salary is:

- Ans
- 1. 10% decrease
 - 2. 10% increase
 - 3. 13% increase
 - 4. 13% decrease

Question ID : 630680397320
Option 1 ID : 6306801549337
Option 2 ID : 6306801549339
Option 3 ID : 6306801549336
Option 4 ID : 6306801549338
Status : Answered
Chosen Option : 2

Q.21 Simplify:

$$1020 \div \left[\frac{4}{3} \text{ of } (26 + 4) - 11 \frac{2}{3} \right]$$

- Ans
- 1. 17
 - 2. 28
 - 3. 31
 - 4. 36

Question ID : 630680427993
Option 1 ID : 6306801670016
Option 2 ID : 6306801670017
Option 3 ID : 6306801670018
Option 4 ID : 6306801670019
Status : Answered
Chosen Option : 4

Q.22 Which of the following numbers is divisible by both 2 and 5?

- Ans
- 1. 63840
 - 2. 20792
 - 3. 37915
 - 4. 37254

Question ID : 630680121555
Option 1 ID : 630680471179
Option 2 ID : 630680471178
Option 3 ID : 630680471180
Option 4 ID : 630680471181
Status : Answered
Chosen Option : 1



Q.23 The following table shows the sales of cars of five manufacturers from 2016 to 2020.

(All the figures are in hundreds.)

Manufacturer	2016	2017	2018	2019	2020
M ₁	180	190	200	210	220
M ₂	160	170	180	190	200
M ₃	190	200	210	220	230
M ₄	200	210	220	230	240
M ₅	210	220	230	240	250

What is the difference between the total number of sales of manufacturer M₂ and the total number of sales of manufacturer M₄ during the years 2016 to 2019?

- Ans**
- 1. 12000
 - 2. 16000
 - 3. 18000
 - 4. 14000

Question ID : 630680428170
 Option 1 ID : 6306801670724
 Option 2 ID : 6306801670726
 Option 3 ID : 6306801670727
 Option 4 ID : 6306801670725

Status : Answered

Chosen Option : 2

Q.24 Pipe A usually fills a tank in 6 hours. But due to a leak at the bottom of the tank, it takes extra 2 hours to fill the tank. If the tank is full, then how much time will it take to get emptied due to the leak?

- Ans**
- 1. 16 hours
 - 2. 12 hours
 - 3. 24 hours
 - 4. 20 hours

Question ID : 630680386864
 Option 1 ID : 6306801508167
 Option 2 ID : 6306801508166
 Option 3 ID : 6306801508168
 Option 4 ID : 6306801508169

Status : Answered

Chosen Option : 3

Q.25 How many years will it take for ₹8,400 to amount to ₹11,928 at a simple interest rate of 7% per annum?

- Ans**
- 1. 6
 - 2. 2
 - 3. 8
 - 4. 5

Question ID : 630680390957
 Option 1 ID : 6306801524229
 Option 2 ID : 6306801524226
 Option 3 ID : 6306801524228
 Option 4 ID : 6306801524227

Status : Answered

Chosen Option : 1

Section : English Comprehension

Q.1 Select the most appropriate synonym of the given word.
Merit

- Ans 1. Fatigue
 2. Residue
 3. Virtue
 4. Oblique

Question ID : 630680168488
Option 1 ID : 630680652565
Option 2 ID : 630680652566
Option 3 ID : 630680652564
Option 4 ID : 630680652567
Status : Answered
Chosen Option : 3

Q.2 Given below are four jumbled sentences. Select the option that gives their correct logical sequence.

- A. It contains high levels of Vitamin A and D.
B. Cod liver oil is thus used to treat arthritis.
C. This supplement is made from the liver of cod fish.
D. Cod liver oil is a nutritional supplement.

- Ans 1. DCAB
 2. CBAD
 3. ABCD
 4. BACD

Question ID : 630680374760
Option 1 ID : 6306801460210
Option 2 ID : 6306801460209
Option 3 ID : 6306801460208
Option 4 ID : 6306801460207
Status : Answered
Chosen Option : 1

Q.3 Select the option that can replace the underlined phrase and make the sentence grammatically correct.
The programme on TV was now shown the blurring faces of the inmates of the rehabilitation centre .

- Ans 1. was now showing the blurred faces of the inmates upon the rehabilitation centre
 2. were now showing the blurred faces of the inmates of the rehabilitation centre.
 3. were now showing the blurring faces of the inmates from the rehabilitation centre
 4. was now showing the blurred faces of the inmates of the rehabilitation centre

Question ID : 630680160248
Option 1 ID : 630680620365
Option 2 ID : 630680620367
Option 3 ID : 630680620366
Option 4 ID : 630680620364
Status : Answered
Chosen Option : 4



Q.4 Select the most appropriate synonym of the underlined word in the given sentence.
Layla is the Sultan's consort.

- Ans**
- 1. Alcoholic
 - 2. Foe
 - 3. Partner
 - 4. Enemy

Question ID : **630680158570**
Option 1 ID : **630680613791**
Option 2 ID : **630680613790**
Option 3 ID : **630680613788**
Option 4 ID : **630680613789**
Status : **Marked For Review**
Chosen Option : **3**

Q.5 Select the most appropriate meaning of the given idiom.

Jump the gun

- Ans**
- 1. To start all over again
 - 2. To stop a process
 - 3. Using a gun for sports
 - 4. To do something too soon and too quickly

Question ID : **630680270820**
Option 1 ID : **6306801052468**
Option 2 ID : **6306801052469**
Option 3 ID : **6306801052466**
Option 4 ID : **6306801052467**
Status : **Marked For Review**
Chosen Option : **4**

Q.6 In the given question, a statement divided into different segments is given. Rearrange all the segments to form a coherent statement.

O: population is expected to triple in

P: the next 50 years

Q: among the world's poorest countries

R: population shrinkage in that period

S: whereas many rich countries will see

- Ans**
- 1. SPORQ
 - 2. RSOPQ
 - 3. POSQR
 - 4. QOPSR

Question ID : **630680383220**
Option 1 ID : **6306801493787**
Option 2 ID : **6306801493788**
Option 3 ID : **6306801493790**
Option 4 ID : **6306801493789**
Status : **Answered**
Chosen Option : **4**



Q.7 Select the most appropriate ANTONYM of the underlined word in the following sentence.

In Shakespeare's *The Merchant of Venice*, Shylock's connivance aimed to jeopardise Antonio's life.

Ans 1. Safeguard

2. Jape

3. Risk

4. Peril

Question ID : 630680166619

Option 1 ID : 630680645388

Option 2 ID : 630680645390

Option 3 ID : 630680645391

Option 4 ID : 630680645389

Status : Answered

Chosen Option : 1

Q.8 Parts of the following sentence have been given as options. Select the option that contains an error.

Rahul thinks he is as smarter as his friends in the class.

Ans 1. his friends

2. he is as smarter as

3. Rahul thinks

4. in the class

Question ID : 630680514373

Option 1 ID : 6306802010119

Option 2 ID : 6306802010118

Option 3 ID : 6306802010117

Option 4 ID : 6306802010120

Status : Answered

Chosen Option : 2

Q.9 Select the word OPPOSITE in meaning to the given word.
Deficient

Ans 1. Terrible

2. Ample

3. Broken

4. Skimpy

Question ID : 630680517432

Option 1 ID : 6306802022127

Option 2 ID : 6306802022124

Option 3 ID : 6306802022126

Option 4 ID : 6306802022125

Status : Answered

Chosen Option : 2



Q.10 Select the most appropriate meaning of the given idiom.
To read between the lines

- Ans
- 1. To read aloud to public
 - 2. To read differently
 - 3. To understand more than what the words suggest
 - 4. To underline some words

Question ID : 630680205270
Option 1 ID : 630680795942
Option 2 ID : 630680795941
Option 3 ID : 630680795939
Option 4 ID : 630680795940
Status : Answered
Chosen Option : 3

Q.11 The following sentence has been divided into parts. One of them may contain an error. Select the part that contains the error from the given options. If you don't find any error, mark 'No error' as your answer.
Neither my brother nor my brothers-in-law / attended the meeting / as his health is not more good.

- Ans
- 1. No error
 - 2. as his health is not more good
 - 3. attended the meeting
 - 4. Neither my brother nor my brothers-in-law

Question ID : 630680196357
Option 1 ID : 630680761810
Option 2 ID : 630680761809
Option 3 ID : 630680761808
Option 4 ID : 630680761807
Status : Marked For Review
Chosen Option : 4

Q.12 Select the most appropriate option to fill in the blank.
Two of the fugitives managed to remain free by adeptly avoiding the _____ of the police.

- Ans
- 1. discovery
 - 2. pursuit
 - 3. repression
 - 4. following

Question ID : 630680145433
Option 1 ID : 630680562709
Option 2 ID : 630680562706
Option 3 ID : 630680562707
Option 4 ID : 630680562708
Status : Marked For Review
Chosen Option : 3



Q.13 Select the **INCORRECTLY** spelt word from the given sentence .

She recieved an award for her outstanding performance.

- Ans
- 1. outstanding
 - 2. award
 - 3. recieved
 - 4. performance

Question ID : 630680374417
Option 1 ID : 6306801458853
Option 2 ID : 6306801458852
Option 3 ID : 6306801458851
Option 4 ID : 6306801458854
Status : Answered
Chosen Option : 3

Q.14 Select the option that expresses the following sentence in active voice.
The car was repaired by the mechanic.

- Ans
- 1. The mechanic is repairing the car.
 - 2. The mechanic repairs the car.
 - 3. The mechanic has repaired the car.
 - 4. The mechanic repaired the car.

Question ID : 630680415305
Option 1 ID : 6306801619969
Option 2 ID : 6306801619967
Option 3 ID : 6306801619968
Option 4 ID : 6306801619970
Status : Answered
Chosen Option : 4

Q.15 Parts of a sentence are given below in jumbled order. Select the option that arranges the parts in the correct sequence to form a meaningful sentence.

- (P) kindness and empathy
- (Q) in a world that can be
- (O) bring light and positivity
- (R) harsh and challenging

- Ans
- 1. ROQP
 - 2. QROP
 - 3. QRPO
 - 4. PORQ

Question ID : 630680380979
Option 1 ID : 6306801484904
Option 2 ID : 6306801484906
Option 3 ID : 6306801484905
Option 4 ID : 6306801484903
Status : Not Attempted and Marked For Review
Chosen Option : --



Q.16 Select the option that can be used as a one-word substitute for the given group of words.

A person who is trained to travel in a spacecraft.

- Ans 1. Astronaut
 2. Alchemist
 3. Anthropologist
 4. Curator

Question ID : 630680414786
Option 1 ID : 6306801617887
Option 2 ID : 6306801617888
Option 3 ID : 6306801617889
Option 4 ID : 6306801617890
Status : Answered
Chosen Option : 1

Q.17 Select the option that expresses the given sentence in passive voice. Each candidate was making tall promises.

- Ans 1. Tall promises will be made by each candidate.
 2. Tall promises are being made by each candidate.
 3. Tall promises are made by each candidate.
 4. Tall promises were being made by each candidate.

Question ID : 630680295319
Option 1 ID : 6306801149002
Option 2 ID : 6306801149003
Option 3 ID : 6306801149001
Option 4 ID : 6306801149000
Status : Answered
Chosen Option : 4

Q.18 Select the correctly spelt word.

- Ans 1. Conscientous
 2. Conscietious
 3. Conscencious
 4. Conscientious

Question ID : 630680409944
Option 1 ID : 6306801598605
Option 2 ID : 6306801598606
Option 3 ID : 6306801598608
Option 4 ID : 6306801598607
Status : Answered
Chosen Option : 4



Q.19 Select the most appropriate synonym of the given word.

Jovial

- Ans
- 1. Profane
 - 2. Solemnity
 - 3. Miserable
 - 4. Cheerful

Question ID : 630680295218

Option 1 ID : 6306801148596

Option 2 ID : 6306801148599

Option 3 ID : 6306801148597

Option 4 ID : 6306801148598

Status : Answered

Chosen Option : 4

Q.20 Select the most appropriate ANTONYM of the given word.

Meander

- Ans
- 1. Deputise
 - 2. Confirm
 - 3. Ramble
 - 4. Direct

Question ID : 630680395432

Option 1 ID : 6306801541908

Option 2 ID : 6306801541911

Option 3 ID : 6306801541909

Option 4 ID : 6306801541910

Status : Answered

Chosen Option : 4

Comprehension:

In the following passage, some words have been deleted. Read the passage carefully and select the most appropriate option to fill in each blank.
Appearances may not reveal the man. So, you shouldn't make (1) _____ about a man's character based on how he (2) _____. People smile and smile, yet prove to be (3) _____. On the other hand, people with rough exteriors prove to be the (4) _____ and most considerate people on earth. They are the people who are beautiful from (5) _____.

SubQuestion No : 21

Q.21 Select the most appropriate option to fill in blank number 1.(

- Ans
- 1. deficient
 - 2. ascend
 - 3. assumptions
 - 4. derivations

Question ID : 630680156983

Option 1 ID : 630680607498

Option 2 ID : 630680607499

Option 3 ID : 630680607496

Option 4 ID : 630680607497

Status : Answered

Chosen Option : 3

Comprehension:

In the following passage, some words have been deleted. Read the passage carefully and select the most appropriate option to fill in each blank.

Appearances may not reveal the man. So, you shouldn't make (1) _____ about a man's character based on how he (2) _____. People smile and smile, yet prove to be (3) _____. On the other hand, people with rough exteriors prove to be the (4) _____ and most considerate people on earth. They are the people who are beautiful from (5) _____.

SubQuestion No : 22

Q.22 Select the most appropriate option to fill in blank number 2.(

- Ans
- 1. glitters
 - 2. shows
 - 3. admits
 - 4. looks

Question ID : **630680156984**

Option 1 ID : **630680607503**

Option 2 ID : **630680607500**

Option 3 ID : **630680607501**

Option 4 ID : **630680607502**

Status : **Answered**

Chosen Option : **4**

Comprehension:

In the following passage, some words have been deleted. Read the passage carefully and select the most appropriate option to fill in each blank.

Appearances may not reveal the man. So, you shouldn't make (1) _____ about a man's character based on how he (2) _____. People smile and smile, yet prove to be (3) _____. On the other hand, people with rough exteriors prove to be the (4) _____ and most considerate people on earth. They are the people who are beautiful from (5) _____.

SubQuestion No : 23

Q.23 Select the most appropriate option to fill in blank number 3.(

- Ans
- 1. sparkling
 - 2. ecstatic
 - 3. grumpy
 - 4. joyful

Question ID : **630680156985**

Option 1 ID : **630680607504**

Option 2 ID : **630680607505**

Option 3 ID : **630680607507**

Option 4 ID : **630680607506**

Status : **Marked For Review**

Chosen Option : **3**



SSC CGL (Tier-1) STUDY NOTES



- ▶ 100% CGL Exam Syllabus Covered
- ▶ 12 Books, 1300+ Pages
- ▶ 5600+ MCQs
- ▶ Previous Year Papers & Mocks
- ▶ 1 Year Current Affairs
- ▶ Support & Guidance

50% OFF



SSCPORTAL.IN

FREE SHIPPING

SSC CGL PDF NOTES

100% Syllabus | 1300+ Pages

50% OFF

CLICK HERE



Comprehension:

In the following passage, some words have been deleted. Read the passage carefully and select the most appropriate option to fill in each blank.

Appearances may not reveal the man. So, you shouldn't make (1) _____ about a man's character based on how he (2) _____. People smile and smile, yet prove to be (3) _____. On the other hand, people with rough exteriors prove to be the (4) _____ and most considerate people on earth. They are the people who are beautiful from (5) _____.

SubQuestion No : 24

Q.24 Select the most appropriate option to fill in blank number 4.(

- Ans** 1. bitterest
 2. kindest
 3. strangest
 4. gloomiest

Question ID : **630680156986**

Option 1 ID : **630680607509**

Option 2 ID : **630680607510**

Option 3 ID : **630680607508**

Option 4 ID : **630680607511**

Status : **Answered**

Chosen Option : **2**

Comprehension:

In the following passage, some words have been deleted. Read the passage carefully and select the most appropriate option to fill in each blank.

Appearances may not reveal the man. So, you shouldn't make (1) _____ about a man's character based on how he (2) _____. People smile and smile, yet prove to be (3) _____. On the other hand, people with rough exteriors prove to be the (4) _____ and most considerate people on earth. They are the people who are beautiful from (5) _____.

SubQuestion No : 25

Q.25 Select the most appropriate option to fill in blank number 5.(

- Ans** 1. personality
 2. style
 3. within
 4. exterior

Question ID : **630680156987**

Option 1 ID : **630680607512**

Option 2 ID : **630680607515**

Option 3 ID : **630680607514**

Option 4 ID : **630680607513**

Status : **Marked For Review**

Chosen Option : **3**

