

Combined Graduate Level Examination 2024 Tier I

Roll Number	
Candidate Name	
Venue Name	
Exam Date	10/09/2024
Exam Time	4:00 PM - 5:00 PM
Subject	Combined Graduate Level Examination Tier I

Section : **General Intelligence and Reasoning**

Q.1 Three of the following four options are alike in a certain way and thus form a group. Which is the one that does NOT belong to that group?
 (NOTE: Operations should be performed on the whole numbers, without breaking down the numbers into its constituent digits. E.g. 13 – Operations on 13 such as adding/subtracting/multiplying etc. to 13 can be performed. Breaking down 13 into 1 and 3 and then performing mathematical operations on 1 and 3 is not allowed.)

- Ans 1. $81 - 118 - 91$
 2. $52 - 68 - 51$
 3. $21 - 38 - 31$
 4. $99 - 104 - 71$

Question ID : **630680196587**
 Option 1 ID : **630680762649**
 Option 2 ID : **630680762648**
 Option 3 ID : **630680762647**
 Option 4 ID : **630680762650**
 Status : **Not Answered**
 Chosen Option : --

Q.2 In a certain code language,

'A + B' means 'A is the mother of B';
 'A - B' means 'A is the brother of B';
 'A × B' means 'A is the wife of B' and
 'A ÷ B' means 'A is the father of B'.

Based on the above, how is 5 related to 3 if ' $5 - 2 \times 4 \div 3$ '?

- Ans 1. Father's brother
 2. Father's sister
 3. Mother's sister
 4. Mother's brother

Question ID : **630680300378**
 Option 1 ID : **6306801168412**
 Option 2 ID : **6306801168411**
 Option 3 ID : **6306801168414**
 Option 4 ID : **6306801168413**
 Status : **Answered**
 Chosen Option : 1

Q.3 In a certain code language, 'VERY' is written as '6314' and 'VARY' is written as '1438'. How will 'A' be written in that language?

- Ans 1. 6
 2. 8
 3. 4
 4. 1

Question ID : 630680339168
 Option 1 ID : 6306801319243
 Option 2 ID : 6306801319242
 Option 3 ID : 6306801319241
 Option 4 ID : 6306801319244
 Status : Answered
 Chosen Option : 2

Q.4 Select the option that is related to the fifth term in the same way as the second term is related to the first term and the fourth term is related to the third term.
 SWEET : WSETE :: SALTY : ASLYT :: DRINK : ?

- Ans 1. ESJOL
 2. RDIKN
 3. RDNIK
 4. DRIKN

Question ID : 630680416203
 Option 1 ID : 6306801623576
 Option 2 ID : 6306801623578
 Option 3 ID : 6306801623575
 Option 4 ID : 6306801623577
 Status : Answered
 Chosen Option : 2

Q.5 Select the set in which the numbers are related in the same way as are the numbers of the following sets.

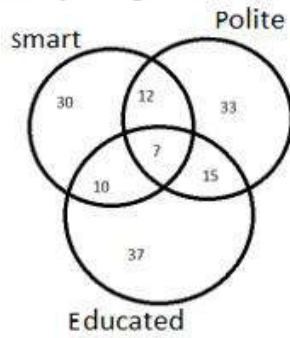
(173, 246)
 (148, 196)

(NOTE: Operations should be performed on the whole numbers, without breaking down the numbers into its constituent digits. E.g. 13 – Operations on 13 such as adding /deleting /multiplying etc. to 13 can be performed. Breaking down 13 into 1 and 3 and then performing mathematical operations on 1 and 3 is not allowed)

- Ans 1. (127, 194)
 2. (142, 176)
 3. (154, 208)
 4. (169, 247)

Question ID : 630680329241
 Option 1 ID : 6306801280787
 Option 2 ID : 6306801280788
 Option 3 ID : 6306801280786
 Option 4 ID : 6306801280785
 Status : Answered
 Chosen Option : 3

Q.6 Study the given Venn diagram and answer the question that follows.



How many smart people are polite?

- Ans 1. 63
 2. 19
 3. 7
 4. 12

Question ID : 630680199099

Option 1 ID : 630680772104

Option 2 ID : 630680772106

Option 3 ID : 630680772105

Option 4 ID : 630680772103

Status : Answered

Chosen Option : 2

Q.7 Select the set in which the numbers are related in the same way as are the numbers of the following set.

(121, 93, 214)

(115, 87, 202)

(NOTE: Operations should be performed on the whole numbers, without breaking down the numbers into its constituent digits. E.g. 13 – Operations on 13 such as adding/deleting/multiplying etc. to 13 can be performed. Breaking down 13 into 1 and 3 and then performing mathematical operations on 1 and 3 is not allowed.)

- Ans 1. (135, 117, 259)
 2. (97, 112, 209)
 3. (110, 94, 224)
 4. (84, 99, 189)

Question ID : 630680329201

Option 1 ID : 6306801280625

Option 2 ID : 6306801280628

Option 3 ID : 6306801280627

Option 4 ID : 6306801280626

Status : Not Answered

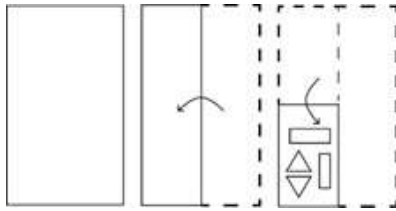
Chosen Option : --



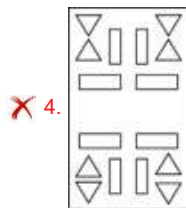
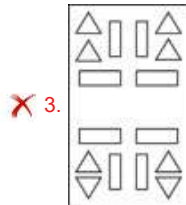
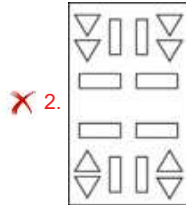
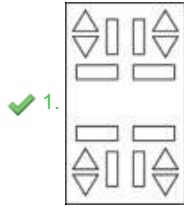
Download SSC CGL, CHSL E-BOOKS

[CLICK HERE](#)

Q.8 The sequence of folding a paper and the manner in which the folded paper is cut is shown in the following figures. How would this paper look when unfolded?



Ans



Question ID : 630680344228
 Option 1 ID : 6306801339226
 Option 2 ID : 6306801339225
 Option 3 ID : 6306801339227
 Option 4 ID : 6306801339228
 Status : Not Answered
 Chosen Option : --

Q.9 Select the option that represents the letters that when placed from left to right in the blanks below will complete the given letter series.
 P Q _ S _ P P Q P _ A P P Q _ S A P _ Q

- Ans**
- ✗ 1. PQSAP
 - ✓ 2. PASPP
 - ✗ 3. QPASP
 - ✗ 4. QSPAP

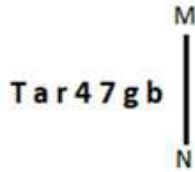
Question ID : 630680416270
 Option 1 ID : 6306801623844
 Option 2 ID : 6306801623843
 Option 3 ID : 6306801623846
 Option 4 ID : 6306801623845
 Status : Answered
 Chosen Option : 2

Q.10 In a certain code language, 'make some more' is coded as 'pb gq st' and 'need more time' is coded as 'ru ek gq'. What is the code for 'more' in that language?

- Ans
- 1. pb
 - 2. st
 - 3. gq
 - 4. ek

Question ID : 630680222447
 Option 1 ID : 630680863548
 Option 2 ID : 630680863547
 Option 3 ID : 630680863550
 Option 4 ID : 630680863549
 Status : Answered
 Chosen Option : 3

Q.11 Select the correct mirror image of the given figure when the mirror is placed at MN.



- Ans
- 1. dg741sT
 - 2. dg741sT
 - 3. gb741sT
 - 4. dg741eT

Question ID : 630680325839
 Option 1 ID : 6306801267550
 Option 2 ID : 6306801267549
 Option 3 ID : 6306801267552
 Option 4 ID : 6306801267551
 Status : Answered
 Chosen Option : 3

Q.12 Select the word pair that best represents a similar relationship to the one expressed in the pair of words given below. (The words must be considered as meaningful English words and must not be related to each other based on the number of letters/number of consonants/vowels in the word)
 Presence : Abundance

- Ans
- 1. Nourish : Neglect
 - 2. Abstract : Concrete
 - 3. Infinite : Cosmic
 - 4. Concise : Verbose

Question ID : 630680416648
 Option 1 ID : 6306801625355
 Option 2 ID : 6306801625356
 Option 3 ID : 6306801625357
 Option 4 ID : 6306801625358
 Status : Answered
 Chosen Option : 4

SSC CGL (Tier-1) STUDY NOTES



- ▶ 100% CGL Exam Syllabus Covered
- ▶ 12 Books, 1300+ Pages
- ▶ 5600+ MCQs
- ▶ Previous Year Papers & Mocks
- ▶ 1 Year Current Affairs
- ▶ Support & Guidance

50% OFF



SSCPORTAL.IN

FREE SHIPPING

SSC CGL PDF NOTES

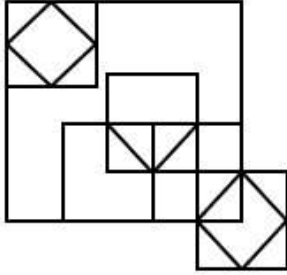
100% Syllabus | 1300+ Pages

50% OFF

CLICK HERE



Q.13 How many squares are there in the given figure?



- Ans
- 1. 10
 - 2. 13
 - 3. 11
 - 4. 12

Question ID : 630680163560

Option 1 ID : 630680633424

Option 2 ID : 630680633426

Option 3 ID : 630680633425

Option 4 ID : 630680633427

Status : Answered

Chosen Option : 2



Download SSC CGL, CHSL E-BOOKS

[CLICK HERE](#)

Q.14 Identify the figure given in the options which when put in place of the question mark (?) will logically complete the series?

Y	X	P	Y	E	P	4	E	
	P		E		4		X	
E		4	4	X	X	Y	Y	P

Ans

✓ 1.

X		4
	Y	
P		E

✗ 2.

X		E
	Y	
4		P

✗ 3.

X		4
	E	
Y		P

✗ 4.

X		4
	Y	
E		P

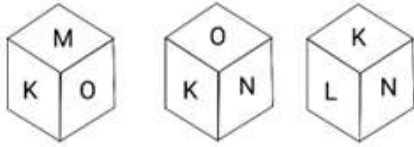
Question ID : 630680471487
 Option 1 ID : 6306801841663
 Option 2 ID : 6306801841665
 Option 3 ID : 6306801841664
 Option 4 ID : 6306801841662
 Status : Answered
 Chosen Option : 1

Q.15 Which of the following letter-clusters will replace the question mark (?) in the given series to make it logically complete?
 NUT, RYX, VCB, ZGF, ?

- Ans
- ✓ 1. DKJ
 - ✗ 2. EKJ
 - ✗ 3. EKL
 - ✗ 4. DKL

Question ID : 630680416935
 Option 1 ID : 6306801626504
 Option 2 ID : 6306801626503
 Option 3 ID : 6306801626506
 Option 4 ID : 6306801626505
 Status : Not Answered
 Chosen Option : --

Q.16 Six letters K, L, M, N, O and P are written on different faces of a dice. Three positions of this dice are shown in the figure. Find the letter on the face opposite to M.



- Ans
- 1. K
 - 2. P
 - 3. L
 - 4. N

Question ID : 630680296577

Option 1 ID : 6306801153959

Option 2 ID : 6306801153962

Option 3 ID : 6306801153961

Option 4 ID : 6306801153960

Status : Answered

Chosen Option : 4

Q.17 62 is related to 79 following certain logic. Following the same logic, 98 is related to 119. To which of the following numbers is 14 related, following the same logic? (NOTE : Operations should be performed on the whole numbers, without breaking down the numbers into its constituent digits. E.g. 13 – Operations on 13 such as adding /deleting /multiplying etc., to 13 can be performed. Breaking down 13 into 1 and 3 and then performing mathematical operations on 1 and 3 is not allowed.)

- Ans
- 1. 19
 - 2. 21
 - 3. 23
 - 4. 24

Question ID : 630680162511

Option 1 ID : 630680629340

Option 2 ID : 630680629341

Option 3 ID : 630680629342

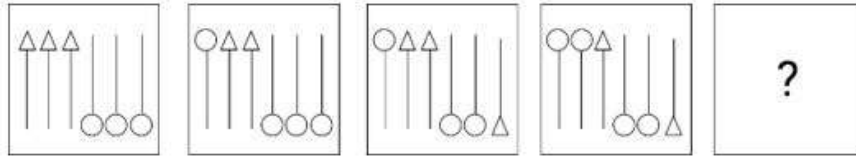
Option 4 ID : 630680629343

Status : Not Answered

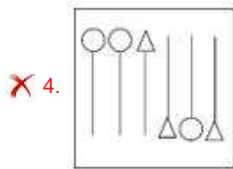
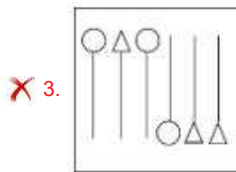
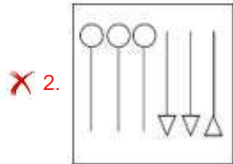
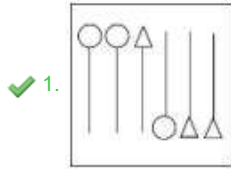
Chosen Option : --



Q.18 Select the figure from among the given options that can replace the question mark (?) in the following series.



Ans



Question ID : 630680339307

Option 1 ID : 6306801319798

Option 2 ID : 6306801319797

Option 3 ID : 6306801319799

Option 4 ID : 6306801319800

Status : Answered

Chosen Option : 1

Q.19 What will come in the place of '?' in the following equation, if '+' and '-' are interchanged and 'x' and '+' are interchanged?

$$15 \times 9 + 7 \div 26 - 13 = ?$$

Ans ✓ 1. 76

✗ 2. 84

✗ 3. 68

✗ 4. 72

Question ID : 630680339257

Option 1 ID : 6306801319600

Option 2 ID : 6306801319597

Option 3 ID : 6306801319598

Option 4 ID : 6306801319599

Status : Answered

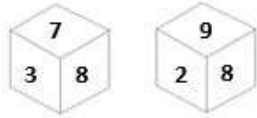
Chosen Option : 1



Download SSC CGL, CHSL E-BOOKS

CLICK HERE

Q.20 Two different positions of the same dice with faces 3, 7, 8, 2, 9 and 4 are shown below. Select the number that will be on the face opposite to the one having 4.



- Ans**
- 1. 9
 - 2. 3
 - 3. 8
 - 4. 2

Question ID : 630680349069
 Option 1 ID : 6306801358566
 Option 2 ID : 6306801358567
 Option 3 ID : 6306801358568
 Option 4 ID : 6306801358565
 Status : Answered
 Chosen Option : 3

Q.21 All of the letters in the word 'WISDOM' are arranged in alphabetical order. How many letters are there in the English alphabetical series between the letter which is third from the left end and the one which is second from the right end in the new letter-cluster thus formed?

- Ans**
- 1. Three
 - 2. Six
 - 3. Five
 - 4. Two

Question ID : 630680222292
 Option 1 ID : 630680863000
 Option 2 ID : 630680863002
 Option 3 ID : 630680863001
 Option 4 ID : 630680862999
 Status : Answered
 Chosen Option : 3

Q.22 Three of the following four are alike in a certain way and thus form a group. Which is the one that does NOT belong to that group? (Note :The odd one out is not based on the number of consonants/vowels or their position in the letter cluster)

- Ans**
- 1. FKN
 - 2. DIM
 - 3. EJM
 - 4. CHK

Question ID : 63068075411
 Option 1 ID : 630680291798
 Option 2 ID : 630680291796
 Option 3 ID : 630680291797
 Option 4 ID : 630680291795
 Status : Answered
 Chosen Option : 2

Q.23 Which of the following numbers will replace the question marks (?) in the given series?

4, ?, ?, 49, 121, 169, 289

- Ans 1. 9, 25
 2. 3, 9
 3. 9, 16
 4. 16, 25

Question ID : 630680411865
 Option 1 ID : 6306801606296
 Option 2 ID : 6306801606298
 Option 3 ID : 6306801606295
 Option 4 ID : 6306801606297

Status : Answered

Chosen Option : 1

Q.24 Select the number that will come in the place of the question mark(?), if '+' and '-' are interchanged and 'x' and '÷' are interchanged
 $11 \div 12 - 78 \times 6 + 57 = ?$

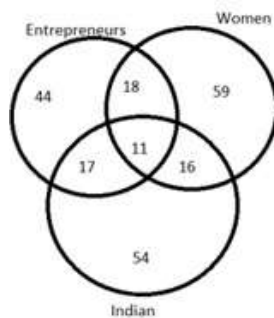
- Ans 1. 74
 2. 83
 3. 88
 4. 95

Question ID : 630680163581
 Option 1 ID : 630680633510
 Option 2 ID : 630680633508
 Option 3 ID : 630680633511
 Option 4 ID : 630680633509

Status : Answered

Chosen Option : 3

Q.25 Study the given Venn diagram and answer the question that follows.



How many women entrepreneurs are NOT Indian?

- Ans 1. 11
 2. 17
 3. 29
 4. 18

Question ID : 630680199104
 Option 1 ID : 630680772125
 Option 2 ID : 630680772126
 Option 3 ID : 630680772123
 Option 4 ID : 630680772124

Status : Answered

Chosen Option : 4

Q.1 MG Music Awards is presented annually by which of the following states?

- Ans 1. Manipur
 2. Mizoram
 3. Nagaland
 4. Chhattisgarh

Question ID : 630680412062
Option 1 ID : 6306801607085
Option 2 ID : 6306801607086
Option 3 ID : 6306801607084
Option 4 ID : 6306801607083
Status : Not Answered
Chosen Option : --

Q.2 National Sports University is situated in _____.

- Ans 1. Mizoram
 2. Tripura
 3. Manipur
 4. Meghalaya

Question ID : 630680309513
Option 1 ID : 6306801204205
Option 2 ID : 6306801204208
Option 3 ID : 6306801204206
Option 4 ID : 6306801204207
Status : Not Answered
Chosen Option : --

Q.3 Which of the following is the main cause of land degradation in Jharkhand and Chhattisgarh?

- Ans 1. Deforestation due to mining
 2. Overgrazing
 3. Intensive use of manure
 4. Over-irrigation

Question ID : 630680401291
Option 1 ID : 6306801564971
Option 2 ID : 6306801564970
Option 3 ID : 6306801564972
Option 4 ID : 6306801564969
Status : Answered
Chosen Option : 1

Q.4 Which country has the Republic feature of the Indian Constitution been borrowed from?

- Ans 1. Irish Constitution
 2. British Constitution
 3. French Constitution
 4. Australian Constitution

Question ID : 630680329437
Option 1 ID : 6306801281491
Option 2 ID : 6306801281490
Option 3 ID : 6306801281492
Option 4 ID : 6306801281489
Status : Answered
Chosen Option : 4



Q.5 Rudrasena II of which of the following dynasties married Prabhavatigupta, the daughter of Chandragupta II of the Gupta dynasty?

- Ans 1. Vakataka
 2. Chalukya
 3. Pallava
 4. Pushyabhuti

Question ID : 630680412477
Option 1 ID : 6306801608732
Option 2 ID : 6306801608733
Option 3 ID : 6306801608734
Option 4 ID : 6306801608731
Status : Not Answered
Chosen Option : --

Q.6 As of 2021, which is the world's largest drainage basin with an area of about 70,00,000 km²?

- Ans 1. Amazon basin
 2. Congo basin
 3. Amur basin
 4. Nile basin

Question ID : 63068094194
Option 1 ID : 630680365474
Option 2 ID : 630680365473
Option 3 ID : 630680365471
Option 4 ID : 630680365472
Status : Not Answered
Chosen Option : --

Q.7 'Sangken' is a festival celebrated in Arunachal Pradesh by people of which of the following religions?

- Ans 1. Jainism
 2. Islam
 3. Hinduism
 4. Buddhism

Question ID : 630680163297
Option 1 ID : 630680632392
Option 2 ID : 630680632395
Option 3 ID : 630680632394
Option 4 ID : 630680632393
Status : Not Answered
Chosen Option : --

Q.8 The cause of a redox reaction is the:

- Ans 1. transfer of neutrons between two reactants
 2. transfer of electrons between two products
 3. transfer of electrons between two reactants
 4. exchange of halogens between two reactants

Question ID : 630680134694
Option 1 ID : 630680521596
Option 2 ID : 630680521595
Option 3 ID : 630680521594
Option 4 ID : 630680521597
Status : Answered
Chosen Option : 3



Q.9 Which of the following States has declared a social security scheme for registered newspaper hawkers in the State in 2021 considering the losses they faced during the pandemic and that they are a part of the unorganised sector?

- Ans
- 1. Maharashtra
 - 2. Gujarat
 - 3. Tamil Nadu
 - 4. Odisha

Question ID : **630680114033**
Option 1 ID : **630680441535**
Option 2 ID : **630680441534**
Option 3 ID : **630680441537**
Option 4 ID : **630680441536**
Status : **Answered**
Chosen Option : **1**

Q.10 Which of the following characteristics is NOT of Aves?

- Ans
- 1. They give birth to live young ones with some exceptions those lay eggs.
 - 2. They have four-chambered heart.
 - 3. They breathe through the lungs
 - 4. These are warm-blooded animals.

Question ID : **630680517146**
Option 1 ID : **6306802020983**
Option 2 ID : **6306802020981**
Option 3 ID : **6306802020982**
Option 4 ID : **6306802020980**
Status : **Not Answered**
Chosen Option : **--**

Q.11 Which of the following books is INCORRECTLY paired with its respective author?

- Ans
- 1. Hind Swaraj – Mahatma Gandhi
 - 2. Why I am an Atheist – Bhagat Singh
 - 3. Gitanjali – Rabindranath Tagore
 - 4. The Discovery of India – Subhash Chandra Bose

Question ID : **630680412377**
Option 1 ID : **6306801608334**
Option 2 ID : **6306801608331**
Option 3 ID : **6306801608332**
Option 4 ID : **6306801608333**
Status : **Answered**
Chosen Option : **4**

Q.12 What is the aim of the PM Ujjwala 2.0 Yojna launched in August 2021?

- Ans
- 1. Free gas stove for BPL Households
 - 2. 20 million LPG connections will be provided to the beneficiaries
 - 3. Free LPG connections for commercial use
 - 4. 10 million LPG connections will be provided to the beneficiaries

Question ID : **630680112082**
Option 1 ID : **630680434056**
Option 2 ID : **630680434057**
Option 3 ID : **630680434055**
Option 4 ID : **630680434054**
Status : **Answered**
Chosen Option : **1**



Q.13 Which cell organelle is defined as the small round organelle that undergoes oxidation reaction to produce hydrogen peroxide?

- Ans
- 1. Vacuole
 - 2. Nucleus
 - 3. Centrosome
 - 4. Peroxisomes

Question ID : **630680407463**
Option 1 ID : **6306801588790**
Option 2 ID : **6306801588792**
Option 3 ID : **6306801588791**
Option 4 ID : **6306801588793**
Status : **Not Answered**
Chosen Option : --

Q.14 As for the year 2020-21, which of the following states had the lowest unemployment rate among persons aged 15 years and above?

- Ans
- 1. Gujarat
 - 2. Sikkim
 - 3. Madhya Pradesh
 - 4. Chhattisgarh

Question ID : **630680409676**
Option 1 ID : **6306801597536**
Option 2 ID : **6306801597533**
Option 3 ID : **6306801597535**
Option 4 ID : **6306801597534**
Status : **Answered**
Chosen Option : **1**

Q.15 The Accelerated Female Literacy Programme was initiated in districts where the female literacy rate, based on the 2001 census, was _____.

- Ans
- 1. below 35%
 - 2. below 50%
 - 3. below 45%
 - 4. below 30%

Question ID : **6306801048058**
Option 1 ID : **6306804114281**
Option 2 ID : **6306804114278**
Option 3 ID : **6306804114280**
Option 4 ID : **6306804114279**
Status : **Not Answered**
Chosen Option : --

Q.16 Who among the following was a poet who won Nobel Prize for literature in 1913?

- Ans
- 1. Rudyard Kipling
 - 2. Bankin Chandra Chattopadhyay
 - 3. Aurobindo Ghose
 - 4. Rabindranath Tagore

Question ID : **630680511520**
Option 1 ID : **6306801999204**
Option 2 ID : **6306801999202**
Option 3 ID : **6306801999205**
Option 4 ID : **6306801999203**
Status : **Not Answered**
Chosen Option : --



Q.17 Which group of people will be benefited by the Mukhya Mantri Sukh Ashray Yojana approved by Himachal Pradesh?

- Ans** 1. Orphans, specially abled children, destitute women and senior citizens
 2. Students and teachers
 3. Farmers and agricultural labourers
 4. Unemployed youth

Question ID : **630680413080**
Option 1 ID : **6306801611144**
Option 2 ID : **6306801611145**
Option 3 ID : **6306801611143**
Option 4 ID : **6306801611146**
Status : **Answered**
Chosen Option : **1**

Q.18 Which of the following departments of Delhi Sultanate was reorganized by Balban?

- Ans** 1. Diwan-i-Mustakhraj
 2. Diwan-i-Arz
 3. Diwan-i-Ishtiaq
 4. Diwan-i-Risalat

Question ID : **630680412411**
Option 1 ID : **6306801608470**
Option 2 ID : **6306801608469**
Option 3 ID : **6306801608468**
Option 4 ID : **6306801608467**
Status : **Not Answered**
Chosen Option : **--**

Q.19 When was the Indian Hockey Federation established?

- Ans** 1. 1925
 2. 1945
 3. 1935
 4. 1955

Question ID : **630680510818**
Option 1 ID : **6306801996402**
Option 2 ID : **6306801996404**
Option 3 ID : **6306801996403**
Option 4 ID : **6306801996405**
Status : **Not Answered**
Chosen Option : **--**

Q.20 Which of the following elements is a metalloid?

- Ans** 1. Sodium
 2. Iron
 3. Silicon
 4. Oxygen

Question ID : **63068098946**
Option 1 ID : **630680384490**
Option 2 ID : **630680384488**
Option 3 ID : **630680384489**
Option 4 ID : **630680384491**
Status : **Answered**
Chosen Option : **3**



Q.21 Madhuri Barthwal, a folk singer and Padma Shri 2022 awardee, belongs to which of the following states of India?

- Ans**
- 1. Maharashtra
 - 2. Himachal Pradesh
 - 3. Uttarakhand
 - 4. Uttar Pradesh

Question ID : 630680309204
Option 1 ID : 6306801202996
Option 2 ID : 6306801202994
Option 3 ID : 6306801202993
Option 4 ID : 6306801202995
Status : Not Answered
Chosen Option : --

Q.22 If assets of a bank are greater than liabilities, it will be recorded as:

- Ans**
- 1. net worth
 - 2. liabilities
 - 3. assets
 - 4. reserves

Question ID : 63068069513
Option 1 ID : 630680268720
Option 2 ID : 630680268719
Option 3 ID : 630680268718
Option 4 ID : 630680268721
Status : Answered
Chosen Option : 1

Q.23 In which of the following states is the development of rail transport less, due to its geographical conditions?

- Ans**
- 1. Bihar
 - 2. Uttar Pradesh
 - 3. Sikkim
 - 4. Haryana

Question ID : 63068087516
Option 1 ID : 630680339451
Option 2 ID : 630680339449
Option 3 ID : 630680339452
Option 4 ID : 630680339450
Status : Answered
Chosen Option : 3


Q.24 Which of the following options is the legislative organ of the Union government?

- Ans**
- 1. Parliament
 - 2. Executive
 - 3. Legislative assembly
 - 4. Judiciary

Question ID : 630680329458
Option 1 ID : 6306801281573
Option 2 ID : 6306801281574
Option 3 ID : 6306801281576
Option 4 ID : 6306801281575
Status : Answered
Chosen Option : 1



कर्मचारी चयन आयोग (CGL) परीक्षा अध्ययन सामग्री



FREE SHIPPING

- ▶ 100% Syllabus Covered
- ▶ 9 Books, 1000+ Pages - PRINT COPY
- ▶ 3000+ MCQs - PRINT COPY
- ▶ 08 Year Solved Papers & Mock Tests (PDF Copy)
- ▶ One Year Current Affairs (PDF Copy)

हिन्दी माध्यम

50% OFF

SSCPORTAL.IN

SSC CGL HINDI PDF NOTES

100% Syllabus | 1,000+ Pages

50%
OFF

CLICK HERE

<https://sscportal.in/study-kit/cgl/tier-1-hindi>

Q.25 In which year was the National Institute of Kathak Dance established?

- Ans 1. 1961
 2. 1969
 3. 1954
 4. 1964

Question ID : **630680160192**
 Option 1 ID : **630680620141**
 Option 2 ID : **630680620143**
 Option 3 ID : **630680620140**
 Option 4 ID : **630680620142**
 Status : **Not Answered**
 Chosen Option : --

Section : **Quantitative Aptitude**

Q.1 The table below shows incomes (in rupees) earned by five employees of a company during the month of March 2019 and the income sources.

Source/Name of Employee	Reeta	Seeta	Geeta	Neeta	Aneeta
Overtime	2,500	2,800	2,300	2,200	2,600
Arrears	4,500	4,800	4,900	5,300	5,600
Bonus	2,300	2,100	2,500	2,700	2,800
Salary	24,000	30,000	29,000	32,000	34,000

The total amount of arrears paid by the company during the given period is what percentage of the total amount of bonus paid during the given period?

- Ans 1. 102.42%
 2. 402.42%
 3. 202.42%
 4. 302.42%

Question ID : **630680428154**
 Option 1 ID : **6306801670660**
 Option 2 ID : **6306801670663**
 Option 3 ID : **6306801670661**
 Option 4 ID : **6306801670662**
 Status : **Not Answered**
 Chosen Option : --

Q.2 Study the given table and answer the question that follows.

The following table shows the population of a city at the end of the years mentioned.

Year	Population
2012	64.5
2013	68.4
2014	72.6
2015	83.8
2016	100.6
2017	112.8
2018	128.4
2019	134.6
2020	156.8
2021	176.4

Which of the following years has the highest rate of increase compared to the previous year?

- Ans** 1. 2016
 2. 2015
 3. 2018
 4. 2019

Question ID : 630680396985
 Option 1 ID : 6306801547999
 Option 2 ID : 6306801547997
 Option 3 ID : 6306801547998
 Option 4 ID : 6306801547996
 Status : Answered
 Chosen Option : 1

Q.3 A bronze article having a marked price of ₹1,000 is sold during a festive season sale after three successive discounts of 20% and 30% and 10%. What will be the amount (in ₹) to be paid by a customer if she buys the article during the festival season?

- Ans** 1. 496
 2. 504
 3. 564
 4. 508

Question ID : 630680239492
 Option 1 ID : 630680928919
 Option 2 ID : 630680928921
 Option 3 ID : 630680928922
 Option 4 ID : 630680928920
 Status : Answered
 Chosen Option : 2

Q.4 A rectangular piece of paper is 50 cm long and 22 cm wide. If a cylinder is formed by rolling the paper along its breadth, then the volume of the cylinder is:

- Ans
- 1. 1,925 cm³
 - 2. 2,125 cm³
 - 3. 2,025 cm³
 - 4. 1,825 cm³

Question ID : 63068091885
 Option 1 ID : 630680356275
 Option 2 ID : 630680356277
 Option 3 ID : 630680356276
 Option 4 ID : 630680356274
 Status : Not Answered
 Chosen Option : --

Q.5 If $\triangle PQR \cong \triangle MON$ such that $\angle PQR = 82^\circ, \angle QRP = 47^\circ, \angle RPQ = 51^\circ, \angle MON = (5y - 8)^\circ, QR = 24$ and $ON = 3x + y$, then find $(x + y)$.

- Ans
- 1. 20
 - 2. 14
 - 3. 18
 - 4. 16

Question ID : 630680526504
 Option 1 ID : 6306802058085
 Option 2 ID : 6306802058083
 Option 3 ID : 6306802058084
 Option 4 ID : 6306802058082
 Status : Not Answered
 Chosen Option : --

Q.6 If $45 \div 3 + 4 \times A - 48 \div 24 + 4 = 1$, then the value of A is:

- Ans
- 1. 2
 - 2. 4
 - 3. -4
 - 4. -2

Question ID : 630680388400
 Option 1 ID : 6306801514120
 Option 2 ID : 6306801514118
 Option 3 ID : 6306801514119
 Option 4 ID : 6306801514121
 Status : Not Answered
 Chosen Option : --

Q.7 Simple interest on a certain sum is one-fifth of the sum and the interest rate per cent per annum is 5 times the number of years. If the rate of interest increases by 3%, then how much will the simple interest (in ₹) be on ₹5,600 for 6 years?

- Ans
- 1. 4268
 - 2. 4668
 - 3. 4168
 - 4. 4368

Question ID : 630680344789
Option 1 ID : 6306801341467
Option 2 ID : 6306801341465
Option 3 ID : 6306801341468
Option 4 ID : 6306801341466
Status : Not Answered
Chosen Option : --

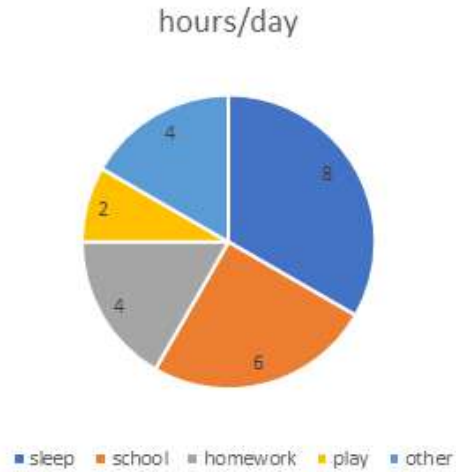
Q.8 The average of the squares of the first 45 natural numbers is

- Ans
- 1. 699.67
 - 2. 697.67
 - 3. 696.67
 - 4. 698.67

Question ID : 630680568972
Option 1 ID : 6306802224700
Option 2 ID : 6306802224697
Option 3 ID : 6306802224699
Option 4 ID : 6306802224698
Status : Not Answered
Chosen Option : --



Q.9 The pie chart given below shows the number of hours spent by a student for different activities on a working day.
The percentage of hours spent at school in a day is _____.



- Ans
- 1. 30%
 - 2. 35%
 - 3. 40%
 - 4. 25%

Question ID : 630680405097
 Option 1 ID : 6306801579786
 Option 2 ID : 6306801579785
 Option 3 ID : 6306801579787
 Option 4 ID : 6306801579788
 Status : Answered
 Chosen Option : 4

Q.10 In an election between Sunita and Mamata, 85% of voters cast their votes but 2% of votes were invalid. If Sunita got 64,974 votes which is 78% of valid votes, then the total number of voters enrolled in the election was:

- Ans
- 1. 1,65,000
 - 2. 1,00,000
 - 3. 1,25,000
 - 4. 1,80,000

Question ID : 630680432457
 Option 1 ID : 6306801687833
 Option 2 ID : 6306801687831
 Option 3 ID : 6306801687832
 Option 4 ID : 6306801687834
 Status : Not Answered
 Chosen Option : --



Q.11 If one man adds 6 litres of water to 10 litres of milk and another man adds 4 litres of water to 8 litres of milk. Find the ratio of milk in the two mixtures.

- Ans** 1. 15 : 16
 2. 16 : 15
 3. 12 : 11
 4. 16 : 17

Question ID : **630680397224**
 Option 1 ID : **6306801548952**
 Option 2 ID : **6306801548953**
 Option 3 ID : **6306801548955**
 Option 4 ID : **6306801548954**
 Status : **Not Answered**
 Chosen Option : --

Q.12 The speed of a boat in still water is 18 km/h and the speed of the stream is 3 km/h. How much time (in hours) will it take to cover a distance of 105 km in downstream and in coming back?

- Ans** 1. 12
 2. 10
 3. 9
 4. 15

Question ID : **630680428555**
 Option 1 ID : **6306801672264**
 Option 2 ID : **6306801672265**
 Option 3 ID : **6306801672267**
 Option 4 ID : **6306801672266**
 Status : **Answered**
 Chosen Option : **1**

Q.13 $\frac{3\sin 58^\circ}{5\cos 32^\circ} + \frac{2\cos 62^\circ}{5\sin 28^\circ}$ is equal to:

- Ans** 1. 2
 2. 0
 3. 1
 4. 3

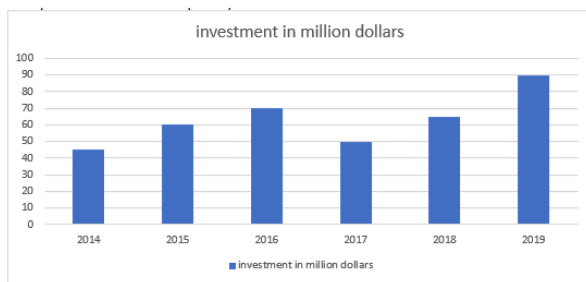
Question ID : **630680518871**
 Option 1 ID : **6306802027958**
 Option 2 ID : **6306802027956**
 Option 3 ID : **6306802027957**
 Option 4 ID : **6306802027959**
 Status : **Answered**
 Chosen Option : **3**

Q.14 Pipes P and Q can completely fill a water tank in 10 hours and 15 hours, respectively. A pipe R can empty a tank filled completely with water in 12 hours. Initially, the tank is empty and only pipes P and Q are opened at 6 a.m. and pipe R is also opened at 9 a.m. By what time will the tank be completely filled?

- Ans** 1. 3 p.m.
 2. 11 a.m.
 3. 1 p.m.
 4. 2 p.m.

Question ID : 630680395281
 Option 1 ID : 6306801541335
 Option 2 ID : 6306801541332
 Option 3 ID : 6306801541333
 Option 4 ID : 6306801541334
 Status : **Not Answered**
 Chosen Option : --

Q.15 The given bar graph shows the foreign direct investment (in million dollars) in Country A from all over the world over the given years.



What was the ratio of investment in 2018 to that in 2015?

- Ans** 1. 11 : 12
 2. 13 : 12
 3. 12 : 11
 4. 13 : 11

Question ID : 630680428150
 Option 1 ID : 6306801670644
 Option 2 ID : 6306801670646
 Option 3 ID : 6306801670645
 Option 4 ID : 6306801670647
 Status : **Answered**
 Chosen Option : 2

Q.16 Which digits should come in the place of * and #, respectively, if the 7-digit number 62684*# is divisible by both 8 and 5?

- Ans** 1. 0 and 5
 2. 4 and 0
 3. 5 and 0
 4. 2 and 0

Question ID : 630680131179
 Option 1 ID : 630680507983
 Option 2 ID : 630680507982
 Option 3 ID : 630680507984
 Option 4 ID : 630680507985
 Status : **Answered**
 Chosen Option : 2

Q.17 What is the central angle of a sector of a circle whose area and perimeter are, respectively, equal to 209 cm^2 and 63 cm if it is given that its radius is a non-negative integer (roundup to one decimal place)?

- Ans**
- 1. 49.5°
 - 2. 55.5°
 - 3. 53.5°
 - 4. 51.5°

Question ID : 630680410857
 Option 1 ID : 6306801602183
 Option 2 ID : 6306801602186
 Option 3 ID : 6306801602185
 Option 4 ID : 6306801602184
 Status : Not Answered
 Chosen Option : --

Q.18 If $x^2 + y^2 = 280$ and $xy = 120$, then find the value of $\frac{x-y}{x+y}$.

- Ans**
- 1. $\sqrt{15}$
 - 2. $\sqrt{13}$
 - 3. $\frac{1}{\sqrt{15}}$
 - 4. $\frac{1}{\sqrt{13}}$

Question ID : 630680413501
 Option 1 ID : 6306801612830
 Option 2 ID : 6306801612829
 Option 3 ID : 6306801612831
 Option 4 ID : 6306801612828
 Status : Answered
 Chosen Option : 4

Q
 If $7 \cos^2 \theta + 5 \sin^2 \theta - 6 = 0$, ($0^\circ < \theta < 90^\circ$), then what is the value of $1 + \sqrt{\frac{\sec \theta + \tan \theta}{\sec \theta - \tan \theta}}$?

- Ans**
- 1. $\sqrt{2} + 2$
 - 2. $\sqrt{2} + 1$
 - 3. $\sqrt{2} - 1$
 - 4. $\sqrt{2} - 2$

Question ID : 630680397627
 Option 1 ID : 6306801550433
 Option 2 ID : 6306801550432
 Option 3 ID : 6306801550430
 Option 4 ID : 6306801550431
 Status : Not Answered
 Chosen Option : --

Q.20 For what value of k will the lines $2x + 7ky - 8 = 0$ and $x + y - 9 = 0$ have no solution?

- Ans
- 1. $\frac{8}{9}$
 - 2. $\frac{1}{2}$
 - 3. $\frac{2}{7}$
 - 4. $\frac{9}{7}$

Question ID : 630680296072
 Option 1 ID : 6306801151958
 Option 2 ID : 6306801151957
 Option 3 ID : 6306801151956
 Option 4 ID : 6306801151959
 Status : Answered
 Chosen Option : 3

Q.21 The area of a square is $16x^2 + 40x + 25$ square units. Find the perimeter of the square.

- Ans
- 1. $3(8x + 10)$
 - 2. $3(10x + 8)$
 - 3. $2(10x + 8)$
 - 4. $2(8x + 10)$

Question ID : 630680413547
 Option 1 ID : 6306801613012
 Option 2 ID : 6306801613015
 Option 3 ID : 6306801613013
 Option 4 ID : 6306801613014
 Status : Not Answered
 Chosen Option : --

Q.22 The radii of two circle are 5 cm and 10 cm and the distance between their centres is 17 cm. Find the length of the transverse common tangent.

- Ans
- 1. 6 cm
 - 2. 7.5 cm
 - 3. 9 cm
 - 4. 8 cm

Question ID : 630680404008
 Option 1 ID : 6306801575518
 Option 2 ID : 6306801575520
 Option 3 ID : 6306801575521
 Option 4 ID : 6306801575519
 Status : Not Answered
 Chosen Option : --

Q.23 A shopkeeper allows a discount of 20% on the marked price of an item and thus gains 10%. What is the ratio of the cost price to the marked price of the item?

- Ans
- 1. 9:13
 - 2. 7:10
 - 3. 11:14
 - 4. 8:11

Question ID : 630680429049
 Option 1 ID : 6306801674242
 Option 2 ID : 6306801674240
 Option 3 ID : 6306801674243
 Option 4 ID : 6306801674241
 Status : Answered
 Chosen Option : 2

Q.24 If $7 \tan \theta = 3$, and θ is an acute angle, then $\frac{5 \sin \theta - \cos \theta}{5 \sin \theta + 2 \cos \theta}$ is equal to:

- Ans
- 1. $\frac{11}{29}$
 - 2. $\frac{7}{29}$
 - 3. $\frac{8}{29}$
 - 4. $\frac{9}{29}$

Question ID : 630680526478
 Option 1 ID : 6306802057978
 Option 2 ID : 6306802057980
 Option 3 ID : 6306802057979
 Option 4 ID : 6306802057981
 Status : Answered
 Chosen Option : 3

Q.25 If the length of a common external tangent to two circles is 9 and that of a common internal tangent is 5, then the product of the radii of the two circles is:

- Ans
- 1. 12
 - 2. 14
 - 3. 10
 - 4. 8

Question ID : 630680195537
 Option 1 ID : 630680758619
 Option 2 ID : 630680758620
 Option 3 ID : 630680758618
 Option 4 ID : 630680758617
 Status : Not Answered
 Chosen Option : --

Section : English Comprehension

**Q.1 Select the most appropriate synonym of the given word.
Evaluate**

- Ans** 1. Assess
 2. Unity
 3. Misquote
 4. Misjudge

Question ID : 630680209304
Option 1 ID : 630680811432
Option 2 ID : 630680811433
Option 3 ID : 630680811431
Option 4 ID : 630680811434
Status : Answered
Chosen Option : 1

**Q.2 Select the option that expresses the given sentence in passive voice.
Historians tell us how this country was divided into three.**

- Ans** 1. We have been told by historians how this country was divided into three.
 2. We are told by historians how this country divided into three.
 3. We are told by historians how this country was divided into three.
 4. We are told by historians how this country has been divided into three.

Question ID : 630680415192
Option 1 ID : 6306801619515
Option 2 ID : 6306801619517
Option 3 ID : 6306801619518
Option 4 ID : 6306801619516
Status : Not Answered
Chosen Option : --

**Q.3 Select the most appropriate ANTONYM of the given word.
Mechanical**

- Ans** 1. Yielding
 2. Automatised
 3. Manual
 4. Surrogate

Question ID : 630680517572
Option 1 ID : 6306802022686
Option 2 ID : 6306802022684
Option 3 ID : 6306802022687
Option 4 ID : 6306802022685
Status : Answered
Chosen Option : 3



Q.4 Select the option that can be used as a one-word substitute for the given group of words.

a short section (as of a book) that leads to or explains the main part.

- Ans 1. Conclusion
 2. Foreword
 3. Paraphrase
 4. Postscript

Question ID : 630680414776
Option 1 ID : 6306801617848
Option 2 ID : 6306801617847
Option 3 ID : 6306801617850
Option 4 ID : 6306801617849
Status : Answered
Chosen Option : 1

Q.5 Select the option that expresses the given sentence in passive voice.

The company will launch the new product next month, and they are already promoting it through various marketing channels.

- Ans 1. The new product were been launched by the company next month, and it already was promoting through various marketing channels.
 2. The new product will have been launched by the company next month, and it was already being promoted through various marketing channels.
 3. The new product will be launched by the company next month, and it is already being promoted through various marketing channels.
 4. The new product was launched by the company next month, and it is already promoted through various marketing channels.

Question ID : 630680374380
Option 1 ID : 6306801458706
Option 2 ID : 6306801458705
Option 3 ID : 6306801458703
Option 4 ID : 6306801458704
Status : Not Answered
Chosen Option : --

Q.6 Select the most appropriate option to fill in the blank.

The group of travellers were wonderstruck by the _____ of the coin.

- Ans 1. white
 2. wait
 3. weight
 4. wide

Question ID : 63068069102
Option 1 ID : 630680267087
Option 2 ID : 630680267086
Option 3 ID : 630680267088
Option 4 ID : 630680267089
Status : Answered
Chosen Option : 3



Q.7 Parts of a sentence are given below in jumbled order. Select the option that arranges the parts in the correct sequence to form a meaningful sentence.

- (P) technology has revolutionised
- (Q) and it has transformed the way
- (O) every aspect of our lives
- (R) we communicate and connect

- Ans**
- 1. RPOQ
 - 2. ORQP
 - 3. RPQO
 - 4. POQR

Question ID : 630680380983
Option 1 ID : 6306801484922
Option 2 ID : 6306801484921
Option 3 ID : 6306801484919
Option 4 ID : 6306801484920
Status : Answered
Chosen Option : 4

Q.8 Select the most appropriate ANTONYM of the word in the brackets to fill in the blank.

The _____ to the venue was decorated with beautiful lights. [exit]

- Ans**
- 1. house
 - 2. entry
 - 3. road
 - 4. ceremony

Question ID : 630680132560
Option 1 ID : 630680513376
Option 2 ID : 630680513375
Option 3 ID : 630680513374
Option 4 ID : 630680513377
Status : Answered
Chosen Option : 2

Q.9 Select the most appropriate synonym of the bracketed word in the following sentence to fill in the blank.

The media, these days, constructs _____ (misleading) narratives on politics and celebrities to increase the viewership.

- Ans**
- 1. candid
 - 2. sincere
 - 3. mendacious
 - 4. true

Question ID : 630680310098
Option 1 ID : 6306801206534
Option 2 ID : 6306801206535
Option 3 ID : 6306801206536
Option 4 ID : 6306801206533
Status : Answered
Chosen Option : 3



Q.10 Select the most appropriate meaning of the given idiom.

Care a hang

- Ans** 1. Caring too much
 2. Hanging clothes to dry
 3. Showing no interest
 4. Putting an outfit on a hanger

Question ID : 630680374772
Option 1 ID : 6306801460255
Option 2 ID : 6306801460258
Option 3 ID : 6306801460256
Option 4 ID : 6306801460257
Status : Answered
Chosen Option : 3

Q.11 Select the word which means the same as the group of words given.

Choice between two unsatisfactory alternatives

- Ans** 1. Problem
 2. Dilemma
 3. Confusion
 4. Difficulty

Question ID : 630680414700
Option 1 ID : 6306801617545
Option 2 ID : 6306801617543
Option 3 ID : 6306801617544
Option 4 ID : 6306801617546
Status : Answered
Chosen Option : 2

Q.12 Select the option that can be used as a one-word substitute for the given group of words.

Fear of closed spaces

- Ans** 1. Photophobia
 2. Claustrophobia
 3. Agoraphobia
 4. Optophobia

Question ID : 630680405384
Option 1 ID : 6306801580748
Option 2 ID : 6306801580746
Option 3 ID : 6306801580747
Option 4 ID : 6306801580749
Status : Answered
Chosen Option : 2



Q.13 Select the correctly spelt word to fill in the blank.

The transistors are used as the main _____, which are built into computer chips.

- Ans
- 1. cumponents
 - 2. components
 - 3. kamponents
 - 4. kumponents

Question ID : 630680374785
Option 1 ID : 6306801460310
Option 2 ID : 6306801460309
Option 3 ID : 6306801460308
Option 4 ID : 6306801460307
Status : Answered
Chosen Option : 2

Q.14 Select the most appropriate option to substitute the underlined segment in the given sentence.

To tell others secret information only for enjoyment is not a good practice.

- Ans
- 1. spill the words
 - 2. spill the cat
 - 3. spill the beans
 - 4. spill the onions

Question ID : 630680316363
Option 1 ID : 6306801231078
Option 2 ID : 6306801231079
Option 3 ID : 6306801231077
Option 4 ID : 6306801231080
Status : Answered
Chosen Option : 1

Q.15 Select the INCORRECTLY spelt word.

- Ans
- 1. Voluptuous
 - 2. Vomitus
 - 3. Verminous
 - 4. Verifiability

Question ID : 630680409979
Option 1 ID : 6306801598747
Option 2 ID : 6306801598746
Option 3 ID : 6306801598745
Option 4 ID : 6306801598748
Status : Answered
Chosen Option : 4



Q.16 Select the option that can substitute/replace the bracketed word correctly and complete the sentence.

They could (always) stay in, or go for a walk.

- Ans 1. either
 2. not only
 3. had better
 4. neither

Question ID : 630680176612
Option 1 ID : 630680684669
Option 2 ID : 630680684671
Option 3 ID : 630680684670
Option 4 ID : 630680684668
Status : Answered
Chosen Option : 1

Q.17 Select the most appropriate meaning of the underlined word.
Solomon's reputation as an accountant is taintless .

- Ans 1. dubious
 2. inconsistent
 3. faultless
 4. flawed

Question ID : 630680182096
Option 1 ID : 630680705609
Option 2 ID : 630680705608
Option 3 ID : 630680705607
Option 4 ID : 630680705606
Status : Answered
Chosen Option : 3

Q.18 Parts of the following sentence have been underlined and given as options. Select the option that contains an error.

The supermarket is open from 10 a.m. still 10 p.m.

- Ans 1. open
 2. from 10 a.m.
 3. The supermarket
 4. still 10 p.m.

Question ID : 630680398609
Option 1 ID : 6306801554439
Option 2 ID : 6306801554440
Option 3 ID : 6306801554438
Option 4 ID : 6306801554441
Status : Answered
Chosen Option : 4



Q.19 The following sentence has been divided into four segments. Identify the segment that contains a grammatical error.

My sister, Juliet, / got married / as her / was 23.

- Ans** 1. as her
 2. My sister, Juliet,
 3. got married
 4. was 23.

Question ID : 630680300645
Option 1 ID : 6306801169405
Option 2 ID : 6306801169403
Option 3 ID : 6306801169404
Option 4 ID : 6306801169406
Status : Answered
Chosen Option : 1

Q.20 Select the most appropriate option to substitute the underlined word in the given sentence.

Mayra has the ability for mathematics.

- Ans** 1. astute
 2. aptitude
 3. attitude
 4. altitude

Question ID : 630680158965
Option 1 ID : 630680615331
Option 2 ID : 630680615329
Option 3 ID : 630680615328
Option 4 ID : 630680615330
Status : Answered
Chosen Option : 2



Comprehension:

In the following passage, some words have been deleted. Read the passage carefully and select the most appropriate option to fill in each blank.

As a result of Covid-19, the quick (1) _____ to digital training has exposed the hazards of student disengagement and the resulting consequences of lower student performance across (2) _____ courses.

The latest (3) _____ has altered the education of millions of people around the world. New approaches and improvements in the school system are urgently required. Considering the increasing digital divide, the strategy may exacerbate existing inequality disparities. More than 500 million students, at various levels, around the world were forced to (4) _____ their studies. These changes have caused and will continue to cause some inconvenience, but they will also foster innovation and future reforms inside this education system.

During a global Covid-19 pandemic, the 'pile-on effect' of the coronavirus can have long-term consequences for schooling, notably for the most vulnerable. Children, (5) _____ basic, core learning (reading, math, languages, etc.) was weak to begin with, face a significant risk of regression. During Covid-19, millions of children whose right to education has already been violated, particularly girls, are exposed to greater health and well-being hazards (both psychosocial and physical).

SubQuestion No : 21

Q.21 Select the most appropriate option to fill in blank number 1.

Ans ✓ 1. transition

✗ 2. end

✗ 3. stagnation

✗ 4. set

Question ID : **630680156415**

Option 1 ID : **630680605322**

Option 2 ID : **630680605323**

Option 3 ID : **630680605320**

Option 4 ID : **630680605321**

Status : **Answered**

Chosen Option : **1**

Comprehension:

In the following passage, some words have been deleted. Read the passage carefully and select the most appropriate option to fill in each blank.

As a result of Covid-19, the quick (1) _____ to digital training has exposed the hazards of student disengagement and the resulting consequences of lower student performance across (2) _____ courses.

The latest (3) _____ has altered the education of millions of people around the world. New approaches and improvements in the school system are urgently required. Considering the increasing digital divide, the strategy may exacerbate existing inequality disparities. More than 500 million students, at various levels, around the world were forced to (4) _____ their studies. These changes have caused and will continue to cause some inconvenience, but they will also foster innovation and future reforms inside this education system.

During a global Covid-19 pandemic, the 'pile-on effect' of the coronavirus can have long-term consequences for schooling, notably for the most vulnerable. Children, (5) _____ basic, core learning (reading, math, languages, etc.) was weak to begin with, face a significant risk of regression. During Covid-19, millions of children whose right to education has already been violated, particularly girls, are exposed to greater health and well-being hazards (both psychosocial and physical).

SubQuestion No : 22

Q.22 Select the most appropriate option to fill in blank number 2.

Ans ✓ 1. numerous

✗ 2. fewer

✗ 3. particular

✗ 4. limit

Question ID : **630680156416**

Option 1 ID : **630680605324**

Option 2 ID : **630680605327**

Option 3 ID : **630680605325**

Option 4 ID : **630680605326**

Status : **Answered**

Chosen Option : **1**



Comprehension:

In the following passage, some words have been deleted. Read the passage carefully and select the most appropriate option to fill in each blank.

As a result of Covid-19, the quick (1) _____ to digital training has exposed the hazards of student disengagement and the resulting consequences of lower student performance across (2) _____ courses.

The latest (3) _____ has altered the education of millions of people around the world. New approaches and improvements in the school system are urgently required. Considering the increasing digital divide, the strategy may exacerbate existing inequality disparities. More than 500 million students, at various levels, around the world were forced to (4) _____ their studies. These changes have caused and will continue to cause some inconvenience, but they will also foster innovation and future reforms inside this education system.

During a global Covid-19 pandemic, the 'pile-on effect' of the coronavirus can have long-term consequences for schooling, notably for the most vulnerable. Children, (5) _____ basic, core learning (reading, math, languages, etc.) was weak to begin with, face a significant risk of regression. During Covid-19, millions of children whose right to education has already been violated, particularly girls, are exposed to greater health and well-being hazards (both psychosocial and physical).

SubQuestion No : 23

Q.23 Select the most appropriate option to fill in blank number 3.

- Ans
- 1. epidemic
 - 2. local
 - 3. endemic
 - 4. pandemic

Question ID : **630680156417**
 Option 1 ID : **630680605329**
 Option 2 ID : **630680605328**
 Option 3 ID : **630680605330**
 Option 4 ID : **630680605331**
 Status : **Answered**
 Chosen Option : **4**

Comprehension:

In the following passage, some words have been deleted. Read the passage carefully and select the most appropriate option to fill in each blank.

As a result of Covid-19, the quick (1) _____ to digital training has exposed the hazards of student disengagement and the resulting consequences of lower student performance across (2) _____ courses.

The latest (3) _____ has altered the education of millions of people around the world. New approaches and improvements in the school system are urgently required. Considering the increasing digital divide, the strategy may exacerbate existing inequality disparities. More than 500 million students, at various levels, around the world were forced to (4) _____ their studies. These changes have caused and will continue to cause some inconvenience, but they will also foster innovation and future reforms inside this education system.

During a global Covid-19 pandemic, the 'pile-on effect' of the coronavirus can have long-term consequences for schooling, notably for the most vulnerable. Children, (5) _____ basic, core learning (reading, math, languages, etc.) was weak to begin with, face a significant risk of regression. During Covid-19, millions of children whose right to education has already been violated, particularly girls, are exposed to greater health and well-being hazards (both psychosocial and physical).

SubQuestion No : 24

Q.24 Select the most appropriate option to fill in blank number 4.

- Ans
- 1. suspend
 - 2. carry on
 - 3. resume
 - 4. reopened

Question ID : **630680156418**
 Option 1 ID : **630680605333**
 Option 2 ID : **630680605335**
 Option 3 ID : **630680605332**
 Option 4 ID : **630680605334**
 Status : **Answered**
 Chosen Option : **1**

SSC CGL (Tier-1) STUDY NOTES



- ▶ 100% CGL Exam Syllabus Covered
- ▶ 12 Books, 1300+ Pages
- ▶ 5600+ MCQs
- ▶ Previous Year Papers & Mocks
- ▶ 1 Year Current Affairs
- ▶ Support & Guidance

50% OFF



SSCPORTAL.IN

FREE SHIPPING

SSC CGL PDF NOTES

100% Syllabus | 1300+ Pages

50% OFF

CLICK HERE



Comprehension:

In the following passage, some words have been deleted. Read the passage carefully and select the most appropriate option to fill in each blank.

As a result of Covid-19, the quick (1) _____ to digital training has exposed the hazards of student disengagement and the resulting consequences of lower student performance across (2) _____ courses.

The latest (3) _____ has altered the education of millions of people around the world. New approaches and improvements in the school system are urgently required. Considering the increasing digital divide, the strategy may exacerbate existing inequality disparities. More than 500 million students, at various levels, around the world were forced to (4) _____ their studies. These changes have caused and will continue to cause some inconvenience, but they will also foster innovation and future reforms inside this education system.

During a global Covid-19 pandemic, the 'pile-on effect' of the coronavirus can have long-term consequences for schooling, notably for the most vulnerable. Children, (5) _____ basic, core learning (reading, math, languages, etc.) was weak to begin with, face a significant risk of regression. During Covid-19, millions of children whose right to education has already been violated, particularly girls, are exposed to greater health and well-being hazards (both psychosocial and physical).

SubQuestion No : 25

Q.25 Select the most appropriate option to fill in blank number 5.

- Ans 1. whom
 2. whose
 3. who
 4. which

Question ID : **630680156419**

Option 1 ID : **630680605338**

Option 2 ID : **630680605336**

Option 3 ID : **630680605337**

Option 4 ID : **630680605339**

Status : **Answered**

Chosen Option : **2**

