

Combined Graduate Level Examination 2024 Tier I

Roll Number	
Candidate Name	
Venue Name	
Exam Date	10/09/2024
Exam Time	12:30 PM - 1:30 PM
Subject	Combined Graduate Level Examination Tier I

Section : **General Intelligence and Reasoning**

Q.1 Which of the following letter-clusters will replace the question mark (?) in the given series to make it logically complete?
ICT, FES, CGR, ZIQ, ?

- Ans
- 1. WJP
 - 2. XKP
 - 3. WKP
 - 4. XLO

Question ID : **630680416609**
 Option 1 ID : **6306801625201**
 Option 2 ID : **6306801625202**
 Option 3 ID : **6306801625200**
 Option 4 ID : **6306801625199**
 Status : **Answered**
 Chosen Option : **3**

Q.2 Select the pair in which the numbers are related to each other in the same way as are the numbers in the given pairs.
 (NOTE: Operations should be performed on the whole numbers, without breaking down the numbers into its constituent digits. E.g. 13 – Operations on 13 such as adding /deleting/multiplying etc. to 13 can be performed. Breaking down 13 into 1 and 3 and then performing mathematical operations on 1 and 3 is not allowed.)
 12 : 25
 11 : 23

- Ans
- 1. 15 : 29
 - 2. 18 : 35
 - 3. 25 : 49
 - 4. 21 : 43

Question ID : **630680313728**
 Option 1 ID : **6306801220761**
 Option 2 ID : **6306801220762**
 Option 3 ID : **6306801220764**
 Option 4 ID : **6306801220763**
 Status : **Answered**
 Chosen Option : **4**

Q.3 Select the option that is related to the fifth letter-cluster in the same way as the second letter-cluster is related to the first letter-cluster and the fourth letter-cluster is related to the third letter-cluster.

DOY:PAK :: BQM:NCY :: ILU:?

- Ans
- 1. UYG
 - 2. TYG
 - 3. UXG
 - 4. TXG

Question ID : 630680416750
Option 1 ID : 6306801625763
Option 2 ID : 6306801625766
Option 3 ID : 6306801625765
Option 4 ID : 6306801625764
Status : Answered
Chosen Option : 3

Q.4 In a certain code language, 'TIZZ' is written as 'VKBB' and 'QOPH' is written as 'SQRJ'. How will 'CKAU' be written in that language?

- Ans
- 1. ENCV
 - 2. DNBV
 - 3. EMCW
 - 4. DMBW

Question ID : 630680172753
Option 1 ID : 630680669412
Option 2 ID : 630680669414
Option 3 ID : 630680669413
Option 4 ID : 630680669415
Status : Answered
Chosen Option : 3

Q.5 104 is related to 13 following a certain logic. Following the same logic, 136 is related to 17. To which of the following is 232 related, following the same logic?

(NOTE: Operations should be performed on the whole numbers, without breaking down the numbers into its constituent digits. E.g. 13 – Operations on 13 such as adding /deleting /multiplying etc. to 13 can be performed. Breaking down 13 into 1 and 3 and then performing mathematical operations on 1 and 3 is not allowed)

- Ans
- 1. 31
 - 2. 27
 - 3. 29
 - 4. 33

Question ID : 630680344661
Option 1 ID : 6306801340954
Option 2 ID : 6306801340953
Option 3 ID : 6306801340955
Option 4 ID : 6306801340956
Status : Answered
Chosen Option : 3



Q.6 Each vowel in the word 'SIMILAR' is changed to the following letter in the English alphabetical order and each consonant is changed to the preceding letter in the English alphabetical order. How many letters are there in the English alphabetical order between the letter which is the second from the left end and the third from the left end in the group of letters thus formed?

- Ans 1. Two
 2. One
 3. Four
 4. Three

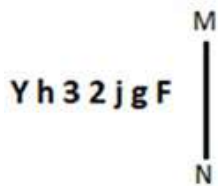
Question ID : 630680313411
 Option 1 ID : 6306801219512
 Option 2 ID : 6306801219511
 Option 3 ID : 6306801219509
 Option 4 ID : 6306801219510
 Status : Answered
 Chosen Option : 2

Q.7 Three of the following number-pairs are alike in some manner and hence form a group. Which number-pair does not belong to that group?
 (NOTE: Operations should be performed on the whole numbers, without breaking down the numbers into its constituent digits. E.g. 13 – Operations on 13 such as adding/subtracting/multiplying etc. to 13 can be performed. Breaking down 13 into 1 and 3 and then performing mathematical operations on 1 and 3 is not allowed.)

- Ans 1. 15 – 240
 2. 18 – 306
 3. 22 – 462
 4. 21 – 420

Question ID : 630680349005
 Option 1 ID : 6306801358311
 Option 2 ID : 6306801358309
 Option 3 ID : 6306801358312
 Option 4 ID : 6306801358310
 Status : Answered
 Chosen Option : 1

Q.8 Select the correct mirror image of the given figure when the mirror is placed at MN.



- Ans 1. F g j 3 2 h Y
 2. F g j 2 3 h Y
 3. F g j 2 3 h Y
 4. F g j 2 3 h Y

Question ID : 630680325838
 Option 1 ID : 6306801267547
 Option 2 ID : 6306801267546
 Option 3 ID : 6306801267548
 Option 4 ID : 6306801267545
 Status : Answered
 Chosen Option : 3

Q.9 Select the option that represents the letters that when placed from left to right in the blanks below will complete the given letter series.

DF_IJOD_HIJO_FHIJODF_IJOD_

- Ans
- 1. FHDHF
 - 2. HFHDF
 - 3. HFDHF
 - 4. HFFDH

Question ID : 630680416266

Option 1 ID : 6306801623830

Option 2 ID : 6306801623828

Option 3 ID : 6306801623829

Option 4 ID : 6306801623827

Status : Answered

Chosen Option : 3

Q.10 Which two numbers (not digits) should be interchanged to make the given equation correct?

$$116 - 92 \div 4 + 25 \times 2 - 20 = 150$$

- Ans
- 1. 2 and 4
 - 2. 25 and 20
 - 3. 116 and 92
 - 4. 20 and 92

Question ID : 630680319374

Option 1 ID : 6306801242401

Option 2 ID : 6306801242402

Option 3 ID : 6306801242404

Option 4 ID : 6306801242403

Status : Answered

Chosen Option : 1

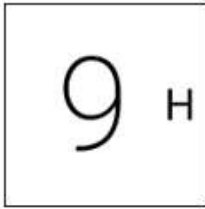


Q.11 Identify the figure given in the options which when put in place of ? will logically complete the series.

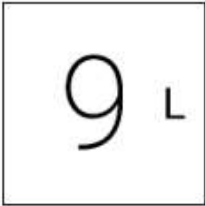


Ans

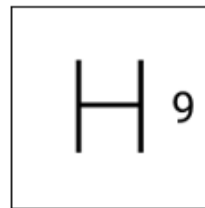
✗ 1.



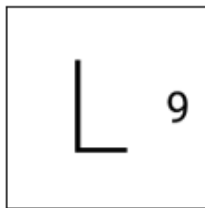
✗ 2.



✓ 3.



✗ 4.



Question ID : 630680524400

Option 1 ID : 6306802049700

Option 2 ID : 6306802049702

Option 3 ID : 6306802049699

Option 4 ID : 6306802049701

Status : Not Answered

Chosen Option : --



Download SSC CGL, CHSL E-BOOKS

[CLICK HERE](#)

SSC CGL (Tier-1) STUDY NOTES



- ▶ 100% CGL Exam Syllabus Covered
- ▶ 12 Books, 1300+ Pages
- ▶ 5600+ MCQs
- ▶ Previous Year Papers & Mocks
- ▶ 1 Year Current Affairs
- ▶ Support & Guidance

50%
OFF

100%
SAFE

FREE
SHIPPING 

 **SSCPORTAL.IN**

SSC CGL PDF NOTES

100% Syllabus | 1300+ Pages

50%
OFF

[CLICK HERE](#)



Q.12 Select the set in which the numbers are related in the same way as are the numbers of the following sets.

(NOTE: Operations should be performed on the whole numbers, without breaking down the numbers into its constituent digits. E.g. 13 – Operations on 13 such as adding /deleting /multiplying etc. to 13 can be performed. Breaking down 13 into 1 and 3 and then performing mathematical operations on 1 and 3 is not allowed.)
 (25, 300, 6)
 (19, 342, 9)

- Ans 1. (24, 600, 5)
 2. (14, 364, 7)
 3. (17, 476, 7)
 4. (18, 288, 8)

Question ID : 630680336441
 Option 1 ID : 6306801308487
 Option 2 ID : 6306801308486
 Option 3 ID : 6306801308488
 Option 4 ID : 6306801308485
 Status : Answered
 Chosen Option : 4

Q.13 Select the option that is related to the fifth letter-cluster in the same way as the second letter-cluster is related to the first letter-cluster and the fourth letter-cluster is related to the third letter-cluster.

BACK : CCBI :: TEST : UGRR :: WORK : ?

- Ans 1. YQQJ
 2. XQQI
 3. XQSI
 4. YQPI

Question ID : 630680416282
 Option 1 ID : 6306801623891
 Option 2 ID : 6306801623892
 Option 3 ID : 6306801623893
 Option 4 ID : 6306801623894
 Status : Answered
 Chosen Option : 2

Q.14 Select the correct mirror image of the given figure when the mirror is placed at MN.



- Ans 1. eA7εbfj
 2. Ae7εbfj
 3. eA7εdFj
 4. eA7εbfj

Question ID : 630680325835
 Option 1 ID : 6306801267534
 Option 2 ID : 6306801267536
 Option 3 ID : 6306801267535
 Option 4 ID : 6306801267533
 Status : Answered
 Chosen Option : 1

Q.15 Select the number from among the given options that can replace the question mark (?) in the following series.
543, 518, 495, 474, 455, ?

- Ans
- 1. 444
 - 2. 438
 - 3. 440
 - 4. 442

Question ID : 630680411896
Option 1 ID : 6306801606422
Option 2 ID : 6306801606419
Option 3 ID : 6306801606420
Option 4 ID : 6306801606421
Status : Answered
Chosen Option : 2

Q.16 In a certain code language, 'COWS' is coded as '7935' and 'OILY' is coded as '2568'.
What is the code for 'O' in that language?

- Ans
- 1. 8
 - 2. 9
 - 3. 5
 - 4. 2

Question ID : 630680360216
Option 1 ID : 6306801402783
Option 2 ID : 6306801402781
Option 3 ID : 6306801402784
Option 4 ID : 6306801402782
Status : Answered
Chosen Option : 3

Q.17 Read the given statements and conclusions carefully. Assuming that the information given in the statements is true, even if it appears to be at variance with commonly known facts, decide which of the given conclusions logically follow(s) from the statements.

Statements:

Some bags are purses.

All purses are wallets.

All wallets are sacks.

Conclusions:

(I) All purses are sacks.

(II) Some wallets are bags.

- Ans
- 1. Only conclusion (I) is follow
 - 2. Neither conclusion (I) nor (II) is follow
 - 3. Both conclusions (I) and (II) are follow
 - 4. Only conclusion (II) is follow

Question ID : 630680397740
Option 1 ID : 6306801550974
Option 2 ID : 6306801550976
Option 3 ID : 6306801550977
Option 4 ID : 6306801550975
Status : Answered
Chosen Option : 3



Q.18 Which figure should replace the question mark (?) if the following series were to be continued?

P	V	☆	3	S	☆	7	3	?
7	0	S	V	N	P	P	V	
☆	3	S	7	7	3	N	P	

Ans

✗ 1.

P	7
S	☆
3	N

✓ 2.

N	7
S	☆
P	3

✗ 3.

☆	P
N	7
I	S

✗ 4.

N	S
7	3
☆	I

Question ID : **630680214464**

Option 1 ID : **630680831889**

Option 2 ID : **630680831888**

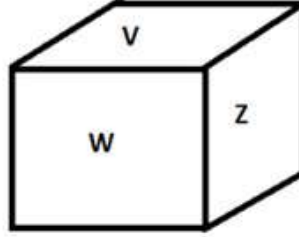
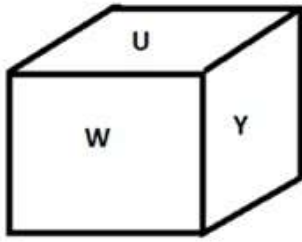
Option 3 ID : **630680831887**

Option 4 ID : **630680831890**

Status : **Not Answered**

Chosen Option : --

Q.19 Six letters U, V, W, X, Y and Z are written on different faces of a dice. Two positions of this dice are shown in the figure below. Find the letter on the face opposite to Z.



- Ans 1. W
 2. Y
 3. U
 4. X

Question ID : 630680189138
 Option 1 ID : 630680733362
 Option 2 ID : 630680733361
 Option 3 ID : 630680733363
 Option 4 ID : 630680733364
 Status : Answered
 Chosen Option : 2

Q.20 Which two numbers (not digits) should be interchanged to make the given equation correct?

$$72 - 6 + (18 \div 4) + 17 - (22 \times 2) = 44$$

- Ans 1. 22 and 18
 2. 6 and 4
 3. 6 and 22
 4. 2 and 4

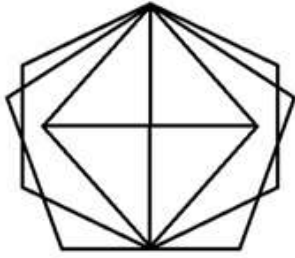
Question ID : 630680411681
 Option 1 ID : 6306801605561
 Option 2 ID : 6306801605559
 Option 3 ID : 6306801605562
 Option 4 ID : 6306801605560
 Status : Answered
 Chosen Option : 2

Q.21 In a certain code language,
 A + B means 'A is the brother of B'.
 A - B means 'A is the father of B'.
 A × B means 'A is the mother of B'.
 A ÷ B means 'A is the wife of B'.
 Based on the above, how is P related to T if 'P × Q + R ÷ S - T'?

- Ans 1. Mother's mother
 2. Mother
 3. Sister
 4. Wife

Question ID : 630680313754
 Option 1 ID : 6306801220857
 Option 2 ID : 6306801220858
 Option 3 ID : 6306801220859
 Option 4 ID : 6306801220860
 Status : Answered
 Chosen Option : 1

Q.22 How many triangles are there in the given figure?



- Ans
- 1. 17
 - 2. 16
 - 3. 14
 - 4. 15

Question ID : 630680189145

Option 1 ID : 630680733391

Option 2 ID : 630680733389

Option 3 ID : 630680733392

Option 4 ID : 630680733390

Status : Not Answered

Chosen Option : --

Q.23 Three of the following four are alike in a certain way and thus form a group. Which is the one that does NOT belong to that group? The odd one out is not based on the number of consonants/vowels or their position in the letter cluster

- Ans
- 1. DHK
 - 2. BFJ
 - 3. EIM
 - 4. IMQ

Question ID : 63068075414

Option 1 ID : 630680291810

Option 2 ID : 630680291807

Option 3 ID : 630680291808

Option 4 ID : 630680291809

Status : Answered

Chosen Option : 1



Q.24 Three statements are given, followed by three conclusions numbered I, II and III. Assuming the statements to be true, even if they seem to be at variance with commonly known facts, decide which of the conclusions logically follow(s) from the statements.

Statements:

No bench is chair.
All sofas are benches.
All tables are sofas.

Conclusions:

I. No table is a chair.
II. Some sofas are chairs.
III. All tables are benches.

- Ans**
- 1. Only conclusion II follows
 - 2. Only conclusions I and II follow
 - 3. Only conclusions I and III follow
 - 4. Only conclusion I follows

Question ID : 630680416382

Option 1 ID : 6306801624292

Option 2 ID : 6306801624293

Option 3 ID : 6306801624294

Option 4 ID : 6306801624291

Status : Answered

Chosen Option : 3

Q.25 Six letters A, T, M, P, S and R are written on different faces of a dice. Two positions of this dice are shown in the figure below. Find the letter on the face opposite to the one having R.



- Ans**
- 1. M
 - 2. T
 - 3. A
 - 4. S

Question ID : 630680382715

Option 1 ID : 6306801491775

Option 2 ID : 6306801491777

Option 3 ID : 6306801491776

Option 4 ID : 6306801491778

Status : Answered

Chosen Option : 1

Section : General Awareness



Download SSC CGL, CHSL E-BOOKS

CLICK HERE

Q.1 Which of the following has the highest salinity?

- Ans** 1. Great salt lake
 2. Dead sea
 3. Red sea
 4. Lake Van

Question ID : **63068098925**
Option 1 ID : **630680384406**
Option 2 ID : **630680384405**
Option 3 ID : **630680384404**
Option 4 ID : **630680384407**
Status : **Answered**
Chosen Option : **1**

Q.2 Which of the following social reformers of 19th century India was the author of 'Stree Purush Tulana'?

- Ans** 1. Pandita Ramabai
 2. Tarabai Shinde
 3. Usha Mehta
 4. Swarnakumari Devi

Question ID : **630680412368**
Option 1 ID : **6306801608298**
Option 2 ID : **6306801608297**
Option 3 ID : **6306801608296**
Option 4 ID : **6306801608295**
Status : **Answered**
Chosen Option : **4**

Q.3 Harela is a festival of greenery, peace, prosperity, and environmental conservation, primarily celebrated in which of the following states?

- Ans** 1. Madhya Pradesh
 2. Assam
 3. Uttarakhand
 4. Haryana

Question ID : **630680305970**
Option 1 ID : **6306801190235**
Option 2 ID : **6306801190233**
Option 3 ID : **6306801190234**
Option 4 ID : **6306801190236**
Status : **Answered**
Chosen Option : **1**

Q.4 Which state initiated the implementation of the Mid-day Meal scheme in elementary schools?

- Ans** 1. Uttar Pradesh
 2. Tamil Nadu
 3. Madhya Pradesh
 4. Karnataka

Question ID : **6306801048060**
Option 1 ID : **6306804114287**
Option 2 ID : **6306804114289**
Option 3 ID : **6306804114288**
Option 4 ID : **6306804114286**
Status : **Not Answered**
Chosen Option : **--**



Q.5 In which of the following games is one player known as the Wicketkeeper?

- Ans 1. Cricket
 2. Basketball
 3. Hockey
 4. Football

Question ID : 630680510768
Option 1 ID : 6306801996204
Option 2 ID : 6306801996205
Option 3 ID : 6306801996203
Option 4 ID : 6306801996202
Status : Answered
Chosen Option : 1

Q.6 'Au' is the symbol for which of the following elements?

- Ans 1. Gold
 2. Aluminium
 3. Argon
 4. Silver

Question ID : 63068091171
Option 1 ID : 630680353440
Option 2 ID : 630680353438
Option 3 ID : 630680353439
Option 4 ID : 630680353441
Status : Answered
Chosen Option : 1

Q.7 Who among the following freedom fighters of India is the author of the book, 'The Indian Struggle'?

- Ans 1. Vallabhbhai Patel
 2. Motilal Nehru
 3. Mahatma Gandhi
 4. Subhas Chandra Bose

Question ID : 630680511501
Option 1 ID : 6306801999128
Option 2 ID : 6306801999129
Option 3 ID : 6306801999126
Option 4 ID : 6306801999127
Status : Answered
Chosen Option : 3

Q.8 Which Article of the Constitution of India grants power to the President to appoint Judges of the Supreme Court?

- Ans 1. Article 124(2)
 2. Article 123(1)
 3. Article 128(4)
 4. Article 127(3)

Question ID : 630680303640
Option 1 ID : 6306801181130
Option 2 ID : 6306801181129
Option 3 ID : 6306801181132
Option 4 ID : 6306801181131
Status : Answered
Chosen Option : 1



Q.9 Mohiniyattam is associated with which of the following traditional dance styles?

- Ans** 1. Lasya style
 2. Samapadam
 3. Tribhanga
 4. Chowk

Question ID : 630680402016
Option 1 ID : 6306801567778
Option 2 ID : 6306801567781
Option 3 ID : 6306801567780
Option 4 ID : 6306801567779
Status : Answered
Chosen Option : 3

Q.10 As of March 2023, how many High Courts are there in India?

- Ans** 1. 20
 2. 35
 3. 25
 4. 30

Question ID : 630680413057
Option 1 ID : 6306801611052
Option 2 ID : 6306801611051
Option 3 ID : 6306801611054
Option 4 ID : 6306801611053
Status : Not Answered
Chosen Option : --

Q.11 In which year was the International Olympic Committee formed?

- Ans** 1. 1898
 2. 1892
 3. 1896
 4. 1894

Question ID : 630680309502
Option 1 ID : 6306801204164
Option 2 ID : 6306801204161
Option 3 ID : 6306801204163
Option 4 ID : 6306801204162
Status : Answered
Chosen Option : 3

Q.12 Ustad Vilayat Ali Khan is a maestro in _____.

- Ans** 1. Tabla
 2. Flute
 3. Sitar
 4. Mridangam

Question ID : 630680216238
Option 1 ID : 630680838927
Option 2 ID : 630680838928
Option 3 ID : 630680838930
Option 4 ID : 630680838929
Status : Not Answered
Chosen Option : --



Q.13 Which physical feature of India prevents the cold winds from central Asia from entering the Indian subcontinents?

- Ans** 1. Himalayas
 2. Indian plains
 3. Coastal area
 4. Indian desert

Question ID : **630680328139**
Option 1 ID : **6306801276525**
Option 2 ID : **6306801276528**
Option 3 ID : **6306801276527**
Option 4 ID : **6306801276526**
Status : **Answered**
Chosen Option : **1**

Q.14 Which of the following is the transboundary river between India and Pakistan?

- Ans** 1. Beas
 2. Indus
 3. Ravi
 4. Jhelum

Question ID : **630680134800**
Option 1 ID : **630680522020**
Option 2 ID : **630680522019**
Option 3 ID : **630680522021**
Option 4 ID : **630680522018**
Status : **Answered**
Chosen Option : **4**

Q.15 To which group do the alkaline earth metals such as radium, barium and strontium belong?

- Ans** 1. Group 3A
 2. Group 1A
 3. Group 2A
 4. Group 5A

Question ID : **63068076944**
Option 1 ID : **630680297875**
Option 2 ID : **630680297874**
Option 3 ID : **630680297873**
Option 4 ID : **630680297876**
Status : **Answered**
Chosen Option : **3**



Q.16 According to the Agricultural and Processed food products Export Development Authority (APEDA) 2020-2021, which state of India has the first rank in grapes production?

- Ans**
- 1. Bihar
 - 2. Uttar Pradesh
 - 3. Karnataka
 - 4. Maharashtra

Question ID : **630680327611**
Option 1 ID : **6306801274443**
Option 2 ID : **6306801274442**
Option 3 ID : **6306801274444**
Option 4 ID : **6306801274441**
Status : **Not Answered**
Chosen Option : --

Q.17 Which of the following Articles of the Indian Constitution mentions about the organisation of 'Village Panchayats'?

- Ans**
- 1. Article 38
 - 2. Article 31
 - 3. Article 40
 - 4. Article 36

Question ID : **630680408255**
Option 1 ID : **6306801591915**
Option 2 ID : **6306801591917**
Option 3 ID : **6306801591918**
Option 4 ID : **6306801591916**
Status : **Answered**
Chosen Option : **1**

Q.18 Which of the following Articles of the Indian Constitution contains Fundamental Duties?

- Ans**
- 1. 45A
 - 2. 32A
 - 3. 51A
 - 4. 62B

Question ID : **630680413117**
Option 1 ID : **6306801611292**
Option 2 ID : **6306801611294**
Option 3 ID : **6306801611293**
Option 4 ID : **6306801611291**
Status : **Answered**
Chosen Option : **3**



Q.19 How many medals did India win in International Shooting Sport Federation (ISSF) World Cup 2022, which was held in Cairo, Egypt?

- Ans 1. 9
 2. 7
 3. 6
 4. 8

Question ID : 630680310838
Option 1 ID : 6306801209484
Option 2 ID : 6306801209482
Option 3 ID : 6306801209481
Option 4 ID : 6306801209483
Status : Not Answered
Chosen Option : --

Q.20 Which species is known as black lipped pearl oyster found in the Indo-Pacific, within tropical coral reefs?

- Ans 1. *Aplysia dactylomela*
 2. *Chaetopleura apiculata*
 3. *Dentalium neohexagonum*
 4. *Pinctada margaritifera*

Question ID : 630680407473
Option 1 ID : 6306801588830
Option 2 ID : 6306801588833
Option 3 ID : 6306801588831
Option 4 ID : 6306801588832
Status : Not Answered
Chosen Option : --

Q.21 In the 7th Century AD, a new religion called Islam was born in _____.

- Ans 1. South Africa
 2. Indonesia
 3. Malaysia
 4. Arabia

Question ID : 630680412431
Option 1 ID : 6306801608547
Option 2 ID : 6306801608549
Option 3 ID : 6306801608550
Option 4 ID : 6306801608548
Status : Answered
Chosen Option : 4


Q.22 Sitar maestro, Pandit Ravi Shankar was awarded which of the following awards by the Government of India in 1999?

- Ans 1. Padma Shri
 2. Bharat Ratna
 3. Padma Vibhushan
 4. Padma Bhushan

Question ID : 630680415799
Option 1 ID : 6306801621966
Option 2 ID : 6306801621963
Option 3 ID : 6306801621964
Option 4 ID : 6306801621965
Status : Answered
Chosen Option : 2



कर्मचारी चयन आयोग (CGL) परीक्षा अध्ययन सामग्री



FREE SHIPPING

- ▶ 100% Syllabus Covered
- ▶ 9 Books, 1000+ Pages - PRINT COPY
- ▶ 3000+ MCQs - PRINT COPY
- ▶ 08 Year Solved Papers & Mock Tests (PDF Copy)
- ▶ One Year Current Affairs (PDF Copy)

हिन्दी माध्यम

50% OFF

SSCPORTAL.IN

SSC CGL HINDI PDF NOTES

100% Syllabus | 1,000+ Pages



CLICK HERE

<https://sscportal.in/study-kit/cgl/tier-1-hindi>

Q.23 Gautamiputra Satakarni titled Rajaraja and Maharaja is related to which of the following dynasties?

- Ans** 1. Satavahana
 2. Shaka
 3. Shunga
 4. Pandya

Question ID : **630680412472**
Option 1 ID : **6306801608714**
Option 2 ID : **6306801608711**
Option 3 ID : **6306801608713**
Option 4 ID : **6306801608712**
Status : **Answered**
Chosen Option : **2**

Q.24 Which of the following options is associated with the class of cold-blooded animals?

- Ans** 1. Pavo
 2. Chameleon
 3. Macropus
 4. Psittacula

Question ID : **630680311581**
Option 1 ID : **6306801212419**
Option 2 ID : **6306801212420**
Option 3 ID : **6306801212417**
Option 4 ID : **6306801212418**
Status : **Not Answered**
Chosen Option : **--**

Q.25 The CSO adopted the concept of Gross Value Added in _____.

- Ans** 1. January 2012
 2. January 2017
 3. January 2013
 4. January 2015

Question ID : **63068051014**
Option 1 ID : **630680196322**
Option 2 ID : **630680196325**
Option 3 ID : **630680196323**
Option 4 ID : **630680196324**
Status : **Not Answered**
Chosen Option : **--**

Section : **Quantitative Aptitude**

Q.1 Akshay purchased pens and notebooks from a shop for a total sum of ₹180. From the following data, what is the value of 'X'?

Items	Price per unit (in ₹)	Quantity
Pens	10	X
Notebooks	20	6

- Ans** 1.6
 2.4
 3.5
 4.7

Question ID : 630680428087
 Option 1 ID : 6306801670394
 Option 2 ID : 6306801670392
 Option 3 ID : 6306801670393
 Option 4 ID : 6306801670395
 Status : Answered
 Chosen Option : 1

Q.2 The concentrations of three acids, A, B, and C, are specified as 20%, 30%, and 40%, respectively. They are blended in a ratio of 3 : 5 : a, yielding a solution with a concentration of 30%. What is the value of 'a'?

- Ans** 1.4
 2.1
 3.3
 4.2

Question ID : 6306801047988
 Option 1 ID : 6306804113997
 Option 2 ID : 6306804113994
 Option 3 ID : 6306804113996
 Option 4 ID : 6306804113995
 Status : Answered
 Chosen Option : 3

Q.3 Find the values of x, y and z, so as to satisfy the equations given below:
 $x + y + z = 12$; $x + y - z = 6$; $x - y + z = 4$

- Ans** 1. $x = 5, y = 4, z = -3$
 2. $x = 5, y = -4, z = 3$
 3. $x = 5, y = -4, z = -3$
 4. $x = 5, y = 4, z = 3$

Question ID : 630680295368
 Option 1 ID : 6306801149199
 Option 2 ID : 6306801149196
 Option 3 ID : 6306801149198
 Option 4 ID : 6306801149197
 Status : Answered
 Chosen Option : 4

Q.4 A policeman noticed a thief at a distance of 500 metres. The policeman started running and the thief also started running at the same time. The thief is running at a speed of 15 km/h. It took 15 minutes for the policeman to catch the thief. Find the speed of the policeman (in km/h).

- Ans 1. 10
 2. 17
 3. 11
 4. 12

Question ID : 630680428498
 Option 1 ID : 6306801672037
 Option 2 ID : 6306801672039
 Option 3 ID : 6306801672036
 Option 4 ID : 6306801672038
 Status : Answered
 Chosen Option : 2

Q.5 $\triangle EFG$ and $\triangle HIJ$ are similar. Also, $\angle E = \angle H$ and $\angle F = \angle I$. If $3EF = HI$ and $FG = 9$ cm, then IJ is equal to ____.

- Ans 1. 27 cm
 2. 9 cm
 3. 18 cm
 4. 3 cm

Question ID : 630680526523
 Option 1 ID : 6306802058161
 Option 2 ID : 6306802058159
 Option 3 ID : 6306802058160
 Option 4 ID : 6306802058158
 Status : Answered
 Chosen Option : 1

Q.6 Simplify $\frac{0.58 \times 0.58 \times 0.58 - 0.001}{0.58 \times 0.58 + 0.058 + 0.01}$.

- Ans 1. 0.37
 2. 0.28
 3. 0.48
 4. 0.42

Question ID : 630680413498
 Option 1 ID : 6306801612817
 Option 2 ID : 6306801612816
 Option 3 ID : 6306801612819
 Option 4 ID : 6306801612818
 Status : Answered
 Chosen Option : 3

Q.7 Pipe L can fill a pool in 30 hours and pipe M in 45 hours. If both the pipes are opened in an empty pool, how much time will they take to fill it?

- Ans 1. 17 hours
 2. 18 hours
 3. 24 hours
 4. 20 hours

Question ID : 630680403295
 Option 1 ID : 6306801572680
 Option 2 ID : 6306801572681
 Option 3 ID : 6306801572679
 Option 4 ID : 6306801572678
 Status : Answered
 Chosen Option : 2

Q.8 If A:B = 6 : 8 and B:C = 5 : 12, then A:B:C is:

- Ans 1. 10:23:14
 2. 11:32:44
 3. 14:31:28
 4. 15:20:48

Question ID : 630680915059
 Option 1 ID : 6306803585281
 Option 2 ID : 6306803585282
 Option 3 ID : 6306803585283
 Option 4 ID : 6306803585280
 Status : Answered
 Chosen Option : 4

Q.9 The given table shows the number of books on different subjects.

Subjects	Number of books
B1	120
B2	150
B3	150
B4	120
B5	120

What is the ratio of the number of books for subject B1 to the average number of books per subject?

- Ans 1. 3 : 5
 2. 2 : 5
 3. 10 : 11
 4. 4 : 5

Question ID : 630680428136
 Option 1 ID : 6306801670591
 Option 2 ID : 6306801670589
 Option 3 ID : 6306801670588
 Option 4 ID : 6306801670590
 Status : Answered
 Chosen Option : 3

Q.10 If $2 \tan \theta = 3$, then $\frac{3 \sin \theta - 2 \cos \theta}{3 \sin \theta + 2 \cos \theta}$ is equal to:

- Ans**
- 1. $\frac{6}{13}$
 - 2. $\frac{5}{13}$
 - 3. $\frac{6}{7}$
 - 4. $\frac{5}{7}$

Question ID : 630680518878
 Option 1 ID : 6306802027986
 Option 2 ID : 6306802027987
 Option 3 ID : 6306802027984
 Option 4 ID : 6306802027985
 Status : Answered
 Chosen Option : 2

Q If $\cot \theta = 4/3$, then evaluate $(\sec \theta (1 + \cot^2 \theta) (\operatorname{cosec}^2 \theta - \cot^2 \theta)) / \operatorname{cosec}^3 \theta$.

- Ans**
- 1. $4/5$
 - 2. $3/5$
 - 3. $3/4$
 - 4. $4/3$

Question ID : 630680403306
 Option 1 ID : 6306801572722
 Option 2 ID : 6306801572723
 Option 3 ID : 6306801572724
 Option 4 ID : 6306801572725
 Status : Answered
 Chosen Option : 3

Q.12 A right triangle with sides 3 cm, 4 cm and 5 cm is rotated about the sides of 3 cm to form a cone. The volume of the cone so formed is:

- Ans**
- 1. $25\pi \text{ cm}^3$
 - 2. $28\pi \text{ cm}^3$
 - 3. $20\pi \text{ cm}^3$
 - 4. $16\pi \text{ cm}^3$

Question ID : 630680421519
 Option 1 ID : 6306801644541
 Option 2 ID : 6306801644542
 Option 3 ID : 6306801644540
 Option 4 ID : 6306801644539
 Status : Answered
 Chosen Option : 3

Q.13 If $\sqrt{x} + \frac{1}{\sqrt{x}} = 7$, then the value of $x + \frac{1}{x}$ is equal to:

- Ans** 1. 47
 2. 51
 3. 45
 4. 49

Question ID : **630680413553**
 Option 1 ID : **6306801613038**
 Option 2 ID : **6306801613036**
 Option 3 ID : **6306801613039**
 Option 4 ID : **6306801613037**
 Status : **Answered**
 Chosen Option : **1**

Q.14 Two successive discounts of 40% and 30% are equal to a single discount of:

- Ans** 1. 60%
 2. 70%
 3. 35%
 4. 58%

Question ID : **630680217285**
 Option 1 ID : **630680843078**
 Option 2 ID : **630680843075**
 Option 3 ID : **630680843076**
 Option 4 ID : **630680843077**
 Status : **Answered**
 Chosen Option : **4**

Q.15 Ravi's salary was increased by 50%. After some time, his new salary was also increased by 50%. Find his gain percentage of salary.

- Ans** 1. 200%
 2. 150%
 3. 125%
 4. 100%

Question ID : **630680388630**
 Option 1 ID : **6306801514985**
 Option 2 ID : **6306801514982**
 Option 3 ID : **6306801514984**
 Option 4 ID : **6306801514983**
 Status : **Answered**
 Chosen Option : **3**

Q.16 If 45° and 65° are the angles of a triangle, then find the exterior angle of the third angle (remaining angle).

- Ans
- 1. 120°
 - 2. 100°
 - 3. 110°
 - 4. 70°

Question ID : **630680421381**
 Option 1 ID : **6306801643988**
 Option 2 ID : **6306801643990**
 Option 3 ID : **6306801643989**
 Option 4 ID : **6306801643987**
 Status : **Answered**
 Chosen Option : **3**

Q.17 A merchant has 1000 kg of sugar, part of which he sells at a 10% profit and the rest at a 40% profit. He gains 20% on the whole. The quantity sold at 40% profit is:

- Ans
- 1. $383\frac{1}{3}$ kg
 - 2. $443\frac{1}{3}$ kg
 - 3. $543\frac{1}{3}$ kg
 - 4. $333\frac{1}{3}$ kg

Question ID : **630680429000**
 Option 1 ID : **6306801674044**
 Option 2 ID : **6306801674047**
 Option 3 ID : **6306801674045**
 Option 4 ID : **6306801674046**
 Status : **Answered**
 Chosen Option : **4**

Q.18 If $(77^{77}+77)$ is divided by 78, then the remainder will be:

- Ans
- 1. 78
 - 2. 77
 - 3. 76
 - 4. 1

Question ID : **630680138107**
 Option 1 ID : **630680534682**
 Option 2 ID : **630680534683**
 Option 3 ID : **630680534684**
 Option 4 ID : **630680534685**
 Status : **Answered**
 Chosen Option : **3**

Q.19 What annual instalment will discharge a debt of ₹26,160 due in 4 years at 6% simple interest p.a.?

- Ans
- 1. ₹5,800
 - 2. ₹5,500
 - 3. ₹4,500
 - 4. ₹6,000

Question ID : **63068071031**
Option 1 ID : **630680274736**
Option 2 ID : **630680274735**
Option 3 ID : **630680274734**
Option 4 ID : **630680274737**
Status : **Not Answered**
Chosen Option : --

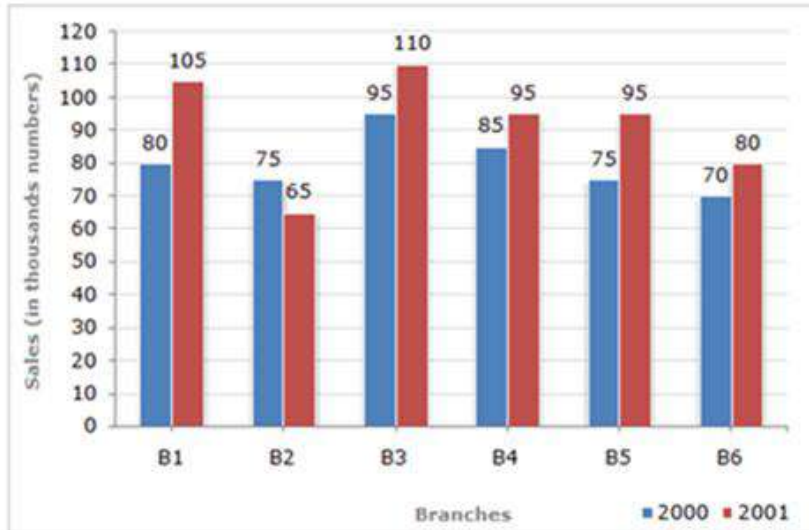
Q.20 If $p \cos A = 2q \sin A$ and $2p \operatorname{cosec} A - q \sec A = 3$, then the value of $p^2 + 4q^2$ is:

- Ans
- 1. 4
 - 2. 2
 - 3. 3
 - 4. 1

Question ID : **630680379674**
Option 1 ID : **6306801479742**
Option 2 ID : **6306801479740**
Option 3 ID : **6306801479741**
Option 4 ID : **6306801479739**
Status : **Answered**
Chosen Option : 1



Q.21 Study the given bar-graph and answer the question that follows.
The bar-graph shows the sales of books (in thousands) from six branches (B1, B2, B3, B4, B5 and B6) of a publishing company during two consecutive years 2000 and 2001.



The total sales of branch B6 for both the years is what percentage of the total sales of branch B3 for both the years (correct up to two decimal places)?

- Ans
- 1. 69.25%
 - 2. 73.17%
 - 3. 70.69%
 - 4. 82.26%

Question ID : 630680428212

Option 1 ID : 6306801670892

Option 2 ID : 6306801670894

Option 3 ID : 6306801670893

Option 4 ID : 6306801670895

Status : Answered

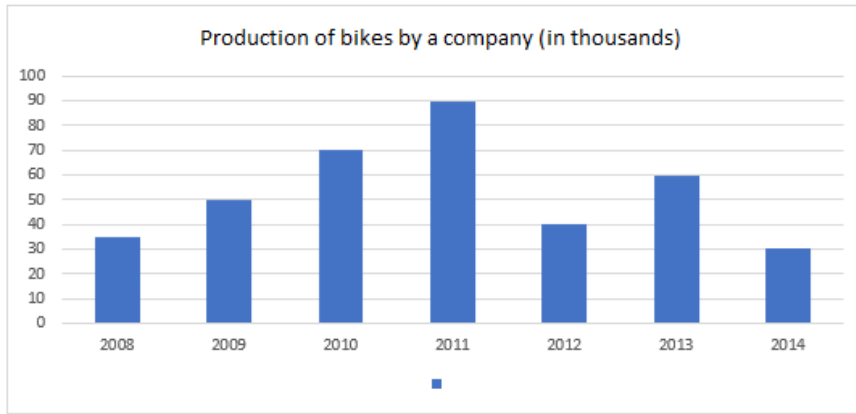
Chosen Option : 2



Download SSC CGL, CHSL E-BOOKS

CLICK HERE

Q.22 The given bar graph shows the production of bikes by a company (in thousands) over the years.



In how many of the given years was the production of bikes more than the average production of bikes over the years?.

- Ans
- 1. 2 years
 - 2. 1 year
 - 3. 4 years
 - 4. 3 years

Question ID : 630680428231
 Option 1 ID : 6306801670969
 Option 2 ID : 6306801670968
 Option 3 ID : 6306801670971
 Option 4 ID : 6306801670970

Status : Not Answered

Chosen Option : --

Q.23 In a circle of radius $5\sqrt{13}$ cm, a chord is at a distance of 10 cm from the centre of the circle. Find the length (in cm) of the chord.

- Ans
- 1. 36
 - 2. 15
 - 3. 28
 - 4. 30

Question ID : 630680404007
 Option 1 ID : 6306801575517
 Option 2 ID : 6306801575514
 Option 3 ID : 6306801575516
 Option 4 ID : 6306801575515

Status : Answered

Chosen Option : 4

Q.24 Places A and B are 20 km apart on the highway. A car starts from A and another from B at the same time. If the cars travel in the same direction at different speeds, they meet in one hour. If they travelled towards each other, they met in 12 minutes. What are the speeds (in km/h) of two cars?

- Ans 1. 51, 49
 2. 60, 40
 3. 55, 45
 4. 52, 48

Question ID : 630680379690
 Option 1 ID : 6306801479806
 Option 2 ID : 6306801479803
 Option 3 ID : 6306801479804
 Option 4 ID : 6306801479805
 Status : Not Answered
 Chosen Option : --

Q.25 Simplify
 $21 - [6 + 7 - \{3.22 - (1.1 \times 0.2)\}]$.

- Ans 1. 11
 2. 13
 3. 12
 4. 10

Question ID : 630680426287
 Option 1 ID : 6306801663248
 Option 2 ID : 6306801663250
 Option 3 ID : 6306801663249
 Option 4 ID : 6306801663247
 Status : Answered
 Chosen Option : 1

Section : English Comprehension

Q.1 Select the most appropriate ANTONYM of the underlined word.
 Their sporting achievements at the highest level are being utterly ignored.

- Ans 1. Minimally
 2. Correctly
 3. Totally
 4. Extremely

Question ID : 630680402903
 Option 1 ID : 6306801571206
 Option 2 ID : 6306801571208
 Option 3 ID : 6306801571207
 Option 4 ID : 6306801571205
 Status : Answered
 Chosen Option : 1

**Q.2 Select the most appropriate meaning of the phrase in bold.
Your so-called friend has cooked your goose.**

- Ans** 1. To interfere with, disrupt or ruin something for someone
2. When something develops completely and reaches maturity; when a child becomes an adult
3. To complete a lot of work or a wide range of things
4. To spend a lot of time and energy but achieve nothing

Question ID : **630680319147**
Option 1 ID : **6306801241494**
Option 2 ID : **6306801241495**
Option 3 ID : **6306801241496**
Option 4 ID : **6306801241493**
Status : **Answered**
Chosen Option : **4**

**Q.3 The following sentence has been split into four segments. Identify the segment that contains a grammatical error.
Our family is planning / a trip to Europe next summer / where we should visit several famous / landmarks and enjoy local cuisine.**

- Ans** 1. Our family is planning
2. a trip to Europe next summer
3. landmarks and enjoy local cuisine
4. where we should visit several famous

Question ID : **630680512940**
Option 1 ID : **6306802004706**
Option 2 ID : **6306802004707**
Option 3 ID : **6306802004709**
Option 4 ID : **6306802004708**
Status : **Answered**
Chosen Option : **4**

Q.4 Select the correctly spelt word.

- Ans** 1. Privilege
2. Privilej
3. Priviledge
4. Privelege

Question ID : **630680374413**
Option 1 ID : **6306801458835**
Option 2 ID : **6306801458838**
Option 3 ID : **6306801458836**
Option 4 ID : **6306801458837**
Status : **Answered**
Chosen Option : **1**



Q.5 Select the most appropriate ANTONYM of the given word.

Risible

- Ans** 1. Curious
 2. Giddy
 3. Serious
 4. Droll

Question ID : 630680517416
Option 1 ID : 6306802022062
Option 2 ID : 6306802022061
Option 3 ID : 6306802022060
Option 4 ID : 6306802022063
Status : Not Answered
Chosen Option : --

Q.6 In the given question, a statement divided into different segments is given. Rearrange all the segments to form a coherent statement.

O: its first constitution

P: and soon got himself elected

Q: the administration of the country

R: general Ayub Khan took over

S: after Pakistan framed

- Ans** 1. POSRQ
 2. ROPQS
 3. SORQP
 4. SPORQ

Question ID : 630680383219
Option 1 ID : 6306801493784
Option 2 ID : 6306801493783
Option 3 ID : 6306801493786
Option 4 ID : 6306801493785
Status : Answered
Chosen Option : 3

Q.7 Select the option that expresses the following sentence in active voice.
The letter will be delivered by the postman tomorrow.

- Ans** 1. The postman delivered the letter tomorrow
 2. The postman will deliver the letter tomorrow.
 3. The postman will have delivered the letter tomorrow.
 4. The postman will be delivering the letter tomorrow.

Question ID : 630680415302
Option 1 ID : 6306801619958
Option 2 ID : 6306801619955
Option 3 ID : 6306801619956
Option 4 ID : 6306801619957
Status : Answered
Chosen Option : 2



Q.8 Select the most appropriate option that can substitute the underlined words in the given sentence.

He was an irresponsible person to the matter of taking up responsibilities.

- Ans**
- 1. in the matter of taking up
 - 2. at the matter of taking up
 - 3. by the matter of taking up
 - 4. along the matter of taking up

Question ID : **630680182089**
Option 1 ID : **630680705581**
Option 2 ID : **630680705580**
Option 3 ID : **630680705579**
Option 4 ID : **630680705578**
Status : **Answered**
Chosen Option : **2**

Q.9 Select the most appropriate synonym of the given word.
Pugnacious

- Ans**
- 1. Sly
 - 2. Dogmatic
 - 3. Belligerent
 - 4. Ally

Question ID : **630680129860**
Option 1 ID : **630680503031**
Option 2 ID : **630680503030**
Option 3 ID : **630680503032**
Option 4 ID : **630680503033**
Status : **Answered**
Chosen Option : **3**

Q.10 Select the most appropriate synonym of the given word.
Stationary

- Ans**
- 1. Portable
 - 2. Swindle
 - 3. Still
 - 4. Motile

Question ID : **630680295220**
Option 1 ID : **6306801148604**
Option 2 ID : **6306801148607**
Option 3 ID : **6306801148606**
Option 4 ID : **6306801148605**
Status : **Answered**
Chosen Option : **1**



Q.11 Select the option that can be used as a one word substitute for the given group of words.

An often-imaginary place or state of utter perfection and happiness

- Ans
- 1. Dystopia
 - 2. Euphoria
 - 3. Inferno
 - 4. Utopia

Question ID : 630680158564

Option 1 ID : 630680613766

Option 2 ID : 630680613765

Option 3 ID : 630680613764

Option 4 ID : 630680613767

Status : Answered

Chosen Option : 4

Q.12 Sentences of a paragraph are given below in jumbled order. Arrange the sentences in the correct order to form a meaningful and coherent paragraph.

- A. It is also called a nuclear family.
- B. It is good to be in a small family because there is better management of resources.
- C. A small family is one with parents and a maximum of two children.
- D. The advantages of a small family are numerous.

- Ans
- 1. CADB
 - 2. ACBD
 - 3. CBDA
 - 4. BACD

Question ID : 630680514947

Option 1 ID : 6306802012395

Option 2 ID : 6306802012396

Option 3 ID : 6306802012394

Option 4 ID : 6306802012393

Status : Answered

Chosen Option : 1

Q.13 Select the most appropriate ANTONYM of the underlined word in the following sentence to fill in the blank.

Most of the land near the town is barren, but the efforts of the farmers have turned it _____.

- Ans
- 1. sterile
 - 2. unfruitful
 - 3. infertile
 - 4. fertile

Question ID : 630680316709

Option 1 ID : 6306801232013

Option 2 ID : 6306801232014

Option 3 ID : 6306801232016

Option 4 ID : 6306801232015

Status : Answered

Chosen Option : 4



Q.14 Select the correct spelling to fill in the blank.

Subir's long absence is likely to have _____ for employees in the office.

- Ans 1. reperrussions
 2. rapercussions
 3. repercussions
 4. repercusions

Question ID : 630680409975
Option 1 ID : 6306801598729
Option 2 ID : 6306801598730
Option 3 ID : 6306801598732
Option 4 ID : 6306801598731
Status : Answered
Chosen Option : 3

Q.15 Parts of a sentence are given below in jumbled order. Arrange the parts in the correct order to form a meaningful sentence.

O. delicious
R. she
Q. a
P. baked
S. chocolate cake

- Ans 1. SRPQO
 2. QOSRP
 3. RPQOS
 4. OPQRS

Question ID : 630680374395
Option 1 ID : 6306801458765
Option 2 ID : 6306801458766
Option 3 ID : 6306801458763
Option 4 ID : 6306801458764
Status : Answered
Chosen Option : 3

Q.16 Select the most appropriate ANTONYM of the underlined word in the following sentence to fill in the blank.

Most of the flowers bloom in the spring season but they start to _____ during summer.

- Ans 1. flush
 2. flourish
 3. blossom
 4. wither

Question ID : 630680316708
Option 1 ID : 6306801232012
Option 2 ID : 6306801232011
Option 3 ID : 6306801232009
Option 4 ID : 6306801232010
Status : Answered
Chosen Option : 2



Q.17 Select the option that correctly expresses the given sentence in passive voice.

The shareholders will elect him a director.

- Ans
- 1. The shareholders have elected him a director.
 - 2. He will be elected as director by the shareholders.
 - 3. The shareholders elected him a director.
 - 4. He will be elected a director.

Question ID : 630680310902
Option 1 ID : 6306801209734
Option 2 ID : 6306801209736
Option 3 ID : 6306801209735
Option 4 ID : 6306801209733
Status : Answered
Chosen Option : 2

Q.18 Parts of the following sentence have been given as options. Select the option that contains an error.
No other place in this country is so better as Gulmarg, Kashmir.

- Ans
- 1. No other place
 - 2. in this country is
 - 3. so better as
 - 4. Gulmarg, Kashmir

Question ID : 630680514371
Option 1 ID : 6306802010109
Option 2 ID : 6306802010110
Option 3 ID : 6306802010111
Option 4 ID : 6306802010112
Status : Answered
Chosen Option : 3

Q.19 Select the most appropriate option that can substitute the underlined words in the given sentence.
Rare species of frogs were very quicker identified by Stella.

- Ans
- 1. of frogs were very quickly
 - 2. to frogs were very quickly
 - 3. of frogs were very quicklier
 - 4. in frogs were very quicker

Question ID : 630680182091
Option 1 ID : 630680705586
Option 2 ID : 630680705587
Option 3 ID : 630680705588
Option 4 ID : 630680705589
Status : Answered
Chosen Option : 1



Q.20 What does the idiom 'Bite the bullet' mean?

- Ans
- 1. Enjoy a delicious meal
 - 2. Give someone a piece of advice
 - 3. Avoid confrontation
 - 4. Face a difficult situation with courage

Question ID : 630680377261

Option 1 ID : 6306801470107

Option 2 ID : 6306801470109

Option 3 ID : 6306801470110

Option 4 ID : 6306801470108

Status : Answered

Chosen Option : 4

Comprehension:

In the following passage, some words have been deleted. Read the passage carefully and select the most appropriate option to fill in each blank.

Americans have been arguing about pandemic (1) _____ for two years, and the debate is particularly fraught among parents of small children, for good reasons. While (2) _____ such as masking and isolation mean temporary discomfort or inconvenience for most people, their (3) _____ for still-developing young children are more mysterious, and possibly more significant and lasting. Children with speech or language disorders offer perhaps the (4) _____ example of these murky trade-offs. Pandemic restrictions vary by state, county and school district, but I spoke with parents in California, New York, Massachusetts, Washington, New Jersey, Iowa and Maryland, who said their children's speech therapy has been (5) _____: first by the loss of in-person therapy and then by masking requirements, in places that have them.

SubQuestion No : 21

Q.21 Select the most appropriate option to fill in blank no. 1

- Ans
- 1. advantages
 - 2. intemperance
 - 3. handicap
 - 4. restrictions

Question ID : 630680147456

Option 1 ID : 630680570603

Option 2 ID : 630680570604

Option 3 ID : 630680570605

Option 4 ID : 630680570602

Status : Answered

Chosen Option : 4



Comprehension:

In the following passage, some words have been deleted. Read the passage carefully and select the most appropriate option to fill in each blank.

Americans have been arguing about pandemic (1) _____ for two years, and the debate is particularly fraught among parents of small children, for good reasons. While (2) _____ such as masking and isolation mean temporary discomfort or inconvenience for most people, their (3) _____ for still-developing young children are more mysterious, and possibly more significant and lasting. Children with speech or language disorders offer perhaps the (4) _____ example of these murky trade-offs. Pandemic restrictions vary by state, county and school district, but I spoke with parents in California, New York, Massachusetts, Washington, New Jersey, Iowa and Maryland, who said their children's speech therapy has been (5) _____: first by the loss of in-person therapy and then by masking requirements, in places that have them.

SubQuestion No : 22

Q.22 Select the most appropriate option to fill in blank no. 2

- Ans** 1. measures
 2. brandings
 3. models
 4. sluggishness

Question ID : **630680147457**
 Option 1 ID : **630680570607**
 Option 2 ID : **630680570606**
 Option 3 ID : **630680570608**
 Option 4 ID : **630680570609**
 Status : **Answered**
 Chosen Option : **1**

Comprehension:

In the following passage, some words have been deleted. Read the passage carefully and select the most appropriate option to fill in each blank.

Americans have been arguing about pandemic (1) _____ for two years, and the debate is particularly fraught among parents of small children, for good reasons. While (2) _____ such as masking and isolation mean temporary discomfort or inconvenience for most people, their (3) _____ for still-developing young children are more mysterious, and possibly more significant and lasting. Children with speech or language disorders offer perhaps the (4) _____ example of these murky trade-offs. Pandemic restrictions vary by state, county and school district, but I spoke with parents in California, New York, Massachusetts, Washington, New Jersey, Iowa and Maryland, who said their children's speech therapy has been (5) _____: first by the loss of in-person therapy and then by masking requirements, in places that have them.

SubQuestion No : 23

Q.23 Select the most appropriate option to fill in blank no. 3

- Ans** 1. marginalisation
 2. disapproval
 3. consequences
 4. foundations

Question ID : **630680147458**
 Option 1 ID : **630680570611**
 Option 2 ID : **630680570612**
 Option 3 ID : **630680570613**
 Option 4 ID : **630680570610**
 Status : **Answered**
 Chosen Option : **3**

SSC CGL (Tier-1) STUDY NOTES



- ▶ 100% CGL Exam Syllabus Covered
- ▶ 12 Books, 1300+ Pages
- ▶ 5600+ MCQs
- ▶ Previous Year Papers & Mocks
- ▶ 1 Year Current Affairs
- ▶ Support & Guidance

50% OFF



100% SAFE

FREE SHIPPING 

SSCPORTAL.IN

SSC CGL PDF NOTES

100% Syllabus | 1300+ Pages

50% OFF

[CLICK HERE](#)



Comprehension:

In the following passage, some words have been deleted. Read the passage carefully and select the most appropriate option to fill in each blank.

Americans have been arguing about pandemic (1) _____ for two years, and the debate is particularly fraught among parents of small children, for good reasons. While (2) _____ such as masking and isolation mean temporary discomfort or inconvenience for most people, their (3) _____ for still-developing young children are more mysterious, and possibly more significant and lasting.

Children with speech or language disorders offer perhaps the (4) _____ example of these murky trade-offs. Pandemic restrictions vary by state, county and school district, but I spoke with parents in California, New York, Massachusetts, Washington, New Jersey, Iowa and Maryland, who said their children's speech therapy has been (5) _____: first by the loss of in-person therapy and then by masking requirements, in places that have them.

SubQuestion No : 24

Q.24 Select the most appropriate option to fill in blank no. 4.

- Ans**
- 1. indistinct
 - 2. nebulous
 - 3. clearest
 - 4. vague

Question ID : **630680147459**
 Option 1 ID : **630680570615**
 Option 2 ID : **630680570617**
 Option 3 ID : **630680570616**
 Option 4 ID : **630680570614**
 Status : **Answered**
 Chosen Option : **3**

Comprehension:

In the following passage, some words have been deleted. Read the passage carefully and select the most appropriate option to fill in each blank.

Americans have been arguing about pandemic (1) _____ for two years, and the debate is particularly fraught among parents of small children, for good reasons. While (2) _____ such as masking and isolation mean temporary discomfort or inconvenience for most people, their (3) _____ for still-developing young children are more mysterious, and possibly more significant and lasting.

Children with speech or language disorders offer perhaps the (4) _____ example of these murky trade-offs. Pandemic restrictions vary by state, county and school district, but I spoke with parents in California, New York, Massachusetts, Washington, New Jersey, Iowa and Maryland, who said their children's speech therapy has been (5) _____: first by the loss of in-person therapy and then by masking requirements, in places that have them.

SubQuestion No : 25

Q.25 Select the most appropriate option to fill in blank no. 5.

- Ans**
- 1. normalised
 - 2. disrupted
 - 3. measured
 - 4. regulated

Question ID : **630680147460**
 Option 1 ID : **630680570619**
 Option 2 ID : **630680570621**
 Option 3 ID : **630680570620**
 Option 4 ID : **630680570618**
 Status : **Answered**
 Chosen Option : **2**