

Combined Graduate Level Examination 2024 Tier I

Roll Number	
Candidate Name	
Venue Name	
Exam Date	09/09/2024
Exam Time	9:00 AM - 10:00 AM
Subject	Combined Graduate Level Examination Tier I

Section : **General Intelligence and Reasoning**

Q.1 What will come in place of the question mark (?) in the following equation, if '+' and '-' are interchanged and 'x' and '÷' are interchanged?
 $4515 \times 5 - 431 \div 3 + 821 = ?$

- Ans
- 1. 1335
 - 2. 1775
 - 3. 1575
 - 4. 1375

Question ID : **630680411715**
 Option 1 ID : **6306801605695**
 Option 2 ID : **6306801605697**
 Option 3 ID : **6306801605698**
 Option 4 ID : **6306801605696**
 Status : **Answered**
 Chosen Option : **4**

Q.2 31 is related to 152 by certain logic. Following the same logic, 47 is related to 168. To which of the following is 66 related, following the same logic? (NOTE : Operations should be performed on the whole numbers, without breaking down the numbers into its constituent digits. E.g. 13 – Operations on 13 such as adding /deleting /multiplying etc., to 13 can be performed. Breaking down 13 into 1 and 3 and then performing mathematical operations on 1 and 3 is not allowed.)

- Ans
- 1. 180
 - 2. 187
 - 3. 185
 - 4. 190

Question ID : **630680326557**
 Option 1 ID : **6306801270316**
 Option 2 ID : **6306801270314**
 Option 3 ID : **6306801270315**
 Option 4 ID : **6306801270313**
 Status : **Not Answered**
 Chosen Option : **--**

Q.3 Six letters Q, Z, V, T, L and A are written on different faces of a dice. Two positions of this dice are shown in the figures below. Find the letter on the face opposite to Q.



- Ans
- 1. Z
 - 2. T
 - 3. V
 - 4. A

Question ID : 630680222371
 Option 1 ID : 630680863317
 Option 2 ID : 630680863316
 Option 3 ID : 630680863318
 Option 4 ID : 630680863315
 Status : Answered
 Chosen Option : 2

Q.4 In the following number-pairs, the second number is obtained by applying certain mathematical operations to the first number. In three of the four pairs, the same pattern is applied and hence they form a group. Select the number-pair that DOES NOT belong to this group.

(NOTE: Operations should be performed on the whole numbers, without breaking down the numbers into their constituent digits. E.g. 13 – Operations on 13 such as adding/subtracting/multiplying to 13 can be performed. Breaking down 13 into 1 and 3 and then performing mathematical operations on 1 and 3 is not allowed.)

- Ans
- 1. 335 - 119
 - 2. 358 - 152
 - 3. 317 - 101
 - 4. 308 - 92

Question ID : 630680794639
 Option 1 ID : 6306803113658
 Option 2 ID : 6306803113656
 Option 3 ID : 6306803113659
 Option 4 ID : 6306803113657
 Status : Answered
 Chosen Option : 2

Q.5 In a certain code language, 'NAME' is written as 'FNBO' and 'NANO' is written as 'POBO'. How will 'NAIL' be written in that language?

- Ans
- 1. MOBJ
 - 2. MJOB
 - 3. MOJB
 - 4. MJBO

Question ID : 630680416245
 Option 1 ID : 6306801623746
 Option 2 ID : 6306801623744
 Option 3 ID : 6306801623745
 Option 4 ID : 6306801623743
 Status : Answered
 Chosen Option : 4

Q.6 The question contains pairs of words that are related to each other in a certain way. Three of the following four word pairs are alike as these have the same relationship and thus form a group. Which word pair is the one that DOES NOT belong to that group?

(The words must be considered as meaningful English words and must not be related to each other based on the number of letters/number of consonants/vowels in the word.)

- Ans 1. Pentagon - 5 sides
 2. Hexagon - 8 sides
 3. Triangle - 3 sides
 4. Square - 4 sides

Question ID : 630680798725
Option 1 ID : 6306803129757
Option 2 ID : 6306803129759
Option 3 ID : 6306803129756
Option 4 ID : 6306803129758
Status : Answered
Chosen Option : 2

Q.7 The position of how many letters will remain unchanged if each of the letters in the word 'NIGHTMARES' is re-arranged in the English alphabetical order from left to right?

- Ans 1. One
 2. Four
 3. Two
 4. Three

Question ID : 630680106896
Option 1 ID : 630680415156
Option 2 ID : 630680415159
Option 3 ID : 630680415157
Option 4 ID : 630680415158
Status : Answered
Chosen Option : 2

Q.8 What will come in the place of '?' in the following equation, if '+' and '-' are interchanged and 'x' and '÷' are interchanged?
 $5 - 4 \div 9 + 80 \times 10 = ?$

- Ans 1. 31
 2. 33
 3. 35
 4. 30

Question ID : 630680327973
Option 1 ID : 6306801275864
Option 2 ID : 6306801275861
Option 3 ID : 6306801275862
Option 4 ID : 6306801275863
Status : Answered
Chosen Option : 2



Q.9 Select the option in which the numbers share the same relationship as that shared by the given pair of numbers.

(149, 213)
(168, 232)

(NOTE: Operations should be performed on the whole numbers, without breaking down the numbers into its constituent digits. E.g. 13 – Operations on 13 such as adding/deleting/multiplying etc. to 13 can be performed. Breaking down 13 into 1 and 3 and then performing mathematical operations on 1 and 3 is not allowed.)

- Ans 1. (162, 222)
 2. (153, 217)
 3. (137, 211)
 4. (144, 198)

Question ID : 630680329199

Option 1 ID : 6306801280620

Option 2 ID : 6306801280618

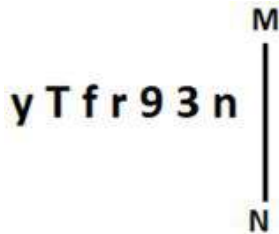
Option 3 ID : 6306801280617

Option 4 ID : 6306801280619

Status : Answered

Chosen Option : 2

Q.10 Select the correct mirror image of the given figure when the mirror is placed at MN as shown below.



- Ans 1. nεe1j1y
 2. nεe1tTy
 3. n931tTy
 4. nεer1Ty

Question ID : 630680356669

Option 1 ID : 6306801388678

Option 2 ID : 6306801388679

Option 3 ID : 6306801388677

Option 4 ID : 6306801388680

Status : Answered

Chosen Option : 2

Q.11 Select the option that is related to the fifth letter-cluster in the same way as the second letter-cluster is related to the first letter-cluster and the fourth letter-cluster is related to the third letter-cluster.

MEK: NVP :: GYT: TBG :: JWH:?

Ans ✓ 1. QDS

✗ 2. PCR

✗ 3. QDT

✗ 4. PCS

Question ID : 630680416747

Option 1 ID : 6306801625752

Option 2 ID : 6306801625751

Option 3 ID : 6306801625753

Option 4 ID : 6306801625754

Status : Answered

Chosen Option : 1

Q.12 Three statements are given followed by three conclusions numbered I, II and III.

Assuming the statements to be true, even if they seem to be at variance with commonly known facts, decide which of the conclusions logically follow(s) from the statements.

Statements:

No card is a parcel.

All cards are envelopes.

Some envelopes are bags.

Conclusions:

I. All envelopes can never be parcels.

II. No card is a bag.

III. At least some bags are postcards.

Ans ✓ 1. Only I follows

✗ 2. Only II follows

✗ 3. Only I and III follow

✗ 4. Only II and III follow

Question ID : 630680416213

Option 1 ID : 6306801623615

Option 2 ID : 6306801623618

Option 3 ID : 6306801623616

Option 4 ID : 6306801623617

Status : Answered

Chosen Option : 1



SSC CGL (Tier-1) STUDY NOTES



- ▶ 100% CGL Exam Syllabus Covered
- ▶ 12 Books, 1300+ Pages
- ▶ 5600+ MCQs
- ▶ Previous Year Papers & Mocks
- ▶ 1 Year Current Affairs
- ▶ Support & Guidance

50% OFF



SSCPORTAL.IN

FREE SHIPPING

SSC CGL PDF NOTES

100% Syllabus | 1300+ Pages

50% OFF

CLICK HERE



Q.13 Select the correct mirror image of the given figure when the mirror is placed at MN as shown.



Ans

✓ 1. | p ɹ ɔ d

✗ 2. | p ɹ c b

✗ 3. | g ɹ c d

✗ 4. | g F ɔ b

Question ID : 630680389695

Option 1 ID : 6306801519240

Option 2 ID : 6306801519239

Option 3 ID : 6306801519238

Option 4 ID : 6306801519241

Status : Answered

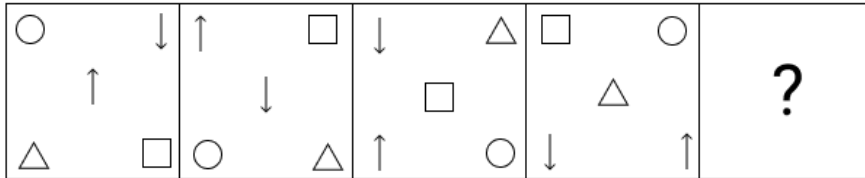
Chosen Option : 1



Download SSC CGL, CHSL E-BOOKS

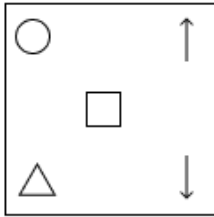
CLICK HERE

Q.14 Identify the option figure that when put in place of the question mark (?) will logically complete the series.

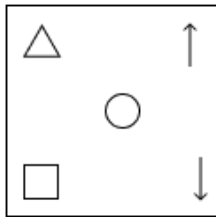


Ans

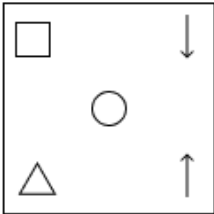
1.



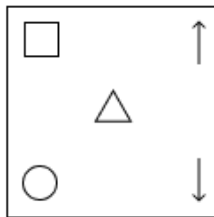
2.



3.



4.



Question ID : 630680488557

Option 1 ID : 6306801908257

Option 2 ID : 6306801908255

Option 3 ID : 6306801908256

Option 4 ID : 6306801908258

Status : Answered

Chosen Option : 2

Q.15 Which of the four options will replace the question mark (?) in the following series?

UE 88, VG 84, WI 80, XK76, ?

Ans

1. ZM72

2. ZN71

3. YN73

4. YM72

Question ID : 630680416329

Option 1 ID : 6306801624079

Option 2 ID : 6306801624081

Option 3 ID : 6306801624082

Option 4 ID : 6306801624080

Status : Answered

Chosen Option : 4



Download SSC CGL, CHSL E-BOOKS

[CLICK HERE](#)

Q.16 Select the option that represents the letters that when placed from left to right in the blanks below will complete the letter series.
 L_P_QS_K_P_S_KP_Q_L__PQS

- Ans
- 1. KPLPLQLSPK
 - 2. PKLPQPLSKP
 - 3. KPLPQQLPSPK
 - 4. KPLPQLPSKP

Question ID : 630680417344
 Option 1 ID : 6306801628140
 Option 2 ID : 6306801628141
 Option 3 ID : 6306801628139
 Option 4 ID : 6306801628142
 Status : Answered
 Chosen Option : 4

Q.17 Identify the figure from the given options, which when put in place of the question mark (?), will logically complete the series.

A	B	E	A	D	E	C	D	
	E		D		C		B	?
D		C	C	B	B	A	A	E

Ans

- 1.

D	B
A	
C	E
- 2.

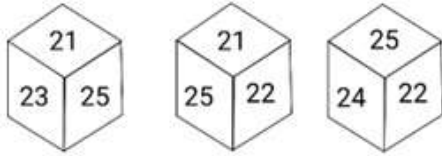
B	C
A	
E	D
- 3.

D	B
A	
C	E
- 4.

E	C
B	
A	D

Question ID : 630680309940
 Option 1 ID : 6306801205908
 Option 2 ID : 6306801205906
 Option 3 ID : 6306801205907
 Option 4 ID : 6306801205905
 Status : Answered
 Chosen Option : 2

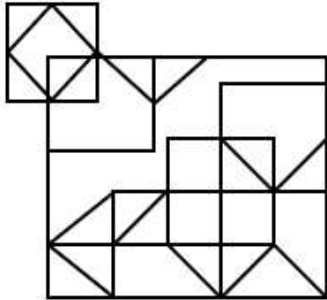
Q.18 Six numbers 21, 22, 23, 24, 25 and 26 are written on different faces of a dice. Three positions of this dice are shown in the figure. Find the number on the face opposite to 24.



- Ans**
- 1. 26
 - 2. 25
 - 3. 22
 - 4. 21

Question ID : 630680296580
 Option 1 ID : 6306801153974
 Option 2 ID : 6306801153973
 Option 3 ID : 6306801153972
 Option 4 ID : 6306801153971
 Status : Answered
 Chosen Option : 4

Q.19 How many triangles are there in the given figure?



- Ans**
- 1. 21
 - 2. 20
 - 3. 18
 - 4. 19

Question ID : 630680182735
 Option 1 ID : 630680708047
 Option 2 ID : 630680708045
 Option 3 ID : 630680708048
 Option 4 ID : 630680708046
 Status : Answered
 Chosen Option : 2

Q.20 In a certain code language, 'what where how' is written as 'aa dd ff'; 'where there that' is written as 'dd zz pp' and 'which what here' is written as 'ff kk ll'. How is 'how' written in that language?

- Ans**
- 1. aa
 - 2. kk
 - 3. zz
 - 4. ff

Question ID : 630680189110
 Option 1 ID : 630680733249
 Option 2 ID : 630680733250
 Option 3 ID : 630680733251
 Option 4 ID : 630680733252
 Status : Answered
 Chosen Option : 1

Q.21 Three statements are given followed by three conclusions numbered I, II and III. Assuming the statements to be true, even if they seem to be at variance with commonly known facts, decide which of the conclusions logically follow(s) from the statements.

Statements:

Some tears are drops.
Some drops are streams.
All streams are rivers.

Conclusions:

I. All tears can never be rivers.
II. Some drops are rivers.
III. All tears being streams is a possibility.

- Ans**
- 1. Only conclusion I follows
 - 2. Both II and III conclusion follow
 - 3. Only conclusion III follows
 - 4. Both I and II conclusion follow

Question ID : 630680416206

Option 1 ID : 6306801623589

Option 2 ID : 6306801623588

Option 3 ID : 6306801623587

Option 4 ID : 6306801623590

Status : Answered

Chosen Option : 2

Q.22 Which of the following terms will replace the question mark (?) in the given series?
YZUW, ?, QTQU, MQOT, INMS

- Ans**
- 1. UWSV
 - 2. UWVS
 - 3. USWV
 - 4. WUSV

Question ID : 630680417059

Option 1 ID : 6306801626999

Option 2 ID : 6306801627001

Option 3 ID : 6306801627002

Option 4 ID : 6306801627000

Status : Answered

Chosen Option : 1



Q.23 In a certain code language,
 'A + B' means 'A is the mother of B',
 'A - B' means 'A is the father of B',
 'A \$ B' means 'A is the son of B',
 'A % B' means 'A is the sister of B',
 'A / B' means 'A is the wife of B' and
 'A = B' means 'A is the brother of B'.

Which of the following means A is the daughter of K?

- i. $A + K / J - P = D$
- ii. $J \% P = K + A = D$
- iii. $K + A / P - D \% J$
- iv. $D + K = A / P - J$

- Ans 1. i
 2. iii
 3. ii
 4. iv

Question ID : 630680797014
 Option 1 ID : 6306803123012
 Option 2 ID : 6306803123014
 Option 3 ID : 6306803123013
 Option 4 ID : 6306803123015
 Status : Answered
 Chosen Option : 2

Q.24 19 is related to 209 following a certain logic. Following the same logic, 27 is related to 297. To which of the following is 61 related, following the same logic?

(NOTE: Operations should be performed on the whole numbers, without breaking down the numbers into its constituent digits. E.g. 13 – Operations on 13 such as adding /deleting /multiplying etc. to 13 can be performed. Breaking down 13 into 1 and 3 and then performing mathematical operations on 1 and 3 is not allowed)

- Ans 1. 653
 2. 600
 3. 571
 4. 671

Question ID : 630680344653
 Option 1 ID : 6306801340923
 Option 2 ID : 6306801340922
 Option 3 ID : 6306801340921
 Option 4 ID : 6306801340924
 Status : Answered
 Chosen Option : 4

Q.25 Which of the following numbers will replace the question mark (?) in the given series?
 1, 3, 10, 41, ?, 1237

- Ans 1. 202
 2. 210
 3. 200
 4. 206

Question ID : 630680411880
 Option 1 ID : 6306801606357
 Option 2 ID : 6306801606356
 Option 3 ID : 6306801606355
 Option 4 ID : 6306801606358
 Status : Answered
 Chosen Option : 4

Q.1 In which year was Project Tiger launched in India?

- Ans** 1. 1973
 2. 1970
 3. 1972
 4. 1985

Question ID : 630680302674
Option 1 ID : 6306801177364
Option 2 ID : 6306801177362
Option 3 ID : 6306801177363
Option 4 ID : 6306801177365
Status : Answered
Chosen Option : 3

Q.2 Lathmar Holi is primarily celebrated in the state of:

- Ans** 1. Karnataka
 2. Himachal Pradesh
 3. Arunachal Pradesh
 4. Uttar Pradesh

Question ID : 630680305975
Option 1 ID : 6306801190253
Option 2 ID : 6306801190255
Option 3 ID : 6306801190254
Option 4 ID : 6306801190256
Status : Answered
Chosen Option : 4

Q.3 Which of the following awards was won by Lata Mangeshkar in the year 2001?

- Ans** 1. Dadasaheb Phalke Award
 2. Padma Vibhushan
 3. Bharat Ratna
 4. Filmfare Lifetime Achievement Award

Question ID : 630680309203
Option 1 ID : 6306801202991
Option 2 ID : 6306801202990
Option 3 ID : 6306801202992
Option 4 ID : 6306801202989
Status : Answered
Chosen Option : 2

Q.4 Details about Sudarshana lake is given in a rock inscription at Girnar (Junagarh), which was composed to record the achievements of the Shaka ruler _____.

- Ans** 1. Chashtana
 2. Rudradaman I
 3. Rudrasimha III
 4. Maues

Question ID : 630680412470
Option 1 ID : 6306801608704
Option 2 ID : 6306801608703
Option 3 ID : 6306801608706
Option 4 ID : 6306801608705
Status : Not Answered
Chosen Option : --

Q.5 _____ is an industry association and self-regulatory organisation (SRO) whose primary objective is to work towards the robust development of the microfinance sector.

- Ans
- 1. NABARD
 - 2. Self-help Group Association
 - 3. Microfinance and Investments Regulatory Authority
 - 4. Microfinance Institutions Network

Question ID : 630680145289
Option 1 ID : 630680562139
Option 2 ID : 630680562140
Option 3 ID : 630680562141
Option 4 ID : 630680562138
Status : Answered
Chosen Option : 1

Q.6 Which article has a similar provision to that of Article 32 and deals with writ jurisdiction?

- Ans
- 1. Article 228
 - 2. Article 227
 - 3. Article 226
 - 4. Article 225

Question ID : 630680229954
Option 1 ID : 630680892258
Option 2 ID : 630680892257
Option 3 ID : 630680892256
Option 4 ID : 630680892255
Status : Not Answered
Chosen Option : --

Q.7 Which of the following is NOT a condition for the President's office in India?

- Ans
- 1. He shall not hold any office of profit.
 - 2. The allowances shall not be diminished during his term of office.
 - 3. He shall not be entitled, without payment of rent, to use his official residence.
 - 4. He shall not be a member of either House of the Parliament.

Question ID : 630680302219
Option 1 ID : 6306801175551
Option 2 ID : 6306801175553
Option 3 ID : 6306801175552
Option 4 ID : 6306801175550
Status : Answered
Chosen Option : 3

Q.8 Which of the following statements best defines the monoecious?

- Ans
- 1. A flower with gynoecium only
 - 2. A flower with androecium only
 - 3. A flower with both androecium and gynoecium
 - 4. A flower with ditheous

Question ID : 630680210518
Option 1 ID : 630680816233
Option 2 ID : 630680816232
Option 3 ID : 630680816231
Option 4 ID : 630680816234
Status : Not Answered
Chosen Option : --



Q.9 Mohan Veena player, Pandit Vishwa Mohan Bhatt won the _____ Award in the year 1994.

- Ans**
- 1. Grammy
 - 2. Sangita Kalanidhi
 - 3. Oscar
 - 4. Sangeet Natak Akademi

Question ID : **630680415805**
Option 1 ID : **6306801621987**
Option 2 ID : **6306801621989**
Option 3 ID : **6306801621988**
Option 4 ID : **6306801621990**
Status : **Not Answered**
Chosen Option : --

Q.10 Who is Union Minister of State (Independent Charge) for Science and Technology as of July 2023?

- Ans**
- 1. Dharmendra Pradhan
 - 2. Jitendra Singh
 - 3. Ashwini Vaishnaw
 - 4. Ramesh Pokhriyal

Question ID : **630680413037**
Option 1 ID : **6306801610972**
Option 2 ID : **6306801610971**
Option 3 ID : **6306801610974**
Option 4 ID : **6306801610973**
Status : **Answered**
Chosen Option : **2**

Q.11 Which of the following decomposition reactions is NOT a redox reaction?

- Ans**
- 1. Decomposition of sodium hydride
 - 2. Decomposition of calcium carbonate
 - 3. Decomposition of potassium chlorate
 - 4. Decomposition of dihydrogen monoxide

Question ID : **63068052318**
Option 1 ID : **630680201376**
Option 2 ID : **630680201374**
Option 3 ID : **630680201377**
Option 4 ID : **630680201375**
Status : **Not Answered**
Chosen Option : --

Q.12 Who among the following has authored the play 'Nil Darpan'?

- Ans**
- 1. Chittaranjan Das
 - 2. Motilal Nehru
 - 3. Dinabandhu Mitra
 - 4. Sarojini Naidu

Question ID : **630680511521**
Option 1 ID : **6306801999206**
Option 2 ID : **6306801999208**
Option 3 ID : **6306801999207**
Option 4 ID : **6306801999209**
Status : **Not Answered**
Chosen Option : --



Q.13 Who among the following formed the Bihar Provincial Kisan Sabha in 1929?

- Ans
- 1. Jayprakash Narayan
 - 2. JM Sengupta
 - 3. Kunwar Singh
 - 4. Swami Sahajanand Saraswati

Question ID : 630680412319
Option 1 ID : 6306801608101
Option 2 ID : 6306801608102
Option 3 ID : 6306801608099
Option 4 ID : 6306801608100
Status : Not Answered
Chosen Option : --

Q.14 Which plateaus are very fertile because they are rich in black soil that is very good for farming?

- Ans
- 1. Deccan lava plateau
 - 2. African plateau
 - 3. Ethiopian plateau
 - 4. Katanga plateau

Question ID : 63068094185
Option 1 ID : 630680365436
Option 2 ID : 630680365435
Option 3 ID : 630680365437
Option 4 ID : 630680365438
Status : Not Answered
Chosen Option : --

Q.15 Which of the following is a correct order of basicity?

- Ans
- 1. $\text{LiOH} > \text{NaOH} > \text{KOH} > \text{CsOH}$
 - 2. $\text{KOH} > \text{CsOH} > \text{NaOH} > \text{LiOH}$
 - 3. $\text{LiOH} > \text{KOH} > \text{CsOH} > \text{NaOH}$
 - 4. $\text{CsOH} > \text{KOH} > \text{NaOH} > \text{LiOH}$

Question ID : 63068089701
Option 1 ID : 630680347579
Option 2 ID : 630680347578
Option 3 ID : 630680347581
Option 4 ID : 630680347580
Status : Answered
Chosen Option : 1

Q.16 Which of the following pairs is INCORRECT regarding the grade of organisation and its example?

- Ans
- 1. Cell-tissue grade organisation - Jellyfish
 - 2. Cellular grade organisation - Sycon
 - 3. Protoplasmic grade organisation - Paramecium
 - 4. Tissue-organ grade organisation - Euplectella

Question ID : 630680133787
Option 1 ID : 630680518088
Option 2 ID : 630680518086
Option 3 ID : 630680518089
Option 4 ID : 630680518087
Status : Not Answered
Chosen Option : --



Q.17 The head office of Board of Control for Cricket in India (BCCI) is located in _____.

- Ans**
- 1. Kolkata
 - 2. Chennai
 - 3. Mumbai
 - 4. New Delhi

Question ID : **630680510747**
Option 1 ID : **6306801996119**
Option 2 ID : **6306801996121**
Option 3 ID : **6306801996120**
Option 4 ID : **6306801996118**
Status : **Answered**
Chosen Option : **3**

Q.18 When the analysis of population density is done by calculating it through net cultivated area, then the measure is termed as:

- Ans**
- 1. Net density
 - 2. Gross density
 - 3. Agricultural density
 - 4. Physiological density

Question ID : **630680409604**
Option 1 ID : **6306801597247**
Option 2 ID : **6306801597248**
Option 3 ID : **6306801597245**
Option 4 ID : **6306801597246**
Status : **Answered**
Chosen Option : **4**

Q.19 Mahendravarman I was the ruler of which of the following dynasties?

- Ans**
- 1. Pallava
 - 2. Pandya
 - 3. Chalukya
 - 4. Chola

Question ID : **630680412335**
Option 1 ID : **6306801608163**
Option 2 ID : **6306801608164**
Option 3 ID : **6306801608165**
Option 4 ID : **6306801608166**
Status : **Not Answered**
Chosen Option : **--**

Q.20 What challenge does foreign investment often face in India?

- Ans**
- 1. Excessive foreign competition
 - 2. Lack of skilled labour
 - 3. Lack of consumer base
 - 4. Inconsistent regulatory environment

Question ID : **630680411080**
Option 1 ID : **6306801603075**
Option 2 ID : **6306801603072**
Option 3 ID : **6306801603074**
Option 4 ID : **6306801603073**
Status : **Answered**
Chosen Option : **4**



Q.21 Which of the following states is the biggest producer of Pulses?

- Ans 1. Bihar
 2. Madhya Pradesh
 3. Punjab
 4. Haryana

Question ID : 63068049563
Option 1 ID : 630680190684
Option 2 ID : 630680190685
Option 3 ID : 630680190682
Option 4 ID : 630680190683
Status : Answered
Chosen Option : 2

Q.22 Who founded the Prarthana Samaj in Mumbai in 1867?

- Ans 1. Gopal Krishna Gokhale
 2. Shri Ram Bajpai
 3. Atmaram Pandurang
 4. Ram Mohan Roy

Question ID : 630680158737
Option 1 ID : 630680614441
Option 2 ID : 630680614443
Option 3 ID : 630680614440
Option 4 ID : 630680614442
Status : Answered
Chosen Option : 3

Q.23 Who is the Chief Minister of Tamil Nadu as of July 2023?

- Ans 1. KN Nehru
 2. Pinarayi Vijayan
 3. M Yedurappa
 4. MK Stalin


Question ID : 630680413035
Option 1 ID : 6306801610964
Option 2 ID : 6306801610966
Option 3 ID : 6306801610963
Option 4 ID : 6306801610965
Status : Answered
Chosen Option : 4

Q.24 In which city was the first golf club of India situated?

- Ans 1. Kolkata
 2. Mysore
 3. Shimla
 4. Gulmarg

Question ID : 630680510833
Option 1 ID : 6306801996465
Option 2 ID : 6306801996462
Option 3 ID : 6306801996463
Option 4 ID : 6306801996464
Status : Not Answered
Chosen Option : --

कर्मचारी चयन आयोग (CGL) परीक्षा अध्ययन सामग्री



FREE SHIPPING

- ▶ 100% Syllabus Covered
- ▶ 9 Books, 1000+ Pages - PRINT COPY
- ▶ 3000+ MCQs - PRINT COPY
- ▶ 08 Year Solved Papers & Mock Tests (PDF Copy)
- ▶ One Year Current Affairs (PDF Copy)

हिन्दी माध्यम

50% OFF

SSCPORTAL.IN

SSC CGL HINDI PDF NOTES

100% Syllabus | 1,000+ Pages

50%
OFF

CLICK HERE

<https://sscportal.in/study-kit/cgl/tier-1-hindi>

Q.25 Which Indian among the following has his name in Time Magazine's list of '100 most influential people of 2021'?

- Ans
- 1. Amit Shah
 - 2. Narendra Modi
 - 3. Neeraj Chopra
 - 4. Virat Kohli

Question ID : **630680115309**
 Option 1 ID : **630680446586**
 Option 2 ID : **630680446587**
 Option 3 ID : **630680446588**
 Option 4 ID : **630680446589**
 Status : **Answered**
 Chosen Option : **3**

Section : **Quantitative Aptitude**

Q.1 A grocer professes to sell rice at the cost price, but uses a fake weight of 870 g for 1 kg. Find his profit percentage (correct to two decimal places).

- Ans
- 1. 11.11%
 - 2. 14.94%
 - 3. 15.11%
 - 4. 18.21%

Question ID : **630680428862**
 Option 1 ID : **6306801673492**
 Option 2 ID : **6306801673493**
 Option 3 ID : **6306801673494**
 Option 4 ID : **6306801673495**
 Status : **Answered**
 Chosen Option : **2**

Q.2 The value of $\cos^2 29^\circ + \cos^2 61^\circ$ is:

- Ans
- 1. $\frac{\sqrt{3}}{2}$
 - 2. 2
 - 3. 0
 - 4. 1

Question ID : **630680396993**
 Option 1 ID : **6306801548031**
 Option 2 ID : **6306801548030**
 Option 3 ID : **6306801548028**
 Option 4 ID : **6306801548029**
 Status : **Answered**
 Chosen Option : **4**

Q.3 In a circular race of 840 m, A and B start running in the same direction at the same time from the same point at the speeds of 6 m/s and 12 m/s, respectively. After how much time will they meet next?

- Ans** 1. 140 s
 2. 40 s
 3. 70 s
 4. 20 s

Question ID : **630680138391**
Option 1 ID : **630680535803**
Option 2 ID : **630680535802**
Option 3 ID : **630680535804**
Option 4 ID : **630680535805**
Status : **Answered**
Chosen Option : **1**

Q.4 Let O be the centre of the circle and AB and CD are two parallel chords on the same side of the radius. OP is perpendicular to AB and OQ is perpendicular to CD. If AB = 10 cm, CD = 24 cm and PQ = 7 cm, then the diameter (in cm) of the circle is equal to:

- Ans** 1. 24
 2. 13
 3. 12
 4. 26

Question ID : **630680397618**
Option 1 ID : **6306801550395**
Option 2 ID : **6306801550396**
Option 3 ID : **6306801550397**
Option 4 ID : **6306801550394**
Status : **Answered**
Chosen Option : **4**

Q.5 Which of the following statements is sufficient to conclude that two triangles are congruent?

- Ans** 1. One side and one angle of both triangles are equal.
 2. These have two equal sides and the same perimeter.
 3. These have the same area and the same base.
 4. These have the same base and the same height.

Question ID : **630680373876**
Option 1 ID : **6306801456775**
Option 2 ID : **6306801456778**
Option 3 ID : **6306801456777**
Option 4 ID : **6306801456776**
Status : **Answered**
Chosen Option : **2**



Q.6 The given table shows the percentage of marks obtained by three students in three different subjects in an institute. (maximum marks are given in brackets)

Subject Student	History (175)	Geography (200)	Botany (125)
Ram	54	87	71
Mohan	51	79	78
Slyam	75	49	76

If in order to pass the exam, a minimum of 105 marks are needed in History, how many students pass in the exam?

- Ans**
- 1. 2
 - 2. 3
 - 3. 1
 - 4. 0

Question ID : **630680523820**
 Option 1 ID : **6306802047433**
 Option 2 ID : **6306802047432**
 Option 3 ID : **6306802047434**
 Option 4 ID : **6306802047431**
 Status : **Answered**
 Chosen Option : **3**

Q.7 Fill pipe P is 21 times faster than fill pipe Q. If Q can fill a cistern in 110 minutes, find the time it takes to fill the cistern when both fill pipes are opened together.

- Ans**
- 1. 3 minutes
 - 2. 5 minutes
 - 3. 4 minutes
 - 4. 6 minutes

Question ID : **630680426590**
 Option 1 ID : **6306801664453**
 Option 2 ID : **6306801664451**
 Option 3 ID : **6306801664450**
 Option 4 ID : **6306801664452**
 Status : **Answered**
 Chosen Option : **2**

Q.8 The following table shows the marks (out of 100) obtained by five students in five different subjects.

Student/Subject	Maths	Physics	Chemistry	English	Physical Education
Tarun	65	80	75	85	90
Rohit	69	76	80	88	94
Mohit	73	84	77	90	95
Shobhit	76	85	76	86	78
Sumit	90	88	78	82	68

Who obtained 79% marks in all the subjects taken together?

- Ans**
- 1. Rohit
 - 2. Tarun
 - 3. Mohit
 - 4. Sumit

Question ID : **630680428153**
 Option 1 ID : **6306801670657**
 Option 2 ID : **6306801670658**
 Option 3 ID : **6306801670656**
 Option 4 ID : **6306801670659**
 Status : **Answered**
 Chosen Option : **2**

Q.9 R pays ₹100 to P with ₹5, ₹2 and ₹1 coins. The total number of coins used for paying are 40. What is the number of coins of denomination ₹5 in the payment?

- Ans**
- 1. 13
 - 2. 17
 - 3. 16
 - 4. 18

Question ID : **630680285462**
 Option 1 ID : **6306801109818**
 Option 2 ID : **6306801109817**
 Option 3 ID : **6306801109815**
 Option 4 ID : **6306801109816**
 Status : **Answered**
 Chosen Option : **1**

Q.10 The radii of the two cones are in the ratio of 2 : 5 and their volumes are in the ratio of 3 : 5. What is the ratio of their heights?

- Ans**
- 1. 13 : 11
 - 2. 4 : 11
 - 3. 11 : 15
 - 4. 15 : 4

Question ID : **630680421499**
 Option 1 ID : **6306801644462**
 Option 2 ID : **6306801644459**
 Option 3 ID : **6306801644460**
 Option 4 ID : **6306801644461**
 Status : **Answered**
 Chosen Option : **4**

Q.11 Which of the following can be the value of 'k' so that the number 217924k is divisible by 6?

- Ans 1. 2
 2. 6
 3. 0
 4. 4

Question ID : 630680119849
Option 1 ID : 630680464462
Option 2 ID : 630680464464
Option 3 ID : 630680464465
Option 4 ID : 630680464463
Status : Answered
Chosen Option : 1

Q.12 In an election between two candidates, y% of the voters did not vote. 10% of the votes cast were declared invalid, while all the valid votes were cast in favour of either of the two candidates. The candidate who got 59.375% of the valid votes cast was declared elected by 2484 votes. If the number of people eligible to vote in that election was 16,000, what is the value of y?

- Ans 1. 8
 2. 8.4
 3. 7.5
 4. 7.2

Question ID : 630680406568
Option 1 ID : 6306801585494
Option 2 ID : 6306801585495
Option 3 ID : 6306801585496
Option 4 ID : 6306801585497
Status : Answered
Chosen Option : 1

Q.13 An article is marked at ₹550. If it is sold at a discount of 40%, then the selling price becomes 10% more than its cost price. What is the cost price (in ₹)?

- Ans 1. 330
 2. 220
 3. 300
 4. 200

Question ID : 630680395408
Option 1 ID : 6306801541815
Option 2 ID : 6306801541812
Option 3 ID : 6306801541814
Option 4 ID : 6306801541813
Status : Answered
Chosen Option : 3

Q.14 If the sum of two sides of an equilateral triangle is 16 cm, then find the third side.

- Ans 1. Cannot be found
 2. 16 cm
 3. 4 cm
 4. 8 cm

Question ID : 630680421380
 Option 1 ID : 6306801643984
 Option 2 ID : 6306801643985
 Option 3 ID : 6306801643983
 Option 4 ID : 6306801643986
 Status : Answered
 Chosen Option : 4

Q.15 Simplify $\frac{(x^2-9)}{x+3}$

- Ans 1. $x - 9$
 2. $x + 3$
 3. $x - 3$
 4. $\sqrt{x^2 - 9}$

Question ID : 630680413459
 Option 1 ID : 6306801612660
 Option 2 ID : 6306801612661
 Option 3 ID : 6306801612663
 Option 4 ID : 6306801612662
 Status : Answered
 Chosen Option : 3

Q.16 The following table shows the total candidates appeared and number of candidates present, in different exam centres – P, Q and R. Study the table and answer the question that follows.

Year	P		Q		R	
	Total	Present	Total	Present	Total	Present
2016	45	42	56	45	55	50
2017	50	45	75	55	45	40
2018	64	60	65	45	65	55
2019	80	69	84	72	70	62
2020	55	44	80	66	90	85

'Total' denotes total candidates applied for the centre, 'Present' denotes the candidates appeared.

In which year was the number of absentees the second highest in total of all centres?

- Ans 1. 2018
 2. 2019
 3. 2020
 4. 2017

Question ID : 630680390962
 Option 1 ID : 6306801524249
 Option 2 ID : 6306801524246
 Option 3 ID : 6306801524248
 Option 4 ID : 6306801524247
 Status : Answered
 Chosen Option : 1

Q.17 The distance between the centres of two circles of radii 22 cm and 10 cm is 37 cm. If the points of contact of a direct common tangent to these circles are M and Q, then find the length of the line segment MQ.

- Ans 1. 39 cm
 2. 29 cm
 3. 35 cm
 4. 25 cm

Question ID : 630680200526
Option 1 ID : 630680777462
Option 2 ID : 630680777460
Option 3 ID : 630680777461
Option 4 ID : 630680777459
Status : Answered
Chosen Option : 3

Q.18 The value of $\sin^2 30 - \sin^2 40 + \sin^2 45 - \sin^2 55 - \sin^2 35 + \sin^2 45 - \sin^2 50 + \sin^2 60$ is:

- Ans 1. 4
 2. 0
 3. 1
 4. 2

Question ID : 630680526498
Option 1 ID : 6306802058061
Option 2 ID : 6306802058058
Option 3 ID : 6306802058059
Option 4 ID : 6306802058060
Status : Answered
Chosen Option : 2

Q.19 The average marks (out of 100) of boys and girls in an examination are 75 and 80, respectively. If the average marks of all the students in that examination are 78. Find the ratio of the number of boys to the number of girls.

- Ans 1. 1 : 3
 2. 2 : 3
 3. 1 : 2
 4. 3 : 4

Question ID : 630680395030
Option 1 ID : 6306801540388
Option 2 ID : 6306801540390
Option 3 ID : 6306801540389
Option 4 ID : 6306801540391
Status : Answered
Chosen Option : 2



Q.20 Rajesh, in his printing press, got an order to print some books, out of which he completed $\frac{17}{27}$ of the order in 34 days. In how many days did he complete the entire order of printing?

- Ans** 1. 54
 2. 60
 3. 56
 4. 20

Question ID : 630680524286
 Option 1 ID : 6306802049296
 Option 2 ID : 6306802049297
 Option 3 ID : 6306802049298
 Option 4 ID : 6306802049295
 Status : Answered
 Chosen Option : 1

Q.21 Simplify

$$\frac{x^3 + 15x^2 + 75x + 125}{x^2 - 25} (x - 5).$$

- Ans** 1. $x^2 + 5x + 25$
 2. $x^2 - 25$
 3. $x^2 + 10x + 25$
 4. $x^2 + 25$

Question ID : 630680413492
 Option 1 ID : 6306801612792
 Option 2 ID : 6306801612795
 Option 3 ID : 6306801612793
 Option 4 ID : 6306801612794
 Status : Answered
 Chosen Option : 3

Q.22 If $\operatorname{cosec}\theta = 5/3$, then evaluate $(\sec^2\theta - 1) \times \cot^2\theta \times (1 + \cot^2\theta)$.

- Ans** 1. $\frac{9}{16}$
 2. $\frac{25}{9}$
 3. $\frac{25}{16}$
 4. $\frac{4}{5}$

Question ID : 630680403310
 Option 1 ID : 6306801572740
 Option 2 ID : 6306801572738
 Option 3 ID : 6306801572739
 Option 4 ID : 6306801572741
 Status : Answered
 Chosen Option : 2

Q.23

Which of the following can be the value of k, if $\frac{(88 \div 8 \times k - 3 \times 3)}{(6^2 - 7 \times 5 + k^2)} = 1$?

- Ans**
- 1. 2,7
 - 2. 4,7
 - 3. 3,10
 - 4. 1,10

Question ID : **630680427977**

Option 1 ID : **6306801669953**

Option 2 ID : **6306801669955**

Option 3 ID : **6306801669954**

Option 4 ID : **6306801669952**

Status : **Answered**

Chosen Option : **4**

Q.24

Read the given information and answer the question that follows.

The following table gives the percentage of marks obtained by seven students in six different subjects in an examination.

The number in the brackets give the maximum marks in each subject.

Student	Subject (Max. Marks)					
	Maths	Chemistry	Physics	Geography	History	Computer Science
	(150)	(130)	(120)	(100)	(60)	(40)
Ayush	90	50	90	60	70	80
Aman	100	80	80	40	80	70
Sajal	90	60	70	70	90	70
Rohit	80	65	80	80	60	60
Muskan	80	65	85	95	50	90
Tanvi	70	75	65	85	40	60
Tarun	65	35	50	77	80	80

If someone secured all the highest scores that have been obtained by some student or the other in the six subjects as given in the table above, what would be the exact overall percentage score obtained by that student?

- Ans**
- 1. $90\frac{5}{6}\%$
 - 2. $91\frac{1}{6}\%$
 - 3. 95.16%
 - 4. 91%

Question ID : **630680135826**

Option 1 ID : **630680526024**

Option 2 ID : **630680526022**

Option 3 ID : **630680526023**

Option 4 ID : **630680526025**

Status : **Not Answered**

Chosen Option : **--**

Q.25 Mohan borrows a sum of ₹4,22,092 at the rate of 20% per annum simple interest. At the end of the first year, he repays ₹21,679 towards return of principal amount borrowed. If Mohan clears all pending dues at the end of the second year, including interest payment that accrued during the first year, how much does he pay (in ₹) at the end of the second year?

- Ans 1. 561347
 2. 564914
 3. 558380
 4. 556367

Question ID : 630680809874
Option 1 ID : 6306803173078
Option 2 ID : 6306803173075
Option 3 ID : 6306803173076
Option 4 ID : 6306803173077
Status : Answered
Chosen Option : 2

Section : English Comprehension

Q.1 Select the most appropriate synonym of the given word.
Fatal

- Ans 1. Additional
 2. Easy
 3. Deadly
 4. Jovial

Question ID : 630680162156
Option 1 ID : 630680627932
Option 2 ID : 630680627933
Option 3 ID : 630680627934
Option 4 ID : 630680627935
Status : Answered
Chosen Option : 3

Q.2 Select the option that expresses the given sentence in active voice.
Lovely tunes are composed by Domnica.

- Ans 1. Domnica composes tunes lovely.
 2. Domnica will compose lovely tunes.
 3. Domnica composes lovely tunes.
 4. Domnica composed lovely tunes.

Question ID : 630680415253
Option 1 ID : 6306801619760
Option 2 ID : 6306801619761
Option 3 ID : 6306801619762
Option 4 ID : 6306801619759
Status : Answered
Chosen Option : 3



Q.3 Select the option that expresses the opposite meaning of the underlined word.
The explosive used is of my own formulation, and I can vouch for its efficiency.

- Ans 1. Invalidate
 2. Maintain
 3. Witness
 4. Certify

Question ID : 630680377998
Option 1 ID : 6306801473051
Option 2 ID : 6306801473052
Option 3 ID : 6306801473053
Option 4 ID : 6306801473054
Status : Answered
Chosen Option : 1

Q.4 The following sentence has been divided into four segments. Identify the segment that contains an error.
Mr. Abhilash and his family / have received / no informations / about the incident.

- Ans 1. about the incident.
 2. Mr. Abhilash and his family
 3. have received
 4. no informations

Question ID : 630680206718
Option 1 ID : 630680801474
Option 2 ID : 630680801471
Option 3 ID : 630680801472
Option 4 ID : 630680801473
Status : Answered
Chosen Option : 4

Q.5 Select the most appropriate synonym of the given word.

Toxic

- Ans 1. Lethal
 2. Licit
 3. Laudatory
 4. Lanky

Question ID : 630680130678
Option 1 ID : 630680506009
Option 2 ID : 630680506007
Option 3 ID : 630680506008
Option 4 ID : 630680506006
Status : Answered
Chosen Option : 1



Q.6 Select the word which means the same as the group of words given.

Unit of weight for precious stones

- Ans 1. Pure
 2. Accurate
 3. Reliable
 4. Carat

Question ID : 630680414701
Option 1 ID : 6306801617548
Option 2 ID : 6306801617547
Option 3 ID : 6306801617549
Option 4 ID : 6306801617550
Status : Answered
Chosen Option : 4

Q.7 Select the option that can be used as a one-word substitute for the underlined group of words.

She is proficient in speaking many languages.

- Ans 1. Heterolinguistic
 2. Bilingual
 3. Multilingual
 4. Monolithic

Question ID : 630680129378
Option 1 ID : 630680501132
Option 2 ID : 630680501131
Option 3 ID : 630680501130
Option 4 ID : 630680501133
Status : Answered
Chosen Option : 3

Q.8 Select the option that expresses the given sentence in passive voice.

Ishika saw the tiger in the forest.

- Ans 1. The tiger saw by Ishika in the forest.
 2. The tiger sees Ishika in the forest.
 3. The tiger was seen by Ishika in the forest.
 4. The tiger was seen by the forest in Ishika.

Question ID : 630680374745
Option 1 ID : 6306801460150
Option 2 ID : 6306801460149
Option 3 ID : 6306801460148
Option 4 ID : 6306801460147
Status : Answered
Chosen Option : 3



Q.9 Select the option that can be used as a one-word substitute for the given group of words.

A person who likes to argue about anything

- Ans
- 1. Veracious
 - 2. Reticent
 - 3. Contentious
 - 4. Coward

Question ID : 630680414688
Option 1 ID : 6306801617497
Option 2 ID : 6306801617496
Option 3 ID : 6306801617498
Option 4 ID : 6306801617495
Status : Answered
Chosen Option : 2

Q.10 Select the most appropriate option that can substitute the underlined segment in the given sentence.

'Spy Family' is a graphic novel that is a narrative work in which the story is conveyed to the reader using uninterrupted art in a traditional comics format.

- Ans
- 1. sedimental art in a traditional
 - 2. longitudinal art in a traditional
 - 3. existential art in a traditional
 - 4. sequential art in a traditional

Question ID : 630680147493
Option 1 ID : 630680570745
Option 2 ID : 630680570744
Option 3 ID : 630680570743
Option 4 ID : 630680570742
Status : Answered
Chosen Option : 4

Q.11 The following sentence has been split into four segments. Identify the segment that contains a grammatical error.

My brother performed / extremely good / in the class test / held yesterday.

- Ans
- 1. held yesterday
 - 2. extremely good
 - 3. in the class test
 - 4. My brother performed

Question ID : 630680383193
Option 1 ID : 6306801493682
Option 2 ID : 6306801493680
Option 3 ID : 6306801493681
Option 4 ID : 6306801493679
Status : Answered
Chosen Option : 1



Q.12 Select the INCORRECTLY spelt word.

- Ans
- 1. Bureaucracy
 - 2. Embarrass
 - 3. Connoisseur
 - 4. Relevent

Question ID : 630680377267
Option 1 ID : 6306801470131
Option 2 ID : 6306801470132
Option 3 ID : 6306801470134
Option 4 ID : 6306801470133
Status : Answered
Chosen Option : 2

Q.13 Select the most appropriate synonym to replace the underlined word in the given sentence.

No altruistic act is truly sincere.

- Ans
- 1. phenomenal
 - 2. phonotypical
 - 3. philanthropic
 - 4. phantasmal

Question ID : 630680295693
Option 1 ID : 6306801150499
Option 2 ID : 6306801150496
Option 3 ID : 6306801150498
Option 4 ID : 6306801150497
Status : Answered
Chosen Option : 3

Q.14 Select the most appropriate synonym of the given word.
Innuendo

- Ans
- 1. Crude
 - 2. Prose
 - 3. Ragged
 - 4. Insinuation

Question ID : 630680145489
Option 1 ID : 630680562930
Option 2 ID : 630680562932
Option 3 ID : 630680562933
Option 4 ID : 630680562931
Status : Not Answered
Chosen Option : --



Q.15 Select the most appropriate option to fill in the blank.

Vinod had a _____ escape in the car accident.

- Ans
- 1. comfortable
 - 2. full
 - 3. narrow
 - 4. wide

Question ID : 630680360831
Option 1 ID : 6306801405199
Option 2 ID : 6306801405200
Option 3 ID : 6306801405198
Option 4 ID : 6306801405197
Status : Answered
Chosen Option : 3

Q.16 Select the option that can be used as a one-word substitute for the given phrase.

A short interesting story about a real person or event

- Ans
- 1. Anecdote
 - 2. Sketch
 - 3. Poem
 - 4. Narrative

Question ID : 630680353988
Option 1 ID : 6306801378025
Option 2 ID : 6306801378027
Option 3 ID : 6306801378026
Option 4 ID : 6306801378028
Status : Answered
Chosen Option : 1

Q.17 Select the most appropriate synonym of the word in bold.

We'd better watch our step and not give him any excuse to harass us further.

- Ans
- 1. betray
 - 2. intimidate
 - 3. relish
 - 4. soothe

Question ID : 630680319157
Option 1 ID : 6306801241536
Option 2 ID : 6306801241535
Option 3 ID : 6306801241534
Option 4 ID : 6306801241533
Status : Answered
Chosen Option : 2



Q.18 Select the most appropriate meaning of the given idiom.
To have bigger fish to fry

- Ans 1. To have bigger things to take care of than the menial task at hand
2. To take calculated risks
3. To know different kinds of fishing techniques
4. To have an interest in cooking

Question ID : 630680319124
Option 1 ID : 6306801241401
Option 2 ID : 6306801241404
Option 3 ID : 6306801241403
Option 4 ID : 6306801241402
Status : Answered
Chosen Option : 1

Q.19 In the following sentence, four words are underlined out of which one word is misspelt. Identify the INCORRECTLY spelt word.
After the recapture (A) of Tololing and the adjacent features, evacting (B) the enemy from this well-fortified (C) position became a priority.(D)

- Ans 1. B
2. D
3. C
4. A

Question ID : 630680409956
Option 1 ID : 6306801598654
Option 2 ID : 6306801598656
Option 3 ID : 6306801598655
Option 4 ID : 6306801598653
Status : Answered
Chosen Option : 1

Q.20 Select the most appropriate option to substitute the underlined segment in the given sentence.
She has been studying for two o'clock .

- Ans 1. study from two o'clock
2. studying since two o'clock
3. studying two o'clock
4. study for two o'clock

Question ID : 630680176629
Option 1 ID : 630680684738
Option 2 ID : 630680684736
Option 3 ID : 630680684739
Option 4 ID : 630680684737
Status : Answered
Chosen Option : 2



Comprehension:

In the following passage, some words have been deleted. Read the passage carefully and select the most appropriate option to fill in each blank.

There is a saying that coming events cast their shadows before. (1)_____, it is not universally true. Something can happen within a second, and one may not (2)_____ it. (3)_____, some instances show that predictions based on certain signs have gone wrong. People generally say that natural calamities can be predicted by observing the animals. But what if animals are suffering from some disease and don't show any signs before the event appears? They may fail to make peculiar sounds or actions about the events which are going to take place. (4)_____, some unnatural calamities that are likely to appear may forecast their shadows by some bad omens. (5)_____, we should not completely cancel out the possibilities that animals can sense certain unnatural happenings.

SubQuestion No : 21

Q.21 Select the most appropriate option to fill in blank number 1.

- Ans 1. Therefore
 2. Furthermore
 3. Moreover
 4. However

Question ID : 630680164755

Option 1 ID : 630680638102

Option 2 ID : 630680638103

Option 3 ID : 630680638101

Option 4 ID : 630680638100

Status : Answered

Chosen Option : 4

Comprehension:

In the following passage, some words have been deleted. Read the passage carefully and select the most appropriate option to fill in each blank.

There is a saying that coming events cast their shadows before. (1)_____, it is not universally true. Something can happen within a second, and one may not (2)_____ it. (3)_____, some instances show that predictions based on certain signs have gone wrong. People generally say that natural calamities can be predicted by observing the animals. But what if animals are suffering from some disease and don't show any signs before the event appears? They may fail to make peculiar sounds or actions about the events which are going to take place. (4)_____, some unnatural calamities that are likely to appear may forecast their shadows by some bad omens. (5)_____, we should not completely cancel out the possibilities that animals can sense certain unnatural happenings.

SubQuestion No : 22

Q.22 Select the most appropriate option to fill in blank number 2.

- Ans 1. rescind
 2. foresee
 3. legalise
 4. affect

Question ID : 630680164756

Option 1 ID : 630680638105

Option 2 ID : 630680638106

Option 3 ID : 630680638104

Option 4 ID : 630680638107

Status : Answered

Chosen Option : 2



Comprehension:

In the following passage, some words have been deleted. Read the passage carefully and select the most appropriate option to fill in each blank.

There is a saying that coming events cast their shadows before. (1)_____, it is not universally true. Something can happen within a second, and one may not (2)_____ it. (3)_____, some instances show that predictions based on certain signs have gone wrong. People generally say that natural calamities can be predicted by observing the animals. But what if animals are suffering from some disease and don't show any signs before the event appears? They may fail to make peculiar sounds or actions about the events which are going to take place. (4)_____, some unnatural calamities that are likely to appear may forecast their shadows by some bad omens. (5)_____, we should not completely cancel out the possibilities that animals can sense certain unnatural happenings.

SubQuestion No : 23**Q.23 Select the most appropriate option to fill in blank number 3.**

- Ans 1. Therefore
 2. Moreover
 3. However
 4. Nevertheless

Question ID : 630680164757

Option 1 ID : 630680638110

Option 2 ID : 630680638109

Option 3 ID : 630680638108

Option 4 ID : 630680638111

Status : Answered

Chosen Option : 4

Comprehension:

In the following passage, some words have been deleted. Read the passage carefully and select the most appropriate option to fill in each blank.

There is a saying that coming events cast their shadows before. (1)_____, it is not universally true. Something can happen within a second, and one may not (2)_____ it. (3)_____, some instances show that predictions based on certain signs have gone wrong. People generally say that natural calamities can be predicted by observing the animals. But what if animals are suffering from some disease and don't show any signs before the event appears? They may fail to make peculiar sounds or actions about the events which are going to take place. (4)_____, some unnatural calamities that are likely to appear may forecast their shadows by some bad omens. (5)_____, we should not completely cancel out the possibilities that animals can sense certain unnatural happenings.

SubQuestion No : 24**Q.24 Select the most appropriate option to fill in blank number 4.**

- Ans 1. Therefore
 2. Secondly
 3. Besides
 4. Despite

Question ID : 630680164758

Option 1 ID : 630680638114

Option 2 ID : 630680638113

Option 3 ID : 630680638112

Option 4 ID : 630680638115

Status : Answered

Chosen Option : 1



SSC CGL (Tier-1) STUDY NOTES



FREE SHIPPING 

- ▶ 100% CGL Exam Syllabus Covered
- ▶ 12 Books, 1300+ Pages
- ▶ 5600+ MCQs
- ▶ Previous Year Papers & Mocks
- ▶ 1 Year Current Affairs
- ▶ Support & Guidance

50% OFF



SSCPORTAL.IN

SSC CGL PDF NOTES

100% Syllabus | 1300+ Pages

50%
OFF

CLICK HERE



Comprehension:

In the following passage, some words have been deleted. Read the passage carefully and select the most appropriate option to fill in each blank.

There is a saying that coming events cast their shadows before. (1)_____, it is not universally true. Something can happen within a second, and one may not (2)_____ it. (3)_____, some instances show that predictions based on certain signs have gone wrong. People generally say that natural calamities can be predicted by observing the animals. But what if animals are suffering from some disease and don't show any signs before the event appears? They may fail to make peculiar sounds or actions about the events which are going to take place. (4)_____, some unnatural calamities that are likely to appear may forecast their shadows by some bad omens. (5)_____, we should not completely cancel out the possibilities that animals can sense certain unnatural happenings.

SubQuestion No : 25

Q.25 Select the most appropriate option to fill in blank number 5.

Ans ✓ 1. Therefore

✗ 2. However

✗ 3. Nevertheless

✗ 4. Moreover

Question ID : **630680164759**

Option 1 ID : **630680638117**

Option 2 ID : **630680638118**

Option 3 ID : **630680638119**

Option 4 ID : **630680638116**

Status : **Answered**

Chosen Option : **1**



Download SSC CGL, CHSL E-BOOKS

[CLICK HERE](#)