

SSC Stenographers Grade C&D Exam 2017 : Held on 11-Sept-2017 Shift-1
(General Intelligence & Reasoning)

QID : 1 - In the following question, select the missing number from the given series.

33, 10, 43, 53, 96, ?

Options:

- 1) 150
- 2) 163
- 3) 171
- 4) 149

Correct Answer: 149

QID : 2 - In the following question, select the missing number from the given series.

13, 24, 37, 61, 98, ?

Options:

- 1) 159
- 2) 163
- 3) 134
- 4) 172

Correct Answer: 159

QID : 3 - In the following question, select the missing number from the given series.

9, 19, 37, 75, 149, ?

Options:

- 1) 297
- 2) 298
- 3) 300

4) 299

Correct Answer: 299

QID : 4 - In the following question, select the missing number from the given series.

23, 11, 34, 45, 79, ?

Options:

1) 121

2) 124

3) 163

4) 169

Correct Answer: 124

QID : 5 - A series is given with one term missing. Select the correct alternative from the given ones that will complete the series.

AB, CD, EF, GH, ?

Options:

1) HJ

2) HK

3) IJ

4) JI

Correct Answer: IJ

QID : 6 - A series is given with one term missing. Select the correct alternative from the given ones that will complete the series.

CDH, FGK, IJN, ?

Options:

1) LQK

2) KQM

3) MQK

4) LMQ

Correct Answer: LMQ

QID : 7 - A series is given with one term missing. Select the correct alternative from the given ones that will complete the series.

AFG, EJK, INO, ?

Options:

1) PQN

2) NOP

3) SMR

4) MRS

Correct Answer: MRS

QID : 8 - Which word will appear first when arranged in order of dictionary?

Options:

- 1) Ankle
- 2) Anger
- 3) Antique
- 4) Aster

Correct Answer: Anger

QID : 9 - Arrange the given words in the sequence in which they occur in the dictionary.

1. Lively
2. Longer
3. Lasted
4. Lamp
5. Lost

Options:

- 1) 43125
- 2) 41325
- 3) 43152
- 4) 41352

Correct Answer: 43125

QID : 10 - Which word will appear last when arranged in order of dictionary?

1. Onion
2. Owl
3. Omnious
4. Ostrich
5. Oxford

Options:

- 1) Ostrich
- 2) Owl
- 3) Oxford
- 4) Onion

Correct Answer: Oxford

QID : 11 - Arrange the given words in the sequence in which they occur in the dictionary.

1. Kite
2. Kangaroo
3. Krypton
4. Kaizen
5. Karma

Options:

- 1) 42513
- 2) 45213
- 3) 24513
- 4) 25413

Correct Answer: 42513

QID : 12 - In the following question, select the odd number pair from the given alternatives.

Options:

- 1) 9 – 90
- 2) 6 – 42
- 3) 5 – 30
- 4) 4 – 36

Correct Answer: 4 – 36

QID : 13 - In the following question, select the odd number pair from the given alternatives.

Options:

- 1) 3 – 28
- 2) 2 – 9
- 3) 5 – 124
- 4) 4 – 65

Correct Answer: 5 – 124

QID : 14 - In the following question, select the odd letters from the given alternatives.

Options:

- 1) JLN
- 2) GIK
- 3) NPR
- 4) TVY

Correct Answer: TVY

QID : 15 - In the following question, select the odd letters from the given alternatives.

Options:

- 1) GJHI
- 2) MPNO
- 3) RUST
- 4) UVXW

Correct Answer: UVXW

QID : 16 - In the following question, select the odd word pair from the given alternatives.

Options:

- 1) Hanger : Aeroplane
- 2) Yard : Train
- 3) Depot : Bus
- 4) Scooter : Garage

Correct Answer: No Correct Answer (Benefit to all)

QID : 17 - In the following question, select the odd word pair from the given alternatives.

Options:

- 1) Room : House
- 2) Page : Book
- 3) Engine : Car
- 4) Food : Hunger

Correct Answer: Food : Hunger

QID : 18 - In the following question, select the odd word from the given alternatives.

Options:

- 1) Petrol
- 2) Coal
- 3) Air
- 4) Natural Gas

Correct Answer: Air

QID : 19 - In the following question, select the related number from the given alternatives.

110 : 12100 :: 170 : ?

Options:

- 1) 2890
- 2) 28900

Study Kit for SSC Stenographers (Grade 'C' & 'D') Examination (Paper - 1)



- Medium: English
- 100% Syllabus Covered
- 3000 + MCQs
- 700+ Pages

**SPECIAL
OFFER**

Only
~~MRP ₹ 3000/-~~
Offer ₹ 1499/-

[Click Here for More Details](#)

What you will get:

- 100% Syllabus Covered
- 6 Booklets
- 700+ Pages
- 3000+ MCQs
- Five Practice Papers
- One Year Current Affairs
- Guidance & Support from Our Experts

Price of the Kit:

~~Rs. 3,000~~

Rs. 1,499/-
(Limited time Offer)

 [Buy Online](#)



[Net Banking](#)

[FOR MORE DETAILS CLICK HERE](#)

[Order Online \(100% Safe\)](#)

[Click here for Other Payment Options \(Cash/NEFT/etc\)](#)

**50%
OFF**

- 3) 18900
- 4) 36100

Correct Answer: 28900

QID : 20 - In the following question, select the related number from the given alternatives.

8 : 63 :: 9 : ?

Options:

- 1) 80
- 2) 81
- 3) 56
- 4) 32

Correct Answer: 80

QID : 21 - In the following question, select the related number from the given alternatives.

236 : 4936 :: 724 : ?

Options:

- 1) 49416
- 2) 7416
- 3) 49164
- 4) 49464

Correct Answer: 49416

QID : 22 - In the following question, select the related letters from the given alternatives.

SAND : QCLF :: DUNE : ?

Options:

- 1) BWLG
- 2) BWLH
- 3) BVLG
- 4) BWMG

Correct Answer: BWLG

QID : 23 - In the following question, select the related letters from the given alternatives.

BOTTLE : CQWXQK :: FILLED : ?

Options:

- 1) GKOPJJ
- 2) GKOPJK
- 3) GKPOJJ
- 4) GHOPJJ

Correct Answer: GKOPJJ

QID : 24 - In the following question, select the related letters from the given alternatives.

BCFDH : YXUWS :: MAGKD : ?

Options:

- 1) NCTMW
- 2) NZTPW
- 3) KXKMQ
- 4) KZTPQ

Correct Answer: NZTPW

QID : 25 - In the following question, select the related word from the given alternatives.

Wallet : Money :: Almirah : ?

Options:

- 1) Clothes
- 2) Wood
- 3) Steel
- 4) Lock

Correct Answer: Clothes

QID : 26 - In the following question, select the related word from the given alternatives.

East : West :: North-East : ?

Options:

- 1) South-East
- 2) South-West
- 3) North-West
- 4) South

Correct Answer: South-West

QID : 27 - In the following question, select the related word from the given alternatives.

Badminton : Shuttle :: Cricket : ?

Options:

- 1) Dice
- 2) Ball
- 3) Striker
- 4) Pitch

Correct Answer: Ball

QID : 28 - If $13 L 4 A 7 = 41$ and $14 A 3 L 12 = 54$, then $12 L 3 A 9 = ?$

Options:

- 1) 84
- 2) 39
- 3) 42
- 4) 56

Correct Answer: 39

QID : 29 - By interchanging which two signs the equation will be correct?

$$16 + 31 - 3 \times 93 \div 11 = 966$$

Options:

- 1) + and -
- 2) - and \div
- 3) \div and \times
- 4) \times and +

Correct Answer: - and \div

QID : 30 - In the following question, select the word which cannot be formed using the letters of the given word.

TRADITIONAL

Options:

- 1) LAID
- 2) TRADE
- 3) RADIATION
- 4) RATIONAL

Correct Answer: TRADE

QID : 31 - In the following question, select the word which cannot be formed using the letters of the given word.

HANGOVER

Options:

- 1) RANGE
- 2) RAGE
- 3) HOVER
- 4) HANGS

Correct Answer: HANGS

QID : 32 - In the following question below are given some statements followed by some conclusions. Taking the given statements

to be true even if they seem to be at variance from commonly known facts, read all the conclusions and then decide which of the given conclusion logically follows the given statements.

Statements:

- I. Some white are yellow.
- II. All yellow are blue.

Conclusions:

- I. Some blue are white.
- II. Some yellow are white.

Options:

- 1) Only I
- 2) Only II
- 3) Neither I nor II
- 4) Both I and II

Correct Answer: Both I and II

QID : 33 - In the following question below are given some statements followed by some conclusions. Taking the given statements to be true even if they seem to be at variance from commonly known facts, read all the conclusions and then decide which of the given conclusion logically follows the given statements.

Statements:

- I. All ears are hands.
- II. No hand is nose.

Conclusions:

- I. No ear is nose.
- II. All noses are ears.
- III. Some hands are noses.

Options:

- 1) Only I
- 2) Only II
- 3) Only III
- 4) None follows.

Correct Answer: Only I

QID : 34 - In a certain code language, "PHONE" is written as "QJRRJ". How is "PAGER" written in that code language?

Options:

- 1) QCJIW
- 2) QCJKW
- 3) QCKIW
- 4) QCKIY

Correct Answer: QCJIW

QID : 35 - In a certain code language, "RUN" is written as "50" and "BUS" is written as "39" . How is "GUN" written in that code language?

Options:

- 1) 37
- 2) 38
- 3) 39
- 4) 42

Correct Answer: 39

QID : 36 -

In the following question, select the number which can be placed at the sign of question mark (?) from the given alternatives.

निम्नलिखित प्रश्न में दिए गए विकल्पों में से प्रश्न चिह्न (?) के स्थान पर आने वाली संख्या को चुनिए।

3	6	4	18
2	5	8	21
3	1	7	?

Options:

- 1) 20
- 2) 21
- 3) 22
- 4) 24

Correct Answer: 22

QID : 37 -

In the following question, select the number which can be placed at the sign of question mark (?) from the given alternatives.

निम्नलिखित प्रश्न में दिए गए विकल्पों में से प्रश्न चिह्न (?) के स्थान पर आने वाली संख्या को चुनिए।

2	3
6	8

4	4
9	2

12	2
3	?

Options:

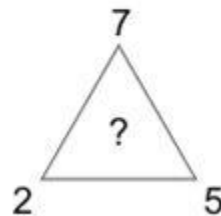
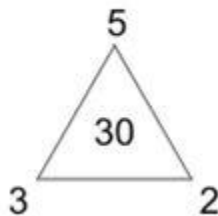
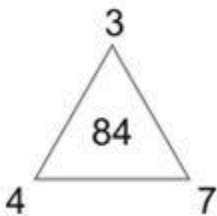
- 1) 2
- 2) 3
- 3) 4
- 4) 6

Correct Answer: No Correct Answer (Benefit to all)

QID : 38 -

In the following question, select the number which can be placed at the sign of question mark (?) from the given alternatives.

निम्नलिखित प्रश्न में दिए गए विकल्पों में से प्रश्न चिह्न (?) के स्थान पर आने वाली संख्या को चुनिए।



Options:

- 1) 45
- 2) 50
- 3) 70

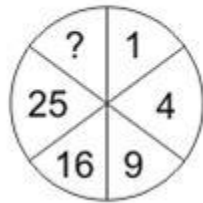
4) 105

Correct Answer: 70

QID : 39 -

In the following question, select the number which can be placed at the sign of question mark (?) from the given alternatives.

निम्नलिखित प्रश्न में दिए गए विकल्पों में से प्रश्न चिह्न (?) के स्थान पर आने वाली संख्या को चुनिए।



Options:

1) 36

2) 49

3) 50

4) 64

Correct Answer: 36

QID : 40 - Suman walks 15 km towards north. She turns right and walks another 15 km. She turns right and walks another 15 km. In which direction is she from her starting point?

Options:

1) North

2) South

3) East

4) West

Correct Answer: East

QID : 41 - A is 2 years older to B. B is 5 years younger to C. C is 3 years older to D. D is 6 years younger to E. Who is the youngest?

Options:

1) A

- 2) B
- 3) C
- 4) D

Correct Answer: B

QID : 42 - P, Q, R, S and T are sitting in a line facing west. P and Q are sitting together. R is sitting at south end and S is sitting at north end. T is neighbour of Q and R. Who is sitting in the middle?

Options:

- 1) P
- 2) Q
- 3) R
- 4) S

Correct Answer: Q

QID : 43 - Weight of P is twice that of Q. Weight of Q is half of R. Weight of R is 3 times of T. Weight of T is half of S. The weight of Q is greater than the weight of how many persons among P, R, S and T?

Options:

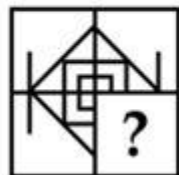
- 1) 1
- 2) 2
- 3) 3
- 4) 4

Correct Answer: 1

QID : 44 -

Which answer figure will complete the pattern in the question figure?

कौन सी उत्तर आकृति प्रश्न आकृति के प्रतिरूप को पूरा करेगी?



Options:

- 1)



2)



3)



4)

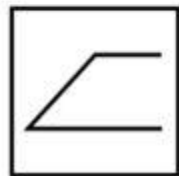


Correct Answer:

QID : 45 -

From the given answer figures, select the one in which the question figure is hidden/embedded.

दी गई उत्तर आकृतियों में से उस उत्तर आकृति को चुनिए जिस में प्रश्न आकृति निहित है।



Options:

1)

SSC CGL Tier-1 Printed Study Kit



- 100% Syllabus Covered
- 12 Books , 1300+ Pages
- 5600+ MCQs
- 08 Year Solved Papers & Mock Tests (PDF Copy)
- 1 year Current Affairs (PDF Copy)

50% OFF

~~₹ 6,000/-~~
₹ 2,999/-

FREE SHIPPING 

for Exam Help Call Us at: +91 8800734161

 **SSCPortal.in**

What you will get:

- 100% Syllabus Covered
- 12 Books
- 1300+ Pages
- 5600+ MCQs
- 8 Year Solved Papers (PDF Copy)
- Five Practice Papers (PDF Copy)
- One Year Current Affairs (PDF Copy)
- Guidance & Support from Our Experts

Price of the Kit:

~~Rs. 6,000~~

Rs. 2,999/-

(Limited time Offer)



Buy Online



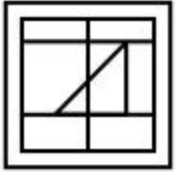
Net Banking

Order Online (100% Safe)

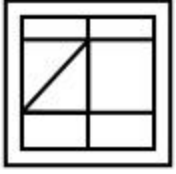
[Click here for Other Payment Options \(Cash/NEFT/etc\)](#)

FOR MORE DETAILS CLICK HERE

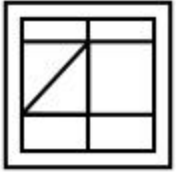
50% OFF



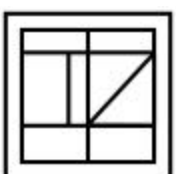
2)



3)



4)

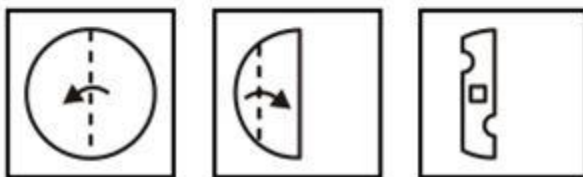


Correct Answer:

QID : 46 -

A piece of paper is folded and punched as shown below in the question figures. From the given answer figures, indicate how it will appear when opened?

नीचे के प्रश्न आकृतियों में दिखाए अनुसार कागज को मोड़कर छेदने तथा खोलने के बाद वह किस उत्तर आकृति जैसा दिखाई देगा?



Options:

1)



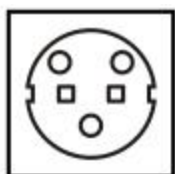
2)



3)



4)

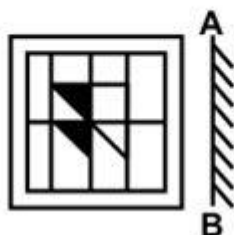


Correct Answer:

QID : 47 -


If a mirror is placed on the line AB, then which of the answer figures is the right image of the given figure?

यदि एक दर्पण को AB रेखा पर रखा जाए, तो दी गई उत्तर आकृतियों में से कौन सी आकृति प्रश्न आकृति की सही प्रतिबिम्ब होगी?



Options:

1)



2)



3)



4)

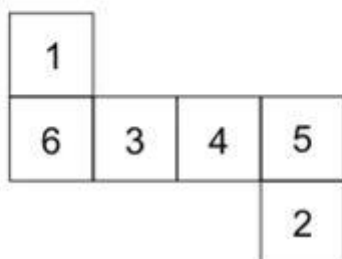


Correct Answer:

QID : 48 -

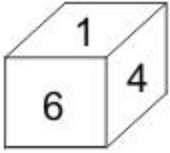
From the given options, which answer figure can be formed by folding the figure given in the question?

निम्नलिखित विकल्पों में से कौन सी उत्तर आकृति प्रश्न में दी गई आकृति को मोड़कर बनाई जा सकती है?

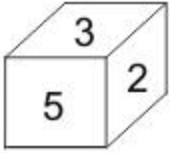


Options:

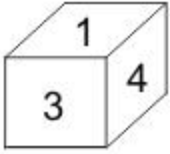
1)



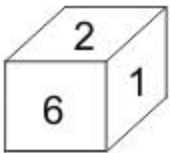
2)



3)



4)



Correct Answer:

QID : 49 -

A word is represented by only one set of numbers as given in any one of the alternatives. The sets of numbers given in the alternatives are represented by two classes of alphabets as shown in the given two matrices. The columns and rows of **Matrix-I** are numbered from 0 to 4 and that of **Matrix-II** are numbered from 5 to 9. A letter from these matrices can be represented first by its row and next by its column, for example, 'Y' can be represented by 00, 22, etc., and 'U' can be represented by 42, 59, etc. Similarly, you have to identify the set for the word "**PARK**".

एक शब्द केवल एक संख्या-समूह द्वारा दर्शाया गया है, जैसा कि विकल्पों में से किसी एक में दिया गया है। विकल्पों में दिए गए संख्या-समूह अक्षरों के दो वर्गों द्वारा दर्शाए गए हैं, जैसा कि दिए गए दो आव्यूहों में है। **आव्यूह-I** के स्तम्भ और पंक्ति की संख्या 0 से 4 है और **आव्यूह-II** की 5 से 9। इन आव्यूहों से एक अक्षर को पहले उसकी पंक्ति और बाद में स्तम्भ संख्या द्वारा दर्शाया जा सकता है। उदाहरण के लिए 'Y' को 00, 22 आदि द्वारा दर्शाया जा सकता है तथा 'U' को 42, 59, आदि द्वारा दर्शाया जा सकता है। इसी तरह से आपको प्रश्न में दिए शब्द "**PARK**" के लिए समूह को पहचानना है।

Matrix-I आव्यूह-I					
	0	1	2	3	4
0	Y	I	K	W	X
1	G	J	N	H	V
2	E	O	Y	K	T
3	M	G	W	L	R
4	A	E	U	N	K

Matrix-II आव्यूह-II					
	5	6	7	8	9
5	N	I	X	P	U
6	K	V	O	T	S
7	L	P	R	A	D
8	O	H	J	L	N
9	P	J	Q	V	X

Options:

- 1) 58, 40, 86, 34
- 2) 76, 55, 89, 23
- 3) 23, 78, 34, 02
- 4) 95, 40, 77, 65

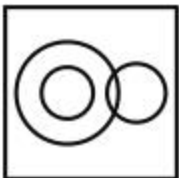
Correct Answer: 95, 40, 77, 65

QID : 50 - Identify the diagram that best represents the relationship among the given classes.

Vegetables, Onion, Eatables

Options:

- 1)



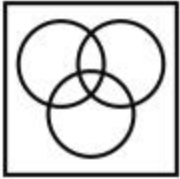
- 2)



3)



4)



Correct Answer:



SSC EXAMS PRINTED STUDY NOTES

Study Material for SSC CGL (Tier-1) Examination	English	CLICK HERE
Study Kit for SSC CGL (Tier-2) Exam	English	CLICK HERE
Study Kit for SSC CHSL (10+2) Examination	English	CLICK HERE
Study Kit for SSC Stenographers (Grade 'C' & 'D')	English	CLICK HERE
Study Kit for Multitasking (Non-Technical) - MTS	English	CLICK HERE
Study Kit for SSC Constables (GD) Exam	English	CLICK HERE
Study Kit For SSC Sub-Inspectors in Delhi Police, CAPFs, CISF	English	CLICK HERE
Study Kit for SSC Junior Engineer Exam (Paper-1)	English	CLICK HERE
IAS EXAMS STUDY MATERIALS		
Study Kit for IAS (Pre) GENERAL STUDIES Paper-1 (GS)	English	CLICK HERE
Study Kit for IAS (Pre) CSAT Paper-2(Aptitude)	English	CLICK HERE
सामान्य अध्ययन (GS) प्रारंभिक परीक्षा (Pre) पेपर-1	हिन्दी	CLICK HERE
आई. ए. एस. (सी-सैट) प्रारंभिक परीक्षा पेपर -2	हिन्दी	CLICK HERE
Gist of NCERT Study Kit For UPSC Exams	English	CLICK HERE
यूपीएससी परीक्षा के लिए एनसीईआरटी अध्ययन सामग्री	हिन्दी	CLICK HERE