

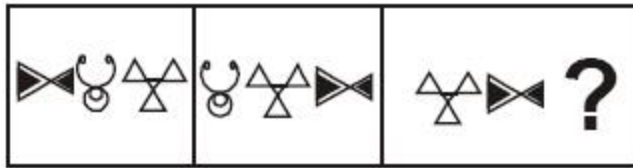


## SSC Multi-Tasking Staff (Non Technical) Exam Mock Test -6 (Reasoning)

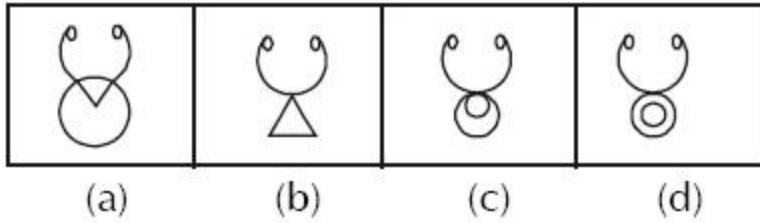
---

**Directions:** Find the missing figure in the series from the given answer figures.

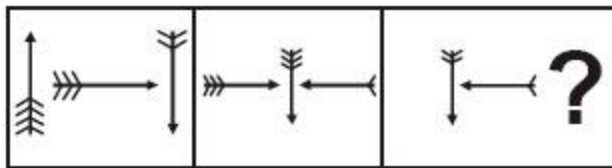
### 1. Question Figures



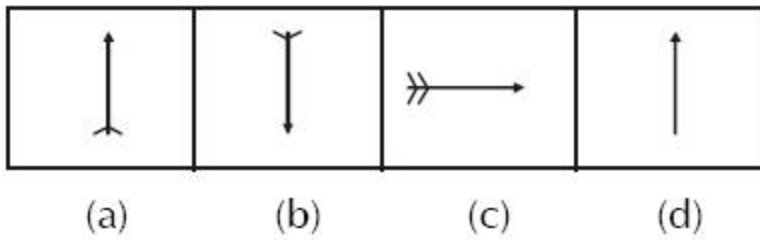
### Answer Figures



### 2. Question Figures

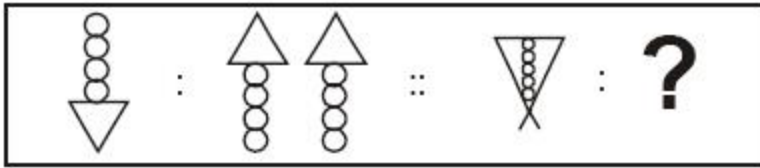


### Answer Figures

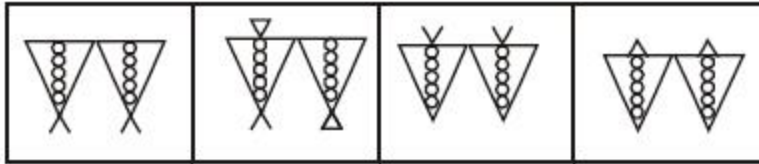


**Directions:** Select the related figure from the answer figures.

### 3. Question Figures



### Answer Figures



(a)

(b)

(c)

(d)

4. If '+' stands for division, '÷' stands for multiplication, 'x' stands for subtraction and '-' stands for addition, which one of the following is correct?

- (a)  $18 \div 6 - 7 + 5 \times 2 = 20$
- (b)  $18 + 6 \div 7 \times 5 - 2 = 18$
- (c)  $18 \times 6 \div 7 + 5 - 2 = 16$
- (d)  $18 \div 6 \times 7 + 5 - 2 = 22$

5. If '-' stands for division, '+' for multiplication, '÷' for subtraction and 'x' for addition, which one of the following equations is correct?

- (a)  $18 \div 3 \times 2 + 8 - 6 = 10$
- (b)  $18 - 3 + 2 \times 8 \div 6 = 14$
- (c)  $18 - 3 \div 2 \times 8 + 6 = 17$
- (d)  $18 \times 3 + 2 \div 8 - 6 = 15$

6. If  $324 \times 150 = 54$ ,  $251 \times 402 = 48$  and  $523 \times 246 = 120$  then  $651 \times 345 = ?$

- (a) 120
- (b) 85
- (c) 144
- (d) 60

7. Some equations are solved on the basis of certain system. Find out the correct answer for the unsolved equation on that basis. If  $12 \times 7 = 408$  and  $9 \times 8 = 207$  then  $13 \times 7 = ?$

- (a) 190
- (b) 91
- (c) 901
- (d) 109

**8. If NOIDA is written as STNIF, how MEERUT can be written in that code?**

- (a) QIIVYX
- (b) RJJWZV
- (c) RJJWZY
- (d) RIIVYX

**9. In a certain code FORGET is written as DPPHCU, how would DOCTOR be written in that code?**

- (a) BPAUMS
- (b) BPAUPS
- (c) EMDRPP
- (d) BPARPP

**10. In a certain code DECEMBER is written as ERMBCEDE, in that code which word will be written as ERMBVENO ?**

- (a) SEPTEMBER
- (b) AUGUST
- (c) NOVEMBER
- (d) OCTOBER

**11. If RED is coded as 6720, then how GREEN would be coded?**

- (a) 9207716
- (b) 1677199
- (c) 1677209
- (d) 16717209

**12. If 9th of the month falls on the day preceding Sunday, on what day will 1st of the month fall?**

- (a) Friday
- (b) Saturday
- (c) Sunday
- (d) Monday

**13. Average marks obtained by 9 students in one row of a class is 45. One student with 35 marks exchanges his seat with a student securing 48 marks. What is the average marks of these 9 students of this row?**

- (a) 56.4
- (b) 46.4
- (c) 47.6
- (d) 45.6

**14. Kamu walks 5 kms straight from her house towards west then turns right and walks 3 kms. There after she takes left turn and walks 2 km. Further, she turns left and walks 3 km. Finally, she turns right and walks 3 kms. In what direction she is now from her house?**

- (a) West
- (b) North
- (c) South
- (d) East

**Directions:** In the following question a statement is followed by four inferences. Select the one which is most appropriate.

**15. Statement: In the university examination most of the candidates write in Hindi medium.**

**Inferences**

- (a) All the candidates who appear in this examination write answers in Hindi.
- (b) In this examination no candidate writes answers other than in Hindi.
- (c) Mostly candidates with Hindi medium appear in this examination.
- (d) Some candidates of this examination write in Hindi.

**Directions:** In the following questions a word is followed by 4 other words, one of which cannot be formed by using the letters of the given word. Find this word.

**16. PROSPECTIVE**

- (a) PEPTIC
- (b) PEPPER
- (c) VECTOR
- (d) RESET

**17. APPROXIMATELY**


- (a) APEX
- (b) APPRISE
- (c) APPROXIMATE
- (d) APRIL

**Directions: Which of the answer figures is exactly the mirror image of the given figure when the mirror is held at PQ?**



## Printed Study Kit for MTS (Non-Technical) Exam

- 100% Syllabus Covered
- 5 Booklets
- 1200+ Pages
- 5500+ MCQs



[Click Here for More Details](#)

### What you will get:

- 100% Syllabus Covered
- 5 Booklets
- 1,200+ Pages
- 5,600+ MCQs
- Five Practice Papers
- One Year Current Affairs
- Guidance & Support from Our Experts

Price of the Kit:

~~Rs. 6,000~~

**Rs. 2,999/-**  
(Limited time Offer)



Net Banking

[FOR MORE DETAILS CLICK HERE](#)

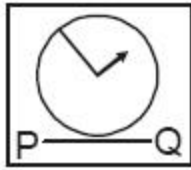
[Order Online \(100% Safe\)](#)

[Click here for Other Payment Options \(Cash/NEFT/etc\)](#)

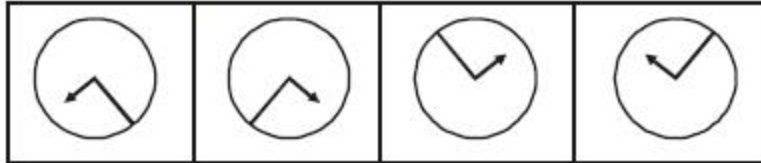
**50%  
OFF**

[CLICK HERE](#)

18. Question Figure



Answer Figures



(a)

(b)

(c)

(d)

19. Amit travelled 15 kms. eastward, then turned left and travelled 5 kms, then turned left and travelled 15 kms. How far was Amit from the starting point?

- (a) 30 kms.
- (b) 35 kms.
- (c) 15 kms.
- (d) 5 kms.

20. At 12.30 the hour hand of a clock faces North and the minute hand faces South. At 2.45 the minute hand will be in which direction?

- (a) North-West
- (b) West
- (c) South-East
- (d) East

**Directions:** Find the missing number from the given responses.

21.

20160	4
?	4
480	8
96	24

- (a) 860
- (b) 1140

(c) 2880

(d) 3240

22.

$$\begin{array}{ccc}
 \begin{array}{c} 3 \\ 5 \boxed{12} 4 \\ 2 \end{array} & \begin{array}{c} 6 \\ 5 \boxed{18} 2 \\ 3 \end{array} & \begin{array}{c} 2 \\ 5 \boxed{?} 2 \\ 9 \end{array}
 \end{array}$$

(a) 15

(b) 18

(c) 17

(d) 16

23. The trend results are shown at the end of each column. Find out the figure against the missing number.

9	8	7
6	7	8
5	4	?
270	224	336

(a) 9

(b) 6

(c) 7

(d) 5

24. In the question given below the numbers given at the top follow a certain specific pattern. Study out the pattern and find out the missing number.

9	4	20
8	5	12
7	6	?

(a) 2

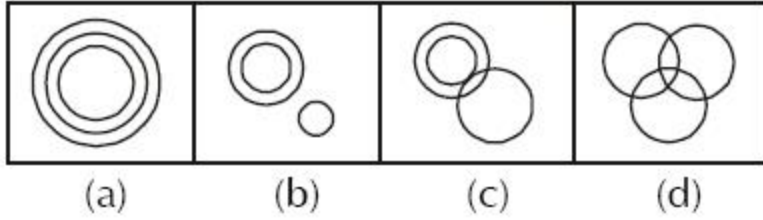
(b) 4

(c) 6

(d) 9



25. Which figure represents Rhombus, Quadrilaterals, Polygons?





# SSC EXAMS PRINTED STUDY NOTES

<a href="#">Study Material for SSC CGL (Tier-1) Examination</a>	<a href="#">English</a>	<a href="#">CLICK HERE</a>
<a href="#">Study Kit for SSC CGL (Tier-2) Exam</a>	<a href="#">English</a>	<a href="#">CLICK HERE</a>
<a href="#">Study Kit for SSC CHSL (10+2) Examination</a>	<a href="#">English</a>	<a href="#">CLICK HERE</a>
<a href="#">Study Kit for SSC Stenographers (Grade 'C' &amp; 'D')</a>	<a href="#">English</a>	<a href="#">CLICK HERE</a>
<a href="#">Study Kit for Multitasking (Non-Technical) - MTS</a>	<a href="#">English</a>	<a href="#">CLICK HERE</a>
<a href="#">Study Kit for SSC Constables (GD) Exam</a>	<a href="#">English</a>	<a href="#">CLICK HERE</a>
<a href="#">Study Kit For SSC Sub-Inspectors in Delhi Police, CAPFs, CISF</a>	<a href="#">English</a>	<a href="#">CLICK HERE</a>
<a href="#">Study Kit for SSC Junior Engineer Exam (Paper-1)</a>	<a href="#">English</a>	<a href="#">CLICK HERE</a>
<b>IAS EXAMS STUDY MATERIALS</b>		
<a href="#">Study Kit for IAS (Pre) GENERAL STUDIES Paper-1 (GS)</a>	<a href="#">English</a>	<a href="#">CLICK HERE</a>
<a href="#">Study Kit for IAS (Pre) CSAT Paper-2(Aptitude)</a>	<a href="#">English</a>	<a href="#">CLICK HERE</a>
<a href="#">सामान्य अध्ययन (GS) प्रारंभिक परीक्षा (Pre) पेपर-1</a>	<a href="#">हिन्दी</a>	<a href="#">CLICK HERE</a>
<a href="#">आई. ए. एस. (सी-सैट) प्रारंभिक परीक्षा पेपर -2</a>	<a href="#">हिन्दी</a>	<a href="#">CLICK HERE</a>
<a href="#">Gist of NCERT Study Kit For UPSC Exams</a>	<a href="#">English</a>	<a href="#">CLICK HERE</a>
<a href="#">यूपीएससी परीक्षा के लिए एनसीईआरटी अध्ययन सामग्री</a>	<a href="#">हिन्दी</a>	<a href="#">CLICK HERE</a>