



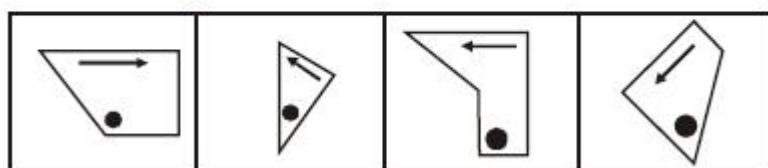
## SSC Multi-Tasking Staff (Non Technical) Exam Mock Test -4 (Reasoning)

Direction: Select the related figure form the Answer Figure.

### Question Figures



### Answer Figures



(a)

(b)

(c)

(d)

2. Which of the following word pair is not related in the same way as 'Returnable' and 'Natural'?

- (a) Reciprocal and Oracle
- (b) Reconstruct and Counter
- (c) Department and Moderate
- (d) Evaluation and Violent

Directions: Find the odd one out from the given alternatives.

- 3. (a) Pond-Lake
- (b) Pistol-Gun

- (c) Car-Bus
- (d) Church-Monument

4. (a) Insurance

(b) Provident Fund

(c) Salary

(d) Shares

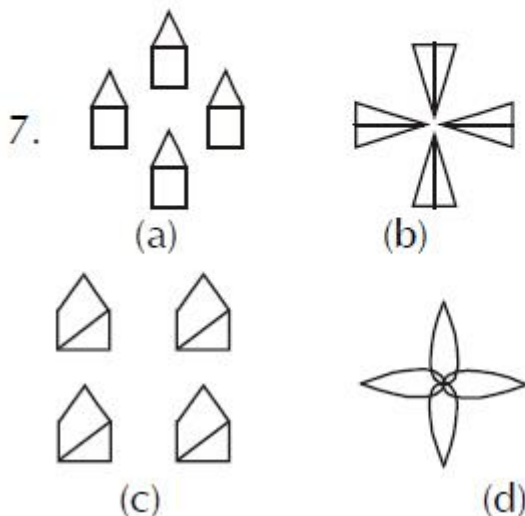
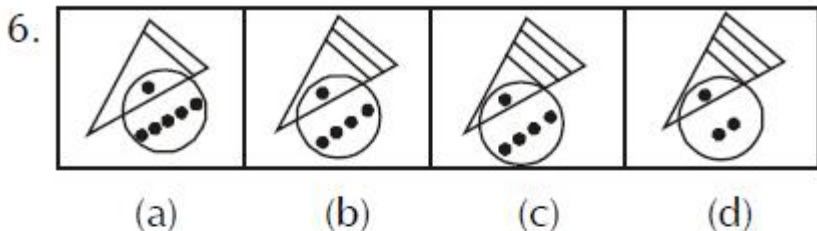
5. (a) AYBZ

(b) BXCY

(c) DVEW

(d) MPON

**Directions: Find the odd figure out.**



**8. Find out the pair of number that does not belong to the group for lack of common property.**

(a) 84,67

(b) 112,95

(c) 79,63

(d) 167,150

**Directions: From the given alternatives select the one in which the set of numbers is most like the set of numbers given in the question.**

**Given set:** (1,3,7) 34.

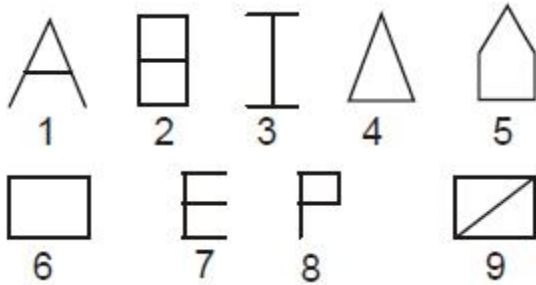
- (a) 3, 7, 11
- (b) 13, 17, 29
- (c) 17, 21, 29
- (d) 29, 37, 47

**Directions:** From among the given alternatives select the one in which the set of numbers is most like the set of numbers given in the question.

**Given set:** (21, 30, 48)

9. (a) (8, 14, 25)  
(b) (9, 18, 36)  
(c) (13, 20, 30)  
(d) (6, 14, 21)

**10. A series of figures are given which can be grouped into classes. Select the group into which the figures can be classified.**



- (a) 1,3,4 2,5,9 6,7,8
- (b) 1,2,3 4,5,6 7,8,9
- (c) 1,5,9 2,4,7 3,6,8
- (d) 3,7,8 1,6,5 4,2,9

---

**11. Which one of the given responses would be a meaningful order of the following?**

- 1. Probation
  - 2. Interview
  - 3. Selection
  - 4. Appointment
  - 5. Advertisement
  - 6. Application
- (a) 5, 6, 4, 2, 3, 1
  - (b) 5, 6, 3, 2, 4, 1

(c) 5, 6, 2, 3, 4, 1

(d) 6, 5, 4, 2, 3, 1

**Directions:** Which one set of letters when sequentially placed at the gaps in the given letter series shall complete it.

**12. BE-K-Q; BB-EHH-KNNQQ**

(a) DLEK

(b) HNEK

(c) DLCJ

(d) HNCJ

**Directions:** Find the missing number in the series.

**13. 1,0,3,2,5,6, ?**

(a) 9

(b) 8

(c) 10

(d) 7

**14. 1438, 1429, 1417,1402, ?**

(a) 1378

(b) 1384

(c) 1,387

(d) 1392

**15. 18, 24, 21, 27, ?, 30, 27**

(a) 33

(b) 30

(c) 24

(d) 21

**Directions:** Find the missing figure in the series from the given answer figures.

**17. Problem Figures**



**Answer Figures**



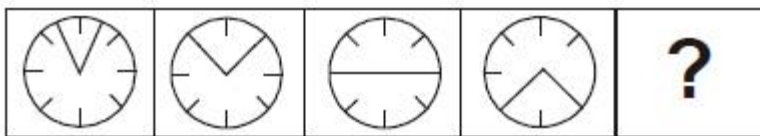
(a)

(b)

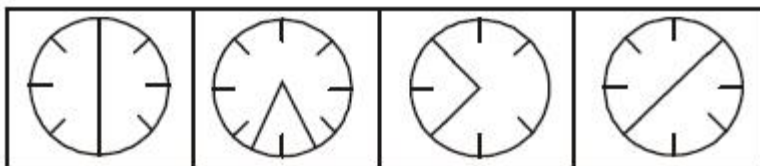
(c)

(d)

**18. Problem Figures**



**Answer Figures**



(a)

(b)

(c)

(d)

**19. 'A' man starts from a point and walks 2km towards North, turns towards his right and walks 2km, turns right again and walks. What is the direction now he is facing ?**

- (a) South
- (b) South-East
- (c) North
- (d) West

**20. P is Q's brother. R is Q's mother. S is R's father. T is S's mother. How is P relate to T?**

- (a) Grand daughter
- (b) Great grandson



## Printed Study Kit for MTS (Non-Technical) Exam

- 100% Syllabus Covered
- 5 Booklets
- 1200+ Pages
- 5500+ MCQs

FREE  
Shipping



 [Click Here for More Details](#)

### What you will get:

- 100% Syllabus Covered
- 5 Booklets
- 1,200+ Pages
- 5,600+ MCQs
- Five Practice Papers
- One Year Current Affairs
- Guidance & Support from Our Experts

Price of the Kit:

~~Rs. 6,000~~

**Rs. 2,999/-**  
(Limited time Offer)



Net Banking

**[FOR MORE DETAILS CLICK HERE](#)**

**[Order Online \(100% Safe\)](#)**

**[Click here for Other Payment Options \(Cash/NEFT/etc\)](#)**

**50%  
OFF**

**CLICK HERE**

- (c) Grandson
- (d) Grandmother

**21. If ,you are eleventh in a queue staring either end, how many are there in the queue ?**

- (a) Eleven
- (b) Twenty
- (c) Twenty one
- (d) Twenty two

**22. Six toys are quite identical to look at, but only one of them is less in weight. It is to be identified' using the balance minimum number of times. What is that minimum number of using the balance ?**

- (a) Once
- (b) 2 times
- (c) 3 times
- (d) More than 3 times

**23. If C = 3 and FEAR is coded as 30, then what will be the code number for HAIR ?**

- (a) 35
- (b) 36
- (c) 30
- (d) 33

**24. If Z = 26, NET = 39, then NUT=?**

- (a) 50
- (b) 53
- (c) 55
- (d) 56

**25. If F = 6, MAT = 34, then how much is CAR ?**

- (a) 21
- (b) 22
- (c) 25
- (d) 28



# SSC EXAMS PRINTED STUDY NOTES

<a href="#">Study Material for SSC CGL (Tier-1) Examination</a>	<a href="#">English</a>	<a href="#">CLICK HERE</a>
<a href="#">Study Kit for SSC CGL (Tier-2) Exam</a>	<a href="#">English</a>	<a href="#">CLICK HERE</a>
<a href="#">Study Kit for SSC CHSL (10+2) Examination</a>	<a href="#">English</a>	<a href="#">CLICK HERE</a>
<a href="#">Study Kit for SSC Stenographers (Grade 'C' &amp; 'D')</a>	<a href="#">English</a>	<a href="#">CLICK HERE</a>
<a href="#">Study Kit for Multitasking (Non-Technical) - MTS</a>	<a href="#">English</a>	<a href="#">CLICK HERE</a>
<a href="#">Study Kit for SSC Constables (GD) Exam</a>	<a href="#">English</a>	<a href="#">CLICK HERE</a>
<a href="#">Study Kit For SSC Sub-Inspectors in Delhi Police, CAPFs, CISF</a>	<a href="#">English</a>	<a href="#">CLICK HERE</a>
<a href="#">Study Kit for SSC Junior Engineer Exam (Paper-1)</a>	<a href="#">English</a>	<a href="#">CLICK HERE</a>
<b>IAS EXAMS STUDY MATERIALS</b>		
<a href="#">Study Kit for IAS (Pre) GENERAL STUDIES Paper-1 (GS)</a>	<a href="#">English</a>	<a href="#">CLICK HERE</a>
<a href="#">Study Kit for IAS (Pre) CSAT Paper-2(Aptitude)</a>	<a href="#">English</a>	<a href="#">CLICK HERE</a>
<a href="#">सामान्य अध्ययन (GS) प्रारंभिक परीक्षा (Pre) पेपर-1</a>	<a href="#">हिन्दी</a>	<a href="#">CLICK HERE</a>
<a href="#">आई. ए. एस. (सी-सैट) प्रारंभिक परीक्षा पेपर -2</a>	<a href="#">हिन्दी</a>	<a href="#">CLICK HERE</a>
<a href="#">Gist of NCERT Study Kit For UPSC Exams</a>	<a href="#">English</a>	<a href="#">CLICK HERE</a>
<a href="#">यूपीएससी परीक्षा के लिए एनसीईआरटी अध्ययन सामग्री</a>	<a href="#">हिन्दी</a>	<a href="#">CLICK HERE</a>