



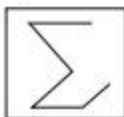
SSC Multi-Tasking Staff (Non Technical) Exam Mock Test -3 (Reasoning)

1. If CONSCIOUSLY is written as PEBNPJEXNKM, then SOIL is written as

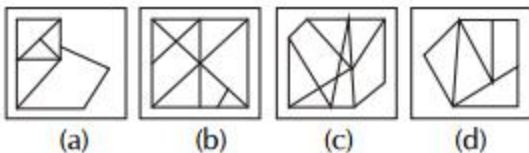
- (a) NEKJ
- (b) NEJK
- (b) JENK
- (d) ENJK

Directions: In which answer figure is the question figure embedded ?

2. Question Figure



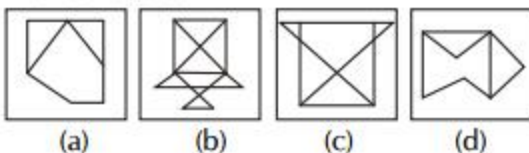
Answer Figures



3. Question Figure



Answer Figures



Directions : A conclusion followed by statements I, II and III is given. Which one of the four alternatives is correct ?

4. Conclusion: Many drug addicts were arrested

Statements:

I. Taking drugs is a crime.

II. One who commits a crime can be arrested

III. Many people take drugs regularly.

(a) All the 3 statements taken together brings to the conclusion.

(b) Only I and II statements bring to the

Conclusion.

(c) Only II and III bring to the conclusion.

(d) Data is insufficient to draw the conclusion.

Directions : A statement followed by two assumptions I and II is given. Which one of the four given alternatives is correct ?

5. Statement:

One should not sleep under a tree.

Assumptions:

I. The falling leaves may spoil our clothes.

II. Trees give out CO₂ at night which is injurious to health.

(a) Only I is implicit

(b) Only II is implicit

(c) Both I and II are implicit

(d) Neither I nor II is implicit

Directions : A question is followed by two statements I and II. Which one of the four given alternatives is correct ?

6. Has Electronic media improved the class room teaching ?

Statements:

I. Electronic media is multisensory based.

II. TV lessons supplement the class-room teaching.

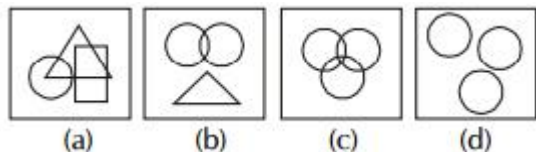
(a) Only I is implicit

(b) Only II is implicit

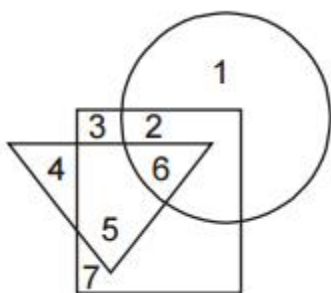
(c) Both I and II are implicit

(d) Neither I nor II is implicit

7. Which of the following Venn Diagram gives the relationship between Friend, Guide and Philosopher?



8. When a survey was made regarding the preferences in the watching of TV channel, a few said that they watch only ZTV channel, the others liked only Sun TV channel, while others Asianet TV Channel. A Small percentage said that they watch all the three TV channel. In the figure given below the circle indicates the Asianet TV channel, the square ZTV and the triangle the Sun TV channel. Which number in the figure indicates the fact that some people watch all the three TV channels?

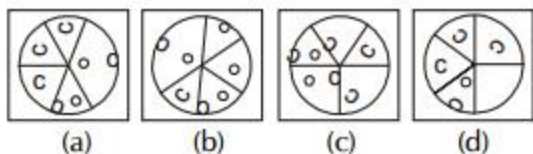


9. Among the four answer figures which one can be formed from the cut out pieces given below?

Question Figure

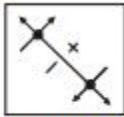


Answer Figure

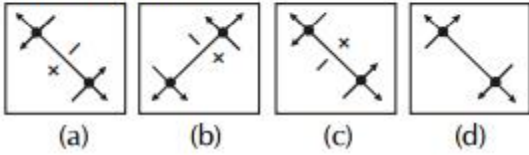


10. Choose the correct image of the figure when seen in water from the responses given below

Question Figure



Answer Figures

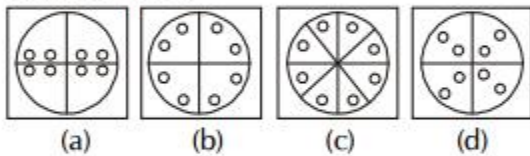


11. A circular paper is folded and punched as shown below. How will it appear when opened?

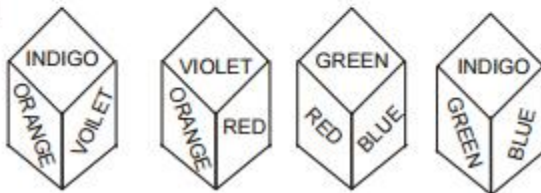
Question Figures



Answer Figures



12.



- (a) Indigo
- (b) Blue
- (c) Violet
- (d) Orange

Direction: Find the missing number from the given responses in each of the following questions?

13.

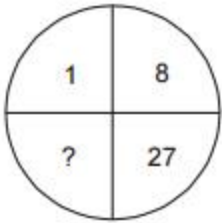
4	9	2
3	5	7
8	1	?

- (a) 9
- (b) 6

(c) 15

(d) 14

14.



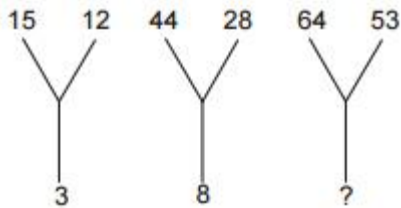
(a) 41

(b) 64

(c) 35

(d) 61

15.



(a) 30

(b) 13

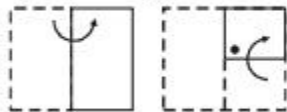
(c) 70

(d) 118


Direction: A paper is folded as shown in the given figures and a hole is made. When opened how will it appear. Choose from the given responses.

16.

Question Figures



Answer Figures



(a)

(b)

(c)

(d)



Printed Study Kit for MTS (Non-Technical) Exam

- 100% Syllabus Covered
- 5 Booklets
- 1200+ Pages
- 5500+ MCQs



[Click Here for More Details](#)

What you will get:

- 100% Syllabus Covered
- 5 Booklets
- 1,200+ Pages
- 5,600+ MCQs
- Five Practice Papers
- One Year Current Affairs
- Guidance & Support from Our Experts

Price of the Kit:

~~Rs. 6,000~~

Rs. 2,999/-
(Limited time Offer)



Net Banking

[FOR MORE DETAILS CLICK HERE](#)

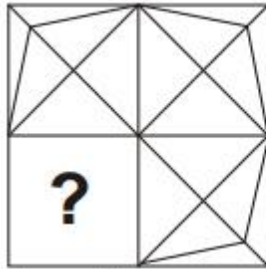
[Order Online \(100% Safe\)](#)

[Click here for Other Payment Options \(Cash/NEFT/etc\)](#)

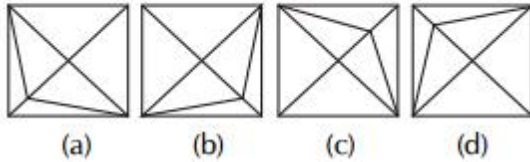
**50%
OFF**

[CLICK HERE](#)

17. Question Figure

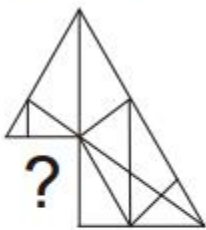


Answer Figures

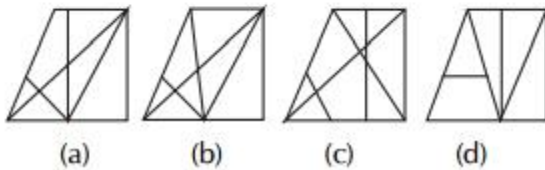


18.

. Question Figure



Answer Figure



Direction: From the given alternatives, find the word which cannot be formed from the letters used in the given word.

19. INSTITUTIONALISE

- (a) NATRITION
- (b) INTUITION
- (c) TUITION
- (d) INSULATION

Direction: Find the related word/letters/numbers to complete the Analogy.

20. House : Room : : World : ?

- (a) Land
- (b) Sun

(c) Air

(d) Nation

21. **A D H M : Z W S N : C F J O : ?**

(a) YVRM

(b) WTPO

(c) XWTP

(d) ZXVT

22. **5 : 36 :: 6 : ?**

(a) 48

(b) 50

(c) 49

(d) 56

23. **456 : 15 :: 789 : ?**

(a) 15

(b) 16

(c) 18

(d) 24

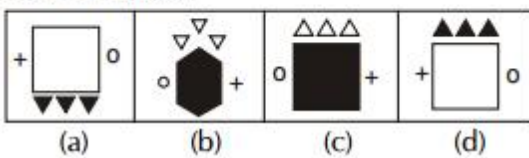
Direction: Select the related figure form the Answer Figure.

24.

Question Figures



Answer Figures

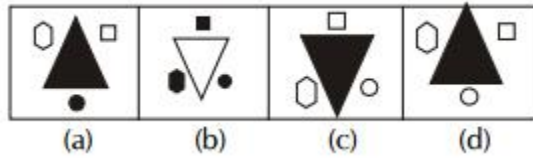


25.

Question Figures



Answer Figures





SSC EXAMS PRINTED STUDY NOTES

Study Material for SSC CGL (Tier-1) Examination	English	CLICK HERE
Study Kit for SSC CGL (Tier-2) Exam	English	CLICK HERE
Study Kit for SSC CHSL (10+2) Examination	English	CLICK HERE
Study Kit for SSC Stenographers (Grade 'C' & 'D')	English	CLICK HERE
Study Kit for Multitasking (Non-Technical) - MTS	English	CLICK HERE
Study Kit for SSC Constables (GD) Exam	English	CLICK HERE
Study Kit For SSC Sub-Inspectors in Delhi Police, CAPFs, CISF	English	CLICK HERE
Study Kit for SSC Junior Engineer Exam (Paper-1)	English	CLICK HERE
IAS EXAMS STUDY MATERIALS		
Study Kit for IAS (Pre) GENERAL STUDIES Paper-1 (GS)	English	CLICK HERE
Study Kit for IAS (Pre) CSAT Paper-2(Aptitude)	English	CLICK HERE
सामान्य अध्ययन (GS) प्रारंभिक परीक्षा (Pre) पेपर-1	हिन्दी	CLICK HERE
आई. ए. एस. (सी-सैट) प्रारंभिक परीक्षा पेपर -2	हिन्दी	CLICK HERE
Gist of NCERT Study Kit For UPSC Exams	English	CLICK HERE
यूपीएससी परीक्षा के लिए एनसीईआरटी अध्ययन सामग्री	हिन्दी	CLICK HERE