



SSC Multi-Tasking Staff (Non Technical) Exam Mock Test -1 (Reasoning)

Directions : A statement followed by two assumptions I & II is given. Which one of the four given alternatives is correct ?

Statement : Imprisonment for 27 years made Nelson Mandela The President.

Assumptions :

- I. One who will be imprisoned for 27 years will become The President
- II. To become The President imprisonment is a qualification.

- (a) Only I is implicit.
- (b) Only II is implicit.
- (c) Both I & II are implicit.
- (d) Neither I nor II is implicit.

2. From the given alternative words, select the word which cannot be formed using the letters of the given word.

CONVERSATION

- (a) Nation
- (b) Version
- (c) Station
- (d) Reason

3. A word is given in capital letters. It is followed by four words. Out of these four words, three cannot be formed from the letters of the word in capital letters. Point out the word which can be formed from the letters of the given word in capital letters.

PREMONITION

(a) ACTION (b) NATION

(c) MONITOR (d) REMOVE

4. If A = 1, FAT = 27, then FAITH = ?

(a) 44

(b) 42

(c) 41

(d) 40

5. If the word 'STOVE' can be written as 'FNBLK', how can the word 'VOTES' be written in that code?

(a) LBNKF

(b) LNBKF

(c) LKNBF

(d) FLKBN

6. If 'PAPER' is written as 'OZODQ', how 'PENCIL' can be written in that code ?

(a) QFODJM

(b) OFOBHM

(c) ODMDJM

(d) ODMBHK

7. There are five friends-S, K, M, A, R. S is shorter than K, but taller than R. M is the tallest. A is a little shorter than K and little taller than S. Who has two persons taller and two persons shorter than him ?

(a) R

(b) S

(c) K

(d) A

8. Rajiv is the brother of Atul. Sonia is the sister of Sunil. Atul is the son of Sonia. How is Rajiv related to Sonia ?

(a) Nephew

(b) Son

(c) Brother

(d) Father

9. Of the five members of a panel sitting in a row, A is to the left of B, but on the right of C, D is on the right of B but is on the left of E. Find the member who is sitting in the middle.

- (a) B
- (b) D
- (c) A
- (d) C

10. There are some boys and dogs at a place. If total number of heads is 7 and total number of legs is 20, how many boys and how many dogs are there?

- (a) 2 boys and 5 dogs
- (b) 3 boys and 4 dogs
- (c) 4 boys and 3 dogs
- (d) 5 boys and 2 dogs

11. P, Q & R are educated, P, R & S are hard working, R, S & T are employed, P, Q, S & T are polite. Who is educated, hardworking, polite but not employed ?

- (a) P
- (b) Q
- (c) R
- (d) T

12. Rama travels 10 km towards the north, turns left and travels 4 km and then again turns right and covers another 5 km and then turns right and travels another 4 km. How far is he from the starting point ?

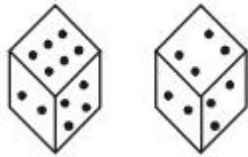
- (a) 5 km.
- (b) 10 km.
- (c) 15 km.
- (d) 19 km.

13. A man starts from a point, walks 2 km towards north, turns towards his right and walks 2 km, turns right again and walks. What is the direction now he is facing ?

- (a) South
- (b) East
- (c) North
- (d) West

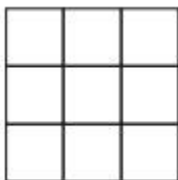
Directions: Study the two different positions of a cube given below with dots from 1 to 6 marked on its faces. When 3 is at the bottom, what will be at the top ?

14.



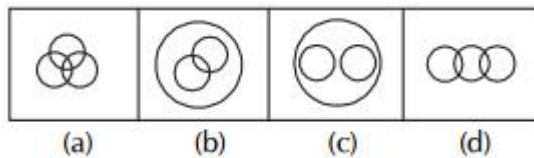
- (a) 2
- (b) 3
- (c) 4
- (d) 6

15. The maximum number of squares in the given figure is:

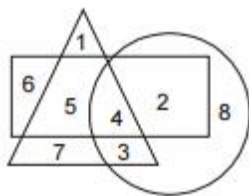


- (a) 9
- (b) 10
- (c) 13
- (d) 14

16. Which one of the following figures represents family, sons and daughters ?



17. Which number is in all the geometrical figure?



- (a) 8
- (b) 3
- (c) 4
- (d) 5

18. Which on of the answer figures shall complete the given question figure:



Printed Study Kit for MTS (Non-Technical) Exam

- 100% Syllabus Covered
- 5 Booklets
- 1200+ Pages
- 5500+ MCQs

FREE
Delivery



 [Click Here for More Details](#)

What you will get:

- 100% Syllabus Covered
- 5 Booklets
- 1,200+ Pages
- 5,600+ MCQs
- Five Practice Papers
- One Year Current Affairs
- Guidance & Support from Our Experts

Price of the Kit:

~~Rs. 6,000~~

Rs. 2,999/-
(Limited time Offer)



Net Banking

[FOR MORE DETAILS CLICK HERE](#)

[Order Online \(100% Safe\)](#)

[Click here for Other Payment Options \(Cash/NEFT/etc\)](#)

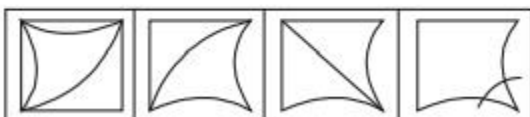
**50%
OFF**

CLICK HERE

Question Figure



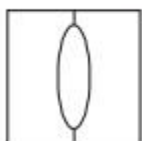
Answer Figures



(a) (b) (c) (d)

19. From the given answer figures, select the one in which the question figure is hidden embedded.

Question Figures



Answer Figures



(a) (b) (c) (d)

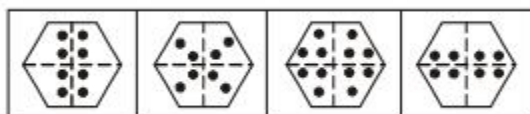
Direction: In question no 20, a piece of paper is folded and punched as shown below. From the given responses indicate how it will appear when opened.

20.

Question Figure



Answer Figure



(a) (b) (c) (d)

Directions (21-25): In the following questions select the related letters/ word / number/figure from the given alternatives.

21. Mother : Child : Cloud : ?

- (a) Shine
- (b) Water
- (c) Rain
- (d) Weather

22. Mountain : Hill :: Tree : ?

- (a) Forest
- (b) Shrub
- (c) Leaf
- (d) Ground

23. ADBC : WZXY :: EHFG : ?

- (a) STUV
- (b) TUSV
- (c) STVU
- (d) SVTU

24. JLNP : OMKI :: SUWY : ?

- (a) MLKJ
- (b) PLHD
- (c) XVTR
- (d) FGHI

25. 42 : 56 :: 72 : ?

- (a) 81
- (b) 90
- (c) 92
- (d) 100



SSC EXAMS PRINTED STUDY NOTES

Study Material for SSC CGL (Tier-1) Examination	English	CLICK HERE
Study Kit for SSC CGL (Tier-2) Exam	English	CLICK HERE
Study Kit for SSC CHSL (10+2) Examination	English	CLICK HERE
Study Kit for SSC Stenographers (Grade 'C' & 'D')	English	CLICK HERE
Study Kit for Multitasking (Non-Technical) - MTS	English	CLICK HERE
Study Kit for SSC Constables (GD) Exam	English	CLICK HERE
Study Kit For SSC Sub-Inspectors in Delhi Police, CAPFs, CISF	English	CLICK HERE
Study Kit for SSC Junior Engineer Exam (Paper-1)	English	CLICK HERE
IAS EXAMS STUDY MATERIALS		
Study Kit for IAS (Pre) GENERAL STUDIES Paper-1 (GS)	English	CLICK HERE
Study Kit for IAS (Pre) CSAT Paper-2(Aptitude)	English	CLICK HERE
सामान्य अध्ययन (GS) प्रारंभिक परीक्षा (Pre) पेपर-1	हिन्दी	CLICK HERE
आई. ए. एस. (सी-सैट) प्रारंभिक परीक्षा पेपर -2	हिन्दी	CLICK HERE
Gist of NCERT Study Kit For UPSC Exams	English	CLICK HERE
यूपीएससी परीक्षा के लिए एनसीईआरटी अध्ययन सामग्री	हिन्दी	CLICK HERE