



**SSC MTS 2017 RE-EXAM PAPER : Held on 21-
SEPTEMBER-2017 Shift-3**

::General Intelligence & Reasoning::

QID : 201 -

In the following question, select the number which can be placed at the sign of question mark (?) from the given alternatives.

निम्नलिखित प्रश्न में दिए गए विकल्पों में से प्रश्न चिह्न (?) के स्थान पर आने वाली संख्या को चुनिए।

2	1	5
4	2	3
3	6	2
25	13	?

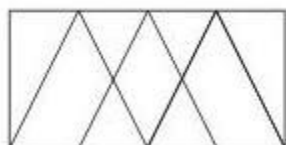
- 1) 16
- 2) 30
- 3) 31
- 4) 41

Correct Answer: 31

QID : 202 -

How many triangles are there in the given figure?

दी गई आकृति में कितने त्रिभुज हैं?



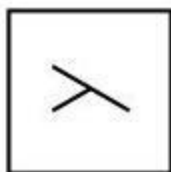
- 1) 8
- 2) 10
- 3) 12
- 4) 9

Correct Answer: 10

QID : 203 -

From the given answer figures, select the one in which the question figure is hidden/embedded.

दी गई उत्तर आकृतियों में से उस उत्तर आकृति को चुनिए जिस में प्रश्न आकृति निहित है।



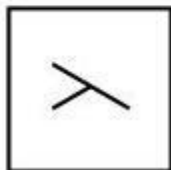
- 1) 00, 11, 32, 56, 76
- 2) 95, 67, 32, 56, 12
- 3) 00, 67, 78, 04, 76
- 4) 95, 11, 33, 55, 77

Correct Answer: 00, 67, 78, 04, 76

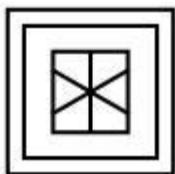
QID : 204 -

From the given answer figures, select the one in which the question figure is hidden/embedded.


दी गई उत्तर आकृतियों में से उस उत्तर आकृति को चुनिए जिस में प्रश्न आकृति निहित है।




1)




2)



3)



4)

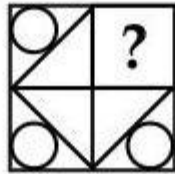


Correct Answer: 1

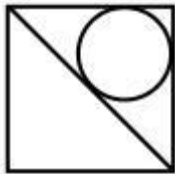
QID : 205 -

Which answer figure will complete the pattern in the question figure?

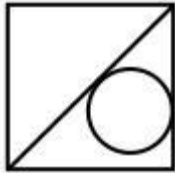
कौन सी उत्तर आकृति प्रश्न आकृति के प्रतिरूप को पूरा करेगी?



1)



2)



3)



4)

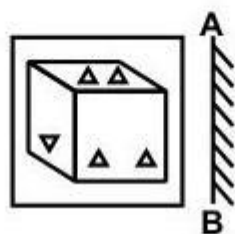


Correct Answer: 1

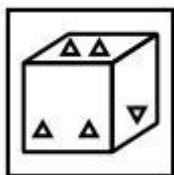
QID : 206 -

If a mirror is placed on the line AB, then which of the answer figures is the right image of the given figure?

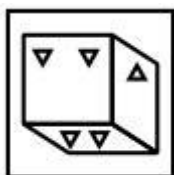
यदि एक दर्पण को AB रेखा पर रखा जाए, तो दी गई उत्तर आकृतियों में से कौन सी आकृति प्रश्न आकृति की सही प्रतिबिम्ब होगी?



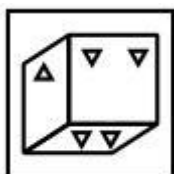
1)



2)



3)



4)



Correct Answer: 1



Printed Study Kit for MTS (Non-Technical) Exam

- 100% Syllabus Covered
- 5 Booklets
- 1200+ Pages
- 5500+ MCQs

FREE
Delivery



 [Click Here for More Details](#)

What you will get:

- 100% Syllabus Covered
- 5 Booklets
- 1,200+ Pages
- 5,600+ MCQs
- Five Practice Papers
- One Year Current Affairs
- Guidance & Support from Our Experts

Price of the Kit:

~~Rs. 6,000~~

Rs. 2,999/-
(Limited time Offer)



Net Banking

[FOR MORE DETAILS CLICK HERE](#)

[Order Online \(100% Safe\)](#)

[Click here for Other Payment Options \(Cash/NEFT/etc\)](#)

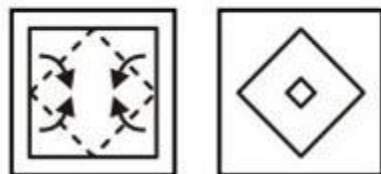
**50%
OFF**

CLICK HERE


QID : 207 -

A piece of paper is folded and punched as shown below in the question figures. From the given answer figures, indicate how it will appear when opened?


नीचे के प्रश्न आकृतियों में दिखाए अनुसार कागज को मोड़कर छेदने तथा खोलने के बाद वह किस उत्तर आकृति जैसा दिखाई देगा?



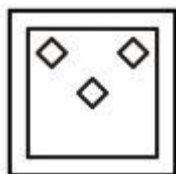
1)



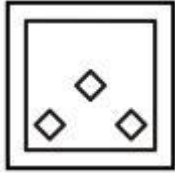
2)



3)



4)



Correct Answer: 2

QID : 208 - If 'A' means '+', 'B' means '-', 'C' means '×' and 'D' means '÷', then which of the following equation is true?

- 1) $12 \text{ D } 6 \text{ A } 4 \text{ C } 3 = 12$
- 2) $48 \text{ D } 3 \text{ C } 2 = 31$
- 3) $14 \text{ C } 2 \text{ D } 7 \text{ A } 3 = 6$
- 4) $24 \text{ C } 3 \text{ B } 14 = 58$

Correct Answer: 24 C 3 B 14 = 58

QID : 209 - If $9 \$ 4 = 17$ and $1 \$ 5 = 10$, then $3 \$ 6 = ?$

- 1) 11
- 2) 14
- 3) 13
- 4) 16

Correct Answer: 13

QID : 210 - Arrange the given words in the sequence in which they occur in the dictionary.

- 1. Book
- 2. Bread
- 3. Butter
- 4. Bayern
- 5. Bulb

- 1) 42135
- 2) 41253
- 3) 42153
- 4) 41235

Correct Answer: 41253

QID : 211 - In the following question, select the missing number from the given alternatives.

7, 26, ?, 124, 215, 342

- 1) 63
- 2) 65
- 3) 66
- 4) 67

Correct Answer: 63

QID : 212 - A series is given with one term missing. Select the correct alternative from the given ones that will complete the series.

A, D, I, P, ?

- 1) U
- 2) R
- 3) W
- 4) Y

Correct Answer: Y

QID : 213 - In the following question, select the odd word pair from the given alternatives.

- 1) Oxygen : Gas
- 2) Mercury : Gas
- 3) Gold : Metal
- 4) Uranium : Metal

Correct Answer: Mercury : Gas

QID : 214 - In the following question, select the odd number pair from the given alternatives.

- 1) 4 : 18
- 2) 7 : 51
- 3) 9 : 83
- 4) 6 : 34

Correct Answer: 6 : 34

QID : 215 - In the following question, select the odd letter from the given alternatives.

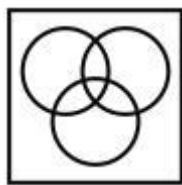
- 1) U
- 2) S
- 3) Q
- 4) G

Correct Answer: U

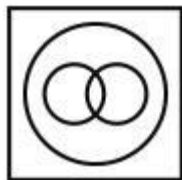
QID : 216 - Identify the diagram that best represents the relationship among the given classes.

Reptiles, Lizard, Lion

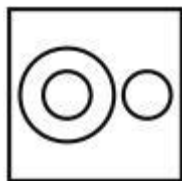
- 1)



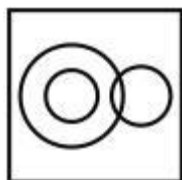
2)



3)



4)



Correct Answer: 3

QID : 217 - In the following question, select the related word from the given alternatives.

Saw : Carpenter : : Axe : ?

- 1) Ironsmith
- 2) Woodcutter
- 3) Cobbler
- 4) None of those

Correct Answer: Woodcutter

QID : 218 - In the following question, select the related number from the given alternatives.

8 : 27 : : 64 : ?

- 1) 190
- 2) 144
- 3) 125
- 4) 72

Correct Answer: 125

SSC Junior Engineer Exam Printed Study Kit



- 100% Syllabus Covered (Paper-1)
- 3 Books, 500+ Pages
- 2,000+ MCQs
- 5 Practice Tests (PDF Copy)
- 1 Year Current Affairs (PDF Copy)

50%
OFF

~~₹ 3,000/-~~
₹ 1,499/-

FREE
SHIPPING



[Click Here for More Details](#)

SSCPORTAL.IN

What you will get:

- 100% Syllabus Covered
- 5 Booklets (Paper-1)
- 520+ Pages
- 2,000+ MCQs
- Five Practice Papers
- One Year Current Affairs
- Guidance & Support from Our Experts

Price of the Kit:

~~Rs. 3,000~~

Rs. 1,499/-
(Limited time Offer)



Buy Online

VISA

Maestro

MasterCard

RuPay

Net Banking

FOR MORE DETAILS CLICK HERE

Order Online (100% Safe)

[Click here for Other Payment Options \(Cash/NEFT/etc\)](#)

**50%
OFF**

CLICK HERE

QID : 219 - In the following question, select the related letters from the given alternatives.

NP : HJ :: SY : ?

- 1) NT
- 2) MS
- 3) MT
- 4) NS

Correct Answer: MS

QID : 220 - In the following question, select the word which cannot be formed using the letters of the given word.

BILLIONAIRE

- 1) RANT
- 2) BONE
- 3) RAIN
- 4) LINE

Correct Answer: RANT

QID : 221 - The ratio of present ages of Raman and Lamba is 7 : 5. After 6 years age of Raman will be 48 years. What is the present age (in years) of Lamba?

- 1) 30
- 2) 25
- 3) 35
- 4) 40

Correct Answer: 30

QID : 222 - Weight of Sona is four times that of Mona. Weight of Mona is 2.5 times of Hona. Weight of Hona is 1.5 times of Dhona. Weight of Dhona is 2.5 times of Rona. Who is the heaviest?

- 1) Mona
- 2) Sona
- 3) Hona
- 4) Dhona

Correct Answer: Sona

QID : 223 - In the following question below are given some statements followed by some conclusions. Taking the given statements to be true even if they seem to be at variance from commonly known facts, read all the conclusions and then decide which of the given conclusion logically follows the given statements.

Statements:

- I. All books are pens.
- II. All pens are tables.

Conclusions:

- I. Some pens are tables.
- II. All tables are books.

Options:

- 1) Only conclusion (I) follows.
- 2) Only conclusion (II) follows.
- 3) Both conclusion follow.
- 4) Neither conclusion (I) nor conclusion (II) follows.

Correct Answer: Only conclusion (I) follows.

QID : 224 - In a certain code language, "PAGE" is written as "QCJI". How is "CALL" written in that code language?

- 1) DCOP
- 2) DCOQ
- 3) DDOP
- 4) DCOR

Correct Answer: DCOP

QID : 225 - In a certain code language, "GOAT" is written as "45" and "COAT" is written as "41". How is "BOAT" written in that code language?

- 1) 40
- 2) 41
- 3) 42
- 4) 43

Correct Answer: 40



SSC EXAMS PRINTED STUDY NOTES

Study Material for SSC CGL (Tier-1) Examination	English	CLICK HERE
Study Kit for SSC CGL (Tier-2) Exam	English	CLICK HERE
Study Kit for SSC CHSL (10+2) Examination	English	CLICK HERE
Study Kit for SSC Stenographers (Grade 'C' & 'D')	English	CLICK HERE
Study Kit for Multitasking (Non-Technical) - MTS	English	CLICK HERE
Study Kit for SSC Constables (GD) Exam	English	CLICK HERE
Study Kit For SSC Sub-Inspectors in Delhi Police, CAPFs, CISF	English	CLICK HERE
Study Kit for SSC Junior Engineer Exam (Paper-1)	English	CLICK HERE
IAS EXAMS STUDY MATERIALS		
Study Kit for IAS (Pre) GENERAL STUDIES Paper-1 (GS)	English	CLICK HERE
Study Kit for IAS (Pre) CSAT Paper-2(Aptitude)	English	CLICK HERE
सामान्य अध्ययन (GS) प्रारंभिक परीक्षा (Pre) पेपर-1	हिन्दी	CLICK HERE
आई. ए. एस. (सी-सैट) प्रारंभिक परीक्षा पेपर -2	हिन्दी	CLICK HERE
Gist of NCERT Study Kit For UPSC Exams	English	CLICK HERE
यूपीएससी परीक्षा के लिए एनसीईआरटी अध्ययन सामग्री	हिन्दी	CLICK HERE