

Section : General Intelligence & Reasoning

Q.1 If in a certain code language, 'RAW' is written as 'TIN', 'NET' is written as 'SHG', how is 'WATER' written in that code?

- Ans
- 1. GHTIN
 - 2. TINGH
 - 3. NIGHT
 - 4. NIGTH

Q.2 If in a certain language, 'EXECUTIVE' is coded as 'EVITUCEXE' then how is 'MAUSOLEUM' coded in that language?

- Ans
- 1. AUUCOSLMM
 - 2. MUELOSUAM
 - 3. MUELOSUMA
 - 4. ALUEOSUMM

Q.3 Select the letter cluster that will replace the question mark (?) in the following series.

ACEGI, BDFHJ, KMOQS, ? , UWYAC, VXZBD

- Ans
- 1. PQRTV
 - 2. LPRTV
 - 3. TUVWX
 - 4. LNPRT

Q.4 If in a certain code language 'BHAI' is written as '2819', then how will 'CDGH' be written in that language?

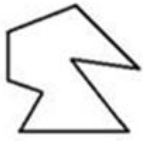
- Ans
- 1. 3478
 - 2. 8437
 - 3. 3487
 - 4. 7348

Q.5 Six persons B, C, D, F, G and H are sitting in a row facing the north.
B and C are sitting at the ends.
F is sitting second to the left of C.
D is adjacent to both B and H.

What is the position of G with respect to F?

- Ans
- 1. Immediate right
 - 2. Immediate left
 - 3. Second to the left
 - 4. Second to the right

Q.6 Select the option in which the given figure is embedded. (Rotation is not allowed)

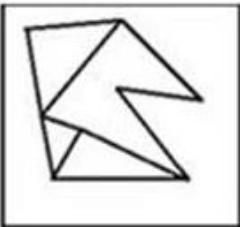


Ans

✓ 1.



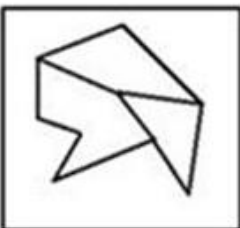
✗ 2.



✗ 3.



✗ 4.



Q.7 If '+' means '-', '-' means 'x', '÷' means '+' and 'x' means '÷', then $10 \times 5 \div 3 - 2 + 3 = ?$

Ans ✓ 1. 5

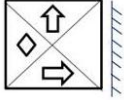
✗ 2. 21

✗ 3. 53/3

✗ 4. 18

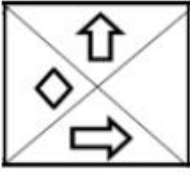
Q.8

Choose the option that most closely resembles the mirror image of the given Figure when mirror is placed at right side.

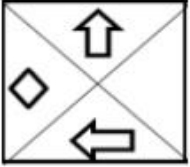


Ans


1.



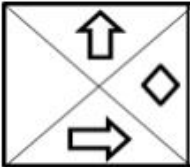
2.



3.



4.



Q.9 If B=2 and BUT=43 then BOSS=?

Ans 1. 56

2. 59

3. 55

4. 57

Q.10 Select the option that is related to the third term in the same way as the second term is related to the first term.

Genuine : Authentic :: Mirage : ?

Ans 1. Reflection

2. Image

3. Illusion

4. Hideout

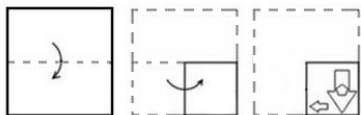
Q.11 Select the number that can replace the question mark (?) in the following series.

2807, 1400, 697, ?, 171, 84

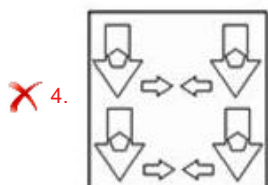
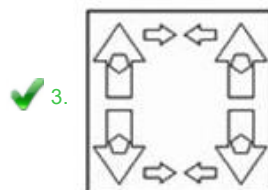
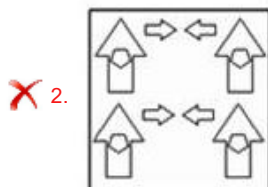
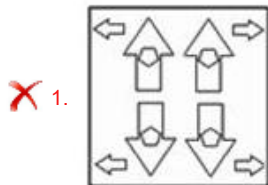
Ans 1. 697

- 2. 84
- 3. 371
- 4. 346

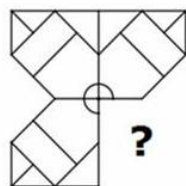
Q.12 The sequence of folding a piece of paper and the manner in which the folded paper has been cut is shown in the following figures. How would this paper look when unfolded?



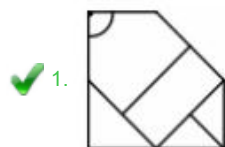
Ans

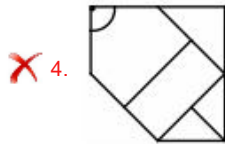
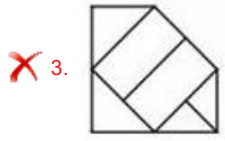
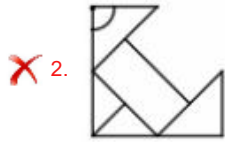


Q.13 Study the given pattern carefully and select the figure that can replace the question mark (?) in it.



Ans





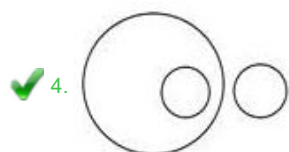
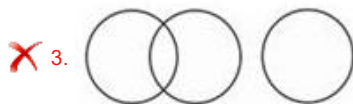
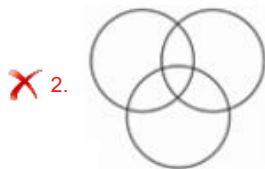
Q.14 'Lion' is related to 'Cub' in the same way as 'Cow' is related to _____.

- Ans
- ✓ 1. Calf
 - ✗ 2. Lamb
 - ✗ 3. Foal
 - ✗ 4. Joey

Q.15 Choose the Venn diagram from the given options which best represents the relationship amongst the following classes:

Fishes, sharks, dolphins

Ans





Printed Study Kit for MTS (Non-Technical) Exam

- 100% Syllabus Covered
- 5 Booklets
- 1200+ Pages
- 5500+ MCQs



[Click Here for More Details](#)

What you will get:

- 100% Syllabus Covered
- 5 Booklets
- 1,200+ Pages
- 5,600+ MCQs
- Five Practice Papers
- One Year Current Affairs
- Guidance & Support from Our Experts

Price of the Kit:

~~Rs. 6,000~~

Rs. 2,999/-
(Limited time Offer)



Net Banking

**50%
OFF**

[CLICK HERE](#)

[FOR MORE DETAILS CLICK HERE](#)

[Order Online \(100% Safe\)](#)

Q.16 Select the number that can replace the question mark (?) in the following series.

-1, 5, 23, 59, 119, 209, ?

- Ans
- 1. 409
 - 2. 309
 - 3. 335
 - 4. 289

Q.17 If '#' means '+', '@' means 'x', '&' means '/' and '\$' means '-' then
 $200 \& 5 @ 3 \$ 20 \# 5 = ?$

- Ans
- 1. 105
 - 2. 100
 - 3. 85
 - 4. 120

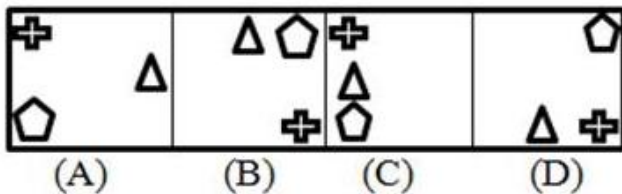
Q.18 Six friends A, B, C, D, E and F are sitting around a round table facing the centre. A sits second to the right of B, E sits second to the left of C. B doesn't sit adjacent to E. D does not sit opposite to E or C. Who sits to the immediate left of E?

- Ans
- 1. A
 - 2. D
 - 3. B
 - 4. C

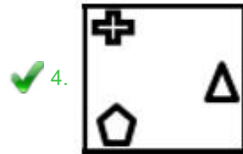
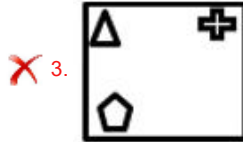
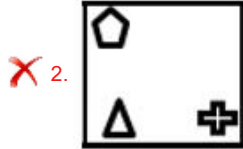
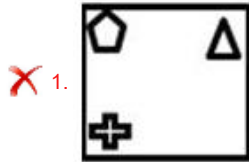
Q.19 Five friends A, B, C, D and E bought cars which were priced differently. B's car was costlier than C's car but was less costly than E's car. A's car was costlier than D's car but less costly than C's car. Whose car was the 2nd costliest?

- Ans
- 1. E
 - 2. A
 - 3. B
 - 4. C

Q.20 Select the figure that will come next in the following series.



Ans



Q.21 If $4 + 5 = 41$ and $10 + 12 = 244$, then $6 + 8 = ?$

- Ans
- ✗ 1. 200
 - ✗ 2. 88
 - ✗ 3. 96
 - ✓ 4. 100

Q.22 Select the option that is related to the third term in the same way as the second term is related to the first term.

CINQ : EKPS :: FRGS : ?

- Ans
- ✓ 1. HTIU
 - ✗ 2. HITU
 - ✗ 3. ITJU
 - ✗ 4. HTUI

Q.23 Two statements are given, followed by two conclusions numbered I and II. Assuming the statements to be true, even if they seem to be at variance with commonly known facts, decide which of the conclusions logically follow(s) from the statements.

Statement:

- I. All tables are books.
- II. All pens are books.

Conclusions:

- I. Some tables are pens.
- II. Some books are pens.

- Ans
- ✓ 1. Only conclusion II follows

- 2. Only conclusion I follows
- 3. Either conclusion I or conclusion II follows
- 4. Both conclusion I and conclusion II follow

Q.24 Read the given statement and conclusions carefully and decide which of the conclusions logically follow(s) from the statement.

Statement:

Only white colour vehicles should be allowed in India for promoting peace.

Conclusions:

- I. Blue colour vehicles promote peace.
- II. White colour vehicles promote peace

- Ans**
- 1. Only Conclusion I follows.
 - 2. Only Conclusions II follows.
 - 3. Neither conclusion I nor conclusion II follow
 - 4. Either conclusion I or conclusion II follows.

Q.25 Select the option that is related to the third term in the same way as the second term is related to the first term.

147:159::167:?

- Ans**
- 1. 276
 - 2. 143
 - 3. 176
 - 4. 181



SSC EXAMS PRINTED STUDY NOTES

Study Material for SSC CGL (Tier-1) Examination	English	CLICK HERE
Study Kit for SSC CGL (Tier-2) Exam	English	CLICK HERE
Study Kit for SSC CHSL (10+2) Examination	English	CLICK HERE
Study Kit for SSC Stenographers (Grade 'C' & 'D')	English	CLICK HERE
Study Kit for Multitasking (Non-Technical) - MTS	English	CLICK HERE
Study Kit for SSC Constables (GD) Exam	English	CLICK HERE
Study Kit For SSC Sub-Inspectors in Delhi Police, CAPFs, CISF	English	CLICK HERE
Study Kit for SSC Junior Engineer Exam (Paper-1)	English	CLICK HERE
IAS EXAMS STUDY MATERIALS		
Study Kit for IAS (Pre) GENERAL STUDIES Paper-1 (GS)	English	CLICK HERE
Study Kit for IAS (Pre) CSAT Paper-2(Aptitude)	English	CLICK HERE
सामान्य अध्ययन (GS) प्रारंभिक परीक्षा (Pre) पेपर-1	हिन्दी	CLICK HERE
आई. ए. एस. (सी-सैट) प्रारंभिक परीक्षा पेपर -2	हिन्दी	CLICK HERE
Gist of NCERT Study Kit For UPSC Exams	English	CLICK HERE
यूपीएससी परीक्षा के लिए एनसीईआरटी अध्ययन सामग्री	हिन्दी	CLICK HERE