

Section : General Intelligence & Reasoning

Q.1 Select the correct mirror image of the given figure when the mirror is placed to the right of the figure.



Ans

X 1.





Q.2 Which of the following letter cluster will replace the question mark (?) to complete the given series?

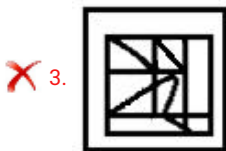
PTX, AEI, LPT, ?

- Ans
- ✗ 1. XAE
 - ✗ 2. WZE
 - ✗ 3. XAD
 - ✓ 4. WAE

Q.3 Select the option figure which contains the given question figure embedded in it as its part. (Rotation is not allowed)



Ans



X 4.



Q.4 Two statements are given, followed by three conclusions numbered I, II and III. Assuming the statements to be true, even if they seem to be at variance with commonly known facts, decide which of the conclusions logically follow(s) from the statements.

Statements:

Some caps are shirts.
Some shirts are coats.

Conclusions:

I. No coat is cap.
II. No coat is shirt.
III. Some coats are caps.

- Ans
- X 1. Either conclusion II or III follow.
 - X 2. Conclusions II and III follow.
 - ✓ 3. Either conclusion I or III follow.
 - X 4. Conclusions I and II follow.

Q.5 Which number will replace the question mark (?) in the following series?

15, 17, 20, 25, 32, 43, ?

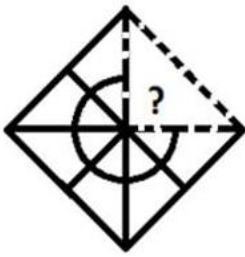
- Ans
- ✓ 1. 56
 - X 2. 55
 - X 3. 57
 - X 4. 54

Q.6 'Jharkhand' is related to 'State' in the same way as 'Lakshwadweep' is related to '_____'.
'

- Ans
- X 1. Punjab
 - ✓ 2. Union Territory
 - X 3. Ranchi
 - X 4. District

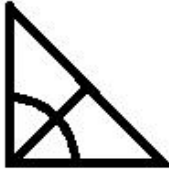
Q.7

Which of the following option figure will complete the pattern in the figure given below?



Ans

✓ 1.



✗ 2.



✗ 3.



✗ 4.



Q.8 In a code language, if 'REPAIR' is written as '18101621818', then how will 'GALAXY' be written in that language?

Ans ✗ 1. 721212425

✓ 2. 721222425

✗ 3. 711212425

✗ 4. 611212324

Q.9 In a code language, if 'CLASS' is written as '24152688', then how will 'MORPH' be written in that language?

Ans ✗ 1. 151291119

✓ 2. 141291119

✗ 3. 131291018

✗ 4. 141181118

Q.10 In a code language, 'people are confident' is written as 'lur bur duk', 'we are helpful' is written as 'kur duk sur', 'we have cars' is written as 'sur mur jur' and 'people have honesty' is written as 'lur jur nur'. What is the code for 'confident'?

- Ans
- 1. bur
 - 2. duk
 - 3. jur
 - 4. lur

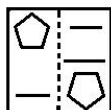
Q.11 Amrit is elder than Vikrant. Shanaz is elder than Joya. Ketan is younger than Joya. Vikrant is elder than Shanaz. Who is the youngest in the group?

- Ans
- 1. Shanaz
 - 2. Ketan
 - 3. Joya
 - 4. Vikrant

Q.12 Eight friends P, Q, R, S, T, U, V and W are sitting around a circular table at equal distances from each other. U is sitting extremely opposite to P. S is between V and Q. R is between U and W. P is sitting to the immediate right of Q. Who is sitting between P and W?

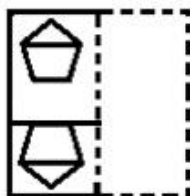
- Ans
- 1. U
 - 2. T
 - 3. V
 - 4. Q

Q.13 A figure of transparent sheet with a pattern is given below. Figure out from amongst the four options as to how the pattern would appear when the transparent sheet is folded at the dotted line.



Ans

- 1.





Printed Study Kit for MTS (Non-Technical) Exam

- 100% Syllabus Covered
- 5 Booklets
- 1200+ Pages
- 5500+ MCQs



FREE



Click Here for More Details

What you will get:

- 100% Syllabus Covered
- 5 Booklets
- 1,200+ Pages
- 5,600+ MCQs
- Five Practice Papers
- One Year Current Affairs
- Guidance & Support from Our Experts

Price of the Kit:

~~Rs. 6,000~~

Rs. 2,999/-
(Limited time Offer)



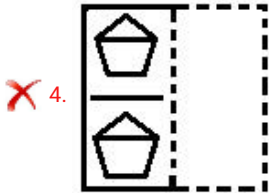
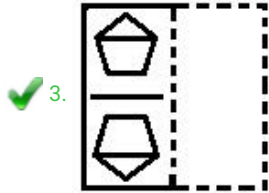
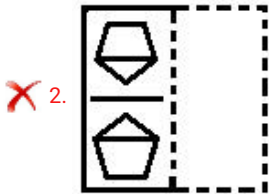
Net Banking

**50%
OFF**

CLICK HERE

FOR MORE DETAILS CLICK HERE

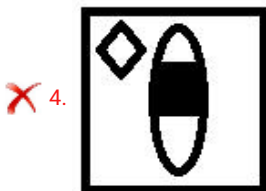
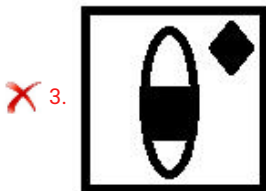
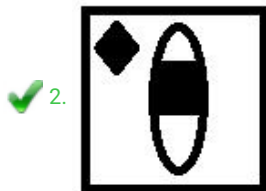
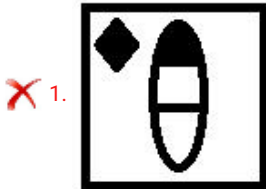
Order Online (100% Safe)



Q.14 Select the figure that will come next in the following figure series.



Ans



Q.15 उस शब्द युग्म का चयन कीजिए जिसके दोनों शब्द आपस में उसी प्रकार संबंधित है जिस प्रकार नीचे दिए गए शब्द युग्म के दोनों शब्द आपस में संबंधित है।

त्वचा: एक्जिमा

- Ans
- 1. किडनी: मधुमेह
 - 2. फेफड़े: ऑक्सीजन
 - 3. आंखें: मोतियाबिंद
 - 4. हृदय: रक्त

Q.16 Three statements are given, followed by three conclusions numbered I, II and III. Assuming the statements to be true, even if they seem to be at variance with commonly known facts, decide which of the conclusions logically follow(s) from the statements.

Statements:

Some plants are leaves.
All leaves are twigs.
No twig is banana.

Conclusions:

I. Some plants are bananas.
II. Some twigs are leaves.
III. Some bananas are leaves.

- Ans
- 1. Only conclusion III follows
 - 2. Conclusions I and II follow
 - 3. Only conclusion II follows
 - 4. Conclusions II and III follow

Q.17 Select the option that is related to the third number in the same way as the second number is related to the first number.

12 : 121 :: 10 : ?

- Ans
- 1. 64
 - 2. 81
 - 3. 112
 - 4. 91

Q.18 Select the option that is related to the third letter-cluster in the same way as the second letter-cluster is related to the first letter-cluster.

PECL : OFHS :: QTJM : ?

- Ans
- 1. PNVT
 - 2. ONVS
 - 3. PMWT
 - 4. OMWS

Q.19 In a code language, 'LANTERN' is written as 'AELNNRT'. How will 'POSITIVE' be written as in that language?

- Ans
- 1. IIEPOSTV
 - 2. EIIOPTVS
 - 3. ISOPEVIT
 - 4. EIIOPSTV

Q.20 Which number will replace the question mark (?) in the following series?

105, 106, 114, 141, ?

- Ans
- 1. 207
 - 2. 208
 - 3. 205
 - 4. 206

Q.21 Select the set in which the numbers are related in the same way as are the numbers of the following set.

5, 30, 40

- Ans
- 1. 4, 25, 32
 - 2. 6, 42, 49
 - 3. 8, 72, 88
 - 4. 7, 56, 77

Q.22 Six persons A, B, C, D, E and F are sitting in a line. E is between D and F. A is second to the right of F. C is at extreme right. Who is sitting at second place to the left of C?

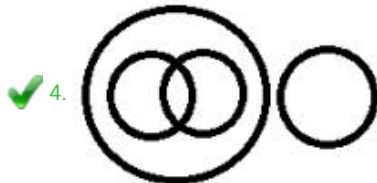
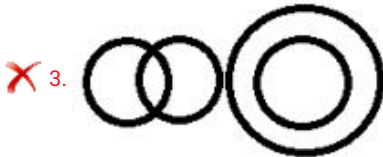
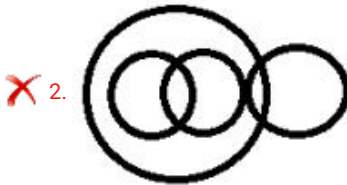
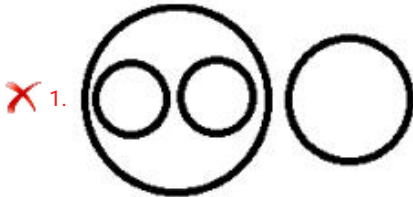
- Ans
- 1. D
 - 2. A
 - 3. B

✗ 4. F

Q.23 Select the Venn diagram that best illustrates the relationship between the following classes.

Mothers, Fathers, Daughters, Women

Ans



Q.24 Which two signs and two numbers should be interchanged to make the given equation correct?

$$28 + 4 \times 16 \div 5 - 17 = 127$$

Ans

- ✓ 1. 4 and 5, + and \times
- ✗ 2. 28 and 16, + and \div
- ✗ 3. 4 and 5, + and -
- ✗ 4. 28 and 5, \div and \times

Q.25 If 'A' stands 'addition', B stands for 'division', C stands for 'subtraction' and D stands for 'multiplication, then what is the value of the following equation?

$$25 D 13 A 82 C 132 B 11 = ?$$

Ans

- ✓ 1. 395

✗ 2.415

✗ 3.375

✗ 4.253



SSC EXAMS PRINTED STUDY NOTES

Study Material for SSC CGL (Tier-1) Examination	English	CLICK HERE
Study Kit for SSC CGL (Tier-2) Exam	English	CLICK HERE
Study Kit for SSC CHSL (10+2) Examination	English	CLICK HERE
Study Kit for SSC Stenographers (Grade 'C' & 'D')	English	CLICK HERE
Study Kit for Multitasking (Non-Technical) - MTS	English	CLICK HERE
Study Kit for SSC Constables (GD) Exam	English	CLICK HERE
Study Kit For SSC Sub-Inspectors in Delhi Police, CAPFs, CISF	English	CLICK HERE
Study Kit for SSC Junior Engineer Exam (Paper-1)	English	CLICK HERE
IAS EXAMS STUDY MATERIALS		
Study Kit for IAS (Pre) GENERAL STUDIES Paper-1 (GS)	English	CLICK HERE
Study Kit for IAS (Pre) CSAT Paper-2(Aptitude)	English	CLICK HERE
सामान्य अध्ययन (GS) प्रारंभिक परीक्षा (Pre) पेपर-1	हिन्दी	CLICK HERE
आई. ए. एस. (सी-सैट) प्रारंभिक परीक्षा पेपर -2	हिन्दी	CLICK HERE
Gist of NCERT Study Kit For UPSC Exams	English	CLICK HERE
यूपीएससी परीक्षा के लिए एनसीईआरटी अध्ययन सामग्री	हिन्दी	CLICK HERE