

Section : General Intelligence & Reasoning

Q.1 Select the option that is related to the third term in the same way as the second term is related to the first term.

Jute : Sack :: Wood : ?

Ans  1. Furniture

 2. Brown

 3. Plastic

 4. Hard

Q.2 Six buses B1, B2, B3, B4, B5 and B6 are parked around a circular path (not necessarily in the same order). B3 is third to the right of B6. B4 is to the immediate left of B1. B2 is second to the left of B6.
How many buses are between B5 and B1?

- Ans
- ☒ 1. 0
 - ☒ 2. 1
 - ☒ 3. 3
 - ☒ 4. 2

Q.3 In the following question, select the number which can be placed at the sign of question mark (?) from the given alternatives.

5 9 6 39
3 11 7 26
8 5 4 ?

- Ans
- ☒ 1. 48
 - ☒ 2. 44
 - ☒ 3. 36
 - ☒ 4. 34

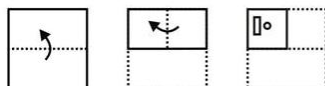
Q.4 In a certain code language, 'WINDOW' is written as 'TLAKFT'. What is the code for 'BLADES' in that code language?

- Ans
- ☒ 1. QCBYJZ
 - ☒ 2. PBBXIY
 - ☒ 3. PBAXIY
 - ☒ 4. QBBYJZ

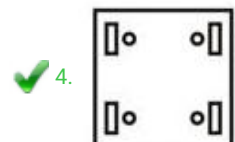
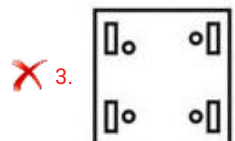
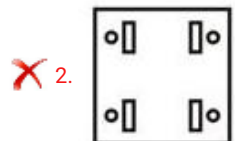
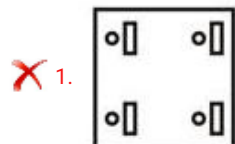
Q.5 In a certain code language, 'ROAM' is written as '44', 'HIMP' is written as '43'. What is the code for 'BONE' in that code language?

- Ans
- ☒ 1. 33
 - ☒ 2. 34
 - ☒ 3. 39
 - ☒ 4. 36

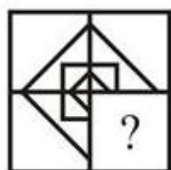
Q.6 A piece of paper is folded and punched as shown below in the question figures. From the given answer figures, indicate how it will appear when opened?



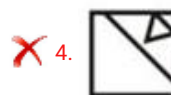
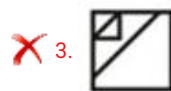
Ans



Q.7 Which answer figure will complete the pattern in the question figure?



Ans



Q.8 Select the option that is related to the third Letter Cluster in the same way as the second Letter Cluster is related to the first Letter Cluster.

ROAD : TREI :: MINT : ?

Ans ✗ 1. OMR Y

 2. PMSZ

 3. PNSZ

 4. OLRV

Q.9 Select the letter-pair that can replace the question mark (?) in the following series.

RD, XJ, DP, JV, ?

Ans  1. QC

 2. PB

 3. PC

 4. QB

Q.10 After interchanging which two numbers, the value of given equation will be '4'?

$6 + 3 \div 9 \times 7 - 5$

Ans  1. 7 and 6


 2. 3 and 5


 3. 5 and 6

 4. 9 and 5

Q.11 In a certain code language, 'PENCIL' is written as 'RIPGKP'. What is the code for 'FABRIC' in that code language?

Ans  1. HFDVKG

 2. HEDVKG

 3. IEFWLH

 4. IFEWLH

Q.12 Select the number that can replace the question mark (?) in the following series.

600, 120, 30, 10, 5, ?

Ans  1. 4

 2. 5


 3. 3

 4. 2



Printed Study Kit for MTS (Non-Technical) Exam

- 100% Syllabus Covered
- 5 Booklets
- 1200+ Pages
- 5500+ MCQs



[Click Here for More Details](#)

What you will get:

- 100% Syllabus Covered
- 5 Booklets
- 1,200+ Pages
- 5,600+ MCQs
- Five Practice Papers
- One Year Current Affairs
- Guidance & Support from Our Experts

Price of the Kit:

~~Rs. 6,000~~

Rs. 2,999/-
(Limited time Offer)



Net Banking

**50%
OFF**

[CLICK HERE](#)

[FOR MORE DETAILS CLICK HERE](#)

[Order Online \(100% Safe\)](#)

Q.13 If a mirror is placed on the line AB, then which of the answer figures is the right image of the given figure?



Ans

✗ 1.



✗ 2.



✓ 3.



✗ 4.

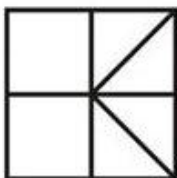


Q.14 From the given answer figures, select the one in which the question figure is hidden/embedded.

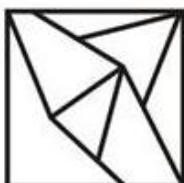


Ans

✗ 1.



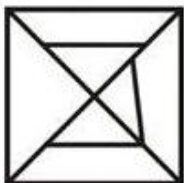
✗ 2.



✓ 3.



✗ 4.



Q.15 Identify the Venn diagram that best represents the relationship between the given classes.

Producer, Director, Actor

Ans

✗ 1.



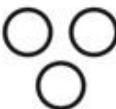
✗ 2.



✓ 3.



✗ 4.



Q.16 In a certain code language, 'PAL' is written as '29', 'CAR' is written as '22'. What is the code for 'ZON' in that code language?

Ans

✗ 1. 43

✗ 2. 45

✓ 3. 55

✗ 4. 51

Q.17 Select the option that is related to the third term in the same way as the second term is related to the first term.

Film : Producer :: Poem : ?

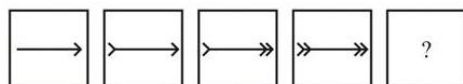
- Ans
- ☒ 1. Director
 - ☒ 2. Actor
 - ☒ 3. Poet
 - ☒ 4. Cobbler

Q.18 Select the option that is related to the third number in the same way as the second number is related to the first number.

596 : 965 :: 824 : ?

- Ans
- ☒ 1. 248
 - ☒ 2. 408
 - ☒ 3. 418
 - ☒ 4. 258

Q.19 In the following question, select the figure which can be placed at the sign of question mark (?) from the given alternatives.



Ans

- ☒ 1.
- ☒ 2.
- ☒ 3.
- ☒ 4.

Q.20 In the following question below are given some statements followed by some conclusions based on those statements. Taking the given statements to be true even if they seem to be

at variance from commonly known facts. Read all the conclusions and then decide which of the given conclusion logically follows the given statements.

Statements:

- I. Some pen are sharpener.
- II. All pen are pencil.

Conclusions:

- I. Some pencil are pen.
- II. All sharpener are pen .

- Ans
- ☒ 1. Both conclusion I and II follows.
 - ☒ 2. Only conclusion I follows.
 - ☒ 3. Neither conclusion follow.
 - ☒ 4. Only conclusion II follows.

Q.21 Five chairs J, H, P, S and M are placed in a row facing towards east (Not necessarily in the same order). P is second to the left of S. J is second to the right of H. M is to the immediate right of S.

Which of the following is the correct position of J?

- Ans
- ☒ 1. Third to the left of M
 - ☒ 2. Second to the right of H
 - ☒ 3. Exactly between S and H
 - ☒ 4. To the immediate right of S

Q.22 Five toys A, B, C, D and E are kept one above the other (not necessarily in the same order). A is four places above C. D is between B and E. E is three places below A.

Three of the given four options follows a same logic based on their arrangement. Which of the following does not follow that logic?

- Ans
- ☒ 1. BD
 - ☒ 2. DE
 - ☒ 3. EC
 - ☒ 4. AC





Q.23 In the following question below are given some statements followed by some conclusions based on those statements. Taking the given statements to be true even if they seem to be at variance from commonly known facts. Read all the conclusions and then decide which of the given conclusion logically follows the given statements.

Statements:

- I. All L are B.
- II. No T is L.
- III. Some R are T.





Conclusions:

- I. Some T are R.
- II. No B is T.
- III. No L is T.

- Ans
-  1. Only conclusion I follows.
 -  2. Only conclusion II follows.
 -  3. Both conclusion I and III follows.
 -  4. Both conclusion II and III follows.

Q.24 By interchanging the given two signs which of the following equation will be incorrect?

÷ and +

- Ans
-  1. $12 \div 9 \times 31 + 3 = 105$
 -  2. $7 \times 16 + 4 \div 5 = 33$
 -  3. $9 \div 11 + 11 \times 2 = 9$
 -  4. $6 \times 11 + 2 \div 5 = 38$

Q.25 In the following question, select the missing number from the given series.

17, 31, 47, 65, ?

- Ans
-  1. 87
 -  2. 89
 -  3. 85
 -  4. 83



SSC EXAMS PRINTED STUDY NOTES

Study Material for SSC CGL (Tier-1) Examination	English	CLICK HERE
Study Kit for SSC CGL (Tier-2) Exam	English	CLICK HERE
Study Kit for SSC CHSL (10+2) Examination	English	CLICK HERE
Study Kit for SSC Stenographers (Grade 'C' & 'D')	English	CLICK HERE
Study Kit for Multitasking (Non-Technical) - MTS	English	CLICK HERE
Study Kit for SSC Constables (GD) Exam	English	CLICK HERE
Study Kit For SSC Sub-Inspectors in Delhi Police, CAPFs, CISF	English	CLICK HERE
Study Kit for SSC Junior Engineer Exam (Paper-1)	English	CLICK HERE
IAS EXAMS STUDY MATERIALS		
Study Kit for IAS (Pre) GENERAL STUDIES Paper-1 (GS)	English	CLICK HERE
Study Kit for IAS (Pre) CSAT Paper-2(Aptitude)	English	CLICK HERE
सामान्य अध्ययन (GS) प्रारंभिक परीक्षा (Pre) पेपर-1	हिन्दी	CLICK HERE
आई. ए. एस. (सी-सैट) प्रारंभिक परीक्षा पेपर -2	हिन्दी	CLICK HERE
Gist of NCERT Study Kit For UPSC Exams	English	CLICK HERE
यूपीएससी परीक्षा के लिए एनसीईआरटी अध्ययन सामग्री	हिन्दी	CLICK HERE