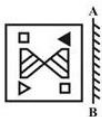


Section : General Intelligence & Reasoning

Q.1 If a mirror is placed on the line AB, then which of the answer figures is the right image of the given figure?



Ans

 1.



 2.



✗ 3.



✗ 4.



Q.2 In a certain code language, 'RAM' is written as '31', 'FAN' is written as '20'. What is the code for 'COR' in that code language?

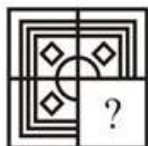
Ans ✗ 1. 34

✗ 2. 37

✓ 3. 35

✗ 4. 36

Q.3 Which answer figure will complete the pattern in the question figure?



Ans

✗ 1.



✗ 2.



✓ 3.



✗ 4.



Q.4 Identify the Venn diagram that best represents the relationship between the given classes.

Chair, Bench, Furniture

Ans



Q.5 In the following question, select the number which can be placed at the sign of question mark (?) from the given alternatives.

6 12 7
9 4 11
11 6 2
13 ? 10

- Ans ✓ 1. 11
✗ 2. 22
✗ 3. 10
✗ 4. 13

Q.6 Six scientists R, L, T, S, N and P are standing in a row facing towards north (Not necessarily in the same order). N is standing to the immediate right of R. S is standing second to the right of P. Two scientists are standing between T and N. S is towards the left of L. Which of the following is correct about the position of L?

- Ans ✗ 1. Between R and N
✗ 2. Third to the right of R
✓ 3. L is at one of the end
✗ 4. Towards the immediate left of N

Q.7 Select the option that is related to the third number in the same way as the second number is related to the first number.

18 : 323 :: 24 : ?

- Ans ✗ 1. 625

✓ 2. 575

✗ 3. 675

✗ 4. 535

Q.8 In the following question below are given some statements followed by some conclusions based on those statements. Taking the given statements to be true even if they seem to be at variance from commonly known facts. Read all the conclusions and then decide which of the given conclusion logically follows the given statements.

Statements:

I. All A are K.

II. Some J are K.

Conclusions:

I. Some A are J.

II. No K is J.

III. All K are J.

Ans ✗ 1. Only conclusion I follows.

✗ 2. Only conclusion III follows.

✗ 3. Both conclusion II and III follows.

✓ 4. Neither conclusion follow.

Q.9 Select the number that can replace the question mark (?) in the following series.

23, 29, 31, 37, 41, ?

Ans ✗ 1. 53

✗ 2. 44

✗ 3. 59

✓ 4. 43

Q.10 By interchanging which two signs the equation will be correct?

$9 \times 11 \div 31 + 62 - 13 = 18$

Ans ✗ 1. \times and \div

✗ 2. $-$ and \times

✗ 3. \div and $+$

✓ 4. $+$ and \times

Q.11 After interchanging the given two numbers, what will be the value of $3 + 2 \div 1 \times 4 - 7$?

4 and 7

- Ans
- ☒ 1. 10
 - ☒ 2. 12
 - ☒ 3. 13
 - ☒ 4. 11

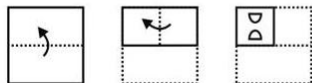
Q.12 In a certain code language, 'SHOES' is written as '19815519', 'SEED' is written as '19554'. What is the code for 'CHAIR' in that code language?

- Ans
- ☒ 1. 389111
 - ☒ 2. 371918
 - ☒ 3. 381918
 - ☒ 4. 381917

Q.13 In a certain code language, 'BRICK' is written as 'WMDXF'. What is the code for 'GOLDS' in that code language?

- Ans
- ☒ 1. BJGYM
 - ☒ 2. BJGYN
 - ☒ 3. BKGYM
 - ☒ 4. BKGYN

Q.14 A piece of paper is folded and punched as shown below in the question figures. From the given answer figures, indicate how it will appear when opened?



Ans

- ☒ 1.
- ☒ 2.



Printed Study Kit for MTS (Non-Technical) Exam

- 100% Syllabus Covered
- 5 Booklets
- 1200+ Pages
- 5500+ MCQs

FREE
EBOOK



[Click Here for More Details](#)

What you will get:

- 100% Syllabus Covered
- 5 Booklets
- 1,200+ Pages
- 5,600+ MCQs
- Five Practice Papers
- One Year Current Affairs
- Guidance & Support from Our Experts

Price of the Kit:

~~Rs. 6,000~~

Rs. 2,999/-
(Limited time Offer)



Net Banking

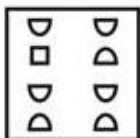
**50%
OFF**

[CLICK HERE](#)

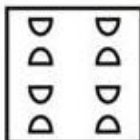
[FOR MORE DETAILS CLICK HERE](#)

[Order Online \(100% Safe\)](#)

✗ 3.



✓ 4.



Q.15 Select the option that is related to the third term in the same way as the second term is related to the first term.

Leather : Shoes :: Asphalt : ?

Ans

✗ 1. Car

✗ 2. Air

✗ 3. Water

✓ 4. Road

Q.16 Select the number that can replace the question mark (?) in the following series.

37, 43, 51, 61, 73, ?

Ans

✗ 1. 85

✗ 2. 89

✓ 3. 87

✗ 4. 83

Q.17 From the given answer figures, select the one in which the question figure is hidden/embedded.



Ans

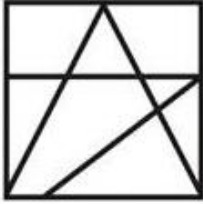
✓ 1.



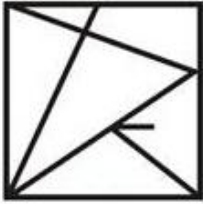
✗ 2.



✗ 3.



✗ 4.



Q.18 There are five classes class 1, class 2, class 3, class 4 and class 5 in a school. They are one above the other. Class 1 is at the bottom, then class 2 above it and so on. Five videos M1, M2, M3, M4 and M5 are displayed in these given classes. Only one video is displayed in a particular class. Each video is displayed only one time. Video M5 is displayed at a even numbered class. Video M2 is displayed at class 1. Video M1 is displayed at the class just below M5. Video M4 is not displayed at even numbered class. Which of the following statement is not correct?

Ans

- ✗ 1. Only one video is displayed after M3
- ✗ 2. Only two videos are displayed above M1
- ✓ 3. Only one video is displayed between M2 and M5
- ✗ 4. M1 is displayed between M3 and M5

Q.19 A series is given with one Letter Cluster missing. Select the correct alternative from the given ones that will complete the series.

POND, UVSK, ZCXR, EJCX, ?

Ans

- ✓ 1. JQHF
- ✗ 2. KQHF
- ✗ 3. JQHE
- ✗ 4. KQHE

Q.20 In a certain code language, 'BLADE' is written as 'LBAED'. What is the code for 'TABLE' in

- Ans
- ☒ 1. ATLBE
 - ☒ 2. ATBEL
 - ☒ 3. ATLEB
 - ☒ 4. ATBLE

Q.21 Select the word pair in which the two words are related in the same way as the two words in the following word-pair.

Web : Spider :: ?

- Ans
- ☒ 1. Nest : Bird
 - ☒ 2. Palace : Rat
 - ☒ 3. Convict : Prison
 - ☒ 4. Den : Eskimo

Q.22 Five persons H1, H2, H3, H4 and H5 are sitting around a circular table facing towards the centre (Not necessarily in the same order). H4 is third to the left of H2. H3 and H1 are the immediate neighbours of H2. H5 is to the immediate left of H3. Who is sitting third to the right of H1?

- Ans
- ☒ 1. H2
 - ☒ 2. H4
 - ☒ 3. H5
 - ☒ 4. H3

Q.23 In the following question, select the figure which can be placed at the sign of question mark (?) from the given alternatives.

A M R
J
K T

M Я
A L
L Я

R T
M K
A J

L K
Я
M A L

?

Ans

- ☒ 1.

L K
J
Я M A
- ☒ 2.

T K
L
R M A

✓ 3.

T	K	
		J
R	M	A

✗ 4.

L	K	
		L
R	M	A

Q.24 In the following question below are given some statements followed by some conclusions based on those statements. Taking the given statements to be true even if they seem to be at variance from commonly known facts. Read all the conclusions and then decide which of the given conclusion logically follows the given statements.

Statements:

- I. Some red are phone.
- II. No phone is car.

Conclusions:

- I. Some car are red.
- II. Some phone are red.

Ans

✓ 1. Only conclusion II follows.

✗ 2. Only conclusion I follows.

✗ 3. Both conclusion I and II follows.

✗ 4. Neither conclusion follow.

Q.25 Select the option that is related to the third Letter Cluster in the same way as the second Letter Cluster is related to the first Letter Cluster.

TOK : SNJ :: LAP : ?

Ans

✗ 1. KAN

✗ 2. KAO

✓ 3. KZO

✗ 4. LAN



SSC EXAMS PRINTED STUDY NOTES

Study Material for SSC CGL (Tier-1) Examination	English	CLICK HERE
Study Kit for SSC CGL (Tier-2) Exam	English	CLICK HERE
Study Kit for SSC CHSL (10+2) Examination	English	CLICK HERE
Study Kit for SSC Stenographers (Grade 'C' & 'D')	English	CLICK HERE
Study Kit for Multitasking (Non-Technical) - MTS	English	CLICK HERE
Study Kit for SSC Constables (GD) Exam	English	CLICK HERE
Study Kit For SSC Sub-Inspectors in Delhi Police, CAPFs, CISF	English	CLICK HERE
Study Kit for SSC Junior Engineer Exam (Paper-1)	English	CLICK HERE
IAS EXAMS STUDY MATERIALS		
Study Kit for IAS (Pre) GENERAL STUDIES Paper-1 (GS)	English	CLICK HERE
Study Kit for IAS (Pre) CSAT Paper-2(Aptitude)	English	CLICK HERE
सामान्य अध्ययन (GS) प्रारंभिक परीक्षा (Pre) पेपर-1	हिन्दी	CLICK HERE
आई. ए. एस. (सी-सैट) प्रारंभिक परीक्षा पेपर -2	हिन्दी	CLICK HERE
Gist of NCERT Study Kit For UPSC Exams	English	CLICK HERE
यूपीएससी परीक्षा के लिए एनसीईआरटी अध्ययन सामग्री	हिन्दी	CLICK HERE