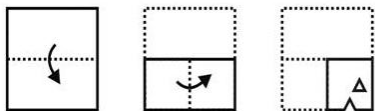


Section : General Intelligence & Reasoning

Q.1 A piece of paper is folded and punched as shown below in the question figures, indicate how it will appear when opened?



Ans

~~1.~~



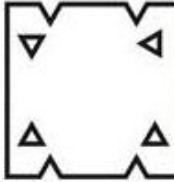
~~2.~~



✓ 3.



✗ 4.



Q.2 Six phones P1, P2, P3, P4, P5 and P6 are placed in a row facing towards north (Not necessarily in the same order). P1 is placed to the immediate left of P6. P5 is placed second to the left of P2. P4 is placed second to the right of P6. P4 is to the immediate right of P5. P3 is towards the left of P1. How many phones are placed between P3 and P6?

Ans ✗ 1. 4

✓ 2. 1

✗ 3. 0

✗ 4. 2

Q.3 Five tables T1, T2, T3, T4 and T5 are kept one above the other (Not necessarily in the same order). Number of tables above T4 are same as the number of tables below T5. T3 is just above T1. T5 is at the bottom. There are two tables between T2 and T5. Which of the following is the correct position of T1?

Ans ✓ 1. T1 is just above T5

✗ 2. T1 is just below T5

✗ 3. T1 is three places below T2

✗ 4. T2 is two places below T1

Q.4 In a certain code language, 'RAFTS' is written as '96432', 'WEBAR' is written as '75169'. What is the code for 'FRAWT' in that code language?

Ans ✓ 1. 49673

✗ 2. 49672

✗ 3. 49675

✗ 4. 49671

Q.5 In a certain code language, 'HORSED' is written as 'ABPOLE'. What is the code for 'PRISON' in that code language?

- Ans
- ☒ 1. LMQGPN
 - ☒ 2. LNQGPN
 - ☒ 3. KMPFOM
 - ☒ 4. KLPFOM

Q.6 By interchanging which two signs the equation will be correct?

$$11 + 9 - 4 \times 12 \div 6 = 32$$


- Ans
- ☒ 1. \div and $-$
 - ☒ 2. $-$ and $+$
 - ☒ 3. \times and $+$
 - ☒ 4. \times and \div

Q.7 A series is given with one term missing. Select the correct alternative from the given ones that will complete the series.

JG, FC, BY, XU, ?

- Ans
- ☒ 1. TR
 - ☒ 2. VQ
 - ☒ 3. VR
 - ☒ 4. TQ

Q.8 Study the given pattern carefully and select the figure that will complete the pattern given in the question figure.



- Ans
- ☒ 1.
 - ☒ 2.

✗ 3.



✗ 4.



Q.9 After interchanging the given two signs, what will be the value of $9 + 143 \div 13 \times 11 - 160 = ?$

\times and \div

Ans ✓ 1. 18

✗ 2. -32

✗ 3. -17

✗ 4. 28

Q.10 Select the number that can replace the question mark (?) in the following series.

13, 22, 33, 48, 69, ?

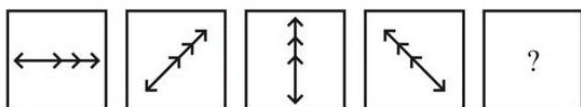
Ans ✗ 1. 112

✗ 2. 96

✓ 3. 98


✗ 4. 88

Q.11 In the following question, select the figure which can be placed at the sign of question mark (?) from the given alternatives.

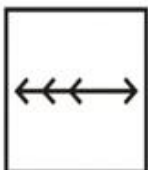


Ans

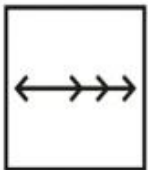
✗ 1.



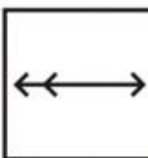
✓ 2.



✗ 3.



✗ 4.



Q.12 In the following question, select the number which can be placed at the sign of question mark (?) from the given alternatives.

7 6 3 48
4 9 8 63
2 5 7 ?

Ans ✗ 1. 68

✗ 2. 37

✗ 3. 64

✓ 4. 42

Q.13 In the following question below are given some statements followed by some conclusions based on those statements. Taking the given statements to be true even if they seem to be at variance from commonly known facts. Read all the conclusions and then decide which of the given conclusion logically follows the given statements.

Statements:

- I. Some P are Q.
- II. Some S are R.
- III. No R is Q.

Conclusions:

- I. Some S are Q.
- II. Some Q are P.
- III. Some R are S.

Ans ✗ 1. Both conclusion I and II follows

✓ 2. Both conclusion II and III follows

✗ 3. Neither conclusion follow

✗ 4. Only conclusion I follows



Printed Study Kit for MTS (Non-Technical) Exam

- 100% Syllabus Covered
- 5 Booklets
- 1200+ Pages
- 5500+ MCQs

FREE
EBOOK



[Click Here for More Details](#)

What you will get:

- 100% Syllabus Covered
- 5 Booklets
- 1,200+ Pages
- 5,600+ MCQs
- Five Practice Papers
- One Year Current Affairs
- Guidance & Support from Our Experts

Price of the Kit:

~~Rs. 6,000~~

Rs. 2,999/-
(Limited time Offer)



Net Banking

**50%
OFF**

[CLICK HERE](#)

[FOR MORE DETAILS CLICK HERE](#)

[Order Online \(100% Safe\)](#)

Q.14 Select the number that can replace the question mark (?) in the following series.

197, 220, 244, 269, 295, ?

Ans ☒ 1. 328

☒ 2. 322

☒ 3. 330

☒ 4. 312

Q.15 Select the option that is related to the third term in the same way as the second term is related to the first term.

Nest : Bird :: Palace : ?

Ans ☒ 1. Jeep

☒ 2. Soldier

☒ 3. Big

☒ 4. King

Q.16 Select the option that is related to the third number in the same way as the second number is related to the first number.

31 : 963 :: 17 : ?

Ans ☒ 1. 291

☒ 2. 290

☒ 3. 289

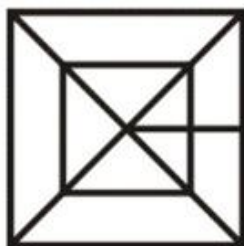
☒ 4. 287

Q.17 From the given answer figures, select the one in which the question figure is hidden/embedded. (Rotation is not allowed)



Ans

☒ 1.



✗ 2.



✗ 3.



✓ 4.



Q.18 Select the option in which the letters share the same relationship as that shared by the given pair of letters.

GUN : JYS :: ?

Ans

✓ 1. TOL : WSQ

✗ 2. NAP : QWU

✗ 3. HUB : KYH

✗ 4. SUC : VYG

Q.19 Five teachers P, K, A, R and M are sitting in a row facing towards south (Not necessarily in the same order). K is sitting second to the right of R. M is sitting to the immediate right of P. Two teachers are sitting between M and A. Who is sitting to the immediate left of R?

Ans

✗ 1. M

✗ 2. K

✗ 3. P

✓ 4. A

Q.20 Identify the Venn diagram that best represents the relationship between the given classes.

Female, Mother, Sister

Ans


✗ 1.



✗ 2.



✓ 3.



✗ 4.

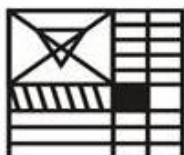


Q.21 If a mirror is placed on the line AB, then which of the answer figures is the right image of the given figure?



Ans

✗ 1.



✗ 2.



✓ 3.



✗ 4.



Q.22 In a certain code language, 'CHIRPS' is written as 'AJGTNU'. What is the code for 'RAINED' in that code language?

- Ans
- ☒ 1. QEHQEG
 - ☒ 2. PDGPDF
 - ☒ 3. PCGPCF
 - ☒ 4. QDHQDG

Q.23 Select the option that is related to the third term in the same way as the second term is related to the first term.

Amphibian : Frog :: Insect : ?

- Ans
- ☒ 1. Butterfly
 - ☒ 2. Ostrich
 - ☒ 3. Rat
 - ☒ 4. Snake

Q.24 In the following question below are given some statements followed by some conclusions based on those statements. Taking the given statements to be true even if they seem to be at variance from commonly known facts. Read all the conclusions and then decide which of the given conclusion logically follows the given statements.

Statements:

- I. No T is R.
- II. All R are V.

Conclusions:

- I. Some V are R.
- II. Some T are R.
- III. All V are T.

- Ans
- ☒ 1. Only conclusion I follows
 - ☒ 2. Both conclusion I and III follows
 - ☒ 3. Both conclusion II and III follows
 - ☒ 4. Neither conclusion follow

Q.25 In a certain code language, 'SOL' is written as '45', 'KIN' is written as '33'. What is the code for 'OWL' in that code language?

- Ans
- ☒ 1. 49
 - ☒ 2. 50
 - ☒ 3. 48



SSC EXAMS PRINTED STUDY NOTES

Study Material for SSC CGL (Tier-1) Examination	English	CLICK HERE
Study Kit for SSC CGL (Tier-2) Exam	English	CLICK HERE
Study Kit for SSC CHSL (10+2) Examination	English	CLICK HERE
Study Kit for SSC Stenographers (Grade 'C' & 'D')	English	CLICK HERE
Study Kit for Multitasking (Non-Technical) - MTS	English	CLICK HERE
Study Kit for SSC Constables (GD) Exam	English	CLICK HERE
Study Kit For SSC Sub-Inspectors in Delhi Police, CAPFs, CISF	English	CLICK HERE
Study Kit for SSC Junior Engineer Exam (Paper-1)	English	CLICK HERE
IAS EXAMS STUDY MATERIALS		
Study Kit for IAS (Pre) GENERAL STUDIES Paper-1 (GS)	English	CLICK HERE
Study Kit for IAS (Pre) CSAT Paper-2(Aptitude)	English	CLICK HERE
सामान्य अध्ययन (GS) प्रारंभिक परीक्षा (Pre) पेपर-1	हिन्दी	CLICK HERE
आई. ए. एस. (सी-सैट) प्रारंभिक परीक्षा पेपर -2	हिन्दी	CLICK HERE
Gist of NCERT Study Kit For UPSC Exams	English	CLICK HERE
यूपीएससी परीक्षा के लिए एनसीईआरटी अध्ययन सामग्री	हिन्दी	CLICK HERE