

Section : General Intelligence & Reasoning


Q.1 In the following question, select the number which can be placed at the sign of question mark (?) from the given alternatives.

9 3 7
6 2 8
4 5 3
38 20 ?

- Ans 1. 72
 2. 36
 3. 54
 4. 18

Q.2

If a mirror is placed on the line AB, then which of the answer figures is the right image of the given figure?



Ans


✗ 1.



✓ 2.



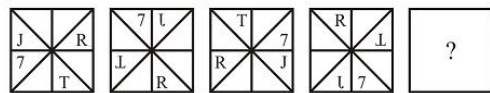
✗ 3.



✗ 4.



Q.3 In the following question, select the figure which can be placed at the sign of question mark (?) from the given alternatives.



Ans

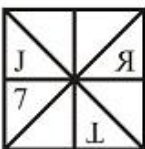
✗ 1.



✓ 2.



✗ 3.



✗ 4.



Q.4 Study the given pattern carefully and select the figure that will complete the pattern given in the question figure.



Ans

✓ 1.



✗ 2.



✗ 3.



✗ 4.



Q.5 Select the number that can replace the question mark (?) in the following series.

16, 17, 21, 30, 46, ?

Ans

✗ 1. 81

✗ 2. 77

✓ 3. 71

✗ 4. 63

Q.6 After interchanging the given two numbers, what will be the value of $6 + 7 \times 3 - 8 \div 4$?

3 and 6

Ans

✓ 1. 43

✗ 2. 41

✗ 3. 42

✗ 4. 38

Q.7 Select the number that can replace the question mark (?) in the following series.

1138, 1150, 1163, 1177, ?

- Ans
- 1. 1196
 - 2. 1202
 - 3. 1192
 - 4. 1204

Q.8 In a certain code language, 'STORED' is written as 'URQPGB'. What is the code for 'POINTA' in that code language?

- Ans
- 1. SNMLWZ
 - 2. SNLMWZ
 - 3. RMLKVY
 - 4. RMKLVY

Q.9 A series is given with one term missing. Select the correct alternative from the given ones that will complete the series.

RAM, VET, ZIA, ?, HQO

- Ans
- 1. DNI
 - 2. DNH
 - 3. DMI
 - 4. DMH

Q.10 Select the option that is related to the third number in the same way as the second number is related to the first number.

39 : 117 :: 45 : ?

- Ans
- 1. 145
 - 2. 155
 - 3. 135
 - 4. 125



Printed Study Kit for MTS (Non-Technical) Exam

- 100% Syllabus Covered
- 5 Booklets
- 1200+ Pages
- 5500+ MCQs



FREE



[Click Here for More Details](#)

What you will get:

- 100% Syllabus Covered
- 5 Booklets
- 1,200+ Pages
- 5,600+ MCQs
- Five Practice Papers
- One Year Current Affairs
- Guidance & Support from Our Experts

Price of the Kit:

~~Rs. 6,000~~

Rs. 2,999/-
(Limited time Offer)



Net Banking

**50%
OFF**

[CLICK HERE](#)

[FOR MORE DETAILS CLICK HERE](#)

[Order Online \(100% Safe\)](#)

Q.11 Six shopkeepers K, P, R, X, A and C are sitting around a circular table facing towards the centre (not necessarily in the same order). C is second to the left of A. P is to the immediate right of K. X is second to the right of R. A is to the immediate left of X.

Which of the following pair of shopkeepers represents the immediate neighbours of X?

- Ans
- 1. A and K
 - 2. A and C
 - 3. K and P
 - 4. A and R

Q.12 In a certain code language, 'TABLE' is written as '2012125', 'ROBIN' is written as '18152914'. What is the code for 'NATOM' in that code language?

- Ans
- 1. 142101153
 - 2. 142011513
 - 3. 141201315
 - 4. 141201513

Q.13 In the following question below are given some statements followed by some conclusions based on those statements. Taking the given statements to be true even if they seem to be at variance from commonly known facts. Read all the conclusions and then decide which of the given conclusion logically follows the given statements.

Statements:

- I. Some D are A.
- II. All A are B.

Conclusions:

- I. Some B are D.
- II. All D are A.

- Ans
- 1. Both conclusion I and II follows
 - 2. Only conclusion II follows
 - 3. Only conclusion I follows
 - 4. Neither conclusion follow

Q.14 In a certain code language, 'PANKIL' is written as 'SDQNLO'. What is the code for 'ROHANS' in that code language?

- Ans
- 1. VRKDQU
 - 2. VRKDQV
 - 3. URKDQU
 - 4. URKDQV

Q.15 In a certain code language, 'GUD' is written as '31', 'PUH' is written as '44'. What is the code for 'FAR' in that code language?

- Ans
- 1. 25
 - 2. 23
 - 3. 24
 - 4. 26

Q.16 Select the option that is related to the third term in the same way as the second term is related to the first term.

Septagon : Figure :: Male : ?

- Ans
- 1. Female
 - 2. Gender
 - 3. Brother
 - 4. Work

Q.17 By interchanging the given two signs which of the following equation will be correct?

+ and -

- Ans
- 1. $11 \times 3 + 5 - 2 = 36$
 - 2. $9 + 16 - 11 \times 2 = 3$
 - 3. $13 - 14 \times 3 + 7 = 48$
 - 4. $16 \times 4 + 11 - 10 = 65$

Q.18 From the given answer figures, select the one in which the question figure is hidden/embedded.



Ans

- 1.



✗ 2.



✓ 3.



✗ 4.



Q.19 Select the option in which the words share the same relationship as that shared by the given pair of words.

Garage : Mechanic :: ?

- Ans
- ✗ 1. Labour : Factory
 - ✓ 2. Hospital : Doctor
 - ✗ 3. Temple : Teacher
 - ✗ 4. Teacher : School

Q.20 Six friends B, D, F, H, J and L are sitting around a circular table facing towards the centre (not necessarily in the same order). B is to the immediate right of L. D is second to the left of J. F is second to the left of H. L is second to the right of H. Who is sitting third to the left of F?





- Ans
- ✗ 1. D
 - ✗ 2. B
 - ✓ 3. J
 - ✗ 4. L

Q.21 There are five cinema halls in a building - Hall 1, Hall 2, Hall 3, Hall 4 and Hall 5. They are one above the other. Hall 1 is at the bottom, then Hall 2 above it and so on. Five movies A, B, C, D and E are displayed in these given halls. Only one movie is displayed in a particular cinema hall. Each movie is displayed only one time. Movie E is displayed at an even numbered hall. Movie B is displayed at Hall 1. Movie A is displayed at the hall just below E. Movie D is not displayed at even numbered hall. Which of the following statement is not correct about movie C?

- Ans
- 1. C is displayed at the hall just below A.
 - 2. C is displayed at the odd number Hall.
 - 3. B is displayed at the hall just below C
 - 4. C is displayed at the even number Hall.

Q.22 Identify the diagram that best represents the relationship among the given classes.

Rat, Shoes, Bat

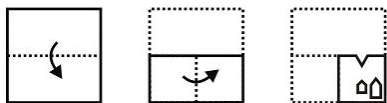
- Ans
- 1. 
 - 2. 
 - 3. 
 - 4. 

Q.23 Select the option that is related to the third term in the same way as the second term is related to the first term.

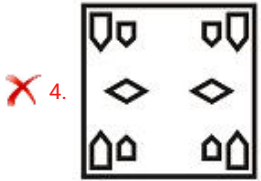
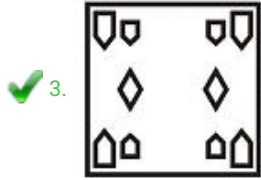
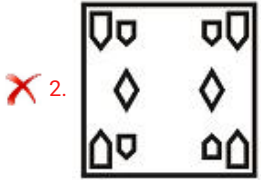
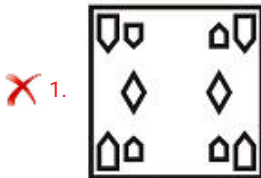
JOM : KPN :: PET : ?

- Ans
- 1. QFV
 - 2. ODS
 - 3. QFU
 - 4. QDU

Q.24 A piece of paper is folded and punched as shown below in the question figures. From the given answer figures, indicate how it will appear when opened?



Ans



Q.25 In the following question below are given some statements followed by some conclusions based on those statements. Taking the given statements to be true even if they seem to be at variance from commonly known facts. Read all the conclusions and then decide which of the given conclusion logically follows the given statements.

Statements:

- I. Some wires are black.
- II. Some wires are yellow.

Conclusions:

- I. Some black are yellow.
- II. Some black are wires.

- Ans**
- ✗ 1. Only conclusion I follows
 - ✗ 2. Both conclusion I and II follows
 - ✗ 3. Neither conclusion follow
 - ✓ 4. Only conclusion II follows



SSC EXAMS PRINTED STUDY NOTES

Study Material for SSC CGL (Tier-1) Examination	English	CLICK HERE
Study Kit for SSC CGL (Tier-2) Exam	English	CLICK HERE
Study Kit for SSC CHSL (10+2) Examination	English	CLICK HERE
Study Kit for SSC Stenographers (Grade 'C' & 'D')	English	CLICK HERE
Study Kit for Multitasking (Non-Technical) - MTS	English	CLICK HERE
Study Kit for SSC Constables (GD) Exam	English	CLICK HERE
Study Kit For SSC Sub-Inspectors in Delhi Police, CAPFs, CISF	English	CLICK HERE
Study Kit for SSC Junior Engineer Exam (Paper-1)	English	CLICK HERE
IAS EXAMS STUDY MATERIALS		
Study Kit for IAS (Pre) GENERAL STUDIES Paper-1 (GS)	English	CLICK HERE
Study Kit for IAS (Pre) CSAT Paper-2(Aptitude)	English	CLICK HERE
सामान्य अध्ययन (GS) प्रारंभिक परीक्षा (Pre) पेपर-1	हिन्दी	CLICK HERE
आई. ए. एस. (सी-सैट) प्रारंभिक परीक्षा पेपर -2	हिन्दी	CLICK HERE
Gist of NCERT Study Kit For UPSC Exams	English	CLICK HERE
यूपीएससी परीक्षा के लिए एनसीईआरटी अध्ययन सामग्री	हिन्दी	CLICK HERE