

Section : General Intelligence & Reasoning

Q.1 Select the option in which the letters share the same relationship as that shared by the given pair of letters.

DP : FR

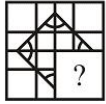
Ans  1. DJ : BH

2. JZ : HB

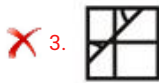
3. LQ : NU

✓ 4. MA : OC

Q.2 Study the given pattern carefully and select the figure that will complete the pattern given in the question figure.



Ans



Q.3 Select the number that can replace the question mark (?) in the following series.  
137, 148, 161, 176, 193, ?

Ans ✗ 1. 214

✓ 2. 212

✗ 3. 224

✗ 4. 232

Q.4 Select the number that can replace the question mark (?) in the following series.

5, 10, 17, 26, 37, ?

Ans ✗ 1. 48

✓ 2. 50

✗ 3. 47

✗ 4. 49

Q.5 Select the option that is related to the third term in the same way as the second term is related to the first term.

Circumference : Circle :: Perimeter : ?

Ans ✗ 1. 3D

✗ 2. Big

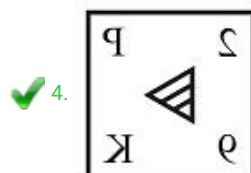
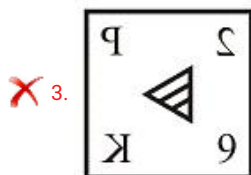
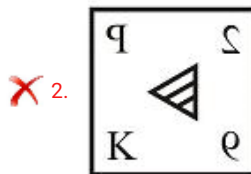
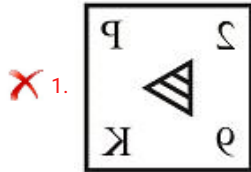
3. Breadth

4. Square

Q.6 Select the correct mirror image of the given figure when the mirror is placed at line AB.



Ans



Q.7 Read the given statements and conclusions carefully. Assuming that the information given in the statements is true, even if it appears to be at variance with commonly known facts, decide which of the given conclusions logically follow(s) from the statements.

Statements:

- I. All red are cars.
- II. Some yellow are red.

Conclusions:

- I. Some yellow are cars.
- II. No yellow is red.

Ans  1. Only conclusion II follows.

2. None of the conclusions follows.

3. Both conclusions I and II follow.

4. Only conclusion I follows.

Question ID : 239087318  
 Status : Answered  
 Chosen Option : 4

Q.8 Read the given statements and conclusions carefully. Assuming that the information given in the statements is true, even if it appears to be at variance with commonly known facts, decide which of the given conclusions logically follow(s) from the statements.

Statements:

- I. All wood are chairs.
- II. All chairs are blue.
- III. No chair is a table.

Conclusions:

- I. Some tables are blue.
- II. No wood is a table.
- III. Some blue are wood.

- Ans
- 1. Only conclusion II follows.
  - 2. Only conclusion III follows.
  - 3. All conclusions, I, II and III, follow
  - 4. Both conclusions II and III follow.

Q.9 Five articles, K, L, P, R and T, are kept one above the other (not necessarily in the same order). K is just above T and just below R. L is just above P and just below T. Which article is at the second position from the bottom?

- Ans
- 1. L
  - 2. T
  - 3. P
  - 4. K

Q.10 In a certain code language, 'TOPAS' is written as 'WRSDV'. What will be the code for 'FREIGHT' in that code language?

- Ans
- 1. KWJNLMY
  - 2. JVIMKLX
  - 3. IUHLJKW
  - 4. IVHLJKW

Q.11 Six computers labelled E, F, G, H, I and J are placed in a row facing towards the north (not necessarily in the same order). Two computers are placed between E and I. G is placed second to the right of J. F is placed second to the right of E. I is placed to the left of E. Which computer is placed to the right of G?

- Ans
- 1. E
  - 2. H
  - 3. F
  - 4. G

Question ID : 239087315  
Status : Answered  
Chosen Option : 3

Q.12 Which two numbers need to be interchanged to make the following equation correct?  
 $4 + 2 \div 3 \times 8 - 1 = 6$

- Ans
- 1. 8 and 4
  - 2. 2 and 4
  - 3. 3 and 8
  - 4. 3 and 4

Q.13 Select the word pair in which the two words are related in the same way as the two words in the following word-pair.

Pen : Author

- Ans
- 1. Knife : Chef
  - 2. Surgeon : Scalpel
  - 3. Carpenter : Saw
  - 4. Gun : Gardener

Q.14 Select the letter-cluster that can replace the question mark (?) in the following series.

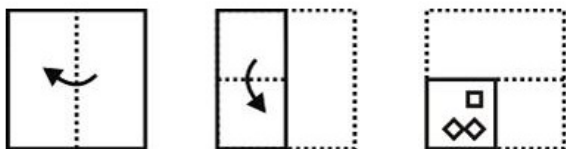
RAP, SCS, TEV, UGY, ?

- Ans
- 1. VJB
  - 2. WJC
  - 3. VIB
  - 4. WJB

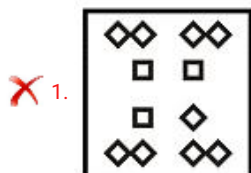
Q.15 In a certain code language, 'ROAD' is written as '40' and 'HEAR' is written as '34'. What will be the code for 'POEM' in that code language?

- Ans
- 1. 50
  - 2. 47
  - 3. 51
  - 4. 49

Q.16 A paper is folded and cut as shown below. How will it appear when unfolded?



Ans





## Printed Study Kit for MTS (Non-Technical) Exam

- 100% Syllabus Covered
- 5 Booklets
- 1200+ Pages
- 5500+ MCQs



 [Click Here for More Details](#)

### What you will get:

- 100% Syllabus Covered
- 5 Booklets
- 1,200+ Pages
- 5,600+ MCQs
- Five Practice Papers
- One Year Current Affairs
- Guidance & Support from Our Experts

Price of the Kit:

~~Rs. 6,000~~

**Rs. 2,999/-**  
(Limited time Offer)



Net Banking


**50%  
OFF**

[CLICK HERE](#)


[FOR MORE DETAILS CLICK HERE](#)

[Order Online \(100% Safe\)](#)


✗ 2.



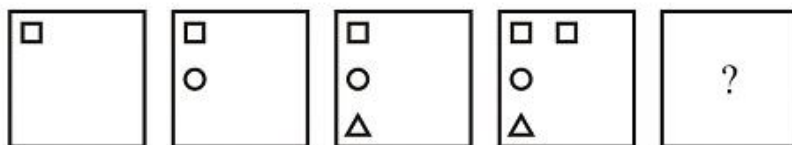
✗ 3.



✓ 4.

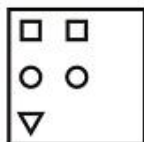



Q.17 Select the figure that will come next in the following series.

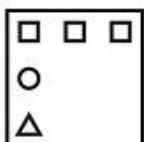


Ans

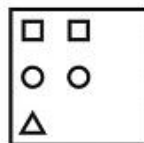
✗ 1.



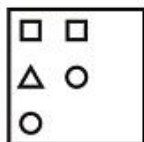
✗ 2.



✓ 3.



✗ 4.




Q.18 Identify the Venn diagram that best represents the relationship between the given classes.

Males, Brothers, Daughters

Ans



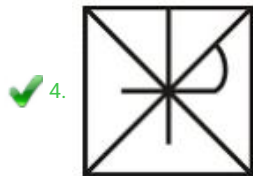
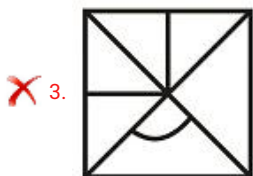
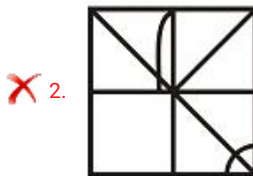
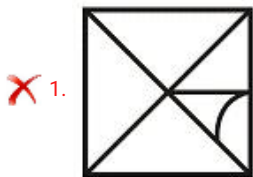
Q.19 In a certain code language, 'ROCKER' is written as 'SNDJFQ'. What will be the code for 'PRIEST' in that code language?

- Ans
- ✗ 1. SSLFVU
  - ✓ 2. QQJDTS
  - ✗ 3. QQJDTU
  - ✗ 4. RRKEUT

Q.20 Select the option in which the given figure is embedded. (Rotation is not allowed)



Ans





Q.21 Five products, N, L, T, V and R, are placed in a row facing towards the east (not necessarily in the same order). T is second to the left of U. N is second to the right of L. R is to the immediate right of U. Which product is at the second position from the north end?

- Ans
- 1. T
  - 2. U
  - 3. N
  - 4. L

Q.22 Select the option that is related to the third number in the same way as the second number is related to the first number.

32 : 61 :: 44 : ?

- Ans
- 1. 71
  - 2. 89
  - 3. 73
  - 4. 67

Q.23 In a certain code language, 'PAIN' is written as '161914' and 'TYRE' is written as '2025185'. What will be the code for 'LONG' in that code language?

- Ans
- 1. 1215917
  - 2. 1215197
  - 3. 1215147
  - 4. 1215417

Q.24 Study the given pattern carefully and select the number that can replace the question mark (?) in it.

5 7 9  
6 8 2  
3 4 1  
48 ? 20

- Ans
- 1. 94
  - 2. 84
  - 3. 88
  - 4. 98

Q.25 If digit 3 is interchanged with digit 1, then what will be the value of the following equation?  
 $6 + 9 \div 1 \times 3 - 2 = ?$

Ans

 1.8

 2.9

 3.6

 4.7



# SSC EXAMS PRINTED STUDY NOTES

<a href="#">Study Material for SSC CGL (Tier-1) Examination</a>	<a href="#">English</a>	<a href="#">CLICK HERE</a>
<a href="#">Study Kit for SSC CGL (Tier-2) Exam</a>	<a href="#">English</a>	<a href="#">CLICK HERE</a>
<a href="#">Study Kit for SSC CHSL (10+2) Examination</a>	<a href="#">English</a>	<a href="#">CLICK HERE</a>
<a href="#">Study Kit for SSC Stenographers (Grade 'C' &amp; 'D')</a>	<a href="#">English</a>	<a href="#">CLICK HERE</a>
<a href="#">Study Kit for Multitasking (Non-Technical) - MTS</a>	<a href="#">English</a>	<a href="#">CLICK HERE</a>
<a href="#">Study Kit for SSC Constables (GD) Exam</a>	<a href="#">English</a>	<a href="#">CLICK HERE</a>
<a href="#">Study Kit For SSC Sub-Inspectors in Delhi Police, CAPFs, CISF</a>	<a href="#">English</a>	<a href="#">CLICK HERE</a>
<a href="#">Study Kit for SSC Junior Engineer Exam (Paper-1)</a>	<a href="#">English</a>	<a href="#">CLICK HERE</a>
<b>IAS EXAMS STUDY MATERIALS</b>		
<a href="#">Study Kit for IAS (Pre) GENERAL STUDIES Paper-1 (GS)</a>	<a href="#">English</a>	<a href="#">CLICK HERE</a>
<a href="#">Study Kit for IAS (Pre) CSAT Paper-2(Aptitude)</a>	<a href="#">English</a>	<a href="#">CLICK HERE</a>
<a href="#">सामान्य अध्ययन (GS) प्रारंभिक परीक्षा (Pre) पेपर-1</a>	<a href="#">हिन्दी</a>	<a href="#">CLICK HERE</a>
<a href="#">आई. ए. एस. (सी-सैट) प्रारंभिक परीक्षा पेपर -2</a>	<a href="#">हिन्दी</a>	<a href="#">CLICK HERE</a>
<a href="#">Gist of NCERT Study Kit For UPSC Exams</a>	<a href="#">English</a>	<a href="#">CLICK HERE</a>
<a href="#">यूपीएससी परीक्षा के लिए एनसीईआरटी अध्ययन सामग्री</a>	<a href="#">हिन्दी</a>	<a href="#">CLICK HERE</a>