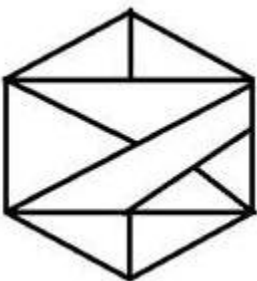


SSC CHSL (Tier - 1) Online Exam Paper - 2018 "held on 11 JULY 2019"

Afternoon-Shift (Reasoning)

Q1. How many triangles are presents in the following figure?



Options:

1. 13
2. 16
3. 14
4. 11

Correct answer: 13

Q2. In a code language, KNIFE is written as MPGHG. How will SWORD be written as in that language?

Options:

1. UYMTE
2. UYQTF
3. UYMTF
4. VYMTF

Correct answer: UYMTF

**Q3. Which number will replace the question mark (?) in the following series?
7, 9, 12, 17, 24, 35, ?**

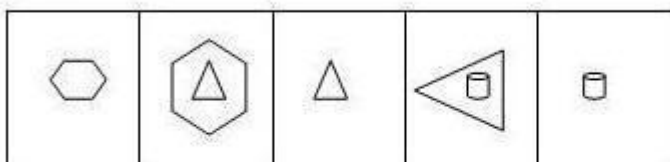
Options:

1. 47
2. 52
3. 45
4. 48

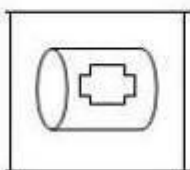
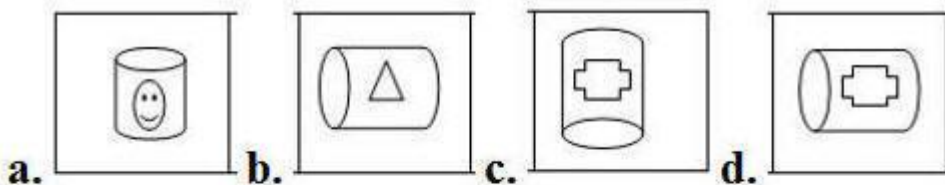
Correct answer: 48

Q4. Select the figure that will come next in the following figure series.

Problem figure



Options:



Correct answer:

Q5. Select the option that is related to the third letter-pair in the same way as the second letter-pair is related to the first letter-pair.

CH : FP :: GK : ?

Options:

1. NU
2. JL
3. JS
4. MP

Correct answer: JS

Q6. Select the number-pair in which the two numbers are related in the same way as are the two numbers of the following number-pair.

7, 13

Options:

1. 15, 19
2. 17, 21
3. 23, 31
4. 17, 25

Correct answer: 23, 31

Q7. What was the day of the week on 26 January 2012?

Options:

1. Sunday
2. Saturday
3. Tuesday
4. Thursday

Correct answer: Thursday

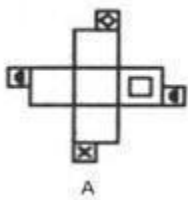
**Q8. Select the set in which the numbers are related in the same way as are the numbers of the following set.
(25, 49, 37)**

Options:

1. (12, 14, 8)
2. (6, 4, 5)
3. (26, 64, 120)
4. (16, 64, 78)

Correct answer: (6, 4, 5)

Q9. A paper sheet is made into the following pattern (A). Find the cube that will best represent after folding the paper (A).



Options:

1. 2, 3 and 4 only
2. 1,3 and 4 only
3. 1,2 and 3 only
4. 2 and 3 only

Correct answer: 2, 3 and 4 only

Q10. Three of the following four letter-clusters are alike in a certain way and one is different. Pick the odd one out.

Options:

1. BDFH
2. IKMO
3. CEGI
4. PRTW

Correct answer: PRTW

Q11. If SAW is coded as 8264 and CUDDLE is coded as 24623231522, then how will MEDULLA be coded as?

Options:

1. 1422237151525
2. 1422236151625
3. 1422236151526
4. 1422236161526

SSC CHSL (10+2) Printed Study Kit



FREE
SHIPPING

- 100% CHSL Exam Syllabus Covered
- 5 Books, 1000+ Pages
- 4500+ MCQs
- Solved Papers & Mock Tests (PDF Copy)
- 1 Year Current Affairs (PDF Copy)

50% OFF
~~₹ 4,000/-~~
₹ 1,999/-

for Exam Help Call Us at: +91 8800734161

SSCPORTAL.IN
India's Largest Online Community for SSC CHSL Exam Preparation

What you will get:

- 100% CHSL Exam Syllabus Covered
- 5 Booklets
- More Than 1000+ Pages
- 4500+ MCQs
- Previous Solved Papers
- Current Affairs for Exam
- Guidance & Support from Our Experts

Price of the Kit:

Rs. 4,000

Rs. 1,999/-
(Limited time Offer)

 **Buy Online**



Net Banking

Order Online (100% Safe)

[Click here for Other Payment Options \(Cash/NEFT/etc\)](#)

FOR MORE DETAILS CLICK HERE



Correct answer: 1422236151526

Q12. 'RETINA' is related to 'EYE' in the same way as 'HYDROGEN' is related to '_____'.

Options:

1. LEGS
2. IODINE
3. WATER
4. EAR

Correct answer: WATER

**Q13. Select the set in which the numbers are related in the same way as are the numbers of the following set.
(16, 23, 32)**

Options:

1. (6, 14, 25)
2. (11, 18, 27)
3. (10, 17, 28)
4. (10, 23, 46)

Correct answer: (11, 18, 27)

Q14. Two statements are given, followed by four conclusions numbered I, II III and IV. Assuming the statements to be true, even if they seem to be at variance with commonly known facts, decide which of the conclusions logically follow(s) from the statements.

Statement :

No carrot is root.

All roots are potatoes.

Conclusions:

I. No carrot is potatoes.

II. No potatoes is carrot.

III. Some potatoes are roots.

IV . All the potatoes are roots.

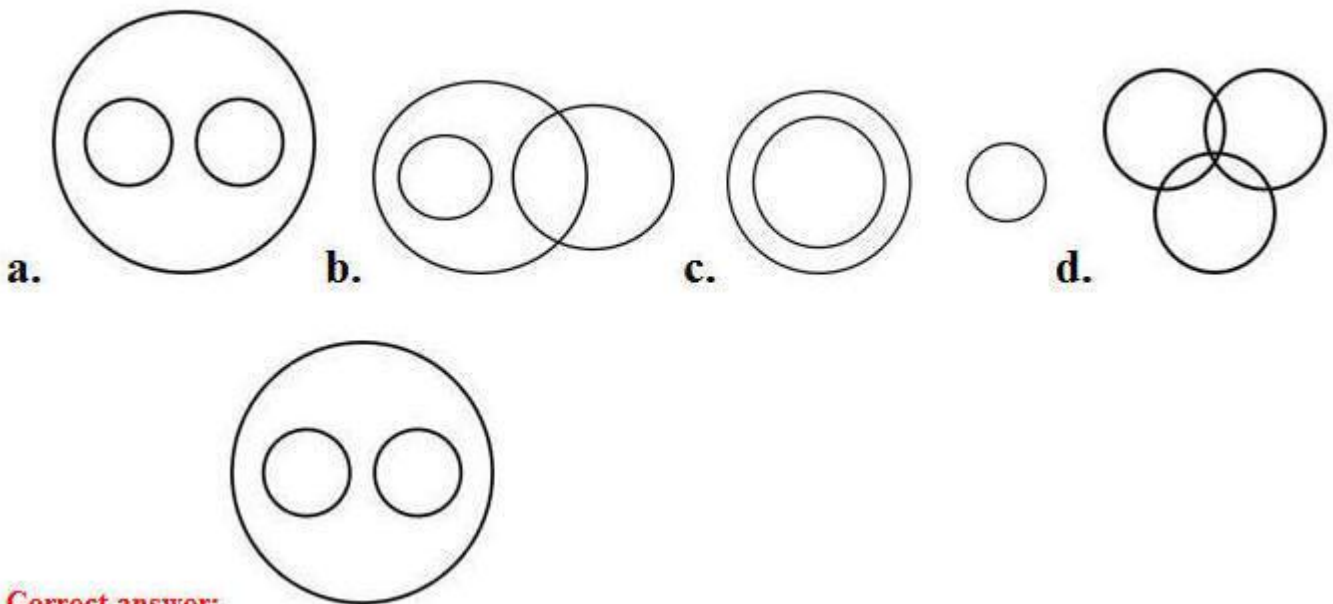
Options:

1. Conclusion (I) and (II) follows
2. Only conclusion (I) follow
3. Conclusion (I) and (IV) follows
4. Only conclusion (III) follow

Correct answer: Only conclusion (III) follow

**Q15. Select the Venn diagram that best illustrates the relationship between the following classes.
Ants, Butterflies, Insects**

Options:



Correct answer:

**Q16. Which two signs and two numbers should be interchanged in the following equation to make it correct?
 $8 + 15 - 20 \times 10 \div 5 = 47$**

Options:

1. \times and $-$, 15 and 20
2. $+$ and $-$, 8 and 15

- 3. \times and \div , 5 and 8
- 4. $+$ and \div , 10 and 20

Correct answer: $+$ and $-$, 8 and 15

Q17. Arrange the following words in the sequence as they appear in English dictionary order.

- 1. Master
- 2. Marvel
- 3. Market
- 4. Marker
- 5. Marble
- 6. Margin

Options:

- 1. 6, 5, 4, 2, 1, 3
- 2. 5, 4, 6, 3, 2, 1
- 3. 5, 6, 4, 3, 1, 2
- 4. 5, 6, 4, 3, 2, 1

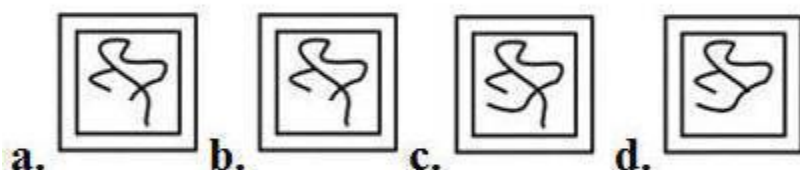
Correct answer: 5, 6, 4, 3, 2, 1

Q18. Select the option in which the given figure (X) is embedded.



X

Options:



Correct answer:



**Q19. Three of the following four words are alike in a certain way and one is different.
Pick the odd word out.**

Options:

1. Goose
2. Kiwi
3. Vulture
4. Eagle

Correct answer: Kiwi

**Q20. Which letter-pair will replace the question mark (?) in the following series?
EI, GK, ? , KO, MQ**

Options:

1. JK
2. IM

- 3. IL
- 4. KM

Correct answer: IM

Q21. Select the word-pair in which the two words are related in the same way as are the two words in the following word-pair.

Ostrich : Eagle

Options:

- 1. Whale : Kite
- 2. Cow : Elephant
- 3. Hen : Goat
- 4. Swan : Lion

Correct answer: Cow : Elephant

Q22. Select the correct mirror image of the given figure when the mirror is placed to the left of the figure.

SSC CHSL(10+2) परीक्षा अध्ययन सामग्री



- 100% CHSL Exam Syllabus Covered
- 5 Books, 900+ Pages
- 2500+ MCQs
- 1 Year Current Affairs (PDF Copy)
- Support & Guidance

50% OFF
~~₹ 4,000/-~~
₹ 1,999/-

FREE SHIPPING

for Exam Help Call Us at: +91 8800734161

SSCPORTAL.IN

आप क्या प्राप्त करेंगे?

- माध्यम: हिन्दी
- 100 प्रतिशत पाठ्यक्रम
- 900 से अधिक पृष्ठ
- 2500 से अधिक वस्तुनिष्ठ प्रश्न
- कुल 5 पुस्तिकाएँ
- अध्यायवार M.C.Q
- गणित एवं तार्किक क्षमता को हल करने की सरल विधि
- 5 अभ्यास प्रश्न पत्र (PDF Copy)
- हमारे विशेषज्ञों द्वारा मार्गदर्शन और सहायता

Price of the Kit:

Rs. 4,200

Rs. 1,999/-
 (Limited time Offer)

Buy Online

VISA Maestro MasterCard RuPay

Net Banking

Order Online (100% Safe)

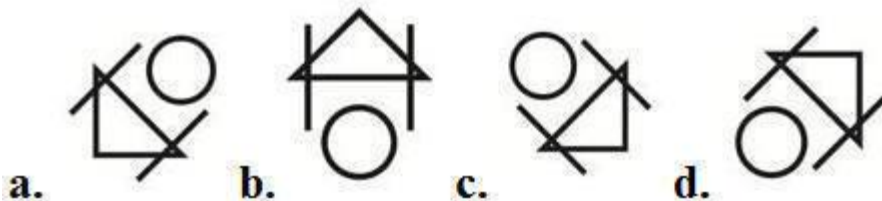
[Click here for Other Payment Options \(Cash/NEFT/etc\)](#)

FOR MORE DETAILS CLICK HERE

50% OFF



Options:



Correct answer:

Q23. Three of the following four numbers are alike in a certain way and one is different.

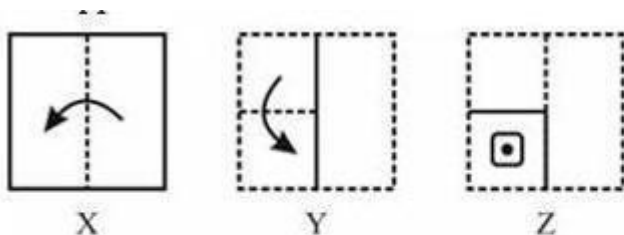
Pick the number that is different from the rest.

Options:


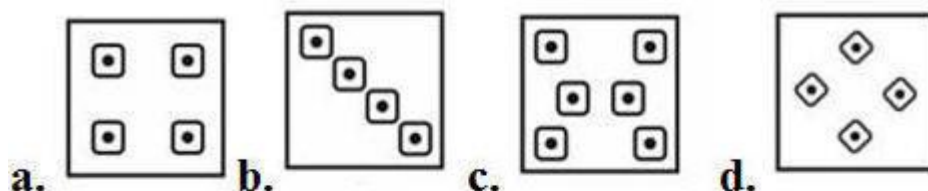
1. 13
2. 23
3. 17
4. 51

Correct answer: 51

Q24. A paper is folded and cut as shown in the following figures . Select the option that depicts how this paper will appear when unfolded?



Options:



Correct answer:

Q25. Mala and Lali are sisters. Mahesh is father of Dev. Gargi is mother of Mala and Dev. How Mahesh's father is related to Lali?

Options:

1. Paternal Grand Father
2. Maternal Grand Father
3. Uncle
4. Father

Correct answer: Paternal Grand Father



SSC EXAMS PRINTED STUDY NOTES

Study Material for SSC CGL (Tier-1) Examination	English	CLICK HERE
Study Kit for SSC CGL (Tier-2) Exam	English	CLICK HERE
Study Kit for SSC CHSL (10+2) Examination	English	CLICK HERE
Study Kit for SSC Stenographers (Grade 'C' & 'D')	English	CLICK HERE
Study Kit for Multitasking (Non-Technical) - MTS	English	CLICK HERE
Study Kit for SSC Constables (GD) Exam	English	CLICK HERE
Study Kit For SSC Sub-Inspectors in Delhi Police, CAPFs, CISF	English	CLICK HERE
Study Kit for SSC Junior Engineer Exam (Paper-1)	English	CLICK HERE
IAS EXAMS STUDY MATERIALS		
Study Kit for IAS (Pre) GENERAL STUDIES Paper-1 (GS)	English	CLICK HERE
Study Kit for IAS (Pre) CSAT Paper-2(Aptitude)	English	CLICK HERE
सामान्य अध्ययन (GS) प्रारंभिक परीक्षा (Pre) पेपर-1	हिन्दी	CLICK HERE
आई. ए. एस. (सी-सैट) प्रारंभिक परीक्षा पेपर -2	हिन्दी	CLICK HERE
Gist of NCERT Study Kit For UPSC Exams	English	CLICK HERE
यूपीएससी परीक्षा के लिए एनसीईआरटी अध्ययन सामग्री	हिन्दी	CLICK HERE