

---

**SSC CHSL (Tier - 1) Online Exam Paper - 2018 "held on 08 July 2019"**

**Morning Shift (Reasoning)**

---

**Q.1. In a code language, CARNIVAL is written as LPYAJYTG. How will DISTANCE be written as in that language?**

Options

1. RPGBCZLY
2. RQGBDAMY
3. RQBCALY
4. SQHBCALZ

**Correct answer : RQBCALY**

**Q.2. Three of the following four letter-clusters are alike in a certain way and one is different. Pick the odd one out.**

Options

1. DFHJ
2. BDGJ
3. JLNP
4. VXZB

**Correct answer : BDGJ**

**Q.3. Select the option that is related to the third letter-cluster in the same way as the second letter-cluster is related to the first letter-cluster.**

**KSOE : MQQC :: ACZN : ?**

Options

1. CABK
2. CABL
3. DACL
4. CBBL

**Correct answer : CABL**

**Q.4. Three friends A, B and C have different amounts of rupees with them. If B takes ₹ 7 from A, then B will have equal amount as C has. B and C together have total ₹ 157. How many rupees does C have?**

Options

1. 80
2. 83
3. 81
4. 82

**Correct answer : 82**

**Q.5. Select the number-pair in which the two numbers are related in the same way as are the two numbers of the following number-pair.**

**12 : 102**

Options

1. 6 : 52
2. 14 : 126
3. 8 : 68
4. 16 : 218

**Correct answer : 8 : 68**

**Q.6. Select the word-pair in which the two words are related in the same way as are the two words in the following word-pair.**

**Exercise : Fitness**

Options

1. Education : Institute
2. Hobby : Internet
3. Treatment : Recovery
4. Harmony : War

**Correct answer : Treatment : Recovery**

**Q.7. Two statements are given, followed by three conclusions numbered I, II and III. Assuming the statements to be true, even if they seem to be at variance with commonly known facts, decide which of the conclusions logically follow(s) from the statements.**

**Statements:**

All equipment are screw-drivers.  
All machines are equipment.

**Conclusions:**

- I. Some screw-drivers are equipment.
- II. Some screw-drivers are machines.
- III. All equipment are machines.

Options

1. Only conclusions II and III follow.
2. Only conclusions I and III follow.

3. All conclusions follow.
4. Only conclusions I and II follow.

**Correct answer : Only conclusions I and II follow.**

**Q.8. Which of the following sequence of signs will correctly solve the given equation by replacing the question marks?  
 $1105 ? 65 ? 835 ? 25 ? 5 = 727$**

Options

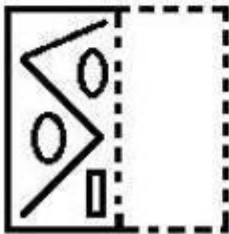
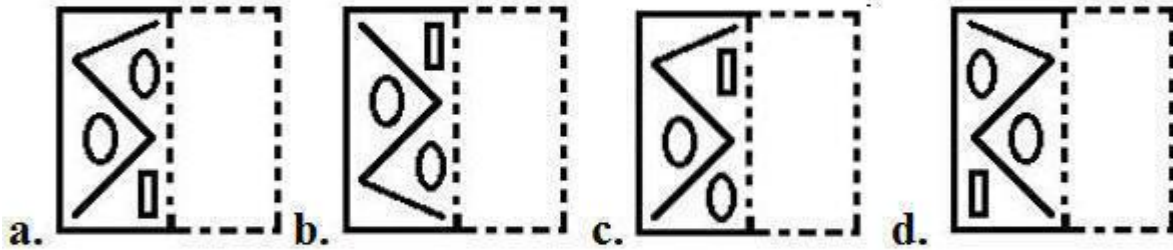
1. +, ÷, -, ×
2. ×, -, +, ÷
3. +, -, ×, ÷
4. ÷, +, -, ×

**Correct answer : ÷, +, -, ×**

**Q.9. A figure of transparent sheet with a pattern is given below. Select the option that shows how the pattern would appear when the transparent sheet is folded at the dotted line.**



Options :

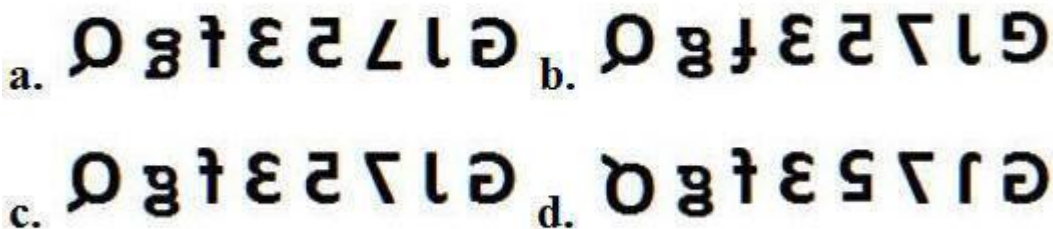


Correct answer:

**Q.10. Select the correct mirror image of the given figure when the mirror is placed to the right of the figure.**

**G J 7 5 3 f g Q**

Options:



Correct answer: **G 1 7 2 3 f g Q**

# SSC CHSL (10+2) Printed Study Kit



FREE SHIPPING 

- 100% CHSL Exam Syllabus Covered
- 5 Books, 1000+ Pages
- 4500+ MCQs
- Solved Papers & Mock Tests (PDF Copy)
- 1 Year Current Affairs (PDF Copy)

**50% OFF**  
₹ 4,000/-  
₹ **1,999/-**

for Exam Help Call Us at: +91 8800734161

 **SSCPORTAL.IN**  
India's Largest Online Community for SSC CHSL Exam Preparation

## What you will get:

- 100% CHSL Exam Syllabus Covered
- 5 Booklets
- More Than 1000+ Pages
- 4500+ MCQs
- Previous Solved Papers
- Current Affairs for Exam
- Guidance & Support from Our Experts

Price of the Kit:

~~Rs. 4,000~~

**Rs. 1,999/-**

*(Limited time Offer)*



Net Banking

**Order Online (100% Safe)**

[Click here for Other Payment Options \(Cash/NEFT/etc\)](#)

**FOR MORE DETAILS CLICK HERE**



**Q.11. 'Heart' is related to 'Circulation' in the same way as 'Lungs' are related to '\_\_\_\_\_'.**

Options

1. Excretion
2. Ribs
3. Respiration
4. Oxygen

**Correct answer : Respiration**

**Q.12. Select the set in which the numbers are related in the same way as are the numbers of the following set.  
(4, 41, 5)**

Options

1. (7, 81, 9)
2. (5, 61, 6)
3. (6, 85, 8)
4. (2, 21, 4)

**Correct answer : (7, 81, 9)**

**Q.13. A + B means 'A is mother of B'**

**A – B means 'A is husband of B'**

**A × B means 'A is son of B'**

**A ÷ B means 'A is brother of B'**

**If  $Q \div U \times K \times H - D + J$ , then how is K related to J?**

Options

1. Father
2. Paternal uncle
3. Brother
4. Sister

**Correct answer : Brother**

**Q.14. Select the combination of letters that when sequentially placed in the gaps of the given letter series will complete the series.**

**t s m \_ \_ n q \_ \_ s m m n \_ \_ s t \_ m m n \_ q s**

Options

1. nmstnqns
2. mmstmqtn
3. mnstnqsn
4. mnstnqmn

**Correct answer : mnstnqsn**

**Q.15. Arrange the following activities in a logical and meaningful order.**

1. Marriage hall booking
2. Deciding marriage day
3. Inviting guests
4. Marriage ceremony
5. Invitation cards printing

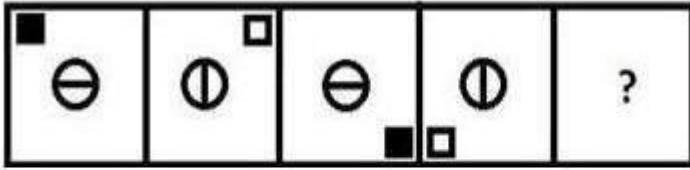
Options

1. 2, 1, 3, 5, 4
2. 1, 2, 3, 5, 4
3. 2, 1, 3, 4, 5
4. 2, 1, 5, 3, 4

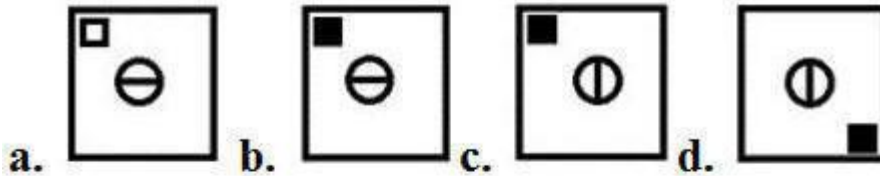
**Correct answer : 2, 1, 5, 3, 4**

**Q.16. Select the figure that will come next in the following figure series.**





Options



Correct answer:

**Q.17. Select the set in which the numbers are related in the same way as are the numbers of the following set.**

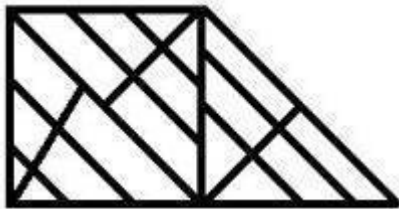
**(8, 27, 64)**

Options

1. (216, 343, 529)
2. (125, 636, 864)
3. (343, 512, 729)
4. (49, 64, 81)

Correct answer : (343, 512, 729)

**Q.18. How many triangles are present in the given figure?**



Options

- 1. 28
- 2. 29
- 3. 30
- 4. 27

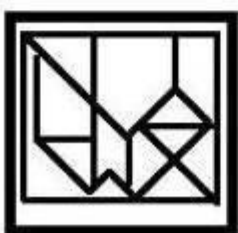
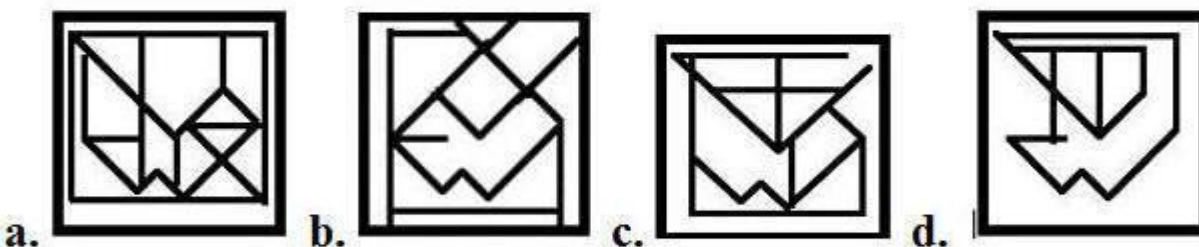
**Correct answer : 27**

**Q.19. Select the option in which Figure- X is embedded.  
(Rotation is not allowed)**



**Figure-X**

Options:



**Correct answer:**

**Q.20. If FINANCIAL is coded as 695153913, then how will  
LUCRATIVE be coded as?**

Options

- 1. 433922945
- 2. 333912955

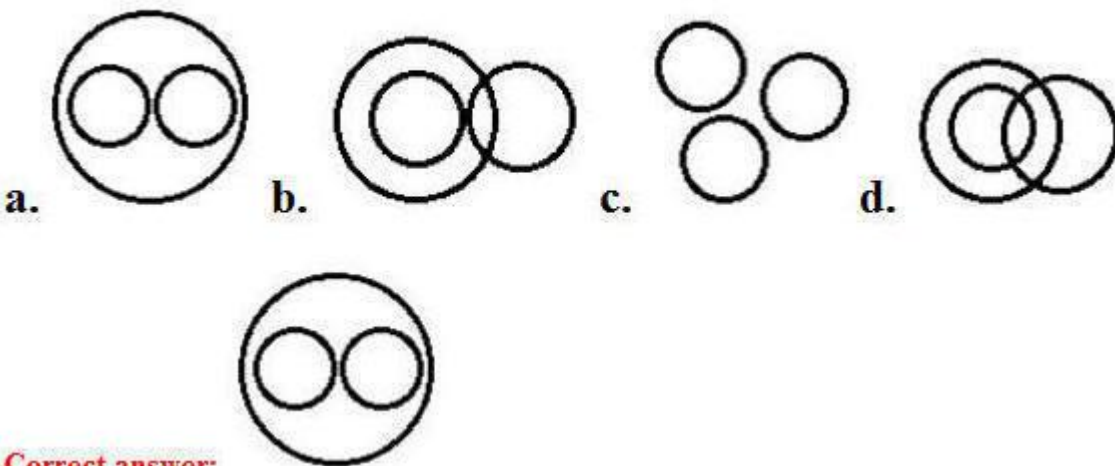
3. 343912945

4. 333912945

**Correct answer : 343912945**

**Q.21. Select the Venn diagram that best illustrated the relationship between the following classes.  
Mobile phones, Electronic devices, Laptops**

Options:



**Correct answer:**

**Q.22. Three of the following four words are alike in a certain way and one is different. Pick the odd word out.**

Options

1. Energy
2. Protein
3. Carbohydrates
4. Vitamins

**Correct answer : Energy**

**Q.23. Three of the following four numbers are alike in a certain way and one is different. Pick the number that is different from the rest.**

Options

# SSC CHSL(10+2) परीक्षा अध्ययन सामग्री



- 100% CHSL Exam Syllabus Covered
- 5 Books, 900+ Pages
- 2500+ MCQs
- 1 Year Current Affairs (PDF Copy)
- Support & Guidance

**50% OFF**  
~~₹ 4,000/-~~  
**₹ 1,999/-**

FREE SHIPPING 

for Exam Help Call Us at: +91 8800734161

 **SSCPORTAL.IN**

## आप क्या प्राप्त करेंगे?

- माध्यम: हिन्दी
- 100 प्रतिशत पाठ्यक्रम
- 900 से अधिक पृष्ठ
- 2500 से अधिक वस्तुनिष्ठ प्रश्न
- कुल 5 पुस्तिकाएँ
- अध्यायवार M.C.Q
- गणित एवं तार्किक क्षमता को हल करने की सरल विधि
- 5 अभ्यास प्रश्न पत्र (PDF Copy)
- हमारे विशेषज्ञों द्वारा मार्गदर्शन और सहायता

Price of the Kit:

~~Rs. 4,200~~

**Rs. 1,999/-**

(Limited time Offer)

 **Buy Online**

Net Banking

**Order Online (100% Safe)**

[Click here for Other Payment Options \(Cash/NEFT/etc\)](#)

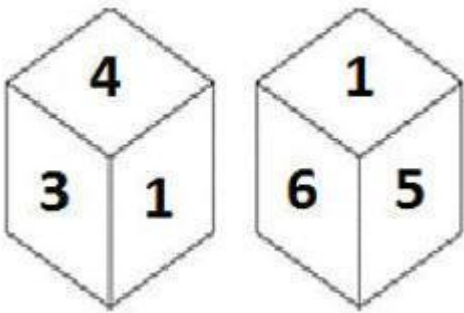
**FOR MORE DETAILS CLICK HERE**

**50% OFF**

1. 171
2. 191
3. 173
4. 193

**Correct answer : 171**

**Q.24. Two different positions of the same dice are shown below, the six faces of which are numbered 1 to 6. Find the number opposite to the face having 1**



Options

1. 5
2. 2
3. 3
4. 4

**Correct answer : 2**

**Q.25. Which number will replace the question mark (?) in the following series?  
25, 42, 67, 101, 145, ?**

Options

1. 199
2. 200
3. 201
4. 202

**Correct answer : 200**





<a href="#">Study Material for SSC CGL (Tier-1) Examination</a>	<a href="#">English</a>	<a href="#">CLICK HERE</a>
<a href="#">Study Kit for SSC CGL (Tier-2) Exam</a>	<a href="#">English</a>	<a href="#">CLICK HERE</a>
<a href="#">Study Kit for SSC CHSL (10+2) Examination</a>	<a href="#">English</a>	<a href="#">CLICK HERE</a>
<a href="#">Study Kit for SSC Stenographers (Grade 'C' &amp; 'D')</a>	<a href="#">English</a>	<a href="#">CLICK HERE</a>
<a href="#">Study Kit for Multitasking (Non-Technical) - MTS</a>	<a href="#">English</a>	<a href="#">CLICK HERE</a>
<a href="#">Study Kit for SSC Constables (GD) Exam</a>	<a href="#">English</a>	<a href="#">CLICK HERE</a>
<a href="#">Study Kit For SSC Sub-Inspectors in Delhi Police, CAPFs, CISF</a>	<a href="#">English</a>	<a href="#">CLICK HERE</a>
<a href="#">Study Kit for SSC Junior Engineer Exam (Paper-1)</a>	<a href="#">English</a>	<a href="#">CLICK HERE</a>
<b>IAS EXAMS STUDY MATERIALS</b>		
<a href="#">Study Kit for IAS (Pre) GENERAL STUDIES Paper-1 (GS)</a>	<a href="#">English</a>	<a href="#">CLICK HERE</a>
<a href="#">Study Kit for IAS (Pre) CSAT Paper-2(Aptitude)</a>	<a href="#">English</a>	<a href="#">CLICK HERE</a>
<a href="#">सामान्य अध्ययन (GS) प्रारंभिक परीक्षा (Pre) पेपर-1</a>	<a href="#">हिन्दी</a>	<a href="#">CLICK HERE</a>
<a href="#">आई. ए. एस. (सी-सैट) प्रारंभिक परीक्षा पेपर -2</a>	<a href="#">हिन्दी</a>	<a href="#">CLICK HERE</a>
<a href="#">Gist of NCERT Study Kit For UPSC Exams</a>	<a href="#">English</a>	<a href="#">CLICK HERE</a>
<a href="#">यूपीएससी परीक्षा के लिए एनसीईआरटी अध्ययन सामग्री</a>	<a href="#">हिन्दी</a>	<a href="#">CLICK HERE</a>