

---

## **SSC CHSL (Tier - 1) Online Exam Paper - 2018 "held on 08 July 2019"**

### **Evening Shift (Reasoning)**

---

**Q1. Which two numbers should be interchanged in the following equation to make it correct?**

$$731 \div 13 + 450 - 25 \times 43 = 142$$

Options :

1. 13 and 25
2. 450 and 25
3. 13 and 43
4. 731 and 450

**Correct answer : 13 and 43**

**Q2. Three of the following four words are alike in a certain way and one is different. Pick the odd word out.**

Options :

1. Apprehensive
2. Nervous
3. Anxious
4. Serene

**Correct answer :Serene**

**Q3. Two statements are given, followed by three conclusions numbered I, II and III. Assuming the statements to be true, even if they seem to be at variance with commonly known facts, decide which of the conclusions logically follow(s) from the statements.**

**Statements:**

Some chilies are potatoes.  
Some potatoes are onions.

**Conclusions:**

- I. Some onions are chilies.
- II. Some onions are potatoes.
- III. No onion is chilly.

Options :

1. Conclusion II and either conclusion I or III follow.
2. Only conclusions I and II follow.
3. Conclusion I and either conclusion II or III follow.
4. Only conclusions II and III follow.

**Correct answer : Conclusion II and either conclusion I or III follow.**

**Q4. Select the option in which Figure-X is embedded.  
(Rotation is not allowed)**

Options :


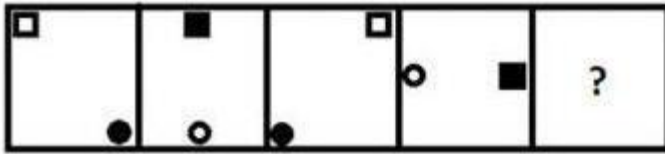


Figure-X

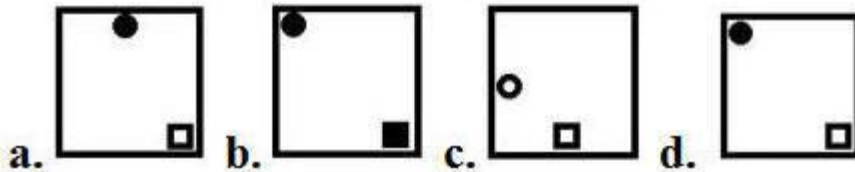
- a. b. c. d.

**Correct answer:**


**Q5. Select the figure that will come next in the following figure series.**



Options :



Correct answer :



**Q6. Select the option that is related to the third letter-cluster in the same way as the second letter-cluster is related to the first letter-cluster.**

**SMKJ : VONL :: DPOA : ?**

Options :

1. HRRD
2. GSSD
3. GSSC
4. GRRC

Correct answer : GRRC

**Q7. Select the combination of letters that when sequentially placed in the gaps of the given letter series will complete the series.**

**x \_ \_ y q \_ \_ t x z \_ \_ q s q t x \_ \_ y q s \_ t**

Options :

1. y y s q z y z y q
2. z y q s y z z y q

3. z y s q y y z y q
4. z y s q y y y z t

**Correct answer : z y s q y y z y q**

**Q8. ‘Tadpole’ is related to ‘Frog’ in the same way as ‘Caterpillar’ is related to ‘\_\_\_\_\_’.**

Options :

1. Baboon
2. Bat
3. Boar
4. Butterfly

**Correct answer : Butterfly**

**Q9. Arrange the following activities in a logical and meaningful order.**

1. Attending classes in college
2. Admission merit list declaration
3. Getting admission in the college
4. Applying for admission to college
5. Annual Examination – Class 12
6. Result declaration – Class 12

Options :

1. 5, 6, 4, 2, 3, 1
2. 6, 5, 4, 2, 3, 1
3. 5, 6, 2, 4, 3, 1
4. 5, 6, 4, 2, 1, 3

**Correct answer : 5, 6, 4, 2, 3, 1**

**Q10. Select the correct mirror image of the given figure when the mirror is placed to the right of the figure.**

# SSC CHSL (10+2) Printed Study Kit



- 100% CHSL Exam Syllabus Covered
- 5 Books, 1000+ Pages
- 4500+ MCQs
- Solved Papers & Mock Tests (PDF Copy)
- 1 Year Current Affairs (PDF Copy)

**50% OFF**  
₹ 4,000/-  
₹ **1,999/-**

FREE SHIPPING

for Exam Help Call Us at: +91 8800734161

SSCPORTAL.IN

## What you will get:

- 100% CHSL Exam Syllabus Covered
- 5 Booklets
- More Than 1000+ Pages
- 4500+ MCQs
- Previous Solved Papers
- Current Affairs for Exam
- Guidance & Support from Our Experts

Price of the Kit:

**Rs. 4,000**

**Rs. 1,999/-**  
(Limited time Offer)

 **Buy Online**

VISA Maestro MasterCard RuPay

Net Banking

**Order Online (100% Safe)**

**[Click here for Other Payment Options \(Cash/NEFT/etc\)](#)**

**[FOR MORE DETAILS CLICK HERE](#)**

**50% OFF**

**B f D e Y 5 3 2**

Options :

a. **B f D e Y 5 3 2**

b. **B f D e Y 5 3 2**

c. **B f D e Y 5 3 2**

d. **B f D e Y 5 3 2**

**B f D e Y 5 3 2**

**Correct answer :**

**Q11. Three of the following four letter-clusters are alike in a certain way and one is different. Pick the odd one out.**

Options :

1. JNRW
2. DHLP
3. PTXB
4. RVZD

**Correct answer : JNRW**

**Q12. Which number will replace the question mark (?) in the following series?**

**77, 92, 125, 178, 253, ?**

Options :

1. 351
2. 352
3. 350
4. 353

**Correct answer : 352**

**Q13. Select the set in which the numbers are related in the same way as are the numbers of the following set.  
(4, 113, 7)**

Options :

1. (8, 155, 4)
2. (5, 141, 4)
3. (3, 118, 9)
4. (6, 161, 4)

**Correct answer : (5, 141, 4)**

**Q14. If DIRECTOR is coded as 49953269, then how will FRIENDLY be coded as?**

Options :

1. 68955438
2. 69955437
3. 69845447
4. 79954435

**Correct answer : 69955437**

**Q15. Select the set in which the numbers are related in the same way as are the numbers of the following set.  
(8, 112, 28)**

Options :

1. (16, 282, 36)
2. (14, 364, 52)
3. (12, 216, 34)
4. (18, 216, 22)

**Correct answer :**



**Q16. Select the number-pair in which the two numbers are related in the same way as are the two numbers of the following number-pair.**

**2 : 9**

Options :

1. 7 : 50
2. 3 : 26
3. 4 : 65
4. 8 : 65

**Correct answer :**

**Q17. A + B means : ‘A is sister of B’**

**A – B means : ‘A is daughter of B’**

**A × B means : ‘A is brother of B’**

**A ÷ B means : ‘A is mother of B’**

**If D + P ÷ I × K ÷ T – R, then how is R related to P?**

Options :

1. Daughter’s son
2. Son
3. Brother
4. Daughter’s husband

**Correct answer : Daughter’s husband**

**Q18. Select the word-pair in which the two words are related in the same way as are the two words in the following word-pair.**

**Detailed : Meticulous**

Options :

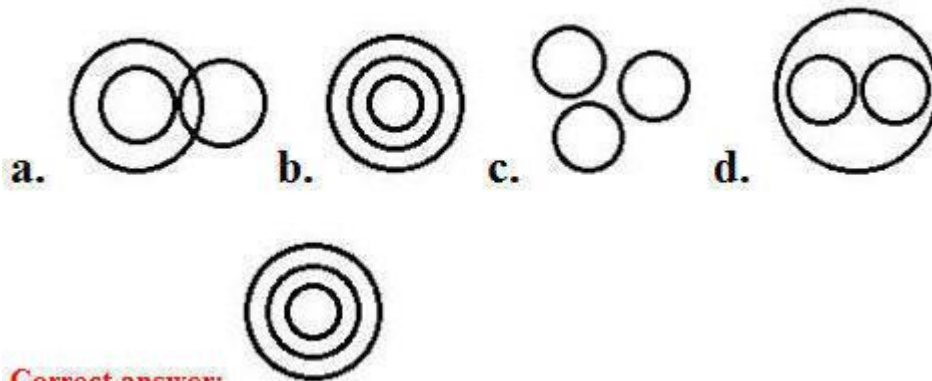
1. Heavy : Light
2. Hungry : Fulfilled
3. Loud : Loose
4. Fat : Obese

**Correct answer :**

**Q19. Select the Venn diagram that best illustrates the relationship between the following classes.**

**Food, Lentils, pulses**

Options:



**Correct answer:**



**Q20. In a code language, ADVISORY is written as GDLYRVBU. How will CHEMICAL be written as in that language?**

Options :

1. MFOHFLOD
2. JFPGFMOD
3. KFPHFLOD
4. KFQHFLPE

**Correct answer :-KFPHFLOD**

**Q21. A total sum of ₹ 153 is distributed among three friends A, B and C in such a way that C gets 5 times as much money than A gets and B gets 3 times as much money than A gets. How many rupees does B get?**

Options :

# SSC CHSL(10+2) परीक्षा अध्ययन सामग्री



- 100% CHSL Exam Syllabus Covered
- 5 Books, 900+ Pages
- 2500+ MCQs
- 1 Year Current Affairs (PDF Copy)
- Support & Guidance

**50% OFF**  
~~₹ 4,000/-~~  
**₹ 1,999/-**

**FREE SHIPPING**

for Exam Help Call Us at: +91 8800734161

**SSCPORTAL.IN**

## आप क्या प्राप्त करेंगे?

- माध्यम: हिन्दी
- 100 प्रतिशत पाठ्यक्रम
- 900 से अधिक पृष्ठ
- 2500 से अधिक वस्तुनिष्ठ प्रश्न
- कुल 5 पुस्तिकाएँ
- अध्यायवार M.C.Q
- गणित एवं तार्किक क्षमता को हल करने की सरल विधि
- 5 अभ्यास प्रश्न पत्र (PDF Copy)
- हमारे विशेषज्ञों द्वारा मार्गदर्शन और सहायता

Price of the Kit:

**Rs. 4,200**

**Rs. 1,999/-**  
*(Limited time Offer)*

**Buy Online**

**Net Banking**

**Order Online (100% Safe)**

[Click here for Other Payment Options \(Cash/NEFT/etc\)](#)

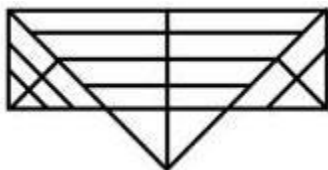
**FOR MORE DETAILS CLICK HERE**

**50% OFF**

1. 66
2. 65
3. 61
4. 51

**Correct answer : 51**

**Q22. How many triangle are present in the given figure?**

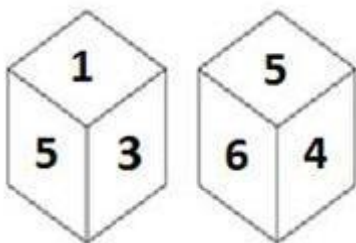


Options :

1. 30
2. 31
3. 28
4. 32

**Correct answer :- 30**

**Q23. Two different positions of the same dice are shown below, the six faces of which are numbered 1 to 6. Find the number on the face opposite to the one having 5.**



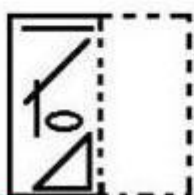
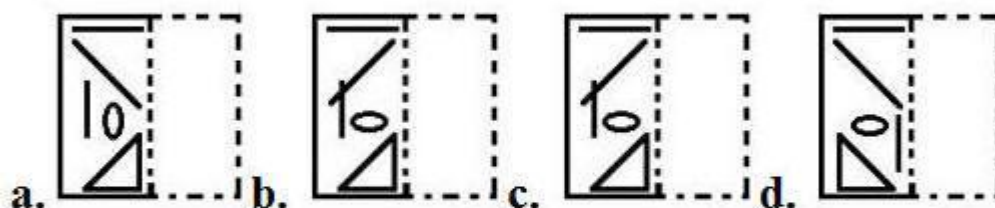
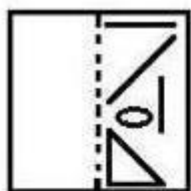
Options :

1. 6
2. 3
3. 4
4. 2

**Correct answer : 2**

**Q24.** A figure of transparent sheet with a pattern is given below. Select the option that shows how the pattern would appear when the transparent sheet is folded at the dotted line.

Options :



**Correct answer :**

**Q25.** Three of the following four numbers are alike in a certain way and one is different. Pick the number that is different from the rest.

Options :

1. 49
2. 16
3. 25
4. 64

**Correct answer : 64**



<a href="#">Study Material for SSC CGL (Tier-1) Examination</a>	<a href="#">English</a>	<a href="#">CLICK HERE</a>
<a href="#">Study Kit for SSC CGL (Tier-2) Exam</a>	<a href="#">English</a>	<a href="#">CLICK HERE</a>
<a href="#">Study Kit for SSC CHSL (10+2) Examination</a>	<a href="#">English</a>	<a href="#">CLICK HERE</a>
<a href="#">Study Kit for SSC Stenographers (Grade 'C' &amp; 'D')</a>	<a href="#">English</a>	<a href="#">CLICK HERE</a>
<a href="#">Study Kit for Multitasking (Non-Technical) - MTS</a>	<a href="#">English</a>	<a href="#">CLICK HERE</a>
<a href="#">Study Kit for SSC Constables (GD) Exam</a>	<a href="#">English</a>	<a href="#">CLICK HERE</a>
<a href="#">Study Kit For SSC Sub-Inspectors in Delhi Police, CAPFs, CISF</a>	<a href="#">English</a>	<a href="#">CLICK HERE</a>
<a href="#">Study Kit for SSC Junior Engineer Exam (Paper-1)</a>	<a href="#">English</a>	<a href="#">CLICK HERE</a>
<b>IAS EXAMS STUDY MATERIALS</b>		
<a href="#">Study Kit for IAS (Pre) GENERAL STUDIES Paper-1 (GS)</a>	<a href="#">English</a>	<a href="#">CLICK HERE</a>
<a href="#">Study Kit for IAS (Pre) CSAT Paper-2(Aptitude)</a>	<a href="#">English</a>	<a href="#">CLICK HERE</a>
<a href="#">सामान्य अध्ययन (GS) प्रारंभिक परीक्षा (Pre) पेपर-1</a>	<a href="#">हिन्दी</a>	<a href="#">CLICK HERE</a>
<a href="#">आई. ए. एस. (सी-सैट) प्रारंभिक परीक्षा पेपर -2</a>	<a href="#">हिन्दी</a>	<a href="#">CLICK HERE</a>
<a href="#">Gist of NCERT Study Kit For UPSC Exams</a>	<a href="#">English</a>	<a href="#">CLICK HERE</a>
<a href="#">यूपीएससी परीक्षा के लिए एनसीईआरटी अध्ययन सामग्री</a>	<a href="#">हिन्दी</a>	<a href="#">CLICK HERE</a>