

SSC CHSL (Tier - 1) Online Exam Paper - 2018 "held on 03 July 2019"

Morning Shift (Reasoning)

Q1. Three of the following four words are alike in a certain way and one is different. Pick the odd word out.

Options:

1. Driving
2. Parasailing
3. Surfing
4. Swimming

Correct Answer: Driving

Q2. Three statements are given, followed by three conclusions numbered I, II and III. Assuming the statements to be true, even if they seem to be at variance with commonly known facts, decide which of the conclusions logically follow (s) from the statements.

Statements:

Some tractors are boats.

All cups are boats.

All jars are tractors.

Conclusions:

I. Some tractors are cups.

II. No jar is boat.

III. Some cups are jars.

Options:

1. Only conclusions II and III follow.
2. None of the conclusions follows.
3. Only conclusions I and II follow.
4. Only conclusions I and III follow.

Correct Answer: None of the conclusions follows.

Q3. Select the word-pair in which the two words are related in the same way as are the two words in the following word-pair.

Year : June

Options:

1. Week : Thursday
2. April : Month
3. Week : Calendar
4. Year : Century

Correct Answer: Week : Thursday

Q4. Select the set in which the numbers are related in the same way as are the numbers of the following set.

(11, 13, 17)

Options:

1. (31, 37, 43)
2. (5, 7, 9)
3. (29, 31, 41)
4. (19, 23, 29)

Correct Answer: (19, 23, 29)

**Q5. Select the set in which the numbers are related in the same way as are the numbers of the following set.
(11, 13, 288)**

Options:

1. (3, 5, 31)
2. (13, 17, 415)
3. (7, 11, 162)
4. (19, 23, 828)

Correct Answer: (7, 11, 162)

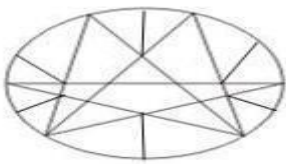
Q6. In a code language, LOGITECH is written as CFCEBAYD. How will INFORMATION be written as in that language?

Options:

1. EEBFIDWBEFE
2. EBEDIFBWFEE
3. EBEFDIWBEFE
4. EEBFIDBWFEE

Correct Answer: EEBFIDWBEFE

Q7. How many triangles are present in the following figure?



Options:

1. 24
2. 30
3. 26
4. 28

SSC CHSL (10+2) Printed Study Kit



FREE SHIPPING

- 100% CHSL Exam Syllabus Covered
- 5 Books, 1000+ Pages
- 4500+ MCQs
- Solved Papers & Mock Tests (PDF Copy)
- 1 Year Current Affairs (PDF Copy)

50% OFF
~~₹ 4,000/-~~
₹ 1,999/-

for Exam Help Call Us at: +91 8800734161

SSCPOTAL.IN

What you will get:

- 100% CHSL Exam Syllabus Covered
- 5 Booklets
- More Than 1000+ Pages
- 4500+ MCQs
- Previous Solved Papers
- Current Affairs for Exam
- Guidance & Support from Our Experts

Price of the Kit:

~~Rs. 4,000~~

Rs. 1,999/-
(Limited time Offer)

Buy Online

Net Banking

Order Online (100% Safe)

[Click here for Other Payment Options \(Cash/NEFT/etc\)](#)

[FOR MORE DETAILS CLICK HERE](#)

50% OFF

Correct Answer: 28

Q8. Painter' is related to 'Paintbrush' in the same way as 'Farmer' is related to '_____'.

Options:

1. Harvest
2. Plough
3. Colour
4. Crops

Correct Answer: Plough

Q9. Select the combination of letters that when sequentially placed in the gaps of the given letter series will complete the series.

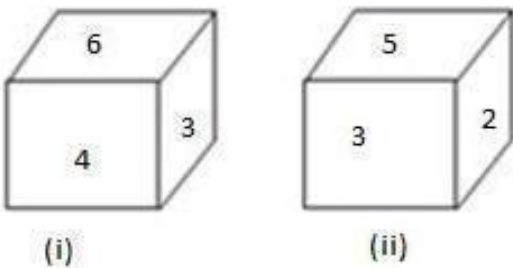
a_b_aad_ca_dbc_adb_a

Options:

1. dbcaca
2. dcabac
3. dcbaac
4. dcabca

Correct Answer: dcbaac

Q10. Two different position of the same dice are shown. Which number will be at the top if 2 is at the bottom ?



Options:

1. 4
2. 1
3. 6
4. 3

Correct Answer: 6

Q11. Which number will replace the question mark (?) in the following series?

3, 14, 29, 38, 51, 58, 69, ?

Options:

1. 47
2. 37
3. 74
4. 73

Correct Answer: 74

Q12. Select the option that is related to the third number in the same way as the second number is related to the first number.

68 : 100 :: 45 : _____

Options:

1. 114
2. 141
3. 14
4. 41

Correct Answer: 41

Q13. Which two signs should be interchanged in the following equation to make it correct?

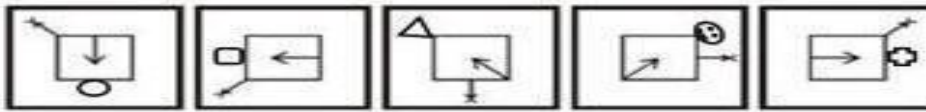
$28 - 42 \div 2 + 276 \times 23 = -44$

Options:

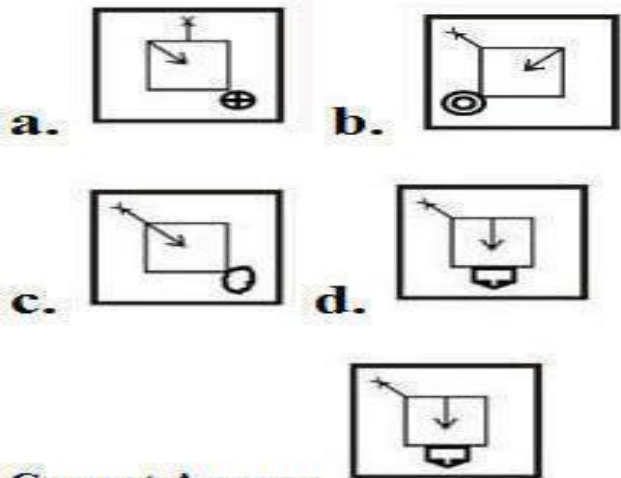
1. \times and \div
2. $+$ and $-$
3. $+$ and \div
4. \times and $+$

Correct Answer: \times and \div

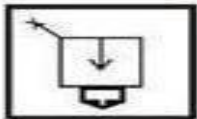
Q14. Select the figure that will come next to the following figure series.



Options:



Correct Answer:



Q15. Twenty teams take part in a football tournament. Each team has to play every other team. How many games would be played in the tournament?

Options:

1. 170
2. 190
3. 180
4. 195

Correct Answer: 190

Q16. Arrange the following words in the order as they would appear in English dictionary.

1. Denote
2. Destiny
3. Diagonal
4. Demand
5. Density

Options:

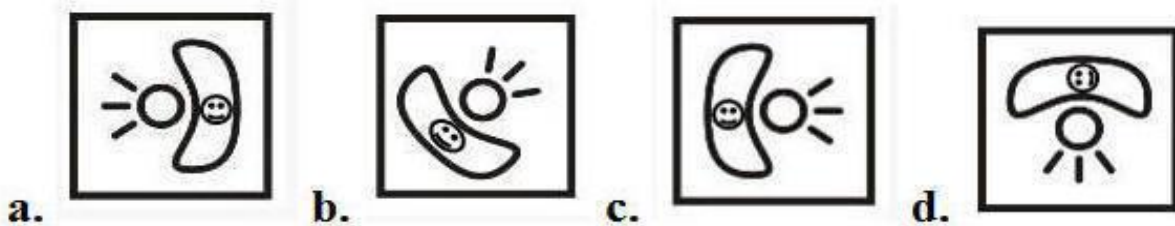
1. 4, 1, 2, 5, 3
2. 4, 3, 2, 1, 5
3. 4, 1, 5, 2, 3
4. 3, 5, 1, 4, 2

Correct Answer: 4, 1, 5, 2, 3

Q17. Select the correct mirror image of the given figure when the mirror is placed to the right of the figure.



Options:



SSC CHSL(10+2) परीक्षा अध्ययन सामग्री



- 100% CHSL Exam Syllabus Covered
- 5 Books, 900+ Pages
- 2500+ MCQs
- 1 Year Current Affairs (PDF Copy)
- Support & Guidance

50% OFF
~~₹ 4,000/-~~
₹ 1,999/-

FREE SHIPPING

for Exam Help Call Us at: +91 8800734161

SSCPORTAL.IN

आप क्या प्राप्त करेंगे?

- माध्यम: हिन्दी
- 100 प्रतिशत पाठ्यक्रम
- 900 से अधिक पृष्ठ
- 2500 से अधिक वस्तुनिष्ठ प्रश्न
- कुल 5 पुस्तिकाएँ
- अध्यायवार M.C.Q
- गणित एवं तार्किक क्षमता को हल करने की सरल विधि
- 5 अभ्यास प्रश्न पत्र (PDF Copy)
- हमारे विशेषज्ञों द्वारा मार्गदर्शन और सहायता

Price of the Kit:

~~Rs. 4,200~~

Rs. 1,999/-

(Limited time Offer)

 [Buy Online](#)

Net Banking

Order Online (100% Safe)

[Click here for Other Payment Options \(Cash/NEFT/etc\)](#)

FOR MORE DETAILS CLICK HERE

50% OFF

Q18. Select the option that is related to the third letter-cluster in the same way as the second letter-cluster is related to the first letter-cluster.

MARK : FHMP :: LOAN : _____

Options:

1. EVVS
2. SVEV
3. EVSV
4. SVVE

Correct Answer: EVVS

Q19. Three of the following four letter-clusters are alike in a certain way and one is different. Pick the odd one out.

Options:

1. OKL
2. EZV
3. UPF
4. AVZ

Correct Answer: OKL

Q20. If FINGER is coded as 15232112239 and MARKET is coded as 14192916252, then how will MILTON be coded as?


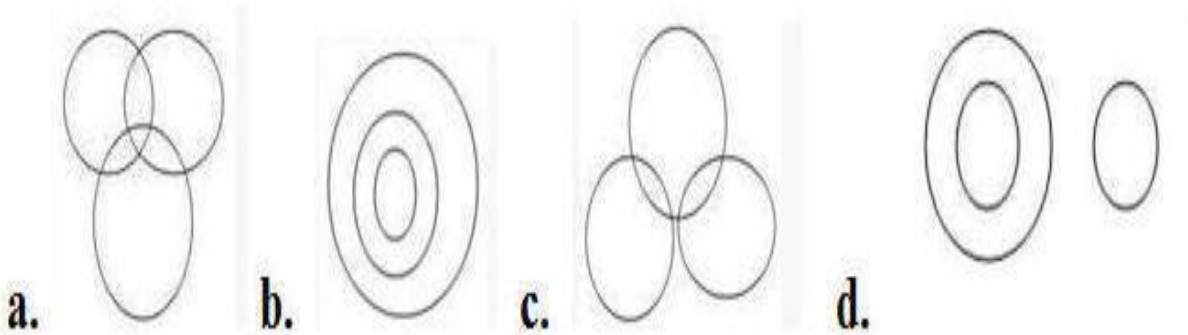
Options:

1. 21223239525
2. 22122353295
3. 22213235295
4. 2222213355

Correct Answer: 22213235295

**Q21. Select the Venn diagram that best illustrate the relationship between the following series
Lecturers, Singers, Men**

Options:



Q22. There are two Married couples in a family. % has two children. A is wife of @, who is brother of #. F is daughter of %. U is sister of S, who is son of @. T is son of #, who is a male.

How is A is related to %?

Options:

1. Sister
2. Sister in law
3. Brother in law
4. Brother

Correct Answer: Sister in law

Q23. Three of the following four numbers are alike in a certain way and one is different. Pick the number that is different from the rest.

Options:

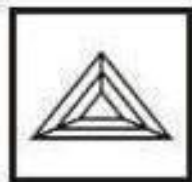
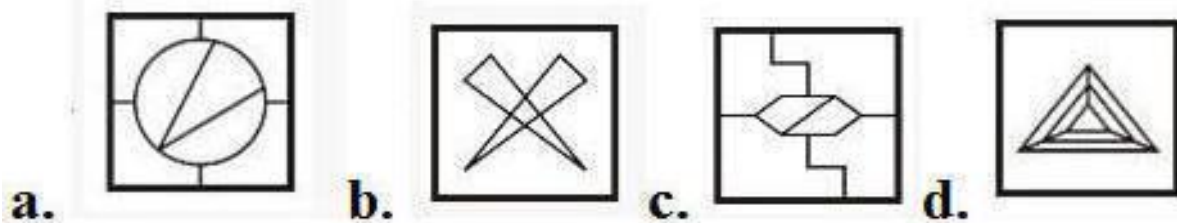
1. 2421
2. 5472
3. 7261
4. 4842

Correct Answer: 7261

Q24. Select the options in which the given figure is embedded.

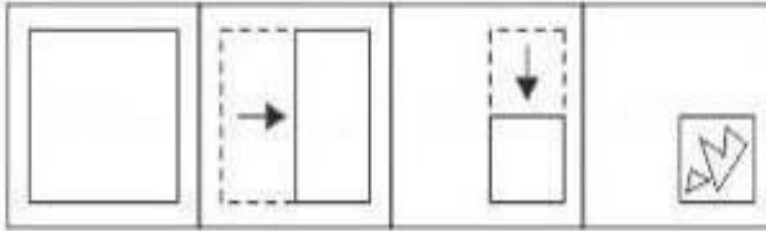


Options


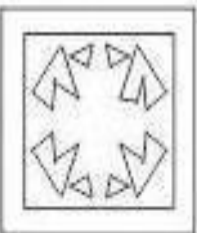

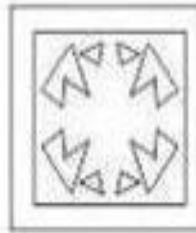


Correct Answer:

Q25. A paper is folded and cut as shown in the following figures. How will it appears when unfolded?



Options

- a.**  **b.**  **c.**  **d.** 

Correct Answer:





Study Material for SSC CGL (Tier-1) Examination	English	CLICK HERE
Study Kit for SSC CGL (Tier-2) Exam	English	CLICK HERE
Study Kit for SSC CHSL (10+2) Examination	English	CLICK HERE
Study Kit for SSC Stenographers (Grade 'C' & 'D')	English	CLICK HERE
Study Kit for Multitasking (Non-Technical) - MTS	English	CLICK HERE
Study Kit for SSC Constables (GD) Exam	English	CLICK HERE
Study Kit For SSC Sub-Inspectors in Delhi Police, CAPFs, CISF	English	CLICK HERE
Study Kit for SSC Junior Engineer Exam (Paper-1)	English	CLICK HERE
IAS EXAMS STUDY MATERIALS		
Study Kit for IAS (Pre) GENERAL STUDIES Paper-1 (GS)	English	CLICK HERE
Study Kit for IAS (Pre) CSAT Paper-2(Aptitude)	English	CLICK HERE
सामान्य अध्ययन (GS) प्रारंभिक परीक्षा (Pre) पेपर-1	हिन्दी	CLICK HERE
आई. ए. एस. (सी-सैट) प्रारंभिक परीक्षा पेपर -2	हिन्दी	CLICK HERE
Gist of NCERT Study Kit For UPSC Exams	English	CLICK HERE
यूपीएससी परीक्षा के लिए एनसीईआरटी अध्ययन सामग्री	हिन्दी	CLICK HERE