

## SSC CHSL (Tier - 1) Online Exam Paper - 2017 "held on 14 March 2018"

### Morning Shift (General Intelligence)

---

**QID : 26** - In the following question, select the related word pair from the given alternatives.

Fatigue : Energy :: ? : ?

**Options:**

- 1) Tyre : Round
- 2) Car : Green
- 3) Fuel : Petrol
- 4) Drought : Flood

**Correct Answer:** Drought : Flood

**QID : 27** - In the following question, select the related number pair from the given alternatives.

15 : 26 :: ? : ?

**Options:**

- 1) 39 : 49
- 2) 34 : 45
- 3) 46 : 55
- 4) 56 : 69

**Correct Answer:** 34 : 45

**QID : 28** - In the following question, select the related letter/letters from the given alternatives.

HIK : KLN :: PQS : ?

**Options:**

- 1) TUW
- 2) STV
- 3) STU
- 4) TUX

**Correct Answer:** STV

**QID : 29** - In the following question, select the odd word pair from the given alternatives.

**Options:**

- 1) Sorrow – Black
- 2) Red – Danger
- 3) Star – Rank
- 4) Wheel – Progress

**Correct Answer:** Sorrow – Black

**QID : 30** - In the following question, four number pairs are given. The number on left side of (–) is related to the number on the right side of (–) with some Logic/Rule/Relation. Three are similar on basis of same Logic/Rule/Relation. Select the odd one out from the given alternatives.

**Options:**

- 1) 11 – 12
- 2) 23 – 24
- 3) 17 – 18
- 4) 19 – 21

**Correct Answer:** 19 – 21

**QID : 31** - In the following question, select the odd letter/letters from the given alternatives.

**Options:**

- 1) GMS
- 2) LRX
- 3) CIP
- 4) EKQ

**Correct Answer:** CIP

**QID : 32** - From the given alternatives, according to dictionary, which word will come at FOURTH position?

1. Friend
2. Fringe
3. Florist
4. Frighten
5. Future

**Options:**

- 1) Friend
- 2) Fringe
- 3) Frighten
- 4) Future

**Correct Answer:** Fringe

**QID : 33** - In the following question, select the missing number from the given series.

9, 28, 86, 261, 787, ?

**Options:**

- 1) 2366
- 2) 1795
- 3) 2175
- 4) 2285

**Correct Answer:** 2366

**QID : 34** - A series is given with one term missing. Select the correct alternative from the given ones that will complete the series.

CG, KO, SW, AE, ?

**Options:**

- 1) JN
- 2) MJ
- 3) IM
- 4) JL

**Correct Answer:** IM

**QID : 35** - Manoj walks 12 metres towards north. Then turns right and walk another 12 metres. Then

turn right and walks for 7 metres to reach college R. He again turns to his right and walks for 12 metres. What is the straight line distance (in metres) between the starting point and college R?

**Options:**

- 1)  $12\sqrt{2}$
- 2) 13
- 3) 14
- 4)  $14\sqrt{3}$

**Correct Answer:** 13

**QID :** 36 - From the given alternatives, select the word which CANNOT be formed using the letters of the given word.

Xenophobia

**Options:**

- 1) Phone
- 2) Hope
- 3) Xerox
- 4) Open

**Correct Answer:** Xerox

---

**QID :** 37 - In a certain code language, "REGAL" is written as "TCIYN". How is "FARMS" written in that code language?

**Options:**

- 1) RTHKU
- 2) HYTKU
- 3) GTHSR
- 4) NVKTH

**Correct Answer:** HYTKU

**QID :** 38 - In a certain code language, '÷' represents '+', '-' represents 'x', '+' represents '÷' and 'x' represents '-'. Find out the answer to the following question.

$$24 \div 14 - 5 + 10 \times 14 = ?$$

**Options:**

- 1) 39
- 2) 45

3) 27

4) 17

**Correct Answer:** 17

**QID :** 39 - The following equation is incorrect. Which two signs should be interchanged to correct the equation?

$$12 \times 4 - 6 \div 7 + 18 = 19$$

**Options:**

1) + and  $\times$

2) + and  $\div$

3)  $\div$  and -

4) - and +

**Correct Answer:**  $\div$  and -

**QID :** 40 - If  $2\Delta 5 = 5$ ,  $2\Delta 3 = 3$  and  $8\Delta 4 = 16$ , then find the value of  $16\Delta 8 = ?$

**Options:**

1) 18

2) 14

3) 16

4) 64

**Correct Answer:** 64

**QID :** 41 - Which of the following terms follows the trend of the given list?

XXXXXXY, XXXXXYX, XXXXYXX, XXXYXXX, XXYXXXX, \_\_\_\_\_.

**Options:**

1) XYXXXXX

2) YXXXXXX

3) XXXXXXY

4) XXXXXYX

**Correct Answer:** XYXXXXX

**QID :** 42 - Two vans X and Y start from the same point. X travels 5 km West, then turns to its left and travels 3 km. Y travels 13 km South, then turns West and travels 5 km, then turns to its left and travels 7 km. Where is Y with respect to X now?

# SSC CGL Tier-1 Printed Study Kit



- 100% Syllabus Covered
- 12 Books , 1300+ Pages
- 5600+ MCQs
- 08 Year Solved Papers & Mock Tests (PDF Copy)
- 1 year Current Affairs (PDF Copy)

**50% OFF**

~~₹ 6,000/-~~  
**₹ 2,999/-**

**FREE SHIPPING** 

for Exam Help Call Us at: +91 8800734161

 **SSCPORTAL.IN**

## What you will get:

- 100% Syllabus Covered
- 12 Books
- 1300+ Pages
- 5600+ MCQs
- 8 Year Solved Papers (PDF Copy)
- Five Practice Papers (PDF Copy)
- One Year Current Affairs (PDF Copy)
- Guidance & Support from Our Experts

Price of the Kit:

~~Rs. 6,000~~

**Rs. 2,999/-**

*(Limited time Offer)*

 **Buy Online**

**Net Banking**

**Order Online (100% Safe)**

[Click here for Other Payment Options \(Cash/NEFT/etc\)](#)

**FOR MORE DETAILS CLICK HERE**

**50% OFF**

**Options:**

- 1) 11 km South
- 2) 17 km South
- 3) 17 km North
- 4) 11 km North

**Correct Answer:** 17 km South

**QID :** 43 - In the question two statements are given, followed by two conclusions, I and II. You have to consider the statements to be true even if it seems to be at variance from commonly known facts. You have to decide which of the given conclusions, if any, follows from the given statements.

Statement I: No fruits are berries

Statement II: Some cherries are fruits

Conclusion I: All berries are cherries

Conclusion II: Some cherries are berries

**Options:**

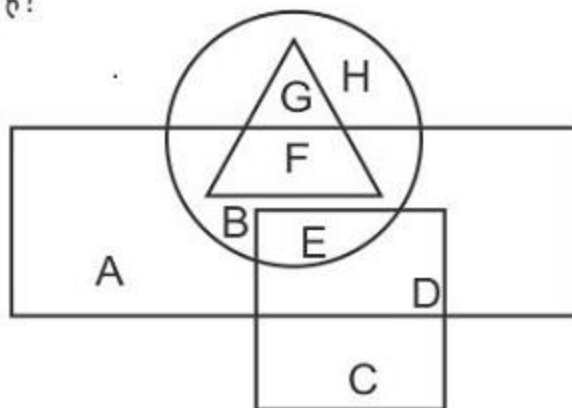
- 1) Only conclusion I follows
- 2) Only conclusion II follows
- 3) Both conclusions I and II follow
- 4) Neither conclusion I nor conclusion II follows

**Correct Answer:** Neither conclusion I nor conclusion II follows

**QID :** 44 -

In the following figure, rectangle represents Dieticians, circle represents Racers, triangle represents Singers and square represents Cricketers. Which set of letters represents Dieticians who are either Racers or Singers?

निम्नलिखित आकृति में, आयत आहार विशेषज्ञों को प्रदर्शित करता है, वृत्त रेसर्स को प्रदर्शित करता है, त्रिभुज गायकों को प्रदर्शित करता है और वर्ग क्रिकेट खिलाड़ियों को प्रदर्शित करता है। अक्षरों का कौन सा समूह उन आहार विशेषज्ञों को प्रदर्शित करता है, जो या तो रेसर्स हैं या गायक हैं?



**Options:**

- 1) BED
- 2) GH
- 3) FBE
- 4) ABC

**Correct Answer:** FBE

**QID :** 45 - A series is given with one term missing. Select the correct alternative from the given ones that will complete the series.

ARC, XOZ, ULW, ?, OFQ

**Options:**

- 1) RIT
- 2) KFT
- 3) RAK



4) SJQ

**Correct Answer:** RIT

**QID :** 46 - In the following question, select the missing number from the given series.

152, 164, 176, 188, ?, 212

**Options:**

1) 196

2) 202

3) 200

4) 210

**Correct Answer:** 200

**QID :** 47 - In the following question, four groups of three numbers are given. In each group the second and third number are related to the first number by a Logic/Rule/Relation. Three are similar on basis of same Logic/Rule/Relation. Select the odd one out from the given alternatives.

**Options:**

1) (63, 74, 85)

2) (97, 108, 119)

3) (92, 103, 116)

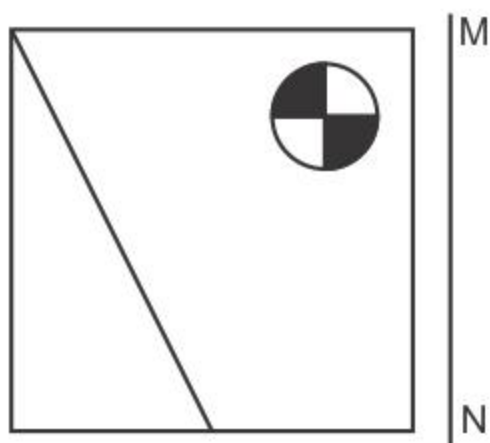
4) (74, 85, 96)

**Correct Answer:** (92, 103, 116)

**QID :** 48 -

If a mirror is placed on the line MN, then which of the answer figures is the right image of the given figure?

यदि एक दर्पण को MN रेखा पर रखा जाए तो दी गयी उत्तर आकृतियों में से कौन-सी आकृति प्रश्न आकृति का सही प्रतिबिम्ब होगी?



Options:

1)



2)



3)



4)

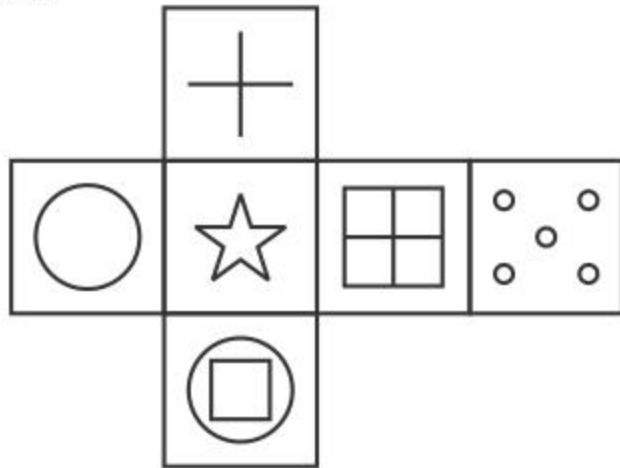


**Correct Answer:**

QID : 49 -

Which of the following cube in the answer figure cannot be made based on the unfolded cube in the question figure?

निम्नलिखित उत्तर आकृति में से कौन सा घन दिए गए प्रश्न आकृति में से खुले घन से बनाया नहीं जा सकता?



Options:

1)



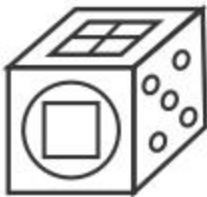
2)



3)



4)



**Correct Answer:**

QID : 50 -

A word is represented by only one set of numbers as given in any one of the alternatives. The sets of numbers given in the alternatives are represented by two classes of alphabets as shown in the given two matrices. The columns and rows of Matrix-I are numbered from 0 to 4 and that of Matrix-II are numbered from 5 to 9. A letter from these matrices can be represented first by its row and next by its column, for example 'G' can be represented by 31, 43 etc and 'Z' can be represented by 97, 69 etc. Similarly, you have to identify the set for the word 'LATE'.

एक शब्द केवल एक संख्या-समूह द्वारा दर्शाया गया है, जैसा कि विकल्पों में से किसी एक में दिया गया है। विकल्पों में दिए गए संख्या-समूह अक्षरों के दो वर्गों द्वारा दर्शाए गए हैं, जैसा कि दिए गए दो आव्यूहों में है। आव्यूह-I के स्तम्भ और पंक्ति की संख्या 0 से 4 और आव्यूह-II की 5 से 9 है। इन आव्यूहों से एक अक्षर को पहले उसकी पंक्ति और बाद में स्तम्भ संख्या द्वारा दर्शाया जा सकता है। उदाहरण के लिए 'G' को 31, 43 आदि द्वारा दर्शाया जा सकता है तथा 'Z' को 97, 69 आदि द्वारा दर्शाया जा सकता है। इसी तरह से आपको प्रश्न में दिए शब्द 'LATE' के लिए समूह को पहचानना है।

Matrix I आव्यूह - I					
	0	1	2	3	4
0	C	L	H	M	J
1	E	M	I	G	K
2	E	H	I	A	M
3	F	G	B	F	F
4	F	B	J	G	L

Matrix II आव्यूह - II					
	5	6	7	8	9
5	X	O	Q	X	P
6	X	Q	O	P	Z
7	W	O	S	S	X
8	R	X	U	U	S
9	Y	T	Z	U	N

**Options:**

- 1) 44,23,96,20
- 2) 13,96,14,57
- 3) 22,96,43,95
- 4) 41,77,30,59

**Correct Answer:** 44,23,96,20



<a href="#">Study Material for SSC CGL (Tier-1) Examination</a>	<a href="#">English</a>	<a href="#">CLICK HERE</a>
<a href="#">Study Kit for SSC CGL (Tier-2) Exam</a>	<a href="#">English</a>	<a href="#">CLICK HERE</a>
<a href="#">Study Kit for SSC CHSL (10+2) Examination</a>	<a href="#">English</a>	<a href="#">CLICK HERE</a>
<a href="#">Study Kit for SSC Stenographers (Grade 'C' &amp; 'D')</a>	<a href="#">English</a>	<a href="#">CLICK HERE</a>
<a href="#">Study Kit for Multitasking (Non-Technical) - MTS</a>	<a href="#">English</a>	<a href="#">CLICK HERE</a>
<a href="#">Study Kit for SSC Constables (GD) Exam</a>	<a href="#">English</a>	<a href="#">CLICK HERE</a>
<a href="#">Study Kit For SSC Sub-Inspectors in Delhi Police, CAPFs, CISF</a>	<a href="#">English</a>	<a href="#">CLICK HERE</a>
<a href="#">Study Kit for SSC Junior Engineer Exam (Paper-1)</a>	<a href="#">English</a>	<a href="#">CLICK HERE</a>
<b>IAS EXAMS STUDY MATERIALS</b>		
<a href="#">Study Kit for IAS (Pre) GENERAL STUDIES Paper-1 (GS)</a>	<a href="#">English</a>	<a href="#">CLICK HERE</a>
<a href="#">Study Kit for IAS (Pre) CSAT Paper-2(Aptitude)</a>	<a href="#">English</a>	<a href="#">CLICK HERE</a>
<a href="#">सामान्य अध्ययन (GS) प्रारंभिक परीक्षा (Pre) पेपर-1</a>	<a href="#">हिन्दी</a>	<a href="#">CLICK HERE</a>
<a href="#">आई. ए. एस. (सी-सैट) प्रारंभिक परीक्षा पेपर -2</a>	<a href="#">हिन्दी</a>	<a href="#">CLICK HERE</a>
<a href="#">Gist of NCERT Study Kit For UPSC Exams</a>	<a href="#">English</a>	<a href="#">CLICK HERE</a>
<a href="#">यूपीएससी परीक्षा के लिए एनसीईआरटी अध्ययन सामग्री</a>	<a href="#">हिन्दी</a>	<a href="#">CLICK HERE</a>