

SSC CHSL (Tier - 1) Online Exam Paper - 2017 "held on 14 March 2018"

After Noon Shift (General Intelligence)

QID : 126 - In the following question, select the related word pair from the given alternatives.

Hospital : Treatment :: ? : ?

Options:

- 1) Product : Production
- 2) Government : Country
- 3) Justice : Court
- 4) School : Education

Correct Answer: School : Education

QID : 127 - In the following question, select the related number from the given alternatives.

13 : 171 :: 17 : ?

Options:

- 1) 286
- 2) 289
- 3) 291
- 4) 294

Correct Answer: 291

QID : 128 - In the following question, select the related letter/letters from the given alternatives.

PTR : NRP :: WTV : ?

Options:

- 1) YVX
- 2) YVZ
- 3) URT
- 4) UQT

Correct Answer: URT

QID : 129 - In the following question, select the odd word from the given alternatives.

Options:

- 1) West
- 2) Direction
- 3) South
- 4) South – West

Correct Answer: Direction

QID : 130 - In the following question, four number pairs are given. The number on left side of (–) is related to the number on the right side of (–) with some Logic/Rule/Relation. Three are similar on basis of same Logic/Rule/Relation. Select the odd one out from the given alternatives.

Options:

- 1) 23 – 24
- 2) 25 – 26
- 3) 27 – 28
- 4) 29 – 27

Correct Answer: 29 – 27

QID : 131 - In the following question, select the odd letter/letters from the given alternatives.

Options:

- 1) SRQP
- 2) JIHG
- 3) VUTS
- 4) ZYXV

Correct Answer: ZYXV

QID : 132 - Arrange the given words in the sequence in which they occur in the dictionary.

1. Dispel
2. Dispute
3. Distinct
4. Dissent
5. Disrupt

Options:

- 1) 35412
- 2) 15342
- 3) 23415
- 4) 12543

Correct Answer: 12543

QID : 133 - In the following question, select the missing number from the given series.

15, 21, 28, 34, ?, 47

Options:

- 1) 41
- 2) 40
- 3) 44
- 4) 43

Correct Answer: 41

QID : 134 - A series is given with one term missing. Select the correct alternative from the given ones that will complete the series.

D, G, K, N, R, ?, ?, B, F

Options:

- 1) U, Z
- 2) U, Y
- 3) X, Z
- 4) T, Z

Correct Answer: U, Y

QID : 135 - Rajnish walks 35 km towards north. He turns left and walks 20 km. He turns left and walks 35 km. How far (in km) is he now from his starting point?

Options:

- 1) 25
- 2) 90
- 3) 20
- 4) $10\sqrt{2}$

Correct Answer: 20

QID : 136 - From the given alternatives, select the word which CANNOT be formed using the letters of the given word.

Nightingales

Options:

- 1) Nine
- 2) Gales
- 3) Eight
- 4) Novel

Correct Answer: Novel

QID : 137 - In a certain code language, "TALCS" is written as "UENCV". How is "SPARK" written in that code language?

Options:

- 1) HRVTN
- 2) MTCRU
- 3) MTCSV
- 4) MAMTR

Correct Answer: MTCRU

QID : 138 - In a certain code language, '-' represents '+', '+' represents 'x', 'x' represents '÷' and '÷' represents '-'. Find out the answer to the following question.

$$2 \div 12 - 6 + 20 \times 4 = ?$$

Options:

- 1) 40
- 2) 1
- 3) 20
- 4) 43

Correct Answer: 20

QID : 139 - The following equation is incorrect. Which two signs should be interchanged to correct the equation?

$$18 \times 12 - 6 \div 5 + 4 = 35$$

Options:

- 1) + and \times
- 2) + and \div
- 3) - and +
- 4) \div and -

Correct Answer: \div and -

QID : 140 - If $8*9 = 36$, $12*4 = 24$ and $14*6 = 42$, then find the value of $18*6 = ?$

Options:

- 1) 14
- 2) 54
- 3) 44
- 4) 2

Correct Answer: 54

QID : 141 - Which of the following terms follows the trend of the given list?

AABAAAA, BAAAAAA, AAAAABA, AAABAAA, ABAAAAA, _____.

Options:

- 1) AAAABAA
- 2) AABAAAA
- 3) BAAAAAA
- 4) AAAAAAB

Correct Answer: AAAAAAB

QID : 142 - A goods carrier travels 23 km East, then it turns North and travels 15 km, then it turns West and Travels 38 km, then it turns to its left and travels 15 km. Where is it now with reference to its starting position?

□□ □□ □□□□ □□□□ □□ □□ 23 □□.□□. □□□□□□ □□□□ □□, □□□ □□ □□□□□□ □□ □□□ □□□
□□□□ □□ □□ □□□ 15 □□.□□. □□ □□□□□□ □□□□ □□, □□□ □□ □□□□□□ □□ □□□ □□□ □□□□ □□
□□ □□□ 38 □□.□□. □□ □□□□□□ □□□□ □□, □□□ □□ □□□□ □□□□ □□ □□□ □□□□ □□ □□ □□□ 15
□□.□□. □□ □□□□□□ □□□□ □□□ □□ □□ □□□□ □□□□□□□□□□ □□□□□□ □□ □□□□□□ □□□ □□□□

□□?

Options:

- 1) 61 km West
- 2) 15 km East
- 3) 61 km East
- 4) 15 km West

Correct Answer: 15 km West

QID : 143 - In the question two statements are given, followed by two conclusions, I and II. You have to consider the statements to be true even if it seems to be at variance from commonly known facts. You have to decide which of the given conclusions, if any, follows from the given statements.

Statement I: All brushes are brooms

Statement II: All mops are brushes

Conclusion I: All brooms are mops

Conclusion II: All mops are brooms

Options:

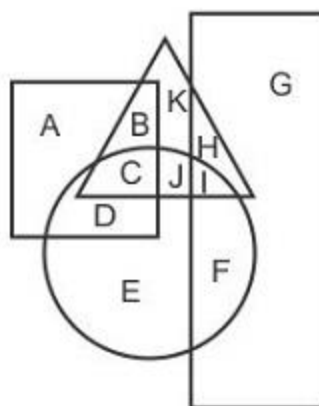
- 1) Only conclusion I follows
- 2) Only conclusion II follows
- 3) Both conclusions I and II follow
- 4) Neither conclusion I nor conclusion II follows

Correct Answer: Only conclusion II follows

QID : 144 -

In the following figure, rectangle represents Dieticians, circle represents Floral designers, triangle represents Gardeners and square represents Asians. Which set of letters represents Floral designers who are not Gardeners?

निम्नलिखित आकृति में, आयत आहार विशेषज्ञों को प्रदर्शित करता है, वृत्त पुष्प डिजाइनरों को प्रदर्शित करता है, त्रिभुज बागवानों को प्रदर्शित करता है और वर्ग एशियाई लोगों को प्रदर्शित करता है। अक्षरों का कौन सा समूह उन पुष्प डिजाइनर्स को प्रदर्शित करता है जो बागवान नहीं हैं?



Options:

- 1) BKH
- 2) ABC
- 3) DEF
- 4) GHI

Correct Answer: DEF

QID : 145 - A series is given with one term missing. Select the correct alternative from the given ones that will complete the series.

PMA, RPE, TSI, VVM, ?

Options:

- 1) YZR
- 2) VWO
- 3) XYQ
- 4) ACS

Correct Answer: XYQ

QID : 146 - In the following question, select the missing number from the given series.

67, 80, 93, ?, 119, 132

Options:

- 1) 108
- 2) 106
- 3) 114
- 4) 112

Correct Answer: 106

QID : 147 - In the following question, four groups of three numbers are given. In each group the second and third number are related to the first number by a Logic/Rule/Relation. Three are similar on basis of same Logic/Rule/Relation. Select the odd one out from the given alternatives.

Options:

- 1) (4, 16, 64)
- 2) (5, 25, 125)
- 3) (6, 36, 216)
- 4) (7, 49, 243)

Correct Answer: (7, 49, 243)

Candidate Answer: (4, 16, 64)

QID : 148 -

SSC CHSL (10+2) Printed Study Kit



- 100% CHSL Exam Syllabus Covered
- 5 Books, 1000+ Pages
- 4500+ MCQs
- Solved Papers & Mock Tests (PDF Copy)
- 1 Year Current Affairs (PDF Copy)

50% OFF
₹ 4,000/-
₹ **1,999/-**

FREE SHIPPING

for Exam Help Call Us at: +91 8800734161

SSCPORTAL.IN

What you will get:

- 100% CHSL Exam Syllabus Covered
- 5 Booklets
- More Than 1000+ Pages
- 4500+ MCQs
- Previous Solved Papers
- Current Affairs for Exam
- Guidance & Support from Our Experts

Price of the Kit:

Rs. 4,000

Rs. 1,999/-
(Limited time Offer)

 **Buy Online**

VISA Maestro MasterCard RuPay

Net Banking

Order Online (100% Safe)

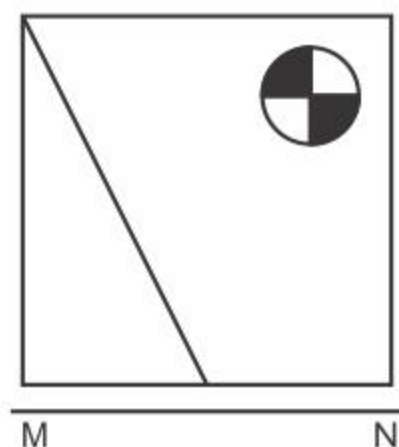
[Click here for Other Payment Options \(Cash/NEFT/etc\)](#)

FOR MORE DETAILS CLICK HERE

50% OFF

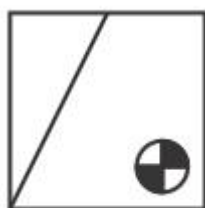
If a mirror is placed on the line MN, then which of the answer figures is the right image of the given figure?

यदि एक दर्पण को MN रेखा पर रखा जाए तो दी गयी उत्तर आकृतियों में से कौन-सी आकृति प्रश्न आकृति का सही प्रतिबिम्ब होगी?

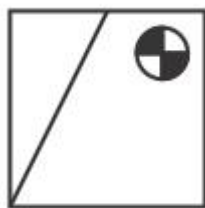


Options:

1)



2)



3)



4)

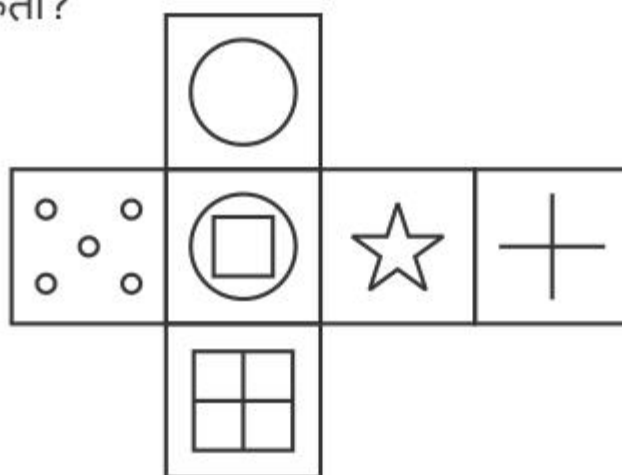


Correct Answer:

QID : 149 -

Which of the following cube in the answer figure cannot be made based on the unfolded cube in the question figure?

निम्नलिखित उत्तर आकृति में से कौन सा घन दिए गए प्रश्न आकृति में से खुले घन से बनाया नहीं जा सकता?



Options:

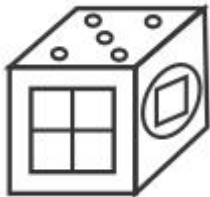
1)



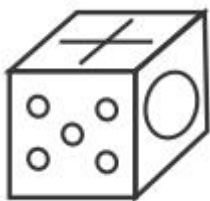
2)



3)



4)



Correct Answer:

QID : 150 -

A word is represented by only one set of numbers as given in any one of the alternatives. The sets of numbers given in the alternatives are represented by two classes of alphabets as shown in the given two matrices. The columns and rows of Matrix-I are numbered from 0 to 4 and that of Matrix-II are numbered from 5 to 9. A letter from these matrices can be represented first by its row and next by its column, for example 'A' can be represented by 30, 41 etc and 'W' can be represented by 65, 97 etc. Similarly, you have to identify the set for the word 'QUIZ'.

एक शब्द केवल एक संख्या-समूह द्वारा दर्शाया गया है, जैसा कि विकल्पों में से किसी एक में दिया गया है। विकल्पों में दिए गए संख्या-समूह अक्षरों के दो वर्गों द्वारा दर्शाए गए हैं, जैसा कि दिए गए दो आव्यूहों में है। आव्यूह-I के स्तम्भ और पंक्ति की संख्या 0 से 4 और आव्यूह-II की 5 से 9 है। इन आव्यूहों से एक अक्षर को पहले उसकी पंक्ति और बाद में स्तम्भ संख्या द्वारा दर्शाया जा सकता है। उदाहरण के लिए 'A' को 30, 41 आदि द्वारा दर्शाया जा सकता है तथा 'W' को 65, 97 आदि द्वारा दर्शाया जा सकता है। इसी तरह से आपको प्रश्न में दिए शब्द 'QUIZ' के लिए समूह को पहचानना है।

Matrix I आव्यूह - I					
	0	1	2	3	4
0	C	F	I	K	E
1	C	J	G	E	J
2	E	D	L	K	F
3	A	H	B	C	M
4	I	A	B	G	L

Matrix II आव्यूह - II					
	5	6	7	8	9
5	Y	Q	V	N	O
6	W	V	U	R	X
7	T	Q	W	V	T
8	V	O	R	Z	O
9	P	U	W	Y	O

Options:

- 1) 42,79,23,57
- 2) 24,86,20,85
- 3) 76,96,40,88
- 4) 31,78,34,88

Correct Answer: 76,96,40,88



SSC EXAMS

PRINTED STUDY NOTES

Study Material for SSC CGL (Tier-1) Examination	English	CLICK HERE
Study Kit for SSC CGL (Tier-2) Exam	English	CLICK HERE
Study Kit for SSC CHSL (10+2) Examination	English	CLICK HERE
Study Kit for SSC Stenographers (Grade 'C' & 'D')	English	CLICK HERE
Study Kit for Multitasking (Non-Technical) - MTS	English	CLICK HERE
Study Kit for SSC Constables (GD) Exam	English	CLICK HERE
Study Kit For SSC Sub-Inspectors in Delhi Police, CAPFs, CISF	English	CLICK HERE
Study Kit for SSC Junior Engineer Exam (Paper-1)	English	CLICK HERE
IAS EXAMS STUDY MATERIALS		
Study Kit for IAS (Pre) GENERAL STUDIES Paper-1 (GS)	English	CLICK HERE
Study Kit for IAS (Pre) CSAT Paper-2(Aptitude)	English	CLICK HERE
सामान्य अध्ययन (GS) प्रारंभिक परीक्षा (Pre) पेपर-1	हिन्दी	CLICK HERE
आई. ए. एस. (सी-सैट) प्रारंभिक परीक्षा पेपर -2	हिन्दी	CLICK HERE
Gist of NCERT Study Kit For UPSC Exams	English	CLICK HERE
यूपीएससी परीक्षा के लिए एनसीईआरटी अध्ययन सामग्री	हिन्दी	CLICK HERE