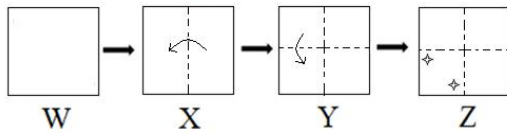


**Q.1** The sequence of folding a paper and the manner in which the folded paper has been cut is shown in the following figures. How would this paper look when unfolded?

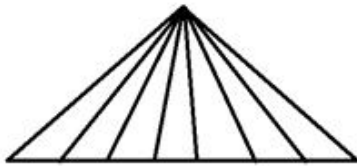


**Ans**



Question ID : 8161613290  
 Status : Answered  
 Chosen Option : 1

**Q.2** How many triangles are there in the following figure?



**Ans**

✗ 1. 14

✗ 2. 20

✗ 3. 24

✓ 4. 28

Question ID : 8161613288  
 Status : Answered  
 Chosen Option : 1

**Q.3** Select the combination of letters that when sequentially placed in the blanks of the given letter series will complete the series.

dabx \_ dab \_ \_ d \_ b \_ xdab \_ x \_

- Ans**
- 1. axdaxxd
  - 2. xxxaxxd
  - 3. xxcbxad
  - 4. dxadadd

Question ID : 8161613280  
Status : Answered  
Chosen Option : 2

**Q.4** Select the correct combination of mathematical signs to replace 'A' sequentially and balance the following equation.

40 A 2 A 3 A 4 A 15

- Ans**
- 1. ÷, ×, =, -
  - 2. ÷, ×, =, ×
  - 3. ×, ÷, +, =
  - 4. ×, =, -, ÷

Question ID : 8161613269  
Status : Answered  
Chosen Option : 2

**Q.5** In a certain code language, 'TRAFFIC' is written as 'VTCHHKE'. How will 'POLICE' be written as in that language?

- Ans**
- 1. RQNKEG
  - 2. RMNGEC
  - 3. ONKHBD
  - 4. RMJGEC

Question ID : 8161613276  
Status : Answered  
Chosen Option : 1

**Q.6** In a certain code language, 'TELEVISION' is written as 'OPJTJWFMFU'. How will 'REMOTE' be written as in that language?

- Ans**
- 1. SFNPUF
  - 2. PUPFNS
  - 3. FUPNFS
  - 4. ETOMER

Question ID : 8161613277  
Status : Answered  
Chosen Option : 3





**Q.7** The rate of onion increased from ₹70 per kilogram to ₹120 per kilogram within a month. By what percentage (approximate) did the rate of onion increase?

- Ans**
- 1. 75.2%
  - 2. 65%
  - 3. 80%
  - 4. 71.5%

Question ID : 8161613268  
Status : Answered  
Chosen Option : 4

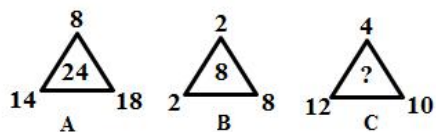
**Q.8** Select the Venn diagram that best represents the relationship between the following classes.

Dirham, USD, Currency

- Ans**
- 1. 
  - 2. 
  - 3. 
  - 4. 

Question ID : 8161613292  
Status : Answered  
Chosen Option : 4

**Q.9** Select the number that can replace the question mark (?) in the following figure series.



- Ans**
- 1. 6
  - 2. 22
  - 3. 2
  - 4. 18

Question ID : 8161613272  
Status : Answered  
Chosen Option : 4

**Q.10** Select the option that is related to the third letter-cluster in the same way as the second letter-cluster is related to the first letter-cluster.

COAT : APZV :: ROAD : ?

- Ans**
- 1. PQZF
  - 2. PPZF
  - 3. TNCC
  - 4. SPBE

Question ID : 8161613278  
Status : Answered  
Chosen Option : 2

**Q.11** Introducing a boy, I said, "His mother is the only daughter of my mother in law". How am I related to the boy?

- Ans**
- 1. Brother
  - 2. Father
  - 3. Nephew
  - 4. Brother-in-law

Question ID : 8161613281  
Status : Answered  
Chosen Option : 2

**Q.12** Select the number that can replace the question mark (?) in the following series.

6, 7, 16, 51, 208, ?

- Ans**
- 1. 2000
  - 2. 1250
  - 3. 1045
  - 4. 2570

Question ID : 8161613273  
Status : Answered  
Chosen Option : 3

Q.13 Select the option in which the given figure is embedded.

(Rotation is not allowed)

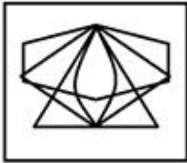


Ans

1.



2.



3.



4.



Question ID : 8161613289

Status : Answered

Chosen Option : 3

Q.14 Four numbers have been given, out of which three are alike in some manner and one is different. Select the one that is different.

Ans  1. 676

2. 216

3. 125

4. 729

Question ID : 8161613274

Status : Answered

Chosen Option : 1

**Q.15** Read the given statements and conclusions carefully. Assuming that the information given in the statements is true, even if it appears to be at variance with commonly known facts, decide which of the given conclusions logically follows from the statements.

**Statements:**

1. All malls are kings.
2. No king is a heater.

**Conclusions:**

- I. No mall is a heater.
- II. All kings are malls.

- Ans**
- 1. Either conclusion I or II follows.
  - 2. Only conclusion II follows.
  - 3. Only conclusion I follows.
  - 4. Neither conclusion I nor II follows.

Question ID : **8161613285**  
Status : **Answered**  
Chosen Option : **3**

**Q.16** Two different positions of the same dice shown here. Select the letter that will be on the face opposite to the one showing the letter 'C'.



- Ans**
- 1. E
  - 2. F
  - 3. B
  - 4. A

Question ID : **8161613286**  
Status : **Answered**  
Chosen Option : **2**

**Q.17** Select the option that is related to the third word in the same way as the second word is related to the first word.

Time : Second : : Length : ?

- Ans**
- 1. Long
  - 2. Distance
  - 3. Meter
  - 4. Measuring Rule

Question ID : **8161613279**  
Status : **Answered**  
Chosen Option : **3**

**Q.18** Select the option in which the numbers share the same relationship as that shared by the given number-pair.

4 : 25

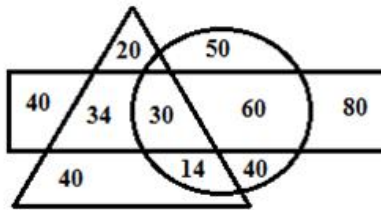
- Ans
- 1. 12 : 120
  - 2. 11 : 170
  - 3. 6 : 36
  - 4. 6 : 49

Question ID : 8161613270

Status : Answered

Chosen Option : 4

**Q.19** Study the given Venn diagram carefully and answer the following question.



= Persons who use bike

= Persons who use car

= Persons who use bicycle

How many persons use both a bicycle and a bike but not a car?

- Ans
- 1. 30
  - 2. 14
  - 3. 34
  - 4. 40

Question ID : 8161613287

Status : Answered

Chosen Option : 3

**Q.20** Four letter-clusters have been given, out of which three are alike in some manner and one is different. Select the odd letter-cluster.


- Ans
- 1. HJSQ
  - 2. BEYV
  - 3. NOPE
  - 4. MONL

Question ID : 8161613283

Status : Answered

Chosen Option : 3

Q.21 Select the correct mirror image of the given figure.



Ans

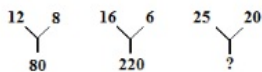


Question ID : 8161613291

Status : Answered

Chosen Option : 3

Q.22 Select the number that can replace the question mark (?) in the following figure series.



Ans

1. 425

2. 210

3. 225

4. 241

Question ID : 8161613271

Status : Answered

Chosen Option : 3



Q.23 Arrange the given words in a logical and meaningful sequence.

1. Earth
2. Saturn
3. Jupiter
4. Mercury
5. Venus
6. Mars

- Ans
- 1. 5, 4, 3, 2, 1, 6
  - 2. 4, 5, 1, 6, 3, 2
  - 3. 6, 3, 4, 1, 2, 5
  - 4. 3, 1, 4, 2, 5, 6

Question ID : 8161613275  
Status : Answered  
Chosen Option : 2

Q.24 Four words have been given, out of which three are alike in some manner and one is different. Select the odd one.

- Ans
- 1. Istanbul
  - 2. Maputo
  - 3. London
  - 4. Paris

Question ID : 8161613284  
Status : Answered  
Chosen Option : 2

Q.25 'TQUS' is related to 'UPVR' in the same way as 'FIRE' is related to \_\_\_\_\_.

- Ans
- 1. GHSD
  - 2. GIRG
  - 3. GIRF
  - 4. GHRD

Question ID : 8161613282  
Status : Answered  
Chosen Option : 1