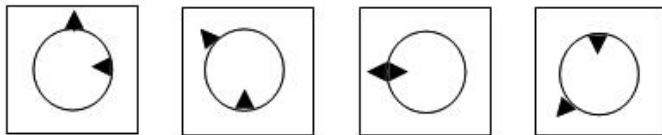
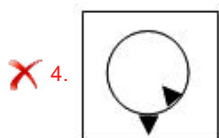
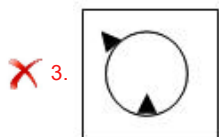
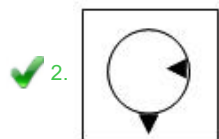
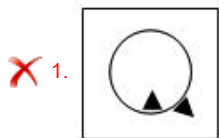


Section : General Intelligence

Q.1 Select the option figure that will come next in the following series.



Ans



Question ID : 424429955
Status : Answered
Chosen Option : 2

Q.2 Four letter-clusters have been given, out of which three are alike in some manner and one is different. Select the odd letter-cluster.

- Ans**
- 1. ROLIF
 - 2. TQNKH
 - 3. YWUSQ
 - 4. VSPMJ

Question ID : 424429951
Status : Answered
Chosen Option : 3

Q.3 Select the correct mirror image of the given figure when the mirror is placed to the right side of the figure.



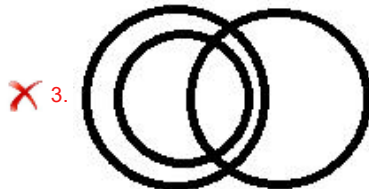
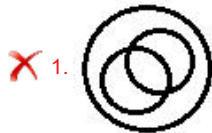
- Ans**
- 1.
 - 2.
 - 3.
 - 4.

Question ID : 424429959
Status : Answered
Chosen Option : 1

Q.4 Select the Venn diagram that best illustrates the relationship between the following classes.

Table, Transistor, Furniture

Ans



Question ID : 424429960
Status : Answered
Chosen Option : 2

Q.5 Select the option in which the words share the same relationship as that shared by the given pair of words.

Stringent : Flexible

Ans

✓ 1. Authoritarian : Liberal

✗ 2. Anxious : Depressed

✗ 3. Daring : Venturesome

✗ 4. Responsive : Passionate

Question ID : 424429950
Status : Answered
Chosen Option : 1

Q.6 Select the combination of letters that when sequentially placed in the blanks of the given letter series will complete the series.

a _ cdeacdd _ acdeea __ deac __ e

Ans

✗ 1. ceacce

✗ 2. aaaccd

✓ 3. ceaccd

✗ 4. bbbcbd

Question ID : 424429948
Status : Not Answered
Chosen Option : --

Q.7 Select the number that can replace the question mark (?) in the following series.

33, 53, 61, 85, 97, ?, 141

- Ans
- 1. 113
 - 2. 125
 - 3. 121
 - 4. 123

Question ID : 424429942
Status : Answered
Chosen Option : 2

Q.8 Read the given statements and conclusions carefully. Assuming that the information given in the statements is true, even if it appears to be at variance with commonly known facts, decide which of the given conclusions logically follow(s) from the statements.

Statements:

- I. Some buses are trucks.
- 2. All trucks are vans.

Conclusions:

- I. Some buses are vans.
- II. All vans are buses.

- Ans
- 1. Only conclusions I and II follow.
 - 2. Only conclusion I follows.
 - 3. Only conclusion II follows.
 - 4. Either conclusion I or II follows.

Question ID : 424429953
Status : Answered
Chosen Option : 2

Q.9 Select the option that is related to the third letter-cluster in the same way as the second letter-cluster is related to the first letter-cluster.

RICH : IRXS :: BOOK : ?

- Ans
- 1. XKKO
 - 2. YLLP
 - 3. DQQM
 - 4. ZLLH

Question ID : 424429946
Status : Answered
Chosen Option : 2

Q.10 Select the number that can replace the question mark (?) in the following series.

99, 82, 63, 50, 35, ?

- Ans
- 1. 24
 - 2. 27
 - 3. 26
 - 4. 25

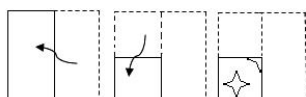
Question ID : 424429941
Status : Answered
Chosen Option : 3

Q.11 If '-' means multiplication, '×' means addition, '÷' means subtraction, and '+' means 'division', then which of the following equations is correct?

- Ans**
- ✓ 1. $8 - 3 \div 16 \times 36 + 6 = 14$
 - ✗ 2. $8 + 3 \div 16 \times 36 - 6 = 14$
 - ✗ 3. $8 \div 3 - 16 + 36 \times 6 = 14$
 - ✗ 4. $8 \times 3 \div 16 + 36 - 6 = 14$

Question ID : 424429937
 Status : Answered
 Chosen Option : 1

Q.12 The sequence of folding a piece of paper and the manner in which the folded paper has been cut is shown in the following figures. How would this paper look when unfolded?



- Ans**
- ✗ 1.
 - ✓ 2.
 - ✗ 3.
 - ✗ 4.

Question ID : 424429958
 Status : Answered
 Chosen Option : 2

Q.13 In a certain code language, RAMP is coded as 46 and HORSE is coded as 63. How will CARPENTER be coded as in that language?

- Ans**
- ✓ 1. 98
 - ✗ 2. 100
 - ✗ 3. 96
 - ✗ 4. 102

Question ID : 424429945
 Status : Answered
 Chosen Option : 4

Q.14 Select the option in which the numbers are related in the same way as are the numbers of the following set.

(12, 48, 8)

- Ans
- 1. (19, 57, 15)
 - 2. (16, 64, 13)
 - 3. (18, 54, 13)
 - 4. (15, 45, 12)

Question ID : 424429939
Status : Answered
Chosen Option : 2

Q.15 Four words have been given, out of which three are alike in some manner and one is different. Select the odd one.

- Ans
- 1. Den
 - 2. Barrack
 - 3. Stable
 - 4. Burrow

Question ID : 424429952
Status : Answered
Chosen Option : 2

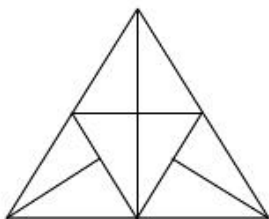
Q.16 Select the option in which the numbers are related in the same way as are the numbers of the following set.

(25, 20, 16)

- Ans
- 1. (34, 19, 9)
 - 2. (30, 17, 10)
 - 3. (32, 16, 8)
 - 4. (28, 18, 12)

Question ID : 424429940
Status : Marked For Review
Chosen Option : 1

Q.17 How many triangles are present in the following figure?



- Ans
- 1. 17
 - 2. 12
 - 3. 15
 - 4. 13

Question ID : 424429956
Status : Answered
Chosen Option : 3

Q.18 Arrange the following words in a logical and meaningful order.

1. Throat
2. Bladder
3. Pupil
4. Liver
5. Pinna

- Ans
- 1. 5-3-1-2-4
 - 2. 5-3-1-4-2
 - 3. 3-5-1-4-2
 - 4. 3-5-1-2-4

Question ID : 424429943
Status : Answered
Chosen Option : 3

Q.19 In a certain code language, THAILAND is written as VFCGNYPB. How will SRILANKA be written as in that language?

- Ans
- 1. UTKNCMMZ
 - 2. TQJKBPJC
 - 3. UPKJCLMY
 - 4. UQKKCMMZ

Question ID : 424429944
Status : Answered
Chosen Option : 3

Q.20 Anita is the sister of Babita and Dharmendar is the brother of Sushma. If Sushma is the sister of Anita, then how is Babita related to Sushma?

- Ans
- 1. Information is incomplete
 - 2. Sister
 - 3. Brother
 - 4. Aunt

Question ID : 424429949
Status : Answered
Chosen Option : 1

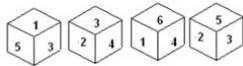
Q.21 Select the option in which the numbers share the same relationship as that shared by the given pair of numbers.

2197 : 1331

- Ans
- 1. 729 : 343
 - 2. 343 : 125
 - 3. 1331 : 729
 - 4. 512 : 216

Question ID : 424429938
Status : Not Answered
Chosen Option : --

Q.22 Four different positions of the same dice are shown. Select the number that will be on the face opposite to the face having number '1'.



- Ans**
- 1. 2
 - 2. 5
 - 3. 4
 - 4. 6

Question ID : 424429954
Status : Answered
Chosen Option : 1

Q.23 'House' is related to 'Foundation' in the same way as 'Tree' is related to '_____'.

- Ans**
- 1. Stem
 - 2. Root
 - 3. Soil
 - 4. Branch

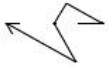
Question ID : 424429947
Status : Answered
Chosen Option : 1

Q.24 Raman's age is twice to the age of his daughter Shruti. If ten years ago Raman's age was three times to the age of Shruti, then what is the present age of Shruti?

- Ans**
- 1. 12 years
 - 2. 8 years
 - 3. 11 years
 - 4. 20 years

Question ID : 424429936
Status : Answered
Chosen Option : 4

Q.25 Select the option in which the given figure is embedded. (Rotation is not allowed)



Ans

- ✓ 1.
- ✗ 2.
- ✗ 3.
- ✗ 4.

Question ID : 424429957
Status : Answered
Chosen Option : 1