




Section : General Intelligence

Q.1 Arrange the following names in a logical and meaningful order.

1. Socks
2. Necktie
3. Belt
4. Spectacle
5. Armlet

- Ans
-  1. 4-2-3-1-5
 -  2. 4-3-2-5-1
 -  3. 4-2-5-3-1
 -  4. 4-2-3-5-1

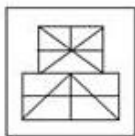
Question ID : 4244291044
Status : Answered
Chosen Option : 4

Q.2 Select the option in which the given figure is embedded. (Rotation is not allowed.)

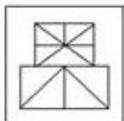


Ans

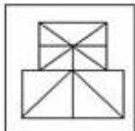
✗ 1.



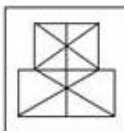
✗ 2.



✓ 3.



✗ 4.



Question ID : 4244291058

Status : Answered

Chosen Option : 3

Q.3 In a certain code language, GOGGLE is written as IMIENC. How will PENCIL be written as in that language?

Ans

✓ 1. RCPAKJ

✗ 2. RGPEKN

✗ 3. NCLAGJ

✗ 4. NGLEGN

Question ID : 4244291045

Status : Answered

Chosen Option : 1

Q.4 Select the number that can replace the question mark (?) in the following series.

80, 79, 75, 66, ?, 25

Ans

✗ 1. 46

✗ 2. 57

✓ 3. 50

✗ 4. 54

Question ID : 4244291042

Status : Answered

Chosen Option : 3

Q.5 Select the option that is related to the third term in the same way as the second term is related to the first term.

MAKE : AEKM :: JUST : _____

- Ans
- ☒ 1. UJTS
 - ☒ 2. UTSS
 - ☒ 3. JSTU
 - ☒ 4. UTJS

Question ID : 4244291053

Status : **Not Attempted and Marked For Review**

Chosen Option : --

Q.6 Select the option that is related to the third letter-cluster in the same way as the second letter-cluster is related to the first letter-cluster.

JAPAN : NAQAJ :: INDIA : ?


- Ans
- ☒ 1. NIEAI
 - ☒ 2. AIENI
 - ☒ 3. DNIAI
 - ☒ 4. AIDNI

Question ID : 4244291047

Status : **Answered**

Chosen Option : 2

Q.7 How many triangles are present in the following figure?



- Ans
- ☒ 1. 20
 - ☒ 2. 16
 - ☒ 3. 22
 - ☒ 4. 18

Question ID : 4244291057

Status : **Answered**

Chosen Option : 1

Q.8 Select the option in which the numbers are related in the same way as are the numbers of the following set.
(26, 144, 18)

- Ans**
-  1. (28, 190, 16)
 -  2. (21, 108, 12)
 -  3. (32, 196, 24)
 -  4. (18, 120, 13)





Question ID : 4244291041
Status : Answered
Chosen Option : 3

Q.9 Introducing a boy, Ritika said, "He is the son of my father's only son". How is Ritika related to the boy's mother?

- Ans**
-  1. Cousin
 -  2. Sister
 -  3. Aunt
 -  4. Sister-in-law

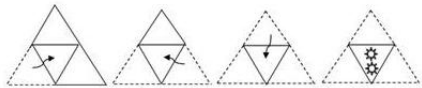
Question ID : 4244291050
Status : Answered
Chosen Option : 4

Q.10 If in a coded language 'ORAL' is written as '1518112', then in the same coded language, 'WRITTEN' will be written as:

- Ans**
-  1. 231892020514
 -  2. 221891919514
 -  3. 231892020614
 -  4. 221792020514

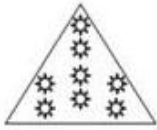
Question ID : 4244291049
Status : Answered
Chosen Option : 1

Q.11 The sequence of folding a piece of paper and the manner in which the folded paper has been cut is shown in the following figures. How would this paper look when unfolded?




Ans

☒ 1.



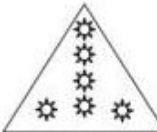
☒ 2.



☒ 3.



☒ 4.



Question ID : 4244291059

Status : Answered

Chosen Option : 3

Q.12 Select the option in which the numbers share the same relationship as that shared by the given pair of numbers.

512 : 64

Ans

☒ 1. 1728 : 121

☒ 2. 1331 : 144

☒ 3. 1000 : 81

☒ 4. 1331 : 121

Question ID : 4244291039

Status : Answered

Chosen Option : 4

Q.13 'Advocate' is related to 'Client' in the same way as 'Doctor' is related to '_____'.

Ans

☒ 1. Disease

☒ 2. Patient

☒ 3. Nurse

☒ 4. Treatment

Question ID : 4244291048

Status : Answered

Chosen Option : 2

Q.14 Read the given statements and conclusions carefully. Assuming that the information given in the statements is true, even if it appears to be at variance with commonly known facts, decide which of the given conclusions logically follow(s) from the statements.





Statements:

1. Some trees are silver oaks.
2. Some silver oaks are tall objects.

Conclusions:

- I. Some tall objects are silver oaks.
- II. All tall objects are trees.

Ans

-  1. Only conclusion I follows.
-  2. Only conclusion II follows.
-  3. Neither conclusion I nor II follows.
-  4. Both conclusions I and II follow.

Question ID : 4244291054

Status : **Answered**

Chosen Option : 1

Q.15 Four letter-clusters have been given, out of which three are alike in some manner and one is different. Select the odd letter-cluster.

Ans

-  1. SQOMK
-  2. KMOQS
-  3. FHJLN
-  4. PRTVX

Question ID : 4244291052

Status : **Answered**

Chosen Option : 1

Q.16 In a certain code language, COBBLER is coded as 130 and TABLE is coded as 93. How will ALMIRAH be coded as in that language?

Ans

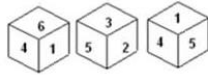
-  1. 125
-  2. 127
-  3. 129
-  4. 123

Question ID : 4244291046

Status : **Not Attempted and Marked For Review**

Chosen Option : --

Q.17 Three different positions of the same dice are shown. Select the number that will be on the face opposite to the face having number '5'.



- Ans ☒ 1. 6
☐ 2. 3
☐ 3. 2
☐ 4. 4

Question ID : 4244291055
Status : Answered
Chosen Option : 1

Q.18 Which two numbers should be interchanged in the following equation to make it correct?

$$36 \div 6 - 15 \times 2 + 48 = 14$$

- Ans ☒ 1. 36 and 48
☐ 2. 6 and 14
☐ 3. 48 and 15
☐ 4. 2 and 6

Question ID : 4244291038
Status : Answered
Chosen Option : 1

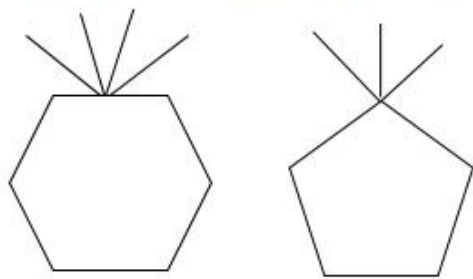
Q.19 Select the number that can replace the question mark (?) in the following series.

1, 27, 125, 343, 729, ?

- Ans ☐ 1. 1244
☐ 2. 1525
☒ 3. 1331
☐ 4. 1029

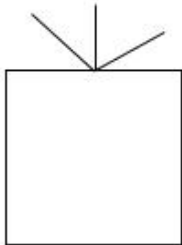
Question ID : 4244291043
Status : Answered
Chosen Option : 3

Q.20 Select the figure that will come next in the following series.

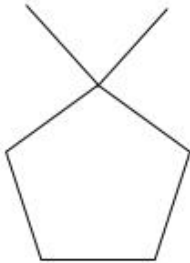


Ans

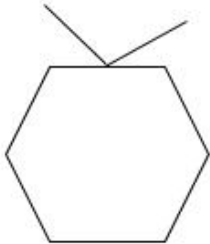
 1.



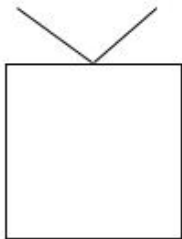
 2.



 3.







 4.



Question ID : 4244291056
Status : Answered
Chosen Option : 4

Q.21 Select the option in which the numbers are related in the same way as are the numbers of the following set.

(31, 18, 7)

- Ans  1. (90, 54, 12)
-  2. (64, 50, 40)
-  3. (70, 38, 20)
-  4. (72, 34, 15)





Question ID : 4244291040

Status : **Not Answered**

Chosen Option : --

Q.22 Select the option in which the words share the same relationship as that shared by the given pair of words.

Phobia : Fear

- Ans  1. Dengue : Mosquitoes
-  2. Amnesia : Forgetting
-  3. Dyslexia : Disability
-  4. Cough : Infection

Question ID : 4244291051

Status : **Answered**

Chosen Option : 3

Q.23 Train 'A' runs at a speed of 80 kmph and leaves station 'X' at 11.00 a.m. Train 'B' leaves station 'X' at 11.15 a.m. in the same direction, on the same day. At what speed train 'B' should run in order to catch train 'A' at station 'Y' located at a distance of 60 km?

- Ans  1. 120 km/h
-  2. 125 km/h
-  3. 115 km/h
-  4. 110 km/h

Question ID : 4244291037

Status : **Answered**

Chosen Option : 1

Q.24 Select the Venn diagram that best illustrates the relationship between the following classes.

Fathers, Males, Brothers

Ans



Question ID : 4244291061

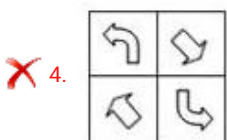
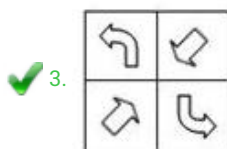
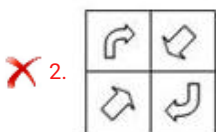
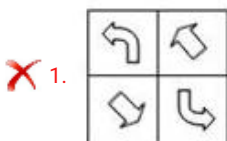
Status : Answered

Chosen Option : 4

Q.25 Select the correct mirror image of the given figure when the mirror is placed to the right side of the figure.



Ans



Question ID : 4244291060

Status : Answered

Chosen Option : 3