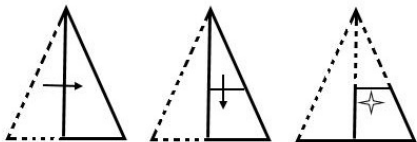


Q.1 The sequence of folding a paper and the manner in which the folded paper has been cut is shown in the following figures. How would this paper look when unfolded?



Ans

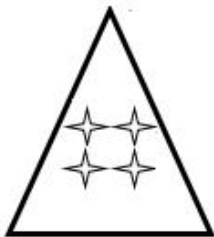
1.



2.



3.



4.



Question ID : 424429857
Status : Answered
Chosen Option : 3

Q.2 Select the word-pair in which the two words are related in the same way as are the two words in the following word-pair.

Coach : Player

Ans

1. Captain : Team

2. Team : Practice

3. Umpire : Cricket

4. Teacher : Student

Question ID : 424429849
Status : Answered
Chosen Option : 4

Q.3 Select the number that can replace the question mark (?) in the following series.

5, 3, 3, 5, 15, ?

- Ans
- 1. 59
 - 2. 45
 - 3. 69
 - 4. 39

Question ID : 424429840
Status : Answered
Chosen Option : 2

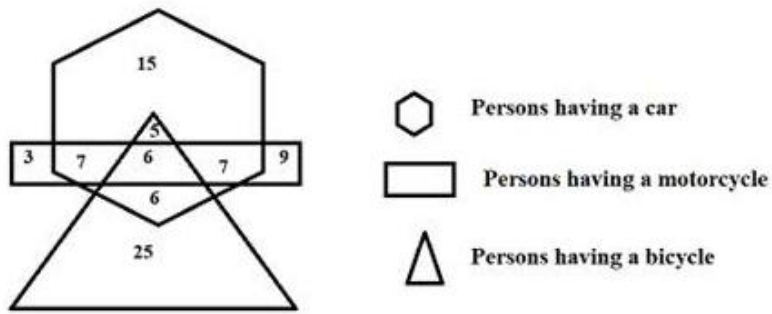
Q.4 Arrange the following words in a logical and meaningful order.

1. Letter
2. Postman
3. Delivery
4. Post Box
5. Post Office

- Ans
- 1. 3,1,2,5,4
 - 2. 5,4,3,1,2
 - 3. 3,2,1,5,4
 - 4. 1,4,5,2,3

Question ID : 424429842
Status : Answered
Chosen Option : 4

Q.5 Study the following diagram.

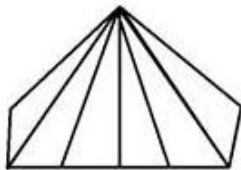


How many persons have only motorcycle?

- Ans
- 1. 32
 - 2. 3
 - 3. 9
 - 4. 12

Question ID : 424429859
Status : Answered
Chosen Option : 4

Q.6 How many triangles are there in the given figure?



- Ans
- 1. 12
 - 2. 13
 - 3. 10
 - 4. 11

Question ID : 424429855
Status : Answered
Chosen Option : 1

Q.7 Select the set in which the numbers are related in the same way as are the numbers of the following set.

(2, 6, 42)

- Ans**
- 1. (9,13,43)
 - 2. (4, 8, 39)
 - 3. (4,12,86)
 - 4. (1, 2, 6)

Question ID : 424429838
Status : Answered
Chosen Option : 4

Q.8 Four numbers have been given, out of which three are alike in some manner and one is different. Select the one that is different.

- Ans**
- 1. 393
 - 2. 384
 - 3. 441
 - 4. 600

Question ID : 424429841
Status : Answered
Chosen Option : 3

Q.9 Select the set in which the numbers are related in the same way as are the numbers of the following set.

(10, 50, 1250)

- Ans**
- 1. (9, 45, 945)
 - 2. (2, 10, 125)
 - 3. (4, 20, 300)
 - 4. (4, 8, 32)

Question ID : 424429839
Status : Answered
Chosen Option : 4

Q.10 Select the option figure that will come next in the following series.



Ans



Question ID : 424429854

Status : Answered

Chosen Option : 2

Q.11 Read the given statements and conclusions carefully. Assuming that the information given in the statements is true, even if it appears to be at variance with commonly known facts, decide which of the given conclusions logically follow(s) from the statements.

Statements:

1. Some bananas are green.
2. Some green are yellow.

Conclusions:

- I. Some bananas are yellow.
- II. Some yellow are bananas.
- III. All yellow are bananas.
- IV. Some green are bananas.

Ans 1. Only conclusions I, II and IV follow.

2. Only conclusions II and IV follow.

3. Only conclusions I and IV follow.

4. Only conclusion IV follows.

Question ID : 424429852

Status : Answered

Chosen Option : 4

Q.12 Select the option in which the given figure is embedded. (Rotation is not allowed)



Ans

1.



2.



3.



4.



Question ID : 424429856

Status : Answered

Chosen Option : 3

Q.13 Four letter-clusters have been given, out of which three are alike in some manner and one is different. Select the odd letter-cluster.

Ans

1. LMNO

2. ABCD

3. IJKL

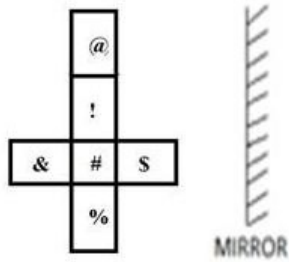
4. WXYZ

Question ID : 424429850

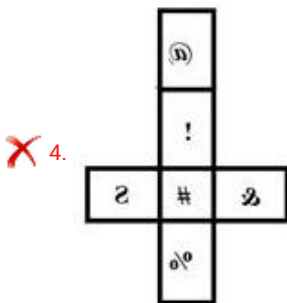
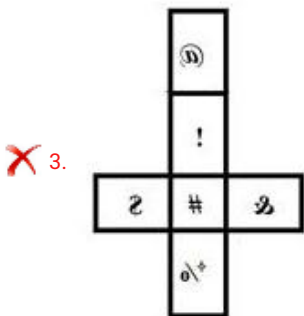
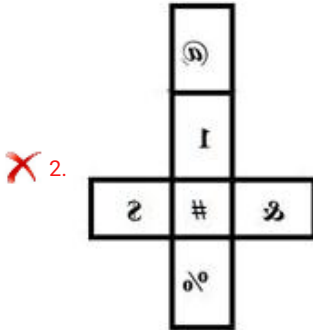
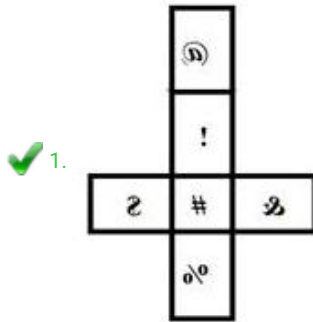
Status : Not Answered

Chosen Option : --

Q.14 Which of the following options is the correct mirror image of the given figure?



Ans



Question ID : 424429858
Status : Answered
Chosen Option : 1

Q.15 Select the combination of letters that when sequentially placed in the blanks of the given letter series will complete the series.

_ _bc_ _ eaa_ cde_ abc_ _ea_ _cdee

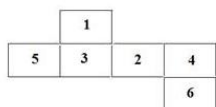
- Ans**
- 1. aacdebceacdeabc
 - 2. aacdebceaabccde
 - 3. aacdebceabceacd
 - 4. abceacdeabcacde

Question ID : 424429847

Status : Answered

Chosen Option : 1

Q.16 If the following figure is folded to form a cube, then which number will be on the face opposite to the face having number '1'?



- Ans**
- 1. 4
 - 2. 6
 - 3. 5
 - 4. 1

Question ID : 424429853

Status : Answered

Chosen Option : 2

Q.17 Aman has an equal number of one, five, ten and twenty rupee bank notes, to make a total of ₹1,080. How many bank notes does Aman have in total?

- Ans**
- 1. 100
 - 2. 90
 - 3. 120
 - 4. 105

Question ID : 424429835

Status : Answered

Chosen Option : 3

Q.18 Select the option that is related to the third letter-cluster in the same way as the second letter-cluster is related to the first letter-cluster.

BLISS : STNLF :: STOP : _____

- Ans**
- 1. BLSQ
 - 2. TQST
 - 3. TTSQ
 - 4. TTRR

Question ID : 424429845
Status : Not Answered
Chosen Option : --

Q.19 Which two numbers should be interchanged in the following equation to make it correct?

$$6 + 28 \div 4 - 2 \times 17 = 12$$

- Ans**
- 1. 17 and 4
 - 2. 28 and 2
 - 3. 17 and 6
 - 4. 6 and 4

Question ID : 424429836
Status : Answered
Chosen Option : 3

Q.20 Select the letter-cluster that can replace the question mark (?) in the following series.

IHWU : HFRS :: LMQT : ?

- Ans**
- 1. LKPN
 - 2. LNMK
 - 3. LMNO
 - 4. KKNP

Question ID : 424429851
Status : Answered
Chosen Option : 4

Q.21 Select the option that is related to the third number in the same way as the second number is related to the first number.

9 : 72 :: 5 : ?

- Ans**
- 1. 25
 - 2. 35
 - 3. 39
 - 4. 20

Question ID : 424429837
Status : Answered
Chosen Option : 4

Q.22 Between the siblings A and B, one is a brother and the other a sister. B is the son of X. X is Y's husband and O's brother.
How is A related to O?

- Ans
- 1. Granddaughter
 - 2. Cousin
 - 3. Nephew
 - 4. Niece

Question ID : 424429848
Status : Answered
Chosen Option : 4

Q.23 In a certain code language, SCIENCE is written as TFNLWNR. How will ARTS be written in that language?

- Ans
- 1. BTYA
 - 2. BUYZ
 - 3. TSRA
 - 4. BTYZ

Question ID : 424429843
Status : Answered
Chosen Option : 2

Q.24 'Tree' is related to 'Mango in the same way as 'Vine' is related to '_____ '.

- Ans
- 1. Orange
 - 2. Banana
 - 3. Guava
 - 4. Grape

Question ID : 424429846
Status : Answered
Chosen Option : 4

Q.25 In a certain code language, SKILL is coded as 57 and LOVE is coded as 40. How will LIE be coded as in that language?

- Ans
- 1. 20
 - 2. 22
 - 3. 17
 - 4. 26

Question ID : 424429844
Status : Answered
Chosen Option : 3