

**Q.1** If 'DESIGN' is coded as 'OHJTFE' in a code language, then, how will 'STRONG' be coded as in the same code language?

- Ans**
- 1. TUSPOH
  - 2. DOPSKJ
  - 3. HOPSVU
  - 4. HOPSUT

Question ID : 8161612981  
Status : Answered  
Chosen Option : 4

**Q.2** 'Algebra' is related to 'Maths' in the same way as 'Optics' is related to '\_\_\_\_\_'.  
,

- Ans**
- 1. Physics
  - 2. Electronics
  - 3. Geography
  - 4. Biology

Question ID : 8161612976  
Status : Answered  
Chosen Option : 1

**Q.3** Four numbers have been given, out of which three are alike in some manner and one is different. Select the number that is different from the rest.

- Ans**
- 1. 651
  - 2. 421
  - 3. 853
  - 4. 725

Question ID : 8161612971  
Status : Answered  
Chosen Option : 2

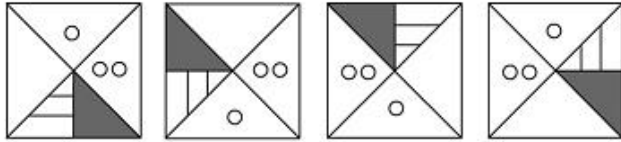
**Q.4** Select the option in which the numbers share the same relationship as that shared by the given pair of numbers.

8 : 36

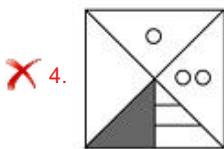
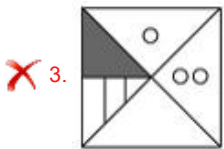
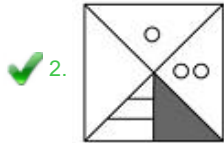
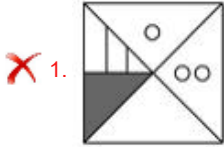
- Ans**
- 1. 6 : 24
  - 2. 10 : 42
  - 3. 4 : 8
  - 4. 12 : 78

Question ID : 8161612967  
Status : Answered  
Chosen Option : 2

Q.5 Select the figure that will come next in the following figure series.



Ans



Question ID : 8161612984

Status : Answered

Chosen Option : 4

Q.6 रमेश का अपनी माँ के दामाद की पत्नी की बहन से क्या संबंध है?

Ans ✗ 1. ससुर

✗ 2. पति

✗ 3. पिता

✓ 4. भाई

Question ID : 8161612978

Status : Answered

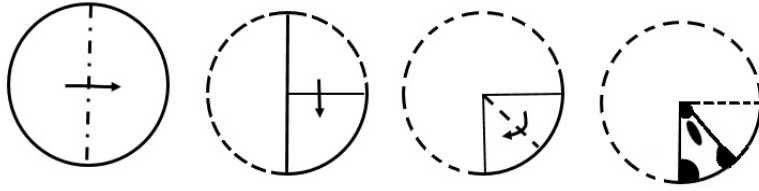
Chosen Option : 4

**Q.7** Four number-pairs have been given, out of which three are alike in some manner and one is different. Select the number-pair that is different from the rest.


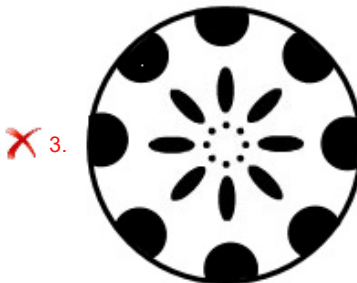
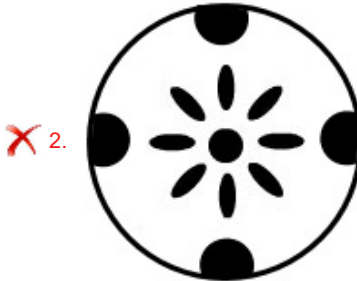
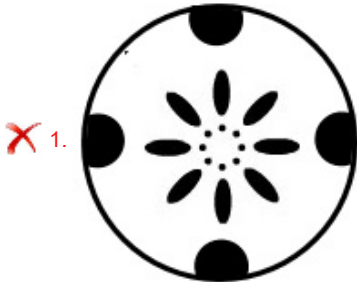
- Ans
- 1. 16 : 125
  - 2. 289 : 5832
  - 3. 576 : 3375
  - 4. 25 : 216

Question ID : **8161612969**  
Status : **Not Answered**  
Chosen Option : --

**Q.8** The sequence of folding a piece of paper and the manner in which the folded paper has been cut is shown in the following figures. How would this paper look when unfolded?



Ans



Question ID : 8161612987  
Status : Answered  
Chosen Option : 4

**Q.9** Select the option that is related to the third letter-cluster in the same way as the second letter-cluster is related to the first letter-cluster.

DASH : FYUF :: BOARD : ?

- Ans**
- 1. ZQYTB
  - 2. ZPCLZ
  - 3. DQYBF
  - 4. DMCPF

Question ID : 8161612975  
Status : Answered  
Chosen Option : 4

**Q.10** Select the number that can replace the question mark (?) in the following series.

589, 572, 557, 544, 533, ?

- Ans**
- 1. 525
  - 2. 523
  - 3. 522
  - 4. 524

Question ID : 8161612968  
Status : Answered  
Chosen Option : 4

**Q.11** Arrange the following words in a logical and meaningful order.

I. Millimeter

II. Decameter

III. Decimeter

IV. Centimeter

- Ans**
- 1. II, III, I, IV
  - 2. III, II, I, IV
  - 3. I, III, IV, II
  - 4. I, IV, III, II

Question ID : 8161612972  
Status : Answered  
Chosen Option : 4


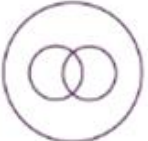


**Q.12** Which of the following sequential order of operations will replace the '\*' signs and make the equation  $12 * 3 * 6 * 8 * 4 = -4$  correct?

- Ans**
- 1.  $\div, \times, +, -$
  - 2.  $-, \times, +, \div$
  - 3.  $+, +, \times, -$
  - 4.  $\times, -, +, \div$

Question ID : 8161612966  
Status : Answered  
Chosen Option : 2

**Q.13** Select the Venn diagram that best illustrates the relationship between the following:

Omnivore, Bear, Cattle

- Ans**
- 1. 
  - 2. 
  - 3. 
  - 4. 

Question ID : 8161612989  
Status : Answered  
Chosen Option : 2

**Q.14** Read the given statements and conclusions carefully. Assuming that the information given in the statements is true, even if it appears to be at variance with commonly known facts, decide which of the given conclusions logically follow(s) from the statements.

**Statements:**

- 1. Some students are listeners.
- 2. Some listeners are observers.
- 3. Many students are not observers.

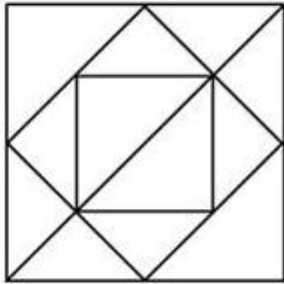
**Conclusions:**

- I. Some students are observers.
- II. Some observers are not students.
- III. Some observers are listeners.

- Ans**
- 1. Only conclusions I and III follow.
  - 2. Only conclusion III follows.
  - 3. Only conclusion I follows.
  - 4. Only conclusion II follows.

Question ID : 8161612982  
Status : Answered  
Chosen Option : 2

**Q.15** How many triangles are present in the following figure?



- Ans**
- 1. 14
  - 2. 18
  - 3. 16
  - 4. 15

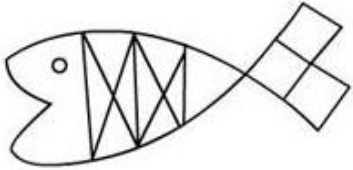
Question ID : 8161612985  
Status : Answered  
Chosen Option : 3

Q.16 Select the option in which the given figure is embedded.

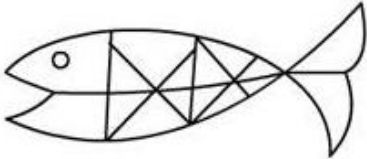


Ans

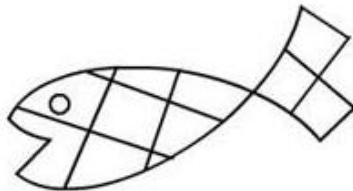
X 1.



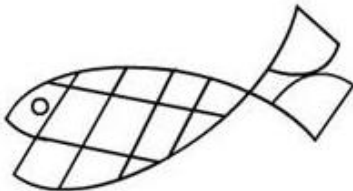
X 2.



✓ 3.



X 4.



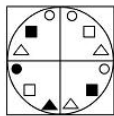
Question ID : 8161612986

Status : Answered

Chosen Option : 3

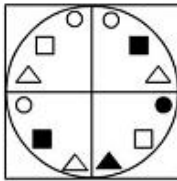


**Q.17** Select the correct mirror image of the given figure when the mirror is placed to the right side of the figure.

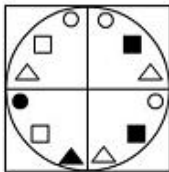


Ans

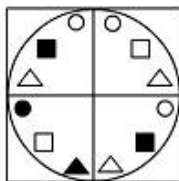
✓ 1.



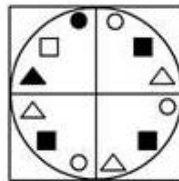
✗ 2.



✗ 3.



✗ 4.



Question ID : 8161612988

Status : Answered

Chosen Option : 1

**Q.18** Three persons A, B and C had ₹360 altogether. A transferred half of the amount he had to B, and C transferred half of the amount he had to A. After the transfer, all of them have equal amounts. What is the total amount B had before the transfer?

Ans ✓ 1. ₹120

✗ 2. ₹0

✗ 3. ₹240

✗ 4. ₹180

Question ID : 8161612965

Status : Not Answered

Chosen Option : --

**Q.19** Select the option in which the words share the same relationship as that shared by the given pair of words.

Fish : Pisciculture

- Ans**
- 1. Silkworm : Sericulture
  - 2. Earthworm : Horticulture
  - 3. Goat : Apiculture
  - 4. Honeybee : Citriculture

Question ID : 8161612979  
Status : Answered  
Chosen Option : 1

**Q.20** Four letter-clusters have been given, out of which three are alike in some manner and one is different. Select the odd letter-cluster.

- Ans**
- 1. DHPFL
  - 2. BDHPF
  - 3. CFLXV
  - 4. ABDGN

Question ID : 8161612980  
Status : Not Answered  
Chosen Option : --

**Q.21** Select the combination of letters that when sequentially placed in the blanks of the given letter series will complete the series.

ab \_ a \_ \_ ba \_ \_ a \_ \_ ac

- Ans**
- 1. abccaba
  - 2. cbaabcb
  - 3. cabbacb
  - 4. acaacba

Question ID : 8161612977  
Status : Not Attempted and Marked For Review  
Chosen Option : --

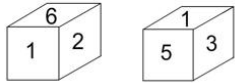
**Q.22** Select the number that can replace the question mark (?) in the following series.

5, 9, 10, 28, 17, 65, ?

- Ans**
- 1. 26
  - 2. 32
  - 3. 93
  - 4. 78

Question ID : 8161612970  
Status : Not Attempted and Marked For Review  
Chosen Option : --

**Q.23** Two different positions of the same dice are shown. Assuming that the sum of opposite faces is an odd number, select the number that will be on the face opposite to the one having the number '2'.



- Ans
- 1. 3
  - 2. 1
  - 3. 5
  - 4. 4

Question ID : 8161612983  
Status : Answered  
Chosen Option : 3

**Q.24** In a certain code language, BOARD is written as CMDNI. How will WHITE be written as in that language?

- Ans
- 1. VJFPZ
  - 2. XFLPJ
  - 3. XJMQZ
  - 4. VFJQB

Question ID : 8161612973  
Status : Answered  
Chosen Option : 2

**Q.25** In a certain code language, SYNC is coded as 4417 and MINT is coded as 2234. How will NOSE be coded as in that language?

- Ans
- 1. 5729
  - 2. 3419
  - 3. 2924
  - 4. 1758

Question ID : 8161612974  
Status : Not Attempted and Marked For Review  
Chosen Option : --