

SSC CHSL (10+2) Exam Mock Test -5 "Reasoning"

Directions: Find the related word/letters/number to complete the Analogy.

1. Carbon : Diamond :: Corundum : ?

- (a) Garnet
- (b) Ruby
- (c) Pukhraj
- (d) Pearl

2. Smoke : Pollution :: War

- (a) Victory
- (b) Peace
- (c) Treaty
- (d) Destruction

3. Ink : Pen :: Blood ?

- (a) Accident
- (b) Doctor
- (c) Vein
- (d) Donation

4. BOQD : ERTG :: ANPC : ?

- (a) DQSF
- (b) FSHU
- (c) SHFU
- (d) DSQF

5. AFKP : ZUPK :: BGLQ : ?

- (a) YUQM
- (b) XURO

(c) YXWV

(d) YTOJ

6. 182 : ? :: 210 : 380

(a) 342

(b) 272

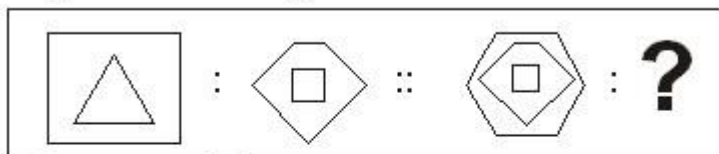
(c) 240

(d) 156

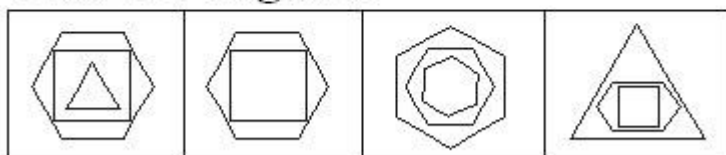
Directions: Select the related figure from the Answer Figures.

7.

Question Figures



Answer Figures



(a)

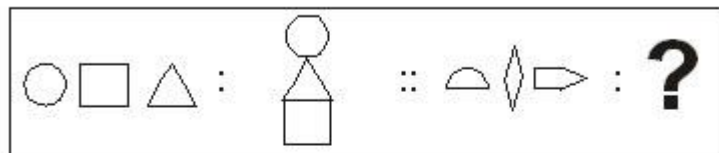
(b)

(c)

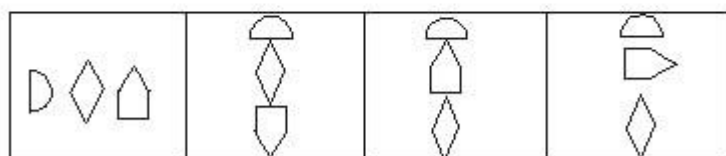
(d)

8.

Question Figures



Answer Figures



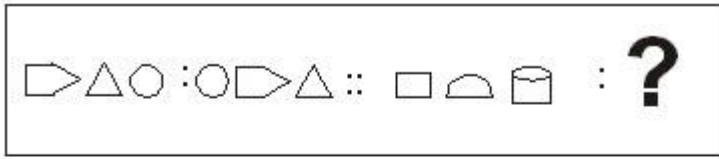
(a)

(b)

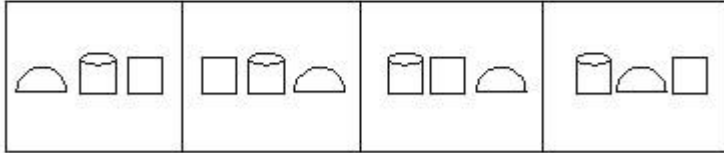
(c)

(d)

9.



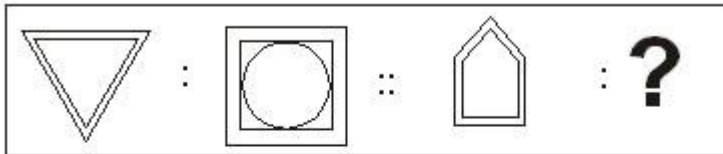
Answer Figures



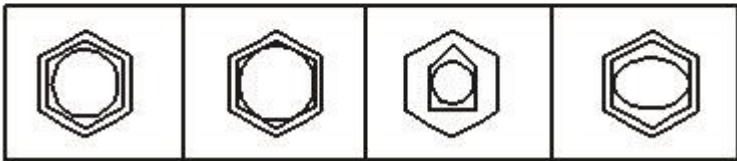
(a) (b) (c) (d)

10.

Question Figures



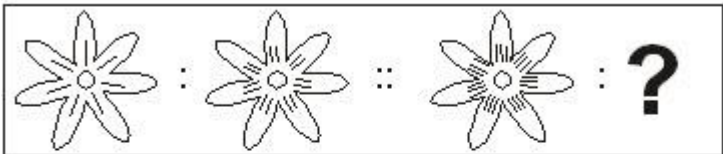
Answer Figures



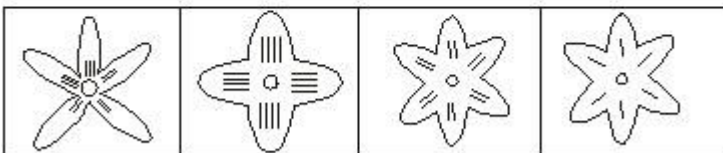
(a) (b) (c) (d)

11.

Question Figures



Answer Figures



(a) (b) (c) (d)

Directions: Find the odd one out from the given alternatives.

12. (a) Mizoram

(b) Sikkim

- (c) Kohima
- (d) Manipur
- 13.** (a) Amoeba
- (b) Bacteria
- (c) Germs
- (d) Microbes
- 14.** (a) IJCD
- (b) WUTS
- (c) QRKL
- (d) PQMN

- 15.** (a) 8
- (b) 42
- (c) 49
- (d) 35
- 16.** (a) 81 : 243
- (b) 16: 64
- (c) 64: 192
- (d) 25: 75

Directions: Which one of the given responses would be a meaningful order of the following?

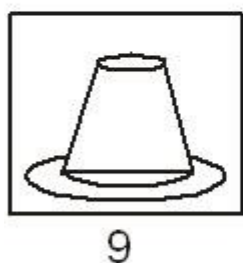
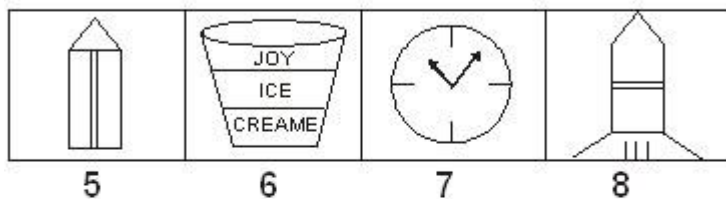
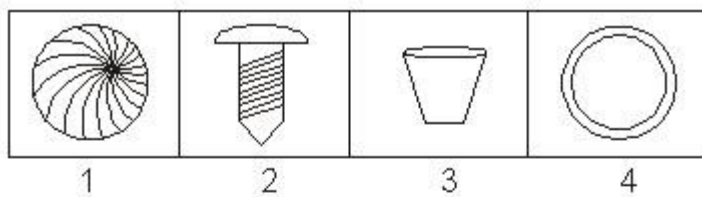
- 17. 1. Book
- 2. Pulp
- 3. Timber
- 4. Jungle
- 5. Paper
- (a) 3, 2, 5, 1, 4
- (b) 2, 5, 1, 4, 3
- (c) 4, 3, 2, 5, 1
- (d) 5, 4, 3, 1, 2

Directions: Arrange the following words according to dictionary arrangement.

- 18. 1. Epitaxy
- 2. Episode
- 3. Epigene
- 4. Epitome
- 5. Epilogue
- (a) 1, 2, 3, 4, 5
- (b) 3, 5, 2, 1, 4
- (c) 5, 4, 2, 1, 3
- (d) 3, 2, 5, 4, 1

Directions: A series of figures are given which can be grouped into classes. Select the groups into which the figures can be class fed.

19.



1, 4, 7	1, 3, 9	1, 2, 4	1, 4, 9
2, 5, 8	2, 5, 8	3, 5, 8	2, 5, 8
3, 6, 7	4, 7, 9	6, 7, 9	3, 6, 7

(a) (b) (c) (d)

20.

SSC CHSL (10+2) Printed Study Kit



- 100% CHSL Exam Syllabus Covered
- 5 Books, 1000+ Pages
- 4500+ MCQs
- Solved Papers & Mock Tests (PDF Copy)
- 1 Year Current Affairs (PDF Copy)

50% OFF
₹ 4,000/-
₹ **1,999/-**

FREE SHIPPING 

for Exam Help Call Us at: +91 8800734161

 SSCPOTAL.IN

What you will get:

- 100% CHSL Exam Syllabus Covered
- 5 Booklets
- More Than 1000+ Pages
- 4500+ MCQs
- Previous Solved Papers
- Current Affairs for Exam
- Guidance & Support from Our Experts

Price of the Kit:

Rs. 4,000

Rs. 1,999/-

(Limited time Offer)



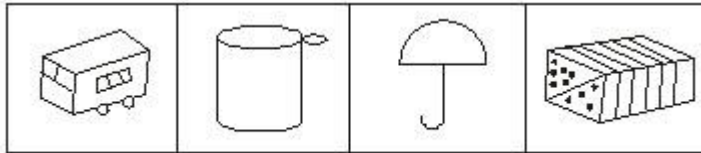
Net Banking

Order Online (100% Safe)

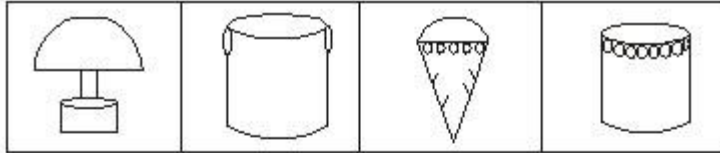
[Click here for Other Payment Options \(Cash/NEFT/etc\)](#)

[FOR MORE DETAILS CLICK HERE](#)

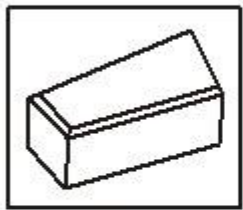




1 2 3 4



5 6 7 8

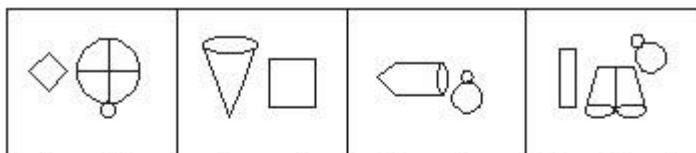


9

1, 4, 9 2, 6, 8 3, 5, 7	1, 4, 5 3, 6, 8 2, 7, 9	1, 4, 6 2, 7, 8 3, 5, 9	1, 3, 6 2, 4, 7 5, 8, 7
-------------------------------	-------------------------------	-------------------------------	-------------------------------

(a) (b) (c) (d)

21.



1 2 3 4 5 6 7 8 9

1, 2, 4 3, 5, 6 8, 7, 9	9, 7, 6 5, 3, 1 8, 7, 9	2, 3, 4 7, 6, 5 4, 8, 2	1, 4, 7 2, 6, 9 3, 5, 8
-------------------------------	-------------------------------	-------------------------------	-------------------------------

(a) (b) (c) (d)

Directions: Which one set of letters when sequentially placed at the gaps in the given letter series shall complete it?

22. — stt — tt — tts —

- (a) tsst
- (b) sstt
- (c) ttst
- (d) tsts

23. Number of letters skipped in between adjacent letters goes on increasing successively by one in the series. Identify the set following the above rule.

- (a) AEIMQU
- (b) EHKNQT
- (c) DINSXC
- (d) FHKOTZ

Directions: Find the missing number from the given responses.

24.

$$\frac{2}{3}, \frac{7}{7}, \dots, \frac{11}{21}, \frac{16}{31}$$

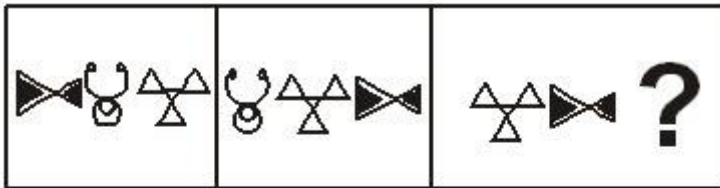
- (a) $\frac{6}{11}$
- (b) $\frac{5}{9}$
- (c) $\frac{9}{17}$
- (d) $\frac{7}{13}$

25. 25, 50, 30, 45, 35, 40, ?

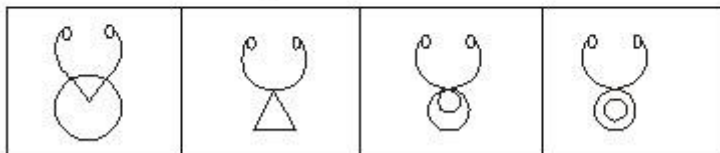
- (a) 30
- (b) 35
- (c) 40
- (d) 45

Directions: Find the missing figure in the series from the given answer figures.

26. Question Figures



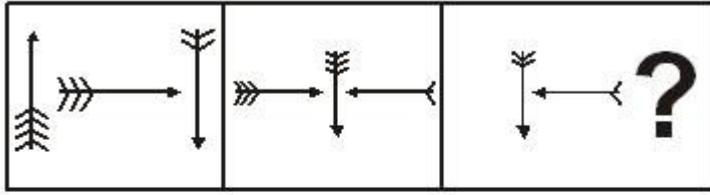
Answer Figures



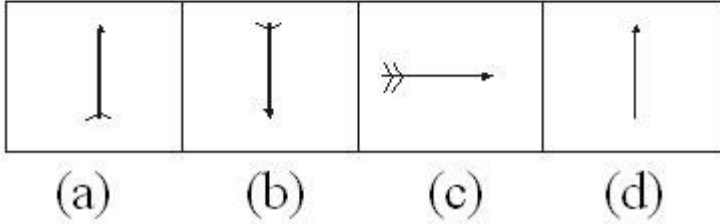
- (a)
- (b)
- (c)
- (d)

27.

Question Figures



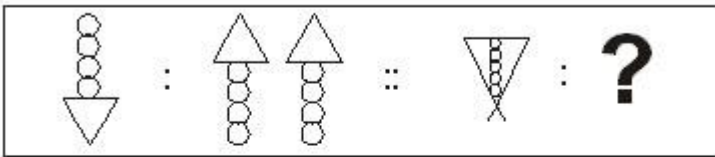
Answer Figures



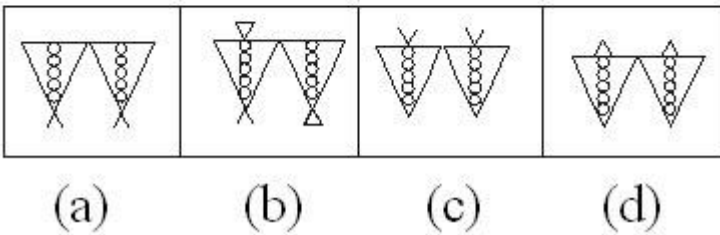
Directions: Select the related figure from the answer figures.

28.

Question Figures



Answer Figures



29. If '+' stands for division, '÷' stands for multiplication, 'x' stands for subtraction and '-' stands for addition, which one of the following is correct?

- (a) $18 \div 6 - 7 + 5 \times 2 = 20$
- (b) $18 + 6 \div 7 \times 5 - 2 = 18$
- (c) $18 \times 6 \div 7 + 5 - 2 = 16$
- (d) $18 \div 6 \times 7 + 5 - 2 = 22$

30. If '-' stands for division, '+' for multiplication, '÷' for subtraction and 'x' for addition, which one of the following equations is correct?

- (a) $18 \div 3 \times 2 + 8 - 6 = 10$
- (b) $18 - 3 + 2 \times 8 \div 6 = 14$

(c) $18 - 3 \div 2 \times 8 + 6 = 17$

(d) $18 \times 3 + 2 \div 8 - 6 = 15$

31. If $324 \times 150 = 54$, $251 \times 402 = 48$ and $523 \times 246 = 120$ then $651 \times 345 = ?$

(a) 120

(b) 85

(c) 144

(d) 60

32. Some equations are solved on the basis of certain system. Find out the correct answer for the unsolved equation on that basis.

If $12 \times 7 = 408$ and $9 \times 8 = 207$ then $13 \times 7 = ?$

(a) 190

(b) 91

(c) 901

(d) 109

33. If NOIDA is written as STNIF, how MEERUT can be written in that code?

(a) QIIVYX

(b) RJJWZV

(c) RJJWZY

(d) RIIVYX

34. In a certain code FORGET is written as DPPHCU, how would DOCTOR be written in that code?

(a) BPAUMS

(b) BPAUPS

(c) EMDRPP

(d) BPARPP

35. In a certain code DECEMBER is written as ERMBCEDE, in that code which word will be written as ERMBVENO ?

(a) SEPTEMBER

(b) AUGUST

(c) NOVEMBER

(d) OCTOBER

36. If RED is coded as 6720, then how GREEN would be coded?

(a) 9207716

(b) 1677199

(c) 1677209

(d) 16717209

37. If 9th of the month falls on the day preceding Sunday, on what day will 1st of the month fall?

(a) Friday

(b) Saturday

- (c) Sunday
- (d) Monday

38. Average marks obtained by 9 students in one row of a class is 45. One student with 35 marks exchanges his seat with a student securing 48 marks. What is the average marks of these 9 students of this row?

- (a) 56.4
- (b) 46.4
- (c) 47.6
- (d) 45.6

39. Kamu walks 5 kms straight from her house towards west then turns right and walks 3 kms. There after she takes left turn and walks 2 km. Further, she turns left and walks 3 km. Finally, she turns right and walks 3 kms. In what direction she is now from her house?

- (a) West
- (b) North
- (c) South
- (d) East

Directions: In the following question a statement is followed by four inferences. Select the one which is most appropriate.

40. Statement: In the university examination most of the candidates write in Hindi medium. Inferences

- (a) All the candidates who appear in this examination write answers in Hindi.
- (b) In this examination no candidate writes answers other than in Hindi.
- (c) Mostly candidates with Hindi medium appear in this examination.
- (d) Some candidates of this examination write in Hindi.

Directions: In the following questions a word is followed by 4 other words, one of which cannot be formed by using the letters of the given word. Find this word.

41. PROSPECTIVE

- (a) PEPTIC
- (b) PEPPER
- (c) VECTOR
- (d) RESET

42. APPROXIMATELY

- (a) APEX
- (b) APPRISE
- (c) APPROXIMATE
- (d) APRIL

Directions: Which of the answer figures is exactly the mirror image of the given figure when the mirror is held at PQ?

SSC CHSL(10+2) परीक्षा अध्ययन सामग्री



- 100% CHSL Exam Syllabus Covered
- 5 Books, 900+ Pages
- 2500+ MCQs
- 1 Year Current Affairs (PDF Copy)
- Support & Guidance

50% OFF
₹ 4,000/-
₹ **1,999/-**

FREE SHIPPING

for Exam Help Call Us at: +91 8800734161

SSCPORTAL.IN

आप क्या प्राप्त करेंगे?

- माध्यम: हिन्दी
- 100 प्रतिशत पाठ्यक्रम
- 900 से अधिक पृष्ठ
- 2500 से अधिक वस्तुनिष्ठ प्रश्न
- कुल 5 पुस्तिकाएँ
- अध्यायवार M.C.Q
- गणित एवं तार्किक क्षमता को हल करने की सरल विधि
- 5 अभ्यास प्रश्न पत्र (PDF Copy)
- हमारे विशेषज्ञों द्वारा मार्गदर्शन और सहायता

Price of the Kit:

Rs. 4,200

Rs. 1,999/-

(Limited time Offer)

 Buy Online

VISA Maestro MasterCard RuPay

Net Banking

Order Online (100% Safe)

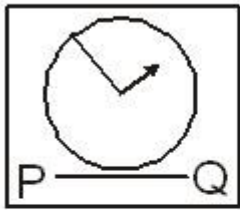
[Click here for Other Payment Options \(Cash/NEFT/etc\)](#)

FOR MORE DETAILS CLICK HERE

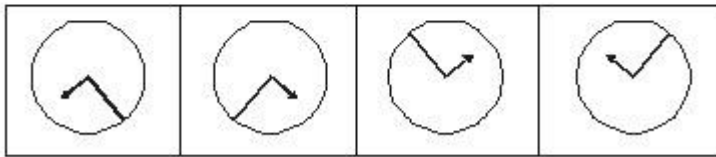
50% OFF

43.

Question Figure



Answer Figures



(a)

(b)

(c)

(d)

44. Amit travelled 15 kms. eastward, then turned left and travelled 5 kms, then turned left and travelled 15 kms. How far was Amit from the starting point?

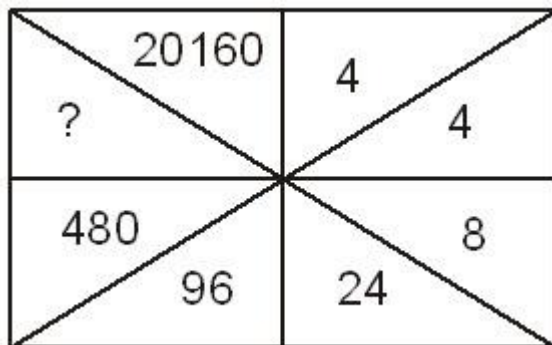
- (a) 30 kms.
- (b) 35 kms.
- (c) 15 kms.
- (d) 5 kms.

45. At 12.30 the hour hand of a clock faces North and the minute hand faces South. At 2.45 the minute hand will be in which direction?

- (a) North-West
- (b) West
- (c) South-East
- (d) East

Directions: Find the missing number from the given responses.

46.



- (a) 860
- (b) 1140

(c) 2880

(d) 3240

47.

$$\begin{array}{ccc}
 3 & 6 & 2 \\
 5 \boxed{12} 4 & 5 \boxed{18} 2 & 5 \boxed{?} 2 \\
 2 & 3 & 9
 \end{array}$$

(a) 15

(b) 18

(c) 17

(d) 16

48. The trend results are shown at the end of each column. Find out the figure against the missing number.

9	8	7
6	7	8
5	4	?
270	224	336

(a) 9

(b) 6

(c) 7

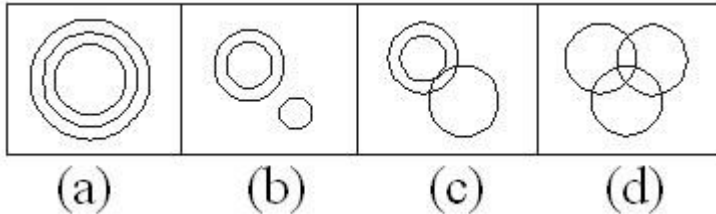
(d) 5

49. In the question given below the numbers given at the top follow a certain specific pattern. Study out the pattern and find out the missing number.

9	4	20
8	5	12
7	6	?

- (a) 2
- (b) 4
- (c) 6
- (d) 9

50. Which figure represents Rhombus, Quadrilaterals, Polygons?



ANSWERS

1. (b) 2. (d) 3. (c) 4. (a) 5. (d) 6. (a) 7. (c) 8. (d) 9. (c) 10. (b) 11. (b) 12. (c) 13. (a) 14. (b) 15. (a) 16. (b) 17. (c) 18. (b) 19. (a) 20. (a) 21. (d) 22. (a) 23. (d) 24. (d) 25. (c) 26. (d) 27. (d) 28. (c) 29. (b) 30. (b) 31. (c) 32. (d) 33. (c) 34. (a) 35. (c) 36. (c) 37. (a) 38. (b) 39. (a) 40. (d) 41. (b) 42. (b) 43. (b) 44. (d) 45. (b) 46. (c) 47. (b) 48. (b) . 49. (b) 50. (a)



SSC EXAMS PRINTED STUDY NOTES

Study Material for SSC CGL (Tier-1) Examination	English	CLICK HERE
Study Kit for SSC CGL (Tier-2) Exam	English	CLICK HERE
Study Kit for SSC CHSL (10+2) Examination	English	CLICK HERE
Study Kit for SSC Stenographers (Grade 'C' & 'D')	English	CLICK HERE
Study Kit for Multitasking (Non-Technical) - MTS	English	CLICK HERE
Study Kit for SSC Constables (GD) Exam	English	CLICK HERE
Study Kit For SSC Sub-Inspectors in Delhi Police, CAPFs, CISF	English	CLICK HERE
Study Kit for SSC Junior Engineer Exam (Paper-1)	English	CLICK HERE
IAS EXAMS STUDY MATERIALS		
Study Kit for IAS (Pre) GENERAL STUDIES Paper-1 (GS)	English	CLICK HERE
Study Kit for IAS (Pre) CSAT Paper-2(Aptitude)	English	CLICK HERE
सामान्य अध्ययन (GS) प्रारंभिक परीक्षा (Pre) पेपर-1	हिन्दी	CLICK HERE
आई. ए. एस. (सी-सैट) प्रारंभिक परीक्षा पेपर -2	हिन्दी	CLICK HERE
Gist of NCERT Study Kit For UPSC Exams	English	CLICK HERE
यूपीएससी परीक्षा के लिए एनसीईआरटी अध्ययन सामग्री	हिन्दी	CLICK HERE