

## SSC CHSL (10+2) Exam Mock Test -4 "Reasoning"

1. As Lira is related to Italy, so is taka related to which country?

- (a) Pakistan
- (b) India
- (c) England
- (d) Bangladesh

2. As soft is related to wax, so is leather related to what ?

- (a) Plain
- (b) Rough
- (c) Smooth
- (d) Tough

3. As music is related to tune, so is design related to -

- (a) Beauty
- (b) Building
- (c) Architecture
- (d) Symmetry

4. As alphabet is related to letters, similarly necklace is related to what ?

- (a) Gold
- (b) Beads
- (c) Ornament
- (d) Silver

5. Paddy : Field :: Steel . ?

- (a) Iron
- (b) Factory
- (c) Ore
- (d) Mine

**6. Laugh : Joke :: ? : Cracker**

- (a) Fear
- (b) Anger
- (c) Fireball
- (d) Explode

**7. President : India: : King**

- (a) England
- (b) China
- (c) Jordan
- (d) France

**8. Light : Rays: : Sound : ?**

- (a) Audio
- (b) Wave
- (c) Hear
- (d) Visual

**9. PCWL : REXM :: THNY : ‘?’**

- (a) OZPL
- (b) KOVZ
- (c) PMKZ
- (d) VJO

**Directions:** Find out the missing letter number in each of the following questions ?

**10. 0, 2, 6, 12, ?, 30, 42**

- (a) 24
- (b) 20
- (c) 21
- (d) 22

**11. 5, 7, 11, 19, 35, 67, ?, 259**

- (a) 130
- (b) 129
- (c) 131
- (d) 140

**12. 3, 7, 15, 31, 63, 127, ?**

- (a) 255
- (b) 260
- (c) 245
- (d) 265

**13. 7, 12, 22, 37, ?, 82, 112, 147**

- (a) 50
- (b) 58
- (c) 57
- (d) 156

**14. -1, 2, 7, ?, 23, 34, 47**

- (a) 13
- (b) 14
- (c) 12
- (d) 15

**15. a-bbc-aab-as-abba**

- (a) cabaa
- (b) bacba
- (c) bbaaa
- (d) aabba

**16. nc-dcn—cddc-n-ddcnn-d**

- (a) cdndc
- (b) dnncc
- (c) dcndd
- (d) nccdn

**Directions:** Identify the odd man out in the following questions.

**17. (a) Gupta dynasty**

- (b) Nanda dynasty
- (c) Maurya dynasty
- (d) Chola dynasty

**18. (a) Vayudoot**

- (b) Pushkar
- (c) Indian Airlines
- (d) Air India

**19. (a) Andaman-Nicobar**

- (b) Puducherry
- (c) Delhi
- (d) Goa

**20. (a) Violent**

- (b) Blue
- (c) Green
- (d) White

**21. (a) CRDT**

- (b) APBQ

# SSC CHSL (10+2) Printed Study Kit



- 100% CHSL Exam Syllabus Covered
- 5 Books, 1000+ Pages
- 4500+ MCQs
- Solved Papers & Mock Tests (PDF Copy)
- 1 Year Current Affairs (PDF Copy)

**50% OFF**  
₹ 4,000/-  
₹ **1,999/-**

FREE SHIPPING 

for Exam Help Call Us at: +91 8800734161

 SSCPOTAL.IN

## What you will get:

- 100% CHSL Exam Syllabus Covered
- 5 Booklets
- More Than 1000+ Pages
- 4500+ MCQs
- Previous Solved Papers
- Current Affairs for Exam
- Guidance & Support from Our Experts

Price of the Kit:

Rs. 4,000

**Rs. 1,999/-**

*(Limited time Offer)*



Net Banking

**Order Online (100% Safe)**

[Click here for Other Payment Options \(Cash/NEFT/etc\)](#)

**FOR MORE DETAILS CLICK HERE**



- (c) EUFV
- (d) GWHX
- 22. (a) Harmless
- (b) Guilty
- (c) Innocent
- (d) Fearless

- 23. (a) 2
- (b) 5
- (c) 8
- (d) 11

- 24. (a) 44
- (b) 66
- (c) 132
- (d) 300

- 25. (a) Diptheria
- (b) Cataract
- (c) Whooping Cough
- (d) Encephalitis

**Directions:** Identify the missing number in the following tables ?

26.

- (a) 18
- (b) 24
- (c) 14
- (d) 16

27.

$$\begin{pmatrix} 2 & 3 & 1 \\ 1 & 2 & -1 \\ 3 & 4 & ? \end{pmatrix}$$

- (a) 5
- (b) 2

(c) 1

(d) 2

**28. If A = 1, B = 2, C = 3, ..... Z = 26 and the code for CONSTABLE is 91, then what will be the code of STABLE ?**

(a) 97

(b) 59

(c) 79

(d) 75

**29. If in a code language 'BODY' is written as 'APCZ' then how will 'DELHI' be written in the same language ?**

(a) CFKGI

(b) BFKGI

(c) CFKIH

(d) CFKH

**30. Jyoti, whose house is to the East, comes out of her house and turns East. After walking for 100 metres, she turns right and goes 50 metres. Then she turns right again. In which direction is she going now ?**

(a) East

(b) West

(c) North

(d) South

**31. What is the relation between the son of Rajkumar's sister's father in law and Raj Kumar.**

(a) Father, Son

(b) Father-in-law, Son-in-law

(c) Son-in-law, Father-in-law

(d) Uncle, Nephew

**Directions:** In the following questions, each question has a number series, out of which one number in the series is not in order. You have to identify that number?

**32. 2, 6, 18, 32, 50, 72, 98**

(a) 6

(b) 18

(c) 32

(d) 50

**33. 541, 514, 312, 743, 945, 816**

(a) 312

(b) 945

(c) 816

(d) 541

# कर्मचारी चयन आयोग (CGL) परीक्षा अध्ययन सामग्री



- 100% Syllabus Covered
- 4 Books, 900+ Pages
- 2500+ MCQs
- 08 Year Solved Papers & Mock Tests (PDF Copy)
- 1 year Current Affairs (PDF Copy)

**50% OFF**

~~₹ 4,200/-~~  
**₹ 2,100/-**

FREE SHIPPING 

for Exam Help Call Us at: +91 8800734161

SSCPortal.in

## आप क्या प्राप्त करेंगे?

- माध्यम: हिन्दी
- 100% पाठ्यक्रम
- कुल 4 पुस्तिकायें, 900 से अधिक पृष्ठ
- 2,500 से अधिक वस्तुनिष्ठ प्रश्न (MCQ)
- 8 Year Solved Papers (PDF Copy)
- Five Practice Papers (PDF Copy)
- हमारे विशेषज्ञों द्वारा मार्गदर्शन और सहायता

Price of the Kit:

Rs. 4,200

**Rs. 2,100/-**

(Limited time Offer)

 Buy Online

Net Banking

**Order Online (100% Safe)**

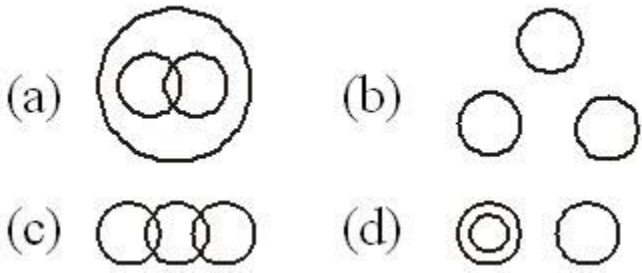
[Click here for Other Payment Options \(Cash/NEFT/etc\)](#)

[FOR MORE DETAILS CLICK HERE](#)

**50% OFF**

34. Which figure in the given option, represents the groups o words mentioned below ?

Bed cover : Pillow : Quilt

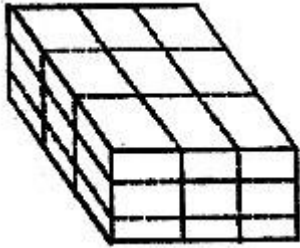


35. Which letter amongst the following alphabet is the 8th letter to the right of 17th letter from right?

A B C D E F G H I J K L M N O P Q R S T U V W X Y Z

- (a) R
- (b) N
- (c) K
- (d) Q

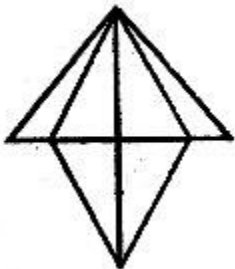
**Directions:** The cube given below has been painted by three different colours. The opposite surfaces have been painted by the same colour. Next, the cube has been cut into 27 equal parts. Answer the following questions on the basis of information so provided.



36. How many such small cubes will be there whose only one surface is painted ?

- (a) 4
- (b) 6
- (c) 8
- (d) 12

37. How many triangles are there in the figure below?



- (a) 8



- (b) 16
- (c) 12
- (d) 18

**Directions:** Seven boys A, B, C, D, E, F and G are stand in a straight line as follows

- (i) C is standing between A and G.
- (ii) B is standing to the left of E.
- (iii) G is standing between C and E.

**38. Who is standing exactly in the middle ?**

- (a) C
- (b) A
- (c) E
- (d) D

**39. Who is standing to the extreme left ?**

- (a) F
- (b) C
- (c) B
- (d) E

**Directions:** Given below are two statement and two conclusions. You have to answer on the basis of the statement. Your answer will be

- (a) If conclusion I is correct.
- (b) If conclusion II is correct.
- (c) If neither I, nor II is correct.
- (d) If both I and II are correct.

**40. 1. Mohan's age is twice that of Ram.**

**2. Ram's age is half that of Shyam.**

**Conclusion:**

- I. Shyam and Mohan are of the same age.
- II. Mohan and Shyam, both are elder to Ram.

**Directions:** In every questions below a statement has been given followed by two assumptions shown as I and II. You have decide which assumption exists in the statement and answer accordingly as follows

- (a) If only assumption I exists in the statement.
- (b) If only assumption II exists in the statement.
- (c) If either I or II exists in the statement.
- (d) If both I and II exist in the statement.

**41. Statement: Inculcate saving habit in your school-going child.**

**Assumptions:**

- I. Saving habit is expected.
- II. Good habits should be inculcated from the childhood.

42. **Statement:** The root cause of all social evils is love for wealth.

**Assumptions:**

- I. Wealth gives power and makes selfish.
- II. All those who love wealth are anti-social.

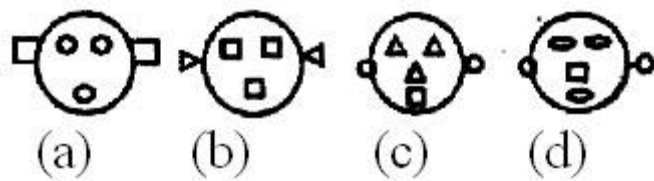
**Directions:** Which option-figure will complete the given figure series ?

43.

44.

**Directions:** In the questions given below there are four figures in each question, out of which one is different from the rest. Identify the odd man out?

45.

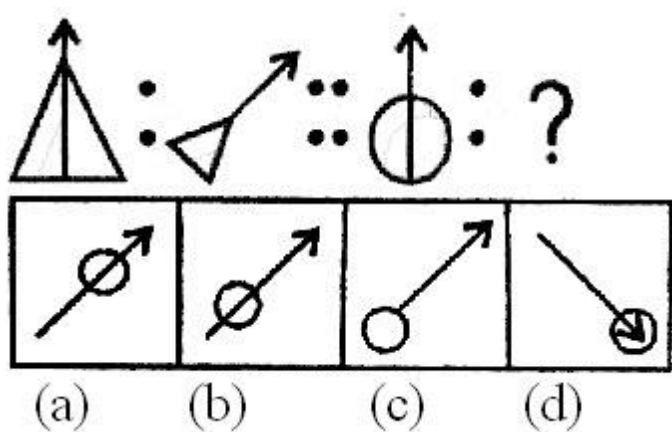


46.

47.

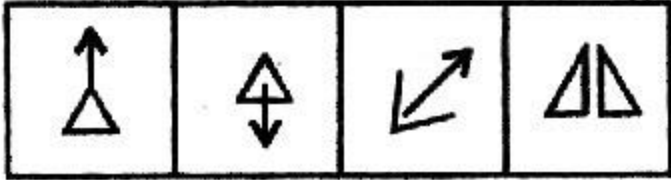
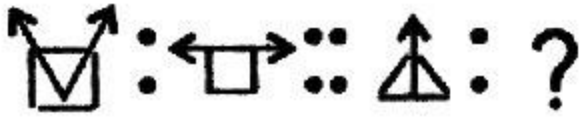
**Directions:** Which figure is related to fig. (C) in each question, as (A) is related (B). Choose your answer from the given options.

48.



49.

50.



(a) (b) (c) (d)

### ANSWERS

1. (d) 2. (d) 3. (d) 4. (b) 5. (b) 6. (d) 7. (a) 8. (b) 9. (d) 10. (b) 11. (c)  
12. (a) 13. (c) 14. (b) 15. (a) 16. (c) 17. (d) 18. (d) 19. (c) 20. (d) 21.  
(a) 22. (b) 23. (c) 24. (d) 25. (b) 26. (c) 27. (a) 28. (a) 29. (c) 30. (d)  
31. (c) 32. (a) 33. (c) 34. (b) 35. (a) 36. (b) 37. (b) 38. (b) 39. (a) 40.  
(d) 41. (d) 42. (c) 43. (a) 44. (d) 45. (c) 46. (a) 47. (b) 48. (c) 49. (d)  
50. (a)



# SSC EXAMS PRINTED STUDY NOTES

<a href="#">Study Material for SSC CGL (Tier-1) Examination</a>	<a href="#">English</a>	<a href="#">CLICK HERE</a>
<a href="#">Study Kit for SSC CGL (Tier-2) Exam</a>	<a href="#">English</a>	<a href="#">CLICK HERE</a>
<a href="#">Study Kit for SSC CHSL (10+2) Examination</a>	<a href="#">English</a>	<a href="#">CLICK HERE</a>
<a href="#">Study Kit for SSC Stenographers (Grade 'C' &amp; 'D')</a>	<a href="#">English</a>	<a href="#">CLICK HERE</a>
<a href="#">Study Kit for Multitasking (Non-Technical) - MTS</a>	<a href="#">English</a>	<a href="#">CLICK HERE</a>
<a href="#">Study Kit for SSC Constables (GD) Exam</a>	<a href="#">English</a>	<a href="#">CLICK HERE</a>
<a href="#">Study Kit For SSC Sub-Inspectors in Delhi Police, CAPFs, CISF</a>	<a href="#">English</a>	<a href="#">CLICK HERE</a>
<a href="#">Study Kit for SSC Junior Engineer Exam (Paper-1)</a>	<a href="#">English</a>	<a href="#">CLICK HERE</a>
<b>IAS EXAMS STUDY MATERIALS</b>		
<a href="#">Study Kit for IAS (Pre) GENERAL STUDIES Paper-1 (GS)</a>	<a href="#">English</a>	<a href="#">CLICK HERE</a>
<a href="#">Study Kit for IAS (Pre) CSAT Paper-2(Aptitude)</a>	<a href="#">English</a>	<a href="#">CLICK HERE</a>
<a href="#">सामान्य अध्ययन (GS) प्रारंभिक परीक्षा (Pre) पेपर-1</a>	<a href="#">हिन्दी</a>	<a href="#">CLICK HERE</a>
<a href="#">आई. ए. एस. (सी-सैट) प्रारंभिक परीक्षा पेपर -2</a>	<a href="#">हिन्दी</a>	<a href="#">CLICK HERE</a>
<a href="#">Gist of NCERT Study Kit For UPSC Exams</a>	<a href="#">English</a>	<a href="#">CLICK HERE</a>
<a href="#">यूपीएससी परीक्षा के लिए एनसीईआरटी अध्ययन सामग्री</a>	<a href="#">हिन्दी</a>	<a href="#">CLICK HERE</a>