

SSC CHSL (10+2) Exam Mock Test -3 "Reasoning"

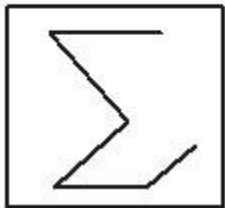
1. If CONSCIOUSLY is written as PEBNPJEXNKM, then SOIL is written as

- (a) NEKJ
- (b) NEJK
- (b) JENK
- (d) ENJK

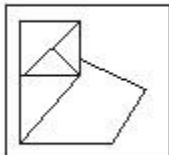
Directions: In which answer figure is the question figure embedded ?

2.

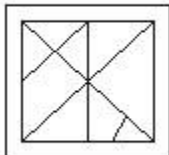
Question Figure



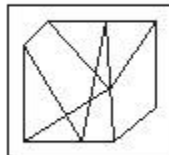
Answer Figures



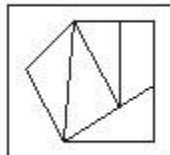
(a)



(b)



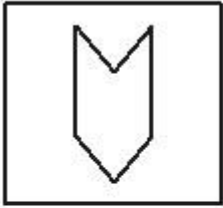
(c)



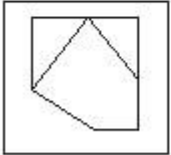
(d)

3.

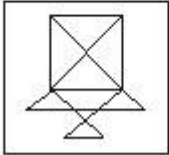
Question Figure



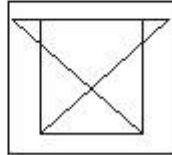
Answer Figures



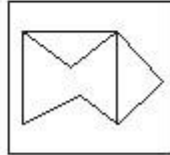
(a)



(b)



(c)



(d)

Directions : A conclusion followed by statements I, II and III is given. Which one of the four alternatives is correct ?

4. Conclusion:

Many drug addicts were arrested

Statements:

I. Taking drugs is a crime.

II. One who commits a crime can be arrested

III. Many people take drugs regularly.

(a) All the 3 statements taken together brings to the conclusion.

(b) Only I and II statements bring to the conclusion.

(c) Only II and III bring to the conclusion.

(d) Data is insufficient to draw the conclusion.

Directions : A statement followed by two assumptions I and II is given. Which one of the four given alternatives is correct ?

5. Statement:

One should not sleep under a tree.

Assumptions:

I. The falling leaves may spoil our clothes.

II. Trees give out CO₂ at night which is injurious to health.

(a) Only I is implicit

(b) Only II is implicit

(c) Both I and II are implicit

(d) Neither I nor II is implicit

Directions : A question is followed by two statements I and II. Which one of the four given alternatives is correct ?

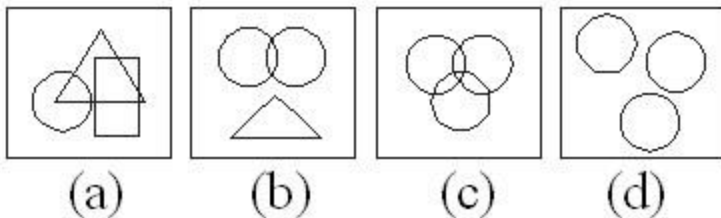
6. Has Electronic media improved the class room teaching ?

Statements:

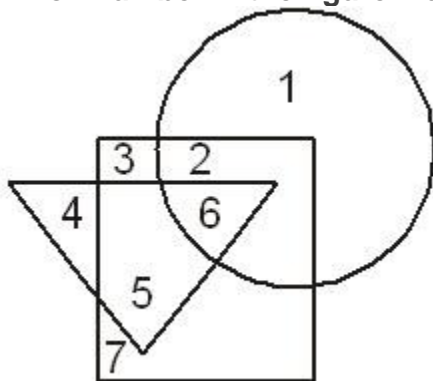
- I. Electronic media is multisensory based.
- II. TV lessons supplement the class-room teaching.

- (a) Only I is implicit
- (b) Only II is implicit
- (c) Both I and II are implicit
- (d) Neither I nor II is implicit

7. Which of the following Venn Diagram gives the relationship between Friend, Guide and Philosopher?



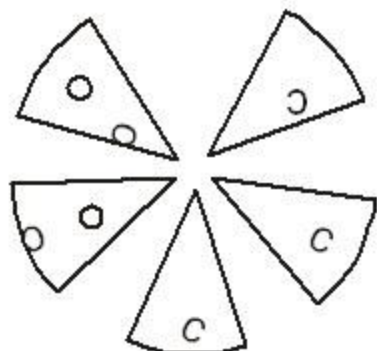
8. When a survey was made regarding the preferences in the watching of TV channel, a few said that they watch only ZTV channel, the others liked only Sun TV channel, while others Asianet TV Channel. A Small percentage said that they watch all the three TV channel. In the figure given below the circle indicates the Asianet TV channel, the square ZTV and the triangle the Sun TV channel. Which number in the figure indicates the fact that some people watch all the three TV channels?



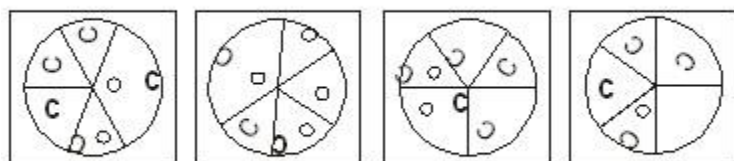
- (a) 2
- (b) 5
- (c) 6
- (d) 3

9. Among the four answer figures which one can be formed from the cut out pieces given below?

Question Figure



Answer Figure



(a)

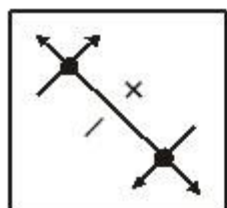
(b)

(c)

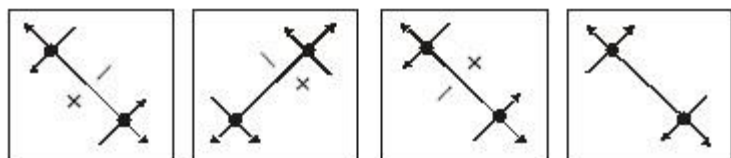
(d)

10. Choose the correct image of the figure when seen in water from the responses given below

Question Figure



Answer Figures



(a)

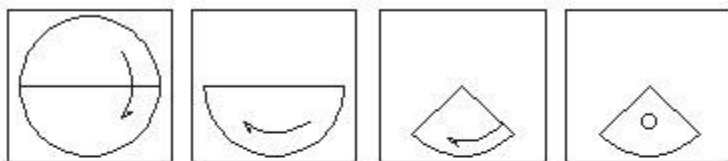
(b)

(c)

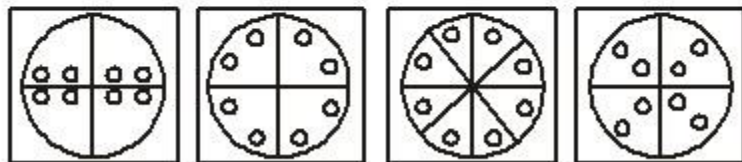
(d)

11. A circular paper is folded and punched as shown below. How will it appear when opened?

Question Figures



Answer Figures



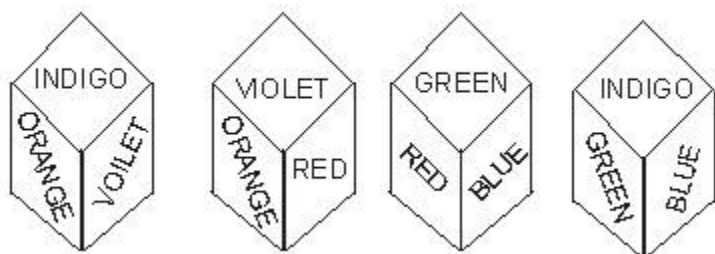
(a)

(b)

(c)

(d)

12.



(a) Indigo

(b) Blue

(c) Violet

(d) Orange

Direction: Find the missing number from the given responses in each of the following questions?

13.

| | | |
|----------|----------|----------|
| 4 | 9 | 2 |
| 3 | 5 | 7 |
| 8 | 1 | ? |

(a) 9

(b) 6

(c) 15

(d) 14

SSC CHSL (10+2) Printed Study Kit



FREE
SHIPPING

- 100% CHSL Exam Syllabus Covered
- 5 Books, 1000+ Pages
- 4500+ MCQs
- Solved Papers & Mock Tests (PDF Copy)
- 1 Year Current Affairs (PDF Copy)

for Exam Help Call Us at: +91 8800734161

50% OFF
₹ 4,000/-
₹ **1,999/-**

SSCPORTAL.IN

What you will get:

- 100% CHSL Exam Syllabus Covered
- 5 Booklets
- More Than 1000+ Pages
- 4500+ MCQs
- Previous Solved Papers
- Current Affairs for Exam
- Guidance & Support from Our Experts

Price of the Kit:

Rs. 4,000

Rs. 1,999/-
(Limited time Offer)



Net Banking

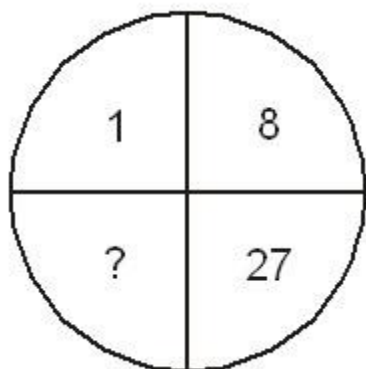
Order Online (100% Safe)

[Click here for Other Payment Options \(Cash/NEFT/etc\)](#)

[FOR MORE DETAILS CLICK HERE](#)



14.



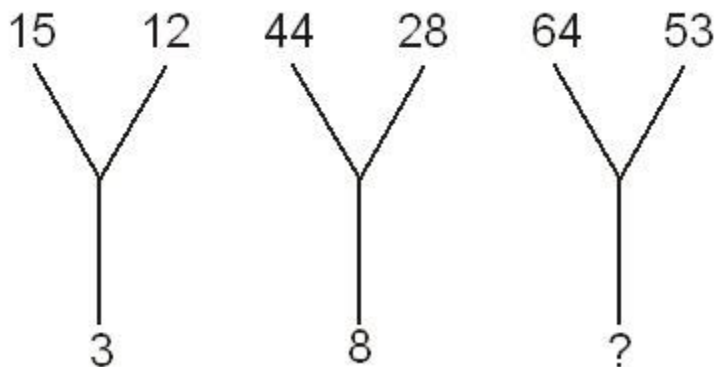
(a) 41

(b) 64

(c) 35

(d) 61

15.



(a) 30

(b) 13

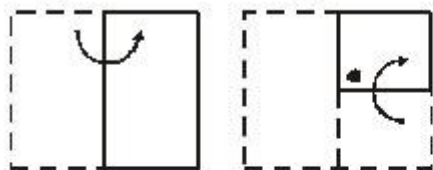
(c) 70

(d) 118


Direction: A paper is folded as shown in the given figures and a hole is made. When opened how will it appear. Choose from the given responses.

16.

Question Figures



Answer Figures



(a)

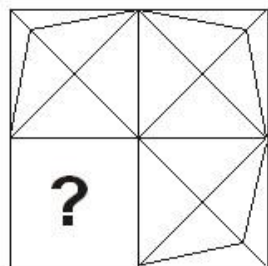
(b)

(c)

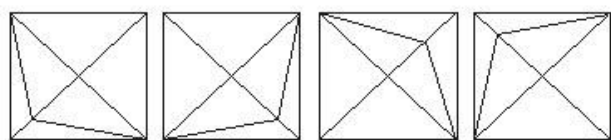
(d)

17.

Question Figure



Answer Figures



(a)

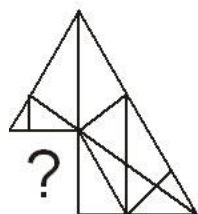
(b)

(c)

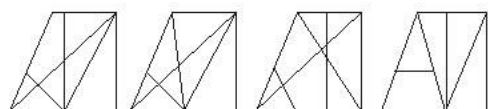
(d)

18.

Question Figure



Answer Figure



(a)

(b)

(c)

(d)

Direction: From the given alternatives, find the word which cannot be formed from the letters used in the given word.

19. INSTITUTIONALISE

- (a) NATRITION
- (b) INTUITION
- (c) TUITION
- (d) INSULATION

Direction: Find the related word/letters/numbers to complete the Analogy.

20. House : Room :: World : ?

- (a) Land
- (b) Sun
- (c) Air
- (d) Nation

21. A D H M : Z W S N : C F J O : ?

- (a) YVRM
- (b) WTPO
- (c) XWTP
- (d) ZXVT

22. 5 : 36 :: 6 : ?

- (a) 48
- (b) 50
- (c) 49
- (d) 56

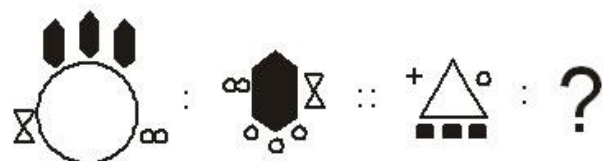
23. 456 : 15 :: 789 : ?

- (a) 15
- (b) 16
- (c) 18
- (d) 24

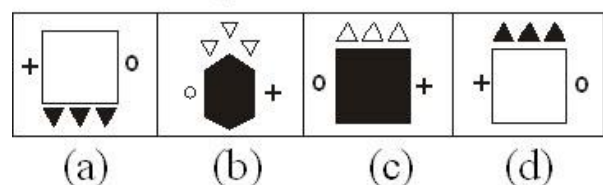
Direction: Select the related figure form the Answer Figure.

24.

Question Figures

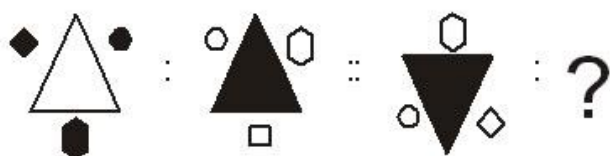


Answer Figures

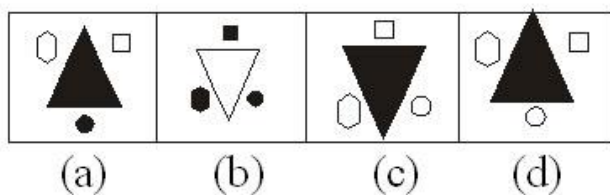


25.

Question Figures



Answer Figures

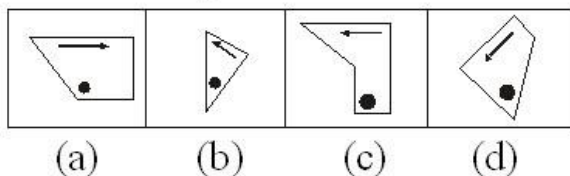


26.

Question Figures



Answer Figures



27. Which of the following word pair is not related in the same way as 'Returnable' and 'Natural'?

- (a) Reciprocal and Oracle
- (b) Reconstruct and Counter
- (c) Department and Moderate
- (d) Evaluation and Violent

Directions: Find the odd one out from the given alternatives.

SSC CHSL(10+2) परीक्षा अध्ययन सामग्री



FREE SHIPPING

- 100% CHSL Exam Syllabus Covered
- 5 Books, 900+ Pages
- 2500+ MCQs
- 1 Year Current Affairs (PDF Copy)
- Support & Guidance

50% OFF
₹ 4,000/-
₹ 1,999/-

for Exam Help Call Us at: +91 8800734161

SSCPORTAL.IN

आप क्या प्राप्त करेंगे?

- माध्यम: हिन्दी
- 100 प्रतिशत पाठ्यक्रम
- 900 से अधिक पृष्ठ
- 2500 से अधिक वस्तुनिष्ठ प्रश्न
- कुल 5 पुस्तिकाएँ
- अध्यायवार M.C.Q
- गणित एवं तार्किक क्षमता को हल करने की सरल विधि
- 5 अभ्यास प्रश्न पत्र (PDF Copy)
- हमारे विशेषज्ञों द्वारा मार्गदर्शन और सहायता

Price of the Kit:

Rs. 4,200

Rs. 1,999/-

(Limited time Offer)

 **Buy Online**

Net Banking

Order Online (100% Safe)

[Click here for Other Payment Options \(Cash/NEFT/etc\)](#)

FOR MORE DETAILS CLICK HERE

50% OFF

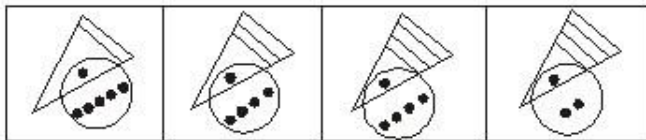
28. (a) Pond-Lake
(b) Pistol-Gun
(c) Car-Bus
(d) Church-Monument

29. (a) Insurance
(b) Provident Fund
(c) Salary
(d) Shares

30. (a) AYBZ
(b) BXCY
(c) DVEW
(d) MPON

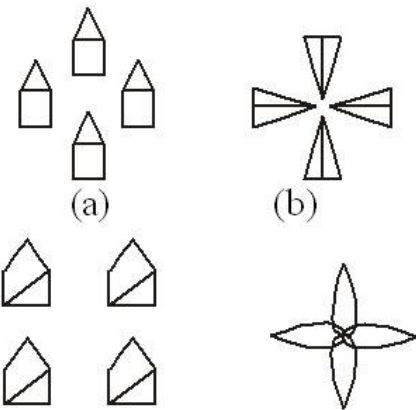
Directions: Find the odd figure out.

31.



- (a) (b) (c) (d)

32.



33. Find out the pair of number that does not belong to the group for lack of common property.

- (a) 84,67
(b) 112,95
(c) 79,63
(d) 167,150

Directions: From the given alternatives select the one in which the set of numbers is most like the set of numbers given in the question.

Given set: (1,3,7)

34.
(a) 3, 7, 11
(b) 13, 17, 29

(c) 17, 21, 29

(d) 29, 37, 47

Directions: From among the given alternatives select the one in which the set of numbers is most like the set of numbers given in the question.

Given set: (21, 30, 48)

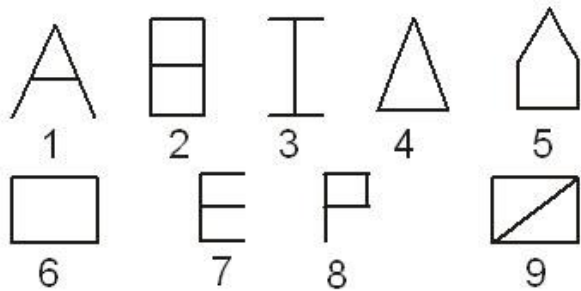
35. (a) (8, 14, 25)

(b) (9, 18, 36)

(c) (13, 20, 30)

(d) (6, 14, 21)

36. A series of figures are given which can be grouped into classes. Select the group into which the figures can be classified.



(a) 1,3,4 2,5,9 6,7,8

(b) 1,2,3 4,5,6 7,8,9

(c) 1,5,9 2,4,7 3,6,8

(d) 3,7,8 1,6,5 4,2,9

37. Which one of the given responses would be a meaningful order of the following?

1. Probation

2. Interview

3. Selection

4. Appointment

5. Advertisement

6. Application

(a) 5, 6, 4, 2, 3, 1

(b) 5, 6, 3, 2, 4, 1

(c) 5, 6, 2, 3, 4, 1

(d) 6, 5, 4, 2, 3, 1

Directions: Which one set of letters when sequentially placed at the gaps in the given letter series shall complete it.

38. BE-K-Q; BB-EHH-KNNQQ

(a) DLEK

(b) HNEK

- (c) DLCJ
- (d) HNCJ

Directions: Find the missing number in the series.

39. 1,0,3,2,5,6, ?

- (a) 9
- (b) 8
- (c) 10
- (d) 7

40. 1438, 1429, 1417,1402, ?

- (a) 1378
- (b) 1384
- (c) 1,387
- (d) 1392

41. 18, 24, 21, 27, ?, 30, 27

- (a) 33
- (b) 30
- (c) 24
- (d) 21

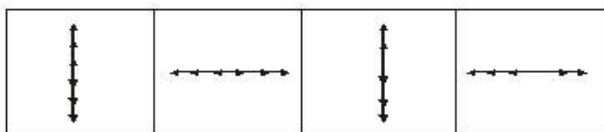
Directions: Find the missing figure in the series from the given answer figures.

42.

Problem Figures



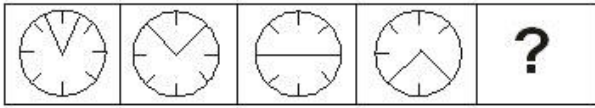
Answer Figures



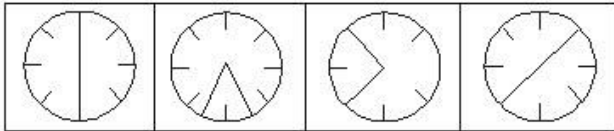
- (a)
- (b)
- (c)
- (d)

43.

Problem Figures



Answer Figures



(a)

(b)

(c)

(d)

44. 'A' man starts from a point and walks 2km towards North, turns towards his right and walks 2km, turns right again and walks. What is the direction now he is facing ?

- (a) South
- (b) South-East
- (c) North
- (d) West

45. P is Q's brother. R is Q's mother. S is R's father. T is S's mother. How is P relate to T?

- (a) Grand daughter
- (b) Great grandson
- (c) Grandson
- (d) Grandmother

46. If ,you are eleventh in a queue staring either end, how many are there in the queue ?

- (a) Eleven
- (b) Twenty
- (c) Twenty one
- (d) Twenty two

47. Six toys are quite identical to look at, but only one of them is less in weight. It is to be identified' using the balance minimum number of times. What is that minimum number of using the balance ?

- (a) Once
- (b) 2 times
- (c) 3 times
- (d) More than 3 times

48. If C = 3 and FEAR is coded as 30, then what will be the code number for HAIR ?

- (a) 35
- (b) 36
- (c) 30
- (d) 33

49. If $Z = 26$, $NET = 39$, then $NUT = ?$

- (a) 50
- (b) 53
- (c) 55
- (d) 56

50. If $F = 6$, $MAT = 34$, then how much is CAR ?

- (a) 21
- (b) 22
- (c) 25
- (d) 28

ANSWERS

1. (b) 2. (c) 3. (b) 4. (a) 5. (b) 6. (b) 7. (c) 8. (c) 9. (a) 10. (b) 11. (b) 12. (d)
13. (b) 14. (b) 15. (b) 16. (c) 17. (a) 18. (a) 19. (a) 20. (d) 21. (a) 22. (d) 23.
(d) 24. (c) 25. (b) 26. (b) 27. (c) 28. (d) 29. (c) 30. (d) 31. (a) 32. (d) 33. (c)
34. (c) 35. (b) 36. (a) 37. (c) 38. (b) 39. (d) 40. (b) 41. (c) 42. (b) 43. (b) 44.
(a) 45. (b) 46. (c) 47. (b) 48. (b) 49. (c) 50. (b)



SSC EXAMS PRINTED STUDY NOTES

| | | |
|---|-------------------------|----------------------------|
| Study Material for SSC CGL (Tier-1) Examination | English | CLICK HERE |
| Study Kit for SSC CGL (Tier-2) Exam | English | CLICK HERE |
| Study Kit for SSC CHSL (10+2) Examination | English | CLICK HERE |
| Study Kit for SSC Stenographers (Grade 'C' & 'D') | English | CLICK HERE |
| Study Kit for Multitasking (Non-Technical) - MTS | English | CLICK HERE |
| Study Kit for SSC Constables (GD) Exam | English | CLICK HERE |
| Study Kit For SSC Sub-Inspectors in Delhi Police, CAPFs, CISF | English | CLICK HERE |
| Study Kit for SSC Junior Engineer Exam (Paper-1) | English | CLICK HERE |
| IAS EXAMS STUDY MATERIALS | | |
| Study Kit for IAS (Pre) GENERAL STUDIES Paper-1 (GS) | English | CLICK HERE |
| Study Kit for IAS (Pre) CSAT Paper-2(Aptitude) | English | CLICK HERE |
| सामान्य अध्ययन (GS) प्रारंभिक परीक्षा (Pre) पेपर-1 | हिन्दी | CLICK HERE |
| आई. ए. एस. (सी-सैट) प्रारंभिक परीक्षा पेपर -2 | हिन्दी | CLICK HERE |
| Gist of NCERT Study Kit For UPSC Exams | English | CLICK HERE |
| यूपीएससी परीक्षा के लिए एनसीईआरटी अध्ययन सामग्री | हिन्दी | CLICK HERE |