

## INTELLIGENCE BUREAU

(Ministry of Home Affairs)

Government of India

Participant ID	
Application no	
Participant Name	
Test Center Name	
Test Date	18/01/2024
Test Time	8:30 AM - 9:30 AM
Subject	IB ACIO II Exe

Section : Current Affairs

**Q.1** Indian cricket legend Sachin Tendulkar will start a new innings in August 2023 as the Election Commission of India's national icon for voter awareness and education. In this context which of the following statement is correct?

I. The ECI would sign a memorandum of understanding with Tendulkar to be a voter awareness ambassador for three years.

II. For the 2019 Lok Sabha elections, the ECI had drafted cricketer M.S. Dhoni, actor Aamir Khan and boxer Mary Kom as its national icons.

**Ans** ✓ 1. Both I and II

✗ 2. Only II

✗ 3. Neither I nor II

✗ 4. Only I

Question ID : 630680556664

Option 1 ID : 6306802175648

Option 2 ID : 6306802175647

Option 3 ID : 6306802175649

Option 4 ID : 6306802175646

Status : Not Answered

Chosen Option : --



Download SSC CGL, CHSL E-BOOKS

[CLICK HERE](#)

Q.2 Which of the following statement is/are INCORRECT about the Delhi government's 'Green War Room'?

1. 'Green War Room' is the Delhi government's control centre to monitor air pollution and solve complaints.
2. Though the Green War Room functions round-the-year, the 24 × 7 monitoring started in December 2023.
3. People can report air pollution-related complaints to the Green War Room through the Green Delhi mobile application.

- Ans  1. 2 only  
 2. 1, 2 and 3  
 3. 3 only  
 4. 1 only

Question ID : 630680558079  
Option 1 ID : 6306802181288  
Option 2 ID : 6306802181290  
Option 3 ID : 6306802181289  
Option 4 ID : 6306802181287  
Status : Answered  
Chosen Option : 2

Q.3 Kanchan Devi was appointed as director general of Dehradun-based Indian Council of Forestry Research and Education (ICFRE) in December 2023. Which of the following statement is correct about Kanchan Devi?

- I. Kanchan Devi is an IFS officer from the 1991 batch of the Madhya Pradesh cadre.
- II. Before assuming this posting, Devi served as deputy director general (education) for the past four years at ICFRE.

- Ans  1. Neither I nor II  
 2. Only II  
 3. Only I  
 4. Both I and II

Question ID : 630680556621  
Option 1 ID : 6306802175477  
Option 2 ID : 6306802175475  
Option 3 ID : 6306802175474  
Option 4 ID : 6306802175476  
Status : Not Answered  
Chosen Option : --

Q.4 In November 2023, scientists have discovered a new species of 'music frog' in \_\_\_\_\_. The speciality of this new species of frog, "Nidirana noadihing", is that both the male and female are vocal.

- Ans  1. India  
 2. China  
 3. Russia  
 4. USA

Question ID : 630680556604  
Option 1 ID : 6306802175406  
Option 2 ID : 6306802175409  
Option 3 ID : 6306802175408  
Option 4 ID : 6306802175407  
Status : Answered  
Chosen Option : 1



**Q.5** As of November 2023, India set to launch its first X-Ray Polarimeter Satellite. Which organization will launch this satellite?

- Ans**
- 1. Defence Research and Development Organisation (DRDO)
  - 2. Indian Institute of Space Science and Technology (IIST)
  - 3. North-Eastern Space Applications Centre (NE-SAC)
  - 4. Indian Space Research Organisation (ISRO)

Question ID : **630680556625**  
Option 1 ID : **6306802175491**  
Option 2 ID : **6306802175492**  
Option 3 ID : **6306802175493**  
Option 4 ID : **6306802175490**  
Status : **Answered**  
Chosen Option : **4**

**Q.6** Which of the following is/are True statements about Durand Cup Trophy Tour?

1. The tournament was scheduled to commence at Kolkata from 03 August with the finals on 03 Sep 2023.
2. Mohun Bagan won the 132<sup>nd</sup> Durand Cup, at Vivekananda Yuba Bharati Krirangan in Kolkata, Sunday, Sept. 3, 2023.

- Ans**
- 1. Both 1 & 2
  - 2. Neither 1 nor 2.
  - 3. 2 only
  - 4. 1 only

Question ID : **630680558034**  
Option 1 ID : **6306802181109**  
Option 2 ID : **6306802181110**  
Option 3 ID : **6306802181108**  
Option 4 ID : **6306802181107**  
Status : **Answered**  
Chosen Option : **1**

**Q.7** Who is central vigilance commissioner in as of November 2023?

- Ans**
- 1. Praveen Kumar Srivastava
  - 2. Shri Brijesh Kumar Rai
  - 3. Dr. Umashankar Dash
  - 4. Dr. Sarthak Sarangi

Question ID : **630680556654**  
Option 1 ID : **6306802175606**  
Option 2 ID : **6306802175609**  
Option 3 ID : **6306802175608**  
Option 4 ID : **6306802175607**  
Status : **Answered**  
Chosen Option : **1**



Q.8 What is the following statement is correct regarding world earth day 2023?

I. The theme of world earth day 2023 is Invest in Our Planet.

II. The Earth Day is celebrated on April 22 every year.

- Ans
- 1. Only II
  - 2. Only I
  - 3. Neither I nor II
  - 4. Both I and II

Question ID : 630680556611

Option 1 ID : 6306802175435

Option 2 ID : 6306802175434

Option 3 ID : 6306802175437

Option 4 ID : 6306802175436

Status : Answered

Chosen Option : 1

Q.9 Consider the following statement about the Defence Acquisition Council. Identify the correct statement(s).

1. Raksha Mantri Shri Rajnath Singh on November 30, 2023, accorded approval in respect of Acceptance of Necessity (AoNs) for various Capital Acquisition Proposals amounting to Rs 2.23 lakh crore.
2. Acquisition worth Rs 2.20 lakh crore (98% of total AoN amount) will be sourced from domestic industries.

- Ans
- 1. Neither 1 nor 2
  - 2. Both 1 and 2
  - 3. 2 only
  - 4. 1 only

Question ID : 630680558048

Option 1 ID : 6306802181166

Option 2 ID : 6306802181165

Option 3 ID : 6306802181164

Option 4 ID : 6306802181163

Status : Not Answered

Chosen Option : --

Q.10 With which of the following, Ministry of Defence, on March 29, 2023, signed contracts to give another boost to 'Aatmanirbharta' in defence?

1. two contracts with Bharat Electronics Limited (BEL), Ghaziabad
2. one contract with NewSpace India Limited (NSIL)
3. one contract with Bharat Dynamics Limited
4. one contract with Larsen & Toubro

- Ans
- 1. 2,3 and 4 only
  - 2. 3 and 4 only
  - 3. 1 and 2 only
  - 4. 2 and 3 only

Question ID : 630680558057

Option 1 ID : 6306802181202

Option 2 ID : 6306802181199

Option 3 ID : 6306802181201

Option 4 ID : 6306802181200

Status : Not Answered

Chosen Option : --



Q.11 Which of the following statement is correct about Indian monsoon in 2023?

I. Despite a looming El Nino, the 2023 southwest monsoon season ended with rainfall deficit of just 5.6 per cent from normal.

II. The monsoon 2023 was classified as 'below normal' rains, the first in four years.

- Ans
- 1. Only I
  - 2. Only II
  - 3. Neither I nor II
  - 4. Both I and II

Question ID : 63068055666  
Option 1 ID : 6306802175654  
Option 2 ID : 6306802175655  
Option 3 ID : 6306802175657  
Option 4 ID : 6306802175656  
Status : Answered  
Chosen Option : 4

Q.12 Who has launched a channel-based counseling initiative titled 'Swayam Prabha' in the Manipuri language in November 2023?

- Ans
- 1. CBSE
  - 2. NCERT
  - 3. IGNOU
  - 4. Board of Secondary Education, Manipur

Question ID : 630680556635  
Option 1 ID : 6306802175531  
Option 2 ID : 6306802175532  
Option 3 ID : 6306802175530  
Option 4 ID : 6306802175533  
Status : Answered  
Chosen Option : 2

Q.13 Rajasthan govt announced new districts ahead of assembly polls. Which of the following is INCORRECT about this announcement?

1. Rajasthan chief minister announced the formation of three new districts on 6<sup>th</sup> October, 2023.
2. The three new districts are Malpura, Sujangarh, and Kuchaman City.
3. With the addition of the three districts, the total number of districts in the state has now reached 55.
4. This is the Third time the Gehlot-led Congress government has increased the number of districts in the state.

- Ans
- 1. 2 and 4
  - 2. 1 and 3
  - 3. 1 and 2
  - 4. 3 and 4

Question ID : 630680558074  
Option 1 ID : 6306802181270  
Option 2 ID : 6306802181269  
Option 3 ID : 6306802181267  
Option 4 ID : 6306802181268  
Status : Not Answered  
Chosen Option : --

**Q.14** Which of the following statements is/ are CORRECT regarding Menstrual and maternity leaves for girl students in all universities in Kerala?

1. The Higher Education Department issued an order in January 2023 granting menstrual leave for students under all the higher education institutions in Kerala.
2. Girl students can now appear for their semester exams with 70 per cent attendance as against the 75 per cent mandated under the University Rules.
3. Cochin University of Science and Technology was the first to announce the groundbreaking gender -sensitive education reform.
4. The Higher Education Department also grants a pregnancy leave of 60 days maximum for all girl students above the age of 21.

- Ans**
- 1. 2 and 3 only
  - 2. 1 and 3 only
  - 3. 1,2, 3 and 4
  - 4. 1 and 4 only

Question ID : **630680558069**  
Option 1 ID : **6306802181248**  
Option 2 ID : **6306802181249**  
Option 3 ID : **6306802181250**  
Option 4 ID : **6306802181247**  
Status : **Answered**  
Chosen Option : **2**

**Q.15** Which of the following statement is correct about International Museum Expo 2023?

- I. The International Museum Expo is being organised as part of Azadi ka Amrit Mahotsav, to celebrate the 47th International Museum Day (IMD).
- II. The IMD theme for this year is 'Museums, Sustainability and Well Being'.

- Ans**
- 1. Both I and II
  - 2. Only II
  - 3. Only I
  - 4. Neither I nor II

Question ID : **630680556685**  
Option 1 ID : **6306802175732**  
Option 2 ID : **6306802175731**  
Option 3 ID : **6306802175730**  
Option 4 ID : **6306802175733**  
Status : **Answered**  
Chosen Option : **1**

**Q.16** Which of the following statement is/are True about India's AstroSat?

1. In November 2023, India's AstroSat space telescope has detected over 600 Gamma-Ray Burst (GRB), marking the death of a massive star or merging of neutron stars.
2. The detection is a significant milestone, demonstrating the continued undiminished performance of the Cadmium Zinc Telluride Imager (CZTI) eight years after its launch.

- Ans**
- 1. Neither 1 nor 2
  - 2. Both 1 & 2
  - 3. 1 only
  - 4. 2 only

Question ID : **630680558038**  
Option 1 ID : **6306802181126**  
Option 2 ID : **6306802181123**  
Option 3 ID : **6306802181124**  
Option 4 ID : **6306802181125**  
Status : **Not Answered**  
Chosen Option : **--**

**Q.17** Which of the following statements are **CORRECT** about the Indian-Americans who were awarded US' Highest Scientific Award.

1. Two Indian-American scientists were in October 2023, honoured with the National Medals in the fields of science and technology by US President Joe Biden.
2. Dr Ashok Gadgil was conferred the National Medal for Technology and Innovation.
3. Dr Subra Suresh was awarded the National Medal of Science.
4. These medalists have made discoveries that enable life-saving medical treatments, help fight the Cancer.

- Ans**
- 1. 1 & 4 only
  - 2. 2,3 & 4 only
  - 3. 3 & 4 only
  - 4. 1,2 & 3 only

Question ID : **630680558043**  
Option 1 ID : **6306802181145**  
Option 2 ID : **6306802181144**  
Option 3 ID : **6306802181146**  
Option 4 ID : **6306802181143**  
Status : **Answered**  
Chosen Option : **4**

**Q.18** Which of the following statement is/are **INCORRECT** regarding Green Energy Corridor (GEC) Phase-II – Inter-State Transmission System (ISTS) for 13 GW Renewable Energy Project in Ladakh?

1. This project was approved On 18 October 2023.
2. The Cabinet Committee on Economic Affairs, chaired by the Hon'ble Prime Minister, Shri Narendra Modi approved this project.
3. The project is targeted to be set up by FY 2029-30 with total estimated cost of Rs.20,773.70 crore
4. The project will contribute to achieving the target of 500 GW of installed electricity capacity from non-fossil fuels by year 2050

- Ans**
- 1. 4 only
  - 2. 3 and 4 only
  - 3. 2 only
  - 4. 1 and 2 only

Question ID : **630680558085**  
Option 1 ID : **6306802181314**  
Option 2 ID : **6306802181312**  
Option 3 ID : **6306802181313**  
Option 4 ID : **6306802181311**  
Status : **Not Answered**  
Chosen Option : **--**

**Q.19** The CGWB under the Ministry of Jal Shakti conducts regular monitoring and assessment of groundwater quality including ground water contamination of Arsenic and Fluoride.

Which of the following is/are CORRECT statement(s) about the above assessment?

1. Arsenic has been detected in groundwater in parts of 230 districts in 25 states in India.
2. Fluoride has been detected in groundwater in 469 districts in 27 states in India.
3. Union Minister of State for Jal Shakti Bishweswar Tudu informed the Rajya Sabha about Arsenic and Fluoride detection in groundwater on 4<sup>th</sup> December 2023.

**Ans**  1. 2 and 3 only

2. 1 only

3. 1 and 3 only

4. 1,2 and 3

Question ID : **630680558059**

Option 1 ID : **6306802181208**

Option 2 ID : **6306802181207**

Option 3 ID : **6306802181210**

Option 4 ID : **6306802181209**

Status : **Not Answered**

Chosen Option : --

**Q.20** On 18 September 2023, the World Heritage Committee, of UNESCO inscribed the Sacred Ensembles of the Hoysalas, on the List of World Heritage. It is now the \_\_\_\_\_ World Heritage Site in India.

**Ans**  1. 44th

2. 39th

3. 42nd

4. 41st

Question ID : **630680556678**

Option 1 ID : **6306802175705**

Option 2 ID : **6306802175702**

Option 3 ID : **6306802175704**

Option 4 ID : **6306802175703**

Status : **Answered**

Chosen Option : **3**

Section : **General Studies**

**Q.1** Which of the following state has Legislative Council as of December 2023?

**Ans**  1. Uttarakhand

2. Goa

3. Uttar Pradesh

4. Punjab

Question ID : **630680557548**

Option 1 ID : **6306802179253**

Option 2 ID : **6306802179252**

Option 3 ID : **6306802179251**

Option 4 ID : **6306802179254**

Status : **Answered**

Chosen Option : **3**



Q.2 Which of the following indexes are used to calculate Human Development Index?

1. Life Expectancy Index
2. Education Index
3. NNI Index

- Ans
- 1. Only 3
  - 2. Only 1 and 2
  - 3. Only 1 and 3
  - 4. 1, 2 and 3

Question ID : 630680557426  
Option 1 ID : 6306802178761  
Option 2 ID : 6306802178759  
Option 3 ID : 6306802178760  
Option 4 ID : 6306802178762  
Status : Answered  
Chosen Option : 2

Q.3 Match list I with list II.

LIST I	LIST II
A .The Calcutta Madrassa	1.Warren Hastings
B.The Asiatic Society of Bengal	2.William Jones
C.The Sanskrit College at Banaras	3.Jonathan Duncan

- Ans
- 1. A-2, B-3, C-1
  - 2. A-1, B-2, C-3
  - 3. A-3, B-1, C-2
  - 4. A-2, B-1 , C-3

Question ID : 630680557388  
Option 1 ID : 6306802178608  
Option 2 ID : 6306802178609  
Option 3 ID : 6306802178610  
Option 4 ID : 6306802178607  
Status : Answered  
Chosen Option : 2

Q.4 Jarawa tribes can be found majorly in which part of India?

- Ans
- 1. Andaman & Nicobar islands
  - 2. Kerala
  - 3. Madhya Pradesh
  - 4. Uttar Pradesh

Question ID : 630680557511  
Option 1 ID : 6306802179106  
Option 2 ID : 6306802179105  
Option 3 ID : 6306802179103  
Option 4 ID : 6306802179104  
Status : Not Answered  
Chosen Option : --

Q.5 Which of the following is correct financial year of India?

- Ans
- 1. 1 June to 31 May
  - 2. 1 May to 30 April
  - 3. 1 April to 31 March
  - 4. 1 March to 28/29 February

Question ID : 630680557513  
Option 1 ID : 6306802179114  
Option 2 ID : 6306802179113  
Option 3 ID : 6306802179111  
Option 4 ID : 6306802179112  
Status : Answered  
Chosen Option : 3

Q.6 In the first phase of the green revolution (approximately mid 1960s up to mid-1970s), the use of HYV seeds was restricted to the more affluent in which of the following states?

- I. Punjab
- II. Andhra Pradesh

- Ans
- 1. Only II
  - 2. Both I and II
  - 3. Only I
  - 4. Neither I nor II

Question ID : 630680557531  
Option 1 ID : 6306802179184  
Option 2 ID : 6306802179185  
Option 3 ID : 6306802179183  
Option 4 ID : 6306802179186  
Status : Answered  
Chosen Option : 2

Q.7 Which of the following statements about the Chief Election Commission are correct?

- 1. The Election Commission celebrated its Golden Jubilee in 2001.
- 2. It currently consists of Chief Election Commissioner and two Election Commissioners.
- 3. For the first time two additional Commissioners were appointed in 1993.
- 4. The President appoints Chief Election Commissioner and Election Commissioners and have tenure of six years or up to the age of 65 years, whichever is earlier.

- Ans
- 1. Only 1, 3 and 4
  - 2. Only 1 and 2
  - 3. Only 1, 2 and 4
  - 4. Only 2 and 3

Question ID : 630680557441  
Option 1 ID : 6306802178822  
Option 2 ID : 6306802178819  
Option 3 ID : 6306802178820  
Option 4 ID : 6306802178821  
Status : Answered  
Chosen Option : 3

**Q.8** Rites pertaining to the stages of life are called samskaras. Match the Samskaras listed in List I with its true meaning mentioned in List II.

List I	List II
1.Nishkramanam	A.It is done at the beginning of the sacred thread ceremony
2.Chudakaranam	B.The rite of the tonsure ceremony
3.Vidhyarambam	C.To begin with the life of study
4.Upanayanam	D.Taking the child out of the house so that it may see the sun

- Ans**
- ✓ 1. 1-D, 2-B, 3-A, 4-C
  - ✗ 2. 1-B, 2-A, 3-D, 4-C
  - ✗ 3. 1-D, 2-A, 3-C, 4-B
  - ✗ 4. 1-D, 2-A, 3-B, 4-C

Question ID : **630680557411**  
Option 1 ID : **6306802178702**  
Option 2 ID : **6306802178700**  
Option 3 ID : **6306802178699**  
Option 4 ID : **6306802178701**  
Status : **Not Answered**

Chosen Option : --

**Q.9** The Buddha got enlightenment under which of the following tree?

- Ans**
- ✗ 1. Mango Tree
  - ✗ 2. Sal Tree
  - ✗ 3. Banyan Tree
  - ✓ 4. Peepal Tree

Question ID : **630680557474**  
Option 1 ID : **6306802178956**  
Option 2 ID : **6306802178957**  
Option 3 ID : **6306802178958**  
Option 4 ID : **6306802178955**  
Status : **Answered**

Chosen Option : **3**



Q.10 Match the following dams with the rivers they are built upon.

Dam	River
1. Jojawa Dam	A. Kabini River
2. Ravishankar Dam	B. Tapi River
3. Ukai Dam	C. Narmada River
4. Banasura Sagar Dam	D. Mahanadi River

- Ans
- ✗ 1. 1-B, 2-C, 3-D, 4-A
  - ✗ 2. 1-B, 2-A, 3-D, 4-C
  - ✓ 3. 1-C, 2-D, 3-B, 4-A
  - ✗ 4. 1-D, 2-A, 3-C, 4-B

Question ID : 630680557415  
 Option 1 ID : 6306802178717  
 Option 2 ID : 6306802178715  
 Option 3 ID : 6306802178716  
 Option 4 ID : 6306802178718  
 Status : Not Answered  
 Chosen Option : --

Q.11 Which of the following statements about United Nations Human Development Index INCORRECT?

1. The HDI is the harmonic mean of normalised indices for each of the three dimensions.
2. The health dimension is assessed by life expectancy at birth.
3. The education dimension is measured by mean of years of schooling for adults aged 21 years and more.
4. The standard of living dimension is measured by gross national income per capita.

- Ans
- ✗ 1. 1 and 2
  - ✗ 2. 3 and 4
  - ✓ 3. 1 and 3
  - ✗ 4. 2 and 4

Question ID : 630680557429  
 Option 1 ID : 6306802178772  
 Option 2 ID : 6306802178774  
 Option 3 ID : 6306802178773  
 Option 4 ID : 6306802178771  
 Status : Not Answered  
 Chosen Option : --

Q.12 Delhi first became the capital of a kingdom under whom?

- Ans
- ✓ 1. Tomara Rajputs
  - ✗ 2. Chauhans
  - ✗ 3. Ghiyasuddin Balban
  - ✗ 4. Alauddin Khalji

Question ID : 630680557456  
Option 1 ID : 6306802178883  
Option 2 ID : 6306802178884  
Option 3 ID : 6306802178885  
Option 4 ID : 6306802178886  
Status : Answered  
Chosen Option : 2

Q.13 As per the information available on November 2023, which of the following statements is correct about the Tea Industry in India?

Statement 1: India is the largest producer of tea and second largest black tea producer globally.

Statement 2: The Assam Valley and Cachar are the two tea-producing regions in Assam.

Statement 3: The southern part of India produces about 17% of the country's total production.

- Ans
- ✗ 1. 1, 2 and 3
  - ✗ 2. Only 1
  - ✗ 3. Only 1 and 2
  - ✓ 4. Only 2 and 3

Question ID : 630680557425  
Option 1 ID : 6306802178758  
Option 2 ID : 6306802178757  
Option 3 ID : 6306802178755  
Option 4 ID : 6306802178756  
Status : Answered  
Chosen Option : 1

Q.14 In which order did the following Dynasties rule over Delhi?

1. Sayyid Dynasty
2. Lodi Dynasty
3. Tughluq Dynasty
4. Khalji Dynasty

- Ans
- ✗ 1. 1, 2, 3, 4
  - ✓ 2. 4, 3, 1, 2
  - ✗ 3. 4, 3, 2, 1
  - ✗ 4. 1, 3, 2, 4

Question ID : 630680557393  
Option 1 ID : 6306802178630  
Option 2 ID : 6306802178627  
Option 3 ID : 6306802178629  
Option 4 ID : 6306802178628  
Status : Answered  
Chosen Option : 2



**Q.15** Which of the following statement is/are correct about Ministry of Panchayati Raj?

1. The Ministry of Panchayati Raj is a branch of the Government of India looking after the ongoing process of decentralisation and local governance in the States.
2. It was created in May 2004 and is headed by a minister of cabinet rank.
3. As of December 2023, it was headed by Shri Raman Kumar.

- Ans**
- 1. Only 1
  - 2. Only 2 and 3
  - 3. Only 2
  - 4. Only 1 and 2

Question ID : **630680557447**  
Option 1 ID : **6306802178843**  
Option 2 ID : **6306802178846**  
Option 3 ID : **6306802178844**  
Option 4 ID : **6306802178845**  
Status : **Answered**  
Chosen Option : 1

**Q.16** Which of the following statement is correct about natural resources?

- I. Resources that are drawn from Nature and used without much modification are called natural resources.
- II. Natural resources can be broadly categorized into renewable and non-renewable resources.

- Ans**
- 1. Neither I nor II
  - 2. Only I
  - 3. Only II
  - 4. Both I and II

Question ID : **630680557497**  
Option 1 ID : **6306802179050**  
Option 2 ID : **6306802179047**  
Option 3 ID : **6306802179048**  
Option 4 ID : **6306802179049**  
Status : **Answered**  
Chosen Option : 4

**Q.17** Which of the following statement is correct about Humayun's Tomb?

- I. This tomb, built in 1570, is of particular cultural significance as it was the first garden-tomb on the Indian subcontinent.
- II. It inspired several major architectural innovations, culminating in the construction of the Taj Mahal.

- Ans**
- 1. Both I and II
  - 2. Only II
  - 3. Only I
  - 4. Neither I nor II

Question ID : **630680557493**  
Option 1 ID : **6306802179033**  
Option 2 ID : **6306802179032**  
Option 3 ID : **6306802179031**  
Option 4 ID : **6306802179034**  
Status : **Answered**  
Chosen Option : 1

**Q.18** As per preamble of Indian constitution, India is a country which have which of the following nature/feature?

- I. Sovereign socialist only
- II. Sovereign socialist secular democratic republic

- Ans**
- 1. Only II
  - 2. Neither I nor II
  - 3. Both I and II
  - 4. Only I

Question ID : **630680557533**  
Option 1 ID : **6306802179192**  
Option 2 ID : **6306802179194**  
Option 3 ID : **6306802179193**  
Option 4 ID : **6306802179191**  
Status : **Answered**  
Chosen Option : **1**

**Q.19** Which of the following has/have been added by the 92<sup>nd</sup> Amendment Act of 2003 as Scheduled Languages in the 8<sup>th</sup> Schedule of the Constitution of India?

- 1) Bodo
- 2) Dongri
- 3) Konkani

- Ans**
- 1. 2 and 3 only
  - 2. 1 only
  - 3. 1 and 3 only
  - 4. 1 and 2 only

Question ID : **630680557401**  
Option 1 ID : **6306802178661**  
Option 2 ID : **6306802178662**  
Option 3 ID : **6306802178660**  
Option 4 ID : **6306802178659**  
Status : **Answered**  
Chosen Option : **4**

**Q.20** Which of the following statement is correct about Malavikagnimitra?

- I. It was compiled by kalidasa.
- II. It describes Agnimitra, son of Pushyamitra, as belonging to the Baimbika kula and the Baudhayana Sruta Sutra represents the Baimbikayah as Kashyapas.

- Ans**
- 1. Only I
  - 2. Only II
  - 3. Both I and II
  - 4. Neither I nor II

Question ID : **630680557473**  
Option 1 ID : **6306802178951**  
Option 2 ID : **6306802178952**  
Option 3 ID : **6306802178953**  
Option 4 ID : **6306802178954**  
Status : **Answered**  
Chosen Option : **1**

Section : Numerical Aptitude

**Q.1** The initial value of a car is ₹450000. The value of car depreciates by 40 percent of its initial value each year. What will be its value after 2 years?

- Ans** ✓ 1. ₹162000  
✗ 2. ₹154000  
✗ 3. ₹192000  
✗ 4. ₹184000

Question ID : 630680557663  
Option 1 ID : 6306802179712  
Option 2 ID : 6306802179714  
Option 3 ID : 6306802179711  
Option 4 ID : 6306802179713  
Status : Answered  
Chosen Option : 1

**Q.2** The ratio of two numbers is 3 : 8. If the sum of both the numbers is 220, then what is the smaller number among both the numbers?

- Ans** ✗ 1. 20  
✗ 2. 120  
✓ 3. 60  
✗ 4. 220

Question ID : 630680557710  
Option 1 ID : 6306802179899  
Option 2 ID : 6306802179900  
Option 3 ID : 6306802179901  
Option 4 ID : 6306802179902  
Status : Answered  
Chosen Option : 3

**Q.3** If 75 percent of total articles are sold at a profit of 20 percent and remaining articles are sold at a loss of 20 percent, then what will be the overall profit percentage?

- Ans** ✗ 1. 8 percent  
✓ 2. 10 percent  
✗ 3. 5 percent  
✗ 4. 12 percent

Question ID : 630680557703  
Option 1 ID : 6306802179873  
Option 2 ID : 6306802179874  
Option 3 ID : 6306802179872  
Option 4 ID : 6306802179871  
Status : Answered  
Chosen Option : 2



**Q.4** The cost of item A is 40% more than that of item B and the cost of item B is 25% less than that of item C. The cost of A is decreased by 20%, while that of B and C are increased by 24% and 33%, respectively.

Statement I: The total new cost of items A, B and C is 24% less than the total initial cost of 2B and C.

Statement II: The total new cost of A and 2B is  $33\frac{1}{3}\%$  more than the total initial cost of A and B.

Which of the above statements is/are correct?

- Ans**
- 1. Both I and II
  - 2. Neither I nor II
  - 3. II only
  - 4. I only

Question ID : 630680557593  
Option 1 ID : 6306802179433  
Option 2 ID : 6306802179434  
Option 3 ID : 6306802179432  
Option 4 ID : 6306802179431  
Status : Not Answered  
Chosen Option : --

**Q.5** Consider all prime numbers between 1 and 100.

Which of the following statements is (are) correct?

- a. A number that is one greater than a multiple of 5 has a unit digit 3 or 6.
- b. The sum of all numbers which are one greater than a multiple of 5 is 215.
- c. The sum of all numbers which are one greater than a multiple of 5 and also one greater than a multiple of 6 is 92.

- Ans**
- 1. b only
  - 2. a and b
  - 3. a and c
  - 4. b and c

Question ID : 630680557580  
Option 1 ID : 6306802179382  
Option 2 ID : 6306802179379  
Option 3 ID : 6306802179381  
Option 4 ID : 6306802179380  
Status : Not Answered  
Chosen Option : --

**Q.6** The average weight of a class of 13 students is 60 kg. If 2 new students of weight 42 kg and 48 kg are added to the class, then what will be the new average weight of 15 students?

- Ans**
- 1. 58.5 kg
  - 2. 59 kg
  - 3. 61 kg
  - 4. 58 kg

Question ID : 630680557641  
Option 1 ID : 6306802179626  
Option 2 ID : 6306802179623  
Option 3 ID : 6306802179625  
Option 4 ID : 6306802179624  
Status : Answered  
Chosen Option : 4

**Q.7** The smallest prime number that is a divisor of 17408 is 2 ( $17408 = 17 \times 2^{10}$ ). What is the sum of digits of the greatest prime number, which is a divisor of 17391?

- Ans**  1. 4  
 2. 5  
 3. 8  
 4. 6

Question ID : 630680557576  
Option 1 ID : 6306802179363  
Option 2 ID : 6306802179365  
Option 3 ID : 6306802179364  
Option 4 ID : 6306802179366  
Status : Not Answered  
Chosen Option : --

**Q.8** A bus starts running with the initial speed of 6 km/hr and its speed increases every hour by certain amount. If it takes 14 hours to cover a distance of 630 km, then what will be hourly increment in the speed of bus?

- Ans**  1. 5 km/hr  
 2. 5.2 km/hr  
 3. 10 km/hr  
 4. 6 km/hr

Question ID : 630680557724  
Option 1 ID : 6306802179955  
Option 2 ID : 6306802179956  
Option 3 ID : 6306802179957  
Option 4 ID : 6306802179958  
Status : Not Answered  
Chosen Option : --

**Q.9** 27 percent of a number exceeds 13 percent of the same number by 56. What is the value of the number?

- Ans**  1. 380  
 2. 420  
 3. 360  
 4. 400

Question ID : 630680557678  
Option 1 ID : 6306802179772  
Option 2 ID : 6306802179774  
Option 3 ID : 6306802179771  
Option 4 ID : 6306802179773  
Status : Answered  
Chosen Option : 4

**Q.10** An article is marked  $x\%$  ( $0 < x < 40$ ) above its cost price. It is sold by giving  $\frac{x}{2}\%$  discount on its marked price. If there is a profit of  $10\frac{1}{2}\%$ , then what is the value of  $x$  ?

- Ans
- 1. 20
  - 2. 35
  - 3. 25
  - 4. 30

Question ID : 630680557601  
 Option 1 ID : 6306802179463  
 Option 2 ID : 6306802179466  
 Option 3 ID : 6306802179464  
 Option 4 ID : 6306802179465  
 Status : Not Answered  
 Chosen Option : --

**Q.11** Select the option that is true regarding the following labelled Assertion (A) and Reason (R).

Assertion (A)	Reason (R)
The value of $\frac{[(3.9)^3 + 9 \times 1.3 \times 4.29 + 11.7 \times (1.1)^2 + 1.331]}{[1.23 \times 1.23 + 0.77(0.77 + 0.6 \times 4.1)]}$ Is 31.25.	Using $(a + b)^3 = a^3 + b^3 + 3ab(a + b)$ and $(x + y)^2 = x^2 + y^2 + 2xy$

- Ans
- 1. Both A and R are true but R is not a correct explanation of A.
  - 2. A is false and R is true.
  - 3. A is true and R is false.
  - 4. Both A and R are true and R is a correct explanation of A.

Question ID : 630680557630  
 Option 1 ID : 6306802179580  
 Option 2 ID : 6306802179582  
 Option 3 ID : 6306802179581  
 Option 4 ID : 6306802179579  
 Status : Not Answered  
 Chosen Option : --

**Q.12** The product of two consecutive even numbers is 1088. What is the difference of the larger number and the square of the smaller number?

- Ans
- 1. 768
  - 2. 1024
  - 3. 842
  - 4. 990

Question ID : 630680557675  
 Option 1 ID : 6306802179759  
 Option 2 ID : 6306802179762  
 Option 3 ID : 6306802179760  
 Option 4 ID : 6306802179761  
 Status : Answered  
 Chosen Option : 4

**Q.13** A circular path is 800 m long. Beena and Arun run in opposite directions from the same point A on the path at the same time. They continue to run after they meet for the first time. Beena runs another  $53\frac{1}{3}$  seconds to arrive at A, while Arun runs another 2 minutes to get to point A.

Which of the following statements is/are correct?

Statement I: The speed of Beena is 6 m/sec.

Statement II: The ratio of the speeds of Arun and Beena is 2 : 3.

- Ans**
- 1. Neither I nor II
  - 2. II only
  - 3. I and II
  - 4. I only

Question ID : 630680557623  
 Option 1 ID : 6306802179554  
 Option 2 ID : 6306802179552  
 Option 3 ID : 6306802179553  
 Option 4 ID : 6306802179551  
 Status : Not Answered  
 Chosen Option : --

**Q.14** A sum becomes 2.89 times of itself in 2 years when invested at compound interest (compounded annually). What is the annual rate of interest?

- Ans**
- 1. 80 percent
  - 2. 50 percent
  - 3. 40 percent
  - 4. 70 percent

Question ID : 630680557652  
 Option 1 ID : 6306802179667  
 Option 2 ID : 6306802179670  
 Option 3 ID : 6306802179669  
 Option 4 ID : 6306802179668  
 Status : Answered  
 Chosen Option : 4

**Q.15** What is the value of  $15^3 - 12^3 - 27$ ?

- Ans**
- 1. 1620
  - 2. 1480
  - 3. 1540
  - 4. 1340

Question ID : 630680557731  
 Option 1 ID : 6306802179983  
 Option 2 ID : 6306802179985  
 Option 3 ID : 6306802179984  
 Option 4 ID : 6306802179986  
 Status : Answered  
 Chosen Option : 1

**Q.16** A vessel contains a solution of acid and water in the ratio 5 : 7. When 9 litres of the solution are taken out and the vessel is filled with equal quantity of acid, the ratio of acid and water in the vessel becomes 9 : 7. How many litres of solution was there in the vessel, initially?

- Ans**  1. 36  
 2. 24  
 3. 30  
 4. 42

Question ID : 630680557571  
 Option 1 ID : 6306802179345  
 Option 2 ID : 6306802179343  
 Option 3 ID : 6306802179344  
 Option 4 ID : 6306802179346  
 Status : Answered  
 Chosen Option : 3

**Q.17** 20 percent of P's income is equal to 10 percent of Q's income and 10 percent of Q's income is equal to 20 percent of R's income. If R's income is ₹13000, then what is the total income of P, Q and R?

- Ans**  1. 52000  
 2. 78000  
 3. 39000  
 4. 65000

Question ID : 630680557697  
 Option 1 ID : 6306802179848  
 Option 2 ID : 6306802179850  
 Option 3 ID : 6306802179847  
 Option 4 ID : 6306802179849  
 Status : Answered  
 Chosen Option : 1

**Q.18** A question is given, followed by three statements labelled I, II and III. Identify which of the statements is/are sufficient to answer the question.

Question:

What is the value of  $(a - c)$ ?

Statements:

- I.  $(a + b) : c = 8 : 3$  and  $a + b + c = 2772$
- II.  $a : (a + c) = 2 : 5$
- III.  $a : (b + c) = 34 : 43$

- Ans**  1. II and III  
 2. I and III only  
 3. I only  
 4. I and II or I and III

Question ID : 630680557613  
 Option 1 ID : 6306802179514  
 Option 2 ID : 6306802179512  
 Option 3 ID : 6306802179511  
 Option 4 ID : 6306802179513  
 Status : Answered  
 Chosen Option : 4

**Q.19** A and B together can complete a certain work in 54 days. They work together for 12 days. The remaining work was completed by A, B and C together in 28 days. If the work done by B in 6 days is equal to the work done by C in 9 days, then A alone can complete two-thirds of the work in \_\_\_\_\_ days.

- Ans**
- 1. 216
  - 2. 180
  - 3. 108
  - 4. 144

Question ID : **630680557620**  
Option 1 ID : **6306802179540**  
Option 2 ID : **6306802179539**  
Option 3 ID : **6306802179542**  
Option 4 ID : **6306802179541**  
Status : **Answered**  
Chosen Option : **4**

**Q.20** Total monthly income of A, B and C is ₹1,02,720. A, B and C save 20%, 10% and 25%, respectively of their incomes. If the ratio of their monthly expenditures is 3 : 4 : 5, then what is the sum (in ₹) of monthly incomes of A and C?

- Ans**
- 1. 72,000
  - 2. 61,875
  - 3. 60,000
  - 4. 56,250

Question ID : **630680557606**  
Option 1 ID : **6306802179486**  
Option 2 ID : **6306802179485**  
Option 3 ID : **6306802179484**  
Option 4 ID : **6306802179483**  
Status : **Not Answered**  
Chosen Option : **--**

Section : Reasoning and Logical Aptitude

**Q.1** There are six friends Farhan, Anand, Chand, Sanjay, Maher, and Zaman each of different weight, 45, 56, 71, 65, 58 and 48(all in kg) but not necessarily in same order as follows

- Farhan is heavier than Zaman and Anand.
- Chand is heavier than Farhan but lighter than Sanjay.
- Zaman is heavier than only two friends.
- Anand is not lightest in all.

Which of the following statement is true based on the above information?

- I. Farhan weight is 56 kg.
- II. Zaman is third heaviest in all.

- Ans**
- 1. Only I
  - 2. Neither I nor II
  - 3. Only II
  - 4. Both I and II

Question ID : **630680556919**  
Option 1 ID : **6306802176587**  
Option 2 ID : **6306802176590**  
Option 3 ID : **6306802176588**  
Option 4 ID : **6306802176589**  
Status : **Not Answered**  
Chosen Option : **--**

**Q.2** In this question, a question is followed by two statements numbered (I) and (II). You have to decide whether the data provided in the statements are sufficient to answer the question. Read both the statements and decide the appropriate answer.

Q. Five children were administered psychological tests to know their intellectual levels. Which child is the most intelligent?

(I) The child A is less intelligent than the child B. The child C is less intelligent than the child D. .

(II) The child B is less intelligent than the child C and child A is more intelligent than the child E.

**Ans** ✓ 1.

Data in statements I and II together are necessary to answer the question.

✗ 2.

Data in Statement II alone is sufficient to answer the question while data in statement I is not.

✗ 3.

Data in statements I and II together are NOT sufficient to answer the question.

✗ 4.

Data in Statement I alone is sufficient to answer the question while data in statement II is not .

Question ID : **630680556939**

Option 1 ID : **6306802176669**

Option 2 ID : **6306802176668**

Option 3 ID : **6306802176670**

Option 4 ID : **6306802176667**

Status : **Not Answered**

Chosen Option : --

**Q.3** In the following question below are given some statements followed by some conclusions based on those statements.

Taking the given statements to be true even if they seem to be at variance from commonly known facts. Read all the conclusions and then decide which of the given conclusion logically follows the given statements.

Statements:

I. Some L are F.

II. Some F are B.

Conclusion:

I. No B is F.

II. Some L are B.

**Ans** ✓ 1. Neither conclusion follows.

✗ 2. Only conclusion I follows.

✗ 3. Only conclusion II follows.

✗ 4. Both conclusions I and II follows.

Question ID : **630680557309**

Option 1 ID : **6306802178294**

Option 2 ID : **6306802178291**

Option 3 ID : **6306802178292**

Option 4 ID : **6306802178293**

Status : **Answered**

Chosen Option : 1



**Q.4** A series is given with one term missing. Select the correct alternative from the given ones that will complete the series.

NIE, QLH, TOK, WRN, ?

- Ans**
- 1. YXQ
  - 2. ZWQ
  - 3. YWQ
  - 4. ZUQ

Question ID : 630680557336  
 Option 1 ID : 6306802178402  
 Option 2 ID : 6306802178399  
 Option 3 ID : 6306802178401  
 Option 4 ID : 6306802178400  
 Status : Answered  
 Chosen Option : 4

**Q.5** In the following question, select the figure which can be placed at the sign of question mark (?) from the given alternatives.



- Ans**
- 1.
  - 2.
  - 3.
  - 4.

Question ID : 630680557346  
 Option 1 ID : 6306802178441  
 Option 2 ID : 6306802178442  
 Option 3 ID : 6306802178440  
 Option 4 ID : 6306802178439  
 Status : Answered  
 Chosen Option : 1

**Q.6** In the following number-pairs, the second number is obtained by applying certain mathematical operations to the first number. Which numbers should replace X and Y so that the pattern followed by the two numbers on the left side of :: is same as that on the right side of :: ?

(NOTE : Operations should be performed on the whole numbers, without breaking down the numbers into its constituent digits. E.g. 13 – Operations on 13 such as adding / subtracting /multiplying etc. to 13 can be performed. Breaking down 13 into 1 and 3 and then performing mathematical operations on 1 and 3 is not allowed)

X : 729 :: 13 : Y

- Ans**
- 1. X=9, Y=1320
  - 2. X=9, Y=2197
  - 3. X=27, Y=1440
  - 4. X=11, Y=2132

Question ID : 630680556966  
Option 1 ID : 6306802176777  
Option 2 ID : 6306802176778  
Option 3 ID : 6306802176775  
Option 4 ID : 6306802176776  
Status : Answered  
Chosen Option : 2

**Q.7** X # Y means 'X is the brother of Y'  
X @ Y means 'X is the daughter of Y'  
X & Y means 'X is the husband of Y'  
X % Y means 'X is the wife of Y'  
Based on the above information, find out which of the given statements can be the reason/s behind the assertion made below if it is given that 'A % B # C @ D'

Assertion: A is daughter in law of E

Reason A: D & E

Reason B: E @ F'

- Ans**
- 1. Both A and B are reasons behind the assertion
  - 2. Only B is the reason behind the assertion
  - 3. Only A is the reason behind the assertion
  - 4. Neither A nor B is the reason behind the assertion

Question ID : 630680556931  
Option 1 ID : 6306802176635  
Option 2 ID : 6306802176637  
Option 3 ID : 6306802176636  
Option 4 ID : 6306802176638  
Status : Answered  
Chosen Option : 3

**Q.8** In the following question below are given some statements followed by some conclusions based on those statements. Taking the given statements to be true even if they seem to be at variance from commonly known facts. Read all the conclusions and then decide which of the given conclusion logically follows the given statements.

Statements:

I. No E are F.

II. Some G are F.

Conclusion:

I. All G are E.

II. No F is E.

- Ans**
- 1. Neither conclusion follows.
  - 2. Only conclusion I follows.
  - 3. Only conclusion II follows.
  - 4. Both conclusions I and II follows.

Question ID : 630680557316

Option 1 ID : 6306802178322

Option 2 ID : 6306802178319

Option 3 ID : 6306802178320

Option 4 ID : 6306802178321

Status : Answered

Chosen Option : 3

**Q.9** In the following question, select the missing number from the given series.

8, 33, 133, 533, 2133, ?

- Ans**
- 1. 8530
  - 2. 8533
  - 3. 8600
  - 4. 8545

Question ID : 630680557371

Option 1 ID : 6306802178540

Option 2 ID : 6306802178539

Option 3 ID : 6306802178542

Option 4 ID : 6306802178541

Status : Answered

Chosen Option : 2



**Q.10** Read the following information carefully and answer the question that follows. You must assume everything in the statement to be true and on the basis of the information given in the statement, decide which of the course of action not logically follow for pursuing.  
Statement:— The Earth's fever is rising, fueled by our carbon footprint. Extreme weather events, rising sea levels, and ecosystem disruptions are stark reminders of the urgency to act. From individual choices like sustainable transportation and energy conservation to collective efforts like policy changes and community initiatives, we must all become stewards of our planet.

**Ans**  1.

Government should take responsibility of arranging for more waste disposal systems for these factories.

2.

India should participate in global agreements and pushing for carbon pricing mechanisms, we should contribute to a unified, effective response to the climate crisis.

3.

We should design and support projects that are adaptable to the impacts of climate change, ensuring sustainability and reducing vulnerability to extreme weather events.

4.

In recognizing the vital role of ecosystems in mitigating climate change, we should not pledge to support large-scale tree planting initiatives and conservation efforts.

Question ID : **630680556947**

Option 1 ID : **6306802176702**

Option 2 ID : **6306802176699**

Option 3 ID : **6306802176700**

Option 4 ID : **6306802176701**

Status : **Answered**

Chosen Option : **2**

**Q.11** Eight persons namely - Harsh, Khushi, Jay, Rohan, Ashwin, Palak, Jayesh and Nilamber live on separate floors of an eight-floor building in an apartment. Ground floor is numbered 1, first floor is numbered 2 and so on until the topmost floor which is numbered 8. Only two people live between Harsh and Khushi. Jayesh lives immediately above Rohan. Ashwin lives immediately above Jay. Ashwin lives above Nilamber. Palak lives on an odd-numbered floor. Only one person lives between Ashwin and Nilamber. Harsh lives on the floor numbered five. Khushi lives above Harsh. On which floor does Ashwin lives?

**Ans**  1. Jayesh

2. Ashwin

3. Jay

4. Rohan

Question ID : **630680557290**

Option 1 ID : **6306802178216**

Option 2 ID : **6306802178217**

Option 3 ID : **6306802178218**

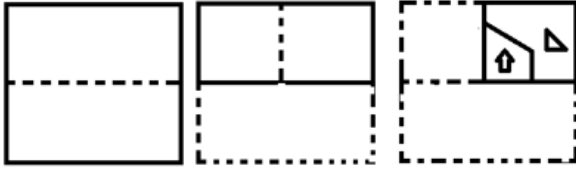
Option 4 ID : **6306802178215**

Status : **Not Answered**

Chosen Option : **--**



Q.12 A paper is folded and cut as shown below. How will it appear when unfolded?



Ans

- ✓ 1.
- ✗ 2.
- ✗ 3.
- ✗ 4.

Question ID : 630680556954  
 Option 1 ID : 6306802176729  
 Option 2 ID : 6306802176730  
 Option 3 ID : 6306802176728  
 Option 4 ID : 6306802176727  
 Status : Not Answered

Chosen Option : --

Q.13 In the following question, four letter pairs are given. The letters on left side of (–) is related to the letters on the right side of (–) with some Logic/Rule/Relation. Three are similar on basis of same Logic/Rule/Relation. Select the odd one out from the given alternatives.

- ✗ 1. RS – VO
- ✗ 2. NS – RO
- ✓ 3. LH – PC
- ✗ 4. RX – VT

Question ID : 630680557323  
 Option 1 ID : 6306802178347  
 Option 2 ID : 6306802178348  
 Option 3 ID : 6306802178349  
 Option 4 ID : 6306802178350  
 Status : Answered

Chosen Option : 3

**Q.14** After arranging the given words according to dictionary order, which word will come at 'Third' position?

1. Petrol
2. Petrify
3. Pet
4. Petal
5. Petition

**Ans**  1. Petrify  
 2. Petition  
 3. Petal  
 4. Petrol

Question ID : 630680557294  
 Option 1 ID : 6306802178234  
 Option 2 ID : 6306802178232  
 Option 3 ID : 6306802178231  
 Option 4 ID : 6306802178233  
 Status : Answered  
 Chosen Option : 2

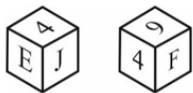
**Q.15** After interchanging which two numbers, the value of the given equation will be '33'?

$$8 \div 2 - 5 + 6 \times 7$$

**Ans**  1. 7 and 5  
 2. 5 and 6  
 3. 6 and 8  
 4. 8 and 5

Question ID : 630680557382  
 Option 1 ID : 6306802178585  
 Option 2 ID : 6306802178584  
 Option 3 ID : 6306802178583  
 Option 4 ID : 6306802178586  
 Status : Answered  
 Chosen Option : 2

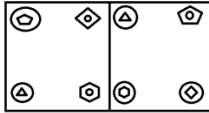
**Q.16** Two positions of a dice are given below. What will come on the face opposite to the face containing 'F' on it?



**Ans**  1. 4  
 2. J  
 3. 9  
 4. E

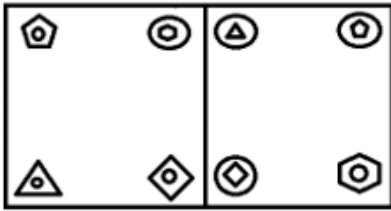
Question ID : 630680557361  
 Option 1 ID : 6306802178499  
 Option 2 ID : 6306802178500  
 Option 3 ID : 6306802178502  
 Option 4 ID : 6306802178501  
 Status : Answered  
 Chosen Option : 4

**Q.17** In this figure, first figure is related to second figure following a certain pattern. Choose from among the alternatives, the figure pair, in which the two figures are related following the same pattern.

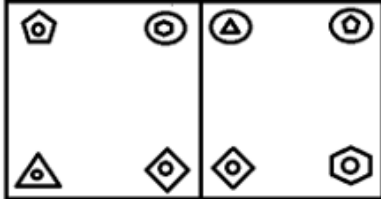


Ans

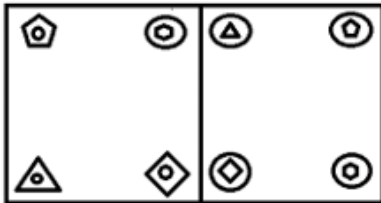
✗ 1.



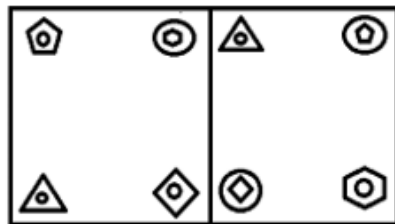
✗ 2.



✗ 3.



✓ 4.



Question ID : 630680556959

Option 1 ID : 6306802176747

Option 2 ID : 6306802176748

Option 3 ID : 6306802176749

Option 4 ID : 6306802176750

Status : Not Answered

Chosen Option : --



Download SSC CGL, CHSL E-BOOKS

[CLICK HERE](#)

**Q.18** There are seven persons Anmol, Fuzail, Raju, Enamul, Dinesh, Badal and Chaman each of different professions Lawyer, Judge, Police, Professor, Architect, Engineer and Doctor but not necessarily in same order, sitting in a row facing towards North direction as per the given information

- There is no person is sitting to the left of Judge.
- Dinesh is sitting exactly in the middle of row.
- Raju is sitting third to the left of Chaman.
- Lawyer is sitting between Police and Anmol.
- Fuzail is a professor sitting to the one end of row.
- Badal is an engineer and Raju is a Lawyer.
- Dinesh is neither police nor lawyer.

Which of the following statement is / are true based on the given arrangement?

- I. Anmol is sitting to the left end of the row.
- II. Enamul is sitting third to the left of Badal.
- III. Doctor is sitting to the right of Chaman.

- Ans**
- 1. All I, II and III are true.
  - 2. Only II is true.
  - 3. Both I and II are true.
  - 4. Only I is true.

Question ID : 630680556915

Option 1 ID : 6306802176574

Option 2 ID : 6306802176572

Option 3 ID : 6306802176573

Option 4 ID : 6306802176571

Status : Not Answered

Chosen Option : --

**Q.19** TREE is related to YXLM in a certain way based on the English alphabetical order. In the same way, GAME is related to LGTM. Which of the following are correct matches following the same logic?

(i)	RIDE	(W)	BUYL
(ii)	HOPE	(X)	MUWM
(iii)	WORD	(Y)	WOKM
(iv)	FIVE	(Z)	KOCM

- Ans**
- 1. iii-Y , i-W only
  - 2. ii-W only
  - 3. i-Y only
  - 4. i-Y, ii-X, iii-W, iv- Z only

Question ID : 630680556933

Option 1 ID : 6306802176646

Option 2 ID : 6306802176645

Option 3 ID : 6306802176643

Option 4 ID : 6306802176644

Status : Answered

Chosen Option : 4

**Q.20** In a certain code language, 'BRIEF' is written as 'SCHGF', and 'CHART' is written as 'IDZUS'. Which of the following are correct matches as per the given code language?

WORD	CODE
I. DANCE	(W) SGNUO
II. FRONT	(X) JOFUI
III. NIGHT	(Y) BEMFD

- Ans**
- 1. I-X , II-W only
  - 2. I-Y, II-W, III-X only
  - 3. III-Y , I-W only
  - 4. I-X only

Question ID : 630680556924  
 Option 1 ID : 6306802176607  
 Option 2 ID : 6306802176608  
 Option 3 ID : 6306802176610  
 Option 4 ID : 6306802176609  
 Status : Answered  
 Chosen Option : 2

Section : English

**Q.1** Which of the following statements uses the given idiom correctly?  
 (i) It is exciting to see the kangaroo court freely moving about in the zoo.  
 (ii) Many villages in India still organise a kangaroo court, which is unfortunate.  
 (iii) Those who conduct kangaroo courts will soon find themselves hounded by the law of the land.

- Ans**
- 1. Only statements (i) and (ii)
  - 2. Only statements (i) and (iii)
  - 3. Only statements (ii) and (iii)
  - 4. All the statements

Question ID : 630680556757  
 Option 1 ID : 6306802176007  
 Option 2 ID : 6306802176008  
 Option 3 ID : 6306802176009  
 Option 4 ID : 6306802176010  
 Status : Answered  
 Chosen Option : 3

Q.2 Identify the grammatically correct form of the given sentence.

Sentence: I have to read this so that I didn't get this speech wrong.

I. I have to read this so that I didn't got this speech wrong.

II. I am to read this so that I didn't got this speech wrong.

- Ans
- 1. Only I is correct
  - 2. Both I and II are correct
  - 3. Only II is correct
  - 4. Neither I nor II is correct

Question ID : 630680556899

Option 1 ID : 6306802176479

Option 2 ID : 6306802176481

Option 3 ID : 6306802176480

Option 4 ID : 6306802176482

Status : Answered

Chosen Option : 4

Q.3 A sentence is missing in the paragraph given below. Decide in which blank (i.e., 1, 2, 3 or 4) the following sentence would fit best.

Sentence:

When we consider the subject of style in general, we notice that there are great differences in this respect, among nations as well as among individuals.

Paragraph:

Style refers to the choice and arrangement of words and may be defined as the peculiar manner in which thought is expressed in language. (1)\_\_\_\_. Such differences as these may always be found. (2)\_\_\_\_. In Oriental literature great license is allowed to the imagination; in European it is held under stricter control. In Europe itself, there are strongly marked varieties of national taste. (3)\_\_\_\_. In every nation also, there is a distinctive style at different periods. (4)\_\_\_\_. Besides this, we have to consider the personal peculiarities of the individual author, which are so strikingly manifested that a man's writings have come to be considered as much a mark of himself as his face or figure.

- Ans
- 1. Blank 4
  - 2. Blank 2
  - 3. Blank 3
  - 4. Blank 1

Question ID : 630680556702

Option 1 ID : 6306802175790

Option 2 ID : 6306802175788

Option 3 ID : 6306802175789

Option 4 ID : 6306802175787

Status : Answered

Chosen Option : 4



Q.4 Match the following words with their antonyms.

	List I		List II
1	Conflict	A	Permanent
2	Transient	B	Accord
3	Lament	C	Applause

- Ans
- ✓ 1. 1-B, 2-A, 3-C
  - ✗ 2. 1-B, 2-C, 3-A
  - ✗ 3. 1-C, 2-B, 3-A
  - ✗ 4. 1-A, 2-B, 3-C

Question ID : 630680556844  
 Option 1 ID : 6306802176262  
 Option 2 ID : 6306802176261  
 Option 3 ID : 6306802176260  
 Option 4 ID : 6306802176259  
 Status : Answered  
 Chosen Option : 1

Q.5 Select the correct conclusion based on the correct meaning of the word underlined in the following sentence.

Statement: The company received a subpoena for the next stage of the investigation.

Conclusion:

- (i) The penal code needs to be amended to protect innocent victims from further humiliation.
- (ii) The relevant documents were also ordered to be produced a week in advance.
- (iii) It won't be wise for the company to ignore it as it might draw judicial wrath.

- Ans
- ✗ 1. Only conclusion (ii) is correct
  - ✗ 2. Only conclusion (i) is correct
  - ✗ 3. Both conclusion (i) and (iii) are correct
  - ✓ 4. Both conclusion (ii) and (iii) are correct

Question ID : 630680556743  
 Option 1 ID : 6306802175952  
 Option 2 ID : 6306802175951  
 Option 3 ID : 6306802175954  
 Option 4 ID : 6306802175953  
 Status : Not Answered  
 Chosen Option : --

**Q.6** A sentence is missing in the paragraph given below. Decide in which blank (i.e., 1, 2, 3 or 4) the following sentence would fit best.

**Sentence:**

From that tradition many of our intellectuals are visibly turning away.

**Paragraph:**

The word 'ancient' emphasises the fact that intellectual freedom is a deep-rooted tradition without which our characteristic western culture could only doubtfully exist.

(1)\_\_\_\_. They have accepted the principle that a book should be published or suppressed, praised or damned, not on its merits but according to political expediency. (2)\_\_\_\_. And others who do not actually hold this view assent to it from sheer cowardice. But at least let us have no more nonsense about defending liberty against Fascism. (3)\_\_\_\_. If liberty means anything at all it means the right to tell people what they do not want to hear. (4)\_\_\_\_. The common people still vaguely subscribe to that doctrine and act on it. In our country, it is the liberals who fear liberty and the intellectuals who want to do dirt on the intellect: it is to draw attention to that fact that I have written this preface.

**Ans**  1. Blank 3

2. Blank 1

3. Blank 4

4. Blank 2

Question ID : 630680556706

Option 1 ID : 6306802175805

Option 2 ID : 6306802175803

Option 3 ID : 6306802175806

Option 4 ID : 6306802175804

Status : Not Answered

Chosen Option : --

**Q.7** Identify the grammatically correct form of the given sentence.

Sentence: The makers of the film didn't wanted to talk about the fight that had took place yesterday.

I. The makers of the film refused to talk about the fight that happened yesterday.

II. The makers of the film didn't want to talk about the fight that happened yesterday.

III. The makers of the film didn't want to talk about the fight that took place yesterday.

**Ans**  1. All I, II and III are correct

2. Only III is correct

3. Only II and III are correct

4. Only I is correct

Question ID : 630680556896

Option 1 ID : 6306802176470

Option 2 ID : 6306802176468

Option 3 ID : 6306802176469

Option 4 ID : 6306802176467

Status : Answered

Chosen Option : 1



Q.8 Select the correct conclusion based on the meaning of the underlined word.

Statement: She threw up the sponge after watching a female double her size as her opponent.

Conclusion:

- I. She forgot all her weaknesses and gave a good fight.
- II. She accepted her defeat.
- III. She abandoned the competition.

- Ans
- 1. Only conclusion I and II are correct
  - 2. Only conclusion II and III are correct
  - 3. Only conclusion I is correct
  - 4. Only conclusion III is correct

Question ID : 630680556817  
 Option 1 ID : 6306802176152  
 Option 2 ID : 6306802176154  
 Option 3 ID : 6306802176151  
 Option 4 ID : 6306802176153  
 Status : Answered  
 Chosen Option : 2

Q.9 Match the following words with their SYNONYMS.

	List I		List II
1	Corrupt	A	Direct
2	Candid	B	Profuse
3	Copious	C	Depraved

- Ans
- 1. 1-C, 2-A, 3-B
  - 2. 1-B, 2-A, 3-C
  - 3. 1-A, 2-B, 3-C
  - 4. 1-B, 2-C, 3-A

Question ID : 630680556853  
 Option 1 ID : 6306802176296  
 Option 2 ID : 6306802176298  
 Option 3 ID : 6306802176295  
 Option 4 ID : 6306802176297  
 Status : Answered  
 Chosen Option : 1

Q.10 Select the correct conclusion based on the meaning of the underlined word.

Statement: I will only share this information if you keep it under your hat.

Conclusion:

- I. If you will not discuss this information publicly.
- II. If you will not use it for your own benefit.
- III. If you will buy me a hat.

- Ans  1. Only conclusion I is correct  
 2. Only conclusion II and III are correct  
 3. Only conclusion III is correct  
 4. Only conclusion II is correct

Question ID : 630680556820  
Option 1 ID : 6306802176163  
Option 2 ID : 6306802176166  
Option 3 ID : 6306802176165  
Option 4 ID : 6306802176164  
Status : Answered  
Chosen Option : 1

Q.11 The passage given below has numbered blanks. Choose the word that best fits Blank 1.

Over the past decade, the sunflower sea star has gone from a predator of the Pacific Ocean to nearing extinction. The Nature Conservancy estimates that 5.75 billion sunflower sea stars died over three years, a 94% global \_\_\_(1)\_\_. The cause, scientists say, is largely climate change and warming waters, \_\_\_(2)\_\_\_ by sea star wasting disease. Hope is slowly on the horizon. The Birch Aquarium at Scripps Institution of Oceanography near San Diego successfully \_\_\_(3)\_\_\_ three sunflower sea stars recently, the latest success story in a sprawling collaborative effort. TBA has five sunflower stars, one of the largest populations of sunflower stars in \_\_\_(4)\_\_\_ in California. But until recently it did not know their gender. To determine the sex, researchers induced spawning. After further testing, they can determine whether the \_\_\_(5)\_\_\_ could survive disease or parasites. Once that's done, the aquarium will be able to begin the fertilization process.

- Ans  1. Fallout  
 2. Increase  
 3. Spurt  
 4. Decline

Question ID : 630680556748  
Option 1 ID : 6306802175973  
Option 2 ID : 6306802175971  
Option 3 ID : 6306802175974  
Option 4 ID : 6306802175972  
Status : Answered  
Chosen Option : 4

**Q.12** The five sentences labelled (1, 2, 3, 4, 5) given in this question. The last sentence is fixed and others when properly sequenced, form a coherent paragraph. Each sentence is labelled with a number. Decide on the proper order for the sentences and choose the correct option.

1. Many might even question whether it is at all required since it is assumed that the landlord has insured his property.
2. However, this does not necessarily imply that the tenant's belongings if damaged or stolen from within the property will also be covered.
3. Renter's insurance is an insurance cover not many are aware of.
4. In such a time of crisis this policy comes to help.
5. Renters insurance can also offer coverage if someone gets injured in your rental home by taking care of their medical bills and can also protect you if the third party files a lawsuit against you for the injury.

- Ans**
- 1. 21345
  - 2. 41235
  - 3. 31245
  - 4. 12543

Question ID : 630680556812  
Option 1 ID : 6306802176132  
Option 2 ID : 6306802176134  
Option 3 ID : 6306802176133  
Option 4 ID : 6306802176131  
Status : Answered  
Chosen Option : 3

**Q.13** Select the conclusion(s) that follow(s) based on the correct meaning of the underlined segment in the given sentence.

**Sentence:**

There might be some issues to be sorted out, but it does not mean that we should throw the baby out with the bathwater.

**Conclusion:**

- (i) For the sake of opposition, we should not reject a proposal outright because of our concerns over a few specifics.
- (ii) The bathwater should be clean, otherwise the baby will be sick.
- (iii) When a theory or an approach goes out of favour, we shift our loyalty completely towards the more fashionable one ignoring even the good aspects of the former.

- Ans**
- 1. Only conclusion (ii)
  - 2. Only conclusion (i) and (iii)
  - 3. Only Conclusion (iii)
  - 4. Only conclusion (i)

Question ID : 630680556766  
Option 1 ID : 6306802176044  
Option 2 ID : 6306802176046  
Option 3 ID : 6306802176045  
Option 4 ID : 6306802176043  
Status : Answered  
Chosen Option : 2

**Q.14** Four sentences are given as options. Choose the option that contains the odd sentence.

- Ans**
- 1. The answer lies in using digital resources intelligently.
  - 2. Reading the newspaper daily should become a habit with students and teachers alike.
  - 3. In the current educational context, students continue to struggle, and teachers feel burnt out.
  - 4. A 2021 study showed that 94% of teachers in the US feel open to using digital resources to enhance in-class instruction.

Question ID : 630680556714  
Option 1 ID : 6306802175838  
Option 2 ID : 6306802175837  
Option 3 ID : 6306802175836  
Option 4 ID : 6306802175835  
Status : Answered  
Chosen Option : 2

Q.15 Select the option in which the word 'fastidious' is used correctly.

- Ans  1. Fastidious people are easy to please and you can get along with them with no difficulty.
2. Some teachers are so fastidious that they give high grades to almost everyone in class.
3. James is a fastidious editor and wouldn't easily approve of any copy that comes to his desk.
4. I wish he weren't as fastidious as he is made out to be as he often sidesteps the issues and digresses.

Question ID : 630680556734  
 Option 1 ID : 6306802175915  
 Option 2 ID : 6306802175917  
 Option 3 ID : 6306802175916  
 Option 4 ID : 6306802175918  
 Status : Answered  
 Chosen Option : 1

Q.16 Match the following words with their SYNONYMS.

	List I		List II
1	Longing	A	Remission
2	Pardon	B	Denote
3	Signify	C	Yearning

- Ans  1. 1-B, 2-C, 3-A
2. 1-A, 2-B, 3-C
3. 1-C, 2-A, 3-B
4. 1-A, 2-C, 3-B

Question ID : 630680556857  
 Option 1 ID : 6306802176314  
 Option 2 ID : 6306802176311  
 Option 3 ID : 6306802176313  
 Option 4 ID : 6306802176312  
 Status : Answered  
 Chosen Option : 3

Q.17 Identify the grammatically correct form of the given sentence.

Sentence: His dreams were on a grand scale; such, after all, are best possessions of youth.

- I. His dreams were on a grand scale; such, after all, are the best possessions of youth.  
 II. His dreams were on an grand scale; such, after all, are the best possessions of youth.

- Ans  1. Both I and II are correct
2. Only II is correct
3. Only I is correct
4. Neither I nor II is correct

Question ID : 630680556869  
 Option 1 ID : 6306802176361  
 Option 2 ID : 6306802176360  
 Option 3 ID : 6306802176359  
 Option 4 ID : 6306802176362  
 Status : Answered  
 Chosen Option : 3

Q.18 Identify the grammatically correct form of the given sentence.

Sentence: My father is not only intelligent, yet he also has a wide range of expertise.

I. My father is not only intelligent, but he also has a wide range of expertise.

II. My father is not intelligent only, also but he has a wide range of expertise.

III. My father is nor intelligent only, but also he has a wide range of expertise.

Ans  1. Only II is correct

2. Only I and II are correct

3. Only I is correct

4. Only III is correct

Question ID : 630680556877

Option 1 ID : 6306802176392

Option 2 ID : 6306802176394

Option 3 ID : 6306802176391

Option 4 ID : 6306802176393

Status : Answered

Chosen Option : 3

Q.19 Select the option in which the word 'alimony' is used correctly.

Ans  1. The alimony war has been protracted since India's independence.

2. The alimony payments to his two wives have left the cruel husband nearly a pauper.

3. The alimony between the two has not dwindled even after a decade.

4. The fight for territorial alimony has been going on for a few years.

Question ID : 630680556727

Option 1 ID : 6306802175890

Option 2 ID : 6306802175888

Option 3 ID : 6306802175887

Option 4 ID : 6306802175889

Status : Answered

Chosen Option : 2

Q.20 Select the conclusion(s) that follow(s) based on the correct meaning of the word underlined in the following sentence.

Sentence:

Soft music has a soporific effect on human beings, according to various studies.

Conclusion:

(i) Songs should be heard at a high volume for it to have any effect on us.

(ii) Mothers sing lullabies to their children when they don't stop crying.

(iii) Classical music is often used to calm the nerves of agitated minds.

Ans  1. Only conclusion (i) and (iii)

2. Only conclusion (ii)

3. Only conclusion (i)

4. Only conclusion (ii) and (iii)

Question ID : 630680556746

Option 1 ID : 6306802175966

Option 2 ID : 6306802175964

Option 3 ID : 6306802175963

Option 4 ID : 6306802175965

Status : Answered

Chosen Option : 4

