

# Solved Paper

## SSC Data Entry Operator Exam

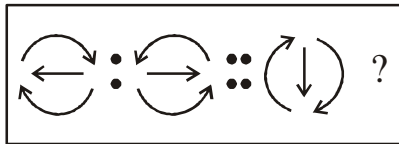
Held on—02-08-2009

### PART-A

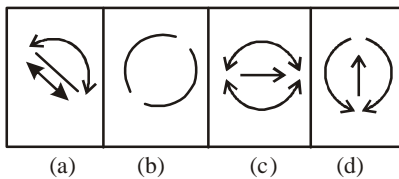
#### GENERAL INTELLIGENCE

**Directions (1-10):** In questions no. 1 to 10, select the related letters/word/number/figure from the given alternatives.

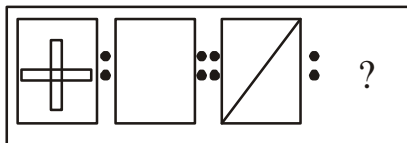
1. Question Figures



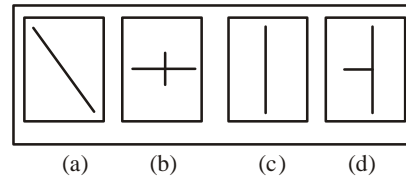
Answer Figures



2. Question Figures



Answer Figures



3. Hunger : Food :: Disease : ?

- (a) Weakness      (b) Medicine  
(c) Sickness      (d) Water

4. Thin : Thick :: Draft : ?

- (a) Short              (b) Tall  
(c) Broad            (d) Long

5. AN : BO :: LY : ?

- (a) KN                (b) JW  
(c) MZ                (d) IV

6. ACE : HIL :: MOQ : ?

- (a) TVX                (b) TUX  
(c) XVT                (d) SUW

7. BDFH : JLNP :: RTVX : ?

- (a) BDFH              (b) BDFZ  
(c) ZBDF              (d) YZAB

8. 400 : 20 :: 484 : ?

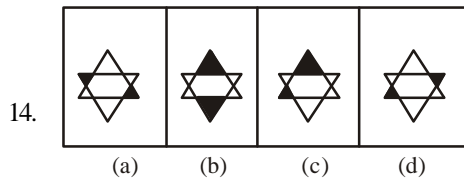
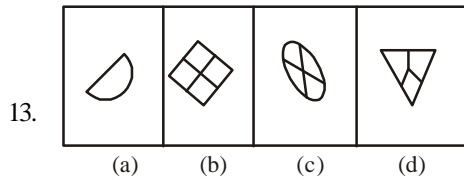
- (a) 20                 (b) 21  
(c) 22                 (d) 23

Solved Paper-02-08-2009

9. 4 : 32 :: 7 : ?  
 (a) 98 (b) 343  
 (c) 88 (d) 49
10. 624 : 426 :: 745 : ?  
 (a) 475 (b) 726  
 (c) 547 (d) 645

**Directions (11-18):** Find the odd number/letters/figure/number pair from the given alternatives.

11. (a) 2 (b) 9  
 (c) 63 (d) 28
12. (a) 9.09 (b)  $\frac{909}{100}$   
 (c)  $9\frac{9}{100}$  (d)  $\frac{909}{1000}$



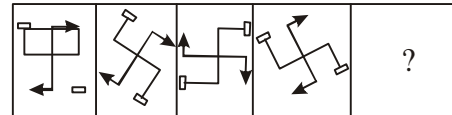
15. (a) 16-25 (b) 64-81  
 (c) 36-49 (d) 100-110
16. (a) XV (b) ZW  
 (c) YV (d) WT
17. (a) ADF (b) BEG  
 (c) LOQ (d) SUW
18. (a) HIXW (b) BAQP  
 (c) SRVU (d) UTYX

**Directions (19):** Which one set of letters when sequentially placed at the gaps in the given letters series shall complete it?

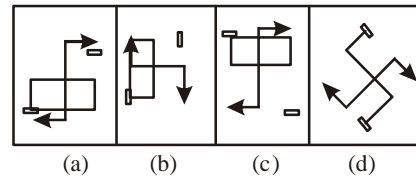
19. w \_ xw \_ x \_ ax \_ a \_ wa \_  
 (a) axawxa (b) aawaxx  
 (c) aawwxx (d) waawxx

**Directions (20-24):** A series is given with one term missing. Choose the correct alternative from the given ones that will complete the series.

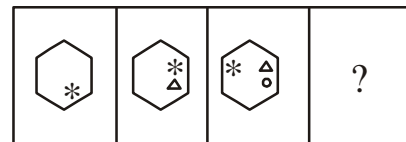
20. Question Figures



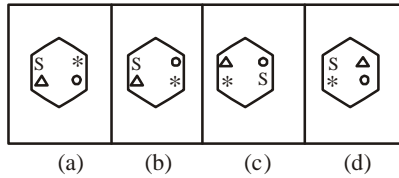
Answer Figures



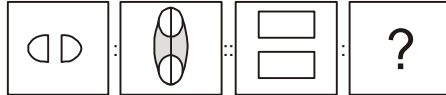
21. AE, FJ, ?, PT  
 (a) MN (b) UV  
 (c) KO (d) YZ
22. BDF, HJL, NPR, ?  
 (a) TRP (b) TVY  
 (c) TVX (d) UWX
23. 9, 17, 31, 57, ?, 205  
 (a) 102 (b) 104  
 (c) 107 (d) 109
24. Question Figures



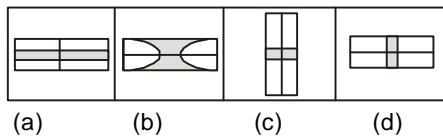
Answer Figures



25. The average age of three friends A, B, C is 20 years. The average age of A and B is 19 years. What is the age of C?  
 (a) 20 years (b) 21 years  
 (c) 22 years (d) 24 years
26. Arun runs faster than Elias, but not as fast as Dinesh. Dinesh runs faster than Chander, but not s fast as Bikram. Who runs fastest?  
 (a) Arun (b) Bikram  
 (c) Chander (d) Dinesh
27. Question Figures:



Answer Figures:



28. Ramu's mother said to Ramu. "My mother has a son whose son is Achyut". How is Achyut related to Ramu?  
 (a) Uncle (b) Cousin  
 (c) Brother (d) Nephew

**Directions (29-30):** From the given alternatives select the word which can be formed using the letters given in the word.

29. GLAZE  
 (a) GLAD (b) LAZY

(c) LEASE (d) ZEAL


30. CIRCUMSCRIBE  
 (a) TRIBES (b) BARBER  
 (c) SCARE (d) CRUMBS

**Directions (31-32):** From the given alternatives select the word which **cannot** be formed using the letters to the given word.

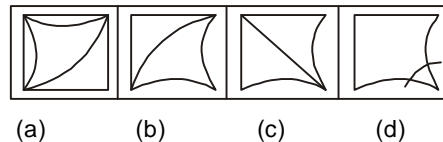
31. SIGNIFICANT  
 (a) SCANT (b) FIASCO  
 (c) GIANT (d) FACT
32. COMMISSIONER  
 (a) MISSION (b) COMMON  
 (c) MISSILE (d) SIREN
33. If A is coded as 2, B as 3 and so on, what is the code for FACE?  
 (a) 7246 (b) 6245  
 (c) 6357 (d) 7345
34. In the code TIGER is written as SHFDQ, how shall HORSE be written in the code?  
 (a) GNRQD (b) GNQRD  
 (c) GRNQD (d) GMQRD

**Directions (35):** Which answer figure will complete the pattern in the question figure?

35. Question Figure



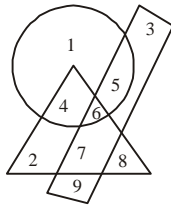
Answer Figures



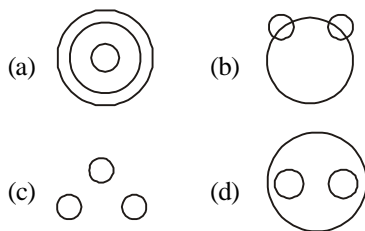


**Directions (43-44):** A, B, C, D and E are five boys sitting in a circle. C is sitting immediately to the left of E. A is sitting between D and E.

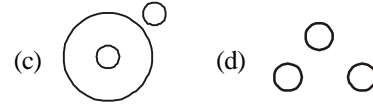
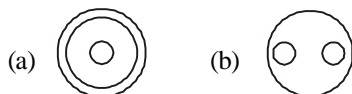
43. Who is sitting to the immediate left hand side of C?  
 (a) E (b) A  
 (c) B (d) D
44. Who is sitting between B and A?  
 (a) C (b) E  
 (c) D (d) None
45. Which number is common to all the three geometrical figures?



- (a) 4 (b) 5  
 (c) 7 (d) 6
46. Which one of the following figures represents the relationship among Tables, Chairs, Furniture?



47. Which one of the following figures represents the relationship among Brinjal, Meat, Vegetables?



**Directions (48-50):** In the following question one/two statements are given followed by two conclusions I and II. You have to consider the two statements to be true even if they seem to be at variance from commonly known facts. You have to decide which of the given conclusions, if any, follow from the given statements.

48. **Statements:** Some phones are watches.  
 All watches are guns.

**Conclusions:**

- I. All guns are watches.  
 II. Some guns are Phones.  
 (a) Only I follows  
 (b) Only II follows  
 (c) Either I or II follows  
 (d) Neither I nor II follows

49. **Statements:** In schools, students learn as they are able to understand what is taught to them.

**Conclusions:**

- I. Student's learning in schools, depends upon their ability to learn.  
 II. Student's learning in schools depends upon how they are taught.  
 (a) Only I follows  
 (b) Only II follows  
 (c) Both I and II follows  
 (d) Neither I nor II follows

50. **Statements:** Private firm workers are hard-working.

**Conclusions:**

- I. Some hard-working persons are private firm workers.

Solved Paper-02-08-2009

II. Government employees are not hard-working

- (a) Only I follows
- (b) Only II follows
- (c) Neither I nor II follows
- (d) Both I and II follow

**ANSWER SHEET**

- |         |         |         |         |         |         |         |         |         |         |
|---------|---------|---------|---------|---------|---------|---------|---------|---------|---------|
| 1. (d)  | 2. (c)  | 3. (b)  | 4. (b)  | 5. (c)  | 6. (b)  | 7. (c)  | 8. (c)  | 9. (a)  | 10. (c) |
| 11. (b) | 12. (d) | 13. (a) | 14. (c) | 15. (d) | 16. (a) | 17. (d) | 18. (a) | 19. (c) | 20. (c) |
| 21. (c) | 22. (c) | 23. (c) | 24. (c) | 25. (c) | 26. (b) | 27. (c) | 28. (b) | 29. (d) | 30. (d) |
| 31. (b) | 32. (c) | 33. (a) | 34. (b) | 35. (a) | 36. (c) | 37. (b) | 38. (b) | 39. (d) | 40. (b) |
| 41. (c) | 42. (c) | 43. (c) | 44. (c) | 45. (d) | 46. (d) | 47. (c) | 48. (b) | 49. (c) | 50. (a) |



<http://upscportal.com/civilservices/order-books>

Order Online - [www.upscportal.com](http://www.upscportal.com)

## UPSCPORTAL PUBLICATIONS

### CSAT BOOKS




₹ 150/-  
Code: UP04



₹ 105/-  
Code: UP05




₹ 175/-  
Code: UP07



₹ 150/-  
Code: UP08



₹ 170/-



₹ 390/-


INDIA  
2011

Coming soon  
Code: UP16

Coming  
Soon

### General Studies

*Civil Services (Main)*




₹ 210/-  
Code: UM01



₹ 120/-  
Code: UM02

*Civil Services (Preliminary)*




₹ 110/-  
Code: UP02



₹ 140/-  
Code: UP03

### Other Important Books of Your Interest



₹ 150/-  
Code: UP11



₹ 225/-  
Code: B01



₹ 225/-  
Code: B02



₹ 320/-  
Code: S01



₹ 225/-  
Code: B02



₹ 225/-  
Code: B02

Order Online - [www.upscportal.com](http://www.upscportal.com)

Helpline No. 011-45151781, 27650111



<http://upscportal.com/civilservices/order-books>