

Exam Code : SSC_MAT_26032017

Exam Date : 26-Mar-2017

Duration : 60

Exam Time : 2:00 pm

- 1 . Amit said, "This girl is the wife of the grandson of my mother." How is Amit related to the girl?
- A. Father
B. Father-in-law
C. Grandfather
D. Husband

Answer Key - B

- 2 . Pointing to a man in a photograph Reena said, "His mother's only daughter is my mother." How is Reena related to that man?
- A. Nephew
B. Sister
C. Niece
D. Wife

Answer Key - C

- 3 . Complete the series: 11, 13, 17, 19, 23, 29, 31, 37, 41, (...)
- A. 43
B. 47
C. 51
D. 53

Answer Key - A

- 4 . Complete the series. 4, 10, 22, 46, (...)
- A. 56
B. 66
C. 76
D. 94

Answer Key - D

Exam Code : SSC_MAT_26032017

Exam Date : 26-Mar-2017

Duration : 60

Exam Time : 2:00 pm

5 . Select a suitable figure from the answer figures that would replace the question mark (?).

Problem figure



Answer figures



P Q R S

| | | | |
|----|---|----|---|
| A. | P | B. | Q |
| C. | R | D. | S |

Answer Key - B

Exam Code : SSC_MAT_26032017

Exam Date : 26-Mar-2017

Duration : 60

Exam Time : 2:00 pm

6. Select a suitable figure from the answer figures that would replace the question mark (?).

Problem figure**Answer figures****P****Q****R****S**

| | | | |
|----|---|----|---|
| A. | P | B. | Q |
| C. | R | D. | S |

Answer Key - C

7. Find the ODD one out.

A. Cricket

B. Baseball

C. Football

D. Billiards

Answer Key - D

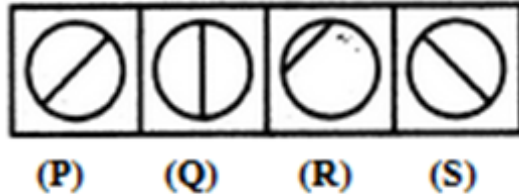
Exam Code : SSC_MAT_26032017

Exam Date : 26-Mar-2017

Duration : 60

Exam Time : 2:00 pm

8. Choose the figure which is different from the rest.



| | | | |
|----|---|----|---|
| A. | P | B. | Q |
| C. | R | D. | S |

Answer Key - C

9. Which word will best complete the relationship given below?

Tea : Leaves :: Coffee : ?

A. Leaves

B. Beverage

C. Stimulant

D. Seeds

Answer Key - D

10. 'Demographer' is related to 'People' in the same way as 'Philatelist' is related to-

A. Fossils

B. Stamps

C. Photography

D. Music

Answer Key - B

Exam Code : SSC_MAT_26032017

Exam Date : 26-Mar-2017

Duration : 60

Exam Time : 2:00 pm

- 11 .** Anoop starts walking towards South. After walking 15 metres, he turns towards North. After walking 20 metres, he turns towards East and walks 10 metres. He then turns towards South and walks 5 metres. How far is he from his original position and in which direction?

A. 10 metres, North
B. 10 metres, South
C. 10 metres, West
D. 10 metres, East

Answer Key - D

- 12 .** Village Chimur is 20 km to the North of village Rewa. Village Rahate is 18 km to the East of Village Rewa. Village Angne is 12 km to the West of Chimur. If Sanjay starts from village Rahate and goes to village Angne, in which direction is he from his starting point?

A. North
B. North-West
C. South
D. South-East

Answer Key - B

- 13 .** Mukesh is taller than Suresh, but shorter than Rakesh. Rakesh is taller than Harish, but shorter than Amar. Who among them is the shortest?

A. Mukesh
B. Suresh
C. Harish
D. Cannot be determined

Answer Key - D

- 14 .** Arrange the following in a logical order. 1. Punishment 2. Prison 3. Arrest 4. Crime 5. Judgement

A. 5, 1, 2, 3, 4
B. 4, 3, 5, 2, 1
C. 4, 3, 5, 1, 2
D. 2, 3, 1, 4, 5

Answer Key - C

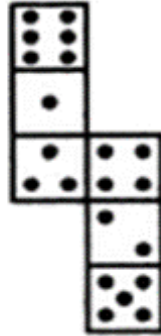
Exam Code : SSC_MAT_26032017

Exam Date : 26-Mar-2017

Duration : 60

Exam Time : 2:00 pm

- 15 . How many dots lie opposite to the face having three dots, when the given figure is folded to form a cube?



| | | | |
|----|---|----|---|
| A. | 2 | B. | 4 |
| C. | 5 | D. | 6 |

Answer Key - D

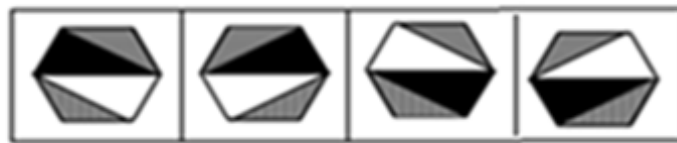
Exam Code : SSC_MAT_26032017

Exam Date : 26-Mar-2017

Duration : 60

Exam Time : 2:00 pm

- 16 . Choose the alternative which closely resembles the mirror image of the given figure.

Problem figure**X****Answer figures****P****Q****R****S**

| | | | |
|----|---|----|---|
| A. | P | B. | Q |
| C. | R | D. | S |

Answer Key - 0

- 17 . Which letters will best complete the relationship given below? BYVE : GTQJ :: CXUF : ?

A. HSQJ

B. IROL

C. HSPK

D. GTRI

Answer Key - C

- 18 . Complete the series: Z, S, W, O, T, K, Q, G, (...), (...)

A. N, D

B. N, C

C. O, D

D. O, C

Answer Key - B

Exam Code : SSC_MAT_26032017

Exam Date : 26-Mar-2017

Duration : 60

Exam Time : 2:00 pm

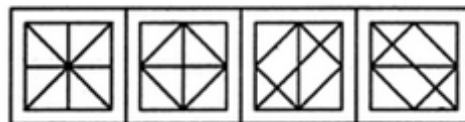
19 . Complete the series: ELFA, GLHA, ILJA, (...), MLNA

A. OLPA

B. KLMA

C. LLMA

D. KLLA

Answer Key - D**20 .** From the given answer figures, select the one in which the problem figure is hidden/embedded.**Problem Figure****Answer Figure****P****Q****R****S**

| | | | |
|----|---|----|---|
| A. | P | B. | Q |
| C. | R | D. | S |

Answer Key - A

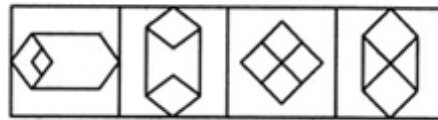
Exam Code : SSC_MAT_26032017

Exam Date : 26-Mar-2017

Duration : 60

Exam Time : 2:00 pm

- 21 . From the given answer figures, select the one in which the problem figure is hidden/embedded.

Problem Figure**Answer Figure**

P Q R S

| | | | |
|----|---|----|---|
| A. | P | B. | Q |
| C. | R | D. | S |

Answer Key - B

- 22 . If BROWN is coded as ZPMUL, VIOLET will be coded as-

A. TGMJCR B. SGMJCQ
C. TGMJCQ D. TGWCQZ

Answer Key - A

- 23 . If BEAT is written as GIDV, SOUP may be written as-

A. YSXR B. ZSYS
C. XSYS D. XSXR

Answer Key - D

Exam Code : SSC_MAT_26032017

Exam Date : 26-Mar-2017

Duration : 60

Exam Time : 2:00 pm

- 24 . Read the following information carefully and answer the questions given below.

Six girls are sitting in a circle. Sonia is sitting opposite to Radhika. Poonam is sitting to the right of Radhika but to the left of Deepti. Monika is sitting to the left of Radhika. Kamini is sitting to the right of Sonia and to the left of Monika. Now Deepti and Kamini, Monika and Radhika mutually exchange their positions.

Who will be opposite to Sonia?

| | | | |
|----|---------|----|--------|
| A. | Radhika | B. | Monika |
| C. | Kamini | D. | Sonia |

Answer Key - B

Exam Code : SSC_MAT_26032017

Exam Date : 26-Mar-2017

Duration : 60

Exam Time : 2:00 pm

- 25 . Read the following information carefully and answer the questions given below.

Six girls are sitting in a circle. Sonia is sitting opposite to Radhika. Poonam is sitting to the right of Radhika but to the left of Deepti. Monika is sitting to the left of Radhika. Kamini is sitting to the right of Sonia and to the left of Monika. Now Deepti and Kamini, Monika and Radhika mutually exchange their positions.

Who will be sitting left of Kamini?

| | | | |
|----|---------|----|--------|
| A. | Poonam | B. | Deepti |
| C. | Radhika | D. | Sonia |

Answer Key - A

- 26 . Choose the correct synonym of the given word from the options given below. INDOLENT

- A. Active
B. Lethargic
C. Stubborn
D. Diligent

Answer Key - B

- 27 . Choose the correct synonym of the given word from the options given below. SENSUOUS

- A. Delicious
B. Passionate
C. Abundant
D. Imposing

Answer Key - B

Exam Code : SSC_MAT_26032017

Exam Date : 26-Mar-2017

Duration : 60

Exam Time : 2:00 pm

28 . Choose the correct synonym of the given word from the options given below. CONTRADICT

A. Predict

B. Support

C. External

D. Oppose

Answer Key - D

29 . Choose the correct antonym of the given word from the options given below.
EXTRAVAGANT

A. Miserly

B. Uneconomical

C. Compassionate

D. Narrow-minded

Answer Key - A

30 . Choose the correct antonym of the given word from the options given below. DORMANT

A. Active

B. Dreamy

C. Asleep

D. Invisible

Answer Key - A

31 . Choose the correct antonym of the given word from the options given below. CIRCUITOUS

A. Straight

B. Certain

C. Tenacious

D. Quick

Answer Key - A

32 . Complete the sentence using the most appropriate word from the options given. Kumar _____ avoids playing tennis on weekdays as it is very tiring.

A. Rarely

B. Usually

C. Greatly

D. Highly

Answer Key - B

33 . Choose the appropriate word to complete the sentence. If you are late to the meeting, it will be really difficult to _____ the subjects which have been discussed.

A. Look for

B. Catch up with

C. Play down

D. Drop in

Answer Key - B

Exam Code : SSC_MAT_26032017

Exam Date : 26-Mar-2017

Duration : 60

Exam Time : 2:00 pm

34 . Choose the appropriate word to complete the sentence. The day was extremely hot and in no time, my back was drenched with _____.

A. Prickly heat

B. Perspiration

C. Sores

D. Fatigue

Answer Key - B

35 . Choose from the four options, the word that best substitute the given phrase. Author's explanatory remarks at the beginning of a book.

A. Foreword

B. Biography

C. Preface

D. Bibliography

Answer Key - C

36 . Choose from the four options, the word that best substitutes the given phrase. Art of growing flowers, fruits and vegetables.

A. Horticulture

B. Landscaping

C. Bonsai

D. Plantation

Answer Key - A

37 . Choose the MISSPELT word.

A. Lesion

B. Lessee

C. Lessar

D. Lesser

Answer Key - C

38 . Choose the MISSPELT word.

A. Crescent

B. Express

C. Domineer

D. Ferous

Answer Key - D

39 . The following sentence has four parts marked P, Q, R and S. Choose the part of sentence with the error and mark as your answer. If there is no error, mark 'No error (S)' as your answer.

He went on committing crime after crime (P)/ and in spite of my best efforts (Q)/ I could not prevent him to do so (R)/ No error (S)

A. P

B. Q

C. R

D. S

Answer Key - C

Exam Code : SSC_MAT_26032017

Exam Date : 26-Mar-2017

Duration : 60

Exam Time : 2:00 pm

40 . Choose the correct word/phrase to complete the following sentence. The plane bound for Delhi _____ in another ten minutes.

A. Left

B. Has left

C. Leaves

D. Is leaving

Answer Key - D

41 . Choose the correct tense from the given options to complete the sentence. Geetha _____ to the United Kingdom last week.

A. Go

B. Went

C. Has go

D. Was going

Answer Key - B

42 . Complete the sentence using the most appropriate word from the options given. Shweta has _____ in Chennai all her life.

A. Lives

B. Living

C. Lived

D. Been lived

Answer Key - C

43 . Rewrite the sentence in passive voice.

She will have fed these children.

A. These children was been fed by her

B. These children will have been fed by her

C. These children will have been feed by her

D. These children will be fed by her

Answer Key - B

44 . Rewrite the sentence in passive voice.

The postman delivers letters.

A. Letters are delivered by the postman

B. Letters will delivered by the postman

C. Letters have delivered by the postman

D. Letters had delivered by the postman

Answer Key - A

45 . Rewrite the sentence in Indirect speech.

The captain said, 'Hurrah! We have won the match.'

A. The captain exclaimed with joy that they had won the match

B. The captain exclaimed that they won the match

C. The captain exclaimed with joy that we had won the match

D. The captain exclaimed that we had won the match

Answer Key - A

Exam Code : SSC_MAT_26032017

Exam Date : 26-Mar-2017

Duration : 60

Exam Time : 2:00 pm

46 . Rewrite the sentence in Indirect speech.

He said, 'Yes, I am at fault.'

A. He admitted that he was at fault

B. He forbade that he was at fault

C. He asked that he is at fault

D. He admitted that he were at fault

Answer Key - A

47 . Choose the one that best expresses the meaning of the idiom/phrase for the given sentence.

It was on 'the tip of my tongue' when you also proposed that we should go to the auditorium.

A. Slip of tongue

B. To be annoyed

C. About to say

D. None of these

Answer Key - C

48 . Choose the meaning of the given idiomatic expression from the options given in quotes.

He 'did me a good turn' by recommending me for the post of Vice-Principal.

A. Returned my kindness

B. Did an act of kindness

C. Improved my prospects

D. Became suddenly good

Answer Key - B

49 . In the following question, a part of the sentence is given in quotes. Out of the four options which follow, choose the correct option which may improve the sentence. In case no improvement is required, choose "No Improvement" option and mark accordingly.

'What happens to' all those travellers on the ship was not known.

A. What happen to

B. That is what happens to

C. What happened to

D. No improvement

Answer Key - C

50 . In the following question, a part of the sentence is given in quotes. Out of the four options which follow, choose the correct option which may improve the sentence. In case no improvement is required, choose "No Improvement" option and mark accordingly.

'Despite of their' differences on matters of principles, they all agree on the demand of hike in salary.

A. Despite of there

B. Despite for their

C. Despite their

D. No improvement

Answer Key - C

Exam Code : SSC_MAT_26032017

Exam Date : 26-Mar-2017

Duration : 60

Exam Time : 2:00 pm

51 . If $(12)^3$ is subtracted from the square of a number, the answer so obtained is 976. What is the number?

A. 52

B. 54

C. 56

D. 58

Answer Key - A

52 . A number when added to its two-third is equal to 35. The number is-

A. 19

B. 20

C. 21

D. 22

Answer Key - C

53 . $\left(\frac{\sqrt{625}}{11} \times \frac{14}{\sqrt{25}} \times \frac{11}{\sqrt{196}} \right) =$

| | | | |
|----|---|----|----|
| A. | 5 | B. | 6 |
| C. | 8 | D. | 11 |

Answer Key - A

Exam Code : SSC_MAT_26032017

Exam Date : 26-Mar-2017

Duration : 60

Exam Time : 2:00 pm

54 . $\frac{1}{0.04}$ is equal to-

| | | | |
|----|----------------|----|---------------|
| A. | $\frac{1}{40}$ | B. | $\frac{2}{5}$ |
| C. | 2.5 | D. | 25 |

Answer Key - D

55 . 4.036 divided by 0.04 gives-

A. 1.009

B. 10.09

C. 100.9

D. None of these

Answer Key - C

56 . Find $5 + 10 + 15 + 20 + \dots + 100 = ?$

A. 820

B. 850

C. 1050

D. 2100

Answer Key - C

Exam Code : SSC_MAT_26032017

Exam Date : 26-Mar-2017

Duration : 60

Exam Time : 2:00 pm

57 . A number added to two-seventh of its value is equal to 72. Find the number.

A. 56

B. 66

C. 76

D. 86

Answer Key - A

58 . In an examination 38% of students fail in English and 61% pass in Hindi and 23% fail in both. Find the actual failure percentage.

A. 50%

B. 54%

C. 61%

D. 65%

Answer Key - B

59 . What must be subtracted from each term of the ratio 3 : 7 so that the ratio becomes 1 : 3?

A. 1

B. 2

C. 3

D. 4

Answer Key - A

60 . Out of 12 results, the average of 11 results is 32. If the average of first 6 results is 34 and the average of last 6 results is 33, find out the 12th result.

A. 50

B. 65

C. 60

D. 55

Answer Key - A

61 . The average of first seven multiples of 3 is-

A. 6

B. 9

C. 12

D. 15

Answer Key - C

62 . At what rate percent will an amount double itself in 20 years at Simple Interest?

A. 4%

B. 5%

C. 6%

D. 8%

Answer Key - B

63 . The Compound Interest on Rs. 15000 at 8% per annum for 1 year compounded half yearly is-

A. Rs. 1200

B. Rs. 1224

C. Rs. 1432

D. Rs. 1500

Answer Key - B

Exam Code : SSC_MAT_26032017

Exam Date : 26-Mar-2017

Duration : 60

Exam Time : 2:00 pm

64 . The cost of 15 pens was recovered by the sale of 12 pens only. Find the gain percent.

A. 16.50%

B. 20%

C. 25%

D. 40%

Answer Key - C

65 . If an article is sold for Rs. 178 at a loss of 11%, then what should be its selling price in order to earn a profit of 11%?

A. Rs. 220

B. Rs. 220.50

C. Rs.222

D. Rs. 267

Answer Key - C

66 . The true discount on a bill for ₹ 1260 due 6 months hence at 10% per annum is-

A. Rs. 60

B. Rs. 80

C. Rs. 160

D. Rs. 260

Answer Key - A

67 . The area of right angled triangle with base 6 m and hypotenuse 6.5 m is:

A. 6.5 m²B. 7.5 m²C. 8.5 m²D. 9.5 m²**Answer Key - B**

68 . If the bisector of an angle of triangle bisects the opposite side, then the triangle is:

A. Scalene

B. Isosceles

C. Right triangle

D. Equilateral

Answer Key - D

69 . A train crosses a man in 10 seconds, but a bridge 200 m long in 18 seconds. The speed of the train is-

A. 60 km/hr

B. 75 km/hr

C. 90 km/hr

D. 105 km/hr

Answer Key - C

70 . A 135 m long train is running with a speed of 54 km per hour. In what time will it pass a telegraph post?

A. 7 seconds

B. 9 seconds

C. 11 seconds

D. 12 seconds

Answer Key - B

Exam Code : SSC_MAT_26032017

Exam Date : 26-Mar-2017

Duration : 60

Exam Time : 2:00 pm

71 . If 3 workers collect 48 kg of cotton in 4 days, how many kg of cotton will 9 workers collect in 2 days?

A. 32

B. 72

C. 108

D. 216

Answer Key - B

72 . A cistern is normally filled in 8 hours but takes two hours longer to fill because of a leak in its bottom. If the cistern is full, then the leak will empty it in-

A. 16 hours

B. 20 hours

C. 25 hours

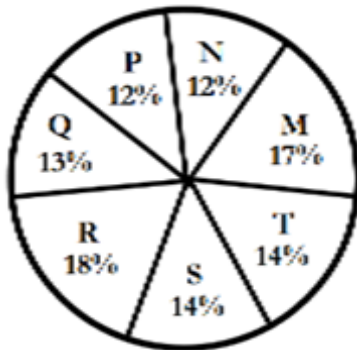
D. 40 hours

Answer Key - D

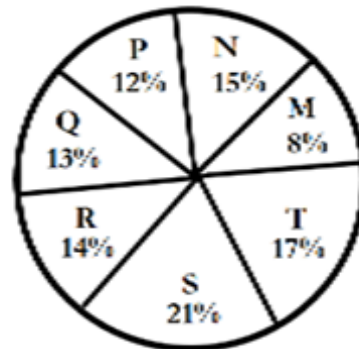
73 . Study the chart and answer the given questions carefully.

DISTRIBUTION OF STUDENTS AT GRADUATE AND POST-GRADUATE LEVELS IN SEVEN INSTITUTES - M, N, P, Q, R, S AND T

Total Number of Students of Graduate Level = 27300



Total Number of Students of Post-Graduate Level = 24700



How many students of institutes M and S are studying at graduate level?

| | | | |
|----|------|----|------|
| A. | 7516 | B. | 8463 |
| C. | 9127 | D. | 9404 |

Answer Key - B

Exam Code : SSC_MAT_26032017

Exam Date : 26-Mar-2017

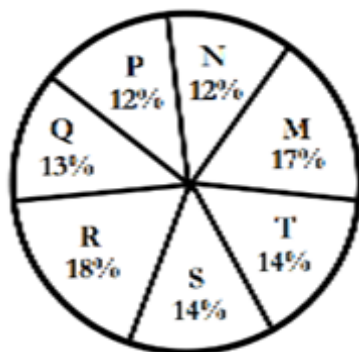
Duration : 60

Exam Time : 2:00 pm

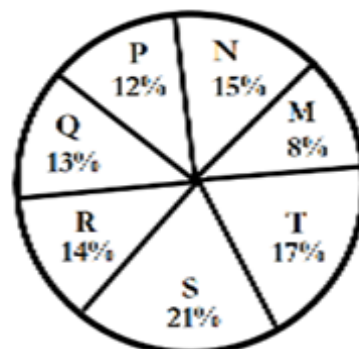
74 . Study the chart and answer the given questions carefully.

DISTRIBUTION OF STUDENTS AT GRADUATE AND POST-GRADUATE LEVELS IN SEVEN INSTITUTES - M, N, P, Q, R, S AND T

Total Number of Students of Graduate Level = 27300



Total Number of Students of Post-Graduate Level = 24700



Total number of students studying at post-graduate level from institutes N and P is-

| | | | |
|----|------|----|------|
| A. | 5601 | B. | 5944 |
| C. | 6669 | D. | 7004 |

Answer Key - C

Exam Code : SSC_MAT_26032017

Exam Date : 26-Mar-2017

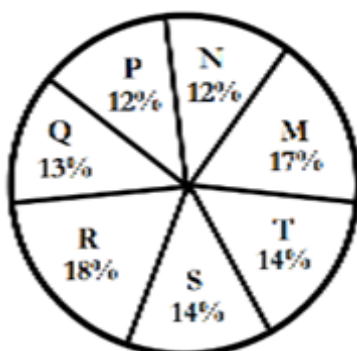
Duration : 60

Exam Time : 2:00 pm

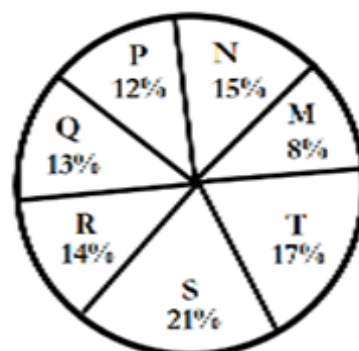
75 . Study the chart and answer the given questions carefully.

DISTRIBUTION OF STUDENTS AT GRADUATE AND POST-GRADUATE LEVELS IN SEVEN INSTITUTES - M, N, P, Q, R, S AND T

Total Number of Students of Graduate Level = 27300



Total Number of Students of Post-Graduate Level = 24700



What is the total number of graduate and post - graduate level students in institute R?

| | | | |
|----|------|----|------|
| A. | 8320 | B. | 7916 |
| C. | 9116 | D. | 8372 |

Answer Key - D

76 . What is the capital of Myanmar ?

A. Naypyidaw

B. Yangon

C. Mandalay

D. Meiktila

Answer Key - A

77 . The currency of Thailand is :

A. Peso

B. Baht

C. Dollar

D. Pound

Answer Key - B

Exam Code : SSC_MAT_26032017

Exam Date : 26-Mar-2017

Duration : 60

Exam Time : 2:00 pm

78 . Which country has won the Football World Cup the maximum number of times?

- A. Italy
B. Uruguay
C. West Germany
D. Brazil

Answer Key - D

79 . Which Indian cricketer has been conferred Arjuna Award in the year 2016?

- A. Yuvraj Singh
B. Mahendra Singh Dhoni
C. Ajinkya Rahane
D. Rohit Sharma

Answer Key - C

80 . The term 'Butterfly stroke' is related with which sport?

- A. Swimming
B. Boxing
C. Wrestling
D. Kabaddi

Answer Key - A

81 . English education in India was introduced by:

- A. Lord Dalhousie
B. Lord Curzon
C. Lord Macaulay
D. Lord Ripon

Answer Key - C

82 . The founder of the city of Hyderabad was-

- A. Ibrahim Qutb Shah
B. Muhammad Quli Qutb Shah
C. Abdullah Qutb Shah
D. Jamshid Qutb Shah

Answer Key - B

83 . 'Dandia' is a popular dance of-

- A. Gujarat
B. Punjab
C. Maharashtra
D. Tamil Nadu

Answer Key - A

84 . Bharat Kala Bhavan Museum is situated in-

- A. Agra
B. Lucknow
C. Allahabad
D. Varanasi

Answer Key - D

Exam Code : SSC_MAT_26032017

Exam Date : 26-Mar-2017

Duration : 60

Exam Time : 2:00 pm

85 . Which of the following words best describes the shape of our galaxy?

A. Spherical

B. Elliptical

C. Spiral

D. Barred-spiral

Answer Key - C

86 . The _____ is the largest mangrove forest in India .

A. Pichavaram

B. Pitara

C. Sundarbans

D. Bhitarkanika

Answer Key - C

87 . What is the expansion of 'B2B'?

A. Border to Border

B. Business to Business

C. Business to Border

D. Border to Business

Answer Key - B

88 . Who was the first woman to become a Chief Election Commissioner of India?

A. V.S. Ramadevi

B. Sarojini Naidu

C. S.K. Bedi

D. Fathima Beevi

Answer Key - A

89 . Who is the present Chief Minister of West Bengal?

A. Mamata Banerjee

B. Harish Rawat

C. Chandrasekhara Rao

D. Pawan Chamling

Answer Key - A

90 . If a Panchayat is dissolved, elections are to be held within-

A. 1 month

B. 3 months

C. 6 months

D. 1 year

Answer Key - C

91 . Who invented the electric generator?

A. Sir Alexander Graham Bell

B. Michael Faraday

C. Alfred B. Nobel

D. Thomas Alva Edison

Answer Key - B

Exam Code : SSC_MAT_26032017

Exam Date : 26-Mar-2017

Duration : 60

Exam Time : 2:00 pm

92 . Who is the first Asian to win the Nobel Prize?

A. C. V. Raman

B. Rajiv Gandhi

C. Rabindranath Tagore

D. Mother Teresa

Answer Key - C**93 .** Which is the largest museum in the world?

A. British Museum, London

B. State Hermitage Museum, St. Petersburg

C. Salar Jung Museum, Hyderabad

D. Louvre, Paris

Answer Key - D**94 .** Who was the first lady to be awarded Jnanpith Award in India?

A. Mahadevi Verma

B. Amrita Pritam

C. Mahasweta Devi

D. Ashapurna Devi

Answer Key - D**95 .** Which is the State flower of Uttarkhand?

A. Brahma kamal

B. Lily

C. Daffodil

D. Sunflower

Answer Key - A**96 .** Swami Vivekananda's birthday is celebrated as -

A. World Religious Day

B. National Youth Day

C. All saints Day

D. Hindu Renaissance Day

Answer Key - B**97 .** Which is the smallest country in the world?

A. Vatican City

B. Monaco

C. San Marino

D. Tuvalu

Answer Key - A**98 .** 'Angel Falls', the world's highest waterfall is situated in-

A. Australia

B. Spain

C. Brazil

D. Venezuela

Answer Key - D

Exam Code : SSC_MAT_26032017

Exam Date : 26-Mar-2017

Duration : 60

Exam Time : 2:00 pm

99 . Many cities in India have undergone place name changes such as Baroda being renamed to _____.

A. Badodara

B. Varanasi

C. Vadodara

D. Banaras

Answer Key - C

100 . Name the Android App launched by the Indian Army on December 6, 2016, dedicated to the Army Veterans and Veer Naris.

A. Veer Outreach App

B. Veterans Reachout App

C. Veterans Outreach App

D. Veterans Outroute App

Answer Key - C